

FUND

CG

DYI

SECO

ROBERT D.

FUNDAMENTALS OF GAS DYNAMICS

FUNDAMENTALS OF GAS DYNAMICS

Second Edition

ROBERT D. ZUCKER
OSCAR BIBLARZ

Department of Aeronautics and Astronautics
Naval Postgraduate School
Monterey, California



JOHN WILEY & SONS, INC.

This book is printed on acid-free paper. ∞

Copyright © 2002 by John Wiley & Sons, Inc. All rights reserved.

Published by John Wiley & Sons, Inc., Hoboken, New Jersey
Published simultaneously in Canada.

No part of this publication may be reproduced, stored in a retrieval system, or transmitted in any form or by any means, electronic, mechanical, photocopying, recording, scanning, or otherwise, except as permitted under Sections 107 or 108 of the 1976 United States Copyright Act, without either the prior written permission of the Publisher, or authorization through payment of the appropriate per-copy fee to the Copyright Clearance Center, Inc., 222 Rosewood Drive, Danvers, MA 01923, (978) 750-8400, fax (978) 750-4470, or on the web at www.copyright.com. Requests to the Publisher for permission should be addressed to the Permissions Department, John Wiley & Sons, Inc., 111 River Street, Hoboken, NJ 07030, (201) 748-6011, fax (201) 748-6008, e-mail: permcoordinator@wiley.com.

Limit of Liability/Disclaimer of Warranty: While the publisher and author have used their best efforts in preparing this book, they make no representations or warranties with respect to the accuracy or completeness of the contents of this book and specifically disclaim any implied warranties of merchantability or fitness for a particular purpose. No warranty may be created or extended by sales representatives or written sales materials. The advice and strategies contained herein may not be suitable for your situation. You should consult with a professional where appropriate. Neither the publisher nor author shall be liable for any loss of profit or any other commercial damages, including but not limited to special, incidental, consequential, or other damages.

For general information on our other products and services or for technical support, please contact our Customer Care Department within the United States at (800) 762-2974, outside the United States at (317) 572-3993 or fax (317) 572-4002.

Wiley also publishes its books in a variety of electronic formats. Some content that appears in print may not be available in electronic books.

Library of Congress Cataloging-in-Publication Data

Zucker, Robert D.

Fundamentals of gas dynamics.—2nd ed. / Robert D. Zucker and Oscar Biblarz.
p. cm.

Includes index.

ISBN 0-471-05967-6 (cloth : alk. paper)

1. Gas dynamics. I. Biblarz, Oscar. II. Title.

QC168 .Z79 2002

533'.2—dc21

2002028816

Printed in the United States of America.

10 9 8 7 6 5 4 3 2 1

Contents

PREFACE	xi
TO THE STUDENT	xiii
1 REVIEW OF ELEMENTARY PRINCIPLES	1
1.1 Introduction	1
1.2 Units and Notation	1
1.3 Some Mathematical Concepts	7
1.4 Thermodynamic Concepts for Control Mass Analysis	10
Review Questions	18
Review Problems	20
2 CONTROL VOLUME ANALYSIS—PART I	23
2.1 Introduction	23
2.2 Objectives	23
2.3 Flow Dimensionality and Average Velocity	24
2.4 Transformation of a Material Derivative to a Control Volume Approach	27
2.5 Conservation of Mass	32
2.6 Conservation of Energy	35
2.7 Summary	44
Problems	46
Check Test	48
3 CONTROL VOLUME ANALYSIS—PART II	51
3.1 Introduction	51

3.2	Objectives	51
3.3	Comments on Entropy	52
3.4	Pressure–Energy Equation	54
3.5	The Stagnation Concept	55
3.6	Stagnation Pressure–Energy Equation	59
3.7	Consequences of Constant Density	61
3.8	Momentum Equation	66
3.9	Summary	75
	Problems	77
	Check Test	81
4	INTRODUCTION TO COMPRESSIBLE FLOW	83
4.1	Introduction	83
4.2	Objectives	83
4.3	Sonic Velocity and Mach Number	84
4.4	Wave Propagation	89
4.5	Equations for Perfect Gases in Terms of Mach Number	92
4.6	h – s and T – s Diagrams	97
4.7	Summary	99
	Problems	100
	Check Test	102
5	VARYING-AREA ADIABATIC FLOW	105
5.1	Introduction	105
5.2	Objectives	105
5.3	General Fluid—No Losses	106
5.4	Perfect Gases with Losses	111
5.5	The * Reference Concept	115
5.6	Isentropic Table	118
5.7	Nozzle Operation	124
5.8	Nozzle Performance	131
5.9	Diffuser Performance	133
5.10	When γ Is Not Equal to 1.4	135
5.11	(Optional) Beyond the Tables	135
5.12	Summary	138
	Problems	139
	Check Test	144

6	STANDING NORMAL SHOCKS	147
6.1	Introduction	147
6.2	Objectives	147
6.3	Shock Analysis—General Fluid	148
6.4	Working Equations for Perfect Gases	151
6.5	Normal-Shock Table	154
6.6	Shocks in Nozzles	159
6.7	Supersonic Wind Tunnel Operation	164
6.8	When γ Is Not Equal to 1.4	166
6.9	(Optional) Beyond the Tables	168
6.10	Summary	169
	Problems	170
	Check Test	174
7	MOVING AND OBLIQUE SHOCKS	175
7.1	Introduction	175
7.2	Objectives	175
7.3	Normal Velocity Superposition: Moving Normal Shocks	176
7.4	Tangential Velocity Superposition: Oblique Shocks	179
7.5	Oblique-Shock Analysis: Perfect Gas	185
7.6	Oblique-Shock Table and Charts	187
7.7	Boundary Condition of Flow Direction	189
7.8	Boundary Condition of Pressure Equilibrium	193
7.9	Conical Shocks	195
7.10	(Optional) Beyond the Tables	198
7.11	Summary	200
	Problems	201
	Check Test	205
8	PRANDTL–MEYER FLOW	207
8.1	Introduction	207
8.2	Objectives	207
8.3	Argument for Isentropic Turning Flow	208
8.4	Analysis of Prandtl–Meyer Flow	214
8.5	Prandtl–Meyer Function	218
8.6	Overexpanded and Underexpanded Nozzles	221
8.7	Supersonic Airfoils	226

8.8	When γ Is Not Equal to 1.4	230
8.9	(Optional) Beyond the Tables	231
8.10	Summary	232
	Problems	233
	Check Test	238
9	FANNO FLOW	241
9.1	Introduction	241
9.2	Objectives	241
9.3	Analysis for a General Fluid	242
9.4	Working Equations for Perfect Gases	248
9.5	Reference State and Fanno Table	253
9.6	Applications	257
9.7	Correlation with Shocks	261
9.8	Friction Choking	264
9.9	When γ Is Not Equal to 1.4	267
9.10	(Optional) Beyond the Tables	268
9.11	Summary	269
	Problems	270
	Check Test	274
10	RAYLEIGH FLOW	277
10.1	Introduction	277
10.2	Objectives	278
10.3	Analysis for a General Fluid	278
10.4	Working Equations for Perfect Gases	288
10.5	Reference State and the Rayleigh Table	293
10.6	Applications	295
10.7	Correlation with Shocks	298
10.8	Thermal Choking due to Heating	302
10.9	When γ Is Not Equal to 1.4	305
10.10	(Optional) Beyond the Tables	306
10.11	Summary	307
	Problems	308
	Check Test	313
11	REAL GAS EFFECTS	315
11.1	Introduction	315
11.2	Objectives	316

11.3	What's Really Going On	317
11.4	Semiperfect Gas Behavior, Development of the Gas Table	319
11.5	Real Gas Behavior, Equations of State and Compressibility Factors	325
11.6	Variable γ —Variable-Area Flows	329
11.7	Variable γ —Constant-Area Flows	336
11.8	Summary	338
	Problems	340
	Check Test	341
12	PROPULSION SYSTEMS	343
12.1	Introduction	343
12.2	Objectives	343
12.3	Brayton Cycle	344
12.4	Propulsion Engines	353
12.5	General Performance Parameters, Thrust, Power, and Efficiency	369
12.6	Air-Breathing Propulsion Systems Performance Parameters	375
12.7	Air-Breathing Propulsion Systems Incorporating Real Gas Effects	380
12.8	Rocket Propulsion Systems Performance Parameters	381
12.9	Supersonic Diffusers	384
12.10	Summary	387
	Problems	388
	Check Test	392
APPENDIXES		
A.	Summary of the English Engineering (EE) System of Units	396
B.	Summary of the International System (SI) of Units	400
C.	Friction-Factor Chart	404
D.	Oblique-Shock Charts ($\gamma = 1.4$) (Two-Dimensional)	406
E.	Conical-Shock Charts ($\gamma = 1.4$) (Three-Dimensional)	410
F.	Generalized Compressibility Factor Chart	414
G.	Isentropic Flow Parameters ($\gamma = 1.4$) (including Prandtl–Meyer Function)	416
H.	Normal-Shock Parameters ($\gamma = 1.4$)	428
I.	Fanno Flow Parameters ($\gamma = 1.4$)	438

x CONTENTS

J. Rayleigh Flow Parameters ($\gamma = 1.4$)	450
K. Properties of Air at Low Pressures	462
L. Specific Heats of Air at Low Pressures	470
SELECTED REFERENCES	473
ANSWERS TO PROBLEMS	477
INDEX	487

Preface

This book is written for the average student who wants to learn the fundamentals of gas dynamics. It aims at the undergraduate level and thus requires a minimum of prerequisites. The writing style is informal and incorporates ideas in educational technology such as behavioral objectives, meaningful summaries, and check tests. Such features make this book well suited for self-study as well as for conventional course presentation. Sufficient material is included for a typical one-quarter or one-semester course, depending on the student's background.

Our approach in this book is to develop all basic relations on a rigorous basis with equations that are valid for the most general case of the unsteady, three-dimensional flow of an arbitrary fluid. These relations are then simplified to represent meaningful engineering problems for one- and two-dimensional steady flows. All basic internal and external flows are covered with practical applications which are interwoven throughout the text. Attention is focused on the assumptions made at every step of the analysis; emphasis is placed on the usefulness of the $T-s$ diagram and the significance of any relevant loss terms.

Examples and problems are provided in both the English Engineering and SI systems of units. Homework problems range from the routine to the complex, with all charts and tables necessary for their solution included in the Appendixes.

The goals for the user should be not only to master the fundamental concepts but also to develop good problem-solving skills. After completing this book the student should be capable of pursuing the many references that are available on more advanced topics.

Professor Oscar Biblarz joins Robert D. Zucker as coauthor in this edition. We have both taught gas dynamics from this book for many years. We both shared in the preparation of the new manuscript and in the proofreading. This edition has been expanded to include (1) material on conical shocks, (2) several sections showing how computer calculations can be helpful, and (3) an entire chapter on real gases, including simple methods to handle these problems. These topics have made the book more complete while retaining its original purpose and style.

We would like to gratefully acknowledge the help of Professors Raymond P. Shreeve and Garth V. Hobson of the Turbopropulsion Laboratory at the Naval Postgraduate School, particularly in the propulsion area. We also want to mention that our many students throughout the years have provided the inspiration and motivation for preparing this material. In particular, for the first edition, we want to acknowledge Ernest Lewis, Allen Roessig, and Joseph Strada for their contributions beyond the classroom. We would also like to thank the Lockheed-Martin Aeronautics Company, General Electric Aircraft Engines, Pratt & Whitney Aircraft, the Boeing Company, and the National Physical Laboratory in the United Kingdom for providing photographs that illustrate various parts of the book. John Wiley & Sons should be recognized for understanding that the deliberate informal style of this book makes it a more effective teaching tool.

Professor Zucker owes a great deal to Newman Hall and Ascher Shapiro, whose books provided his first introduction to the area of compressible flow. Also, he would like to thank his wife, Polly, for sharing this endeavor with him for a second time.

ROBERT D. ZUCKER
Pebble Beach, CA

OSCAR BIBLARZ
Monterey, CA

To the Student

You don't need much background to enter the fascinating world of gas dynamics. However, it will be assumed that you have been exposed to college-level courses in calculus and thermodynamics. Specifically, you are expected to know:

1. Simple differentiation and integration
2. The meaning of a partial derivative
3. The significance of a dot product
4. How to draw free-body diagrams
5. How to resolve a force into its components
6. Newton's Second Law of motion
7. About properties of fluids, particularly perfect gases
8. The Zeroth, First, and Second Laws of Thermodynamics

The first six prerequisites are very specific; the last two cover quite a bit of territory. In fact, a background in thermodynamics is so important to the study of gas dynamics that a review of the necessary concepts for control mass analysis is contained in Chapter 1. If you have recently completed a course in thermodynamics, you may skip most of this chapter, but you should *read the questions* at the end of the chapter. If you can answer these, press on! If any difficulties arise, refer back to the material in the chapter. Many of these equations will be used throughout the rest of the book. You may even want to get more confidence by working some of the review problems in Chapter 1.

In Chapters 2 and 3 we convert the fundamental laws into a form needed for control volume analysis. If you have had a good course in fluid mechanics, much of this material should be familiar to you. A section on constant-density fluids is included to show the general applicability in that area and to tie in with any previous work that you have done in this area. If you haven't studied fluid mechanics, don't worry. All the material that you need to know in this area is included. Because several special

concepts are developed that are not treated in many thermodynamics and fluid mechanics courses, *read these chapters even if you have the relevant background*. They form the backbone of gas dynamics and are referred to frequently in later chapters.

In Chapter 4 you are introduced to the characteristics of compressible fluids. Then in the following chapters, various basic flow phenomena are analyzed one by one: varying area, normal and oblique shocks, supersonic expansions and compressions, duct friction, and heat transfer. A wide variety of practical engineering problems can be solved with these concepts, and many of these problems are covered throughout the text. Examples of these are the off-design operation of supersonic nozzles, supersonic wind tunnels, blast waves, supersonic airfoils, some methods of flow measurement, and choking from friction or thermal effects. You will find that supersonic flow brings about special problems in that it does not seem to follow your intuition. In Chapter 11 you will be exposed to what goes on at the molecular level. You will see how this affects real gases and learn some simple techniques to handle these situations.

Aircraft propulsion systems (with their air inlets, afterburners, and exit nozzles) represent an interesting application of nearly all the basic gas dynamic flow situations. Thus, in Chapter 12 we describe and analyze common airbreathing propulsion systems, including turbojets, turbofans, and turboprops. Other propulsion systems, such as rockets, ramjets, and pulsejets, are also covered.

A number of chapters contain material that shows how to use computers in certain calculations. The aim is to indicate how software might be applied as a means of getting answers by using the same equations that could be worked on by other methods. The computer utility MAPLE is our choice, but if you have not studied MAPLE, don't worry. All the gas dynamics is presented in the sections preceding such applications so that the computer sections may be completely omitted.

This book has been written especially for you, the student. We hope that its informal style will put you at ease and motivate you to read on. Student comments on the first edition indicate that this objective has been accomplished. Once you have passed the review chapter, the remaining chapters follow a similar format. The following suggestions may help you optimize your study time. When you start each chapter, read the introduction, as this will give you the general idea of what the chapter is all about. The next section contains a set of learning objectives. These tell exactly what you should be able to do after completing the chapter successfully. Some objectives are marked *optional*, as they are only for the most serious students. Merely scan the objectives, as they won't mean much at first. However, *they will indicate important things to look for*. As you read the material you may occasionally be asked to do something—complete a derivation, fill in a chart, draw a diagram, etc. Make an honest attempt to follow these instructions before proceeding further. You will not be asked to do something that you haven't the background to do, and your active participation will help solidify important concepts and provide feedback on your progress.

As you complete each section, look back to see if any of these objectives have been covered. If so, make sure that you can do them. Write out the answers; these will help you in later studies. You may wish to make your own summary of important points in each chapter, then see how well it agrees with the summary provided. After having

worked a representative group of problems, you are ready to check your knowledge by taking the test at the end of the chapter. This should always be treated as a closed-book affair, with the exception of tables and charts in the Appendixes. If you have any difficulties with this test, you should go back and restudy the appropriate sections. Do not proceed to the next chapter without completing the previous one satisfactorily.

Not all chapters are the same length, and in fact most of them are a little long to tackle all at once. You might find it easier to break them into “bite-sized” pieces according to the Correlation Table on the following page. Work some problems on the first group of objectives and sections *before* proceeding to the next group. Crisis management is *not* recommended. You should spend time *each* day working through the material. Learning can be fun—and it should be! However, knowledge doesn’t come free. You must expend time and effort to accomplish the job. We hope that this book will make the task of exploring gas dynamics more enjoyable. Any suggestions that you might have to improve this material will be most welcome.

Correlation Table for Sections, Objectives, and Problems

Chapter	Sections	Optional Section	Objectives	Optional Objectives	Problems	Optional Problem
1	1-3 4 4				Q: 1-9 Q: 10-34 P: 1-5	
2	1-5 6		1-5 6-9		1-6 7-15	
3	1-7 8		1-9 10-12		1-14 15-22	
4	1-6		1-10		1-17	
5	1-6 7-10	11	1-7 8-12		1-8 9-24	
6	1-5 6-8	9	1-7 8-10		1-6 7-19	
7	1-3 4-8 9	10	1-2 3-9 10-11	5	1-5 6-17 18-19	
8	1-5 6-8	9	1-6 7-9	5	1-6 7-18	
9	1-6 7-9	10	1-7 8-11	2, 5 10	1-12 13-23	23
10	1-6 7-9	10	1-7 8-11	2, 6 10	1-8 9-22	22
11	1-5 6-7		1-7 8	9	1-10 11-15	
12	1-3 4-7 8-9		1-4 5-11 12-15	8, 9, 11 14	1-5 6-15 16-24	

Chapter 1

Review of Elementary Principles

1.1 INTRODUCTION

It is assumed that before entering the world of gas dynamics you have had a reasonable background in mathematics (through calculus) together with a course in elementary thermodynamics. An exposure to basic fluid mechanics would be helpful but is not absolutely essential. The concepts used in fluid mechanics are relatively straightforward and can be developed as we need them. On the other hand, some of the concepts of thermodynamics are more abstract and we must assume that you already understand the fundamental laws of thermodynamics as they apply to stationary systems. The extension of these laws to flow systems is so vital that we cover these systems in depth in Chapters 2 and 3.

This chapter is not intended to be a formal review of the courses noted above; rather, it should be viewed as a collection of the basic concepts and facts that will be used later. It should be understood that a great deal of background is omitted in this review and no attempt is made to prove each statement. Thus, if you have been away from this material for any length of time, you may find it necessary occasionally to refer to your notes or other textbooks to supplement this review. At the very least, the remainder of this chapter may be considered an assumed common ground of knowledge from which we shall venture forth.

At the end of this chapter a number of questions are presented for you to answer. No attempt should be made to continue further until you feel that you can answer all of these questions satisfactorily.

1.2 UNITS AND NOTATION

Dimension: a qualitative definition of a physical entity
(such as time, length, force)

Unit: an exact magnitude of a dimension
(such as seconds, feet, newtons)

In the United States most work in the area of thermo-gas dynamics (particularly in propulsion) is currently done in the English Engineering (EE) system of units. However, most of the world is operating in the metric or International System (SI) of units. Thus, we shall review both systems, beginning with Table 1.1.

Force and Mass

In either system of units, force and mass are related through *Newton’s second law of motion*, which states that

$$\sum \mathbf{F} \propto \frac{d(\overrightarrow{\text{momentum}})}{dt} \tag{1.1}$$

The proportionality factor is expressed as $K = 1/g_c$, and thus

$$\sum \mathbf{F} = \frac{1}{g_c} \frac{d(\overrightarrow{\text{momentum}})}{dt} \tag{1.2}$$

For a mass that does not change with time, this becomes

$$\sum \mathbf{F} = \frac{m\mathbf{a}}{g_c} \tag{1.3}$$

where $\sum \mathbf{F}$ is the vector force summation acting on the mass m and \mathbf{a} is the vector acceleration of the mass.

In the English Engineering system, we use the following definition:

A 1-pound force will give a 1-pound mass an acceleration of 32.174 ft/sec².

Table 1.1 Systems of Units^a

Dimension	Basic Unit Used	
	English Engineering	International System
Time	second (sec)	second (s)
Length	foot (ft)	meter (m)
Force	pound force (lbf)	newton (N)
Mass	pound mass (lbm)	kilogram (kg)
Temperature	Fahrenheit (°F)	Celsius (°C)
Absolute Temperature	Rankine (°R)	kelvin (K)

^a *Caution:* Never say *pound*, as this is ambiguous. It is either a *pound force* or a *pound mass*. Only for mass at the Earth’s surface is it unambiguous, because here a pound mass weighs a pound force.

With this definition, we have

$$1 \text{ lbf} = \frac{1 \text{ lbm} \cdot 32.174 \text{ ft/sec}^2}{g_c}$$

and thus

$$g_c = 32.174 \frac{\text{lbm-ft}}{\text{lbf-sec}^2} \quad (1.4a)$$

Note that g_c is *not* the standard gravity (check the units). It is a proportionality factor whose value depends on the units being used. In further discussions we shall take the numerical value of g_c to be 32.2 when using the English Engineering system.

In other engineering fields of endeavor, such as statics and dynamics, the British Gravitational system (also known as the U.S. customary system) is used. This is very similar to the English Engineering system except that the unit of mass is the slug.

In this system of units we follow the definition:

A 1-pound force will give a 1-slug mass an acceleration of 1 ft/sec².

Using this definition, we have

$$1 \text{ lbf} = \frac{1 \text{ slug} \cdot 1 \text{ ft/sec}^2}{g_c} \quad (1.4b)$$

and thus

$$g_c = 1 \frac{\text{slug-ft}}{\text{lbf-sec}^2}$$

Since g_c has the numerical value of unity, most authors drop this factor from the equations in the British Gravitational system. Consistent with the thermodynamics approach, we shall not use this system here. Comparison of the Engineering and Gravitational systems shows that 1 slug \equiv 32.174 lbm.

In the SI system we use the following definition:

A 1-N force will give a 1-kg mass an acceleration of 1 m/sec².

Now equation (1.3) becomes

$$1 \text{ N} = \frac{1 \text{ kg} \cdot 1 \text{ m/s}^2}{g_c}$$

and thus

$$g_c = 1 \frac{\text{kg} \cdot \text{m}}{\text{N} \cdot \text{s}^2} \quad (1.4c)$$

Since g_c has the numerical value of unity (and uses the dynamical unit of mass, i.e., the kilogram) most authors omit this factor from equations in the SI system. However, we shall leave the symbol g_c in the equations so that you may use any system of units with less likelihood of making errors.

Density and Specific Volume

Density is the mass per unit volume and is given the symbol ρ . It has units of lbf/ft³, kg/m³, or slug/ft³.

Specific volume is the volume per unit mass and is given the symbol v . It has units of ft³/lbfm, m³/kg, or ft³/slug. Thus

$$\rho = \frac{1}{v} \quad (1.5)$$

Specific weight is the weight (due to the gravity force) per unit volume and is given the symbol γ . If we take a unit volume under the influence of gravity, its weight will be γ . Thus, from equation (1.3) we have

$$\gamma = \rho \frac{g}{g_c} \quad \text{lbf/ft}^3 \text{ or } \text{N/m}^3 \quad (1.6)$$

Note that mass, density, and specific volume *do not* depend on the value of the local gravity. Weight and specific weight *do* depend on gravity. We shall not refer to specific weight in this book; it is mentioned here only to distinguish it from density. Thus the symbol γ may be used for another purpose [see equation (1.49)].

Pressure

Pressure is the normal force per unit area and is given the symbol p . It has units of lbf/ft² or N/m². Several other units exist, such as the pound per square inch (psi; lbf/in²), the megapascal (MPa; 1×10^6 N/m²), the bar (1×10^5 N/m²), and the atmosphere (14.69 psi or 0.1013 MPa).

Absolute pressure is measured with respect to a perfect vacuum.

Gage pressure is measured with respect to the surrounding (ambient) pressure:

$$p_{\text{abs}} = p_{\text{amb}} + p_{\text{gage}} \quad (1.7)$$

When the gage pressure is negative (i.e., the absolute pressure is below ambient) it is usually called a (positive) vacuum reading:

$$p_{\text{abs}} = p_{\text{amb}} - p_{\text{vac}} \quad (1.8)$$

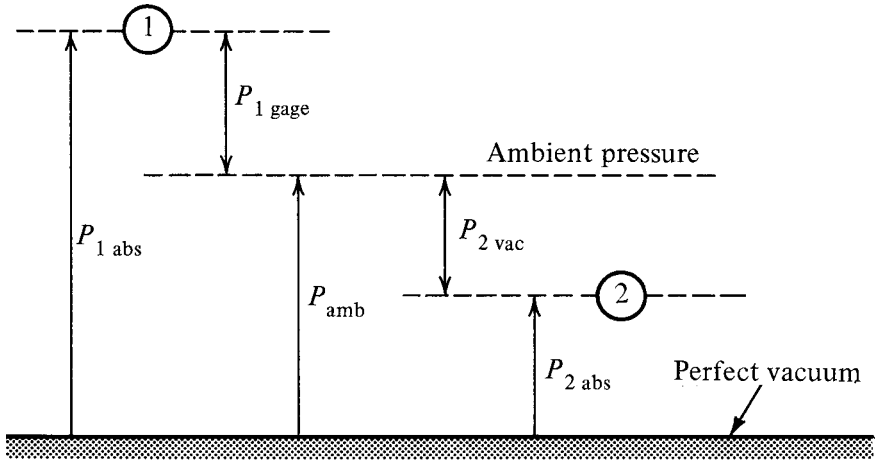


Figure 1.1 Absolute and gage pressures.

Two pressure readings are shown in Figure 1.1. Case 1 shows the use of equation (1.7) and case 2 illustrates equation (1.8). It should be noted that the surrounding (ambient) pressure does not necessarily have to correspond to standard atmospheric pressure. However, when *no* other information is available, one has to assume that the surroundings are at 14.69 psi or 0.1013 MPa. Most often, equations require the use of absolute pressure, and we shall use a numerical value of 14.7 when using the English Engineering system and 0.1 MPa (1 bar) when using the SI system.

Temperature

Degrees Fahrenheit (or Celsius) can safely be used only when *differences* in temperature are involved. However, most equations require the use of absolute temperature in Rankine (or kelvins).

$$^{\circ}\text{R} = ^{\circ}\text{F} + 459.67 \quad (1.9a)$$

$$\text{K} = ^{\circ}\text{C} + 273.15 \quad (1.9b)$$

The values 460 and 273 will be used in our calculations.

Viscosity

We shall be dealing with *fluids*, which are defined as

Any substance that will continuously deform when subjected to a shear stress.

Thus the amount of deformation is of no significance (as it is with a solid), but rather, the *rate of deformation* is characteristic of each individual fluid and is indicated by the *viscosity*:

$$\text{viscosity} \equiv \frac{\text{shear stress}}{\text{rate of angular deformation}} \quad (1.10)$$

Viscosity, sometimes called *absolute viscosity*, is given the symbol μ and has the units lbf-sec/ft² or N · s/m².

For most common fluids, because viscosity is a function of the fluid, it varies with the fluid's state. Temperature has by far the greatest effect on viscosity, so most charts and tables display only this variable. Pressure has a slight effect on the viscosity of gases but a negligible effect on liquids.

A number of engineering computations use a combination of (absolute) viscosity and density. This *kinematic viscosity* is defined as

$$\nu \equiv \frac{\mu g_c}{\rho} \quad (1.11)$$

Kinematic viscosity has the units ft²/sec or m²/s. We shall see more regarding viscosity in Chapter 9 when we deal with flow losses caused by duct friction.

Equation of State

In most of this book we consider all liquids as having constant density and all gases as following the perfect gas equation of state. Thus, for liquids we have the relation

$$\rho = \text{constant} \quad (1.12)$$

The perfect gas equation of state is derived from kinetic theory and neglects molecular volume and intermolecular forces. Thus it is accurate under conditions of relatively low density which correspond to relatively low pressures and/or high temperatures. The form of the *perfect gas equation* normally used in gas dynamics is

$$p = \rho RT \quad (1.13)$$

where

p ≡ absolute pressure	lbf/ft ²	or	N/m ²
ρ ≡ density	lbm/ft ³	or	kg/m ³
T ≡ absolute temperature	°R	or	K
R ≡ <i>individual</i> gas constant	ft-lbf/lbm-°R	or	N · m/kg · K

The *individual* gas constant is found in the English Engineering system by dividing 1545 by the molecular mass of the gas chemical constituents. In the SI system, R

is found by dividing 8314 by the molecular mass. More exact numbers are given in Appendixes A and B.

Example 1.1 The (equivalent) molecular mass of air is 28.97.

$$R = \frac{1545}{28.97} = 53.3 \text{ ft-lbf/lbm-}^\circ\text{R} \quad \text{or} \quad R = \frac{8314}{28.97} = 287 \text{ N} \cdot \text{m/kg} \cdot \text{K}$$

Example 1.2 Compute the density of air at 50 psia and 100°F.

$$\rho = \frac{p}{RT} = \frac{(50)(144)}{(53.3)(460 + 100)} = 0.241 \text{ lbm/ft}^3$$

Properties of selected gases are given in Appendixes A and B. In most of this book we use English Engineering units. However, there are many examples and problems in SI units. Some helpful conversion factors are also given in Appendixes A and B. You should become familiar with solving problems in both systems of units.

In Chapter 11 we discuss real gases and show how these may be handled. The simplifications that the perfect gas equation of state brings about are not only extremely useful but also accurate for ordinary gases because in most gas dynamics applications low temperatures exist with low pressures and high temperatures with high pressures. In Chapter 11 we shall see that deviations from ideality become particularly important at high temperatures and low pressures.

1.3 SOME MATHEMATICAL CONCEPTS

Variables

The equation

$$y = f(x) \tag{1.14}$$

indicates that a functional relation exists between the variables x and y . Further, it denotes that

x is the *independent variable*, whose value can be given anywhere within an appropriate range.

y is the *dependent variable*, whose value is fixed once x has been selected.

In most cases it is possible to interchange the dependent and independent variables and write

$$x = f(y) \tag{1.15}$$

Frequently, a variable will depend on more than one other variable. One might write

$$P = f(x, y, z) \tag{1.16}$$

indicating that the value of the dependent variable P is fixed once the values of the independent variables x , y , and z are selected.

Infinitesimal

A quantity that is eventually allowed to approach zero in the limit is called an *infinitesimal*. It should be noted that a quantity, say Δx , can initially be chosen to have a rather large finite value. If at some later stage in the analysis we let Δx approach zero, which is indicated by

$$\Delta x \rightarrow 0$$

Δx is called an infinitesimal.

Derivative

If $y = f(x)$, we define the *derivative* dy/dx as the limit of $\Delta y/\Delta x$ as Δx is allowed to approach zero. This is indicated by

$$\frac{dy}{dx} \equiv \lim_{\Delta x \rightarrow 0} \frac{\Delta y}{\Delta x} \quad (1.17)$$

For a unique derivative to exist, it is immaterial how Δx is allowed to approach zero.

If more than one independent variable is involved, *partial derivatives* must be used. Say that $P = f(x, y, z)$. We can determine the partial derivative $\partial P/\partial x$ by taking the limit of $\Delta P/\Delta x$ as Δx approaches zero, but in so doing we *must* hold the values of all other independent variables constant. This is indicated by

$$\frac{\partial P}{\partial x} \equiv \lim_{\Delta x \rightarrow 0} \left(\frac{\Delta P}{\Delta x} \right)_{y,z} \quad (1.18)$$

where the subscripts y and z denote that these variables remain fixed in the limiting process. We could formulate other partial derivatives as

$$\frac{\partial P}{\partial y} \equiv \lim_{\Delta y \rightarrow 0} \left(\frac{\Delta P}{\Delta y} \right)_{x,z} \quad \text{and so on} \quad (1.19)$$

Differential

For functions of a single variable such as $y = f(x)$, the *differential* of the dependent variable is defined as

$$dy \equiv \frac{dy}{dx} \Delta x \quad (1.20)$$

The differential of an independent variable is defined as its increment; thus

$$dx \equiv \Delta x \quad (1.21)$$

and one can write

$$dy = \frac{dy}{dx} dx \quad (1.22)$$

For functions of more than one variable, such as $P = f(x, y, z)$, the differential of the dependent variable is defined as

$$dP \equiv \left(\frac{\partial P}{\partial x} \right)_{y,z} \Delta x + \left(\frac{\partial P}{\partial y} \right)_{x,z} \Delta y + \left(\frac{\partial P}{\partial z} \right)_{x,y} \Delta z \quad (1.23a)$$

or

$$dP \equiv \left(\frac{\partial P}{\partial x} \right)_{y,z} dx + \left(\frac{\partial P}{\partial y} \right)_{x,z} dy + \left(\frac{\partial P}{\partial z} \right)_{x,y} dz \quad (1.23b)$$

It is important to note that quantities such as ∂P , ∂x , ∂y , and ∂z by themselves are *never* defined and *do not exist*. Under no circumstance can one “separate” a partial derivative. This is an error frequently made by students when integrating partial differential equations.

Maximum and Minimum

If a plot is made of the functional relation $y = f(x)$, *maximum* and/or *minimum* points may be exhibited. At these points $dy/dx = 0$. If the point is a maximum, d^2y/dx^2 will be negative; whereas if it is a minimum point, d^2y/dx^2 will be positive.

Natural Logarithms

From time to time you will be required to manipulate expressions containing *natural logarithms*. For this you need to recall that

$$\ln A = x \quad \text{means} \quad e^x = A \quad (1.24)$$

$$\ln CD = \ln C + \ln D \quad (1.24a)$$

$$\ln E^n = n \ln E \quad (1.24b)$$

Taylor Series

When the functional relation $y = f(x)$ is not known but the values of y together with those of its derivatives are known at a particular point (say, x_1), the value of y may be found at any other point (say, x_2) through the use of a *Taylor series expansion*:

$$\begin{aligned} f(x_2) = f(x_1) + \frac{df}{dx} (x_2 - x_1) + \frac{d^2 f}{dx^2} \frac{(x_2 - x_1)^2}{2!} \\ + \frac{d^3 f}{dx^3} \frac{(x_2 - x_1)^3}{3!} + \dots \end{aligned} \quad (1.25)$$

To use this expansion the function must be continuous and possess continuous derivatives throughout the interval x_1 to x_2 . It should be noted that all derivatives in the expression above must be evaluated about the point of expansion x_1 .

If the increment $\Delta x = x_2 - x_1$ is small, only a few terms need be evaluated to obtain an accurate answer for $f(x_2)$. If Δx is allowed to approach zero, all higher-order terms may be dropped and

$$f(x_2) \approx f(x_1) + \left(\frac{df}{dx} \right)_{x=x_1} dx \quad \text{for } dx \rightarrow 0 \quad (1.26)$$

1.4 THERMODYNAMIC CONCEPTS FOR CONTROL MASS ANALYSIS

We apologize for the length of this section, but a good understanding of thermodynamic principles is essential to a study of gas dynamics.

General Definitions

Microscopic approach: deals with individual molecules, and with their motion and behavior, on a statistical basis. It depends on our understanding of the structure and behavior of matter at the atomic level. Thus this view is being refined continually.

Macroscopic approach: deals directly with the average behavior of molecules through observable and measurable properties (temperature, pressure, etc.). This classical approach involves no assumptions regarding the molecular structure of matter; thus no modifications of the basic laws are necessary. The macroscopic approach is used in this book through the first 10 chapters.

Control mass: a fixed quantity of mass that is being analyzed. It is separated from its surroundings by a boundary. A control mass is also referred to as a *closed system*. Although no matter crosses the boundary, energy may enter or leave the system.

Control volume: a region of space that is being analyzed. The boundary separating it from its surroundings is called the *control surface*. Matter as well as energy may cross the control surface, and thus a control volume is also referred to as an *open system*. Analysis of a control volume is introduced in Chapters 2 and 3.

Properties: characteristics that describe the state of a system; any quantity that has a definite value for each definite state of a system (e.g., pressure, temperature, color, entropy).

Intensive property: depends only on the state of a system and is independent of its mass (e.g., temperature, pressure).

Extensive property: depends on the mass of a system (e.g., internal energy, volume).

Types of properties:

1. *Observable:* readily measured (pressure, temperature, velocity, mass, etc.)

2. *Mathematical*: defined from combinations of other properties (density, specific heats, enthalpy, etc.)
3. *Derived*: arrived at as the result of analysis
 - a. *Internal energy* (from the first law of thermodynamics)
 - b. *Entropy* (from the second law of thermodynamics)

State change: comes about as the result of a change in any property.

Path or process: represents a series of consecutive states that define a unique path from one state to another. Some special processes:

Adiabatic	→	no heat transfer
Isothermal	→	$T = \text{constant}$
Isobaric	→	$p = \text{constant}$
Isentropic	→	$s = \text{constant}$

Cycle: a sequence of processes in which the system is returned to the original state.

Point functions: another way of saying *properties*, since they depend only on the state of the system and are independent of the history or process by which the state was obtained.

Path functions: quantities that are *not* functions of the state of the system but rather depend on the path taken to move from one state to another. *Heat* and *work* are path functions. They can be observed crossing the system's boundaries *during* a process.

Laws of Classical Thermodynamics

0 ²	Relation among properties
0	Thermal equilibrium
1	Conservation of energy
2	Degradation of energy (irreversibilities)

The 0^2 law (sometimes called the 00 law) is seldom listed as a formal law of thermodynamics; however, one should realize that without such a statement our entire thermodynamic structure would collapse. This law states that we may assume the existence of a relation among the properties, that is, an *equation of state*. Such an equation might be extremely complicated or even undefined, but as long as we know that such a relation exists, we can continue our studies. The equation of state can also be given in the form of tabular or graphical information.

For a single component or pure substance only three *independent* properties are required to fix the state of the system. Care must be taken in the selection of these properties; for example, temperature and pressure are not independent if the substance exists in more than one phase (as in a liquid together with its vapor). When dealing with a unit mass, only two independent properties are required to fix the state. Thus

one can express any property in terms of two other known independent properties with a relation such as

$$P = f(x,y)$$

If two systems are separated by a nonadiabatic wall (one that permits heat transfer), the state of each system will change until a new equilibrium state is reached for the combined system. The two systems are then said to be in *thermal equilibrium* with each other and will then have one property in common which we call the *temperature*.

The *zeroth law* states that two systems in thermal equilibrium with a third system are in thermal equilibrium with each other (and thus have the same temperature). Among other things, this allows the use of thermometers and their standardization.

First Law of Thermodynamics

The *first law* deals with conservation of energy, and it can be expressed in many equivalent ways. Heat and work are two extreme types of energy in transit. *Heat* is transferred from one system to another when an effect occurs solely as a result of a temperature difference between the two systems.

Heat is always transferred from the system at the higher temperature to the one at the lower temperature.

Work is transferred from a system if the total external effect can be reduced to the raising of a mass in a gravity field. For a closed system that executes a complete cycle,

$$\sum Q = \sum W \quad (1.27)$$

where

Q = heat transferred *into* the system

W = work transferred *from* the system

Other sign conventions are sometimes used but we shall adopt those above for this book.

For a closed system that executes a process,

$$Q = W + \Delta E \quad (1.28)$$

where E represents the total energy of the system. On a unit mass basis, equation (1.28) is written as

$$q = w + \Delta e \quad (1.29)$$

The total energy may be broken down into (at least) three types:

$$e \equiv u + \frac{V^2}{2g_c} + \frac{g}{g_c}z \quad (1.30)$$

where

$$\begin{aligned}
 u &= \text{the intrinsic internal energy manifested by the} \\
 &\quad \text{motion of the molecules within the system} \\
 \frac{V^2}{2g_c} &= \text{the kinetic energy represented by the movement} \\
 &\quad \text{of the system as a whole} \\
 \frac{g}{g_c}z &= \text{the potential energy caused by the position of the} \\
 &\quad \text{system in a field of gravity}
 \end{aligned}$$

It is sometimes necessary to include other types of energy (such as dissociation energy), but those mentioned above are the only ones that we are concerned with in this book.

For an infinitesimal process, one could write equation (1.29) as

$$\delta q = \delta w + de \quad (1.31)$$

Note that since heat and work are *path functions* (i.e., they are a function of how the system gets from one state point to another), infinitesimal amounts of these quantities are not exact differentials and thus are written as δq and δw . The infinitesimal change in internal energy is an exact differential since the internal energy is a point function or property. For a stationary system, equation (1.31) becomes

$$\delta q = \delta w + du \quad (1.32)$$

The reversible work done by pressure forces during a change of volume for a stationary system is

$$\delta w = p dv \quad (1.33)$$

Combination of the terms u and pv enters into many equations (particularly for open systems) and it is convenient to define the property *enthalpy*:

$$h \equiv u + pv \quad (1.34)$$

Enthalpy is a property since it is defined in terms of other properties. It is frequently used in differential form:

$$dh = du + d(pv) = du + p dv + v dp \quad (1.35)$$

Other examples of defined properties are the specific heats at constant pressure (c_p) and constant volume (c_v):

$$c_p \equiv \left(\frac{\partial h}{\partial T} \right)_p \quad (1.36)$$

$$c_v \equiv \left(\frac{\partial u}{\partial T} \right)_v \quad (1.37)$$

Second Law of Thermodynamics

The *second law* has been expressed in many equivalent forms. Perhaps the most classic is the statement by Kelvin and Planck stating that it is impossible for an engine operating in a *cycle* to produce *net* work output when exchanging heat with only one temperature source. Although by itself this may not appear to be a profound statement, it leads the way to several corollaries and eventually to the establishment of a most important property (entropy).

The *second law* also recognizes the degradation of energy quality by irreversible effects such as internal fluid friction, heat transfer through a finite temperature difference, lack of pressure equilibrium between a system and its surroundings, and so on. All real processes have some degree of irreversibility present. In some cases these effects are very small and we can envision an ideal limiting condition that has none of these effects and thus is reversible. A *reversible process* is one in which *both* the system and its surroundings can be restored to their original states.

By prudent application of the second law it can be shown that the integral of $\delta Q/T$ for a reversible process is independent of the path. Thus this integral must represent the change of a *property*, which is called *entropy*:

$$\Delta S \equiv \int \frac{\delta Q_R}{T} \quad (1.38)$$

where the subscript *R* indicates that it must be applied to a reversible process. An alternative expression on a unit mass basis for a differential process is

$$ds \equiv \frac{\delta q_R}{T} \quad (1.39)$$

Although you have no doubt used entropy for many calculations, plots, and so on, you probably do not have a good feeling for this property. In Chapter 3 we divide entropy changes into two parts, and by using it in this fashion for the remainder of this book we hope that you will gain a better understanding of this elusive “creature.”

Property Relations

Some extremely important relations come from combinations of the first and second laws. Consider the first law for a stationary system that executes an infinitesimal process:

$$\delta q = \delta w + du \quad (1.32)$$

If it is a reversible process,

$$\delta w = p \, dv \quad (1.33) \quad \text{and} \quad \delta q = T \, ds \quad (\text{from 1.39})$$

Substitution of these relations into the first law yields

$$T \, ds = du + p \, dv \quad (1.40)$$

Differentiating the enthalpy, we obtained

$$dh = du + p \, dv + v \, dp \quad (1.35)$$

Combining equations (1.35) and (1.40) produces

$$T \, ds = dh - v \, dp \quad (1.41)$$

Although the assumption of a reversible process was made to derive equations (1.40) and (1.41), the results are equations that *contain only properties and thus are valid relations to use between any end states*, whether reached reversibly or not. These are important equations that are used throughout the book.

$$T \, ds = du + p \, dv \quad (1.40)$$

$$T \, ds = dh - v \, dp \quad (1.41)$$

If you are uncomfortable with the foregoing technique (one of making special assumptions to derive a relation which is then generalized to be always valid since it involves only properties), perhaps the following comments might be helpful. First let's write the first law in an alternative form (as some authors do):

$$\delta q - \delta w = du \quad (1.32a)$$

Since the internal energy is a property, changes in u depend only on the end states of a process. Let's now substitute an irreversible process *between the same end points* as our reversible process. Then du must remain the same for both the reversible and irreversible cases, with the following result:

$$(\delta q - \delta w)_{\text{rev}} = du = (\delta q - \delta w)_{\text{irrev}}$$

For example, the extra work that would be involved in an irreversible compression process must be compensated by *exactly the same amount of heat released* (an equivalent argument applies to an expansion). In this fashion, irreversible effects will appear to be "washed out" in equations (1.40) and (1.41) and we cannot tell from them whether a particular process is reversible or irreversible.

Perfect Gases

Recall that for a unit mass of a single component substance, any one property can be expressed as a function of at most *two* other independent properties. However, for substances that follow the perfect gas equation of state,

$$p = \rho RT \quad (1.13)$$

it can be shown (see p. 173 of Ref. 4) that *the internal energy and the enthalpy are functions of temperature only*. These are extremely important results, as they permit us to make many useful simplifications for such gases.

Consider the specific heat at constant volume:

$$c_v \equiv \left(\frac{\partial u}{\partial T} \right)_v \quad (1.37)$$

If $u = f(T)$ only, it does not matter whether the volume is held constant when computing c_v ; thus the partial derivative becomes an ordinary derivative. Thus

$$c_v = \frac{du}{dT} \quad (1.42)$$

or

$$du = c_v dT \quad (1.43)$$

Similarly, for the specific heat at constant pressure, we can write for a perfect gas:

$$dh = c_p dT \quad (1.44)$$

It is important to realize that equations (1.43) and (1.44) are applicable to *any and all* processes (as long as the gas behaves as a perfect gas). If the specific heats remain reasonably constant (normally good over limited temperature ranges), one can easily integrate equations (1.43) and (1.44):

$$\Delta u = c_v \Delta T \quad (1.45)$$

$$\Delta h = c_p \Delta T \quad (1.46)$$

In gas dynamics one simplifies calculations by introducing an arbitrary base for internal energy. We let $u = 0$ when $T = 0$ absolute. Then from the definition of enthalpy, h also equals zero when $T = 0$. Equations (1.45) and (1.46) can now be rewritten as

$$u = c_v T \quad (1.47)$$

$$h = c_p T \quad (1.48)$$

Typical values of the specific heats for air at normal temperature and pressure are $c_p = 0.240$ and $c_v = 0.171$ Btu/lbm-°R. Learn these numbers (or their SI equivalents)! You will use them often.

Other frequently used relations in connection with perfect gases are

$$\gamma \equiv \frac{c_p}{c_v} \quad (1.49)$$

$$c_p - c_v = \frac{R}{J} \quad (1.50)$$

Notice that the conversion factor

$$J = 778 \text{ ft-lbf/Btu} \quad (1.51)$$

has been introduced in (1.50) since the specific heats are normally given in units of Btu/lbm-°R. This factor will be omitted in future equations and it will be left for you to consider when it is required. It is hoped that by this procedure you will develop careful habits of checking units in all your work. What units are used for specific heat and R in the SI system? (See the table on gas properties in Appendix B.) Would this require a J factor in equation (1.50)?

Entropy Changes

The change in entropy between any two states can be obtained by integrating equation (1.39) along any reversible path or combination of reversible paths connecting the points, with the following results for perfect gases:

$$\Delta s_{1-2} = c_p \ln \frac{v_2}{v_1} + c_v \ln \frac{p_2}{p_1} \quad (1.52)$$

$$\Delta s_{1-2} = c_p \ln \frac{T_2}{T_1} - R \ln \frac{p_2}{p_1} \quad (1.53)$$

$$\Delta s_{1-2} = c_v \ln \frac{T_2}{T_1} + R \ln \frac{v_2}{v_1} \quad (1.54)$$

Remember, absolute values of pressures and temperatures must be used in these equations; volumes may be either total or specific, but both volumes must be of the same type. Watch the units on c_p , c_v , and R .

Process Diagrams

Many processes in the gaseous region can be represented as a *polytropic process*, that is, one that follows the relation

$$pv^n = \text{const} = C_1 \quad (1.55)$$

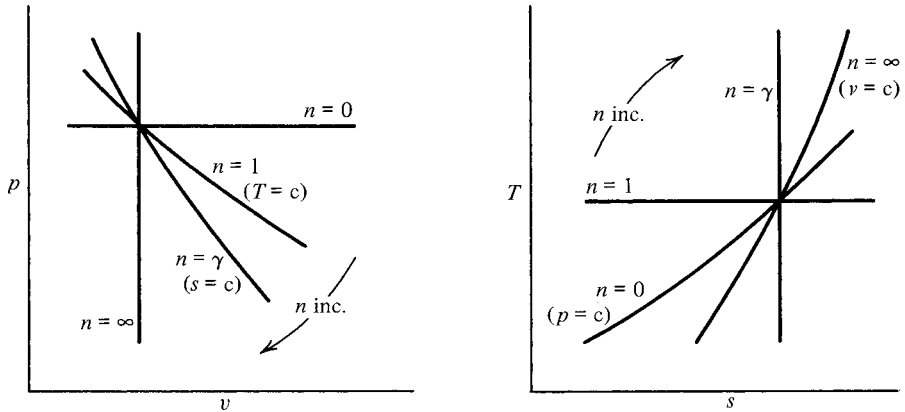


Figure 1.2 General polytropic process plots for perfect gases.

where n is the polytropic exponent, which can be any positive number. If the fluid is a perfect gas, the equation of state can be introduced into (1.55) to yield

$$Tv^{n-1} = \text{const} = C_2 \tag{1.56}$$

$$Tp^{(1-n)/n} = \text{const} = C_3 \tag{1.57}$$

Keep in mind that C_1 , C_2 , and C_3 in the equations above are different constants. It is interesting to note that certain values of n represent particular processes:

$$n = 0 \quad \rightarrow \quad p = \text{const}$$

$$n = 1 \quad \rightarrow \quad T = \text{const}$$

$$n = \gamma \quad \rightarrow \quad s = \text{const}$$

$$n = \infty \quad \rightarrow \quad v = \text{const}$$

These plot in the p - v and T - s diagrams as shown in Figure 1.2, *Learn these diagrams!* You should also be able to figure out how temperature and entropy vary in the p - v diagram and how pressure and volume vary in the T - s diagram (Try drawing several $T = \text{const}$ lines in the p - v plane. Which one represents the highest temperature?).

REVIEW QUESTIONS

A number of questions follow that are based on concepts that you have covered in earlier calculus and thermodynamic courses. State your answers as clearly and concisely as possible using any source that you wish (although all the material has been covered in the preceding

review). Do not proceed to Chapter 2 until you fully understand the correct answers to all questions and can write them down without reference to your notes.

- 1.1. How is an ordinary derivative such as dy/dx defined? How does this differ from a partial derivative?
- 1.2. What is the Taylor series expansion, and what are its applications and limitations?
- 1.3. State Newton's second law as you would apply it to a control mass.
- 1.4. Define a 1-pound force in terms of the acceleration it will give to a 1-pound mass. Give a similar definition for a newton in the SI system.
- 1.5. Explain the significance of g_c in Newton's second law. What are the magnitude *and units* of g_c in the English Engineering system? In the SI system?
- 1.6. What is the relation between degrees Fahrenheit and degrees Rankine? Degrees Celsius and Kelvin?
- 1.7. What is the relationship between density and specific volume?
- 1.8. Explain the difference between absolute and gage pressures.
- 1.9. What is the distinguishing characteristic of a fluid (as compared to a solid)? How is this related to viscosity?
- 1.10. Describe the difference between the microscopic and macroscopic approach in an analysis of fluid behavior.
- 1.11. Describe the control volume approach to problem analysis and contrast it to the control mass approach. What kinds of systems are these also called?
- 1.12. Describe a property and give at least three examples.
- 1.13. Properties may be categorized as either intensive or extensive. Define what is meant by each, and list examples of each type of property.
- 1.14. When dealing with a unit mass of a single component substance, how many independent properties are required to fix the state?
- 1.15. Of what use is an equation of state? Write down one with which you are familiar.
- 1.16. Define point functions and path functions. Give examples of each.
- 1.17. What is a process? What is a cycle?
- 1.18. How does the zeroth law of thermodynamics relate to temperature?
- 1.19. State the first law of thermodynamics for a closed system that is executing a single process.
- 1.20. What are the sign conventions used in this book for heat and work?
- 1.21. State any form of the second law of thermodynamics.
- 1.22. Define a reversible process for a thermodynamic system. Is any real process ever completely reversible?
- 1.23. What are some effects that cause processes to be irreversible?

- 1.24. What is an adiabatic process? An isothermal process? An isentropic process?
- 1.25. Give equations that define enthalpy and entropy.
- 1.26. Give differential expressions that relate entropy to
 - (a) internal energy and
 - (b) enthalpy.
- 1.27. Define (in the form of partial derivatives) the specific heats c_v and c_p . Are these expressions valid for a material in any state?
- 1.28. State the perfect gas equation of state. Give a consistent set of units for each term in the equation.
- 1.29. For a perfect gas, specific internal energy is a function of which state variables? How about specific enthalpy?
- 1.30. Give expressions for Δu and Δh that are valid for perfect gases. Do these hold for any process?
- 1.31. For perfect gases, at what temperature do we arbitrarily assign $u = 0$ and $h = 0$?
- 1.32. State any expression for the entropy change between two arbitrary points which is valid for a perfect gas.
- 1.33. If a perfect gas undergoes an isentropic process, what equation relates the pressure to the volume? Temperature to the volume? Temperature to the pressure?
- 1.34. Consider the general polytropic process ($pv^n = \text{const}$) for a perfect gas. In the $p-v$ and $T-s$ diagrams shown in Figure RQ1.34, label each process line with the correct value of n and identify which fluid property is held constant.

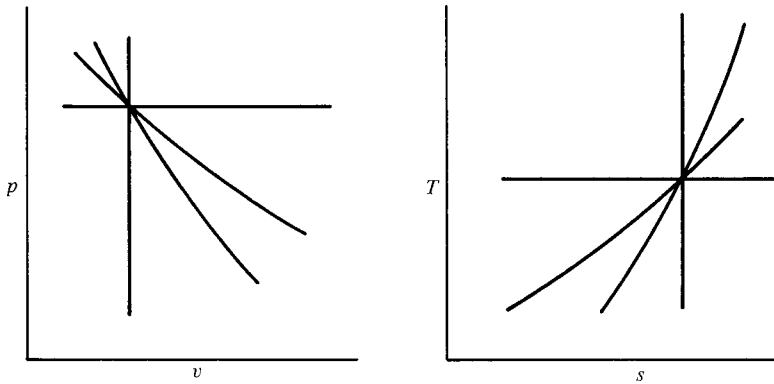


Figure RQ1.34

REVIEW PROBLEMS

If you have been away from thermodynamics for a long time, it might be useful to work the following problems.

- 1.1. How well is the relation $c_p = c_v + R$ represented in the table of gas properties in Appendix A? Use entries for hydrogen.
- 1.2. A perfect gas having specific heats $c_v = 0.403 \text{ Btu/lbm}\cdot^\circ\text{R}$ and $c_p = 0.532 \text{ Btu/lbm}\cdot^\circ\text{R}$ undergoes a reversible polytropic process in which the polytropic exponent $n = 1.4$. Giving clear reasons, answer the following:
- Will there be any heat transfer in the process?
 - Which would this process be *nearest*, a horizontal or a vertical line on a p - v or a T - s diagram? (Alternatively, state between which constant property lines the process lies.)
- 1.3. Nitrogen gas is reversibly compressed from 70°F and 14.7 psia to one-fourth of its original volume by (1) a $T = \text{const}$ process or (2) a $p = \text{const}$ process followed by a $v = \text{const}$ process to the same end point as (1).
- Which compression involves the least amount of work? Show clearly on a p - v diagram.
 - Calculate the heat and work interaction for the isothermal compression.
- 1.4. For the reversible cycle shown in Figure RP1.4, compute the cyclic integrals $[\oint d(\cdot)]$ of dE , δQ , dH , δW , and dS .

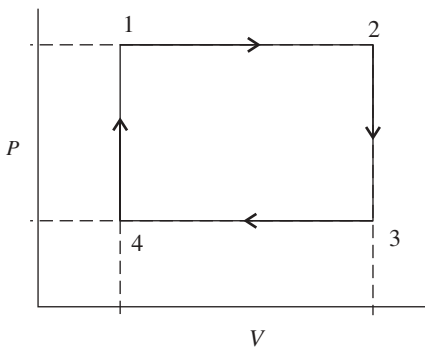


Figure RP1.4

$$p_1 = p_2 = 1.0 \times 10^6 \text{ Pa}$$

$$p_3 = p_4 = 0.4 \times 10^6 \text{ Pa}$$

$$V_1 = V_4 = 0.6 \text{ m}^3$$

$$V_2 = V_3 = 1.0 \text{ m}^3$$

- 1.5. A perfect gas (methane) undergoes a reversible, polytropic process in which the polytropic exponent is 1.4.
- Using the first law, arrive at an expression for the heat transfer per unit mass solely as a function of the temperature difference ΔT . This should be some numerical value (use SI units).
 - Would this heat transfer be equal to either the enthalpy change or the internal energy change for the same ΔT ?

Chapter 2

Control Volume Analysis—Part I

2.1 INTRODUCTION

In the study of gas dynamics we are interested in fluids that are *flowing*. The analysis of flow problems is based on the same fundamental principles that you have used in earlier courses in thermodynamics or fluid dynamics:

1. Conservation of mass
2. Conservation of energy
3. Newton's second law of motion

When applying these principles to the solution of specific problems, you must also know something about the properties of the fluid.

In Chapter 1 the concepts listed above were reviewed in a form applicable to a control mass. However, it is extremely difficult to approach flow problems from the control mass point of view. Thus it will first be necessary to develop some fundamental expressions that can be used to analyze control volumes. A technique is developed to transform our basic laws for a control mass into integral equations that are applicable to finite control volumes. Simplifications will be made for special cases such as steady one-dimensional flow. We also analyze differential control volumes that will produce some valuable differential relations. In this chapter we tackle mass and energy, and in Chapter 3 we discuss momentum concepts.

2.2 OBJECTIVES

After completing this chapter successfully, you should be able to:

1. State the basic concepts from which a study of gas dynamics proceeds.
2. Explain one-, two-, and three-dimensional flow.

3. Define steady flow.
4. (*Optional*) Compute the flow rate and average velocity from a multidimensional velocity profile.
5. Write the equation used to relate the material derivative of any extensive property to the properties inside, and crossing the boundaries of, a control volume. Interpret in words the meaning of each term in the equation.
6. (*Optional*) Starting with the basic concepts or equations that are valid for a control mass, obtain the integral forms of the continuity and energy equations for a control volume.
7. Simplify the integral forms of the continuity and energy equations for a control volume for conditions of steady one-dimensional flow.
8. (*Optional*) Apply the simplified forms of the continuity and energy equations to differential control volumes.
9. Demonstrate the ability to apply continuity and energy concepts in an analysis of control volumes.

2.3 FLOW DIMENSIONALITY AND AVERAGE VELOCITY

As we observe fluid moving around, the various properties can be expressed as functions of location and time. Thus, in an ordinary rectangular Cartesian coordinate system, we could say in general that

$$V = f(x, y, z, t) \quad (2.1)$$

or

$$p = g(x, y, z, t) \quad (2.2)$$

Since it is necessary to specify three spatial coordinates and time, this is called *three-dimensional unsteady flow*.

Two-dimensional unsteady flow would be represented by

$$V = f(x, y, t) \quad (2.3)$$

and *one-dimensional unsteady flow* by

$$V = f(x, t) \quad (2.4)$$

The assumption of one-dimensional flow is a simplification normally applied to flow systems and the single coordinate is usually taken in the direction of flow. This is not necessarily *unidirectional flow*, as the direction of the flow duct might change. Another way of looking at one-dimensional flow is to say that at any given section


(x -coordinate) all fluid properties are constant across the cross section. Keep in mind that the properties can still change from section to section (as x changes).

The fundamental concepts reviewed in Chapter 1 were expressed in terms of a given mass of material (i.e., the control mass approach). When using the control mass approach we observe some property of the mass, such as enthalpy or internal energy. The (time) rate at which this property changes is called a *material derivative* (sometimes called a *total* or *substantial derivative*). It is written by various authors as $D(\cdot)/Dt$ or $d(\cdot)/dt$. Note that it is computed *as we follow the material around*, and thus it involves two contributions.

First, the property may change because the mass has moved to a new position (e.g., at the same instant of time the temperature in Tucson is different from that in Anchorage). This contribution to the material derivative is sometimes called the *convective derivative*.

Second, the property may change with time at any given position (e.g., even in Monterey the temperature varies from morning to night). This latter contribution is called the *local* or *partial derivative* with respect to time and is written $\partial(\cdot)/\partial t$. As an example, for a typical three-dimensional unsteady flow the material derivative of the pressure would be represented as

$$\frac{dp}{dt} = \underbrace{\frac{\partial p}{\partial x} \frac{dx}{dt} + \frac{\partial p}{\partial y} \frac{dy}{dt} + \frac{\partial p}{\partial z} \frac{dz}{dt}}_{\text{Convective derivative}} + \frac{\partial p}{\partial t} \quad (2.5)$$

Local time derivative \longleftarrow 

If the fluid properties at every point are *independent* of time, we call this *steady flow*. Thus in steady flow the *partial derivative* of any property with respect to time is zero:

$$\frac{\partial(\cdot)}{\partial t} = 0 \quad \text{for steady flow} \quad (2.6)$$

Notice that this does not prevent properties from being different in different locations. Thus the material derivative may be nonzero for the case of steady flow, due to the contribution of the convective portion.

Next we examine the problem of computing mass flow rates when the flow is not one-dimensional. Consider the flow of a real fluid in a circular duct. At low Reynolds numbers, where viscous forces predominate, the fluid tends to flow in layers without any energy exchange between adjacent layers. This is termed *laminar flow*, and we could easily establish (see p. 185 of Ref. 9) that the velocity profile for this case would be a paraboloid of revolution, a cross section of which is shown in Figure 2.1.

At any given cross section the velocity can be expressed as

$$u = U_{\max} \left[1 - \left(\frac{r}{r_0} \right)^2 \right] \quad (2.7)$$

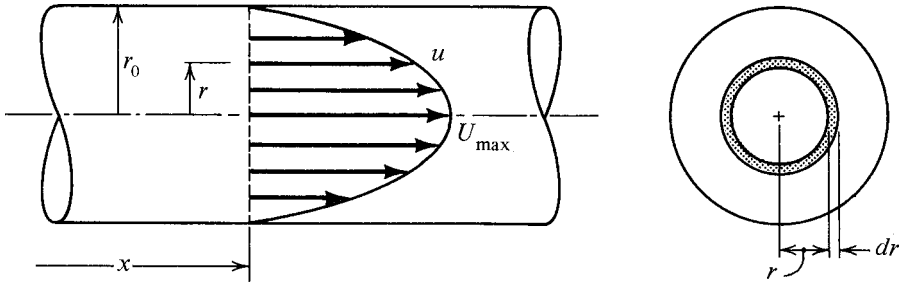


Figure 2.1 Velocity profile for laminar flow.

To compute the mass flow rate, we integrate:

$$\dot{m} = \text{mass flow rate} = \int_A \rho u \, dA \tag{2.8}$$

where

$$dA = 2\pi r \, dr \tag{2.9}$$

Assuming ρ to be a constant, carry out the indicated integration and *show* that

$$\dot{m} = \rho (\pi r_0^2) \frac{U_m}{2} = \rho A \frac{U_m}{2} \tag{2.10}$$

Note that for a multidimensional flow problem, when the flow rate is expressed as

$$\dot{m} = \rho AV \tag{2.11}$$

the velocity V is an *average* velocity, which for this case is $U_m/2$. Since the density was held constant during integration, V is more properly called an *area-averaged velocity*. But because there is generally little change in density across any given section, this is a reasonable average velocity.

As we move to higher Reynolds numbers, the large inertia forces cause irregular velocity fluctuations in all directions, which in turn cause mixing between adjacent layers. The resulting energy transfer causes the fluid particles near the center to slow down while those particles next to the wall speed up. This produces the relatively flat velocity profile shown in Figure 2.2, which is typical of *turbulent flow*. Notice that for this type of flow, all particles at a given section have very nearly the same velocity, which closely approximates a one-dimensional flow picture. Since most flows of engineering interest are well into this turbulent regime, we can see why the assumption of one-dimensional flow is reasonably accurate.

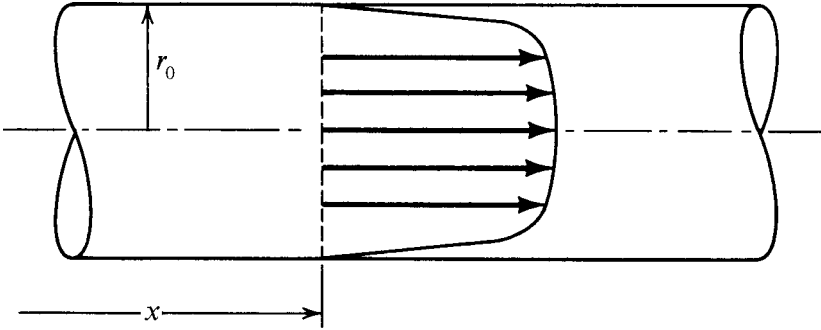


Figure 2.2 Velocity profile for turbulent flow.

Streamlines and Streamtubes

As we progress through this book, we will occasionally mention the following:

Streamline: a line that is everywhere tangent to the velocity vectors of those fluid particles that are on the line

Streamtube: a flow passage that is formed by adjacent streamlines

By virtue of these definitions, no fluid particles ever cross a streamline. Hence fluid flows through a streamtube much as it does through a physical pipe.

2.4 TRANSFORMATION OF A MATERIAL DERIVATIVE TO A CONTROL VOLUME APPROACH

In most gas dynamics problems it will be more convenient to examine a fixed region in space, or a *control volume*. The fundamental equations were listed in Chapter 1 for the analysis of a control mass. We now ask ourselves what form these equations take when applied to a control volume. In each case the troublesome term is a material derivative of an extensive property.

It will be simplest to show first how the material derivative of *any extensive property* transforms to a control volume approach. The result will be a valuable general relation that can be used for many particular situations. Let

$N \equiv$ the total amount of any extensive property in a given mass

$\eta \equiv$ the amount of N per unit mass

Thus

$$N = \int \eta dm = \iiint \rho \eta d\tilde{v} = \int_v \rho \eta d\tilde{v} \quad (2.12)$$

where

$dm \equiv$ incremental element of mass

$d\tilde{v} \equiv$ incremental volume element

Note that for simplicity we are indicating the triple volume integral as \int_v .

Now let us consider what happens to the material derivative dN/dt . Recall that a material derivative is the (time) rate of change of a property computed as the mass moves around. Figure 2.3 shows an arbitrary mass at time t and the same mass at time $t + \Delta t$. Remember that this system is at all times composed of the same mass particles. If Δt is small, there will be an overlap of the two regions as shown in Figure 2.4, with the common region identified as region 2. At time t the given mass particles occupy regions 1 and 2. At time $t + \Delta t$ the same mass particles occupy regions 2 and 3. We shall call the original confines of the mass (regions 1 and 2) the *control volume*.

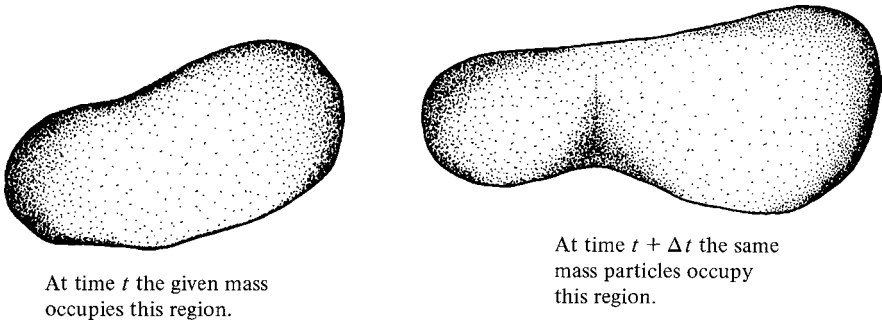


Figure 2.3 Identification of control mass.

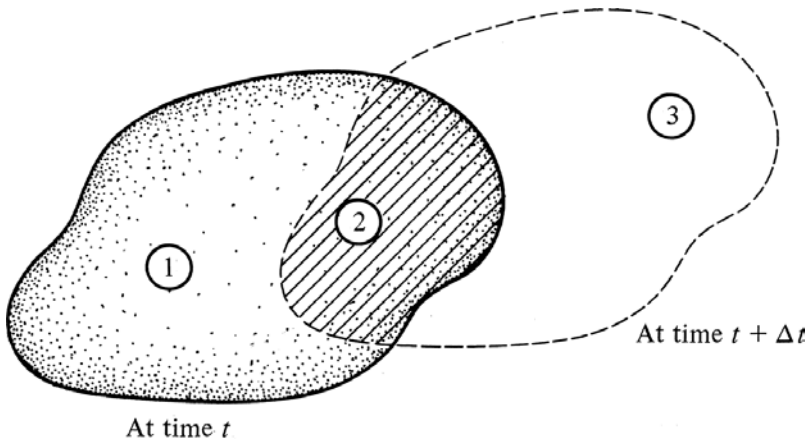


Figure 2.4 Control mass for small Δt .

We construct our material derivative from the mathematical definition

$$\frac{dN}{dt} \equiv \lim_{\Delta t \rightarrow 0} \left[\frac{(\text{final value of } N)_{t+\Delta t} - (\text{initial value of } N)_t}{\Delta t} \right] \quad (2.13)$$

where the final value of N is the N of regions 2 and 3 computed at time $t + \Delta t$, and the initial value of N is the N of regions 1 and 2 computed at time t .

A more specific expression is:

$$\frac{dN}{dt} = \lim_{\Delta t \rightarrow 0} \left[\frac{(N_2 + N_3)_{t+\Delta t} - (N_1 + N_2)_t}{\Delta t} \right] \quad (2.14)$$

First, consider the term

$$\lim_{\Delta t \rightarrow 0} \frac{N_3(t + \Delta t)}{\Delta t}$$

The numerator represents the amount of N in region 3 at time $t + \Delta t$, and by definition *region 3 is formed by the fluid moving out of the control volume*. Let \hat{n} be a unit normal, positive when pointing *outward* from the control volume. Also let dA be an increment of the surface area that separates regions 2 and 3, as shown in Figure 2.5.

$$\mathbf{V} \cdot \hat{n} = \text{component of } \mathbf{V} \perp \text{ to } dA$$

$$(\mathbf{V} \cdot \hat{n}) dA = \text{incremental volumetric flow rate}$$

$$\rho(\mathbf{V} \cdot \hat{n}) dA = \text{incremental mass flow rate}$$

$$\rho(\mathbf{V} \cdot \hat{n}) dA \Delta t = \text{amount of mass that crossed } dA \text{ in time } \Delta t$$

$$\eta\rho(\mathbf{V} \cdot \hat{n}) dA \Delta t = \text{amount of } N \text{ that crossed } dA \text{ in time } \Delta t$$

Thus

$$\int_{S_{\text{out}}} \eta\rho(\mathbf{V} \cdot \hat{n}) dA \Delta t \approx \text{total amount of } N \text{ in region 3} \quad (2.15)$$

where $\int_{S_{\text{out}}}$ is a double integral over the surface where fluid *leaves* the control volume. The term in question becomes

$$\lim_{\Delta t \rightarrow 0} \frac{N_3(t + \Delta t)}{\Delta t} = \int_{S_{\text{out}}} \eta\rho(\mathbf{V} \cdot \hat{n}) dA \quad (2.16)$$

This integral is called a *flux* or *rate* of N flow *out* of the control volume.

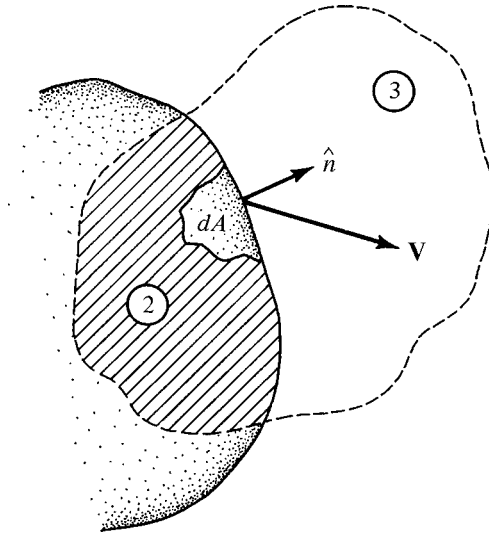


Figure 2.5 Flow out of control volume.

Since the Δt cancels, one might question the limit process. Actually, the integral expression in equation (2.15) is only approximately correct. This is because all the properties in this integral are going to be evaluated at the surface S at time t . Thus equation (2.15) is only approximate as written but *becomes exact in the limit* as Δt approaches zero.

Now let us consider the term

$$\lim_{\Delta t \rightarrow 0} \frac{N_1(t)}{\Delta t}$$

How has region 1 been formed? It has been formed by the original mass particles moving on (during time Δt) and *other fluid has moved into the control volume*. Thus we evaluate N_1 by the following procedure. Let \hat{n}' be a unit normal, positive when pointing *inward* to the control volume, as shown in Figure 2.6.

Complete the following in words:

$$\begin{aligned} \mathbf{V} \cdot \hat{n}' &= \\ (\mathbf{V} \cdot \hat{n}') dA &= \\ \rho(\mathbf{V} \cdot \hat{n}') dA &= \\ \rho(\mathbf{V} \cdot \hat{n}') dA \Delta t &= \\ \eta\rho(\mathbf{V} \cdot \hat{n}') dA \Delta t &= \end{aligned}$$

It should be clear that

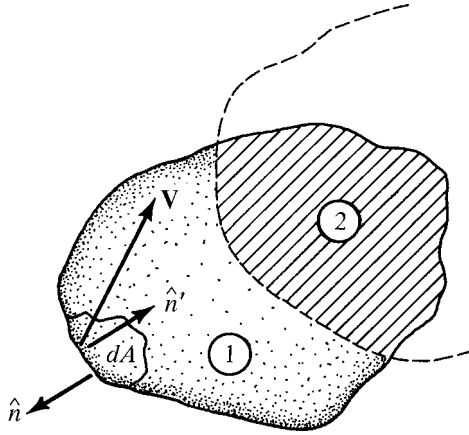


Figure 2.6 Flow into control volume.

$$\int_{S_{in}} \eta \rho (\mathbf{V} \cdot \hat{n}') dA \Delta t \approx \text{total amount of } N \text{ in region 1} \quad (2.17)$$

and

$$\lim_{\Delta t \rightarrow 0} \frac{N_1(t)}{\Delta t} = \int_{S_{in}} \eta \rho (\mathbf{V} \cdot \hat{n}') dA \quad (2.18)$$

where $\int_{S_{in}}$ is a double integral over the surface where fluid enters the control volume. This term represents the N flux *into* the control volume.

Now look at the first and last terms of equation (2.14):

$$\lim_{\Delta t \rightarrow 0} \left[\frac{N_2(t + \Delta t) - N_2(t)}{\Delta t} \right] \text{ which by definition is } \frac{\partial N_2}{\partial t}$$

Note that the partial derivative notation is used since the region of integration is fixed and time is the only independent parameter allowed to vary. Also note that as Δt approaches zero, region 2 approaches the original confines of the mass, which we have called the control volume. Thus

$$\lim_{\Delta t \rightarrow 0} \left[\frac{N_2(t + \Delta t) - N_2(t)}{\Delta t} \right] = \frac{\partial N_{cv}}{\partial t} = \frac{\partial}{\partial t} \int_{cv} \rho \eta d\tilde{v} \quad (2.19)$$

where cv stands for the control volume.

We now substitute into equation (2.14) all the terms that we have developed in equations (2.16), (2.18), and (2.19):

$$\frac{dN}{dt} = \frac{\partial}{\partial t} \int_{cv} \rho \eta d\tilde{v} + \int_{S_{out}} \eta \rho (\mathbf{V} \cdot \hat{n}) dA - \int_{S_{in}} \eta \rho (\mathbf{V} \cdot \hat{n}') dA \quad (2.20)$$

Noting that $\hat{n} = -\hat{n}'$, we can combine the last two terms into

$$\begin{aligned} & \int_{S_{out}} \eta \rho (\mathbf{V} \cdot \hat{n}) dA - \int_{S_{in}} \eta \rho (\mathbf{V} \cdot \hat{n}') dA \\ &= \int_{S_{out}} \eta \rho (\mathbf{V} \cdot \hat{n}) dA + \int_{S_{in}} \eta \rho (\mathbf{V} \cdot \hat{n}) dA = \int_{cs} \eta \rho (\mathbf{V} \cdot \hat{n}) dA \end{aligned} \quad (2.21)$$

where cs represents the entire control surface surrounding the control volume.

This term represents the *net* rate at which N passes *out* of the control volume (i.e., flow rate out minus flow rate in). The final transformation equation becomes

$$\left(\frac{dN}{dt}\right)_{\text{material derivative}} = \frac{\partial}{\partial t} \int_{cv} \eta \rho d\tilde{v} + \int_{cs} \eta \rho (\mathbf{V} \cdot \hat{n}) dA \quad (2.22)$$

Triple integral
Double integral

This relation, known as *Reynolds's transport theorem*, can be interpreted in words as:

The rate of change of N for a given mass as it is moving around is equal to the rate of change of N inside the control volume *plus* the *net* efflux (flow out minus flow in) of N from the control volume.

It is essential to note that we have not placed any restriction on N other than that it must be a mass-dependent (extensive) property. Thus N may be a scalar *or* a vector quantity. Examples of the application of this powerful transformation equation are provided in the next two sections and in Chapter 3.

2.5 CONSERVATION OF MASS

If we exclude from consideration the possibility of nuclear reactions, we can account separately for the conservation of mass and energy. Thus if we observe a given quantity of mass as it moves around, we can say by definition that the mass will remain fixed. Another way of stating this is that the material derivative of the mass is zero:

$$\boxed{\frac{d(\text{mass})}{dt} = 0} \quad (2.23)$$

This is the *continuity equation for a control mass*. What corresponding expression can we write for a control volume? To find out, we must transform the material derivative according to the relation developed in Section 2.4.

If N represents the total mass, η is the mass per unit mass, or 1. Substitution into equation (2.22) yields

$$\frac{d(\text{mass})}{dt} = \frac{\partial}{\partial t} \int_{\text{cv}} \rho d\tilde{v} + \int_{\text{cs}} \rho(\mathbf{V} \cdot \hat{n}) dA \quad (2.24)$$

But we know by equation (2.23) that this must be zero; thus the transformed equation is

$$\boxed{0 = \frac{\partial}{\partial t} \int_{\text{cv}} \rho d\tilde{v} + \int_{\text{cs}} \rho(\mathbf{V} \cdot \hat{n}) dA} \quad (2.25)$$

This is the *continuity equation for a control volume*. State in words what each term represents. For steady flow, any partial derivative with respect to time is zero and the equation becomes

$$0 = \int_{\text{cs}} \rho(\mathbf{V} \cdot \hat{n}) dA \quad (2.26)$$

Let us now evaluate the remaining integral for the case of one-dimensional flow. Figure 2.7 shows fluid crossing a portion of the control surface. Recall that for one-dimensional flow any fluid property will be constant over an entire cross section. Thus both the density and the velocity can be brought out from under the integral sign. If the surface is always chosen perpendicular to V , the integral is very simple to evaluate:

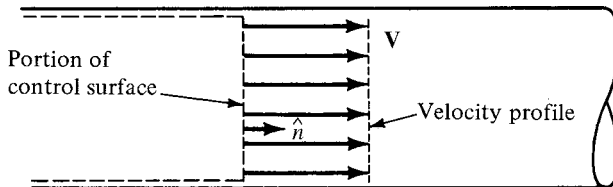


Figure 2.7 One-dimensional velocity profile.

$$\int \rho(\mathbf{V} \cdot \hat{n}) dA = \rho \mathbf{V} \cdot \hat{n} \int dA = \rho VA$$

This integral must be evaluated over the entire control surface, which yields

$$\int_{cs} \rho(\mathbf{V} \cdot \hat{n}) dA = \sum \rho VA \quad (2.27)$$

This summation is taken over all sections where fluid crosses the control surface and is positive where fluid leaves the control volume (since $\mathbf{V} \cdot \hat{n}$ is positive here) and negative where fluid enters the control volume. For steady, one-dimensional flow, the continuity equation for a control volume becomes

$$\sum \rho AV = 0 \quad (2.28)$$

If there is only one section where fluid enters and one section where fluid leaves the control volume, this becomes

$$(\rho AV)_{out} - (\rho AV)_{in} = 0$$

or

$$(\rho AV)_{out} = (\rho AV)_{in} \quad (2.29)$$

We usually write this as

$$\dot{m} = \rho AV = \text{constant} \quad (2.30)$$

Implicit in this expression is the fact that V is the component of velocity perpendicular to the area A . If the density ρ is in lbm per cubic foot, the area A is in square feet, and the velocity V is in feet per second, what are the units of the mass flow rate \dot{m} ? What will each of these be in SI units?

Note that *as a result of steady flow* the mass flow rate into a control volume is equal to the mass flow rate out of the control volume. *The converse of this is not necessarily true*; that is, just because it is known that the flow rates into and out of a control volume are the same, this does not ensure that the flow is steady.

Example 2.1 Air flows steadily through a 1-in.-diameter section with a velocity of 1096 ft/sec. The temperature is 40°F and the pressure is 50 psia. The flow passage expands to 2 in. in diameter, and at this section the pressure and temperature have dropped to 2.82 psia and −240°F, respectively. What is the average velocity at this section?

Knowing that

$$p = \rho RT \quad \text{and} \quad A = \frac{\pi D^2}{4}$$

for steady, one-dimensional flow, we obtain

$$\begin{aligned}\rho_1 A_1 V_1 &= \rho_2 A_2 V_2 \\ \left[\frac{p_1}{RT_1} \right] \left[\frac{\pi D_1^2}{4} \right] V_1 &= \left[\frac{p_2}{RT_2} \right] \left[\frac{\pi D_2^2}{4} \right] V_2 \\ V_2 &= V_1 \frac{D_1^2 p_1 T_2}{D_2^2 p_2 T_1} = (1096) \left(\frac{1}{2} \right)^2 \left(\frac{50}{2.82} \right) \left(\frac{220}{500} \right) \\ V_2 &= 2138 \text{ ft/sec}\end{aligned}$$

An alternative form of the continuity equation can be obtained by differentiating equation (2.30). For steady one-dimensional flow this means that

$$d(\rho AV) = AV d\rho + \rho V dA + \rho A dV = 0 \quad (2.31)$$

Dividing by ρAV yields

$$\boxed{\frac{d\rho}{\rho} + \frac{dA}{A} + \frac{dV}{V} = 0} \quad (2.32)$$

This expression can also be obtained by first taking the natural logarithm of equation (2.30) and then differentiating the result. This is called *logarithmic differentiation*. Try it.

This differential form of the continuity equation is useful in interpreting the changes that must occur as fluid flows through a duct, channel, or streamtube. It indicates that if mass is to be conserved, the changes in density, velocity, and cross-sectional area must compensate for one another. For example, if the area is constant ($dA = 0$), any increase in velocity must be accompanied by a corresponding decrease in density. We shall also use this form of the continuity equation in several future derivations.

2.6 CONSERVATION OF ENERGY

The first law of thermodynamics is a statement of conservation of energy. For a system composed of a given quantity of mass that undergoes a process, we can say that

$$\boxed{Q = W + \Delta E} \quad (1.28)$$

where

Q = the net heat transferred into the system

$W =$ the net work done by the system
 $\Delta E =$ the change in total energy of the system

This can also be written on a rate basis to yield an expression that is valid at any instant of time:

$$\frac{\delta Q}{dt} = \frac{\delta W}{dt} + \frac{dE}{dt} \quad (2.33)$$

We must carefully examine each term in this equation to clearly understand its significance. $\delta Q/dt$ and $\delta W/dt$ represent instantaneous rates of heat and work transfer between the system and its surroundings. They are rates of energy transfer across the boundaries of the system. These terms are *not* material derivatives. (Recall that heat and work are not properties of a system.) On the other hand, energy is a property of the system and dE/dt is a material derivative.

We now ask what form the energy equation takes when applied to a control volume. To answer this, we must first transform the material derivative in equation (2.33) according to the relation developed in Section 2.4. If we let N be E , the total energy of the system, then η represents e , the energy per unit mass:

$$e = u + \frac{V^2}{2g_c} + \frac{g}{g_c}z \quad (1.30)$$

Substitution into equation (2.22) yields

$$\frac{dE}{dt} = \frac{\partial}{\partial t} \int_{cv} e\rho d\tilde{v} + \int_{cs} e\rho(\mathbf{V} \cdot \hat{n}) dA \quad (2.34)$$

and the transformed equation that is applicable to a control volume is

$$\frac{\delta Q}{dt} = \frac{\delta W}{dt} + \frac{\partial}{\partial t} \int_{cv} e\rho d\tilde{v} + \int_{cs} e\rho(\mathbf{V} \cdot \hat{n}) dA \quad (2.35)$$

In this case, $\delta Q/dt$ and $\delta W/dt$ represent instantaneous rates of heat and work transfer across the surface that surrounds the control volume. *State* in words what the other terms represent. [See the discussion following equation (2.22).]

For one-dimensional flow the last integral in equation (2.35) is simple to evaluate, as e , ρ , and V are constant over any given cross section. Assuming that the velocity V is perpendicular to the surface A , we have

$$\int_{cs} e\rho(\mathbf{V} \cdot \hat{n}) dA = \sum e\rho V \int dA = \sum e\rho VA = \sum \dot{m}e \quad (2.36)$$

The summation is taken over all sections where fluid crosses the control surface and is positive where fluid leaves the control volume and negative where fluid enters the control volume.

In using equation (2.35) we must be careful to include all forms of work, whether done by pressure forces (from normal stresses) or shear forces (from tangential stresses). Figure 2.8 shows a simple control volume. Note that the control surface is chosen carefully so that there is no fluid motion at the boundary except

- (a) where fluid enters and leaves the system, or
- (b) where a mechanical device such as a shaft crosses the boundaries of the system.

This prudent choice of the system boundary simplifies calculation of the work quantities. For example, recall that for a real fluid there is no motion at the wall (e.g., see Figures 2.1 and 2.2). Thus the pressure and shear forces along the sidewalls do no work since they do not move through any distance.

The rate at which work is transmitted out of the system by the mechanical device is called $\delta W_s/dt$ and is accomplished by shear stresses between the device and the fluid. (Think of the subscript s for shear stresses or shaft work.) The other work quantities considered are where fluid enters and leaves the system. Here the pressure forces do work to push fluid into or out of the control volume. The shaded area at the inlet represents the fluid that enters the control volume during time dt . The work done here is

$$\delta W' = \mathbf{F} \cdot d\mathbf{x} = pA dx = pAV dt \quad (2.37)$$

The rate of doing work is

$$\frac{\delta W'}{dt} = pAV \quad (2.38)$$

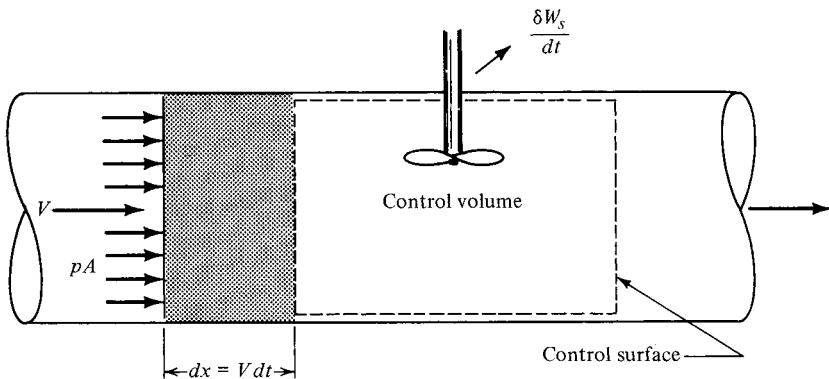


Figure 2.8 Identification of work quantities.

This is called *flow work* or *displacement work*. It can be expressed in a more meaningful form by introducing

$$\dot{m} = \rho AV \quad (2.11)$$

Thus the rate of doing flow work is

$$pAV = p \frac{\dot{m}}{\rho} = \dot{m}pv \quad (2.39)$$

This represents work done *by* the system (positive) to force fluid *out* of the control volume and represents work done *on* the system (negative) to force fluid *into* the control volume. Thus the total work

$$\frac{\delta W}{dt} = \frac{\delta W_s}{dt} + \sum \dot{m}pv$$

We may now rewrite our energy equation in a more useful form which is applicable to one-dimensional flow. Notice how the flow work has been included in the last term:

$$\frac{\delta Q}{dt} = \frac{\delta W_s}{dt} + \frac{\partial}{\partial t} \int_{cv} e\rho d\tilde{v} + \sum \dot{m}(e + pv) \quad (2.40)$$

If we consider steady flow, the term involving the partial derivative with respect to time is zero. Thus for steady one-dimensional flow the energy equation for a control volume becomes

$$\boxed{\frac{\delta Q}{dt} = \frac{\delta W_s}{dt} + \sum \dot{m}(e + pv)} \quad (2.41)$$

If there is only one section where fluid leaves and one section where fluid enters the control volume, we have (from continuity)

$$\dot{m}_{in} = \dot{m}_{out} = \dot{m} \quad (2.42)$$

We may now divide equation (2.41) by \dot{m} :

$$\frac{1}{\dot{m}} \frac{\delta Q}{dt} = \frac{1}{\dot{m}} \frac{\delta W_s}{dt} + (e + pv)_{out} - (e + pv)_{in} \quad (2.43)$$

We now define

$$q \equiv \frac{1}{\dot{m}} \frac{\delta Q}{dt} \quad (2.44)$$

$$w_s \equiv \frac{1}{\dot{m}} \frac{\delta W_s}{dt} \quad (2.45)$$

where q and w_s represent quantities of heat and shaft work crossing the control surface per unit mass of fluid flowing. What are the units of q and w_s ?

Our equation has now become

$$q = w_s + (e + pv)_{\text{out}} - (e + pv)_{\text{in}} \quad (2.46)$$

This can be applied directly to the finite control volume shown in Figure 2.9, with the result

$$q = w_s + (e_2 + p_2 v_2) - (e_1 + p_1 v_1) \quad (2.47)$$

Detailed substitution for e [from equation (1.30)] yields

$$u_1 + p_1 v_1 + \frac{v_1^2}{2g_c} + \frac{g}{g_c} z_1 + q = u_2 + p_2 v_2 + \frac{v_2^2}{2g_c} + \frac{g}{g_c} z_2 + w_s \quad (2.48)$$

If we introduce the definition of enthalpy

$$h \equiv u + pv \quad (1.34)$$

the equation can be shortened to

$$h_1 + \frac{V_1^2}{2g_c} + \frac{g}{g_c} z_1 + q = h_2 + \frac{V_2^2}{2g_c} + \frac{g}{g_c} z_2 + w_s \quad (2.49)$$

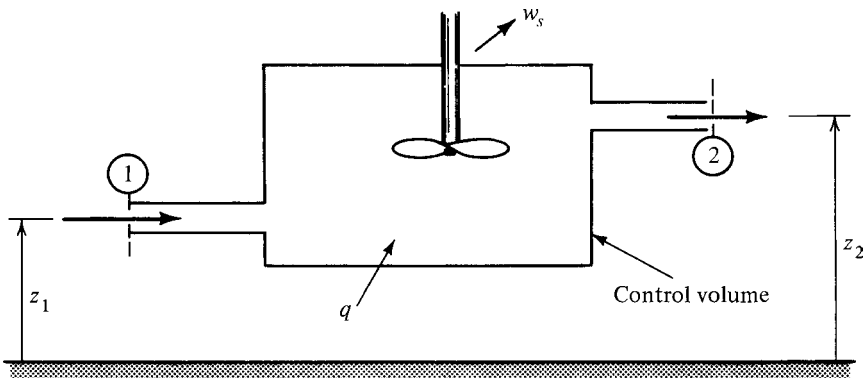


Figure 2.9 Finite control volume for energy analysis.

This is the form of the energy equation that may be used to solve many problems. Can you list the assumptions that have been made to develop equation (2.49)?

Note that in Figure 2.9 we have not drawn a dashed line completely surrounding the fluid inside the control volume. Rather, we have only identified sections where the fluid enters or leaves the control volume. This practice will generally be followed throughout the remainder of this book and should not cause any confusion. But remember, the analysis will always be made *for the fluid* inside the control volume.

Example 2.2 Steam enters an ejector (Figure E2.2) at the rate of 0.1 lbm/sec with an enthalpy of 1300 Btu/lbm and negligible velocity. Water enters at the rate of 1.0 lbm/sec with an enthalpy of 40 Btu/lbm and negligible velocity. The mixture leaves the ejector with an enthalpy of 150 Btu/lbm and a velocity of 90 ft/sec. All potentials may be neglected. Determine the magnitude and direction of the heat transfer.

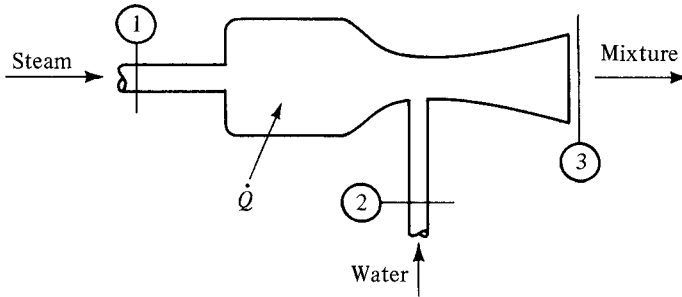


Figure E2.2

$$\begin{array}{lll} \dot{m}_1 = 0.1 \text{ lbm/sec} & V_1 \approx 0 & h_1 = 1300 \text{ Btu/lbm} \\ \dot{m}_2 = 1.0 \text{ lbm/sec} & V_2 \approx 0 & h_2 = 40 \text{ Btu/lbm} \\ & V_3 = 90 \text{ ft/sec} & h_3 = 150 \text{ Btu/lbm} \end{array}$$

Note the importance of making a sketch. It is necessary to establish the control volume and indicate clearly where fluid and energy cross the boundaries of the system. Identify these locations by number and list the given information with units. Make *logical* assumptions. Get in the habit of following this procedure for every problem.

Continuity:

$$\dot{m}_3 = \dot{m}_1 + \dot{m}_2 = 0.1 + 1.0 = 1.1 \text{ lbm/sec}$$

Energy:

$$\begin{aligned} \dot{m}_1 \left(h_1 + \frac{V_1^2}{2g_c} + \frac{g}{g_c} z_1 \right) + \dot{m}_2 \left(h_2 + \frac{V_2^2}{2g_c} + \frac{g}{g_c} z_2 \right) + \dot{Q} &= \dot{m}_3 \left(h_3 + \frac{V_3^2}{2g_c} + \frac{g}{g_c} z_3 \right) + \dot{W}_s \\ \dot{m}_1 h_1 + \dot{m}_2 h_2 + \dot{Q} &= \dot{m}_3 \left(h_3 + \frac{V_3^2}{2g_c} \right) \end{aligned}$$

$$(0.1)(1300) + (1.0)(40) + \dot{Q} = (1.1) \left[150 + \frac{90^2}{(2)(32.2)(778)} \right]$$

$$130 + 40 + \dot{Q} = (1.1)(150 + 0.162) = 165.2$$

$$\dot{Q} = 165.2 - 130 - 40 = -4.8 \text{ Btu/sec}$$

The minus sign indicates that heat is lost from the ejector.

Example 2.3 A horizontal duct of constant area contains CO_2 flowing isothermally (Figure E2.3). At a section where the pressure is 14 bar absolute, the average velocity is known to be 50 m/s. Farther downstream the pressure has dropped to 7 bar abs. Find the heat transfer.

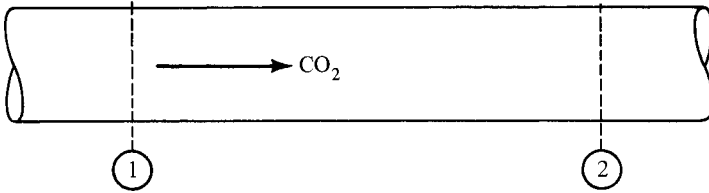


Figure E2.3

$$p_1 = 14 \times 10^5 \text{ N/m}^2 \quad p_2 = 7 \times 10^5 \text{ N/m}^2 \quad w_{s(1-2)} = 0$$

$$V_1 = 50 \text{ m/s} \quad V_2 = ? \quad q_{1-2} = ?$$

$$z_1 = z_2 \text{ (horizontal)} \quad A_1 = A_2 \text{ (given)}$$

Energy:

$$h_1 + \frac{V_1^2}{2g_c} + \frac{g}{g_c} z_1 + q = h_2 + \frac{V_2^2}{2g_c} + \frac{g}{g_c} z_2 + w_s$$

Since perfect gas and isothermal, $\Delta h = c_p \Delta t = 0$ by equation (1.46), and thus

$$q_{1-2} = \frac{V_2^2 - V_1^2}{2g_c}$$

State:

$$\frac{p_1}{\rho_1 T_1} = \frac{p_2}{\rho_2 T_2} \quad \rightarrow \quad \frac{p_1}{p_2} = \frac{\rho_1}{\rho_2}$$

Continuity:

$$\rho_1 A_1 V_1 = \rho_2 A_2 V_2$$

Show that

$$\frac{V_2}{V_1} = \frac{\rho_1}{\rho_2} = \frac{p_1}{p_2}$$

and thus

$$V_2 = \frac{p_1}{p_2} V_1 = \left(\frac{14 \times 10^5}{7 \times 10^5} \right) (50) = 100 \text{ m/s}$$

Returning to the energy equation, we have

$$q_{1-2} = \frac{V_2^2 - V_1^2}{2g_c} = \frac{100^2 - 50^2}{(2)(1)} = 3750 \text{ J/kg}$$

Example 2.4 Air at 2200°R enters a turbine at the rate of 1.5 lbm/sec (Figure E2.4). The air expands through a pressure ratio of 15 and leaves at 1090°R. Velocities entering and leaving are negligible and there is no heat transfer. Calculate the horsepower (hp) output of the turbine.

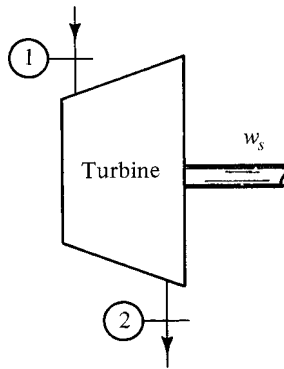


Figure E2.4

$T_1 = 2200^\circ\text{R}$	$T_2 = 1090^\circ\text{R}$	$\dot{m} = 1.5 \text{ lbm/sec}$
$V_1 \approx 0$	$V_2 \approx 0$	$q = 0$

Energy:

$$h_1 + \frac{V_1^2}{2g_c} + \frac{g}{g_c} z_1 + q = h_2 + \frac{V_2^2}{2g_c} + \frac{g}{g_c} z_2 + w_s$$

$$w_s = h_1 - h_2 = c_p(T_1 - T_2)$$

$$= (0.24)(2200 - 1090) = 266 \text{ Btu/lbm}$$

$$\text{hp} = \dot{m} w_s \left(\frac{778}{550} \right) = (1.5)(266) \left(\frac{778}{550} \right) = 564 \text{ hp}$$

Differential Form of Energy Equation

One can also apply the energy equation to a differential control volume, as shown in Figure 2.10. We assume steady one-dimensional flow. The properties of the fluid entering the control volume are designated as ρ , u , p , V , and so on. Fluid leaves the

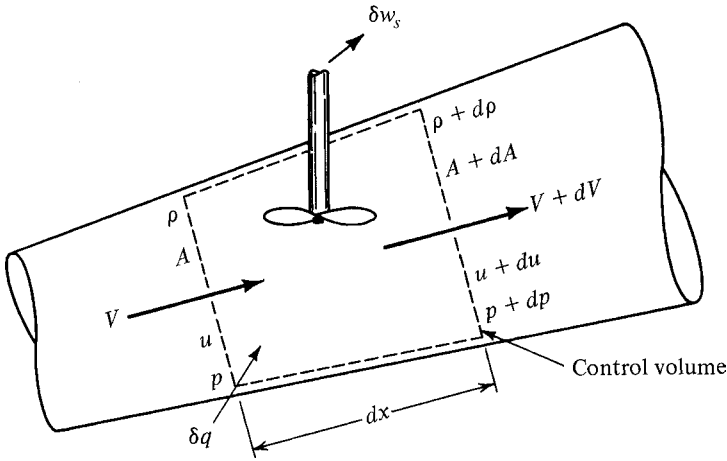


Figure 2.10 Energy analysis on infinitesimal control volume.

control volume with properties that have changed slightly as indicated by $\rho + d\rho$, $u + du$, and so on. Application of equation (2.46) to this differential control volume will produce

$$\delta q = \delta w_s + \left[(p + dp)(v + dv) + (u + du) + \frac{(V + dV)^2}{2g_c} + \frac{g}{g_c}(z + dz) \right] - \left(pv + u + \frac{V^2}{2g_c} + \frac{g}{g_c}z \right) \tag{2.50}$$

Expand equation (2.50), cancel like terms, and show that

$$\delta q = \delta w_s + p dv + v dp + \overset{\text{HOT}}{dp dv} + du + \frac{2V dV + \overset{\text{HOT}}{(dV)^2}}{2g_c} + \frac{g}{g_c} dz \tag{2.51}$$

As dx is allowed to approach zero, we can neglect any higher-order terms (HOT). Noting that

$$2V dV = dV^2$$

and

$$p dv + v dp = d(pv)$$

we obtain

$$\delta q = \delta w_s + d(pv) + du + \frac{dV^2}{2g_c} + \frac{g}{g_c} dz \tag{2.52}$$

and since

$$dh = du + d(pv)$$

we have

$$\delta q = \delta w_s + dh + \frac{dV^2}{2g_c} + \frac{g}{g_c} dz \quad (2.53)$$

This can be integrated directly to produce equation (2.49) for a finite control volume, but the differential form is frequently of considerable value by itself. The technique of analyzing a differential control volume is also an important one that we shall use many times.

2.7 SUMMARY

In the study of gas dynamics, as in any branch of fluid dynamics, most analyses are made on a control volume. We have shown how the material derivative of any mass-dependent property can be transformed into an equivalent expression for use with control volumes. We then applied this relation [equation (2.22)] to show how the basic laws regarding conservation of mass and energy can be converted from a control mass analysis into a form suitable for control volume analysis. Most of the work in this course will be done assuming steady one-dimensional flow; thus each general equation was simplified for these conditions.

Care should be taken to approach each problem in a consistent and organized fashion. For a typical problem, the following steps should be taken:

1. Sketch the flow system and identify the control volume.
2. Label sections where fluid enters and leaves the control volume.
3. Note where energy (Q and W_s) crosses the control surface.
4. Record all known quantities with their units.
5. Make any *logical* assumptions regarding unknown information.
6. Solve for the unknowns by a systematic application of the basic equations.

The *basic concepts* that we have used so far are few in number:

State: a simple density relation such as $p = \rho RT$ or $\rho = \text{constant}$

Continuity: derived from conservation of mass

Energy: derived from conservation of energy

Some of the most frequently used equations that were developed in this unit are summarized below. Some are restricted to steady one-dimensional flow; others

involve additional assumptions. You should know under what conditions each may be used.

1. *Mass flow rate past a section*

$$\dot{m} = \int_A \rho u \, dA \quad (2.8)$$

u = velocity perpendicular to dA

2. *Transformation of material derivative to control volume analysis*

$$\frac{dN}{dt} = \frac{\partial}{\partial t} \int_{cv} \eta \rho \, d\tilde{v} + \int_{cs} \eta \rho (\mathbf{V} \cdot \hat{n}) \, dA \quad (2.22)$$

If one-dimensional,

$$\int_{cs} \eta \rho (\mathbf{V} \cdot \hat{n}) \, dA = \sum \dot{m} \eta \quad (2.54)$$

If steady,

$$\frac{\partial(\cdot)}{\partial t} = 0 \quad (2.6)$$

3. *Mass conservation—continuity equation* $\begin{cases} N = \text{mass} \\ \eta = 1 \end{cases}$

$$\frac{\partial}{\partial t} \int_{cv} \rho \, d\tilde{v} + \int_{cs} \rho (\mathbf{V} \cdot \hat{n}) \, dA = 0 \quad (2.25)$$

For steady one-dimensional flow,

$$\dot{m} = \rho AV = \text{const} \quad (2.30)$$

$$\frac{d\rho}{\rho} + \frac{dA}{A} + \frac{dV}{V} = 0 \quad (2.32)$$

4. *Energy conservation—energy equation* $\begin{cases} N = E \\ \eta = e = u + V^2/2g_c + (g/g_c)z \end{cases}$

$$\frac{\delta Q}{dt} = \frac{\delta W}{dt} + \frac{\partial}{\partial t} \int_{cv} e \rho \, d\tilde{v} + \int_{cs} e \rho (\mathbf{V} \cdot \hat{n}) \, dA \quad (2.35)$$

w = shaft work (w_s) + flow work (pv)

For steady one-dimensional flow,

$$h_1 + \frac{V_1^2}{2g_c} + \frac{g}{g_c}z_1 + q = h_2 + \frac{V_2^2}{2g_c} + \frac{g}{g_c}z_2 + w_s \quad (2.49)$$

$$\delta q = \delta w_s + dh + \frac{dV^2}{2g_c} + \frac{g}{g_c} dz \quad (2.53)$$

PROBLEMS

Problem statements may occasionally give some irrelevant information; on the other hand, sometimes logical assumptions have to be made before a solution can be carried out. For example, unless specific information is given on potential differences, it is logical to assume that these are negligible; if no machine is present, it is reasonable to assume that $w_s = 0$, and so on. However, think carefully before arbitrarily eliminating terms from any equation—you may be eliminating a vital element from the problem. Check to see if there isn't some way to compute the desired quantity (such as calculating the enthalpy of a gas from its temperature). Properties of selected gases are provided in Appendixes A and B.

- 2.1. There is three-dimensional flow of an incompressible fluid in a duct of radius R . The velocity distribution at any section is hemispherical, with the maximum velocity U_m at the center and zero velocity at the wall. Show that the average velocity is $\frac{2}{3}U_m$.
- 2.2. A constant-density fluid flows between two flat parallel plates that are separated by a distance δ (Figure P2.2). Sketch the velocity distribution and compute the average velocity based on the velocity u given by:
 - (a) $u = k_1y$.
 - (b) $u = k_2y^2$.
 - (c) $u = k_3(\delta y - y^2)$.

In each case, express your answer in terms of the maximum velocity U_m .

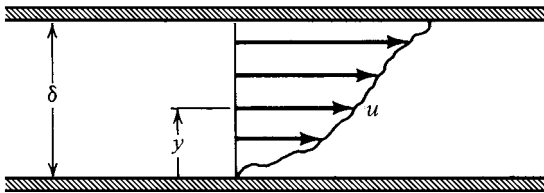
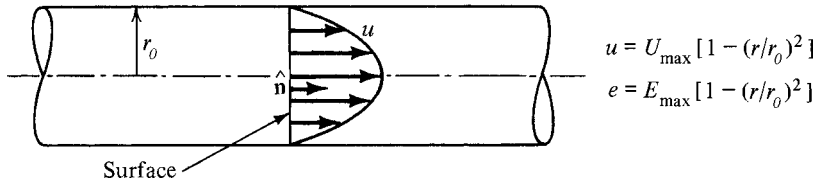


Figure 2.P2

- 2.3. An incompressible fluid is flowing in a rectangular duct whose dimensions are 2 units in the Y -direction and 1 unit in the Z -direction. The velocity in the X -direction is given by the equation $u = 3y^2 + 5z$. Compute the average velocity.
- 2.4. Evaluate the integral $\int \rho e(\mathbf{V} \cdot \hat{n}) dA$ over the surface shown in Figure P2.4 for the velocity and energy distributions indicated. Assume that the density is constant.


Figure P2.4

- 2.5. In a 10-in.-diameter duct the average velocity of water is 14 ft/sec.
- What is the average velocity if the diameter changes to 6 in.?
 - Express the average velocity in terms of an arbitrary diameter.
- 2.6. Nitrogen flows in a constant-area duct. Conditions at section 1 are as follows: $p_1 = 200$ psia, $T_1 = 90^\circ\text{F}$, and $V_1 = 10$ ft/sec. At section 2, we find that $p_2 = 45$ psia and $T_2 = 90^\circ\text{F}$. Determine the velocity at section 2.
- 2.7. Steam enters a turbine with an enthalpy of 1600 Btu/lbm and a velocity of 100 ft/sec at a flow rate of 80,000 lbm/hr. The steam leaves the turbine with an enthalpy of 995 Btu/lbm and a velocity of 150 ft/sec. Compute the power output of the turbine, assuming it to be 100% efficient. Neglect any heat transfer and potential energy changes.
- 2.8. A flow of 2.0 lbm/sec of air is compressed from 14.7 psia and 60°F to 200 psia and 150°F . Cooling water circulates around the cylinders at the rate of 25 lbm/min. The water enters at 45°F and leaves at 130°F . (The specific heat of water is 1.0 Btu/lbm- $^\circ\text{F}$.) Calculate the power required to compress the air, assuming negligible velocities at inlet and outlet.
- 2.9. Hydrogen expands isentropically from 15 bar absolute and 340 K to 3 bar absolute in a steady flow process without heat transfer.
- Compute the final velocity if the initial velocity is negligible.
 - Compute the flow rate if the final duct size is 10 cm in diameter.
- 2.10. At a section where the diameter is 4 in., methane flows with a velocity of 50 ft/sec and a pressure of 85 psia. At a downstream section, where the diameter has increased to 6 in., the pressure is 45 psia. Assuming the flow to be isothermal, compute the heat transfer between the two locations.
- 2.11. Carbon dioxide flows in a horizontal duct at 7 bar abs. and 300 K with a velocity of 10 m/s. At a downstream location the pressure is 3.5 bar abs. and the temperature is 280 K. If 1.4×10^4 J/kg of heat is lost by the fluid between these locations:
- Determine the velocity at the second location.
 - Compute the ratio of initial to final areas.
- 2.12. Hydrogen flows through a horizontal insulated duct. At section 1 the enthalpy is 2400 Btu/lbm, the density is 0.5 lbm/ft³, and the velocity is 500 ft/sec. At a downstream section, $h_2 = 2240$ Btu/lbm and $\rho_2 = 0.1$ lbm/ft³. No shaft work is done. Determine the velocity at section 2 and the ratio of areas.
- 2.13. Nitrogen, traveling at 12 m/s with a pressure of 14 bar abs. at a temperature of 800 K, enters a device with an area of 0.05 m². No work or heat transfer takes place. The

temperature at the exit, where the area is 0.15 m^2 , has dropped to 590 K . What are the velocity and pressure at the outlet section?

2.14. Cold water with an enthalpy of 8 Btu/lbm enters a heater at the rate of 5 lbm/sec with a velocity of 10 ft/sec and at a potential of 10 ft with respect to the other connections shown in Figure P2.14. Steam enters at the rate of 1 lbm/sec with a velocity of 50 ft/sec and an enthalpy of 1350 Btu/lbm . These two streams mix in the heater, and hot water emerges with an enthalpy of 168 Btu/lbm and a velocity of 12 ft/sec .

- (a) Determine the heat lost from the apparatus.
- (b) What percentage error is involved if both kinetic and potential energy changes are neglected?

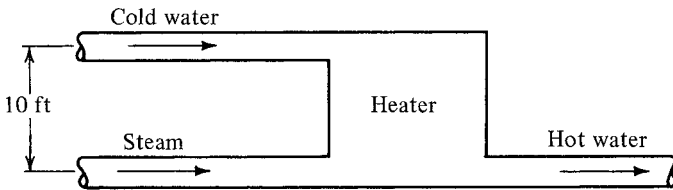


Figure P2.14

2.15. The control volume shown in Figure P2.15 has steady, incompressible flow and all properties are uniform at the inlet and outlet. For $u_1 = 1.256 \text{ MJ/kg}$ and $u_2 = 1.340 \text{ MJ/kg}$ and $\rho = 10 \text{ kg/m}^3$, calculate the work if there is a heat output of 0.35 MJ/kg .

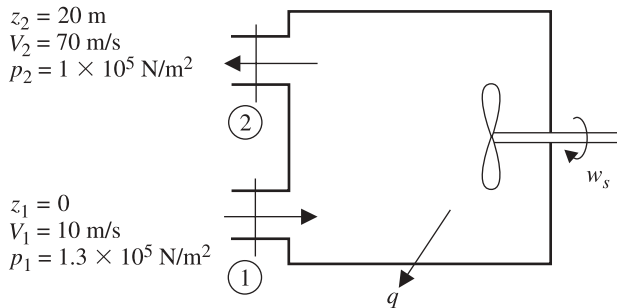


Figure P2.15

CHECK TEST

You should be able to complete this test without reference to material in the chapter.

- 2.1. Name the basic concepts (or equations) from which the study of gas dynamics proceeds.
- 2.2. Define *steady flow*. Explain what is meant by *one-dimensional flow*.

- 2.3. An incompressible fluid flows in a duct of radius r_0 . At a particular location, the velocity distribution is $u = U_m[1 - (r/r_0)^2]$ and the distribution of an extensive property is $\beta = B_m[1 - (r/r_0)]$. Evaluate the integral $\int \rho\beta(\mathbf{V} \cdot \hat{n}) dA$ at this location.
- 2.4. Write the equation used to relate the material derivative of any mass-dependent property to the properties inside, and crossing the boundaries of, a control volume. State in words what the integrals actually represent.
- 2.5. Simplify the integral $\int_{cs} \rho\beta(\mathbf{V} \cdot \hat{n}) dA$ for the control volume shown in Figure CT2.5 if the flow is steady and one-dimensional. (*Careful: β and ρ may vary from section to section.*)

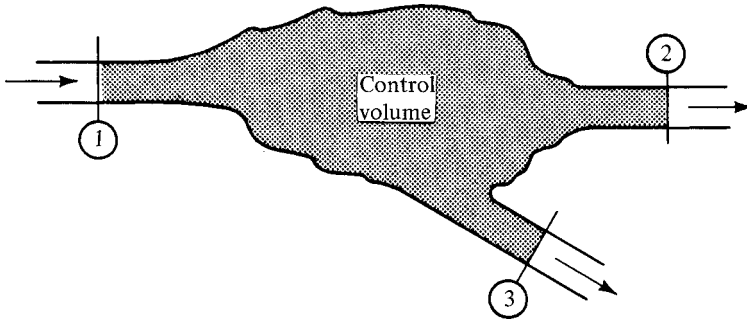


Figure CT2.5

- 2.6. Write the simplest form of the energy equation that you would use to analyze the control volume shown in Figure CT2.6. You may assume steady one-dimensional flow.

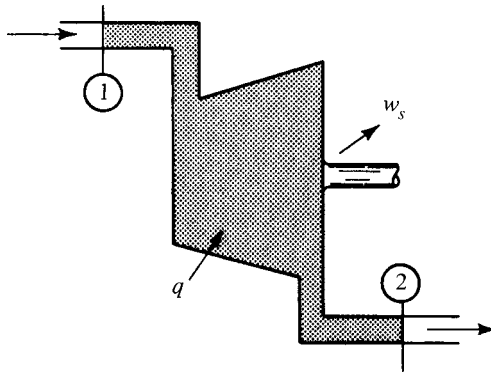


Figure CT2.6

- 2.7. Work Problem 2.13.

Chapter 3

Control Volume Analysis—Part II

3.1 INTRODUCTION

We begin this chapter with a discussion of entropy, which is one of the most useful thermodynamic properties in the study of gas dynamics. Entropy changes will be divided into two categories, to facilitate a better understanding of this important property. Next, we introduce the concept of a *stagnation* process. This leads to the *stagnation state* as a reference condition, which will be used throughout our remaining discussions. These ideas permit rewriting our energy equations in alternative forms from which interesting observations can be made.

We then investigate some of the consequences of a constant-density fluid. This leads to special relations that can be used not only for liquids but under certain conditions are excellent approximations for gases. At the close of the chapter we complete our basic set of equations by transforming Newton's second law for use in the analysis of control volumes. This is done for both finite and differential volume elements.

3.2 OBJECTIVES

After completing this chapter successfully, you should be able to:

1. Explain how entropy changes can be divided into two categories. Define and interpret each part.
2. Define an isentropic process and explain the relationships among reversible, adiabatic, and isentropic processes.
3. (*Optional*) Show that by introducing the concept of entropy and the definition of enthalpy, the path function heat (δQ) may be removed from the energy equation to yield an expression called the *pressure–energy equation*:

$$\frac{dp}{\rho} + \frac{dV^2}{2g_c} + \frac{g}{g_c} dz + T ds_i + \delta w_s = 0$$

4. (*Optional*) Simplify the pressure–energy equation to obtain Bernoulli’s equation. Note all assumptions or restrictions that apply to Bernoulli’s equation.
5. Explain the *stagnation state concept* and the difference between *static and stagnation properties*.
6. Define stagnation enthalpy by an equation that is valid for *any* fluid.
7. Draw an h – s diagram representing a flow system and indicate *static and stagnation points* for an arbitrary section.
8. (*Optional*) Introduce the stagnation concept into the energy equation and derive the *stagnation pressure–energy* equation:

$$\frac{dp_t}{\rho_t} + ds_e(T_t - T) + T_t ds_i + \delta w_s = 0$$

9. Demonstrate the ability to apply continuity and energy concepts to the solution of typical flow problems with constant-density fluids.
10. (*Optional*) Given the basic concept or equation that is valid for a control mass, obtain the integral form of the momentum equation for a control volume.
11. Simplify the integral form of the momentum equation for a control volume for the conditions of steady one-dimensional flow.
12. Demonstrate the ability to apply momentum concepts in the analysis of control volumes.

3.3 COMMENTS ON ENTROPY

In Section 1.4 entropy changes were defined in the usual manner in terms of reversible processes:

$$\Delta S \equiv \int \frac{\delta Q_R}{T} \quad (1.38)$$

The term δQ_R is related to a fictitious reversible process (a rare happening indeed), and consequently, it may not represent the total entropy change in the process under consideration. It would seem more appropriate to work with the *actual* heat transfer for the irreversible process. To accomplish this it is necessary to divide the entropy changes of any system into two categories. We shall follow the notation of Hall (Ref. 15). Let

$$dS \equiv dS_e + dS_i \quad (3.1)$$

The term dS_e represents that portion of entropy change caused by the actual heat transfer between the system and its (external) surroundings. It can be evaluated readily from

$$dS_e = \frac{\delta Q}{T} \quad (3.2)$$

One should note that dS_e can be either positive or negative, depending on the direction of heat transfer. If heat is removed from a system, δQ is negative and thus dS_e will be negative. Obviously, $dS_e = 0$ for an adiabatic process.

The term dS_i represents that portion of entropy change caused by *irreversible* effects. Moreover, dS_i effects are internal in nature, such as temperature and pressure gradients within the system as well as friction along the internal boundaries of the system. Note that this term depends on the process path and from observations we know that *all irreversibilities generate entropy* (i.e., cause the entropy of the system to increase). Thus we could say that $dS_i \geq 0$. Obviously, $dS_i = 0$ only for a reversible process.

Recall that an isentropic process is one of constant entropy. This is also represented by $dS = 0$. The equation

$$dS = dS_e + dS_i \quad (3.1)$$

confirms the well-known fact that a reversible-adiabatic process is also isentropic. It also clearly shows that the converse is not necessarily true; an isentropic process does not have to be reversible and adiabatic. If isentropic, we merely know that

$$dS = 0 = dS_e + dS_i \quad (3.3)$$

If an isentropic process is known to contain irreversibilities, what can be said about the direction of heat transfer? Note that dS_e and dS_i are unusual mathematical quantities and perhaps require a symbol other than the common one used for an exact differential. But in this book we continue with the notation of equation (3.1) because it is the most commonly used.

Another familiar relation can be developed by taking the cyclic integral of equation (3.1):

$$\oint dS = \oint dS_e + \oint dS_i \quad (3.4)$$

Since a cyclic integral must be taken around a closed path and entropy (S) is a property,

$$\oint dS = 0 \quad (3.5)$$

We know that irreversible effects always generate entropy, so

$$\oint dS_i \geq 0 \quad (3.6)$$

with the equal sign holding only for a reversible cycle.

Thus

$$0 = \oint dS_e + (\geq 0) \quad (3.7)$$

and since

$$dS_e = \frac{\delta Q}{T} \quad (3.2)$$

then

$$\oint \frac{\delta Q}{T} \leq 0 \quad (3.8)$$

which is the *inequality of Clausius*.

The expressions above can be written for a unit mass, in which case we have

$$ds = ds_e + ds_i \quad (3.9)$$

$$ds_e = \frac{\delta q}{T} \quad (3.10)$$

3.4 PRESSURE-ENERGY EQUATION

We are now ready to develop a very useful equation. Starting with the thermodynamic property relation

$$T ds = dh - v dp \quad (1.41)$$

we introduce $ds = ds_e + ds_i$ and $v = 1/\rho$, to obtain

$$T ds_e + T ds_i = dh - \frac{dp}{\rho}$$

or

$$dh = T ds_e + T ds_i + \frac{dp}{\rho} \quad (3.11)$$

Recalling the energy equation from Section 2.6,

$$\delta q = \delta w_s + dh + \frac{dV^2}{2g_c} + \frac{g}{g_c} dz \quad (2.53)$$

we now substitute for dh from (3.11) and obtain

$$\delta \dot{q} = \delta w_s + \left(T \cancel{ds_e} + T ds_i + \frac{dp}{\rho} \right) + \frac{dV^2}{2g_c} + \frac{g}{g_c} dz \quad (3.12)$$

Recognize [from Eq. (3.10)] that $\delta q = T ds_e$ and we obtain a form of the energy equation which is often called the *pressure–energy equation*:

$$\boxed{\frac{dp}{\rho} + \frac{dV^2}{2g_c} + \frac{g}{g_c} dz + \delta w_s + T ds_i = 0} \quad (3.13)$$

Notice that even though the heat term (δq) does *not* appear in this equation, it is still applicable to cases that involve heat transfer.

Equation (3.13) can readily be simplified for special cases. For instance, if no shaft work crosses the boundary ($\delta w_s = 0$) and if there are no losses ($ds_i = 0$), then

$$\frac{dp}{\rho} + \frac{dV^2}{2g_c} + \frac{g}{g_c} dz = 0 \quad (3.14)$$

This is called *Euler's equation* and can be integrated only if we know the functional relationship that exists between the pressure and density.

Example 3.1 Integrate Euler's equation for the case of isothermal flow of a perfect gas.

$$\int_1^2 \frac{dp}{\rho} + \int_1^2 \frac{dV^2}{2g_c} + \int_1^2 \frac{g}{g_c} dz = 0$$

For isothermal flow, $pv = \text{const}$ or $p/\rho = c$. Thus

$$\int_1^2 \frac{dp}{\rho} = c \int_1^2 \frac{dp}{p} = c \ln \frac{p_2}{p_1} = \frac{p}{\rho} \ln \frac{p_2}{p_1} = RT \ln \frac{p_2}{p_1}$$

and

$$RT \ln \frac{p_2}{p_1} + \frac{V_2^2 - V_1^2}{2g_c} + \frac{g}{g_c} (z_2 - z_1) = 0$$

The special case of incompressible fluids is considered in Section 3.7.

3.5 THE STAGNATION CONCEPT

When we speak of the thermodynamic state of a flowing fluid and mention its properties (e.g., temperature, pressure), there may be some question as to what these properties actually represent or how they can be measured. Imagine that you have been

miniaturized and put aboard a small submarine that is drifting along *with the fluid*. (An alternative might be to “saddle-up” a small fluid particle and take a ride.) If you had a thermometer and pressure gage with you, they would indicate the temperature and pressure corresponding to the *static* state of the fluid, although the word *static* is usually omitted. Thus *the static properties are those that would be measured if you moved with the fluid*.

It is convenient to introduce the concept of a *stagnation state*. This is a reference state defined as that thermodynamic state which would exist if the fluid were brought to zero velocity and zero potential. To yield a consistent reference state, we must qualify how this *stagnation process* should be accomplished. The stagnation state must be reached

- (1) without any energy exchange ($Q = W = 0$) and
- (2) without losses.

By virtue of (1), $ds_e = 0$; and from (2), $ds_i = 0$. Thus *the stagnation process is isentropic!*

We can imagine the following example of actually carrying out the stagnation process. Consider fluid that is flowing and has the static properties shown as (a) in Figure 3.1. At location (b) the fluid has been brought to zero velocity and zero potential under the foregoing restrictions. If we apply the energy equation to the control volume indicated for steady one-dimensional flow, we have

$$h_a + \frac{V_a^2}{2g_c} + \frac{g}{g_c} z_a + \cancel{q} = h_b + \frac{V_b^2}{2g_c} + \frac{g}{g_c} z_b + \cancel{w_s} \quad (2.49)$$

which simplifies to

$$h_a + \frac{V_a^2}{2g_c} + \frac{g}{g_c} z_a = h_b \quad (3.15)$$

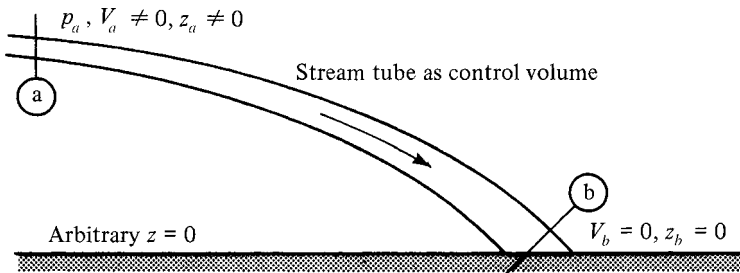


Figure 3.1 Stagnation process.

But condition (b) represents the *stagnation state* corresponding to the *static state* (a). Thus we call h_b the *stagnation* or *total enthalpy* corresponding to state (a) and designate it as h_{ta} . Thus

$$h_{ta} = h_a + \frac{V_a^2}{2g_c} + \frac{g}{g_c} z_a \quad (3.16)$$

Or for any state, we have in general,

$$h_t = h + \frac{V^2}{2g_c} + \frac{g}{g_c} z \quad (3.17)$$

This is an important relation that is *always* valid. *Learn it!* When dealing with gases, potential changes are usually neglected, and we write

$$h_t = h + \frac{V^2}{2g_c} \quad (3.18)$$

Example 3.2 Nitrogen at 500°R is flowing at 1800 ft/sec. What are the static and stagnation enthalpies?

$$h = c_p T = (0.248)(500) = 124 \text{ Btu/lbm}$$

$$\frac{V^2}{2g_c} = \frac{(1800)^2}{(2)(32.2)(778)} = 64.7 \text{ Btu/lbm}$$

$$h_t = h + \frac{V^2}{2g_c} = 124 + 64.7 = 188.7 \text{ Btu/lbm}$$

Introduction of the stagnation (or total) enthalpy makes it possible to write equations in a more compact form. For example, the one-dimensional steady-flow energy equation

$$h_1 + \frac{V_1^2}{2g_c} + \frac{g}{g_c} z_1 + q = h_2 + \frac{V_2^2}{2g_c} + \frac{g}{g_c} z_2 + w_s \quad (2.49)$$

becomes

$$h_{t1} + q = h_{t2} + w_s \quad (3.19)$$

and

$$\delta q = \delta w_s + dh + \frac{dV^2}{2g_c} + \frac{g}{g_c} dz \quad (2.53)$$

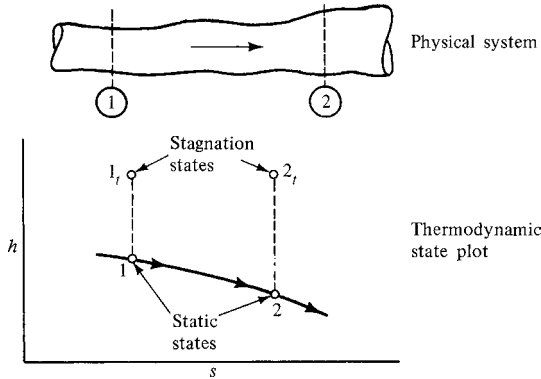


Figure 3.2 h - s diagram showing static and stagnation states.

becomes

$$\delta q = \delta w_s + dh_t \tag{3.20}$$

Equation (3.19) [or (3.20)] shows that in any adiabatic no-work steady one-dimensional flow system, the stagnation enthalpy remains constant, *irrespective of the losses*. What else can be said if the fluid is a perfect gas?

You should note that the stagnation state is a *reference* state that may or may not actually exist in the flow system. Also, in general, each point in a flow system may have a different stagnation state, as shown in Figure 3.2. Remember that although the hypothetical process from 1 to 1_t must be reversible and adiabatic (as well as the process from 2 to 2_t), this in *no* way restricts the actual process that exists in the flow system between 1 and 2.

Also, one must realize that when the frame of reference is changed, stagnation conditions change, although the static conditions remain the same. (Recall that static properties are defined as those that would be measured if the measuring devices move with the fluid.) Consider still air with Earth as a reference frame (see Figure 3.3). In this case, since the velocity is zero (with respect to the frame of reference), the static and stagnation conditions are the same.

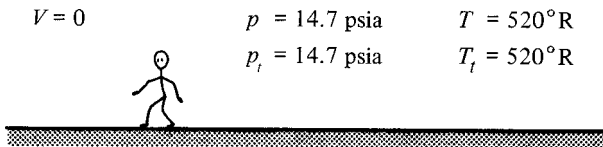


Figure 3.3 Earth as a frame of reference.




Figure 3.4 Missile as a frame of reference.

Now let's change the frame of reference by flying through this same air on a missile at 600 ft/sec (see Figure 3.4). As we look forward it appears that the air is coming at us at 600 ft/sec. The *static* pressure and temperature of the air remain *unchanged* at 14.7 psia and 520°R, respectively. However, in this case, the air has a velocity (with respect to the frame of reference) and thus the stagnation conditions are different from the static conditions. You should always remember that the stagnation reference state is completely dependent on the frame of reference used for velocities. (Changing the arbitrary $z = 0$ reference would also affect the stagnation conditions, but we shall not become involved with this situation.) You will soon learn how to compute stagnation properties other than enthalpy. Incidentally, is there any place in this system where the stagnation conditions *actually* exist? Is the fluid brought to rest any place?

3.6 STAGNATION PRESSURE–ENERGY EQUATION

Consider the two section locations on the physical system shown in Figure 3.2. If we let the distance between these locations approach zero, we are dealing with an infinitesimal control volume with the thermodynamic states differentially separated, as shown in Figure 3.5. Also shown are the corresponding stagnation states for these two locations.

We may write the following property relation between points 1 and 2:

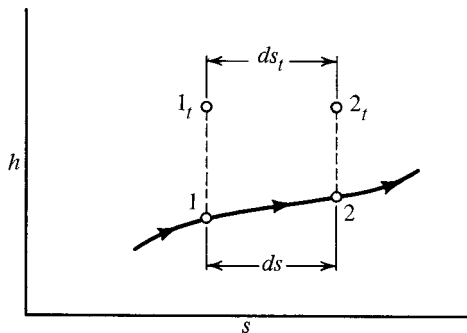


Figure 3.5 Infinitesimally separated static states with associated stagnation states.

$$T ds = dh - v dp \quad (1.41)$$

Note that even though the stagnation states do not actually exist, they represent legitimate thermodynamic states, and thus any valid property relation or equation may be applied to these points. Thus we may also apply equation (1.41) between states 1_t and 2_t :

$$T_t ds_t = dh_t - v_t dp_t \quad (3.21)$$

However,

$$ds_t = ds \quad (3.22)$$

and

$$ds = ds_e + ds_i \quad (3.9)$$

Thus we may write

$$T_t(ds_e + ds_i) = dh_t - v_t dp_t \quad (3.23)$$

Recall the energy equation written in the form

$$\delta q = \delta w_s + dh_t \quad (3.20)$$

By substituting dh_t from equation (3.23) into (3.20), we obtain

$$\delta q = \delta w_s + T_t(ds_e + ds_i) + v_t dp_t \quad (3.24)$$

Now also recall that

$$\delta q = T ds_e \quad (3.10)$$

Substitute equation (3.10) into (3.24) and note that $v_t = 1/\rho_t$ [from (1.5)] and you should obtain the following equation, called the *stagnation pressure–energy equation*:

$$\boxed{\frac{dp_t}{\rho_t} + ds_e(T_t - T) + T_t ds_i + \delta w_s = 0} \quad (3.25)$$

Consider what happens under the following assumptions:

- (a) There is no shaft work $\rightarrow \delta w_s = 0$

- (b) There is no heat transfer $\rightarrow ds_e = 0$
 (c) There are no losses $\rightarrow ds_i = 0$

Under these conditions, equation (3.25) becomes

$$\frac{dp_t}{\rho_t} = 0 \quad (3.26)$$

and since ρ_t cannot be infinite,

$$dp_t = 0$$

or

$$p_t = \text{constant} \quad (3.27)$$

Note that, in general, the total pressure will *not* remain constant; only under a special set of circumstances will equation (3.27) hold true. What are these circumstances?

Many flow systems are adiabatic and contain no shaft work. For these systems,

$$\frac{dp_t}{\rho_t} + T_i ds_i = 0 \quad (3.28)$$

and the losses are clearly reflected by a change in stagnation pressure. Will the stagnation pressure increase or decrease if there are losses in this system? This point will be discussed many times as we examine various flow systems in the remainder of the book.

3.7 CONSEQUENCES OF CONSTANT DENSITY

The density of a liquid is nearly constant and in Chapter 4 we shall see that under certain circumstances, gases change their density very little. Thus it will be interesting to see the form that some of our equations take for the limiting case of constant density.

Energy Relations

We start with the pressure–energy equation

$$\frac{dp}{\rho} + \frac{dV^2}{2g_c} + \frac{g}{g_c} dz + \delta w_s + T ds_i = 0 \quad (3.13)$$

If $\rho = \text{const}$, we can easily integrate (3.13) between points 1 and 2 of a flow system:

$$\frac{p_2 - p_1}{\rho} + \frac{V_2^2 - V_1^2}{2g_c} + \frac{g}{g_c}(z_2 - z_1) + w_s + \int_1^2 T ds_i = 0$$

or

$$\frac{p_1}{\rho} + \frac{V_1^2}{2g_c} + \frac{g}{g_c} z_1 = \frac{p_2}{\rho} + \frac{V_2^2}{2g_c} + \frac{g}{g_c} z_2 + \int_1^2 T ds_i + w_s \quad (3.29)$$

Compare (3.29) to another form of the energy equation (2.48) and *show* that

$$\int_1^2 T ds_i = u_2 - u_1 - q \quad (3.30)$$

Does this result seem reasonable? To determine this, let us examine two extreme cases for the flow of a constant-density fluid. For the first case, assume that the system is perfectly insulated. Since the integral of $T ds_i$ is a positive quantity, equation (3.30) shows that the losses (i.e., irreversible effects) will cause an increase in internal energy, which means a temperature increase. Now consider an isothermal system. For this case, how will the losses manifest themselves?

For the flow of a constant-density fluid, “losses” must appear in some combination of the two forms described above. In either case, mechanical energy has been degraded into a less useful form—thermal energy. Thus, when dealing with constant-density fluids, we normally use a single loss term and generally refer to it as a *head loss* or *friction loss*, using the symbol h_ℓ or h_f in place of $\int T ds_i$. If you have studied fluid mechanics, you have undoubtedly used equation (3.29) in the form

$$\boxed{\frac{p_1}{\rho} + \frac{V_1^2}{2g_c} + \frac{g}{g_c} z_1 = \frac{p_2}{\rho} + \frac{V_2^2}{2g_c} + \frac{g}{g_c} z_2 + h_\ell + w_s} \quad (3.31)$$

How many restrictions and/or assumptions are embodied in equation (3.31)?

Example 3.3 A turbine extracts 300 ft-lbf/lbm of water flowing (Figure E3.3). Frictional losses amount to $8V_p^2/2g_c$, where V_p is the velocity in a 2-ft-diameter pipe. Compute the power output of the turbine if it is 100% efficient and the available potential is 350 ft.

$$\begin{aligned} p_1 &= p_{\text{atm}} & p_2 &= p_{\text{atm}} & w_s &= 300 \text{ ft-lbf/lbm} \\ V_1 &\approx 0 & V_2 &\approx 0 & h_\ell &= 8V_p^2/2g_c \\ z_1 &= 350 \text{ ft} & z_2 &= 0 \end{aligned}$$

Note how the sections are chosen to make application of the energy equation easy.

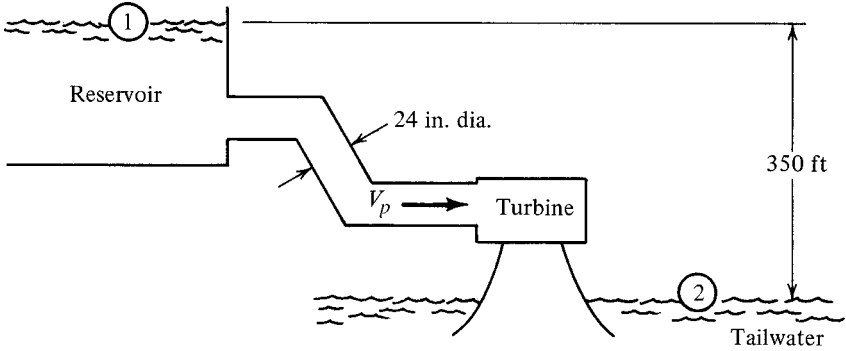


Figure E3.3

Energy:

$$\frac{p_1}{\rho} + \frac{V_1^2}{2g_c} + \frac{g}{g_c} z_1 = \frac{p_2}{\rho} + \frac{V_2^2}{2g_c} + \frac{g}{g_c} z_2 + h_\ell + w_s$$

$$\left(\frac{32.2}{32.2} \right) (350) = \frac{8V_p^2}{2g_c} + 300$$

$$V_p^2 = \frac{2g_c(350 - 300)}{8} = 402.5$$

$$V_p = 20.1 \text{ ft/sec}$$

Flow rate:

$$\dot{m} = \rho AV = 62.4(\pi)20.1 = 3940 \text{ lbm/sec}$$

Power:

$$\text{hp} = \frac{\dot{m} w_s}{550} = \frac{(3940)(300)}{550} = 2150 \text{ hp}$$

We can further restrict the flow to one in which no shaft work and no losses occur. In this case, equation (3.31) simplifies to

$$\frac{p_1}{\rho} + \frac{V_1^2}{2g_c} + \frac{g}{g_c} z_1 = \frac{p_2}{\rho} + \frac{V_2^2}{2g_c} + \frac{g}{g_c} z_2$$

or

$$\frac{p}{\rho} + \frac{V^2}{2g_c} + \frac{g}{g_c} z = \text{const}$$

(3.32)

This is called *Bernoulli's equation* and could also have been obtained by integrating Euler's equation (3.14) for a constant-density fluid. How many assumptions have been made to arrive at Bernoulli's equation?

Example 3.4 Water flows in a 6-in.-diameter duct with a velocity of 15 ft/sec. Within a short distance the duct converges to 3 in. in diameter. Find the pressure change if there are no losses between these two sections.

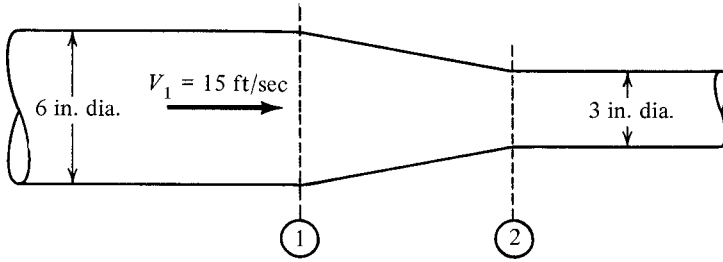


Figure E3.4

Bernoulli:

$$\frac{p_1}{\rho} + \frac{V_1^2}{2g_c} + \frac{g}{g_c} z_1 = \frac{p_2}{\rho} + \frac{V_2^2}{2g_c} + \frac{g}{g_c} z_2$$

$$p_1 - p_2 = \frac{\rho}{2g_c} (V_2^2 - V_1^2)$$

Continuity:

$$\rho_1 A_1 V_1 = \rho_2 A_2 V_2$$

$$V_2 = V_1 \frac{A_1}{A_2} = V_1 \left(\frac{D_1}{D_2} \right)^2 = (15) \left(\frac{6}{3} \right)^2 = 60 \text{ ft/sec}$$

Thus:

$$p_1 - p_2 = \frac{62.4}{(2)(32.2)} (60^2 - 15^2) = 3270 \text{ lbf/ft}^2 = 22.7 \text{ lbf/in}^2$$

Stagnation Relations

We start by considering the property relation

$$T ds = du + p dv \quad (1.40)$$

If $\rho = \text{const}$, $dv = 0$, then

$$T ds = du \quad (3.33)$$

Note that for a process in which $ds = 0$, $du = 0$. We also have, by definition,

$$c_v = \left(\frac{\partial u}{\partial T} \right)_v \quad (1.37)$$

But for a constant-density fluid *every* process is one in which $v = \text{const}$. Thus for these fluids, we can drop the partial notation and write equation (1.37) as

$$c_v = \frac{du}{dT} \quad \text{or} \quad du = c_v dT \quad (3.34)$$

Note that for a process in which $du = 0$, $dT = 0$.

We now consider the stagnation process, which by virtue of its definition is isentropic, or $ds = 0$. From (3.33) we see that the internal energy does not change during the stagnation process.

$$u = u_t \quad \text{for } \rho = \text{const} \quad (3.35)$$

From (3.34) it must then be that the temperature also does not change during the stagnation process.

$$T = T_t \quad \text{for } \rho = \text{const} \quad (3.36)$$

Summarizing the above, we have shown that *for a constant-density fluid* the stagnation process is not only one of constant entropy but also one of constant temperature and internal energy. Let us continue and discover some other interesting relations.

From

$$h = u + pv \quad (1.34)$$

we have

$$dh = du + v dp + p \cancel{dv} \quad (3.37)$$

Let us integrate equation (3.37) between the static and stagnation states:

$$h_t - h = (u_t \cancel{-u}) + v(p_t - p) \quad (3.38)$$

But we know that

$$h_t = h + \frac{V^2}{2g_c} + \frac{g}{g_c} z \quad (3.17)$$

Combining these last two equations yields

$$\left(h + \frac{V^2}{2g_c} + \frac{g}{g_c}z \right) - h = v(p_t - p)$$

which becomes

$$\boxed{p_t = p + \frac{\rho V^2}{2g_c} + \rho \frac{g}{g_c}z} \quad (3.39)$$

This equation may also be familiar to those of you who have studied fluid mechanics. It is imperative to note that this relation between static and stagnation pressures is *valid only for a constant-density fluid*. In Section 4.5 we develop the corresponding relation for perfect gases.

Example 3.5 Water is flowing at a velocity of 20 m/s and has a pressure of 4 bar abs. What is the total pressure?

$$\begin{aligned} p_t &= p + \frac{\rho V^2}{2g_c} + \rho \frac{g}{g_c}z \\ p_t &= 4 \times 10^5 + \frac{(10^3)(20)^2}{(2)(1)} = 4 \times 10^5 + 2 \times 10^5 \\ p_t &= 6 \times 10^5 \text{ N/m}^2 \text{ abs.} \end{aligned}$$

In many problems you will be confronted by flow exiting a pipe or duct. To solve this type of problem, you must know the pressure at the duct exit. The flow will adjust itself so that *the pressure at the duct exit exactly matches that of the surrounding ambient pressure* (which may or may not be the atmospheric pressure). In Section 5.7 you will find that this is *true only for subsonic flow*; but since the sonic velocity in liquids is so great, you will always be dealing with subsonic flow in these cases.

3.8 MOMENTUM EQUATION

If we observe the motion of a given quantity of mass, Newton's second law tells us that its linear momentum will be changed in direct proportion to the applied forces. This is expressed by the following equation:

$$\boxed{\sum \mathbf{F} = \frac{1}{g_c} \frac{d(\overrightarrow{\text{momentum}})}{dt}} \quad (1.2)$$

We could write a similar expression relating torque and angular momentum, but we shall confine our discussion to linear momentum. Note that equation (1.2) is a vector relation and must be treated as such or we must carefully work with components of the equation. In nearly all fluid flow problems, unbalanced forces exist and thus the momentum of the system being analyzed does not remain constant. Thus we shall carefully avoid listing this as a conservation law.

Again, the question is: What corresponding expression can we write for a control volume? We note that the term on the right side of equation (1.2) is a material derivative and must be transformed according to the relation developed in Section 2.4. If we let \mathbf{N} be the linear momentum of the system, η represents the momentum per unit mass, which is \mathbf{V} . Substitution into equation (2.22) yields

$$\frac{d(\overrightarrow{\text{momentum}})}{dt} = \frac{\partial}{\partial t} \int_{cv} \mathbf{V} \rho d\tilde{v} + \int_{cs} \mathbf{V} \rho (\mathbf{V} \cdot \hat{n}) dA \quad (3.40)$$

and the transformed equation which is applicable to a control volume is

$$\boxed{\sum \mathbf{F} = \frac{1}{g_c} \frac{\partial}{\partial t} \int_{cv} \mathbf{V} \rho d\tilde{v} + \frac{1}{g_c} \int_{cs} \mathbf{V} \rho (\mathbf{V} \cdot \hat{n}) dA} \quad (3.41)$$

This equation is usually called the *momentum* or *momentum flux equation*. The $\sum \mathbf{F}$ represents the summation of all forces *on the fluid within the control volume*. What do the other terms represent? [See the discussion following equation (2.22).]

In the solution of actual problems, one normally works with the components of the momentum equation. In fact, frequently, only one component is required for the solution of a problem. The x -component of this equation would appear as

$$\sum F_x = \frac{1}{g_c} \frac{\partial}{\partial t} \int_{cv} V_x \rho d\tilde{v} + \frac{1}{g_c} \int_{cs} V_x \rho (\mathbf{V} \cdot \hat{n}) dA \quad (3.42)$$

Note carefully how the last term is written.

In the event that one-dimensional flow exists, the last integral in equation (3.41) is easy to evaluate, as ρ and \mathbf{V} are constant over any given cross section. If we choose the surface A perpendicular to the velocity, then

$$\int_{cs} \mathbf{V} \rho (\mathbf{V} \cdot \hat{n}) dA = \sum \mathbf{V} \rho V \int dA = \sum \mathbf{V} \rho VA = \sum \dot{m} \mathbf{V} \quad (3.43)$$

The summation is taken over all sections where fluid crosses the control surface and is positive where fluid leaves the control volume and negative where fluid enters the control volume. (Recall how \hat{n} was chosen.)

If we now consider steady flow, the term involving the partial derivative with respect to time is zero. Thus for steady one-dimensional flow, the momentum equation for a control volume becomes

$$\sum \mathbf{F} = \frac{1}{g_c} \sum \dot{m} \mathbf{V} \quad (3.44)$$

If there is only one section where fluid enters and one section where fluid leaves the control volume, we know (from continuity) that

$$\dot{m}_{\text{in}} = \dot{m}_{\text{out}} = \dot{m} \quad (2.42)$$

and the momentum equation becomes

$$\sum \mathbf{F} = \frac{\dot{m}}{g_c} (\mathbf{V}_{\text{out}} - \mathbf{V}_{\text{in}}) \quad (3.45)$$

This is the form of the equation for a finite control volume.

What assumptions have been fed into this equation? In using this relation one must be sure to:

1. Identify the control volume.
2. Include all forces acting *on the fluid inside* the control volume.
3. Be extremely careful with the signs of all quantities.

Example 3.6 There is a steady one-dimensional flow of air through a 12-in.-diameter horizontal duct (Figure E3.6). At a section where the velocity is 460 ft/sec, the pressure is 50 psia and the temperature is 550°R. At a downstream section the velocity is 880 ft/sec and the pressure is 23.9 psia. Determine the total wall shearing force between these sections.

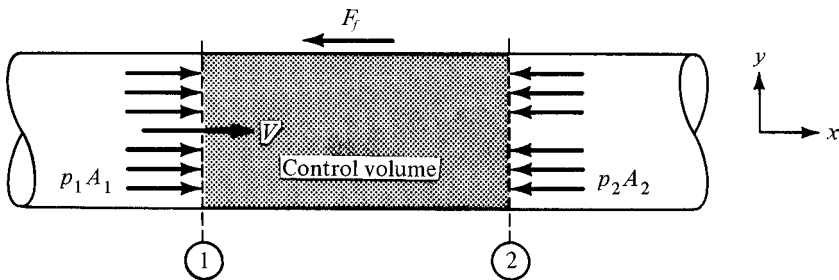


Figure E3.6

$$\begin{aligned}V_1 &= 460 \text{ ft/sec} & V_2 &= 880 \text{ ft/sec} \\p_1 &= 50 \text{ psia} & p_2 &= 23.9 \text{ psia} \\T_1 &= 550^\circ\text{R}\end{aligned}$$

We establish a coordinate system and indicate the forces on the control volume. Let F_f represent the frictional force of the duct on the gas. We write the x -component of equation (3.45):

$$\begin{aligned}F_x &= \frac{\dot{m}}{g_c}(V_{\text{out},x} - V_{\text{in},x}) \\p_1 A_1 - p_2 A_2 - F_f &= \frac{\dot{m}}{g_c}(V_2 - V_1) = \frac{\rho_1 A_1 V_1}{g_c}(V_2 - V_1)\end{aligned}$$

Note that any force in the negative direction must include a minus sign. We divide by $A = A_1 = A_2$:

$$\begin{aligned}p_1 - p_2 - \frac{F_f}{A} &= \frac{\rho_1 V_1}{g_c}(V_2 - V_1) \\\rho_1 &= \frac{p_1}{RT_1} = \frac{(50)(144)}{(53.3)(550)} = 0.246 \text{ lbm/ft}^3 \\(50 - 23.9)(144) - \frac{F_f}{A} &= \frac{(0.246)(460)}{32.2}(880 - 460) \\3758 - \frac{F_f}{A} &= 1476 \\F_f &= (3758 - 1476)\pi(0.5)^2 = 1792 \text{ lbf}\end{aligned}$$

Example 3.7 Water flowing at the rate of $0.05 \text{ m}^3/\text{s}$ has a velocity of 40 m/s . The jet strikes a vane and is deflected 120° (Figure E3.7). Friction along the vane is negligible and the entire system is exposed to the atmosphere. Potential changes can also be neglected. Determine the force necessary to hold the vane stationary.

$$\begin{aligned}p_1 &= p_2 = p_{\text{atmos}} & h_\ell &= 0 \\z_1 &= z_2 & w_s &= 0\end{aligned}$$

Energy:

$$\frac{p_1}{\rho} + \frac{V_1^2}{2g_c} + \frac{g}{g_c} z_1 = \frac{p_2}{\rho} + \frac{V_2^2}{2g_c} + \frac{g}{g_c} z_2 + h_\ell + \psi_s$$

Thus

$$V_1 = V_2$$

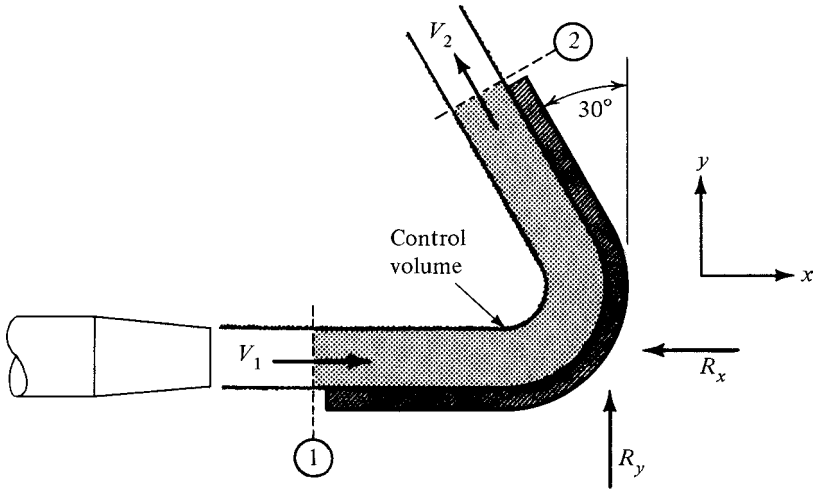


Figure E3.7

We indicate the force components of the vane on the fluid as R_x and R_y and put them on the diagram in assumed directions. (If we have guessed wrong, our answer will turn out to be negative.)

For the x -component:

$$\begin{aligned}\sum F_x &= \frac{\dot{m}}{g_c}(V_{2x} - V_{1x}) \\ -R_x &= \frac{\dot{m}}{g_c}[(-V_2 \sin 30) - V_1] = \frac{\dot{m}V_1}{g_c}(-\sin 30 - 1) \\ -R_x &= \frac{(10^3)(0.05)(40)}{1}(-0.5 - 1) \\ R_x &= 3000 \text{ N}\end{aligned}$$

For the y -component:

$$\begin{aligned}\sum F_y &= \frac{\dot{m}}{g_c}(V_{2y} - V_{1y}) \\ R_y &= \frac{\dot{m}}{g_c}[(V_2 \cos 30) - 0] \\ R_y &= \frac{(10^3)(0.05)(40)}{1}(0.866) \\ R_y &= 1732 \text{ N}\end{aligned}$$

Note that the assumed directions for R_x and R_y were correct since the answers came out positive.

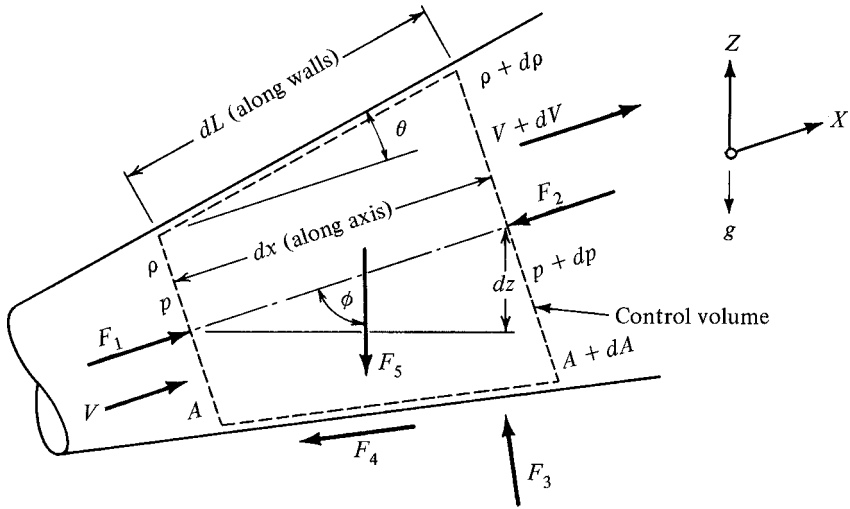


Figure 3.6 Momentum analysis on infinitesimal control volume.

Differential Form of Momentum Equation

As a further example of the meticulous care that must be exercised when utilizing the momentum equation, we apply it to the differential control volume shown in Figure 3.6. Under conditions of steady, one-dimensional flow, the properties of the fluid entering the control volume are designated as ρ , V , p , and so on. Fluid leaves the control volume with slightly different properties, as indicated by $\rho + d\rho$, $V + dV$, and so on. The x -coordinate is chosen as positive in the direction of flow, and the positive z -direction is opposite gravity. (Note that the x and z axes are not necessarily orthogonal.)

Now that the control volume has been identified, we note all forces that act on it. The forces can be divided into two types:

1. *Surface forces.* These act on the control surface and from there indirectly on the fluid. These are either from normal or tangential stress components.
2. *Body forces.* These act directly on the fluid within the control volume. Examples of these are gravity and electromagnetic forces. We shall limit our discussion to gravity forces.

Thus we have

$$F_1 \equiv \text{Upstream pressure force}$$

$$F_2 \equiv \text{Downstream pressure force}$$

$$F_3 \equiv \text{Wall pressure force}$$

$F_4 \equiv$ Wall friction force

$F_5 \equiv$ Gravity force

It should be mentioned that wall forces F_3 and F_4 are usually lumped together into a single force called the *enclosure force* for the reason that it is extremely difficult to account for them separately in most finite control volumes. Fortunately, it is the total enclosure force that is of significance in the solution of these problems. However, in dealing with a differential control volume, it will be more instructive to separate each portion of the enclosure force as we have indicated.

We write the x -component of the momentum equation for steady one-dimensional flow:

$$\sum F_x = \frac{\dot{m}}{g_c}(V_{\text{out}_x} - V_{\text{in}_x}) \quad (3.46)$$

Now we proceed to evaluate the x -component of each force, taking care to indicate whether it is in the positive or negative direction.

$$F_{1x} = F_1 = (\text{pressure})(\text{area})$$

$$F_{1x} = pA \quad (3.47)$$

$$F_{2x} = -F_2 = -(\text{pressure})(\text{area})$$

$$F_{2x} = -(p + dp)(A + dA) = -(pA + p dA + A dp + \overset{\text{HOT}}{dp dA}) \quad (3.48)$$

Neglecting the higher-order term, this becomes

$$F_{2x} = -(pA + p dA + A dp) \quad (3.49)$$

The wall pressure force can be obtained with a mean pressure value:

$$F_{3x} = F_3 \sin \theta = [(\text{mean pressure})(\text{wall area})] \sin \theta$$

but $dA = (\text{wall area}) \sin \theta$; and thus

$$F_{3x} = \left(p + \frac{dp}{2} \right) dA \quad (3.50)$$

The same result could be obtained using principles of basic fluid mechanics, which show that a component of the pressure force can be computed by considering the pressure distribution over the projected area. Expanding and neglecting the higher-order term, we have

$$F_{3x} = p dA \quad (3.51)$$

To compute the wall friction force, we define

$\tau_w \equiv$ the mean shear stress along the wall

$P \equiv$ the mean wetted perimeter

$$F_{4x} = -F_4 \cos \theta = -[(\text{mean shear stress})(\text{wall area})] \cos \theta$$

$$F_{4x} = \tau_w (P dL) \cos \theta \quad (3.52)$$

but $dx = dL \cos \theta$, and thus

$$F_{4x} = -\tau_w P dx \quad (3.53)$$

For the body force we have

$$F_{5x} = -F_5 \cos \phi = -\left[(\text{volume})(\text{mean density}) \frac{g}{g_c} \right] \cos \phi$$

$$F_{5x} = -\left[\left(A + \frac{dA}{2} \right) dx \right] \left(\rho + \frac{d\rho}{2} \right) \frac{g}{g_c} \cos \phi \quad (3.54)$$

But $dx \cos \phi = dz$, and thus

$$F_{5x} = -\left(A + \frac{dA}{2} \right) \left(\rho + \frac{d\rho}{2} \right) \frac{g}{g_c} dz \quad (3.55)$$

Expand this and eliminate all the higher-order terms to show that

$$F_{5x} = -A\rho \frac{g}{g_c} dz \quad (3.56)$$

Summarizing the above, we have

$$\sum F_x = F_{1x} + F_{2x} + F_{3x} + F_{4x} + F_{5x}$$

$$\sum F_x = p\cancel{A} - (p\cancel{A} + p\cancel{dA} + A dp) + p\cancel{dA} - \tau_w P dx - A\rho \frac{g}{g_c} dz$$

$$\sum F_x = -A dp - \tau_w P dx - A\rho \frac{g}{g_c} dz \quad (3.57)$$

We now turn our attention to the right side of equation (3.46). Looking at Figure 3.6, we see that this is

$$\frac{\dot{m}}{g_c} (V_{\text{out}_x} - V_{\text{in}_x}) = \frac{\dot{m}}{g_c} [(V + dV) - V] = \frac{\dot{m}}{g_c} dV \quad (3.58)$$

Combining equations (3.57) and (3.58) yields the x -component of the momentum equation applied to a differential control volume:

$$\sum F_x = \frac{\dot{m}}{g_c} (V_{\text{out},x} - V_{\text{in},x}) \quad (3.46)$$

$$-A dp - \tau_w P dx - A\rho \frac{g}{g_c} dz = \frac{\dot{m}}{g_c} dV = \frac{\rho AV dV}{g_c} \quad (3.59)$$

Equation (3.59) can be put into a more useful form by introducing the concepts of the *friction factor* and *equivalent diameter*.

The *friction factor* (f) relates the average shear stress at the wall (τ_w) to the dynamic pressure in the following manner:

$$f \equiv \frac{4\tau_w}{\rho V^2/2g_c} \quad (3.60)$$

This is the *Darcy–Weisbach friction factor* and is the one we use in this book. Care should be taken when reading literature in this area since some authors use the *Fanning friction factor*, which is only one-fourth as large, due to omission of the factor of 4 in the definition.

Frequently, fluid flows through a noncircular cross section such as a rectangular duct. To handle these problems, an *equivalent diameter* has been devised, which is defined as

$$D_e \equiv \frac{4A}{P} \quad (3.61)$$

where

$A \equiv$ the cross-sectional area

$P \equiv$ the perimeter of the enclosure wetted by the fluid

Note that if equation (3.61) is applied to a circular duct completely filled with fluid, the equivalent diameter is the same as the actual diameter.

Use the definitions given for the friction factor and the equivalent diameter and *show* that equation (3.59) can be rearranged to

$$\frac{dp}{\rho} + f \frac{V^2 dx}{2g_c D_e} + \frac{g}{g_c} dz + \frac{V dV}{g_c} = 0 \quad (3.62)$$

This is a very useful form of the momentum equation (written in the direction of flow) for steady one-dimensional flow through a differential control volume. The last term can be written in an alternative form to yield

$$\frac{dp}{\rho} + f \frac{V^2}{2g_c} \frac{dx}{D_e} + \frac{g}{g_c} dz + \frac{dV^2}{2g_c} = 0 \quad (3.63)$$

We shall use this equation in Chapter 9 when we discuss flow through ducts with friction.

It might be instructive at this time to compare equation (3.63) with equation (3.13). Recall that (3.13) was derived from energy considerations, whereas (3.63) was developed from momentum concepts. A comparison of this nature reinforces our division of entropy concept, for it shows that

$$T ds_i = f \frac{V^2}{2g_c} \frac{dx}{D_e} \quad (3.64)$$

3.9 SUMMARY

We have taken a new look at entropy changes by dividing them into two parts, that caused by heat transfer and that caused by irreversible effects. We then introduced the concept of a stagnation reference state. These two ideas permitted the energy equation to be written in alternative forms called *pressure–energy equations*. Several interesting conclusions were drawn from these equations under appropriate assumptions.

Newton's second law was transformed into a form suitable for control volume analysis. Extreme care should be taken when the momentum equation is used. The following steps should be noted *in addition* to those listed in the summary for Chapter 2:

1. Establish a coordinate system.
2. Indicate all forces acting *on the fluid* inside the control volume.
3. Be especially careful with the signs of vector quantities such as \mathbf{F} and \mathbf{V} .

Some of the most frequently used equations developed in this chapter are summarized below. Most are restricted to steady one-dimensional flow; others involve additional assumptions. You should determine under what conditions each may be used.

1. Entropy division

$$ds = ds_e + ds_i = \frac{\delta q}{T} + ds_i \quad (3.9), (3.10)$$

ds_e is positive or negative (depends on δq);

ds_i is always positive (irreversibilities).

2. Pressure–energy equation

$$\frac{dp}{\rho} + \frac{dV^2}{2g_c} + \frac{g}{g_c} dz + \delta w_s + T ds_i = 0 \quad (3.13)$$

3. Stagnation concept (depends on reference frame)

$$h_t = h + \frac{V^2}{2g_c} + \frac{g}{g_c} z \quad (\text{neglect } z \text{ for gas}) \quad (3.17)$$

$$s_t = s$$

4. Energy equation

$$h_{t1} + q = h_{t2} + w_s \quad (3.19)$$

$$\delta q = \delta w_s + dh_t \quad (3.20)$$

If $q = w_s = 0$, $h_t = \text{const.}$

5. Stagnation pressure–energy equation

$$\frac{dp_t}{\rho_t} + ds_e(T_t - T) + T_t ds_i + \delta w_s = 0 \quad (3.25)$$

If $q = w_s = 0$, and loss = 0, $p_t = \text{const.}$

6. Constant-density fluids

$$\frac{p_1}{\rho} + \frac{V_1^2}{2g_c} + \frac{g}{g_c} z_1 = \frac{p_2}{\rho} + \frac{V_2^2}{2g_c} + \frac{g}{g_c} z_2 + h_\ell + w_s \quad (3.31)$$

$$u = u_t \quad \text{and} \quad T = T_t \quad (3.35), (3.36)$$

$$p_t = p + \frac{\rho V^2}{2g_c} + \rho \frac{g}{g_c} z \quad (3.39)$$

7. Second law of motion—momentum equation $\begin{cases} \mathbf{N} = \overrightarrow{\text{momentum}} \\ \boldsymbol{\eta} = \mathbf{V} \end{cases}$

$$\sum \mathbf{F} = \frac{\partial}{\partial t} \int_{cv} \frac{\rho \mathbf{V}}{g_c} d\tilde{v} + \int_{cs} \frac{\rho \mathbf{V}}{g_c} (\mathbf{V} \cdot \hat{n}) dA \quad (3.41)$$

For steady, one-dimensional flow:

$$\sum \mathbf{F} = \frac{\dot{m}}{g_c} (\mathbf{V}_{\text{out}} - \mathbf{V}_{\text{in}}) \quad (3.45)$$

$$\frac{dp}{\rho} + f \frac{V^2}{2g_c} \frac{dx}{D_e} + \frac{g}{g_c} dz + \frac{dV^2}{2g_c} = 0 \quad (3.63)$$

PROBLEMS

For those problems involving water, you may use $\rho = 62.4 \text{ lbm/ft}^3$ or 1000 kg/m^3 , and the specific heat equals $1 \text{ Btu/lbm}\cdot^\circ\text{R}$ or $4187 \text{ J/kg}\cdot\text{K}$.

- 3.1. Compare the pressure–energy equation (3.13) for the case of no external work with the differential form of the momentum equation (3.63). Does the result seem reasonable?
- 3.2. Consider steady flow of a perfect gas in a horizontal insulated frictionless duct. Start with the pressure–energy equation and show that

$$\frac{V^2}{2g_c} + \frac{\gamma}{\gamma - 1} \frac{p}{\rho} = \text{const}$$

- 3.3. It is proposed to determine the flow rate through a pipeline from pressure measurements at two points of different cross-sectional areas. No energy transfers are involved ($q = w_s = 0$) and potential differences are negligible. Show that for the steady one-dimensional, frictionless flow of an incompressible fluid, the flow rate can be represented by

$$\dot{m} = A_1 A_2 \left[\frac{2\rho g_c (p_1 - p_2)}{A_1^2 - A_2^2} \right]^{1/2}$$

- 3.4. Pressure taps in a low-speed wind tunnel reveal the difference between stagnation and static pressure to be 0.5 psi. Calculate the test section air velocity under the assumption that the air density remains constant at 0.0765 lbm/ft^3 .
- 3.5. Water flows through a duct of varying area. The difference in stagnation pressures between two sections is $4.5 \times 10^5 \text{ N/m}^2$.
- (a) If the water remains at a constant temperature, how much heat will be transferred in this length of duct?
- (b) If the system is perfectly insulated against heat transfer, compute the temperature change of water as it flows through the duct.
- 3.6. The following information is known about the steady flow of methane through a horizontal insulated duct:

Entering stagnation enthalpy	= 634 Btu/lbm
Leaving static enthalpy	= 532 Btu/lbm
Leaving static temperature	= 540°F
Leaving static pressure	= 50psia

- (a) Determine the outlet velocity.
- (b) What is the stagnation temperature at the outlet?
- (c) Determine the stagnation pressure at the outlet.
- 3.7. Under what conditions would it be possible to have an adiabatic flow process with a real fluid (with friction) and have the stagnation pressures at inlet and outlet to the system be the same? (*Hint*: Look at the stagnation pressure–energy equation.)

- 3.8 Simplify the stagnation pressure–energy equation (3.25) for the case of an incompressible fluid. Integrate the result and compare your answer to any other energy equation that you might use for an incompressible fluid [say, equation (3.29)].
- 3.9. An incompressible fluid ($\rho = 55 \text{ lbm/ft}^3$) leaves the pipe shown in Figure P3.9 with a velocity of 15 ft/sec.
- (a) Calculate the flow losses.
- (b) Assume that all losses occur in the constant-area pipe and find the pressure at the entrance to the pipe.




Figure P3.9

- 3.10. For the flow depicted in Figure P3.10, what Δz value is required to produce a jet velocity (V_j) of 30 m/s if the flow losses are $h_\ell = 15V_p^2/2g_c$?

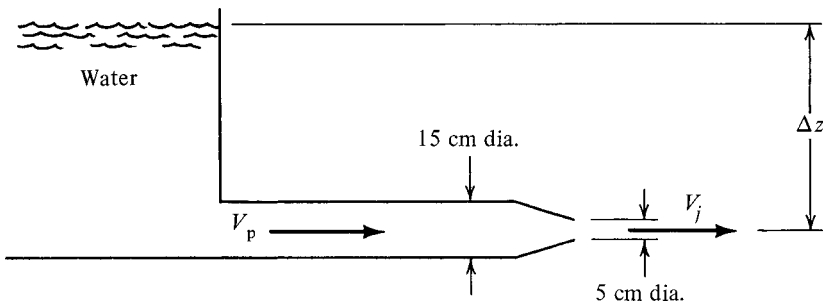


Figure P3.10

- 3.11. Water flows in a 2-ft-diameter duct under the following conditions: $p_1 = 55 \text{ psia}$ and $V_1 = 20 \text{ ft/sec}$. At another section 12 ft below the first the diameter is 1 ft and the pressure $p_2 = 40 \text{ psia}$.
- (a) Compute the frictional losses between these two sections.
- (b) Determine the direction of flow.
- 3.12. For Figure P3.12, find the pipe diameter required to produce a flow rate of 50 kg/s if the flow losses are $h_\ell = 6V^2/2g_c$.

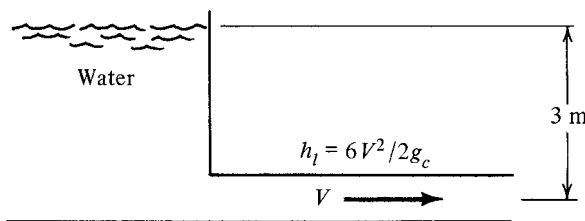


Figure P3.12

- 3.13. A pump at the surface of a lake expels a vertical jet of water (the water falls back into the lake).
- (a) Discuss briefly (but clearly) all possible sources of irreversibilities in this situation.
 - (b) Now neglecting all losses that you discussed in part (a), what is the maximum height that the water may reach for $w_s = 35 \text{ ft-lbf/lbm}$?
- 3.14. Which of the two pumping arrangements shown in Figure P3.14 is more desirable (i.e., less demanding of pump work)? You may neglect the minor loss at the elbow in arrangement (A).

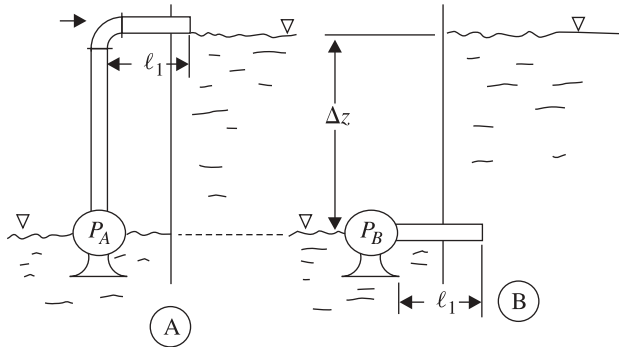


Figure P3.14

- 3.15. For a given mass, we can relate the moment of the applied force to the angular momentum by the following:

$$\sum \mathbf{M} = \frac{1}{g_c} \frac{d(\text{angular momentum})}{dt}$$

- (a) What is the angular momentum per unit mass?
 - (b) What form does the equation above take for the analysis of a control volume?
- 3.16. An incompressible fluid flows through a 10-in.-diameter horizontal constant-area pipe. At one section the pressure is 150 psia and 1000 ft downstream the pressure has dropped to 100 psia.
- (a) Find the total frictional force exerted on the fluid by the pipe.
 - (b) Compute the average wall shear stress.
- 3.17. Methane gas flows through a horizontal constant-area pipe of 15 cm diameter. At section 1, $p_1 = 6 \text{ bar abs.}$, $T_1 = 66^\circ\text{C}$, and $V_1 = 30 \text{ m/s}$. At section 2, $T_2 = 38^\circ\text{C}$ and $V_2 = 110 \text{ m/s}$.
- (a) Determine the pressure at section 2.
 - (b) Find the total wall frictional force.
 - (c) What is the heat transfer?
- 3.18. Seawater ($\rho = 64 \text{ lbm/ft}^3$) flows through the reducer shown in Figure P3.18 with $p_1 = 50 \text{ psig}$. The flow losses between the two sections amount to $h_\ell = 5.0 \text{ ft-lbf/lbm}$.
- (a) Find V_2 and p_2 .
 - (b) Determine the force exerted by the reducer on the seawater between sections 1 and 2.

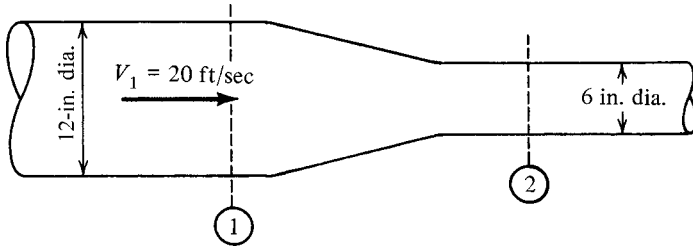


Figure P3.18

- 3.19. (a) Neglect all losses and compute the exit velocity from the tank shown in Figure P3.19.
 (b) If the opening is 4 in. in diameter, determine the mass flow rate.
 (c) Compute the force tending to push the tank along the floor.

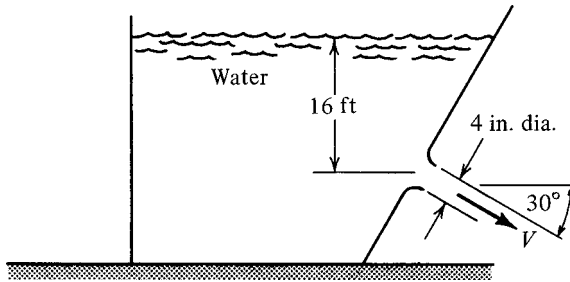


Figure P3.19

- 3.20. A jet of water with a velocity of 5 m/s has an area of 0.05 m^2 . It strikes a 1-m-thick concrete block at a point 2 m above the ground (Figure P3.20). After hitting the block, the water drops straight to the ground. What minimum weight must the block have in order not to tip over?

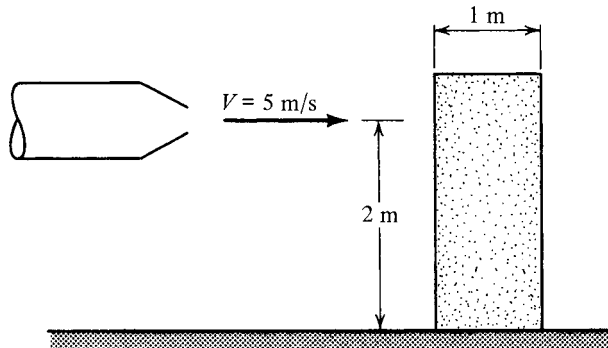


Figure P3.20

- 3.21. It is proposed to brake a racing car by opening an air scoop to deflect the air as shown in Figure P3.21. You may assume that the density of the air remains approximately

constant at the inlet conditions of 14.7 psia and 60°F. Assume that there is no spillage—that all the air enters the inlet in the direction shown and the conditions specified. You may also assume that there is no change in the drag of the car when the air scoop is opened. What inlet area is needed to provide a braking force of 2000 lbf when traveling at 300 mph?

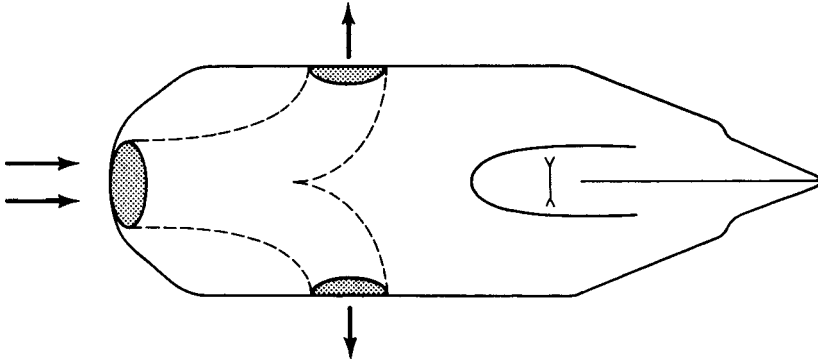


Figure P3.21

- 3.22. A fluid jet strikes a vane and is deflected through angle θ (Figure P3.22). For a given jet (fluid, area, and velocity are fixed), what deflection angle will cause the greatest x -component of force between the fluid and vane? You may assume an incompressible fluid and no friction along the vane. Set up the general problem and then differentiate to find the maximum.

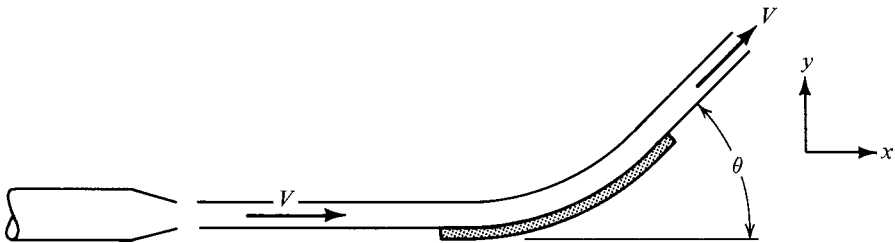


Figure P3.22

CHECK TEST

You should be able to complete this test without reference to material in the chapter.

- 3.1. Entropy changes can be divided into two categories. Define these categories with words and where possible by equations. Comment on the sign of each part.
- 3.2. Given the differential form of the energy equation, derive the pressure–energy equation.
- 3.3. (a) Define the stagnation process. Be careful to state all conditions.

- (b) Give a general equation for stagnation enthalpy that is valid for all substances.
- (c) When can you use the following equation?

$$\frac{p_t}{\rho} = \frac{p}{\rho} + \frac{V^2}{2g_c} + \frac{g}{g_c}z$$

- 3.4. One can use either person A (who is standing still) or person B (who is running) as a frame of reference (Figure CT3.4). Check the statement below that is correct.
- (a) The stagnation pressure is the same for A and B.
 - (b) The static pressure is the same for A and B.
 - (c) Neither statement (a) nor (b) is correct.

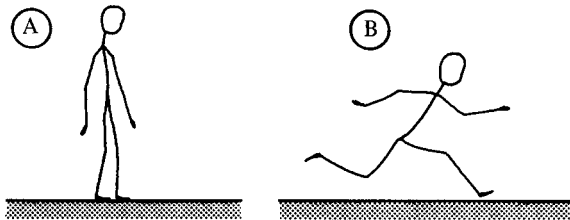


Figure CT3.4

- 3.5. Consider the case of steady one-dimensional flow with one stream in and one stream out of the control volume.
- (a) Under what conditions can we say that the stagnation enthalpy remains constant? (Can p_t vary under these conditions?)
 - (b) If the conditions of part (a) are known to exist, what additional assumption is required before we can say that the stagnation pressure remains constant?
- 3.6. Under certain circumstances, the momentum equation is sometimes written in the following form when used to analyze a control volume:

$$\sum \mathbf{F} = \frac{\dot{m}}{g_c}(\mathbf{V}_r - \mathbf{V}_s)$$

- (a) Which of the sections (r or s) represents the location where fluid enters the control volume?
 - (b) What circumstances must exist before you can use the equation in this form?
- 3.7. Work Problem 3.18.

Introduction to Compressible Flow

4.1 INTRODUCTION

In earlier chapters we developed the fundamental relations that are needed for the analysis of fluid flow. We have seen the special form that some of these take for the case of constant-density fluids. Our *main* interest now is in compressible fluids or gases. We shall soon learn that it is not uncommon to encounter gases that are traveling faster than the speed of sound. Furthermore, when in this situation, their behavior is quite different than when traveling slower than the speed of sound. Thus we begin by developing an expression for sonic velocity through an arbitrary medium. This relation is then simplified for the case of perfect gases. We then examine subsonic and supersonic flows to gain some insight as to why their behavior is different.

The Mach number is introduced as a key parameter and we find that for the case of a perfect gas it is very simple to express our basic equations and many supplementary relations in terms of this new parameter. The chapter closes with a discussion of the significance of h - s and T - s diagrams and their importance in visualizing flow problems.

4.2 OBJECTIVES

After completing this chapter successfully, you should be able to:

1. Explain how sound is propagated through any medium (solid, liquid, or gas).
2. Define *sonic velocity*. State the basic differences between a *shock wave* and a *sound wave*.
3. (*Optional*) Starting with the continuity and momentum equations for steady, one-dimensional flow, utilize a control volume analysis to derive the general expression for the velocity of an infinitesimal pressure disturbance in an arbitrary medium.

4. State the relations for:
 - a. Speed of sound in an arbitrary medium
 - b. Speed of sound in a perfect gas
 - c. Mach number
5. Discuss the propagation of signal waves from a moving body in a fluid by explaining *zone of action*, *zone of silence*, *Mach cone*, and *Mach angle*. Compare subsonic and supersonic flow in these respects.
6. Write an equation for the stagnation enthalpy (h_t) of a perfect gas in terms of enthalpy (h), Mach number (M), and ratio of specific heats (γ).
7. Write an equation for the stagnation temperature (T_t) of a perfect gas in terms of temperature (T), Mach number (M), and ratio of specific heats (γ).
8. Write an equation for the stagnation pressure (p_t) of a perfect gas in terms of pressure (p), Mach number (M), and ratio of specific heats (γ).
9. (*Optional*) Demonstrate manipulative skills by developing simple relations in terms of Mach number for a perfect gas, such as

$$p_t = p \left(1 + \frac{\gamma - 1}{2} M^2 \right)^{\gamma/(\gamma-1)}$$

10. Demonstrate the ability to utilize the concepts above in typical flow problems.

4.3 SONIC VELOCITY AND MACH NUMBER

We now examine the means by which disturbances pass through an elastic medium. A disturbance at a given point creates a region of compressed molecules that is passed along to its neighboring molecules and in so doing creates a *traveling wave*. Waves come in various *strengths*, which are measured by the amplitude of the disturbance. The speed at which this disturbance is propagated through the medium is called the *wave speed*. This speed not only depends on the type of medium and its thermodynamic state but is also a function of the strength of the wave. The *stronger* the wave is, the faster it moves.

If we are dealing with waves of *large amplitude*, which involve relatively large changes in pressure and density, we call these *shock waves*. These will be studied in detail in Chapter 6. If, on the other hand, we observe waves of *very small amplitude*, their speed is characteristic *only* of the medium and its state. These waves are of vital importance to us since sound waves fall into this category. Furthermore, the presence of an object in a medium can only be felt by the object's sending out or reflecting infinitesimal waves which propagate at the characteristic *sonic velocity*.

Let us hypothesize how we might form an infinitesimal pressure wave and then apply the fundamental concepts to determine the wave velocity. Consider a long constant-area tube filled with fluid and having a piston at one end, as shown in Figure 4.1. The fluid is initially at rest. At a certain instant the piston is given an

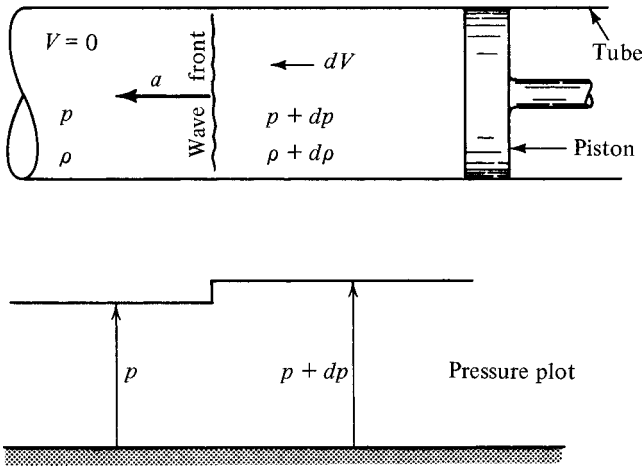


Figure 4.1 Initiation of infinitesimal pressure pulse.

incremental velocity dV to the left. The fluid particles immediately next to the piston are compressed a very small amount as they acquire the velocity of the piston.

As the piston (and these compressed particles) continue to move, the next group of fluid particles is compressed and the *wave front* is observed to propagate through the fluid at the characteristic *sonic velocity* of magnitude a . All particles between the wave front and the piston are moving with velocity dV to the left and have been compressed from ρ to $\rho + d\rho$ and have increased their pressure from p to $p + dp$.

We next recognize that this is a difficult situation to analyze. Why? Because it is *unsteady flow*! [As you observe any given point in the tube, the properties change with time (e.g., pressure changes from p to $p + dp$ as the wave front passes).] This difficulty can easily be solved by superimposing on the entire flow field a constant velocity to the right of magnitude a . *This procedure changes the frame of reference to the wave front as it now appears as a stationary wave.* An alternative way of achieving this result is to jump on the wave front. Figure 4.2 shows the problem that we now

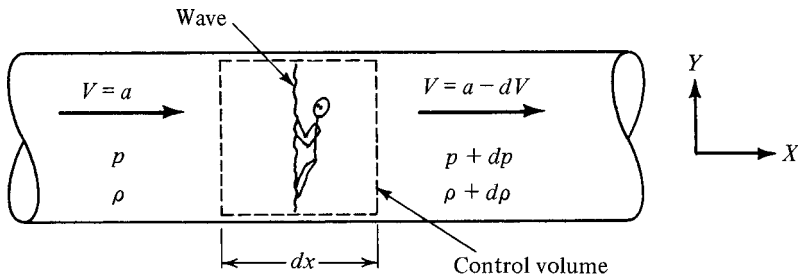


Figure 4.2 Steady-flow picture corresponding to Figure 4.1.

have. *Note that changing the reference frame in this manner does not in any way alter the actual (static) thermodynamic properties of the fluid, although it will affect the stagnation conditions.* Since the wave front is extremely thin, we can use a control volume of infinitesimal thickness.

Continuity

For steady one-dimensional flow, we have

$$\dot{m} = \rho AV = \text{const} \tag{2.30}$$

But $A = \text{const}$; thus

$$\rho V = \text{const} \tag{4.1}$$

Application of this to our problem yields

$$\rho a = (\rho + d\rho)(a - dV)$$

Expanding gives us

$$\rho a = \rho a - \rho dV + a d\rho - d\rho \overset{\text{HOT}}{dV}$$

Neglecting the higher-order term and solving for dV , we have

$$dV = \frac{a d\rho}{\rho} \tag{4.2}$$

Momentum

Since the control volume has infinitesimal thickness, we can neglect any shear stresses along the walls. We shall write the x -component of the momentum equation, taking forces and velocity as positive if to the right. For steady one-dimensional flow we may write

$$\begin{aligned} \sum F_x &= \frac{\dot{m}}{g_c} (V_{\text{out}_x} - V_{\text{in}_x}) & (3.46) \\ pA - (p + dp)A &= \frac{\rho A a}{g_c} [(a - dV) - a] \\ A dp &= \frac{\rho A a}{g_c} dV \end{aligned}$$

Canceling the area and solving for dV , we have

$$dV = \frac{g_c dp}{\rho a} \quad (4.3)$$

Equations (4.2) and (4.3) may now be combined to eliminate dV , with the result

$$a^2 = g_c \frac{dp}{d\rho} \quad (4.4)$$

However, the derivative $dp/d\rho$ is not unique. It depends entirely on the process. Thus it should really be written as a *partial* derivative with the appropriate subscript. But what subscript? What kind of a process are we dealing with?

Remember, we are analyzing an infinitesimal disturbance. For this case we can assume negligible losses and heat transfer as the wave passes through the fluid. Thus the process is both reversible and adiabatic, which means that it is isentropic. (Why?) After we have studied shock waves, we shall prove that very weak shock waves (i.e., small disturbances) approach an isentropic process in the limit. Therefore, equation (4.4) should properly be written as

$$a^2 = g_c \left(\frac{\partial p}{\partial \rho} \right)_s \quad (4.5)$$

This can be expressed in an alternative form by introducing the *bulk* or *volume modulus of elasticity* E_v . This is a relation between volume or density changes that occurs as a result of pressure fluctuations and is defined as

$$E_v \equiv -v \left(\frac{\partial p}{\partial v} \right)_s \equiv \rho \left(\frac{\partial p}{\partial \rho} \right)_s \quad (4.6)$$

Thus

$$a^2 = g_c \left(\frac{E_v}{\rho} \right) \quad (4.7)$$

Equations (4.5) and (4.7) are equivalent general relations for sonic velocity through *any* medium. The bulk modulus is normally used in connection with liquids and solids. Table 4.1 gives some typical values of this modulus, the exact value depending on the temperature and pressure of the medium. For solids it also depends on the type of loading. The reciprocal of the bulk modulus is called the *compressibility*. What is the sonic velocity in a truly incompressible fluid? [*Hint*: What is the value of $(\partial p/\partial \rho)_s$?]

Equation (4.5) is normally used for gases and this can be greatly simplified for the case of a gas that obeys the perfect gas law. For an isentropic process, we know that

Table 4.1 Bulk Modulus Values for Common Media

Medium	Bulk Modulus (psi)
Oil	185,000–270,000
Water	300,000–400,000
Mercury	approx. 4,000,000
Steel	approx. 30,000,000

$$pv^\gamma = \text{const} \quad \text{or} \quad p = \rho^\gamma \text{ const} \tag{4.8}$$

Thus

$$\left(\frac{\partial p}{\partial \rho}\right)_s = \gamma \rho^{\gamma-1} \text{ const}$$

But from (4.8), the constant = p/ρ^γ . Therefore,

$$\left(\frac{\partial p}{\partial \rho}\right)_s = \gamma \rho^{\gamma-1} \frac{p}{\rho^\gamma} = \gamma \frac{p}{\rho} = \gamma RT$$

and from (4.5)

$$a^2 = \gamma g_c RT \tag{4.9}$$

or

$$a = \sqrt{\gamma g_c RT} \tag{4.10}$$

Notice that for perfect gases, sonic velocity is a function of the individual gas and temperature *only*.

Example 4.1 Compute the sonic velocity in air at 70°F.

$$a^2 = \gamma g_c RT = (1.4)(32.2)(53.3)(460 + 70)$$

$$a = 1128 \text{ ft/sec}$$

Example 4.2 Sonic velocity through carbon dioxide is 275 m/s. What is the temperature in Kelvin?

$$a^2 = \gamma g_c RT$$

$$(275)^2 = (1.29)(1)(189)(T)$$

$$T = 310.2 \text{ K}$$

Always keep in mind that in general, sonic velocity is a property of the fluid and varies with the state of the fluid. *Only* for gases that can be treated as perfect is the sonic velocity a function of temperature alone.

Mach Number

We define the *Mach number* as

$$M \equiv \frac{V}{a} \quad (4.11)$$

where

$V \equiv$ the velocity of the medium

$a \equiv$ sonic velocity through the medium

It is important to realize that both V and a are computed *locally* for conditions that actually exist at the same point. If the velocity at one point in a flow system is twice that at another point, we *cannot* say that the Mach number has doubled. We must seek further information on the sonic velocity, which has probably also changed. (What property would we be interested in if the fluid were a perfect gas?)

If the velocity is less than the local speed of sound, M is less than 1 and the flow is called *subsonic*. If the velocity is greater than the local speed of sound, M is greater than 1 and the flow is called *supersonic*. We shall soon see that the Mach number is the most important parameter in the analysis of compressible flows.

4.4 WAVE PROPAGATION

Let us examine a point disturbance that is at rest in a fluid. *Infinitesimal* pressure pulses are continually being emitted and thus they travel through the medium at *sonic* velocity in the form of spherical wave fronts. To simplify matters we shall keep track of only those pulses that are emitted every second. At the end of 3 seconds the picture will appear as shown in Figure 4.3. Note that the wave fronts are concentric.

Now consider a similar problem in which the disturbance is no longer stationary. Assume that it is moving at a speed less than sonic velocity, say $a/2$. Figure 4.4 shows such a situation at the end of 3 seconds. Note that the wave fronts are no longer concentric. Furthermore, the wave that was emitted at $t = 0$ is always in front of the disturbance itself. *Therefore, any person, object, or fluid particle located upstream will feel the wave fronts pass by and know that the disturbance is coming.*

Next, let the disturbance move at exactly sonic velocity. Figure 4.5 shows this case and you will note that all wave fronts coalesce on the left side and move along with the disturbance. After a long period of time this wave front would approximate a plane indicated by the dashed line. In this case, no region upstream is forewarned of the disturbance as the disturbance arrives at the same time as the wave front.

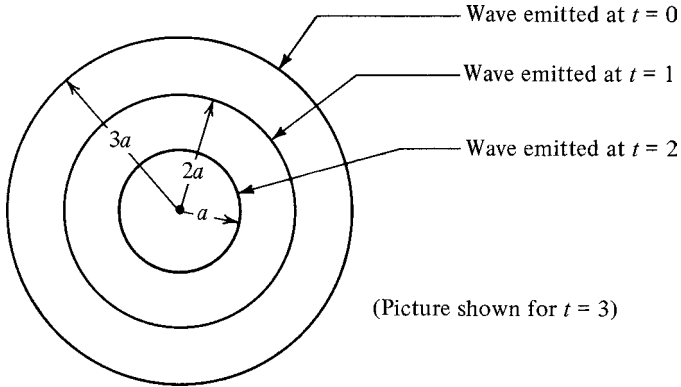


Figure 4.3 Wave fronts from a stationary disturbance.

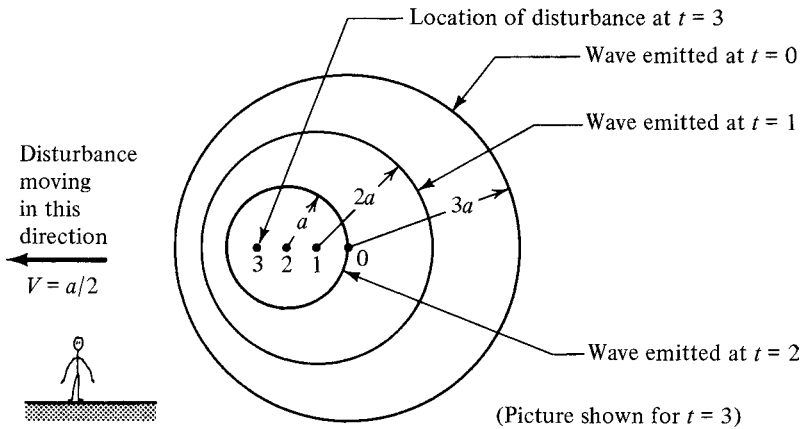


Figure 4.4 Wave fronts from subsonic disturbance.

The only other case to consider is that of a disturbance moving at velocities greater than the speed of sound. Figure 4.6 shows a point disturbance moving at Mach number = 2 (twice sonic velocity). The wave fronts have coalesced to form a cone with the disturbance at the apex. This is called a *Mach cone*. The region inside the cone is called the *zone of action* since it feels the presence of the waves. The outer region is called the *zone of silence*, as *this entire region is unaware of the disturbance*. The surface of the Mach cone is sometimes referred to as a *Mach wave*; the half-angle at the apex is called the *Mach angle* and is given the symbol μ . It should be easy to see that

$$\sin \mu = \frac{a}{V} = \frac{1}{M} \tag{4.12}$$

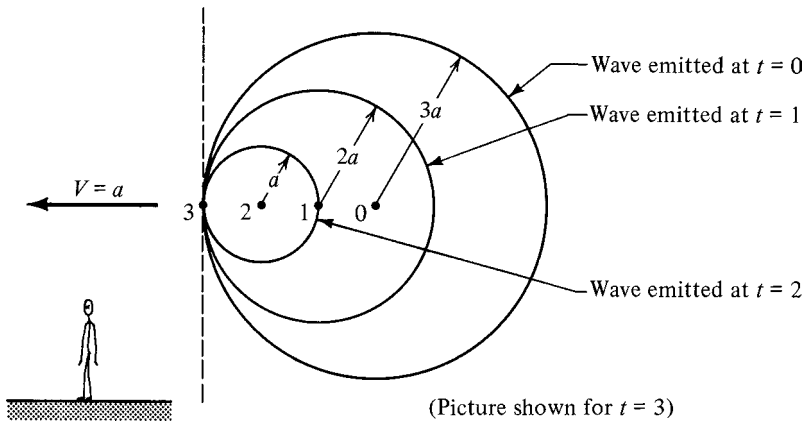


Figure 4.5 Wave fronts from sonic disturbance.

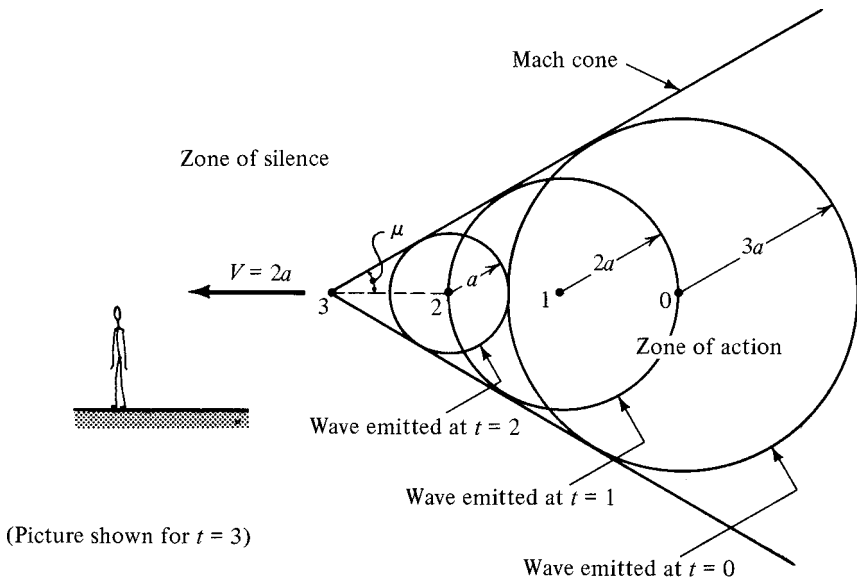


Figure 4.6 Wave fronts from supersonic disturbance.

In this section we have discovered one of the most significant differences between subsonic and supersonic flow fields. In the subsonic case the fluid can “sense” the presence of an object and smoothly adjust its flow around the object. In supersonic flow this is not possible, and thus flow adjustments occur rather abruptly in the form of shock or expansion waves. We study these in great detail in Chapters 6 through 8.

4.5 EQUATIONS FOR PERFECT GASES IN TERMS OF MACH NUMBER

In Section 4.4 we saw that supersonic and subsonic flows have totally different characteristics. This suggests that it would be instructive to use Mach number as a parameter in our basic equations. This can be done very easily for the flow of a perfect gas since in this case we have a simple equation of state *and* an explicit expression for sonic velocity. Development of some of the more important relations follow.

Continuity

For steady one-dimensional flow with a single inlet and a single outlet, we have

$$\dot{m} = \rho AV = \text{const} \quad (2.30)$$

From the perfect gas equation of state,

$$\rho = \frac{p}{RT} \quad (1.13)$$

and from the definition of Mach number,

$$V = Ma \quad (4.11)$$

Also recall the expression for sonic velocity in a perfect gas:

$$a = \sqrt{\gamma g_c RT} \quad (4.10)$$

Substitution of equations (1.13), (4.11), and (4.10) into (2.30) yields

$$\rho AV = \frac{p}{RT} AM \sqrt{\gamma g_c RT} = pAM \sqrt{\frac{\gamma g_c}{RT}}$$

Thus for steady one-dimensional flow of a perfect gas, the continuity equation becomes

$$\dot{m} = pAM \sqrt{\frac{\gamma g_c}{RT}} = \text{const} \quad (4.13)$$

Stagnation Relations

For gases we eliminate the potential term and write

$$h_t = h + \frac{V^2}{2g_c} \quad (3.18)$$

Knowing

$$V^2 = M^2 a^2 \quad [\text{from (4.11)}]$$

and

$$a^2 = \gamma g_c RT \quad (4.9)$$

we have

$$h_t = h + \frac{M^2 \gamma g_c RT}{2g_c} = h + \frac{M^2 \gamma RT}{2} \quad (4.14)$$

From equations (1.49) and (1.50) we can write the specific heat at constant pressure in terms of γ and R . Show that

$$c_p = \frac{\gamma R}{\gamma - 1} \quad (4.15)$$

Combining (4.15) and (4.14), we have

$$h_t = h + M^2 \frac{\gamma - 1}{2} c_p T \quad (4.16)$$

But for a gas we can say that

$$h = c_p T \quad (1.48)$$

Thus

$$h_t = h + M^2 \frac{\gamma - 1}{2} h$$

or

$$\boxed{h_t = h \left(1 + \frac{\gamma - 1}{2} M^2 \right)} \quad (4.17)$$

Using $h = c_p T$ and $h_t = c_p T_t$, this can be written as

$$\boxed{T_t = T \left(1 + \frac{\gamma - 1}{2} M^2 \right)} \quad (4.18)$$

Equations (4.17) and (4.18) are used frequently. *Memorize them!*

Now, the stagnation process is isentropic. Thus γ can be used as the exponent n in equation (1.57), and between any two points on the same isentropic, we have

$$\frac{p_2}{p_1} = \left(\frac{T_2}{T_1}\right)^{\gamma/(\gamma-1)} \tag{4.19}$$

Let point 1 refer to the static conditions, and point 2, the stagnation conditions. Then, combining (4.19) and (4.18) produces

$$\frac{p_t}{p} = \left(\frac{T_t}{T}\right)^{\gamma/(\gamma-1)} = \left(1 + \frac{\gamma-1}{2}M^2\right)^{\gamma/(\gamma-1)} \tag{4.20}$$

or

$$\boxed{p_t = p \left(1 + \frac{\gamma-1}{2}M^2\right)^{\gamma/(\gamma-1)}} \tag{4.21}$$

This expression for total pressure is important. *Learn it!*

Example 4.3 Air flows with a velocity of 800 ft/sec and has a pressure of 30 psia and temperature of 600°R. Determine the stagnation pressure.

$$a = (\gamma g_c RT)^{1/2} = [(1.4)(32.2)(53.3)(600)]^{1/2} = 1201 \text{ ft/sec}$$

$$M = \frac{V}{a} = \frac{800}{1201} = 0.666$$

$$p_t = p \left(1 + \frac{\gamma-1}{2}M^2\right)^{\gamma/(\gamma-1)} = 30 \left[1 + \left(\frac{1.4-1}{2}\right)(0.666)^2\right]^{1.4/(1.4-1)}$$

$$p_t = (30)(1 + 0.0887)^{3.5} = (30)(1.346) = 40.4 \text{ psia}$$

Example 4.4 Hydrogen has a static temperature of 25°C and a stagnation temperature of 250°C. What is the Mach number?

$$T_t = T \left(1 + \frac{\gamma-1}{2}M^2\right)$$

$$(250 + 273) = (25 + 273) \left(1 + \frac{1.41-1}{2}M^2\right)$$

$$523 = (298)(1 + 0.205M^2)$$

$$M^2 = 3.683 \quad \text{and} \quad M = 1.92$$

Stagnation Pressure–Energy Equation

For steady one-dimensional flow, we have

$$\frac{dp_t}{\rho_t} + ds_e(T_t - T) + T_t ds_i + \delta w_s = 0 \quad (3.25)$$

For a perfect gas,

$$p_t = \rho_t RT_t \quad (4.22)$$

Substitute for the stagnation density and *show* that equation (3.25) can be written as

$$\boxed{\frac{dp_t}{p_t} + \frac{ds_e}{R} \left(1 - \frac{T}{T_t}\right) + \frac{ds_i}{R} + \frac{\delta w_s}{RT_t} = 0} \quad (4.23)$$

A large number of problems are adiabatic and involve no shaft work. In this case, ds_e and δw_s are zero:

$$\frac{dp_t}{p_t} + \frac{ds_i}{R} = 0 \quad (4.24)$$

This can be integrated between two points in the flow system to give

$$\ln \frac{p_{t2}}{p_{t1}} + \frac{s_{i2} - s_{i1}}{R} = 0 \quad (4.25)$$

But since $ds_e = 0$, $ds_i = ds$, and we really do not need to continue writing the subscript i under the entropy. Thus

$$\ln \frac{p_{t2}}{p_{t1}} = -\frac{s_2 - s_1}{R} \quad (4.26)$$

Taking the antilog, this becomes

$$\frac{p_{t2}}{p_{t1}} = e^{-(s_2 - s_1)/R} \quad (4.27)$$

or

$$\boxed{\frac{p_{t2}}{p_{t1}} = e^{-\Delta s/R}} \quad (4.28)$$

Watch your units when you use this equation! Total pressures must be absolute, and $\Delta s/R$ must be dimensionless. For this case of adiabatic no-work flow, Δs will always be positive. (Why?) Thus p_{t2} will always be less than p_{t1} . *Only* for the limiting case of no losses will the stagnation pressure remain constant.

This confirms previous knowledge gained from the stagnation pressure–energy equation: that for the case of an adiabatic, no-work system, without flow losses $p_t = \text{const}$ for *any* fluid. Thus stagnation pressure is seen to be a very important parameter which in many systems reflects the flow losses. Be careful to note, however, that the specific relation in equation (4.28) is applicable only to perfect gases, and even then only under certain flow conditions. What are these conditions?

Summarizing the above: For steady one-dimensional flow, we have

$$\delta q = \delta w_s + dh_t \tag{3.20}$$

Note that equation (3.20) is valid even if flow losses are present:

$$\text{If } \delta q = \delta w_s = 0, \quad \text{then } h_t = \text{constant}$$

If in addition to the above, no losses occur, that is,

$$\text{if } \delta q = \delta w_s = ds_i = 0, \quad \text{then } p_t = \text{constant}$$

Example 4.5 Oxygen flows in a constant-area, horizontal, insulated duct. Conditions at section 1 are $p_1 = 50$ psia, $T_1 = 600^\circ\text{R}$, and $V_1 = 2860$ ft/sec. At a downstream section the temperature is $T_2 = 1048^\circ\text{R}$.

- (a) Determine M_1 and T_{t1} .
- (b) Find V_2 and p_2 .
- (c) What is the entropy change between the two sections?

$$(a) \quad a_1 = (\gamma g_c RT_1)^{1/2} = [(1.4)(32.2)(48.3)(600)]^{1/2} = 1143 \text{ ft/sec}$$

$$M_1 = \frac{V_1}{a_1} = \frac{2860}{1143} = 2.50$$

$$T_{t1} = T_1 \left(1 + \frac{\gamma - 1}{2} M_1^2 \right) = (600) \left[1 + \frac{1.4 - 1}{2} (2.5)^2 \right] = 1350^\circ\text{R}$$

(b) *Energy*:

$$h_{t1} + \cancel{q} = h_{t2} + \cancel{w_s}$$

$$h_{t1} = h_{t2}$$

and since this is a perfect gas, $T_{t1} = T_{t2}$.

$$T_{t2} = T_2 \left(1 + \frac{\gamma - 1}{2} M_2^2 \right)$$

$$1350 = (1048) \left(1 + \frac{1.4 - 1}{2} M_2^2 \right) \quad \text{and} \quad M_2 = 1.20$$

$$V_2 = M_2 a_2 = (1.20)[(1.4)(32.2)(48.3)(1048)]^{1/2} = 1813 \text{ ft/sec}$$

Continuity:

$$\dot{m} = \rho_1 A_1 V_1 = \rho_2 A_2 V_2$$

but

$$A_1 = A_2 \quad \text{and} \quad \rho = p/RT$$

Thus

$$\frac{p_1 V_1}{T_1} = \frac{p_2 V_2}{T_2}$$

$$p_2 = \frac{V_1 T_2}{V_2 T_1} p_1 = \left(\frac{2860}{1813} \right) \left(\frac{1048}{600} \right) (50) = 137.8 \text{ psia}$$

(c) To obtain the entropy change, we need p_{t1} and p_{t2} .

$$p_{t1} = p_1 \left(1 + \frac{\gamma - 1}{2} M_1^2 \right)^{\gamma/(\gamma-1)} = (50) \left[1 + \frac{1.4 - 1}{2} (2.5)^2 \right]^{1.4/(1.4-1)} = 854 \text{ psia}$$

Similarly,

$$p_{t2} = 334 \text{ psia}$$

$$e^{-\Delta s/R} = \frac{p_{t2}}{p_{t1}} = \frac{334}{854} = 0.391$$

$$\frac{\Delta s}{R} = \ln \frac{1}{0.391} = 0.939$$

$$\Delta s = \frac{(0.939)(48.3)}{(778)} = 0.0583 \text{ Btu/lbm-}^\circ\text{R}$$

4.6 $h-s$ AND $T-s$ DIAGRAMS

Every problem should be approached with a simple sketch of the physical system and also a thermodynamic state diagram. Since the losses affect the entropy changes (through ds_i), one generally uses either an $h-s$ or $T-s$ diagram. In the case of perfect gases, enthalpy is a function of temperature only and therefore the $T-s$ and $h-s$ diagrams are identical except for scale.

Consider a steady one-dimensional flow of a perfect gas. Let us assume no heat transfer and no external work. From the energy equation

$$h_{t1} + \cancel{q} = h_{t2} + \cancel{w_s} \quad (3.19)$$

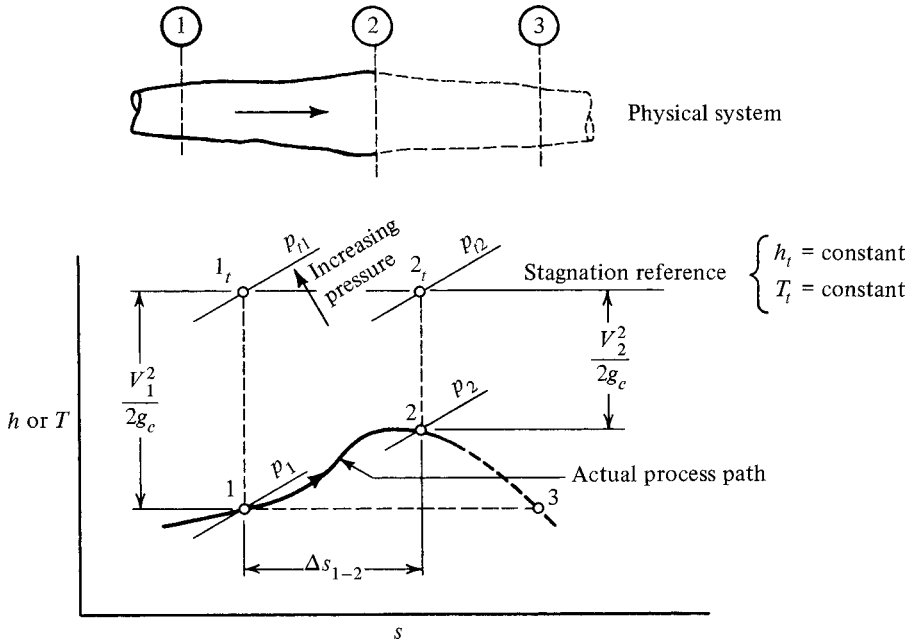


Figure 4.7 Stagnation reference states.

the stagnation enthalpy remains constant, and since it is a perfect gas, the total temperature is also constant. This is represented by the solid horizontal line in Figure 4.7. Two particular sections in the system have been indicated by 1 and 2. The actual process that takes place between these points is indicated on the $T-s$ diagram.

Notice that although the stagnation conditions do not actually exist in the system, they are also shown on the diagram for reference. The distance between the static and stagnation points is indicative of the velocity that exists at that location (since gravity has been neglected). It can also be clearly seen that if there is a Δs_{1-2} , then $p_{t2} < p_{t1}$ and the relationship between stagnation pressure and flow losses is again verified.

It is interesting to hypothesize a third section that just happens to be at the same enthalpy (and temperature) as the first. What else do these points have in common? The same velocity? Obviously! How about sonic velocity? (Recall for gases that this is a function of temperature only.) This means that points 1 and 3 would also have the same Mach number (something that is not immediately obvious). One can now imagine that someplace on this diagram there is a horizontal line that represents the locus of points having a Mach number of unity. Between this line and the stagnation line lie all points in the subsonic regime. Below this line lie all points in the supersonic regime. These conclusions are based on certain assumptions. What are they?

4.7 SUMMARY

In general, waves propagate at a speed that depends on the medium, its thermodynamic state, and the strength of the wave. However, infinitesimal disturbances travel at a speed determined only by the medium and its state. Sound waves fall into this latter category. A discussion of wave propagation and sonic velocity brought out a basic difference between subsonic and supersonic flows. If subsonic, the flow can “sense” objects and flow smoothly around them. This is not possible in supersonic flow, and this topic will be discussed further after the appropriate background has been laid.

As you progress through the remainder of this book and analyze specific flow situations, it will become increasingly evident that fluids behave quite differently in the supersonic regime than they do in the more familiar subsonic flow regime. Thus it will not be surprising to see Mach number become an important parameter. The significance of T - s diagrams as a key to problem visualization should not be overlooked.

Some of the most frequently used equations that were developed in this unit are summarized below. Most are restricted to the steady one-dimensional flow of any fluid, while others apply only to perfect gases. You should determine under what conditions each may be used.

1. Sonic velocity (propagation speed of infinitesimal pressure pulses)

$$a^2 = g_c \left(\frac{\partial p}{\partial \rho} \right)_s = g_c \frac{E_v}{\rho} \quad (4.5), (4.7)$$

$$M = \frac{V}{a} \quad (\text{all at the same location}) \quad (4.11)$$

$$\sin \mu = \frac{1}{M} \quad (4.12)$$

2. Special relations for perfect gases

$$a^2 = \gamma g_c R T \quad (4.9)$$

$$h_t = h \left(1 + \frac{\gamma - 1}{2} M^2 \right) \quad (4.17)$$

$$T_t = T \left(1 + \frac{\gamma - 1}{2} M^2 \right) \quad (4.18)$$

$$p_t = p \left(1 + \frac{\gamma - 1}{2} M^2 \right)^{\gamma/(\gamma-1)} \quad (4.21)$$

$$\frac{dp_t}{p_t} + \frac{ds_e}{R} \left(1 - \frac{T}{T_t} \right) + \frac{ds_i}{R} + \frac{\delta w_s}{RT_t} = 0 \quad (4.23)$$

$$\frac{p_{t2}}{p_{t1}} = e^{-\Delta s/R} \quad \text{for } Q = W = 0 \quad (4.28)$$

PROBLEMS

- 4.1. Compute and compare sonic velocity in air, hydrogen, water, and mercury. Assume normal room temperature and pressure.
- 4.2. At what temperature and pressure would carbon monoxide, water vapor, and helium have the same speed of sound as standard air (288 K and 1 atm)?
- 4.3. Start with the relation for stagnation pressure that is valid for a perfect gas:

$$p_t = p \left(1 + \frac{\gamma - 1}{2} M^2 \right)^{\gamma/(\gamma-1)}$$

Expand the right side in a binomial series and evaluate the result for small (but not zero) Mach numbers. Show that your answer can be written as

$$p_t = p + \frac{\rho V^2}{2g_c} + \text{HOT}$$

Remember, the higher-order terms are negligible only for very small Mach numbers. (See Problem 4.4.)

- 4.4. Measurement of airflow shows the static and stagnation pressures to be 30 and 32 psig, respectively. (Note that these are gage pressures.) Assume that $p_{\text{amb}} = 14.7$ psia and the temperature is 120°F.
 - (a) Find the flow velocity using equation (4.21).
 - (b) Now assume that the air is incompressible and calculate the velocity using equation (3.39).
 - (c) Repeat parts (a) and (b) for static and stagnation pressures of 30 and 80 psig, respectively.
 - (d) Can you reach any conclusions concerning when a gas may be treated as a constant-density fluid?
- 4.5. If $\gamma = 1.2$ and the fluid is a perfect gas, what Mach number will give a temperature ratio of $T/T_t = 0.909$? What will the ratio of p/p_t be for this flow?
- 4.6. Carbon dioxide with a temperature of 335 K and a pressure of 1.4×10^5 N/m² is flowing with a velocity of 200 m/s.
 - (a) Determine the sonic velocity and Mach number.
 - (b) Determine the stagnation density.
- 4.7. The temperature of argon is 100°F, the pressure 42 psia, and the velocity 2264 ft/sec. Calculate the Mach number and stagnation pressure.
- 4.8. Helium flows in a duct with a temperature of 50°C, a pressure of 2.0 bar abs., and a total pressure of 5.3 bar abs. Determine the velocity in the duct.
- 4.9. An airplane flies 600 mph at an altitude of 16,500 ft, where the temperature is 0°F and the pressure is 1124 psfa. What temperature and pressure might you expect on the nose of the airplane?

- 4.10.** Air flows at $M = 1.35$ and has a stagnation enthalpy of 4.5×10^5 J/kg. The stagnation pressure is 3.8×10^5 N/m². Determine the static conditions (pressure, temperature, and velocity).
- 4.11.** A large chamber contains a perfect gas under conditions p_1, T_1, h_1 , and so on. The gas is allowed to flow from the chamber (with $q = w_s = 0$). Show that the velocity cannot be greater than

$$V_{\max} = a_1 \left(\frac{2}{\gamma - 1} \right)^{1/2}$$

If the velocity is the maximum, what is the Mach number?

- 4.12.** Air flows steadily in an adiabatic duct where no shaft work is involved. At one section, the total pressure is 50 psia, and at another section, it is 67.3 psia. In which direction is the fluid flowing, and what is the entropy change between these two sections?
- 4.13.** Methane gas flows in an adiabatic, no-work system with negligible change in potential. At one section $p_1 = 14$ bar abs., $T_1 = 500$ K, and $V_1 = 125$ m/s. At a downstream section $M_2 = 0.8$.
- Determine T_2 and V_2 .
 - Find p_2 assuming that there are no friction losses.
 - What is the area ratio A_2/A_1 ?
- 4.14.** Air flows through a constant-area, insulated passage. Entering conditions are $T_1 = 520^\circ\text{R}$, $p_1 = 50$ psia, and $M_1 = 0.45$. At a point downstream, the Mach number is found to be unity.
- Solve for T_2 and p_2 .
 - What is the entropy change between these two sections?
 - Determine the wall frictional force if the duct is 1 ft in diameter.
- 4.15.** Carbon dioxide flows in a horizontal adiabatic, no-work system. Pressure and temperature at section 1 are 7 atm and 600 K. At a downstream section, $p_2 = 4$ atm., $T_2 = 550$ K, and the Mach number is $M_2 = 0.90$.
- Compute the velocity at the upstream location.
 - What is the entropy change?
 - Determine the area ratio A_2/A_1 .
- 4.16.** Oxygen with $T_{r1} = 1000^\circ\text{R}$, $p_{r1} = 100$ psia, and $M_1 = 0.2$ enters a device with a cross-sectional area $A_1 = 1$ ft². There is no heat transfer, work transfer, or losses as the gas passes through the device and expands to 14.7 psia.
- Compute ρ_1, V_1 , and \dot{m} .
 - Compute M_2, T_2, V_2, ρ_2 , and A_2 .
 - What force does the fluid exert on the device?
- 4.17.** Consider steady, one-dimensional, constant-area, horizontal, isothermal flow of a perfect gas with no shaft work (Figure P4.17). The duct has a cross-sectional area A and perimeter P . Let τ_w be the shear stress at the wall.

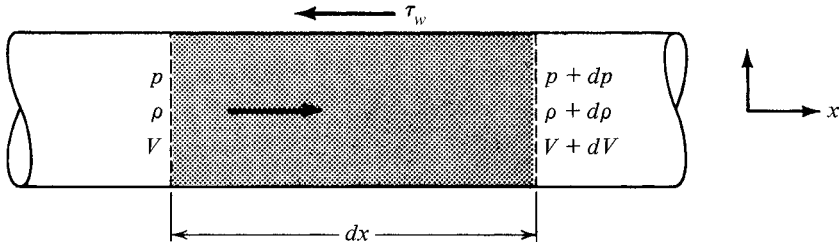


Figure P4.17

(a) Apply momentum concepts [equation (3.45)] and show that

$$-dp - f \frac{dx}{D_e} \frac{\rho V^2}{2g_c} = \frac{\rho V dV}{g_c}$$

(b) From the concept of continuity and the equation of state, show that

$$\frac{d\rho}{\rho} = \frac{dp}{p} = -\frac{dV}{V}$$

(c) Combine the results of parts (a) and (b) to show that

$$\frac{d\rho}{\rho} = \left[\frac{\gamma M^2}{2(\gamma M^2 - 1)} \right] \frac{f dx}{D_e}$$

CHECK TEST

You should be able to complete this test without reference to material in the chapter.

- 4.1. (a) Define Mach number and Mach angle.
 (b) Give an expression that represents sonic velocity in an arbitrary fluid.
 (c) Give the relation used to compute sonic velocity in a perfect gas.

- 4.2. Consider the steady, one-dimensional flow of a perfect gas with heat transfer. The T - s diagram (Figure CT4.2) shows both static and stagnation points at two locations in the system. It is known that $A = B$.
 (a) Is heat transferred into or out of the system?
 (b) Is $M_2 > M_1$, $M_2 = M_1$, or $M_2 < M_1$?

- 4.3. State whether each of the following statements is true or false.
 (a) Changing the frame of reference (or superposition of a velocity onto an existing flow) does not change the static enthalpy.
 (b) Shock waves travel at sonic velocity through a medium.
 (c) In general, one can say that flow losses will show up as a decrease in stagnation enthalpy.
 (d) The stagnation process is one of constant entropy.
 (e) A Mach cone does not exist for subsonic flow.

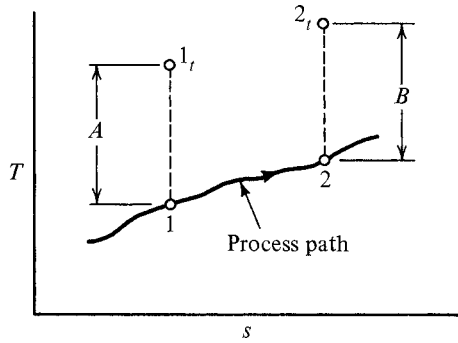


Figure CT4.2

- 4.4. Cite the conditions that are necessary for the stagnation temperature to remain constant in a flow system.
- 4.5. For steady flow of a perfect gas, the continuity equation can be written as

$$\dot{m} = f(p, M, T, \gamma, A, R, g_c) = \text{const}$$

Determine the precise function.

- 4.6. Work Problem 4.14.

Chapter 5

Varying-Area Adiabatic Flow

5.1 INTRODUCTION

Area changes, friction, and heat transfer are the most important factors that affect the properties in a flow system. Although some situations may involve the simultaneous effects of two or more of these factors, the majority of engineering problems are such that *only one of these factors becomes the dominant influence for any particular device*. Thus it is more than academic interest that leads to the separate study of each of the above-mentioned effects. In this manner it is possible to consider only the controlling factor and develop a simple solution that is within the realm of acceptable engineering accuracy.

In this chapter we consider the general problem of varying-area flow under the assumptions of no heat transfer (adiabatic) and no shaft work. We first consider the flow of an arbitrary fluid without losses and determine how its properties are affected by area changes. The case of a perfect gas is then considered and simple working equations developed to aid in the solution of problems with or without flow losses. The latter case (isentropic flow) lends itself to the construction of tables which are used throughout the remainder of the book. The chapter closes with a brief discussion of the various ways in which nozzle and diffuser performance can be represented.

5.2 OBJECTIVES

After completing this chapter successfully, you should be able to:

1. (*Optional*) Simplify the basic equations for continuity and energy to relate differential changes in density, pressure, and velocity to the Mach number and a differential change in area for steady, one-dimensional flow through a varying-area passage with no losses.

2. Show graphically how pressure, density, velocity, and area vary in steady, one-dimensional, isentropic flow as the Mach number ranges from zero to supersonic values.
3. Compare the function of a nozzle and a diffuser. Sketch physical devices that perform as each for subsonic and supersonic flow.
4. (*Optional*) Derive the working equations for a perfect gas relating property ratios between two points in adiabatic, no-work flow, as a function of the Mach number (M), ratio of specific heats (γ), and change in entropy (Δs).
5. Define the * reference condition and the properties associated with it (i.e., A^* , p^* , T^* , ρ^* , etc.).
6. Express the loss (Δs_i) (between two points in the flow) as a function of stagnation pressures (p_t) or reference areas (A^*). Under what conditions are these relations true?
7. State and interpret the relation between stagnation pressure (p_t) and reference area (A^*) for a process between two points in adiabatic no-work flow.
8. Explain how a converging nozzle performs with various receiver pressures. Do the same for the *isentropic* performance of a converging–diverging nozzle.
9. State what is meant by the first and third critical modes of nozzle operation. Given the area ratio of a converging–diverging nozzle, determine the operating pressure ratios that cause operation at the first and third critical points.
10. With the aid of an h – s diagram, give a suitable definition for both nozzle efficiency and diffuser performance.
11. Describe what is meant by a *choked* flow passage.
12. Demonstrate the ability to utilize the adiabatic and isentropic flow relations and the isentropic table to solve typical flow problems.

5.3 GENERAL FLUID-NO LOSSES

We first consider the general behavior of an arbitrary fluid. To isolate the effects of area change, we make the following assumptions:

Steady, one-dimensional flow	
Adiabatic	$\delta q = 0, ds_e = 0$
No shaft work	$\delta w_s = 0$
Neglect potential	$dz = 0$
No losses	$ds_i = 0$

Our objective will be to obtain relations that indicate the variation of fluid properties with area changes *and* Mach number. In this manner we can distinguish the important differences between subsonic and supersonic behavior. We start with the energy equation:

$$\delta q = \delta w_s + dh + \frac{dV^2}{2g_c} + \frac{g}{g_c} dz \quad (2.53)$$

But

$$\delta q = \delta w_s = 0$$

and

$$dz = 0$$

which leaves

$$0 = dh + \frac{dV^2}{2g_c} \quad (5.1)$$

or

$$dh = -\frac{V dV}{g_c} \quad (5.2)$$

We now introduce the property relation

$$T ds = dh - \frac{dp}{\rho} \quad (1.41)$$

Since our flow situation has been assumed to be adiabatic ($ds_e = 0$) and to contain no losses ($ds_i = 0$), it is also isentropic ($ds = 0$). Thus equation (1.41) becomes

$$dh = \frac{dp}{\rho} \quad (5.3)$$

We equate equations (5.2) and (5.3) to obtain

$$-\frac{V dV}{g_c} = \frac{dp}{\rho}$$

or

$$dV = -\frac{g_c dp}{\rho V} \quad (5.4)$$

We introduce this into equation (2.32) and the differential form of the continuity equation becomes

$$\frac{d\rho}{\rho} + \frac{dA}{A} - \frac{g_c dp}{\rho V^2} = 0 \quad (5.5)$$

Solve this for dp/ρ and *show* that

$$\frac{dp}{\rho} = \frac{V^2}{g_c} \left(\frac{d\rho}{\rho} + \frac{dA}{A} \right) \quad (5.6)$$

Recall the definition of sonic velocity:

$$a^2 = g_c \left(\frac{\partial p}{\partial \rho} \right)_s \quad (4.5)$$

Since our flow *is* isentropic, we may drop the subscript and change the partial derivative to an ordinary derivative:

$$a^2 = g_c \frac{dp}{d\rho} \quad (5.7)$$

This permits equation (5.7) to be rearranged to

$$dp = \frac{a^2}{g_c} d\rho \quad (5.8)$$

Substituting this expression for dp into equation (5.6) yields

$$\frac{dp}{\rho} = \frac{V^2}{a^2} \left(\frac{d\rho}{\rho} + \frac{dA}{A} \right) \quad (5.9)$$

Introduce the definition of Mach number,

$$M^2 = \frac{V^2}{a^2} \quad (4.11)$$

and combine the terms in $d\rho/\rho$ to obtain the following relation between density and area changes:

$$\frac{d\rho}{\rho} = \left(\frac{M^2}{1 - M^2} \right) \frac{dA}{A} \quad (5.10)$$

If we now substitute equation (5.10) into the differential form of the continuity equation (2.32), we can obtain a relation between velocity and area changes. *Show* that

$$\frac{dV}{V} = - \left(\frac{1}{1 - M^2} \right) \frac{dA}{A} \quad (5.11)$$

Now equation (5.4) can be divided by V to yield

$$\frac{dV}{V} = -\frac{g_c dp}{\rho V^2} \quad (5.12)$$

If we equate (5.11) and (5.12), we can obtain a relation between pressure and area changes. *Show* that

$$dp = \frac{\rho V^2}{g_c} \left(\frac{1}{1 - M^2} \right) \frac{dA}{A} \quad (5.13)$$

For convenience, we collect the three important relations that will be referred to in the analysis that follows:

$$dp = \frac{\rho V^2}{g_c} \left(\frac{1}{1 - M^2} \right) \frac{dA}{A} \quad (5.13)$$

$$\frac{d\rho}{\rho} = \left(\frac{M^2}{1 - M^2} \right) \frac{dA}{A} \quad (5.10)$$

$$\frac{dV}{V} = -\left(\frac{1}{1 - M^2} \right) \frac{dA}{A} \quad (5.11)$$

Let us consider what is happening as fluid flows through a variable-area duct. For simplicity we shall *assume that the pressure is always decreasing*. Thus dp is negative. From equation (5.13) you see that if $M < 1$, dA must be negative, indicating that the area is decreasing; whereas if $M > 1$, dA must be positive and the area is increasing.

Now continue to assume that the pressure is decreasing. Knowing the area variation you can now consider equation (5.10). Fill in the following blanks with the words *increasing* or *decreasing*: If $M < 1$ (and dA is _____), then $d\rho$ must be _____. If $M > 1$ (and dA is _____), then $d\rho$ must be _____.

Looking at equation (5.11) reveals that if $M < 1$ (and dA is _____) then, dV must be _____ meaning that velocity is _____, whereas if $M > 1$ (and dA is _____), then dV must be _____ and velocity is _____.

We summarize the above by saying that *as the pressure decreases*, the following variations occur:

		Subsonic ($M < 1$)	Supersonic ($M > 1$)
Area	A	Decreases	Increases
Density	ρ	Decreases	Decreases
Velocity	V	Increases	Increases

A similar chart could easily be made for the situation where pressure increases, but it is probably more convenient to express the above in an alternative graphical form, as

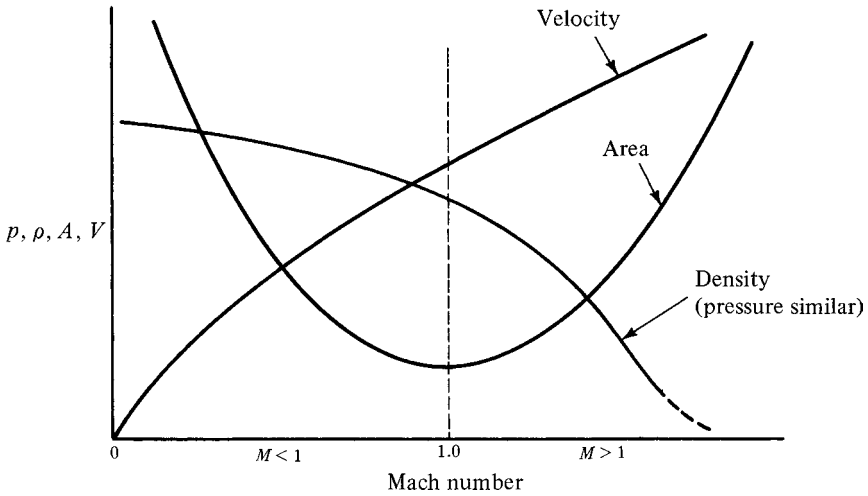


Figure 5.1 Property variation with area change.

shown in Figure 5.1. The appropriate shape of these curves can easily be visualized if one combines equations (5.10) and (5.11) to eliminate the term dA/A with the following result:

$$\frac{d\rho}{\rho} = -M^2 \frac{dV}{V} \tag{5.14}$$

From this equation we see that at low Mach numbers, density variations will be quite small, whereas at high Mach numbers the density changes *very* rapidly. (Eventually, as V becomes very large and ρ becomes very small, small density changes occur once again.) This means that the density is nearly constant in the low subsonic regime ($d\rho \approx 0$) and the velocity changes compensate for area changes. [See the differential form of the continuity equation (2.32).] At a Mach number equal to unity, we reach a situation where density changes and velocity changes compensate for one another and thus no change in area is required ($dA = 0$). As we move on into the supersonic area, the density decreases so rapidly that the accompanying velocity change cannot accommodate the flow and thus the area must increase. We now recognize another aspect of flow behavior which is exactly opposite in subsonic and supersonic flow. Consider the operation of devices such as nozzles and diffusers.

A *nozzle* is a device that converts enthalpy (or pressure energy for the case of an incompressible fluid) into kinetic energy. From Figure 5.1 we see that an increase in velocity is accompanied by either an increase or decrease in area, depending on the Mach number. Figure 5.2 shows what these devices look like in the subsonic and supersonic flow regimes.

A *diffuser* is a device that converts kinetic energy into enthalpy (or pressure energy for the case of incompressible fluids). Figure 5.3 shows what these devices look like

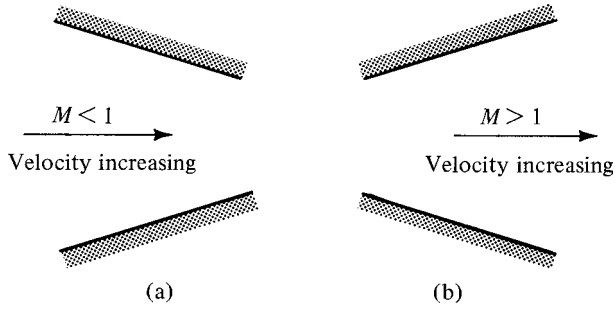


Figure 5.2 Nozzle configurations.

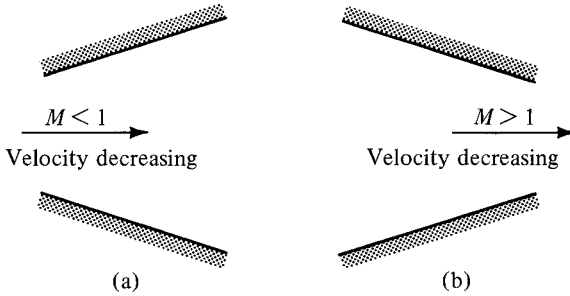


Figure 5.3 Diffuser configurations.

in the subsonic and supersonic regimes. Thus we see that the same piece of equipment can operate as either a nozzle or a diffuser, depending on the flow regime.

Notice that a device is called a nozzle or a diffuser because of *what it does*, not what it looks like. Further consideration of Figures 5.1 and 5.2 leads to some interesting conclusions. If one attached a converging section (see Figure 5.2a) to a high-pressure supply, one could never attain a flow greater than Mach 1, regardless of the pressure differential available. On the other hand, if we made a converging–diverging device (combination of Figure 5.2a and b), we see a means of accelerating the fluid into the supersonic regime, provided that the proper pressure differential exists. Specific examples of these cases are given later in the chapter.

5.4 PERFECT GASES WITH LOSSES

Now that we understand the general effects of area change in a flow system, we will develop some specific working equations for the case of a perfect gas. The term *working equations* will be used throughout this book to indicate relations between properties at arbitrary sections of a flow system written in terms of Mach numbers,

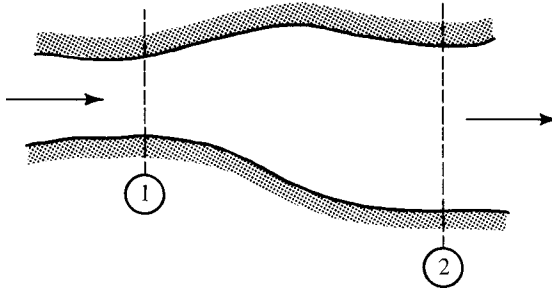


Figure 5.4 Varying-area flow system.

specific heat ratio, and a loss indicator such as Δs_i . An example of this for the system shown in Figure 5.4 is

$$\frac{p_2}{p_1} = f(M_1, M_2, \gamma, \Delta s_i) \tag{5.15}$$

We begin by feeding the following assumptions into our fundamental concepts of state, continuity, and energy:

- Steady one-dimensional flow
- Adiabatic
- No shaft work
- Perfect gas
- Neglect potential

State

We have the perfect gas equation of state:

$$p = \rho RT \tag{1.13}$$

Continuity

$$\dot{m} = \rho AV = \text{const} \tag{2.30}$$

$$\rho_1 A_1 V_1 = \rho_2 A_2 V_2 \tag{5.16}$$

We first seek the area ratio

$$\frac{A_2}{A_1} = \frac{\rho_1 V_1}{\rho_2 V_2} \tag{5.17}$$

We substitute for the densities using the equation of state (1.13) and for velocities from the definition of Mach number (4.11):

$$\frac{A_2}{A_1} = \left(\frac{p_1}{RT_1} \right) \left(\frac{RT_2}{p_2} \right) \frac{M_1 a_1}{M_2 a_2} = \frac{p_1 T_2 M_1 a_1}{p_2 T_1 M_2 a_2} \quad (5.18)$$

Introduce the expression for the sonic velocity of a perfect gas:

$$a = \sqrt{\gamma g_c RT} \quad (4.10)$$

and *show* that equation (5.18) becomes

$$\frac{A_2}{A_1} = \frac{p_1 M_1}{p_2 M_2} \left(\frac{T_2}{T_1} \right)^{1/2} \quad (5.19)$$

We must now find a means to express the pressure and temperature ratios in terms of M_1 , M_2 , γ , and Δs .

Energy

We start with

$$h_{t1} + q = h_{t2} + w_s \quad (3.19)$$

For an adiabatic, no-work process, this shows that

$$h_{t1} = h_{t2} \quad (5.20)$$

However, we can go further than this since we know that for a perfect gas, enthalpy is a function of temperature *only*. Thus

$$T_{t1} = T_{t2} \quad (5.21)$$

Recall from Chapter 4 that we developed a general relationship between static and stagnation temperatures for a perfect gas as

$$T_t = T \left(1 + \frac{\gamma - 1}{2} M^2 \right) \quad (4.18)$$

Hence equation (5.21) can be written as

$$T_1 \left(1 + \frac{\gamma - 1}{2} M_1^2 \right) = T_2 \left(1 + \frac{\gamma - 1}{2} M_2^2 \right) \quad (5.22)$$

or

$$\frac{T_2}{T_1} = \frac{1 + [(\gamma - 1)/2]M_1^2}{1 + [(\gamma - 1)/2]M_2^2} \quad (5.23)$$

which is the ratio desired for equation (5.19). Note that no subscripts have been put on the specific heat ratio γ , which means we are assuming that $\gamma_1 = \gamma_2$. This might be questioned since the specific heats c_p and c_v are known to vary somewhat with temperature. In Chapter 11 we explore real gas behavior and learn why these specific heats vary and discover that their *ratio* (γ) does not exhibit much change except over large temperature ranges. Thus the assumption of constant γ generally leads to acceptable engineering accuracy.

Recall from Chapter 4 that we also developed a general relationship between static and stagnation pressures for a perfect gas:

$$p_t = p \left(1 + \frac{\gamma - 1}{2} M^2 \right)^{\gamma/(\gamma-1)} \tag{4.21}$$

Furthermore, the stagnation pressure–energy equation was easily integrated for the case of a perfect gas in adiabatic, no-work flow to yield

$$\frac{p_{t2}}{p_{t1}} = e^{-\Delta s/R} \tag{4.28}$$

If we introduce equation (4.21) into (4.28), we have

$$\frac{p_{t2}}{p_{t1}} = \frac{p_2}{p_1} \left(\frac{1 + [(\gamma - 1)/2]M_2^2}{1 + [(\gamma - 1)/2]M_1^2} \right)^{\gamma/(\gamma-1)} = e^{-\Delta s/R} \tag{5.24}$$

Rearrange this to obtain the ratio

$$\frac{p_1}{p_2} = \left(\frac{1 + [(\gamma - 1)/2]M_2^2}{1 + [(\gamma - 1)/2]M_1^2} \right)^{\gamma/(\gamma-1)} e^{+\Delta s/R} \tag{5.25}$$

We now have the desired information to accomplish the original objective. Direct substitution of equations (5.23) and (5.25) into (5.19) yields

$$\begin{aligned} \frac{A_2}{A_1} &= \left[\left(\frac{1 + [(\gamma - 1)/2]M_2^2}{1 + [(\gamma - 1)/2]M_1^2} \right)^{\gamma/(\gamma-1)} e^{\Delta s/R} \right] \times \\ &\quad \frac{M_1}{M_2} \left(\frac{1 + [(\gamma - 1)/2]M_1^2}{1 + [(\gamma - 1)/2]M_2^2} \right)^{1/2} \end{aligned} \tag{5.26}$$

Show that this can be simplified to

$$\frac{A_2}{A_1} = \frac{M_1}{M_2} \left(\frac{1 + [(\gamma - 1)/2]M_2^2}{1 + [(\gamma - 1)/2]M_1^2} \right)^{(\gamma+1)/2(\gamma-1)} e^{\Delta s/R} \tag{5.27}$$

Note that to obtain this equation, we automatically discovered a number of other working equations, which for convenience we summarize below.

$$T_{t1} = T_{t2} \quad (5.21)$$

$$\frac{P_{t2}}{P_{t1}} = e^{-\Delta s/R} \quad (4.28)$$

$$\frac{T_2}{T_1} = \frac{1 + [(\gamma - 1)/2]M_1^2}{1 + [(\gamma - 1)/2]M_2^2} \quad (5.23)$$

$$\frac{P_2}{P_1} = \left(\frac{1 + [(\gamma - 1)/2]M_1^2}{1 + [(\gamma - 1)/2]M_2^2} \right)^{\gamma/(\gamma-1)} e^{-\Delta s/R} \quad \text{from} \quad (5.25)$$

From equations (1.13), (5.23), and (5.25) you should also be able to show that

$$\frac{\rho_2}{\rho_1} = \left(\frac{1 + [(\gamma - 1)/2]M_1^2}{1 + [(\gamma - 1)/2]M_2^2} \right)^{1/(\gamma-1)} e^{-\Delta s/R} \quad (5.28)$$

Example 5.1 Air flows in an adiabatic duct without friction. At one section the Mach number is 1.5, and farther downstream it has increased to 2.8. Find the area ratio.

For a frictionless, adiabatic system, $\Delta s = 0$. We substitute directly into equation (5.27):

$$\frac{A_2}{A_1} = \frac{1.5}{2.8} \left[\frac{1 + [(1.4 - 1)/2](2.8)^2}{1 + [(1.4 - 1)/2](1.5)^2} \right]^{(1.4+1)/2(1.4-1)} \quad (1) = 2.98$$

This problem is very simple since both Mach numbers are known. The inverse problem (given A_1 , A_2 , and M_1 , find M_2) is not so straightforward. We shall come back to this in Section 5.6 after we develop a new concept.

5.5 THE * REFERENCE CONCEPT

In Section 3.5 the concept of a stagnation reference state was introduced, which by the nature of its definition turned out to involve an isentropic process. Before going any further with the working equations developed in Section 5.4, it will be convenient to introduce another reference condition because, among other things, the stagnation state is not a feasible reference when dealing with area changes. (Why?) We denote this new reference state with a superscript * and define it as “that thermodynamic state which would exist if the fluid reached a Mach number of unity by *some particular process*”. The italicized phrase is significant, for there are many processes by which we could reach Mach 1.0 from any given starting point, and they would each lead to a different thermodynamic state. Every time we analyze a different flow phenomenon we will be considering different types of processes, and thus we will be dealing with a different * reference state.

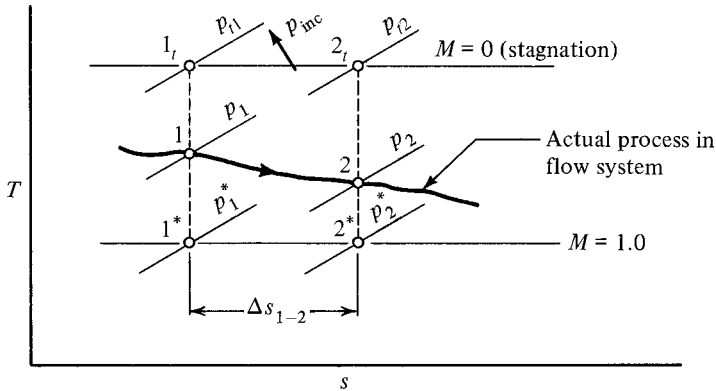


Figure 5.5 Isentropic * reference states.

We first consider a * reference state reached under reversible-adiabatic conditions (i.e., by an isentropic process). Every point in the flow system has its own * reference state, just as it has its own stagnation reference state. As an illustration, consider a system that involves the flow of a perfect gas with no heat or work transfer. Figure 5.5 shows a $T-s$ diagram indicating two points in such a flow system. Above each point is shown its stagnation reference state, and we now add the isentropic * reference state that is associated with each point. Not only is the stagnation line for the entire system a horizontal line, but in this system all * reference points will lie on a horizontal line (see the discussion in Section 4.6). Is the flow subsonic or supersonic in the system depicted in Figure 5.5?

We now proceed to develop an extremely important relation. Keep in mind that * reference states probably don't exist in the system, but with appropriate area changes *they could exist*, and as such they represent legitimate section locations to be used with any of the equations that we developed earlier [such as equations (5.23), (5.25), (5.27), etc.]. Specifically, let us consider

$$\frac{A_2}{A_1} = \frac{M_1}{M_2} \left(\frac{1 + [(\gamma - 1)/2]M_2^2}{1 + [(\gamma - 1)/2]M_1^2} \right)^{(\gamma+1)/2(\gamma-1)} e^{\Delta s/R} \quad (5.27)$$

In this equation, points 1 and 2 represent *any* two points that could exist in a system (subject to the same assumptions that led to the development of the equation). We now apply equation (5.27) between points 1* and 2*. Thus

$$\begin{aligned} A_1 &\Rightarrow A_1^* & M_1 &\Rightarrow M_1^* \equiv 1 \\ A_2 &\Rightarrow A_2^* & M_2 &\Rightarrow M_2^* \equiv 1 \end{aligned}$$

and we have:

$$\frac{A_2^*}{A_1^*} = \frac{1}{1} \left(\frac{1 + [(\gamma - 1)/2]1^2}{1 + [(\gamma - 1)/2]1^2} \right)^{(\gamma+1)/2(\gamma-1)} e^{\Delta s/R}$$

or

$$\boxed{\frac{A_2^*}{A_1^*} = e^{\Delta s/R}} \quad (5.29)$$

Before going further, it might be instructive to check this relation to see if it appears reasonable. First, take the case of no losses where $\Delta s = 0$. Then equation (5.29) says that $A_1^* = A_2^*$. Check Figure 5.5 for the case of $\Delta s_{1-2} = 0$. Under these conditions the diagram collapses into a single isentropic line on which 1_t is identical with 2_t , and 1^* is the same point as 2^* . Under this condition, it should be obvious that A_1^* is the same as A_2^* .

Next, take the more general case where Δs_{1-2} is nonzero. Assuming that these points exist in a flow system, they must pass the same amount of fluid, or

$$\dot{m} = \rho_1^* A_1^* V_1^* = \rho_2^* A_2^* V_2^* \quad (5.30)$$

Recall from Section 4.6 that since these state points are on the same horizontal line,

$$V_1^* = V_2^* \quad (5.31)$$

Similarly, we know that $T_1^* = T_2^*$, and from Figure 5.5 it is clear that $p_1^* > p_2^*$. Thus from the equation of state, we can easily determine that

$$\rho_2^* < \rho_1^* \quad (5.32)$$

Introduce equations (5.31) and (5.32) into (5.30) and *show* that for the case of $\Delta s_{1-2} > 0$,

$$A_2^* > A_1^* \quad (5.33)$$

which agrees with equation (5.29).

We have previously developed a relation between the stagnation pressures (which involves the same assumptions as equation (5.29):

$$\boxed{\frac{p_{t2}}{p_{t1}} = e^{-\Delta s/R}} \quad (4.28)$$

Check Figure 5.5 to convince yourself that this equation also appears to give reasonable answers for the special case of $\Delta s = 0$ and for the general case of $\Delta s > 0$.

We now multiply equation (5.29) by equation (4.28):

$$\frac{A_2^* p_{t2}}{A_1^* p_{t1}} = (e^{\Delta s/R}) (e^{-\Delta s/R}) = 1 \tag{5.34}$$

or

$$\boxed{p_{t1} A_1^* = p_{t2} A_2^*} \tag{5.35}$$

This is a most important relation that is frequently the key to problem solutions in adiabatic flow. Learn equation (5.35) and the conditions under which it applies.

5.6 ISENTROPIC TABLE

In Section 5.4 we considered the steady, one-dimensional flow of a perfect gas under the conditions of no heat and work transfer and negligible potential changes. Looking back over the working equations that were developed reveals that many of them do not include the loss term (Δs_i). In those where the loss term does appear, it takes the form of a simple multiplicative factor such as $e^{\Delta s/R}$. This leads to the natural use of the isentropic process as a standard for ideal performance with appropriate corrections made to account for losses when necessary. In a number of cases, we find that some actual processes are so efficient that they are very nearly isentropic and thus need no corrections.

If we simplify equation (5.27) for an isentropic process, it becomes

$$\frac{A_2}{A_1} = \frac{M_1}{M_2} \left(\frac{1 + [(\gamma - 1)/2]M_2^2}{1 + [(\gamma - 1)/2]M_1^2} \right)^{(\gamma+1)/2(\gamma-1)} \tag{5.36}$$

This is easy to solve for the area ratio if both Mach numbers are known (see Example 5.1), but let's consider a more typical problem. The physical situation is fixed (i.e., A_1 and A_2 are known). The fluid (and thus γ) is known, and the Mach number at one location (say, M_1) is known. Our problem is to solve for the Mach number (M_2) at the other location. Although this is not impossible, it is messy and a lot of work.

We can simplify the solution by the introduction of the * reference state. Let point 2 be an arbitrary point in the flow system, and let its isentropic * point be point 1. Then

$$\begin{aligned} A_2 &\Rightarrow A & M_2 &\Rightarrow M \text{ (any value)} \\ A_1 &\Rightarrow A^* & M_1 &\Rightarrow 1 \end{aligned}$$

and equation (5.36) becomes

$$\frac{A}{A^*} = \frac{1}{M} \left(\frac{1 + [(\gamma - 1)/2]M^2}{(\gamma + 1)/2} \right)^{(\gamma+1)/2(\gamma-1)} = f(M, \gamma) \quad (5.37)$$

We see that $A/A^* = f(M, \gamma)$, and we can easily construct a table giving values of A/A^* versus M for a particular γ . The problem posed earlier could then be solved as follows:

Given: γ, A_1, A_2, M_1 , and isentropic flow.

Find: M_2 .

We approach the solution by formulating the ratio A_2/A_2^* in terms of known quantities.

$$\frac{A_2}{A_2^*} = \frac{A_2}{A_1} \frac{A_1}{A_1^*} \frac{A_1^*}{A_2^*} \quad (5.38)$$

Given $\xrightarrow{\quad}$ \uparrow \uparrow \uparrow $\left\{ \begin{array}{l} \text{Evaluated by equation (5.29) and} \\ \text{equals 1.0 if flow is isentropic} \end{array} \right.$
 $\left\{ \begin{array}{l} \text{A function of } M_1; \text{ look} \\ \text{up in isentropic table} \end{array} \right.$

Thus A_2/A_2^* can be calculated, and by entering the isentropic table with this value, M_2 can be determined. *A word of caution here!* The value of A_2/A_2^* will be found in *two* places in the table, as we are really solving equation (5.36), or the more general case equation (5.27), which is a quadratic for M_2 . One value will be in the subsonic region and the other in the supersonic regime. You should have no difficulty determining which answer is correct when you consider the physical appearance of the system together with the concepts developed in Section 5.3.

Note that the general problem *with losses* can also be solved by the same technique as long as information is available concerning the loss. This could be given to us in the form of A_1^*/A_2^* , p_{t2}/p_{t1} , or possibly as Δs_{1-2} . All three of these represent equivalent ways of expressing the loss [through equations (4.28) and (5.29)].

We now realize that the key to simplified problem solution is to have available a table of property ratios as a function of γ and *one* Mach number only. These are obtained by taking the equations developed in Section 5.4 and introducing a reference state, either the $*$ reference condition (reached by an isentropic process) or the stagnation reference condition (reached by an isentropic process). We proceed with equation (5.23):

$$\frac{T_2}{T_1} = \frac{1 + [(\gamma - 1)/2]M_1^2}{1 + [(\gamma - 1)/2]M_2^2} \quad (5.23)$$

Let point 2 be any arbitrary point in the system and let its stagnation point be point 1. Then

$$\begin{aligned} T_2 &\Rightarrow T & M_2 &\Rightarrow M \quad (\text{any value}) \\ T_1 &\Rightarrow T_t & M_1 &\Rightarrow 0 \end{aligned}$$

and equation (5.23) becomes

$$\frac{T}{T_t} = \frac{1}{1 + [(\gamma - 1)/2]M^2} = f(M, \gamma) \tag{5.39}$$

Equation (5.25) can be treated in a similar fashion. In this case we let 1 be the arbitrary point and its stagnation point is taken as 2. Then

$$\begin{aligned} p_1 &\Rightarrow p & M_1 &\Rightarrow M \quad (\text{any value}) \\ p_2 &\Rightarrow p_t & M_2 &\Rightarrow 0 \end{aligned}$$

and when we remember that the stagnation process is isentropic, equation (5.25) becomes

$$\frac{p}{p_t} = \left(\frac{1}{1 + [(\gamma - 1)/2]M^2} \right)^{\gamma/(\gamma-1)} = f(M, \gamma) \tag{5.40}$$

Equations (5.39) and (5.40) are not surprising, as we have developed these previously by other methods [see equations (4.18) and (4.21)]. The tabulation of equation (5.40) may be used to solve problems in the same manner as the area ratio. For example, assume that we are

Given: γ, p_1, p_2, M_2 , and Δs_{1-2} and asked to
Find: M_1 .

To solve this problem, we seek the ratio p_1/p_{t1} in terms of known ratios:

$$\frac{p_1}{p_{t1}} = \frac{p_1}{p_2} \frac{p_2}{p_{t2}} \frac{p_{t2}}{p_{t1}} \tag{5.41}$$

Given $\xrightarrow{\hspace{2cm}}$ \uparrow \uparrow \uparrow $\left\{ \begin{array}{l} \text{Evaluated by equation (4.28)} \\ \text{as a function of } \Delta s_{1-2} \end{array} \right.$

$\left\{ \begin{array}{l} \text{A function of } M_2; \text{ look} \\ \text{up in isentropic table} \end{array} \right.$

After calculating the value of p_1/p_{t1} , we enter the isentropic table and find M_1 . Note that even though the flow from station 1 to 2 is *not* isentropic, the functions for p_1/p_{t1} and p_2/p_{t2} are *isentropic by definition*; thus the isentropic table can be used to solve this problem. The connection *between* the two points is made through p_{t2}/p_{t1} , which involves the entropy change.

We could continue to develop other isentropic relations as functions of the Mach number and γ . Apply the previous techniques to equation (5.28) and show that

$$\frac{\rho}{\rho_t} = \left(\frac{1}{1 + [(\gamma - 1)/2]M^2} \right)^{1/(\gamma-1)} \quad (5.42)$$

Another interesting relationship is the product of equations (5.37) and (5.40):

$$\frac{A}{A^*} \frac{p}{p_t} = f(M, \gamma) \quad (5.43)$$

Determine what unique function of M and γ is represented in equation (5.43). Since A/A^* and p/p_t are isentropic by definition, we should not be surprised that their product is listed in the isentropic table. But can these functions provide the connection *between* two locations in a flow system *with known losses*?

Recall that

$$\frac{p_{t2}}{p_{t1}} = e^{-\Delta s/R} \quad (4.28)$$

and

$$\frac{A_2^*}{A_1^*} = e^{\Delta s/R} \quad (4.29)$$

Thus, for cases involving losses (Δs), changes in A^* are exactly compensated for by changes in p_t . This is true for all steady, one-dimensional flows of a perfect gas in an adiabatic no-work system. We shall see later that equation (5.43) provides the only direct means of solving certain types of problems.

Values of these isentropic flow parameters have been calculated from equations (5.37), (5.39), (5.40), and so on, and tabulated in Appendix G. To convince yourself that there is nothing magical about this table, you might want to check some of the numbers found in them opposite a particular Mach number. In fact, as an exercise in programming a digital computer, you could work up your own set of tables for values of γ other than 1.4, which is the only one included in Appendix G (see Problem 5.24). In Section 5.10 we suggest alternatives to the use of the table. As you read the following examples, look up the numbers in the isentropic table to convince yourself that you know how to find them.

Example 5.2 You are now in a position to rework Example 5.1 with a minimum of calculation. Recall that $M_1 = 1.5$ and $M_2 = 2.8$.

$$\frac{A_2}{A_1} = \frac{A_2}{A_2^*} \frac{A_2^*}{A_1^*} \frac{A_1^*}{A_1} = (3.5001)(1) \left(\frac{1}{1.1762} \right) = 2.98$$

The following information (and Figure E5.3) are common to Examples 5.3 through 5.5. We are given the steady, one-dimensional flow of air ($\gamma = 1.4$), which can be treated as a perfect gas. Assume that $Q = W_s = 0$ and negligible potential changes. $A_1 = 2.0 \text{ ft}^2$ and $A_2 = 5.0 \text{ ft}^2$.

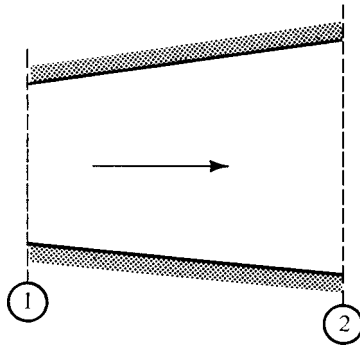


Figure E5.3

Example 5.3 Given that $M_1 = 1.0$ and $\Delta s_{1-2} = 0$. Find the possible values of M_2 .
To determine conditions at section 2 in Figure E5.3, we establish the ratio

$$\frac{A_2}{A_2^*} = \frac{A_2}{A_1} \frac{A_1}{A_1^*} \frac{A_1^*}{A_2^*} = \left(\frac{5}{2}\right) (1.000)(1) = 2.5$$

↑ ↑ ↑ ← Equals 1.0 since isentropic
 From isentropic table at $M = 1.0$
 From given physical configuration

Look up $A/A^* = 2.5$ in the isentropic table and determine that $M_2 = 0.24$ or 2.44 . We can't tell which Mach number exists without additional information.

Example 5.4 Given that $M_1 = 0.5$, $p_1 = 4$ bar, and $\Delta s_{1-2} = 0$, find M_2 and p_2 .

$$\frac{A_2}{A_2^*} = \frac{A_2}{A_1} \frac{A_1}{A_1^*} \frac{A_1^*}{A_2^*} = \left(\frac{5}{2}\right) (1.3398)(1) = 3.35$$

Thus $M_2 \approx 0.175$. (Why isn't it 2.75?)

$$p_2 = \frac{p_2}{p_{t2}} \frac{p_{t2}}{p_{t1}} \frac{p_{t1}}{p_1} p_1 = (0.9788)(1) \left(\frac{1}{0.8430}\right) (4) = 4.64 \text{ bar}$$

Example 5.5 Given: $M_1 = 1.5$, $T_1 = 70^\circ\text{F}$, and $\Delta s_{1-2} = 0$,
Find: M_2 and T_2 .

Find $A_2/A_2^* = ?$ (Thus $M_2 \approx 2.62$.)

Once M_2 is known, we can find T_2 .

$$T_2 = \frac{T_2}{T_{t2}} \frac{T_{t2}}{T_{t1}} \frac{T_{t1}}{T_1} T_1 = (0.4214)(1) \left(\frac{1}{0.6897}\right) (530) = 324^\circ\text{R}$$

Why is $T_{t1} = T_{t2}$? (Write an energy equation between 1 and 2.)

Example 5.6 Oxygen flows into an insulated device with the following initial conditions: $p_1 = 20$ psia, $T_1 = 600^\circ\text{R}$, and $V_1 = 2960$ ft/sec. After a short distance the area has converged

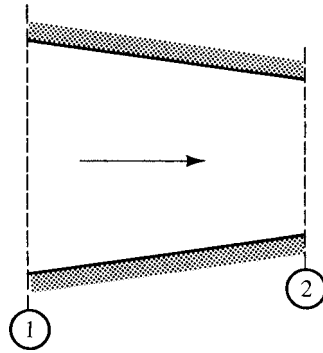


Figure E5.6

from 6 ft² to 2.5 ft² (Figure E5.6). You may assume steady, one-dimensional flow and a perfect gas. (See the table in Appendix A for gas properties.)

- (a) Find M_1 , p_{t1} , T_{t1} , and h_{t1} .
 (b) If there are losses such that $\Delta s_{1-2} = 0.005$ Btu/lbm-°R, find M_2 , p_2 , and T_2 .

- (a) First, we determine conditions at station 1.

$$a_1 = (\gamma g_c R T_1)^{1/2} = [(1.4)(32.2)(48.3)(600)]^{1/2} = 1143 \text{ ft/sec}$$

$$M_1 = \frac{V_1}{a_1} = \frac{2960}{1143} = 2.59$$

$$p_{t1} = \frac{p_{t1}}{p_1} p_1 = \left(\frac{1}{0.0509} \right) (20) = 393 \text{ psia}$$

$$T_{t1} = \frac{T_{t1}}{T_1} T_1 = \left(\frac{1}{0.4271} \right) (600) = 1405^\circ\text{R}$$

$$h_{t1} = c_p T_{t1} = (0.218)(1405) = 306 \text{ Btu/lbm}$$

- (b) For a perfect gas with $q = w_s = 0$, $T_{t1} = T_{t2}$ (from an energy equation), and also from equation (5.29):

$$\frac{A_1^*}{A_2^*} = e^{-\Delta s/R} = e^{-(0.005)(778)/48.3} = 0.9226$$

Thus

$$\frac{A_2}{A_2^*} = \frac{A_2}{A_1} \frac{A_1}{A_1^*} \frac{A_1^*}{A_2^*} = \left(\frac{2.5}{6} \right) (2.8688)(0.9226) = 1.1028$$

From the isentropic table we find that $M_2 \approx$ _____. Why is the use of the isentropic table legitimate here when there are losses in the flow? Continue and compute p_2 and T_2 .

$$p_2 = \quad \quad \quad (P_2 \approx 117 \text{ psia})$$

$$T_2 = \quad \quad \quad (T_2 \approx 1017^\circ\text{R})$$

Could you find the velocity at section 2?

5.7 NOZZLE OPERATION

We will now start a discussion of nozzle operation and at the same time gain more experience in use of the isentropic table. Two types of nozzles are considered: a converging-only nozzle and a converging–diverging nozzle. We start by examining the physical situation shown in Figure 5.6. A source of air at 100 psia and 600°R is contained in a large tank where stagnation conditions prevail. Connected to the tank is a converging-only nozzle and it exhausts into an extremely large receiver where the pressure can be regulated. We can neglect frictional effects, as they are very small in a converging section.

If the receiver pressure is set at 100 psia, no flow results. Once the receiver pressure is lowered below 100 psia, air will flow from the supply tank. Since the supply tank has a large cross section relative to the nozzle outlet area, the velocities in the tank may be neglected. Thus $T_1 \approx T_{t1}$ and $p_1 \approx p_{t1}$. There is no shaft work and we assume no heat transfer. We identify section 2 as the nozzle outlet.

Energy

$$h_{t1} + \cancel{q} = h_{t2} + \cancel{\psi_s} \quad (3.19)$$

$$h_{t1} = h_{t2}$$

and since we can treat this as a perfect gas,

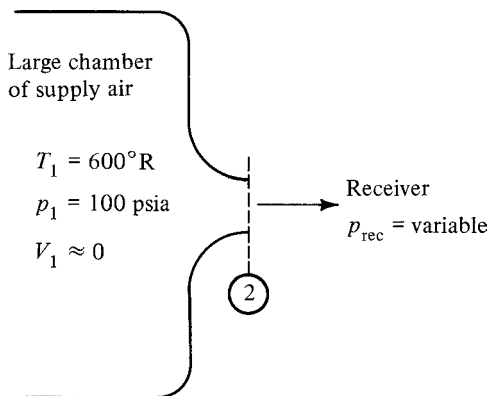


Figure 5.6 Converging-only nozzle.

$$T_{i1} = T_{i2}$$

It is important to recognize that the receiver pressure is controlling the flow. The velocity will increase and the pressure will decrease as we progress through the nozzle until the pressure at the nozzle outlet equals that of the receiver. This will always be true *as long as* the nozzle outlet can “sense” the receiver pressure. Can you think of a situation where pressure pulses from the receiver could not be “felt” inside the nozzle? (Recall Section 4.4.)

Let us assume that

$$p_{\text{rec}} = 80.2 \text{ psia}$$

Then

$$p_2 = p_{\text{rec}} = 80.2 \text{ psia}$$

and

$$\frac{p_2}{p_{t2}} = \frac{p_2}{p_{t1}} \frac{p_{t1}}{p_{t2}} = \left(\frac{80.2}{100} \right) (1) = 0.802$$

Note that $p_{t1} = p_{t2}$ by equation (4.28) since we are neglecting friction.

From the isentropic table corresponding to $p/p_t = 0.802$, we see that

$$M_2 = 0.57 \quad \text{and} \quad \frac{T_2}{T_{t2}} = 0.939$$

Thus

$$T_2 = \left(\frac{T_2}{T_{t2}} \right) T_{t2} = (0.939)(600) = 563^\circ\text{R}$$

$$a_2^2 = (1.4)(32.2)(53.3)(563)$$

$$a_2 = 1163 \text{ ft/sec}$$

and

$$V_2 = M_2 a_2 = (0.57)(1163) = 663 \text{ ft/sec}$$

Figure 5.7 shows this process on a T - s diagram as an isentropic expansion. If the pressure in the receiver were lowered further, the air would expand to this lower pressure and the Mach number and velocity would increase. Assume that the receiver pressure is lowered to 52.83 psia. *Show that*

$$\frac{p_2}{p_{t2}} = 0.5283$$

and thus

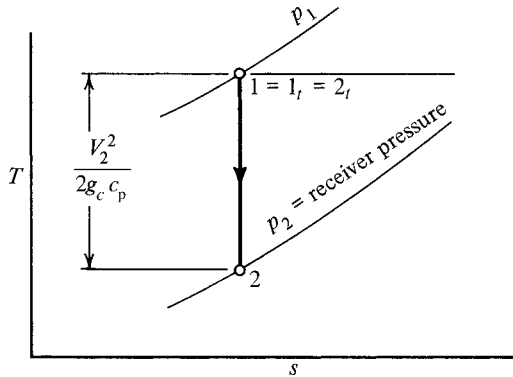


Figure 5.7 T - s diagram for converging-only nozzle.

$$M_2 = 1.00 \quad \text{with} \quad V_2 = 1096 \text{ ft/sec}$$

Notice that the air velocity coming out of the nozzle is exactly sonic. If we now drop the receiver pressure below this *critical pressure* (52.83 psia), the nozzle has no way of adjusting to these conditions. Why not? Assume that the nozzle outlet pressure could continue to drop along with the receiver. This would mean that $p_2/p_{t2} < 0.5283$, which corresponds to a supersonic velocity. We know that if the flow is to go supersonic, the area must reach a minimum and then increase (see Section 5.3). Thus for a converging-only nozzle, the flow is governed by the receiver pressure until sonic velocity is reached at the nozzle outlet and *further reduction of the receiver pressure will have no effect on the flow conditions inside the nozzle*. Under these conditions, the nozzle is said to be *choked* and the nozzle outlet pressure remains at the *critical pressure*. Expansion to the receiver pressure takes place *outside* the nozzle.

In reviewing this example you should realize that there is nothing magical about a receiver pressure of 52.83 psia. The significant item is the *ratio* of the static to total pressure at the exit plane, which for the case of no losses is the *ratio* of the receiver pressure to the inlet pressure. With sonic velocity at the exit, this *ratio* is 0.5283.

The analysis above assumes that conditions within the supply tank remain constant. One should realize that the choked flow rate can change if, for example, the supply pressure or temperature is changed or the size of the throat (exit hole) is changed. It is instructive to take an alternative view of this situation. You are asked in Problem 5.9 to develop the following equation for isentropic flow:

$$\frac{\dot{m}}{A} = M \left(1 + \frac{\gamma - 1}{2} M^2 \right)^{-(\gamma+1)/2(\gamma-1)} \left(\frac{\gamma g_c}{R} \right)^{1/2} \frac{p_t}{\sqrt{T_t}} \quad (5.44a)$$

Applying this equation to the outlet and considering choked flow, $M = 1$ and $A = A^*$. Then

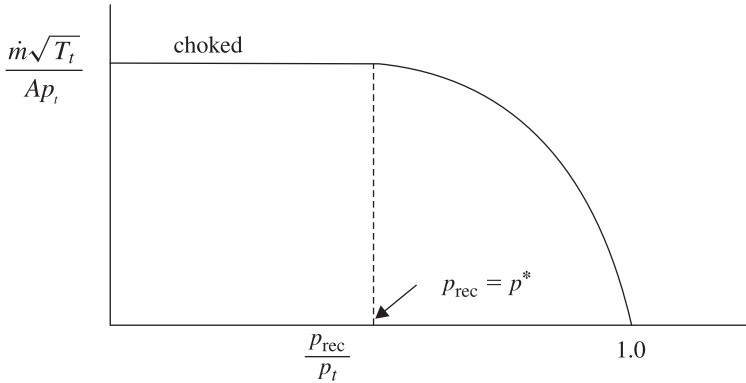


Figure 5.8 Operation of a converging-only nozzle at various back pressures.

$$\left(\frac{\dot{m}}{A}\right)_{\max} = \frac{\dot{m}}{A^*} = \left[\frac{\gamma g_c}{R} \left(\frac{2}{\gamma + 1}\right)^{(\gamma+1)/(\gamma-1)} \right]^{1/2} \frac{p_t}{\sqrt{T_t}} \quad (5.44b)$$

For a given gas,

$$\frac{\dot{m}}{A^*} = \text{constant} \frac{p_t}{\sqrt{T_t}} \quad (5.44c)$$

We now look at four distinct possibilities:

1. For a fixed T_t , p_t , and A^* $\Rightarrow \dot{m}_{\max}$ constant.
2. For only p_t increasing $\Rightarrow \dot{m}_{\max}$ increases.
3. For only T_t increasing $\Rightarrow \dot{m}_{\max}$ decreases.
4. For only A^* increasing $\Rightarrow \dot{m}_{\max}$ increases.

Figure 5.8 shows this in yet another way.

Converging–Diverging Nozzle

Now let us examine a similar situation but with a converging–diverging nozzle (sometimes called a *DeLaval nozzle*), shown in Figures 5.9 and 5.10. We identify the *throat* (or section of minimum area) as 2 and the exit section as 3. The distinguishing physical characteristic of this type of nozzle is the *area ratio*, meaning the ratio of the exit area to the throat area. Assume this to be $A_3/A_2 = 2.494$. Keep in mind that the objective of making a converging–diverging nozzle is to obtain supersonic flow. Let us first examine the *design operating condition* for this nozzle. If the nozzle is to operate as desired, we know (see Section 5.3) that the flow will be subsonic from 1 to 2, sonic at 2, and supersonic from 2 to 3.

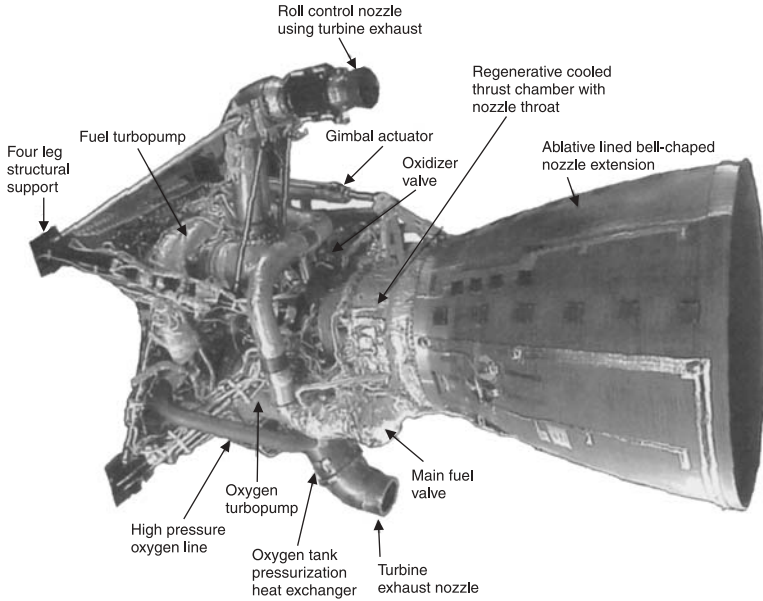


Figure 5.9 Typical converging–diverging nozzle. (Courtesy of the Boeing Company, Rocket-dyne Propulsion and Power.)

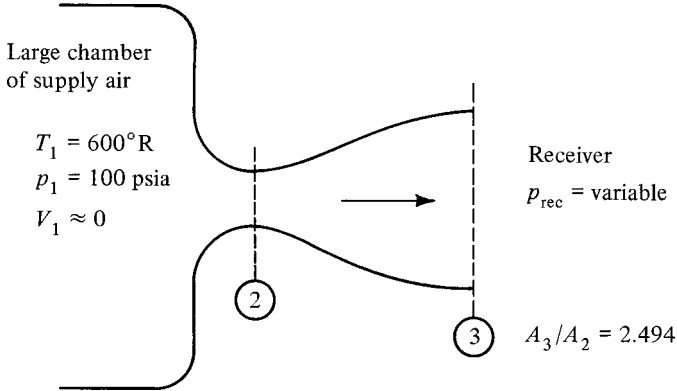


Figure 5.10 Converging–diverging nozzle.

To discover the conditions that exist at the exit (under design operation), we seek the ratio A_3/A_3^* :

$$\frac{A_3}{A_3^*} = \frac{A_3}{A_2} \frac{A_2}{A_2^*} \frac{A_2^*}{A_3^*} = (2.494)(1)(1) = 2.494$$

Note that $A_2 = A_2^*$ since $M_2 = 1$, and $A_2^* = A_3^*$ by equation (5.29), as we are still assuming isentropic operation. We look for $A/A^* = 2.494$ in the *supersonic* section of the isentropic table and see that

$$M_3 = 2.44, \quad \frac{P_3}{P_{t3}} = 0.0643, \quad \text{and} \quad \frac{T_3}{T_{t3}} = 0.4565$$

Thus

$$p_3 = \frac{P_3}{P_{t3}} \frac{P_{t3}}{P_{t1}} p_{t1} = (0.0643)(1)(100) = 6.43 \text{ psia}$$

and to operate the nozzle at this *design condition* the receiver pressure *must be* at 6.43 psia. The pressure variation through the nozzle for this case is shown as curve “a” in Figure 5.11. This mode is sometimes referred to as *third critical*. From the temperature ratio T_3/T_{t3} we can easily compute T_3 , a_3 , and V_3 by the procedure shown previously.

One can also find $A/A^* = 2.494$ in the subsonic section of the isentropic table. (Recall that these two answers come from the solution of a quadratic equation.) For this case

$$M_3 = 0.24, \quad \frac{P_3}{P_{t3}} = 0.9607 \quad \frac{T_3}{T_{t3}} = 0.9886$$

Thus

$$p_3 = \frac{P_3}{P_{t3}} \frac{P_{t3}}{P_{t1}} p_{t1} = (0.9607)(1)(100) = 96.07 \text{ psia}$$

and to operate at this condition the receiver pressure *must be* at 96.07 psia. With this receiver pressure the flow is subsonic from 1 to 2, sonic at 2, and *subsonic* again from

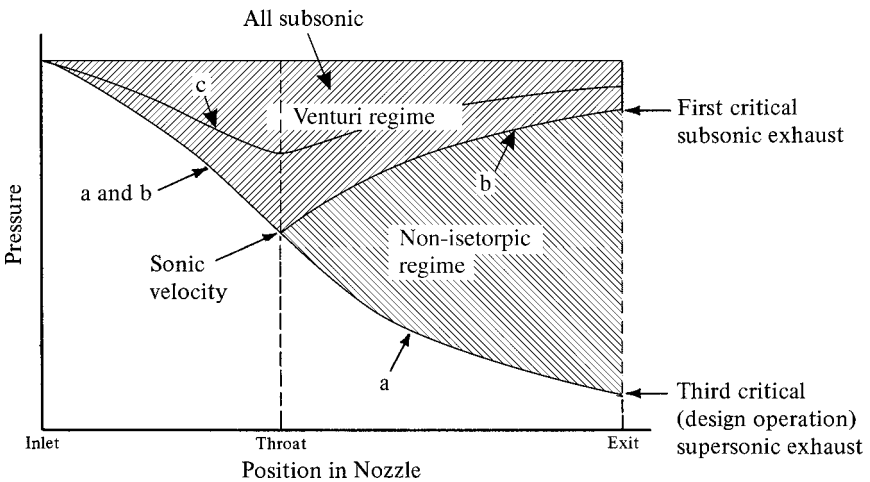


Figure 5.11 Pressure variation through converging–diverging nozzle.

2 to 3. The device is nowhere near its design condition and is really operating as a *venturi tube*; that is, the converging section is operating as a nozzle and the diverging section is operating as a diffuser. The pressure variation through the nozzle for this case is shown as curve “b” in Figure 5.11. This mode of operation is frequently called *first critical*.

Note that at both the first and third critical points, the flow variations are identical from the inlet to the throat. Once the receiver pressure has been lowered to 96.07 psia, Mach 1.0 exists in the throat and the device is said to be *choked*. *Further lowering of the receiver pressure will not change the flow rate*. Again, realize that it is not the pressure in the receiver by itself but rather the receiver pressure *relative* to the inlet pressure that determines the mode of operation.

Example 5.7 A converging–diverging nozzle with an area ratio of 3.0 exhausts into a receiver where the pressure is 1 bar. The nozzle is supplied by air at 22°C from a large chamber. At what pressure should the air in the chamber be for the nozzle to operate at its design condition (third critical point)? What will the outlet velocity be?

With reference to Figure 5.10, $A_3/A_2 = 3.0$:

$$\frac{A_3}{A_3^*} = \frac{A_3}{A_2} \frac{A_2}{A_2^*} \frac{A_2^*}{A_3^*} = (3.0)(1)(1) = 3.0$$

From the isentropic table:

$$M_3 = 2.64 \quad \frac{p_3}{p_{t3}} = 0.0471 \quad \frac{T_3}{T_{t3}} = 0.4177$$

$$p_1 = p_{t1} = \frac{p_{t1}}{p_{t3}} \frac{p_{t3}}{p_3} p_3 = (1) \left(\frac{1}{0.0471} \right) (1 \times 10^5) = 21.2 \times 10^5 \text{ N/m}^2$$

$$T_3 = \frac{T_3}{T_{t3}} \frac{T_{t3}}{T_{t1}} T_{t1} = (0.4177)(1)(22 + 273) = 123.2\text{K}$$

$$V_3 = M_3 a_3 = (2.64) [(1.4)(1)(287)(123.2)]^{1/2} = 587 \text{ m/s}$$

We have discussed only two specific operating conditions, and one might ask what happens at other receiver pressures. We can state that the first and third critical points represent the only operating conditions that satisfy the following criteria:

1. Mach 1 in the throat
2. Isentropic flow throughout the nozzle
3. Nozzle exit pressure equal to receiver pressure

With receiver pressures above the first critical, the nozzle operates as a venturi and we never reach sonic velocity in the throat. An example of this mode of operation is shown as curve “c” in Figure 5.11. The nozzle is no longer choked and the flow rate is less than the maximum. Conditions at the exit can be determined by the procedure

shown previously for the converging-only nozzle. Then properties in the throat can be found if desired.

Operation between the first and third critical points is *not* isentropic. We shall learn later that under these conditions shocks will occur in either the diverging portion of the nozzle or after the exit. If the receiver pressure is below the third critical point, the nozzle operates *internally* as though it were at the design condition but expansion waves occur *outside* the nozzle. These operating modes will be discussed in detail as soon as the appropriate background has been developed.

5.8 NOZZLE PERFORMANCE

We have seen that the isentropic operating conditions are very easy to determine. Friction losses can then be taken into account by one of several methods. Direct information on the entropy change could be given, although this is usually not available. Sometimes equivalent information is provided in the form of the stagnation pressure ratio. Normally, however, nozzle performance is indicated by an *efficiency parameter*, which is defined as follows:

$$\eta_n \equiv \frac{\text{actual change in kinetic energy}}{\text{ideal change in kinetic energy}}$$

or

$$\eta_n \equiv \frac{\Delta KE_{\text{actual}}}{\Delta KE_{\text{ideal}}} \quad (5.45)$$

Since most nozzles involve negligible heat transfer (per unit mass of fluid flowing), we have from

$$h_{t1} + \cancel{q} = h_{t2} + \cancel{w}_s \quad (3.19)$$

$$h_{t1} = h_{t2} \quad (5.46)$$

Thus

$$h_1 + \frac{V_1^2}{2g_c} = h_2 + \frac{V_2^2}{2g_c} \quad (5.47a)$$

or

$$h_1 - h_2 = \frac{V_2^2 - V_1^2}{2g_c} \quad (5.47b)$$

Therefore, one normally sees the nozzle efficiency expressed as

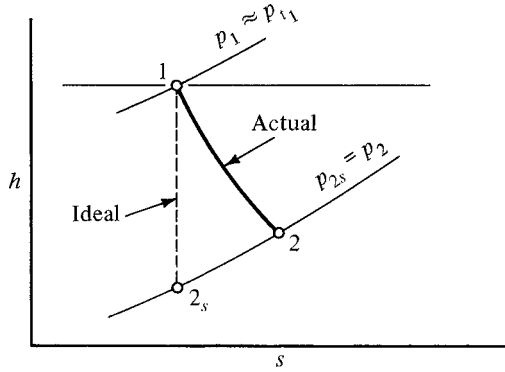


Figure 5.12 h - s diagram for a nozzle with losses.

$$\eta_n = \frac{\Delta h_{\text{actual}}}{\Delta h_{\text{ideal}}} \tag{5.48}$$

With reference to Figure 5.12, this becomes

$$\eta_n = \frac{h_1 - h_2}{h_1 - h_{2s}} \tag{5.49}$$

Since nozzle outlet velocities are quite large (relative to the velocity at the inlet), one can normally neglect the inlet velocity with little error. This is the case shown in Figure 5.12. Also note that the *ideal* process is assumed to take place down to the actual available receiver pressure. This definition of nozzle efficiency and its application appear quite reasonable since a nozzle is subjected to fixed (inlet and outlet) operating pressures and its purpose is to produce kinetic energy. The question is how well it does this, and η_n not only answers the question very quickly but permits a rapid determination of the actual outlet state.

Example 5.8 Air at 800°R and 80 psia feeds a converging-only nozzle having an efficiency of 96%. The receiver pressure is 50 psia. What is the actual nozzle outlet temperature?

Note that since $p_{\text{rec}}/p_{\text{inlet}} = 50/80 = 0.625 > 0.528$, the nozzle will not be choked, flow will be subsonic at the exit, and $p_2 = p_{\text{rec}}$ (see Figure 5.12).

$$\frac{p_{2s}}{p_{12s}} = \frac{p_{2s}}{p_{11}} \frac{p_{11}}{p_{12s}} = \left(\frac{50}{80}\right) (1) = 0.625$$

From table,

$$M_{2s} \approx 0.85 \quad \text{and} \quad \frac{T_{2s}}{T_{12s}} = 0.8737$$

$$T_{2s} = \frac{T_{2s}}{T_{12s}} \frac{T_{12s}}{T_{11}} T_{11} = (0.8737)(1)(800) = 699^\circ\text{R}$$

$$\eta_n = \frac{T_1 - T_2}{T_1 - T_{2s}} \quad 0.96 = \frac{800 - T_2}{800 - 699}$$

$$T_2 = 703^\circ\text{R}$$

Can you find the actual outlet velocity?

Another method of expressing nozzle performance is with a *velocity coefficient*, which is defined as

$$C_v \equiv \frac{\text{actual outlet velocity}}{\text{ideal outlet velocity}} \quad (5.50)$$

Sometimes a *discharge coefficient* is used and is defined as

$$C_d \equiv \frac{\text{actual mass flow rate}}{\text{ideal mass flow rate}} \quad (5.51)$$

5.9 DIFFUSER PERFORMANCE

Although the common use of nozzle efficiency makes this parameter well understood by all engineers, there is no single parameter that is universally employed for diffusers. Nearly a dozen criteria have been suggested to indicate diffuser performance (see p. 392, Vol. 1 of Ref 25). Two or three of these are the most popular, but unfortunately, even these are sometimes defined differently or called by different names. The following discussion refers to the h - s diagram shown in Figure 5.13.

Most of the propulsion industry uses the *total-pressure recovery factor* as a measure of diffuser performance. With reference to Figure 5.13, it is defined as

$$\eta_r \equiv \frac{p_{t2}}{p_{t1}} \quad (5.52)$$

This function is directly related to the area ratio A_1^*/A_2^* or the entropy change Δs_{1-2} , which we have previously shown to be equivalent loss indicators. As we shall see in Chapter 12, for propulsion applications this is usually referred to the free-stream conditions rather than the diffuser inlet.

For a definition of diffuser efficiency analogous to that of a nozzle, we recall that the function of a diffuser is to convert kinetic energy into pressure energy; thus it is logical to compare the ideal and actual processes between the same two enthalpy levels that represent the same kinetic energy change. Therefore, a suitable definition of *diffuser efficiency* is

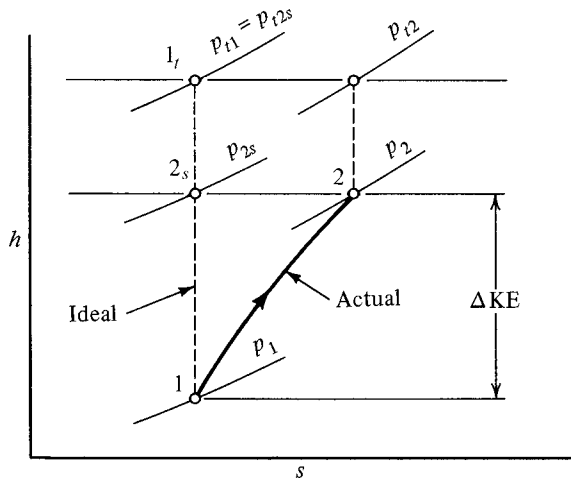


Figure 5.13 h - s diagram for a diffuser with losses.

$$\eta_d \equiv \frac{\text{actual pressure rise}}{\text{ideal pressure rise}} \tag{5.53}$$

or from Figure 5.13,

$$\eta_d \equiv \frac{p_2 - p_1}{p_{2s} - p_1} \tag{5.54}$$

You are again warned to be extremely cautious in accepting any performance figure for a diffuser without also obtaining a precise definition of what is meant by the criterion.

Example 5.9 A steady flow of air at 650°R and 30 psia enters a diffuser with a Mach number of 0.8. The total-pressure recovery factor $\eta_r = 0.95$. Determine the static pressure and temperature at the exit if $M = 0.15$ at that section.

With reference to Figure 5.13,

$$p_2 = \frac{p_2}{p_{r2}} \frac{p_{r2}}{p_{r1}} \frac{p_{r1}}{p_1} p_1 = (0.9844)(0.95) \left(\frac{1}{0.6560} \right) (30) = 42.8 \text{ psia}$$

$$T_2 = \frac{T_2}{T_{r2}} \frac{T_{r2}}{T_{r1}} \frac{T_{r1}}{T_1} T_1 = (0.9955)(1) \left(\frac{1}{0.8865} \right) (650) = 730^\circ\text{R}$$

5.10 WHEN γ IS NOT EQUAL TO 1.4

In this section, as in the next few chapters, we present graphical information on one or more key parameter ratios as a function of the Mach number. This is done for various ratios of the specific heats ($\gamma = 1.13, 1.4,$ and 1.67) to show the overall trends. Also, within a certain range of Mach numbers, the tabulations in Appendix G for air at normal temperature and pressure ($\gamma = 1.4$) which represent the middle of the range turn out to be satisfactory for other values of γ .

Figure 5.14 shows curves for p/p_t , T/T_t , and A/A^* in the interval $0.2 \leq M \leq 5$. Actually, compressible flow manifests itself in the range $M \geq 0.3$. Below this range we can treat flows as constant density (see Section 3.7 and Problem 4.3). Moreover, we have deliberately chosen to remain below the hypersonic range, which is generally regarded to be the region $M \geq 5$. So the interval chosen will be representative of many situations encountered in compressible flow. The curves in Figure 5.14 clearly show the important trends.

- (a) As can be seen from Figure 5.14a, p/p_t is the least sensitive (of the three ratios plotted) to variations of γ . Below $M \approx 2.5$ the pressure ratio is well represented for any γ by the values tabulated in Appendix G.
- (b) Figure 5.14b shows that T/T_t is more sensitive than the pressure ratio to variations of γ . But it shows relative insensitivity below $M \approx 0.8$ so that in this range the values tabulated in Appendix G could be used for any γ with little error.
- (c) The same can be said about A/A^* , as shown in Figure 5.14c, which turns out to be relatively insensitive to variations in γ below $M \approx 1.5$.

In summary, the tables in Appendix G can be used for estimates (within $\pm 5\%$) for almost any value of γ in the Mach number ranges identified above. Strictly speaking, these curves are representative only for cases where γ variations are *negligible within the flow*. However, they offer hints as to what magnitude of changes are to be expected in other cases. Flows where γ variations are *not negligible within the flow* are treated in Chapter 11.

5.11 (OPTIONAL) BEYOND THE TABLES

Tables in gas dynamics are extremely useful but they have limitations, such as:

1. They do not show trends or the “big picture.”
2. There is almost always the need for interpolation.
3. They display only one or at most a few values of γ .
4. They do not necessarily have the required accuracy.

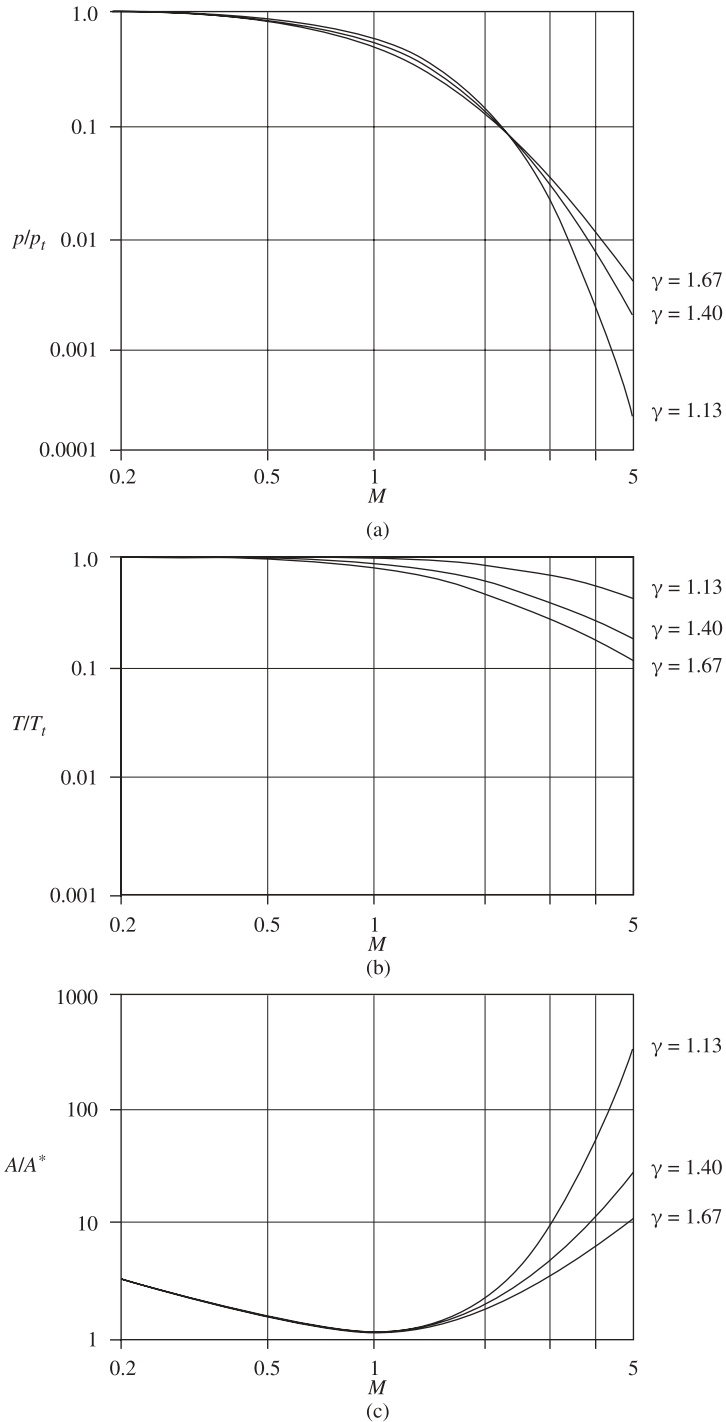


Figure 5.14 (a) Stagnation pressure ratio versus Mach number, (b) Stagnation temperature ratio versus Mach number, and (c) A/A^* area ratio versus Mach number for various values of γ .

Moreover, modern digital computers have made significant inroads in the working of problems, particularly when high-accuracy results and/or graphs are required. Simply put, the computer can be programmed to do the hard (and the easy) numerical calculations. In this book we have deliberately avoided integrating any gas dynamics software (some of which is commercially available) into the text material, preferring to present computer work as an adjunct to individual calculations. One reason is that we want you to spend your time learning about the wonderful world of gas dynamics and not on how to manage the programming. Another reason is that both computers and packaged software evolve too quickly, and therefore the attention that must be paid just to use any particular software is soon wasted.

Once you have mastered the basics, however, we feel that it is appropriate to discuss how things might be done with computers (and this could include handheld programmable calculators). In this book we discuss how the computer utility MAPLE can be of help in solving problems in gas dynamics. MAPLE is a powerful computer environment for doing symbolic, numerical, and graphical work. It is the product of Waterloo Maple, Inc., and the most recent version, MAPLE 7, was copyrighted in 2001. MAPLE is used routinely in many undergraduate engineering programs in the United States.

Other software packages are also popular in engineering schools. One in particular is MATLAB, which can do things equivalent to those handled by MAPLE. MATLAB's real forte is in manipulating linear equations and in constructing tables. But we have chosen MAPLE because it can manipulate equations symbolically and because of its superior graphics. In our view, this makes MAPLE somewhat more appropriate.

We will present some simple examples to show how MAPLE can be used. The experienced programmer can go much beyond these exercises. This section is optional because we want you to concentrate on the learning of gas dynamics and not spend extra time trying to demystify the computer approach. We focus on an example in Section 5.6, but the techniques must be understood to apply in general.

Example 5.10 In Example 5.6(a) the calculations can be done from the formulas or by using the tables for p_{t1} and T_{t1} . In part (b), however, direct calculation of M_2 given A_2/A_2^* is more difficult because it involves equation (5.37), which cannot be solved explicitly for M .

$$\frac{A}{A^*} = \frac{1}{M} \left(\frac{1 + [(\gamma - 1)/2]M^2}{(\gamma + 1)/2} \right)^{(\gamma + 1)/2(\gamma - 1)} = f(M, \gamma) \quad (5.37)$$

If we were given M_2 , it would be simple to compute A_2/A_2^* .

But we are given A_2/A_2^* and we want to find M_2 .

This is a problem where MAPLE can be useful because a built-in solver routine handles this type of problem easily.

First, we define some symbols: Let

$g \equiv \gamma$, a parameter (the ratio of the specific heats)

$X \equiv$ the independent variable (which in this case is M_2)

$Y \equiv$ the dependent variable (which in this case is A_2/A_2^*)

We need to introduce an index “ m ” to distinguish between subsonic and supersonic flow.

$$m \equiv \begin{cases} 1 & \text{for subsonic flow} \\ 10 & \text{for supersonic flow.} \end{cases}$$

Shown below is a copy of the precise MAPLE worksheet:

```
[ > g := 1.4: Y := 1.1028: m := 10:
[ > fsolve(Y = (((1+(g-1)*(X^2)/2)/((g+1)/2)))^((g+1)/(2*(g-1)))/
X, X, 1..m);
1.377333281
```

which is the desired answer.

Here we discuss details of the MAPLE solution. If you are familiar with these, skip to the next paragraph. We must assume that the numerical value outputted is X because that is what we asked for in the executable statement with “`fsolve()`,” which terminates in a semicolon. Statements terminated in a colon are also executed but no return is asked for.

Example 5.11 We continue with this problem, as this is a good opportunity to show how MAPLE can help you avoid interpolation. If you are on the same worksheet, MAPLE remembers the values of g , Y , and X . We are now looking for the ratio of static to stagnation temperature, which is given the symbol Z . This ratio comes from equation (5.39):

$$\frac{T}{T_t} = \frac{1}{1 + [(\gamma - 1)/2]M^2} = f(M, \gamma) \quad (5.39)$$

Shown below are the precise inputs and program that you use in the computer.

```
[ > X := 1.3773:
[ > z := 1 / (1 + (g-1) * (X^2) / 2);
Z := .7249575776
```

Now we can calculate the static temperature by the usual method.

$$T_2 = \frac{T_2}{T_1} \frac{T_1}{T_2} T_1 = (0.725)(1)(1405) = 1019^\circ\text{R}$$

The static pressure (p_2) can be found by a similar procedure.

5.12 SUMMARY

We analyzed a general varying-area configuration and found that properties vary in a radically different manner depending on whether the flow is subsonic or supersonic. The case of a perfect gas enabled the development of simple working equations for

flow analysis. We then introduced the concept of a * reference state. The combination of the * and the stagnation reference states led to the development of the isentropic table, which greatly aids problem solution. Deviations from isentropic flow can be handled by appropriate loss factors or efficiency criteria.

A large number of useful equations were developed; however, most of these are of the type that need not be memorized. Equations (5.10), (5.11), and (5.13) were used for the general analysis of varying-area flow, and these are summarized in the middle of Section 5.3. The working equations that apply to a perfect gas are summarized at the end of Section 5.4 and are (4.28), (5.21), (5.23), (5.25), (5.27), and (5.28). Equations used as a basis for the isentropic table are numbered (5.37), (5.39), (5.40), (5.42), and (5.43) and are located in Section 5.6.

Those equations that are most frequently used are summarized below. You should be familiar with the conditions under which each may be used. Go back and review the equations listed in previous summaries, particularly those in Chapter 4.

1. For steady one-dimensional flow of a perfect gas when $Q = W = 0$

$$\frac{p_{t2}}{p_{t1}} = e^{-\Delta s/R} \tag{4.28}$$

$$\frac{A_2^*}{A_1^*} = e^{\Delta s/R} \tag{5.29}$$

$$p_{t1} A_1^* = p_{t2} A_2^* \tag{5.35}$$

2. Nozzle performance.

Nozzle efficiency (between same pressures):

$$\eta_n \equiv \frac{\Delta KE_{\text{actual}}}{\Delta KE_{\text{ideal}}} = \frac{h_1 - h_2}{h_1 - h_{2s}} \tag{5.45}, (5.49)$$

3. Diffuser performance.

Total-pressure recovery factor:

$$\eta_r \equiv \frac{p_{t2}}{p_{t1}} \tag{5.52}$$

or diffuser efficiency (between the same enthalpies):

$$\eta_d \equiv \frac{\text{actual pressure rise}}{\text{ideal pressure rise}} = \frac{p_2 - p_1}{p_{2s} - p_1} \tag{5.53}, (5.54)$$

PROBLEMS

5.1. The following information is common to each of parts (a) and (b). Nitrogen flows through a diverging section with $A_1 = 1.5 \text{ ft}^2$ and $A_2 = 4.5 \text{ ft}^2$. You may assume

steady, one-dimensional flow, $Q = W_s = 0$, negligible potential changes, and no losses.

- (a) If $M_1 = 0.7$ and $p_1 = 70$ psia, find M_2 and p_2 .
- (b) If $M_1 = 1.7$ and $T_1 = 95^\circ\text{F}$, find M_2 and T_2 .
- 5.2.** Air enters a converging section where $A_1 = 0.50\text{ m}^2$. At a downstream section $A_2 = 0.25\text{ m}^2$, $M_2 = 1.0$, and $\Delta s_{1-2} = 0$. It is known that $p_2 > p_1$. Find the initial Mach number (M_1) and the temperature ratio (T_2/T_1).
- 5.3.** Oxygen flows into an insulated device with initial conditions as follows: $p_1 = 30$ psia, $T_1 = 750^\circ\text{R}$, and $V_1 = 639$ ft/sec. The area changes from $A_1 = 6\text{ ft}^2$ to $A_2 = 5\text{ ft}^2$.
- (a) Compute M_1 , p_{r1} , and T_{r1} .
- (b) Is this device a nozzle or diffuser?
- (c) Determine M_2 , p_2 , and T_2 if there are no losses.
- 5.4.** Air flows with $T_1 = 250\text{ K}$, $p_1 = 3$ bar abs., $p_{r1} = 3.4$ bar abs., and the cross-sectional area $A_1 = 0.40\text{ m}^2$. The flow is isentropic to a point where $A_2 = 0.30\text{ m}^2$. Determine the temperature at section 2.
- 5.5.** The following information is known about the steady flow of air through an adiabatic system:
- At section 1, $T_1 = 556^\circ\text{R}$, $p_1 = 28.0$ psia
- At section 2, $T_2 = 70^\circ\text{F}$, $T_{r2} = 109^\circ\text{F}$, $p_2 = 18$ psia
- (a) Find M_2 , V_2 , and p_{r2} .
- (b) Determine M_1 , V_1 , and p_{r1} .
- (c) Compute the area ratio A_2/A_1 .
- (d) Sketch a physical diagram of the system along with a $T-s$ diagram.
- 5.6.** Assuming the flow of a perfect gas in an adiabatic, no-work system, show that sonic velocity corresponding to the stagnation conditions (a_t) is related to sonic velocity where the Mach number is unity (a^*) by the following equation:
- $$\frac{a^*}{a_t} = \left(\frac{2}{\gamma + 1} \right)^{1/2}$$
- 5.7.** Carbon monoxide flows through an adiabatic system. $M_1 = 4.0$ and $p_{r1} = 45$ psia. At a point downstream, $M_2 = 1.8$ and $p_2 = 7.0$ psia.
- (a) Are there losses in this system? If so, compute Δs .
- (b) Determine the ratio of A_2/A_1 .
- 5.8.** Two venturi meters are installed in a 30-cm-diameter duct that is insulated (Figure P5.8). The conditions are such that sonic flow exists at each throat (i.e., $M_1 = M_4 = 1.0$). Although each venturi is isentropic, the connecting duct has friction and hence losses exist between sections 2 and 3. $p_1 = 3$ bar abs. and $p_4 = 2.5$ bar abs. If the diameter at section 1 is 15 cm and the fluid is air:
- (a) Compute Δs for the connecting duct.
- (b) Find the diameter at section 4.

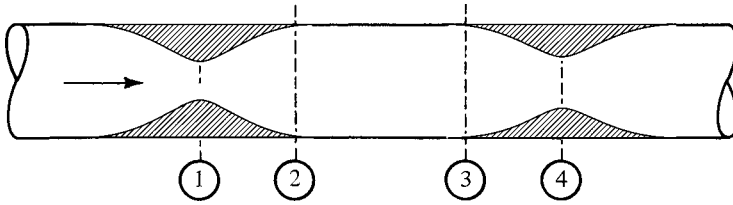


Figure P5.8

5.9. Starting with the flow rate as from equation (2.30), derive the following relation:

$$\frac{\dot{m}}{A} = M \left(1 + \frac{(\gamma - 1)}{2} M^2 \right)^{-(\gamma+1)/2(\gamma-1)} \left(\frac{\gamma g_c}{R} \right)^{1/2} \frac{p_t}{\sqrt{T_t}}$$

- 5.10. A smooth 3-in.-diameter hole is punched into the side of a large chamber where oxygen is stored at 500°R and 150 psia. Assume frictionless flow.
- Compute the initial mass flow rate from the chamber if the surrounding pressure is 15.0 psia.
 - What is the flow rate if the pressure of the surroundings is lowered to zero?
 - What is the flow rate if the chamber pressure is raised to 300 psia?
- 5.11. Nitrogen is stored in a large chamber under conditions of 450 K and $1.5 \times 10^5 \text{ N/m}^2$. The gas leaves the chamber through a convergent-only nozzle whose outlet area is 30 cm². The ambient room pressure is $1 \times 10^5 \text{ N/m}^2$ and there are no losses.
- What is the velocity of the nitrogen at the nozzle exit?
 - What is the mass flow rate?
 - What is the maximum flow rate that could be obtained by lowering the ambient pressure?
- 5.12. A converging-only nozzle has an efficiency of 96%. Air enters with negligible velocity at a pressure of 150 psia and a temperature of 750°R. The receiver pressure is 100 psia. What are the actual outlet temperature, Mach number, and velocity?
- 5.13. A large chamber contains air at 80 psia and 600°R. The air enters a converging–diverging nozzle which has an area ratio (exit to throat) of 3.0.
- What pressure must exist in the receiver for the nozzle to operate at its first critical point?
 - What should the receiver pressure be for third critical (design point) operation?
 - If operating at its third critical point, what are the density and velocity of the air at the nozzle exit plane?
- 5.14. Air enters a convergent–divergent nozzle at 20 bar abs. and 40°C. At the end of the nozzle the pressure is 2.0 bar abs. Assume a frictionless adiabatic process. The throat area is 20 cm².
- What is the area at the nozzle exit?
 - What is the mass flow rate in kg/s?

- 5.15. A converging–diverging nozzle is designed to operate with an exit Mach number of $M = 2.25$. It is fed by a large chamber of oxygen at 15.0 psia and 600°R and exhausts into the room at 14.7 psia. Assuming the losses to be negligible, compute the velocity in the nozzle throat.
- 5.16. A converging–diverging nozzle (Figure P5.16) discharges air into a receiver where the static pressure is 15 psia. A 1-ft² duct feeds the nozzle with air at 100 psia, 800°R, and a velocity such that the Mach number $M_1 = 0.3$. The exit area is such that the pressure at the nozzle exit exactly matches the receiver pressure. Assume steady, one-dimensional flow, perfect gas, and so on. The nozzle is adiabatic and there are no losses.
- Calculate the flow rate.
 - Determine the throat area.
 - Calculate the exit area.

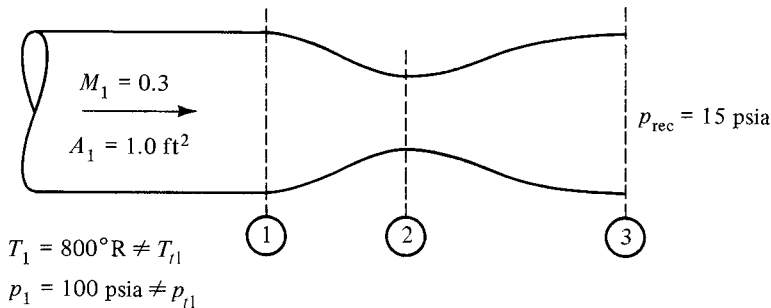


Figure P5.16

- 5.17. Ten kilograms per second of air is flowing in an adiabatic system. At one section the pressure is $2.0 \times 10^5 \text{ N/m}^2$, the temperature is 650°C, and the area is 50 cm². At a downstream section $M_2 = 1.2$.
- Sketch the general shape of the system.
 - Find A_2 if the flow is frictionless.
 - Find A_2 if there is an entropy change between these two sections of 42 J/kg-K.
- 5.18. Carbon monoxide is expanded adiabatically from 100 psia, 540°F and negligible velocity through a converging–diverging nozzle to a pressure of 20 psia.
- What is the ideal exit Mach number?
 - If the actual exit Mach number is found to be $M = 1.6$, what is the nozzle efficiency?
 - What is the entropy change for the flow?
 - Draw a T – s diagram showing the ideal and actual processes. Indicate pertinent temperatures, pressures, etc.
- 5.19. Air enters a converging–diverging nozzle with $T_1 = 22^\circ\text{C}$, $p_1 = 10 \text{ bar abs.}$, and $V_1 \approx 0$. The exit Mach number is 2.0, the exit area is 0.25 m², and the nozzle efficiency is 0.95.
- What are the actual exit values of T , p , and p_t ?

- (b) What is the ideal exit Mach number?
 - (c) Assume that all the losses occur in the diverging portion of the nozzle and compute the throat area.
 - (d) What is the mass flow rate?
- 5.20.** A diffuser receives air at 500°R, 18 psia, and a velocity of 750 ft/sec. The diffuser has an efficiency of 90% [as defined by equation (5.54)] and discharges the air with a velocity of 150 ft/sec.
- (a) What is the pressure of the discharge air?
 - (b) What is the total-pressure recovery factor as given by equation (5.52)?
 - (c) Determine the area ratio of the diffuser.
- 5.21.** Consider the steady, one-dimensional flow of a perfect gas through a horizontal system with no shaft work. No frictional losses are involved, but area changes and heat transfer effects provide a flow at constant temperature.
- (a) Start with the pressure-energy equation and develop

$$\frac{P_2}{P_1} = e^{(\gamma/2)(M_1^2 - M_2^2)}$$

$$\frac{P_{t2}}{P_{t1}} = e^{(\gamma/2)(M_1^2 - M_2^2)} \left(\frac{1 + [(\gamma - 1)/2]M_2^2}{1 + [(\gamma - 1)/2]M_1^2} \right)^{\gamma/(\gamma-1)}$$

- (b) From the continuity equation show that

$$\frac{A_1}{A_2} = \frac{M_2}{M_1} e^{(\gamma/2)(M_1^2 - M_2^2)}$$

- (c) By letting M_1 be any Mach number and $M_2 = 1.0$, write the expression for A/A^* . Show that the section of minimum area occurs at $M = 1/\sqrt{\gamma}$.
- 5.22.** Consider the steady, one-dimensional flow of a perfect gas through a horizontal system with no heat transfer or shaft work. Friction effects are present, but area changes cause the flow to be at a constant Mach number.
- (a) Recall the arguments of Section 4.6 and determine what other properties remain constant in this flow.
 - (b) Apply the concepts of continuity and momentum [equation (3.63)] to show that

$$D_2 - D_1 = \frac{fM^2\gamma}{4}(x_2 - x_1)$$

You may assume a circular duct and a constant friction factor.

- 5.23.** Assume that a supersonic nozzle operating isentropically delivers air at an exit Mach number of 2.8. The entrance conditions are 180 psia, 1000°R, and near-zero Mach number.
- (a) Find the area ratio A_3/A_2 and the mass flow rate per unit throat area.
 - (b) What are the receiver pressure and temperature?
 - (c) If the entire diverging portion of the nozzle were suddenly to detach, what would the Mach number and \dot{m}/A be at the new outlet?

5.24. Write a computer program and construct a table of isentropic flow parameters for $\gamma \neq 1.4$. (Useful values might be $\gamma = 1.2, 1.3, \text{ or } 1.67$.) Use the following headings: $M, p/p_t, T/T_t, \rho/\rho_t, A/A^*, \text{ and } pA/p_t A^*$. (Hint: Use MATLAB).

CHECK TEST

You should be able to complete this test without reference to material in the chapter.

- 5.1. Define the * reference condition.
- 5.2. In adiabatic, no-work flow, the losses can be expressed by three different parameters. List these parameters and show how they are related to one another.
- 5.3. In the $T-s$ diagram (Figure CT5.3), point 1 represents a stagnation condition. Proceeding isentropically from 1, the flow reaches a Mach number of unity at 1^* . Point 2 represents another stagnation condition in the same flow system. Assuming that the fluid is a perfect gas, locate the corresponding isentropic 2^* and prove that T_2^* is either greater than, equal to, or less than T_1^* .

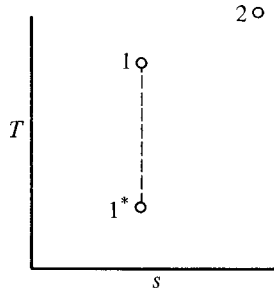


Figure CT5.3

5.4. A supersonic nozzle is fed by a large chamber and produces Mach 3.0 at the exit (Figure CT5.4). Sketch curves (to no particular scale) that show how properties vary through the nozzle as the Mach number increases from zero to 3.0.

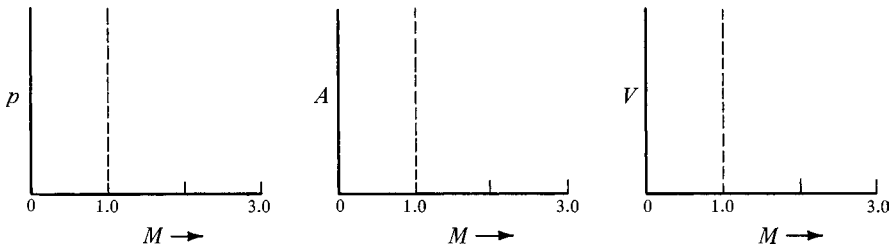


Figure CT5.4

5.5. Give a suitable definition for nozzle efficiency in terms of enthalpies. Sketch an $h-s$ diagram to identify your state points.

- 5.6.** Air flows steadily with no losses through a converging–diverging nozzle with an area ratio of 1.50. Conditions in the supply chamber are $T = 500^\circ\text{R}$ and $p = 150$ psia.
- (a) To choke the flow, to what pressure must the receiver be lowered?
 - (b) If the nozzle is choked, determine the density and velocity at the throat.
 - (c) If the receiver is at the pressure determined in part (a) and the diverging portion of the nozzle is removed, what will the exit Mach number be?
- 5.7.** For steady, one-dimensional flow of a perfect gas in an adiabatic, no-work system, derive the working relation between the temperatures at two locations:

$$\frac{T_2}{T_1} = f(M_1, M_2, \gamma)$$

- 5.8.** Work problem 5.20.

Chapter 6

Standing Normal Shocks

6.1 INTRODUCTION

Up to this point we have considered only continuous flows, flow systems in which state changes occur continuously and thus whose processes can easily be identified and plotted. Recall from Section 4.3 that *infinitesimal* pressure disturbances are called sound waves and these travel at a characteristic velocity that is determined by the medium and its thermodynamic state. In Chapters 6 and 7 we turn our attention to some *finite* pressure disturbances which are frequently encountered. Although incorporating large changes in fluid properties, the thickness of these disturbances is extremely small. Typical thicknesses are on the order of a few mean free molecular paths and thus they appear as *discontinuities* in the flow and are called *shock waves*.

Due to the complex interactions involved, analysis of the changes within a shock wave is beyond the scope of this book. Thus we deal only with the properties that exist on each side of the discontinuity. We first consider a *standing normal shock*, a stationary wave front that is perpendicular to the direction of flow. We will discover that this phenomenon is found only when supersonic flow exists and that it is basically a form of compression process. We apply the basic concepts of gas dynamics to analyze a shock wave in an arbitrary fluid and then develop working equations for a perfect gas. This procedure leads naturally to the compilation of tabular information which greatly simplifies problem solution. The chapter closes with a discussion of shocks found in the diverging portion of supersonic nozzles.

6.2 OBJECTIVES

After completing this chapter successfully, you should be able to:

1. List the assumptions used to analyze a standing normal shock.
2. Given the continuity, energy, and momentum equations for steady one-dimensional flow, utilize control volume analysis to derive the relations between properties on each side of a standing normal shock for an arbitrary fluid.

3. (*Optional*) Starting with the basic shock equations for an arbitrary fluid, derive the working equations for a perfect gas relating property ratios on each side of a standing normal shock as a function of Mach number (M) and specific heat ratio (γ).
4. (*Optional*) Given the working equations for a perfect gas, show that a unique relationship must exist between the Mach numbers before and after a standing normal shock.
5. (*Optional*) Explain how a normal-shock table may be developed that gives property ratios across the shock in terms of only the Mach number before the shock.
6. Sketch a normal-shock *process* on a T - s diagram, indicating as many pertinent features as possible, such as static and total pressures, static and total temperatures, and velocities. Indicate each of the preceding before and after the shock.
7. Explain why an *expansion shock* cannot exist.
8. Describe the second critical mode of nozzle operation. Given the area ratio of a converging–diverging nozzle, determine the operating pressure ratio that causes operation at the second critical point.
9. Describe how a converging–diverging nozzle operates between first and second critical points.
10. Demonstrate the ability to solve typical standing normal-shock problems by use of tables and equations.

6.3 SHOCK ANALYSIS—GENERAL FLUID

Figure 6.1 shows a standing normal shock in a section of varying area. We first establish a control volume that includes the shock region and an infinitesimal amount of fluid on each side of the shock. In this manner we deal only with the changes that occur across the shock. It is important to recognize that since the shock wave is so thin (about 10^{-6} m), a control volume chosen in the manner described above is extremely thin in the x -direction. This permits the following simplifications to be made without introducing error in the analysis:

1. The area on both sides of the shock may be considered to be the same.
2. There is negligible surface in contact with the wall, and thus frictional effects may be omitted.

We begin by applying the basic concepts of continuity, energy, and momentum under the following assumptions:

Steady one-dimensional flow

Adiabatic

No shaft work

$$\delta q = 0 \text{ or } ds_e = 0$$

$$\delta w_s = 0$$

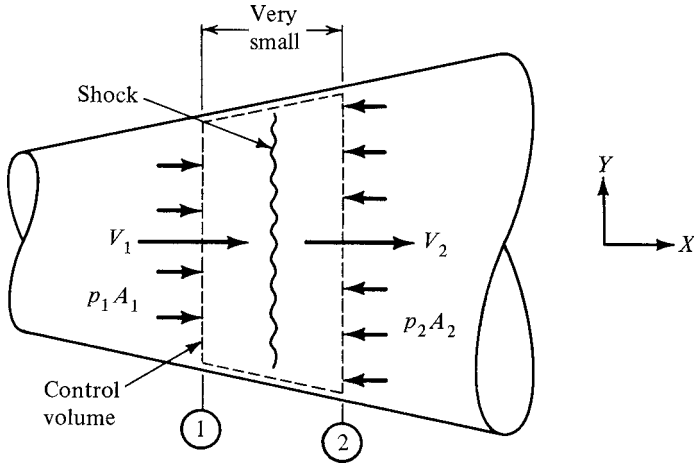


Figure 6.1 Control volume for shock analysis.

Neglect potential	$dz = 0$
Constant area	$A_1 = A_2$
Neglect wall shear	

Continuity

$$\dot{m} = \rho AV \tag{2.30}$$

$$\rho_1 A_1 V_1 = \rho_2 A_2 V_2 \tag{6.1}$$

But since the area is constant,

$$\rho_1 V_1 = \rho_2 V_2$$

(6.2)

Energy

We start with

$$h_{t1} + q = h_{t2} + w_s \tag{3.19}$$

For adiabatic and no work, this becomes

$$h_{t1} = h_{t2} \tag{6.3}$$

or

$$\boxed{h_1 + \frac{V_1^2}{2g_c} = h_2 + \frac{V_2^2}{2g_c}} \quad (6.4)$$

Momentum

The x -component of the momentum equation for steady one-dimensional flow is

$$\sum F_x = \frac{\dot{m}}{g_c} (V_{\text{out},x} - V_{\text{in},x}) \quad (3.46)$$

which when applied to Figure 6.1 becomes

$$\sum F_x = \frac{\dot{m}}{g_c} (V_{2x} - V_{1x}) \quad (6.5)$$

From Figure 6.1 we can also see that the force summation is

$$\sum F_x = p_1 A_1 - p_2 A_2 = (p_1 - p_2) A \quad (6.6)$$

Thus the momentum equation in the direction of flow becomes

$$(p_1 - p_2) A = \frac{\dot{m}}{g_c} (V_2 - V_1) = \frac{\rho A V}{g_c} (V_2 - V_1) \quad (6.7)$$

With \dot{m} written as $\rho A V$, we can cancel the area from both sides. Now the ρV remaining can be written as either $\rho_1 V_1$ or $\rho_2 V_2$ [see equation (6.2)] and equation (6.7) becomes

$$p_1 - p_2 = \frac{\rho_2 V_2^2 - \rho_1 V_1^2}{g_c} \quad (6.8)$$

or

$$\boxed{p_1 + \frac{\rho_1 V_1^2}{g_c} = p_2 + \frac{\rho_2 V_2^2}{g_c}} \quad (6.9)$$

For the general case of an arbitrary fluid, we have arrived at *three* governing equations: (6.2), (6.4), and (6.9). A typical problem would be: Knowing the fluid and the conditions before the shock, predict the conditions that would exist after the shock. The unknown parameters are then *four* in number (ρ_2 , p_2 , h_2 , V_2), which requires additional information for a problem solution. The missing information is supplied in the form of property relations for the fluid involved. For the general fluid (not a

perfect gas), this leads to iterative-type solutions, but with modern digital computers these can be handled quite easily.

6.4 WORKING EQUATIONS FOR PERFECT GASES

In Section 6.3 we have seen that a typical normal-shock problem has four unknowns, which can be found through the use of the three governing equations (from continuity, energy, and momentum concepts) plus additional information on property relations. For the case of a perfect gas, this additional information is supplied in the form of an equation of state and the assumption of constant specific heats. We now proceed to develop working equations in terms of Mach numbers and the specific heat ratio.

Continuity

We start with the continuity equation developed in Section 6.3:

$$\rho_1 V_1 = \rho_2 V_2 \quad (6.2)$$

Substitute for the density from the perfect gas equation of state:

$$p = \rho RT \quad (1.13)$$

and for the velocity from equations (4.10) and (4.11):

$$V = Ma = M\sqrt{\gamma g_c RT} \quad (6.10)$$

Show that the continuity equation can now be written as

$$\frac{p_1 M_1}{\sqrt{T_1}} = \frac{p_2 M_2}{\sqrt{T_2}} \quad (6.11)$$

Energy

From Section 6.3 we have

$$h_{t1} = h_{t2} \quad (6.3)$$

But since we are now restricted to a perfect gas for which enthalpy is a function of temperature *only*, we can say that

$$T_{t1} = T_{t2} \quad (6.12)$$

Recall from Chapter 4 that for a perfect gas with constant specific heats,

$$T_t = T \left(1 + \frac{\gamma - 1}{2} M^2 \right) \quad (4.18)$$

Hence the energy equation across a standing normal shock can be written as

$$T_1 \left(1 + \frac{\gamma - 1}{2} M_1^2 \right) = T_2 \left(1 + \frac{\gamma - 1}{2} M_2^2 \right) \quad (6.13)$$

Momentum

The momentum equation in the direction of flow was seen to be

$$p_1 + \frac{\rho_1 V_1^2}{g_c} = p_2 + \frac{\rho_2 V_2^2}{g_c} \quad (6.9)$$

Substitutions are made for the density from the equation of state (1.13) and for the velocity from equation (6.10):

$$p_1 + \left(\frac{p_1}{RT_1} \right) \left(\frac{M_1^2 \gamma g_c RT_1}{g_c} \right) = p_2 + \left(\frac{p_2}{RT_2} \right) \left(\frac{M_2^2 \gamma g_c RT_2}{g_c} \right) \quad (6.14)$$

and the momentum equation becomes

$$p_1 (1 + \gamma M_1^2) = p_2 (1 + \gamma M_2^2) \quad (6.15)$$

The governing equations for a standing normal shock have now been simplified for a perfect gas and for convenience are summarized below.

$\frac{p_1 M_1}{\sqrt{T_1}} = \frac{p_2 M_2}{\sqrt{T_2}} \quad (6.11)$	(6.11)
$T_1 \left(1 + \frac{\gamma - 1}{2} M_1^2 \right) = T_2 \left(1 + \frac{\gamma - 1}{2} M_2^2 \right) \quad (6.13)$	(6.13)
$p_1 (1 + \gamma M_1^2) = p_2 (1 + \gamma M_2^2) \quad (6.15)$	(6.15)

There are seven variables involved in these equations:

$$\gamma, p_1, M_1, T_1, p_2, M_2, T_2$$

Once the gas is identified, γ is known, and a given state preceding the shock fixes p_1 , M_1 , and T_1 . Thus equations (6.11), (6.13), and (6.15) are sufficient to solve for the unknowns after the shock: p_2 , M_2 , and T_2 .

Rather than struggle through the details of the solution for every shock problem that we encounter, let's solve it once and for all right now. We proceed to combine the equations above and derive an expression for M_2 in terms of the information given. First, we rewrite equation (6.11) as

$$\frac{p_1 M_1}{p_2 M_2} = \sqrt{\frac{T_1}{T_2}} \quad (6.16)$$

and equation (6.13) as

$$\sqrt{\frac{T_1}{T_2}} = \left(\frac{1 + [(\gamma - 1)/2]M_2^2}{1 + [(\gamma - 1)/2]M_1^2} \right)^{1/2} \quad (6.17)$$

and equation (6.15) as

$$\frac{p_1}{p_2} = \frac{1 + \gamma M_2^2}{1 + \gamma M_1^2} \quad (6.18)$$

We then substitute equations (6.17) and (6.18) into equation (6.16), which yields

$$\left(\frac{1 + \gamma M_2^2}{1 + \gamma M_1^2} \right) \frac{M_1}{M_2} = \left(\frac{1 + [(\gamma - 1)/2]M_2^2}{1 + [(\gamma - 1)/2]M_1^2} \right)^{1/2} \quad (6.19)$$

At this point notice that M_2 is a function of only M_1 and γ . A trivial solution of this is seen to be $M_1 = M_2$, which represents the degenerate case of no shock. To solve the nontrivial case, we square equation (6.19), cross-multiply, and arrange the result as a quadratic in M_2^2 :

$$A (M_2^2)^2 + B M_2^2 + C = 0 \quad (6.20)$$

where A , B , and C are functions of M_1 and γ . Only if you have considerable motivation should you attempt to carry out the tedious algebra (or to utilize a computer utility, see Section 6.9) required to show that the solution of this quadratic is

$$M_2^2 = \frac{M_1^2 + 2/(\gamma - 1)}{[2\gamma/(\gamma - 1)]M_1^2 - 1} \quad (6.21)$$

For our typical shock problem the Mach number after the shock is computed with the aid of equation (6.21), and then T_2 and p_2 can easily be found from equations (6.13) and (6.15). To complete the picture, the total pressures p_{t1} and p_{t2} can be computed in the usual manner. It turns out that since M_1 is supersonic, M_2

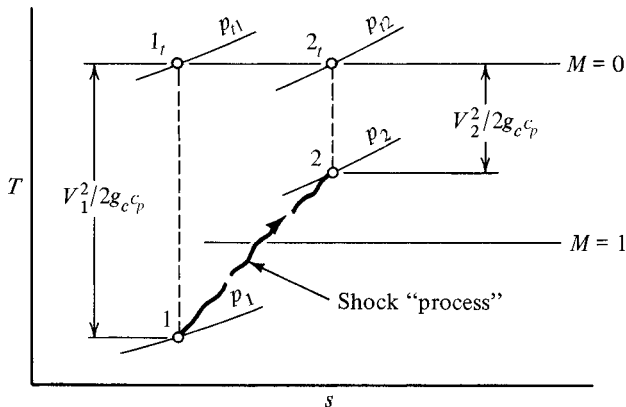


Figure 6.2 T - s diagram for typical normal shock.

will always be subsonic and a typical problem is shown on the T - s diagram in Figure 6.2.

The end points 1 and 2 (before and after the shock) are well-defined states, but the changes that occur within the shock do not follow an equilibrium process in the usual thermodynamic sense. For this reason the shock *process* is usually shown by a dashed or wiggly line. Note that when points 1 and 2 are located on the T - s diagram, it can immediately be seen that an entropy change is involved in the shock process. This is discussed in greater detail in the next section.

Example 6.1 Helium is flowing at a Mach number of 1.80 and enters a normal shock. Determine the pressure ratio across the shock.

We use equation (6.21) to find the Mach number after the shock and (6.15) to obtain the pressure ratio.

$$M_2^2 = \frac{M_1^2 + 2/(\gamma - 1)}{[2\gamma/(\gamma - 1)]M_1^2 - 1} = \frac{(1.8)^2 + 2/(1.67 - 1)}{[(2 \times 1.67)/(1.67 - 1)](1.8)^2 - 1} = 0.411$$

$$M_2 = 0.641$$

$$\frac{p_2}{p_1} = \frac{1 + \gamma M_1^2}{1 + \gamma M_2^2} = \frac{1 + (1.67)(1.8)^2}{1 + (1.67)(0.411)} = 3.80$$

6.5 NORMAL-SHOCK TABLE

We have found that for any given fluid with a specific set of conditions entering a normal shock there is one and only one set of conditions that can result after the shock. An iterative solution results for a fluid that cannot be treated as a perfect gas, whereas the case of the perfect gas produces an explicit solution. The latter case opens the door to further simplifications since equation (6.21) yields the exit Mach number

M_2 for any given inlet Mach number M_1 and we can now eliminate M_2 from all previous equations.

For example, equation (6.13) can be solved for the temperature ratio

$$\frac{T_2}{T_1} = \frac{1 + [(\gamma - 1)/2]M_1^2}{1 + [(\gamma - 1)/2]M_2^2} \quad (6.22)$$

If we now eliminate M_2 by the use of equation (6.21), the result will be

$$\frac{T_2}{T_1} = \frac{\{1 + [(\gamma - 1)/2]M_1^2\}\{[2\gamma/(\gamma - 1)]M_1^2 - 1\}}{[(\gamma + 1)^2/2(\gamma - 1)]M_1^2} \quad (6.23)$$

Similarly, equation (6.15) can be solved for the pressure ratio

$$\frac{p_2}{p_1} = \frac{1 + \gamma M_1^2}{1 + \gamma M_2^2} \quad (6.24)$$

and elimination of M_2 through the use of equation (6.21) will produce

$$\frac{p_2}{p_1} = \frac{2\gamma}{\gamma + 1}M_1^2 - \frac{\gamma - 1}{\gamma + 1} \quad (6.25)$$

If you are very persistent (and in need of algebraic exercise or want to do it with a computer), you might carry out the development of equations (6.23) and (6.25). Also, these can be combined to form the density ratio

$$\frac{\rho_2}{\rho_1} = \frac{(\gamma + 1)M_1^2}{(\gamma - 1)M_1^2 + 2} \quad (6.26)$$

Other interesting ratios can be developed, each as a function of only M_1 and γ . For example, since

$$p_t = p \left(1 + \frac{\gamma - 1}{2} M^2 \right)^{\gamma/(\gamma - 1)} \quad (4.21)$$

we may write

$$\frac{p_{t2}}{p_{t1}} = \frac{p_2}{p_1} \left(\frac{1 + [(\gamma - 1)/2]M_2^2}{1 + [(\gamma - 1)/2]M_1^2} \right)^{\gamma/(\gamma - 1)} \quad (6.27)$$

The ratio p_2/p_1 can be eliminated by equation (6.25) with the following result:

$$\frac{p_{t2}}{p_{t1}} = \left(\frac{[(\gamma + 1)/2]M_1^2}{1 + [(\gamma - 1)/2]M_1^2} \right)^{\gamma/(\gamma - 1)} \left[\frac{2\gamma}{\gamma + 1}M_1^2 - \frac{\gamma - 1}{\gamma + 1} \right]^{1/(1 - \gamma)} \quad (6.28)$$

Equation (6.28) is extremely important since the stagnation pressure ratio is related to the entropy change through equation (4.28):

$$\frac{p_{t2}}{p_{t1}} = e^{-\Delta s/R} \quad (4.28)$$

In fact, we could combine equations (4.28) and (6.28) to obtain an explicit relation for Δs as a function of M_1 and γ .

Note that for a given fluid (γ known), the equations (6.23), (6.25), (6.26), and (6.28) express property ratios as a function of the entering Mach number only. This suggests that we could easily construct a table giving values of M_2 , T_2/T_1 , p_2/p_1 , ρ_2/ρ_1 , p_{t2}/p_{t1} , and so on, versus M_1 for a particular γ . Such a table of normal-shock parameters is given in Appendix H. This table greatly aids problem solution, as the following example shows.

Example 6.2 Fluid is air and can be treated as a perfect gas. If the conditions before the shock are: $M_1 = 2.0$, $p_1 = 20$ psia, and $T_1 = 500^\circ\text{R}$; determine the conditions after the shock and the entropy change across the shock.

First we compute p_{t1} with the aid of the isentropic table.

$$p_{t1} = \frac{p_{t1}}{p_1} p_1 = \left(\frac{1}{0.1278} \right) (20) = 156.5 \text{ psia}$$

Now from the normal-shock table opposite $M_1 = 2.0$, we find

$$M_2 = 0.57735 \quad \frac{p_2}{p_1} = 4.5000 \quad \frac{T_2}{T_1} = 1.6875 \quad \frac{p_{t2}}{p_{t1}} = 0.72087$$

Thus

$$p_2 = \frac{p_2}{p_1} p_1 = (4.5)(20) = 90 \text{ psia}$$

$$T_2 = \frac{T_2}{T_1} T_1 = (1.6875)(500) = 844^\circ\text{R}$$

$$p_{t2} = \frac{p_{t2}}{p_{t1}} p_{t1} = (0.72087)(156.5) = 112.8 \text{ psia}$$

Or p_{t2} can be computed with the aid of the isentropic table:

$$p_{t2} = \frac{p_{t2}}{p_2} p_2 = \left(\frac{1}{0.7978} \right) (90) = 112.8 \text{ psia}$$

To compute the entropy change, we use equation (4.28):

$$\frac{p_{t2}}{p_{t1}} = 0.72087 = e^{-\Delta s/R}$$

$$\frac{\Delta s}{R} = 0.3273$$

$$\Delta s = \frac{(0.3273)(53.3)}{778} = 0.0224 \text{ Btu/lbm}\cdot^\circ\text{R}$$

It is interesting to note that as far as the governing equations are concerned, the problem in Example 6.2 could be completely reversed. The fundamental relations of continuity (6.11), energy (6.13), and momentum (6.15) would be satisfied completely if we changed the problem to $M_1 = 0.577$, $p_1 = 90$ psia, $T_1 = 844^\circ\text{R}$, with the resulting $M_2 = 2.0$, $p_2 = 20$ psia, and $T_2 = 500^\circ\text{R}$ (which would represent an *expansion shock*). However, in the latter case the entropy change would be *negative*, which clearly violates the second law of thermodynamics for an adiabatic no-work system.

Example 6.2 and the accompanying discussion clearly show that the shock phenomenon is a one-way process (i.e., irreversible). It is always a compression shock, and for a normal shock the flow is always supersonic before the shock and subsonic after the shock. One can note from the table that as M_1 increases, the pressure, temperature, and density ratios increase, indicating a stronger shock (or compression). One can also note that as M_1 increases, p_{t2}/p_{t1} decreases, which means that the entropy change increases. Thus as the strength of the shock increases, the losses also increase.

Example 6.3 Air has a temperature and pressure of 300 K and 2 bar abs., respectively. It is flowing with a velocity of 868 m/s and enters a normal shock. Determine the density before and after the shock.

$$\begin{aligned}\rho_1 &= \frac{p_1}{RT_1} = \frac{2 \times 10^5}{(287)(300)} = 2.32 \text{ kg/m}^3 \\ a_1 &= (\gamma g_c RT_1)^{1/2} = [(1.4)(1)(287)(300)]^{1/2} = 347 \text{ m/s} \\ M_1 &= \frac{V_1}{a_1} = \frac{868}{347} = 2.50\end{aligned}$$

From the shock table we obtain

$$\begin{aligned}\frac{\rho_2}{\rho_1} &= \frac{p_2}{p_1} \frac{T_1}{T_2} = (7.125) \left(\frac{1}{2.1375} \right) = 3.333 \\ \rho_2 &= 3.3333\rho_1 = (3.3333)(2.32) = 7.73 \text{ kg/m}^3\end{aligned}$$

Example 6.4 Oxygen enters the converging section shown in Figure E6.4 and a normal shock occurs at the exit. The entering Mach number is 2.8 and the area ratio $A_1/A_2 = 1.7$. Compute the overall static temperature ratio T_3/T_1 . Neglect all frictional losses.

$$\frac{A_2}{A_2^*} = \frac{A_2}{A_1} \frac{A_1}{A_1^*} \frac{A_1^*}{A_2^*} = \left(\frac{1}{1.7} \right) (3.5001)(1) = 2.06$$

Thus $M_2 \approx 2.23$, and from the shock table we get

$$\begin{aligned}M_3 &= 0.5431 \quad \text{and} \quad \frac{T_3}{T_2} = 1.8835 \\ \frac{T_3}{T_1} &= \frac{T_3}{T_2} \frac{T_2}{T_2} \frac{T_2}{T_2} \frac{T_2}{T_1} \frac{T_1}{T_1} = (1.8835)(0.5014)(1) \frac{1}{0.3894} = 2.43\end{aligned}$$

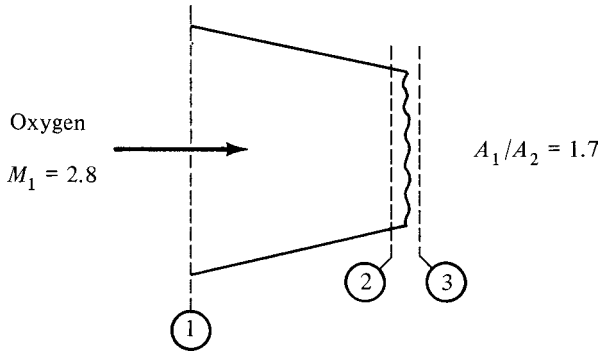


Figure E6.4

We can also develop a relation for the velocity change across a standing normal shock for use in Chapter 7. Starting with the basic continuity equation

$$\rho_1 V_1 = \rho_2 V_2 \tag{6.2}$$

we introduce the density relation from (6.26):

$$\frac{V_2}{V_1} = \frac{\rho_1}{\rho_2} = \frac{(\gamma - 1)M_1^2 + 2}{(\gamma + 1)M_1^2} \tag{6.29}$$

and subtract 1 from each side:

$$\frac{V_2 - V_1}{V_1} = \frac{(\gamma - 1)M_1^2 + 2 - (\gamma + 1)M_1^2}{(\gamma + 1)M_1^2} \tag{6.30}$$

$$\frac{V_2 - V_1}{M_1 a_1} = \frac{2(1 - M_1^2)}{(\gamma + 1)M_1^2} \tag{6.31}$$

or

$$\boxed{\frac{V_1 - V_2}{a_1} = \left(\frac{2}{\gamma + 1}\right) \left(\frac{M_1^2 - 1}{M_1}\right)} \tag{6.32}$$

This is another parameter that is a function of M_1 and γ and thus may be added to our shock table. Its usefulness for solving certain types of problems will become apparent in Chapter 7.

6.6 SHOCKS IN NOZZLES

In Section 5.7 we discussed the isentropic operations of a converging–diverging nozzle. Remember that this type of nozzle is physically distinguished by its *area ratio*, the ratio of the exit area to the throat area. Furthermore, its flow conditions are determined by the *operating pressure ratio*, the ratio of the receiver pressure to the inlet stagnation pressure. We identified two significant critical pressure ratios. For any pressure ratio above the first critical point, the nozzle is not choked and has subsonic flow throughout (typical venturi operation). The first critical point represents flow that is subsonic in both the convergent and divergent sections but is choked with a Mach number of 1.0 in the throat. The third critical point represents operation at the design condition with subsonic flow in the converging section and supersonic flow in the entire diverging section. It is also choked with Mach 1.0 in the throat. The first and third critical points are the only operating points that have (1) isentropic flow throughout, (2) a Mach number of 1 at the throat, and (3) exit pressure equal to receiver pressure.

Remember that with subsonic flow at the exit, the exit pressure *must* equal the receiver pressure. Imposing a pressure ratio slightly below that of the first critical point presents a problem in that there is no way that *isentropic* flow can meet the boundary condition of pressure equilibrium at the exit. However, there is nothing to prevent a *nonisentropic* flow adjustment from occurring within the nozzle. This internal adjustment takes the form of a standing normal shock, which we now know involves an entropy change.

As the pressure ratio is lowered below the first critical point, a normal shock forms just downstream of the throat. The remainder of the *nozzle* is now acting as a diffuser since after the shock the flow is subsonic and the area is increasing. The shock will locate itself in a position such that the pressure changes that occur ahead of the shock, across the shock, and downstream of the shock will produce a pressure that *exactly matches the outlet pressure*. In other words, *the operating pressure ratio determines the location and strength of the shock*. An example of this mode of operation is shown in Figure 6.3. As the pressure ratio is lowered further, the shock continues to move toward the exit. When the shock is located at the exit plane, this condition is referred to as the *second critical point*.

We have ignored boundary layer effects that are always present due to fluid viscosity. These effects sometimes cause what are known as *lambda shocks*. It is important for you to understand that real flows are often much more complicated than the idealizations that we are describing.

If the operating pressure ratio is between the second and third critical points, a compression takes place *outside* the nozzle. This is called *overexpansion* (i.e., the flow has been expanded too far within the nozzle). If the receiver pressure is below the third critical point, an expansion takes place *outside* the nozzle. This condition is called *underexpansion*. We investigate these conditions in Chapters 7 and 8 after the appropriate background has been covered.

For the present we proceed to investigate the operational regime between the first and second critical points. Let us work with the same nozzle and inlet conditions that

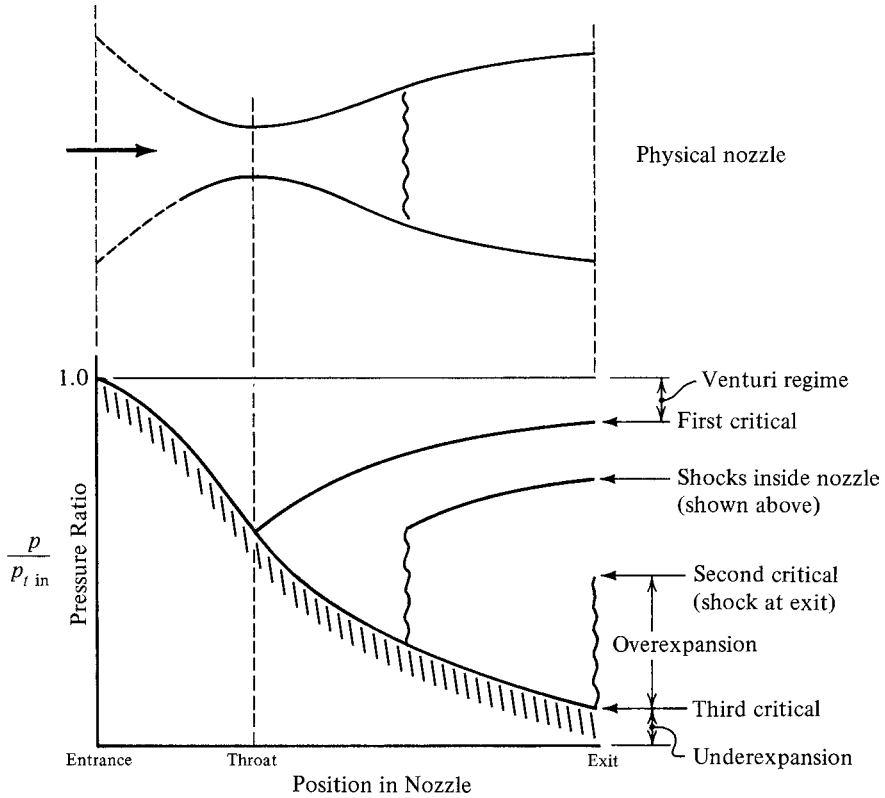


Figure 6.3 Operating modes for DeLaval nozzle.

we used in Section 5.7. The nozzle has an area ratio of 2.494 and is fed by air at 100 psia and 600°R from a large tank. Thus the inlet conditions are essentially stagnation. For these fixed inlet conditions we previously found that a receiver pressure of 96.07 psia (an *operating pressure ratio* of 0.9607) identifies the first critical point and a receiver pressure of 6.426 psia (an *operating pressure ratio* of 0.06426) exists at the third critical point.

What receiver pressure do we need to operate at the second critical point? Figure 6.4 shows such a condition and you should recognize that the entire nozzle up to the shock is operating at its design or third critical condition.

From the isentropic table at $A/A^* = 2.494$, we have

$$M_3 = 2.44 \quad \text{and} \quad \frac{P_3}{P_{t3}} = 0.06426$$

From the normal-shock table for $M_3 = 2.44$, we have

$$M_4 = 0.5189 \quad \text{and} \quad \frac{P_4}{P_3} = 6.7792$$

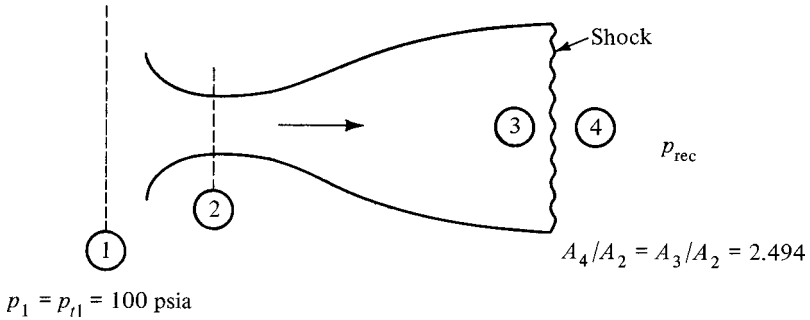


Figure 6.4 Operation at second critical.

and the operating pressure ratio will be

$$\frac{p_{rec}}{p_{t1}} = \frac{p_4}{p_{t1}} = \frac{p_4}{p_3} \frac{p_3}{p_{t3}} \frac{p_{t3}}{p_{t1}} = (6.7792)(0.06426)(1) = 0.436$$

or for $p_1 = p_{t1} = 100 \text{ psia}$,

$$p_4 = p_{rec} = 43.6 \text{ psia}$$

Thus for our converging–diverging nozzle with an area ratio of 2.494, any operating pressure ratio between 0.9607 and 0.436 will cause a normal shock to be located someplace in the diverging portion of the nozzle.

Suppose that we are given an operating pressure ratio of 0.60. The logical question to ask is: Where is the shock? This situation is shown in Figure 6.5. We must take advantage of the only two available pieces of information and from these construct a solution. We know that

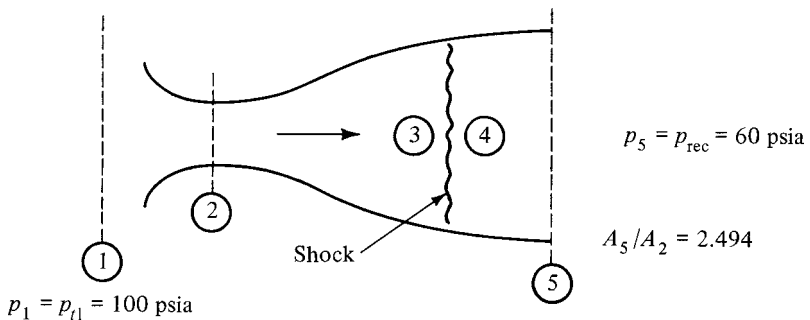


Figure 6.5 DeLaval nozzle with normal shock in diverging section.

$$\frac{A_5}{A_2} = 2.494 \quad \text{and} \quad \frac{p_5}{p_{t1}} = 0.60$$

We may also assume that all losses occur across the shock and we know that $M_2 = 1.0$. It might also be helpful to visualize the flow on a $T-s$ diagram, and this is shown in Figure 6.6. Since there are no losses up to the shock, we know that

$$A_2 = A_1^*$$

Thus

$$\frac{A_5 p_5}{A_2 p_{t1}} = \frac{A_5 p_5}{A_1^* p_{t1}} \tag{6.33}$$

We also know from equation (5.35) that for the case of adiabatic no-work flow of a perfect gas,

$$A_1^* p_{t1} = A_5^* p_{t5} \tag{6.34}$$

Thus

$$\frac{A_5 p_5}{A_1^* p_{t1}} = \frac{A_5 p_5}{A_5^* p_{t5}}$$

In summary:

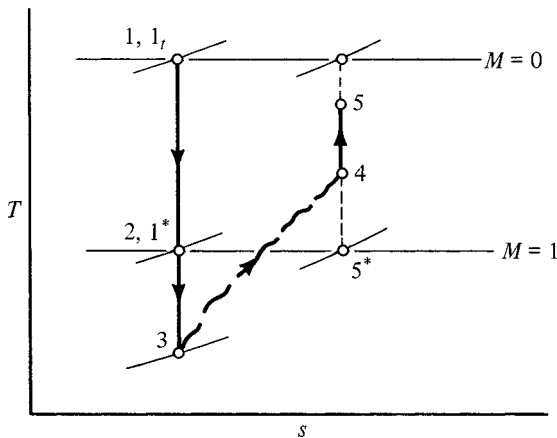


Figure 6.6 $T-s$ diagram for DeLaval nozzle with normal shock. (For physical picture see Figure 6.5.)

$$\frac{A_5 p_5}{A_2 p_{t1}} = \frac{A_5 p_5}{A_1^* p_{t1}} = \frac{A_5 p_5}{A_5^* p_{t5}} \tag{6.35}$$

known

↓ ↓

(2.494)(0.6)

=

↑

1.4964

Note that we have manipulated the known information into an expression with all similar station subscripts. In Section 5.6 we showed with equation (5.43) that the ratio Ap/A^*p_t is a simple function of M and γ and thus is listed in the isentropic table. A check in the table shows that the exit Mach number is $M_5 \approx 0.38$.

To locate the shock, seek the ratio

$$\frac{p_{t5}}{p_{t1}} = \frac{p_{t5} p_5}{p_5 p_{t1}} = \left(\frac{1}{0.9052} \right) (0.6) = 0.664$$

↑

From isentropic table at $M = 0.38$

↑

Given

and since all the loss is assumed to take place across the shock, we have

$$p_{t5} = p_{t4} \quad \text{and} \quad p_{t1} = p_{t3}$$

Thus

$$\frac{p_{t4}}{p_{t3}} = \frac{p_{t5}}{p_{t1}} = 0.664$$

Knowing the total pressure ratio across the shock, we can determine from the normal-shock table that $M_3 \approx 2.12$, and then from the isentropic table we note that this Mach number will occur at an area ratio of about $A_3/A_3^* = A_3/A_2 = 1.869$. More accurate answers could be obtained by interpolating within the tables.

We see that if we are given a physical converging–diverging nozzle (area ratio is known) and an operating pressure ratio between the first and second critical points, it is a simple matter to determine the position and strength of the normal shock in the diverging section.

Example 6.5 A converging–diverging nozzle has an area ratio of 3.50. At off-design conditions, the exit Mach number is observed to be 0.3. What operating pressure ratio would cause this situation?

Using the section numbering system of Figure 6.5, for $M_3 = 0.3$, we have

$$\frac{p_5 A_5}{p_{t5} A_5^*} = 1.9119$$

$$\frac{p_5}{p_{t1}} = \frac{p_5 A_5}{p_{t5} A_5^*} \left(\frac{p_{t5} A_5^*}{p_{t1} A_1^*} \right) \frac{A_1^* A_2}{A_2 A_5} = (1.9119)(1)(1) \left(\frac{1}{3.50} \right) = 0.546$$

Could you now find the shock location and Mach number?

Example 6.6 Air enters a converging–diverging nozzle that has an overall area ratio of 1.76. A normal shock occurs at a section where the area is 1.19 times that of the throat. Neglect all friction losses and find the operating pressure ratio. Again, we use the numbering system shown in Figure 6.5.

From the isentropic table at $A_3/A_2 = 1.19$, $M_3 = 1.52$.

From the shock table, $M_4 = 0.6941$ and $p_{t4}/p_{t3} = 0.9233$. Then

$$\frac{A_5}{A_5^*} = \frac{A_5}{A_2} \frac{A_2}{A_4} \frac{A_4}{A_4^*} \frac{A_4^*}{A_5^*} = (1.76) \left(\frac{1}{1.19} \right) (1.0988)(1) = 1.625$$

Thus $M_5 \approx 0.389$.

$$\frac{p_5}{p_1} = \frac{p_5}{p_{t5}} \frac{p_{t5}}{p_{t4}} \frac{p_{t4}}{p_{t3}} \frac{p_{t3}}{p_{t1}} = (0.9007)(1)(0.9233)(1) = 0.832$$

6.7 SUPERSONIC WIND TUNNEL OPERATION

To provide a test section with supersonic flow requires a converging–diverging nozzle. To operate economically, the nozzle–test-section combination must be followed by a diffusing section which also must be converging–diverging. This configuration presents some interesting problems in flow analysis. Starting up such a wind tunnel is another example of nozzle operation at pressure ratios above the second critical point. Figure 6.7 shows a typical tunnel in its most *unfavorable* operating condition, which occurs at startup. A brief analysis of the situation follows.

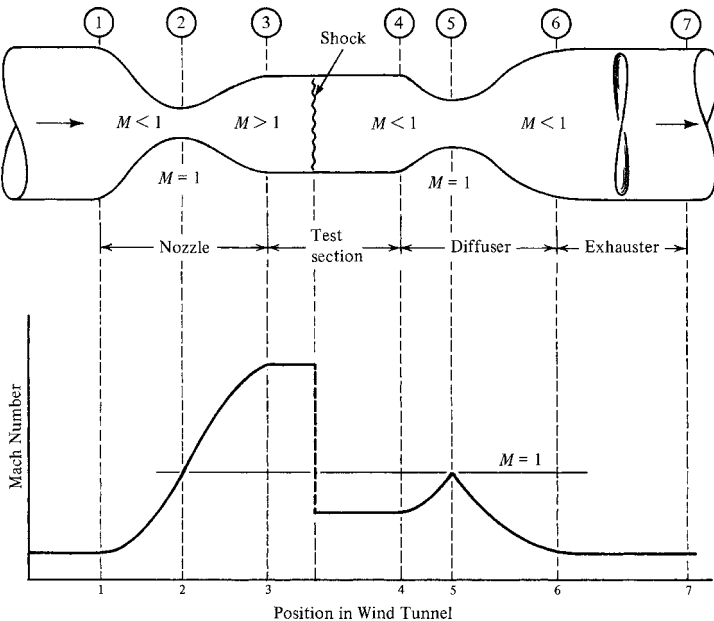


Figure 6.7 Supersonic tunnel at startup (with associated Mach number variation).

As the exhauster is started, this reduces the pressure and produces flow through the tunnel. At first the flow is subsonic throughout, but at increased power settings the exhauster reduces pressures still further and causes increased flow rates until the nozzle throat (section 2) becomes choked. At this point the nozzle is operating at its first critical condition. As power is increased further, a normal shock is formed just downstream of the throat, and if the tunnel pressure is decreased continuously, the shock will move down the diverging portion of the nozzle and pass rapidly through the test section and into the diffuser. Figure 6.8 shows this general running condition, which is called the *most favorable condition*.

We return to Figure 6.7, which shows the shock located in the test section. The variation of Mach number throughout the flow system is also shown for this case. This is called the *most unfavorable condition* because the shock occurs at the highest possible Mach number and thus the losses are greatest. We might also point out that the diffuser throat (section 5) must be sized for this condition. Let us see how this is done.

Recall the relation $p_t A^* = \text{constant}$. Thus

$$p_{t2} A_2^* = p_{t5} A_5^*$$

But since Mach 1 exists at both sections 2 and 5 (during startup),

$$A_2 = A_2^* \quad \text{and} \quad A_5 = A_5^*$$

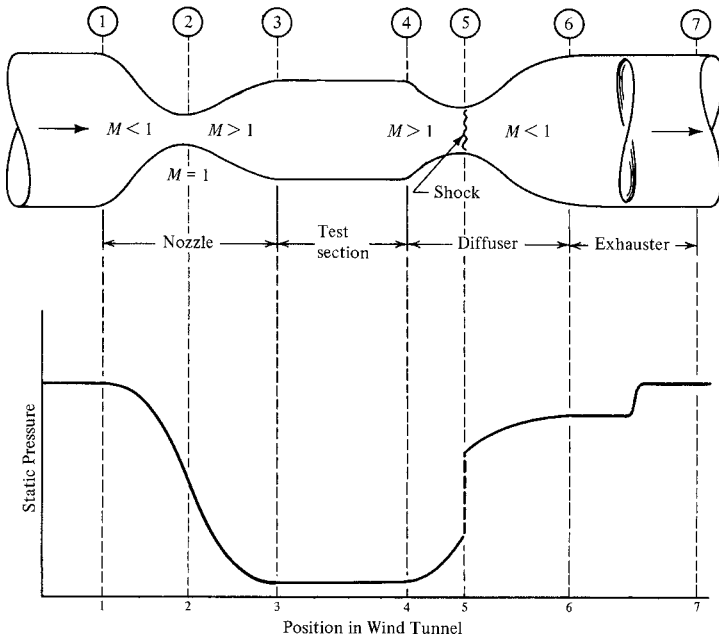


Figure 6.8 Supersonic tunnel in running condition (with associated pressure variation).

Hence

$$p_{t2}A_2 = p_{t5}A_5 \quad (6.36)$$

Due to the shock losses (and other friction losses), we know that $p_{t5} < p_{t2}$, and therefore A_5 must be greater than A_2 . Knowing the test-section-design Mach number fixes the shock strength in this unfavorable condition and A_5 is easily determined from equation (6.36). Keep in mind that this represents a *minimum* area for the diffuser throat. If it is made any smaller than this, the tunnel could never be started (i.e., we could never get the shock into and through the test section). In fact, if A_5 is made too small, the flow will choke first in this throat and never get a chance to reach sonic conditions in section 2.

Once the shock has passed into the diffuser throat, knowing that $A_5 > A_2$ we realize that the tunnel can never run with sonic velocity at section 5. Thus, to operate as a diffuser, there must be a shock at this point, as shown in Figure 6.8. We have also shown the pressure variation through the tunnel for this running condition.

To keep the losses during running at a minimum, the shock in the diffuser should occur at the lowest possible Mach number, which means a small throat. However, we have seen that it is necessary to have a large diffuser throat in order to start the tunnel. A solution to this dilemma would be to construct a diffuser with a variable-area throat. After startup, A_5 could be decreased, with a corresponding decrease in shock strength and operating power. However, the power required for any installation must always be computed on the basis of the unfavorable startup condition.

Although the supersonic wind tunnel is used primarily for aeronautically oriented work, its operation serves to solidify many of the important concepts of variable-area flow, normal shocks, and their associated flow losses. Equally important is the fact that it begins to focus our attention on some practical design applications.

6.8 WHEN γ IS NOT EQUAL TO 1.4

As indicated in Chapter 5, we discuss the effects that changes from $\gamma = 1.4$ bring about. Figures 6.9 and 6.10 show curves for T_2/T_1 and p_2/p_1 versus Mach number in the interval $1 \leq M \leq 5$ entering the shock. This is done for various ratios of the specific heats ($\gamma = 1.13, 1.4, \text{ and } 1.67$).

1. Figure 6.9 depicts T_2/T_1 across a normal-shock wave. As can be seen in the figure, the temperature ratio is very sensitive to γ .
2. On the other hand, as shown in Figure 6.10, the pressure ratio across the normal shock is relatively less sensitive to γ . Below $M \approx 1.5$ the pressure ratio tabulated in Appendix H could be used with little error for any γ .

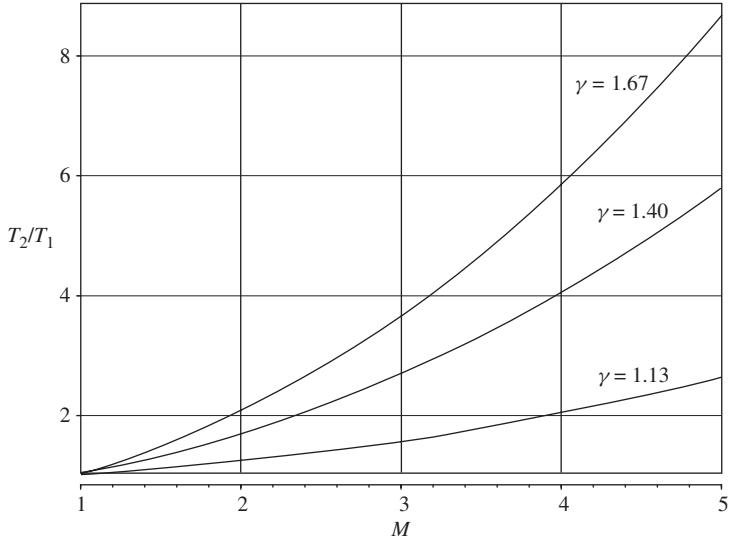


Figure 6.9 Temperature ratio across a normal shock versus Mach number for various values of γ .

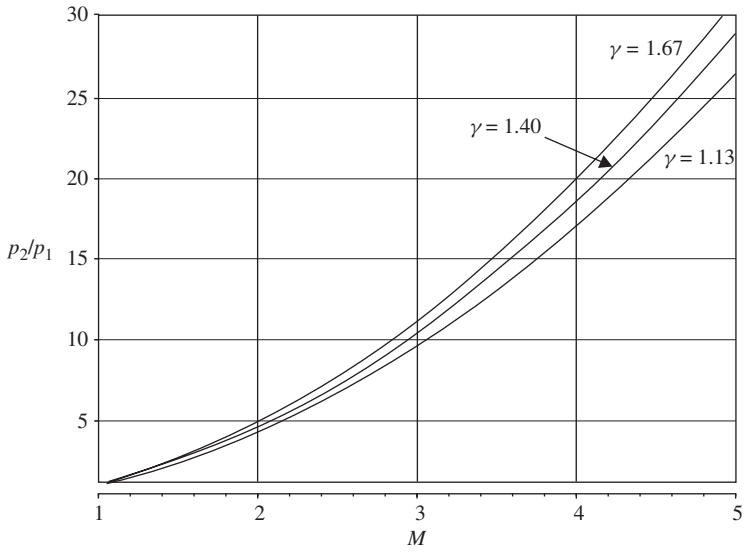


Figure 6.10 Pressure ratio across a normal shock versus Mach number for various values of γ .

Strictly speaking, these curves are representative only for cases where γ variations are *negligible within the flow*. However, they offer hints as to what magnitude of changes are to be expected in other cases. Flows where γ -variations are *not negligible within the flow* are treated in Chapter 11.

6.9 (OPTIONAL) BEYOND THE TABLES

As illustrated in Chapter 5, one can eliminate a lot of interpolation and get accurate answers for any ratio of the specific heats γ and/or any Mach number by using a computer utility such as MAPLE. For instance, we can easily calculate the left-hand side of equations (6.21), (6.23), (6.25), (6.26), and (6.28) to a high degree of precision given M_1 and γ (or calculate any one of the three variables given the other two).

Example 6.7 Let's go back to Example 6.3, where the density ratio across the shock is desired. We can compute this from equation (6.26):

$$\frac{\rho_2}{\rho_1} = \frac{(\gamma + 1)M_1^2}{(\gamma - 1)M_1^2 + 2} \tag{6.26}$$

Let

- $g \equiv \gamma$, a parameter (the ratio of specific heats)
- $X \equiv$ the independent variable (which in this case is M_1)
- $Y \equiv$ the dependent variable (which in this case is ρ_2/ρ_1)

Listed below are the precise inputs and program that you use in the computer.

```
[ > g := 1.4: X := 2.5:
[ > Y := ((g+1)*X^2) / ((g-1)*X^2 + 2);
[ Y := 3.333333333
```

which is the desired answer.

A rather unique capability of MAPLE is its ability to solve equations symbolically (in contrast to strictly numerically). This comes in handy when trying to reproduce proofs of somewhat complicated algebraic expressions.

Example 6.8 Suppose that we want to solve for M_2 in equation (6.19):

$$\left(\frac{1 + \gamma M_2^2}{1 + \gamma M_1^2} \right) \frac{M_1}{M_2} = \left(\frac{1 + [(\gamma - 1)/2]M_2^2}{1 + [(\gamma - 1)/2]M_1^2} \right)^{1/2} \tag{6.19}$$

Let

- $g \equiv \gamma$, a parameter (the ratio of specific heats)
- $X \equiv$ the independent variable (which in this case is M_1^2)

$Y \equiv$ the dependent variable (which in this case is M_2^2)

Listed below are the precise inputs and program that you use in the computer.

$$\left[\begin{array}{l} > \text{solve}(((1 + g*Y)^2) / ((1 + g*X)^2)) * (X/Y) = (2 + \\ & (g - 1)*Y) / (2 + (g-1)*X), Y); \\ & X, \frac{2 + Xg - X}{-g + 1 + 2Xg} \end{array} \right.$$

which are the desired answers.

Above are the two roots of Y (or M_2^2), because we are solving a quadratic. With some manipulation we can get the second or nontrivial root to look like equation (6.21). It is easy to check it by substituting in some numbers and comparing results with the normal-shock table.

The type of calculation shown above can be integrated into more sophisticated programs to handle most gas dynamic calculations.

6.10 SUMMARY

We examined stationary discontinuities of a type perpendicular to the flow. These are finite pressure disturbances and are called *standing normal shock waves*. If conditions are known ahead of a shock, a precise set of conditions must exist after the shock. Explicit solutions can be obtained for the case of a perfect gas and these lend themselves to tabulation for various specific heat ratios.

Shocks are found only in supersonic flow, and the flow is always subsonic after a normal shock. The shock wave is a type of compression process, although a rather inefficient one since relatively large losses are involved in the process. (What has been lost?) Shocks provide a means of flow adjustment to meet imposed pressure conditions in supersonic flow.

As in Chapter 5, most of the equations in this chapter need not be memorized. However, you should be completely familiar with the fundamental relations that apply to all fluids across a normal shock. These are equations (6.2), (6.4), and (6.9). Essentially, these say that the end points of a shock have three things in common:

1. The same mass flow per unit area
2. The same stagnation enthalpy
3. The same value of $p + \rho V^2/g_c$

The working equations that apply to perfect gases, equations (6.11), (6.13), and (6.15), are summarized in Section 6.4. In Section 6.5 we developed equation (6.32) and noted that it can be very useful in solving certain types of problems. You should also be familiar with the various ratios that have been tabulated in Appendix H. Just knowing what kind of information you have available is frequently very helpful in setting up a problem solution.

PROBLEMS

Unless otherwise indicated, you may assume that there is no friction in any of the following flow systems; thus the only losses are those generated by shocks.

- 6.1. A standing normal shock occurs in air that is flowing at a Mach number of 1.8.
- What are the pressure, temperature, and density ratios across the shock?
 - Compute the entropy change for the air as it passes through the shock.
 - Repeat part (b) for flows at $M = 2.8$ and 3.8 .
- 6.2. The difference between the total and static pressure before a shock is 75 psi. What is the maximum static pressure that can exist at this point ahead of the shock? The gas is oxygen. (*Hint*: Start by finding the static and total pressures ahead of the shock for the limiting case of $M = 1.0$.)
- 6.3. In an arbitrary perfect gas, the Mach number before a shock is infinite.
- Determine a general expression for the Mach number after the shock. What is the value of this expression for $\gamma = 1.4$?
 - Determine general expressions for the ratios p_2/p_1 , T_2/T_1 , ρ_2/ρ_1 , and p_{t2}/p_{t1} . Do these agree with the values shown in Appendix H for $\gamma = 1.4$?
- 6.4. It is known that sonic velocity exists in each throat of the system shown in Figure P6.4. The entropy change for the air is $0.062 \text{ Btu/lbm}\cdot^\circ\text{R}$. Negligible friction exists in the duct. Determine the area ratios A_3/A_1 and A_2/A_1 .

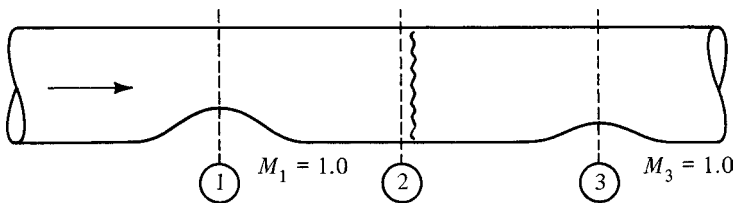


Figure P6.4

- 6.5. Air flows in the system shown in Figure P6.5. It is known that the Mach number after the shock is $M_3 = 0.52$. Considering p_1 and p_2 , it is also known that one of these pressures is twice the other.
- Compute the Mach number at section 1.
 - What is the area ratio A_1/A_2 ?

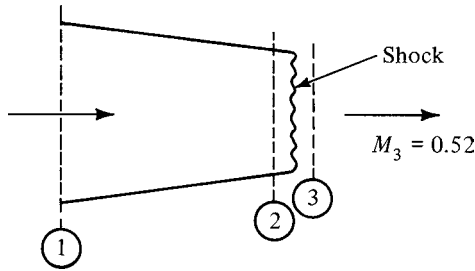


Figure P6.5

- 6.6. A shock stands at the inlet to the system shown in Figure P6.6. The free-stream Mach number is $M_1 = 2.90$, the fluid is nitrogen, $A_2 = 0.25 \text{ m}^2$, and $A_3 = 0.20 \text{ m}^2$. Find the outlet Mach number and the temperature ratio T_3/T_1 .

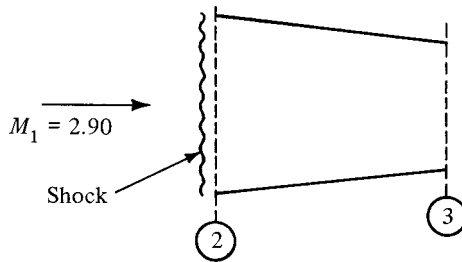


Figure P6.6

- 6.7. A converging–diverging nozzle is designed to produce a Mach number of 2.5 with air.
- What operating pressure ratio (p_{rec}/p_t inlet) will cause this nozzle to operate at the first, second, and third critical points?
 - If the inlet stagnation pressure is 150 psia, what receiver pressures represent operation at these critical points?
 - Suppose that the receiver pressure were fixed at 15 psia. What inlet pressures are necessary to cause operation at the critical points?
- 6.8. Air enters a convergent–divergent nozzle at $20 \times 10^5 \text{ N/m}^2$ and 40°C . The receiver pressure is $2 \times 10^5 \text{ N/m}^2$ and the nozzle throat area is 10 cm^2 .
- What should the exit area be for the design conditions above (i.e., to operate at third critical?)
 - With the nozzle area fixed at the value determined in part (a) and the inlet pressure held at $20 \times 10^5 \text{ N/m}^2$, what receiver pressure would cause a shock to stand at the exit?
 - What receiver pressure would place the shock at the throat?

- 6.9. In Figure P6.9, $M_1 = 3.0$ and $A_1 = 2.0 \text{ ft}^2$. If the fluid is carbon monoxide and the shock occurs at an area of 1.8 ft^2 , what is the minimum area possible for section 4?

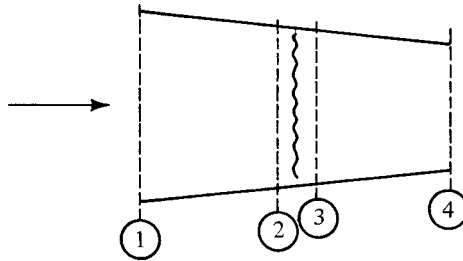


Figure P6.9

- 6.10. A converging–diverging nozzle has an area ratio of 7.8 but is not being operated at its design pressure ratio. Consequently, a normal shock is found in the diverging section at an area twice that of the throat. The fluid is oxygen.
- Find the Mach number at the exit and the operating pressure ratio.
 - What is the entropy change through the nozzle if there is negligible friction?
- 6.11. The diverging section of a supersonic nozzle is formed from the frustrum of a cone. When operating at its third critical point with nitrogen, the exit Mach number is 2.6. Compute the operating pressure ratio that will locate a normal shock as shown in Figure P6.11.

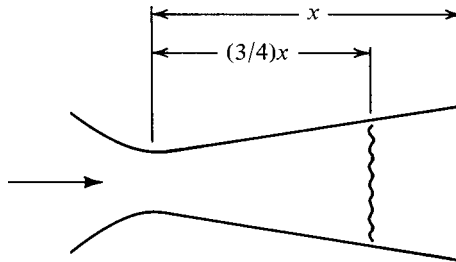


Figure P6.11

- 6.12. A converging–diverging nozzle receives air from a tank at 100 psia and 600°R . The pressure is 28.0 psia immediately preceding a plane shock that is located in the diverging section. The Mach number at the exit is 0.5 and the flow rate is 10 lbm/sec. Determine:
- The throat area.
 - The area at which the shock is located.
 - The outlet pressure required to operate the nozzle in the manner described above.
 - The outlet area.
 - The design Mach number.

- 6.13.** Air enters a device with a Mach number of $M_1 = 2.0$ and leaves with $M_2 = 0.25$. The ratio of exit to inlet area is $A_2/A_1 = 3.0$.
- Find the static pressure ratio p_2/p_1 .
 - Determine the stagnation pressure ratio p_{t2}/p_{t1} .
- 6.14.** Oxygen, with $p_t = 95.5$ psia, enters a diverging section of area 3.0 ft^2 . At the outlet the area is 4.5 ft^2 , the Mach number is 0.43 , and the static pressure is 75.3 psia. Determine the possible values of Mach number that could exist at the inlet.
- 6.15.** A converging–diverging nozzle has an area ratio of 3.0 . The stagnation pressure at the inlet is 8.0 bar and the receiver pressure is 3.5 bar. Assume that $\gamma = 1.4$.
- Compute the critical operating pressure ratios for the nozzle and show that a shock is located within the diverging section.
 - Compute the Mach number at the outlet.
 - Compute the shock location (area) and the Mach number before the shock.
- 6.16.** Nitrogen flows through a converging–diverging nozzle designed to operate at a Mach number of 3.0 . If it is subjected to an operating pressure ratio of 0.5 :
- Determine the Mach number at the exit.
 - What is the entropy change in the nozzle?
 - Compute the area ratio at the shock location.
 - What value of the operating pressure ratio would be required to move the shock to the exit?
- 6.17.** Consider a converging–diverging nozzle feeding air from a reservoir at p_1 and T_1 . The exit area is $A_e = 4A_2$, where A_2 is the area at the throat. The back pressure p_{rec} is steadily reduced from an initial $p_{\text{rec}} = p_1$.
- Determine the receiver pressures (in terms of p_1) that would cause this nozzle to operate at first, second, and third critical points.
 - Explain how the nozzle would be operating at the following back pressures:
(i) $p_{\text{rec}} = p_1$; (ii) $p_{\text{rec}} = 0.990p_1$; (iii) $p_{\text{rec}} = 0.53p_1$; (iv) $p_{\text{rec}} = 0.03p_1$.
- 6.18.** Draw a detailed T – s diagram corresponding to the *supersonic tunnel startup* condition (Figure 6.7). Identify the various stations (i.e., 1, 2, 3, etc.) in your diagram. You may assume no heat transfer and no frictional losses in the system.
- 6.19.** Consider the wind tunnel shown in Figures 6.7 and 6.8. Atmospheric air enters the system with a pressure and temperature of 14.7 psia and 80°F , respectively, and has negligible velocity at section 1. The test section has a cross-sectional area of 1 ft^2 and operates at a Mach number of 2.5 . You may assume that the diffuser reduces the velocity to approximately zero and that final exhaust is to the atmosphere with negligible velocity. The system is fully insulated and there are negligible friction losses. Find:
- The throat area of the nozzle.
 - The mass flow rate.
 - The minimum possible throat area of the diffuser.
 - The total pressure entering the exhauster at startup (Figure 6.7).
 - The total pressure entering the exhauster when running (Figure 6.8).
 - The hp value required for the exhauster (based on an isentropic compression).

CHECK TEST

You should be able to complete this test without reference to material in the chapter.

- 6.1.** Given the continuity, energy, and momentum equations in a form suitable for steady one-dimensional flow, analyze a standing normal shock in an arbitrary fluid. Then simplify your results for the case of a perfect gas.
- 6.2.** Fill in the following blanks with *increases*, *decreases*, or *remains constant*. Across a standing normal shock, the
- (a) Temperature _____
 - (b) Stagnation pressure _____
 - (c) Velocity _____
 - (d) Density _____
- 6.3.** Consider a converging–diverging nozzle with an area ratio of 3.0 and assume operation with a perfect gas ($\gamma = 1.4$). Determine the operating pressure ratios that would cause operation at the first, second, and third critical points.
- 6.4.** Sketch a T – s diagram for a standing normal shock in a perfect gas. Indicate static and total pressures, static and total temperatures, and velocities (both before and after the shock).
- 6.5.** Nitrogen flows in an insulated variable-area system with friction. The area ratio is $A_2/A_1 = 2.0$ and the static pressure ratio is $p_2/p_1 = 0.20$. The Mach number at section 2 is $M_2 = 3.0$.
- (a) What is the Mach number at section 1?
 - (b) Is the gas flowing from 1 to 2 or from 2 to 1?
- 6.6.** A large chamber contains air at 100 psia and 600°R. A converging–diverging nozzle with an area ratio of 2.50 is connected to the chamber and the receiver pressure is 60 psia.
- (a) Determine the outlet Mach number and velocity.
 - (b) Find the Δs value across the shock.
 - (c) Draw a T – s diagram for the flow through the nozzle.

Chapter 7

Moving and Oblique Shocks

7.1 INTRODUCTION

In Section 4.3 we superimposed a uniform velocity on a traveling sound wave so that we could obtain a standing wave and analyze it by the use of steady flow equations. We use precisely the same technique in this chapter to compare standing and moving normal shocks. Recall that velocity superposition does not affect the *static* thermodynamic state of a fluid but does change the *stagnation* conditions (see Section 3.5).

We then superimpose a velocity tangential to a standing normal shock and find that this results in the formation of an *oblique shock*, one in which the wave front is at an angle of other than 90° to the approaching flow. The case of an oblique shock in a perfect gas will then be analyzed in detail, and as you might suspect, these results lend themselves to the construction of tables and charts that greatly aid problem solution. We then discuss a number of places where oblique shocks can be found, along with an investigation of the boundary conditions that control shock formation. The chapter closes with a discussion of conical shocks and their solutions.

7.2 OBJECTIVES

After completing this chapter successfully, you should be able to:

1. Identify the properties that remain constant and the properties that change when a uniform velocity is superimposed on another flow field.
2. Describe how moving normal shocks can be analyzed with the relations developed for standing normal shocks.
3. Explain how an oblique shock can be described by the superposition of a normal shock and another flow field.
4. Sketch an oblique shock and define the *shock angle* and *deflection angle*.

5. (*Optional*) Analyze an oblique shock in a perfect gas and develop the relation among shock angle, deflection angle, and entering Mach number.
6. Describe the general results of an oblique-shock analysis in terms of a diagram such as shock angle versus inlet Mach number for various deflection angles.
7. Distinguish between weak and strong shocks. Know when each might result.
8. Describe the conditions that cause a detached shock to form.
9. State what operating conditions will cause an oblique shock to form at a supersonic nozzle exit.
10. Explain the reason that (three-dimensional) conical shocks and (two-dimensional) wedge shocks differ quantitatively.
11. Demonstrate the ability to solve typical problems involving moving normal shocks or oblique shocks (planar or conical) by use of the appropriate equations and tables or charts.

7.3 NORMAL VELOCITY SUPERPOSITION: MOVING NORMAL SHOCKS

Let us consider a plane shock wave that is moving into a stationary fluid such as shown in Figure 7.1. Such a wave could be found traveling down a shock tube or could have originated from a distant explosive device in open air. In the latter case the shock travels out from the explosion point in the form of a spherical wave front. However, very quickly the radius of curvature becomes so large that it may be treated as a planar wave front with little error. A typical problem might be to determine the conditions that exist after passage of the shock front, assuming that we know the original conditions and the speed of the shock wave.

In Figure 7.1 we are on the ground viewing a normal shock that is moving to the left at speed V_s into standard sea-level air. This is an *unsteady* picture and we seek a means to make this fit the analysis made in Chapter 6. To do this we superimpose on the entire flow field a velocity of V_s to the right. An alternative way of accomplishing the same effect is to get on the shock wave and go for a ride, as shown in Figure 7.2.

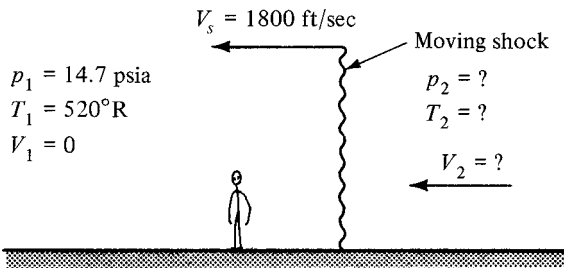


Figure 7.1 Moving normal shock with ground as reference.

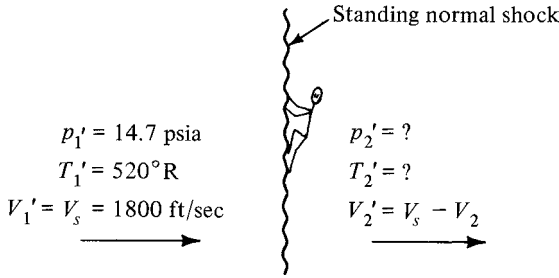


Figure 7.2 Moving shock transformed into stationary shock.

By either method the result is to *change the frame of reference* to the shock wave, and thus it appears to be a standing normal shock.

Example 7.1 The shock was given as moving at 1800 ft/sec into air at 14.7 psia and 520°R. Solve the problem represented in Figure 7.2 by the methods developed in Chapter 6.

$$a_1' \sqrt{\gamma g_c R T_1'} = \sqrt{(1.4)(32.2)(53.3)(520)} = 1118 \text{ ft/sec}$$

$$M_1' = \frac{V_1'}{a_1'} = \frac{1800}{1118} = 1.61$$

From the normal-shock table we find that

$$M_2' = 0.6655 \quad \frac{p_2'}{p_1'} = 2.8575 \quad \frac{T_2'}{T_1'} = 1.3949$$

Thus

$$p_2' = \frac{p_2'}{p_1'} p_1' = (2.8575)(14.7) = 42.0 \text{ psia} = p_2$$

$$T_2' = \frac{T_2'}{T_1'} T_1' = (1.3949)(520) = 725^\circ\text{R} = T_2$$

$$a_2' = \sqrt{\gamma g_c R T_2'} = \sqrt{(1.4)(32.2)(53.3)(725)} = 1320 \text{ ft/sec} = a_2$$

$$V_2' = M_2' a_2' = (0.6655)(1320) = 878 \text{ ft/sec}$$

$$V_2 = V_s - V_2' = 1800 - 878 = 922 \text{ ft/sec}$$

Therefore, after the shock passes (referring now to Figure 7.1), the pressure and temperature will be 42 psia and 725°R, respectively, and the air will have acquired a velocity of 922 ft/sec to the left. It will be interesting to compute and compare the stagnation pressures in each case. Notice that they are completely different because of the change in reference that has taken place.

For Figure 7.1:

$$p_{r1} = p_1 = 14.7 \text{ psia}$$

$$M_2 = \frac{V_2}{a_2} = \frac{922}{1320} = 0.698$$

$$p_{t2} = \frac{p_{t2}}{p_2} p_2 = \left(\frac{1}{0.7222} \right) (42) = 58.2 \text{ psia}$$

For Figure 7.2:

$$p_{t1}' = \frac{p_{t1}'}{p_1'} p_1' = \left(\frac{1}{0.2318} \right) (14.7) = 63.4 \text{ psia}$$

$$p_{t2}' = \frac{p_{t2}'}{p_2'} p_2' = \left(\frac{1}{0.7430} \right) (42) = 56.5 \text{ psia}$$

For the steady flow picture, $p_{t2}' < p_{t1}'$, as expected. However, note that this decrease in stagnation pressure does not occur for the unsteady case. You might compute the stagnation temperatures on each side of the shock for the unsteady and steady flow cases. Would you expect $T_{t2} = T_{t1}$? How about T_{t1}' and T_{t2}' ?

Another type of moving shock is illustrated in Figure 7.3, where air is flowing through a duct under known conditions and a valve is suddenly closed. The fluid is compressed as it is quickly brought to rest. This results in a shock wave propagating back through the duct as shown. In this case the problem is not only to determine the conditions that exist after passage of the shock but also to predict the speed of the shock wave.

This can also be viewed as the *reflection* of a shock wave, similar to what happens at the end of a shock tube. Our procedure is exactly the same as before. We hop on the shock wave and with this new frame of reference we have the standing normal-shock problem shown in Figure 7.4. (We have merely superimposed the velocity V_s on the entire flow field.) Solution of this problem, however, is not as straightforward as in Example 7.1 for the reason that the velocity of the shock wave is unknown. Since V_s is unknown, V_1' is unknown and M_1' cannot be calculated. We could approach this as a trial-and-error problem, but a direct solution is available to us. Recall the relation for the velocity difference across a normal shock that was developed in Chapter 6 [equation (6.32)]. Applied to Figure 7.4, this becomes

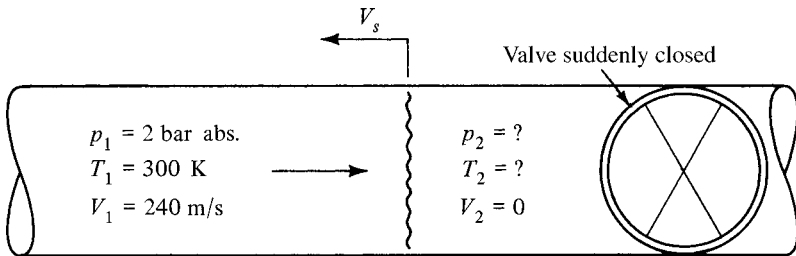


Figure 7.3 Moving normal shock in duct.

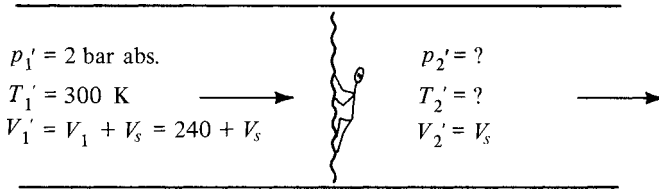


Figure 7.4 Moving shock transformed into stationary shock.

$$\frac{V_1' - V_2'}{a_1'} = \left(\frac{2}{\gamma + 1} \right) \left(\frac{M_1'^2 - 1}{M_1'} \right) \quad (7.1)$$

Example 7.2 Solve for V_s with the information given above.

$$a_1' = (\gamma g_c R T_1')^{1/2} = [(1.4)(1)(287)(300)]^{1/2} = 347 \text{ m/s}$$

$$\frac{V_1' - V_2'}{a_1'} = \frac{240}{347} = 0.6916$$

From the normal-shock table, we see that $M_1' \approx 1.5$, $M_2' = 0.7011$,
 $T_2'/T_1' = 1.3202$, and $p_2'/p_1' = 2.4583$.

$$p_2' = (2.4583)(2) = 4.92 \text{ bar abs.} = p_2$$

$$T_2' = (1.3202)(300) = 396 \text{ K} = T_2$$

$$a_2' = [(1.4)(1)(287)(396)]^{1/2} = 399 \text{ m/s}$$

$$V_2' = M_2' a_2' = (0.7011)(399) = 280 \text{ m/s} = V_s$$

Do not forget that the *static* temperatures and pressures obtained in problem solutions of this type are the desired answers to the original problem, but the velocities and Mach numbers for the standing-shock problem are *not* the same as those in the original moving-shock problem.

7.4 TANGENTIAL VELOCITY SUPERPOSITION: OBLIQUE SHOCKS

We now consider the standing normal shock shown in Figure 7.5. To emphasize the fact that these velocities are normal to the shock front, we label them V_{1n} and V_{2n} . Recall that the velocity is decreased as the fluid passes through a shock wave, and thus $V_{1n} > V_{2n}$. Also remember that for this type of shock, V_{1n} must always be supersonic and V_{2n} is always subsonic.

Now let us superimpose on the entire flow field a velocity of magnitude V_t which is perpendicular to V_{1n} and V_{2n} . This is equivalent to running *along* the shock front at a speed of V_t . The resulting picture is shown in Figure 7.6. As before, we realize that velocity superposition does not affect the *static* states of the fluid. What does change?

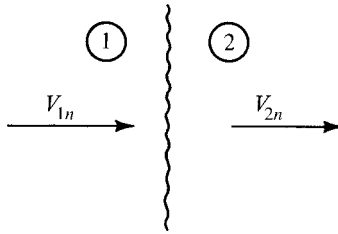


Figure 7.5 Standing normal shock.

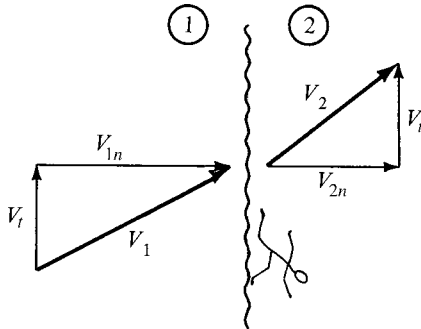


Figure 7.6 Standing normal shock plus tangential velocity.

We would normally view this picture in a slightly different manner. If we concentrate on the total velocity (rather than its components), we see the flow as illustrated in Figure 7.7 and immediately notice several things:

1. The shock is no longer normal to the approaching flow; hence it is called an *oblique shock*.
2. The flow has been deflected *away* from the normal.
3. V_1 must still be supersonic.
4. V_2 could be supersonic (if V_t is large enough).

We define the *shock angle* θ as the acute angle between the approaching flow (V_1) and the shock front. The *deflection angle* δ is the angle through which the flow has been deflected.

Viewing the oblique shock in this way, as a combination of a normal shock and a tangential velocity, permits one to use the normal-shock equations and table to solve oblique-shock problems for perfect gases provided that proper care is taken.

$$V_{1n} = V_1 \sin \theta \tag{7.2}$$

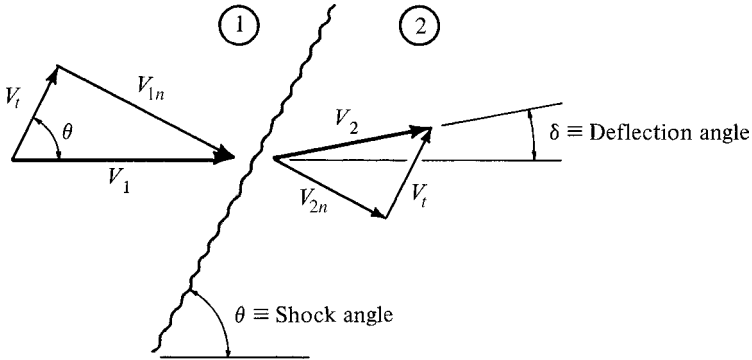


Figure 7.7 Oblique shock with angle definitions.

Since sonic velocity is a function of temperature only,

$$a_{1n} = a_1 \quad (7.3)$$

Dividing (7.2) by (7.3), we have

$$\frac{V_{1n}}{a_{1n}} = \frac{V_1 \sin \theta}{a_1} \quad (7.4)$$

or

$$\boxed{M_{1n} = M_1 \sin \theta} \quad (7.5)$$

Thus, if we know the approaching Mach number (M_1) and the shock angle (θ), the normal-shock table can be utilized by using the *normal Mach number* (M_{1n}). This procedure can be used to obtain *static* temperature and pressure changes across the shock, since these are unaltered by the superposition of V_t on the original normal-shock picture.

Let us now investigate the range of possible shock angles that may exist for a given Mach number. We know that for a shock to exist,

$$M_{1n} \geq 1 \quad (7.6)$$

Thus

$$M_1 \sin \theta \geq 1 \quad (7.7)$$

and the minimum θ will occur when $M_1 \sin \theta = 1$, or

$$\theta_{\min} = \sin^{-1} \frac{1}{M_1} \tag{7.8}$$

Recall that this is the same expression that was developed for the Mach angle μ . Hence *the Mach angle is the minimum possible shock angle*. Note that this is a limiting condition and really no shock exists since for this case, $M_{1n} = 1.0$. For this reason these are called *Mach waves* or *Mach lines* rather than shock waves. The *maximum* value that θ can achieve is obviously 90° . This is another limiting condition and represents our familiar normal shock.

Notice that as the shock angle θ decreases from 90° to the Mach angle μ , M_{1n} decreases from M_1 to 1. Since the strength of a shock is dependent on the *normal* Mach number, we have the means to produce a shock of *any strength* equal to or less than the normal shock. Do you see any possible application of this information for the case of a converging–diverging nozzle with an operating pressure ratio someplace between the second and third critical points? We shall return to this thought in Section 7.8.

The following example is presented to provide a better understanding of the correlation between oblique and normal shocks.

Example 7.3 With the information shown in Figure E7.3a, we proceed to compute the conditions following the shock.

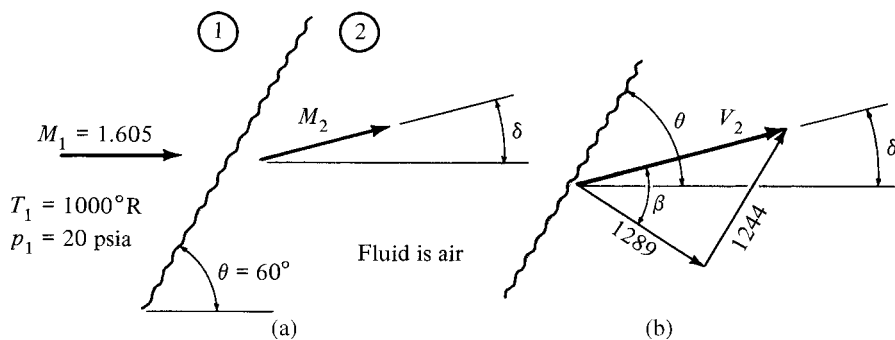


Figure E7.3

$$\begin{aligned}
 a_1 &= (\gamma g_c R T_1)^{1/2} = [(1.4)(32.2)(53.3)(1000)]^{1/2} = 1550 \text{ ft/sec} \\
 V_1 &= M_1 a_1 = (1.605)(1550) = 2488 \text{ ft/sec} \\
 M_{1n} &= M_1 \sin \theta = 1.605 \sin 60^\circ = 1.39 \\
 V_{1n} &= M_{1n} a_1 = (1.39)(1550) = 2155 \text{ ft/sec} \\
 V_t &= V_1 \cos \theta = 2488 \cos 60^\circ = 1244 \text{ ft/sec}
 \end{aligned}$$

Using information from the normal-shock table at $M_{1n} = 1.39$, we find that $M_{2n} = 0.7440$, $T_2/T_1 = 1.2483$, $p_2/p_1 = 2.0875$, and $p_{t2}/p_{t1} = 0.9607$. Remember that the static temperatures and pressures are the same whether we are talking about the normal shock or the oblique shock.

$$\begin{aligned}
 p_2 &= \frac{p_2}{p_1} p_1 &= (2.0875)(20) &= 41.7 \text{ psia} \\
 T_2 &= \frac{T_2}{T_1} T_1 &= (1.2483)(1000) &= 1248^\circ\text{R} \\
 a_2 &= (\gamma g_c R T_2)^{1/2} &= [(1.4)(32.2)(53.3)(1248)]^{1/2} &= 1732 \text{ ft/sec} \\
 V_{2n} &= M_{2n} a_2 &= (0.7440)(1732) &= 1289 \text{ ft/sec} \\
 V_{2t} &= V_{1t} &= V_i &= 1244 \text{ ft/sec} \\
 V_2 &= [(V_{2n})^2 + (V_{2t})^2]^{1/2} &= [(1289)^2 + (1244)^2]^{1/2} &= 1791 \text{ ft/sec} \\
 M_2 &= \frac{V_2}{a_2} &= \frac{1791}{1732} &= 1.034
 \end{aligned}$$

Note that although the *normal component* is subsonic after the shock, the velocity after the shock is supersonic in this case.

We now calculate the deflection angle (Figure E7.3b).

$$\begin{aligned}
 \tan \beta &= \frac{1244}{1289} = 0.9651 & \beta &= 44^\circ \\
 90 - \theta &= \beta - \delta
 \end{aligned}$$

Thus

$$\delta = \theta - 90 + \beta = 60 - 90 + 44 = 14^\circ$$

Once δ is known, an alternative calculation for M_2 would be

$$\boxed{M_2 = \frac{M_{2n}}{\sin(\theta - \delta)}} \quad (7.5a)$$

$$M_2 = \frac{0.7440}{\sin(60 - 14)} = 1.034$$

Example 7.4 For the conditions in Example 7.3, compute the stagnation pressures and temperatures.

$$\begin{aligned}
 p_{t1} &= \frac{p_{t1}}{p_1} p_1 = \left(\frac{1}{0.2335} \right) (20) = 85.7 \text{ psia} \\
 p_{t2} &= \frac{p_{t2}}{p_2} p_2 = \left(\frac{1}{0.5075} \right) (41.7) = 82.2 \text{ psia}
 \end{aligned}$$

If we looked at the normal-shock problem and computed stagnation pressures on the basis of the *normal* Mach numbers, we would have

$$p_{t1n} = \left(\frac{p_{t1}}{p_1}\right)_n p_1 = \left(\frac{1}{0.3187}\right) (20) = 62.8 \text{ psia}$$

$$p_{t2n} = \left(\frac{p_{t2}}{p_2}\right)_n p_2 = \left(\frac{1}{0.6925}\right) (41.7) = 60.2 \text{ psia}$$

We now proceed to calculate the stagnation temperatures and show that for the actual oblique-shock problem, $T_t = 1515^\circ\text{R}$, and for the normal-shock problem, $T_t = 1386^\circ\text{R}$. All of these static and stagnation pressures and temperatures are shown in the $T-s$ diagram of Figure E7.4. This clearly shows the effect of superimposing the tangential velocity on top of the normal-shock problem with the corresponding change in stagnation reference. It is interesting to note that the *ratio* of stagnation pressures is the same whether figured from the oblique-shock problem or the normal-shock problem.

$$\frac{p_{t2}}{p_{t1}} = \frac{82.2}{85.7} = 0.959 \quad \frac{p_{t2n}}{p_{t1n}} = \frac{60.2}{62.8} = 0.959$$

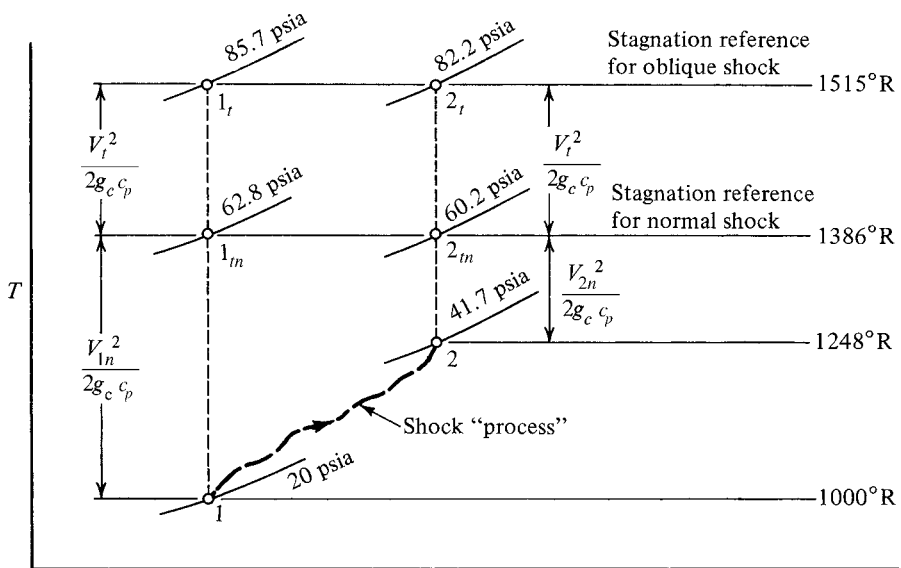


Figure E7.4 $T-s$ diagram for oblique shock (showing the included normal shock).

Is this a coincidence? No! Remember that the stagnation pressure *ratio* is a measure of the loss across the shock. Superposition of a tangential velocity onto a normal shock does not affect the actual shock process, so the losses remain the same. Thus, although one cannot use the stagnation pressures from the normal-shock problem, one can use the stagnation pressure *ratio* (which is listed in the tables). Be careful! These conclusions do *not* apply to the moving normal shock, which was discussed in Section 7.3.

7.5 OBLIQUE-SHOCK ANALYSIS: PERFECT GAS

In Section 7.4 we saw how an oblique shock could be viewed as a combination of a normal shock and a tangential velocity. If the initial conditions *and the shock angle* are known, the problem can be solved through careful application of the normal-shock table. Frequently, however, the shock angle is *not* known and thus we seek a new approach to the problem. The oblique shock with its components and angles is shown again in Figure 7.8.

Our objective will be to relate the deflection angle (δ) to the shock angle (θ) and the entering Mach number. We start by applying the continuity equation to a unit area at the shock:

$$\rho_1 V_{1n} = \rho_2 V_{2n} \quad (7.9)$$

or

$$\frac{\rho_2}{\rho_1} = \frac{V_{1n}}{V_{2n}} \quad (7.10)$$

From Figure 7.8 we see that

$$V_{1n} = V_1 \tan \theta \quad \text{and} \quad V_{2n} = V_2 \tan(\theta - \delta) \quad (7.11)$$

Thus, from equations (7.10) and (7.11),

$$\frac{\rho_2}{\rho_1} = \frac{V_{1n}}{V_{2n}} = \frac{V_1 \tan \theta}{V_2 \tan(\theta - \delta)} = \frac{\tan \theta}{\tan(\theta - \delta)} \quad (7.12)$$

From the normal-shock relations that we derived in Chapter 6, property ratios across the shock were developed as a function of the approaching (normal) Mach number. Specifically, the density ratio was given in equation (6.26) as

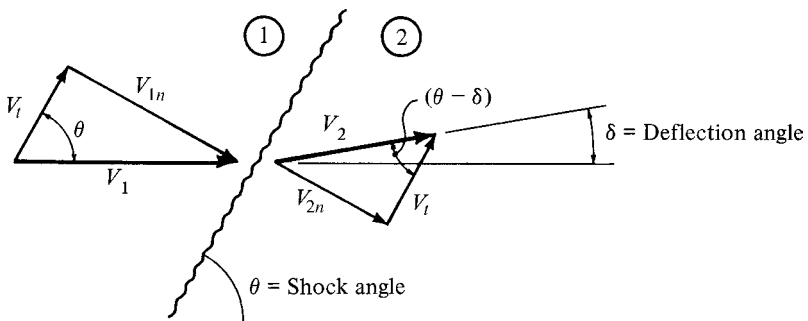


Figure 7.8 Oblique shock.

$$\frac{\rho_2}{\rho_1} = \frac{(\gamma + 1)M_{1n}^2}{(\gamma - 1)M_{1n}^2 + 2} \quad (6.26)$$

Note that we have added subscripts to the Mach numbers to indicate that these are normal to the shock. Equating (7.12) and (6.26) yields

$$\frac{\tan \theta}{\tan(\theta - \delta)} = \frac{(\gamma + 1)M_{1n}^2}{(\gamma - 1)M_{1n}^2 + 2} \quad (7.13)$$

But

$$M_{1n} = M_1 \sin \theta \quad (7.5)$$

Hence

$$\frac{\tan \theta}{\tan(\theta - \delta)} = \frac{(\gamma + 1)M_1^2 \sin^2 \theta}{(\gamma - 1)M_1^2 \sin^2 \theta + 2} \quad (7.14)$$

and we have succeeded in relating the shock angle, deflection angle, and entering Mach number. Unfortunately, equation (7.14) cannot be solved for θ as an explicit function of M , δ , and γ , but we can obtain an explicit solution for

$$\delta = f(M, \theta, \gamma)$$

which is

$$\tan \delta = 2(\cot \theta) \left(\frac{M_1^2 \sin^2 \theta - 1}{M_1^2(\gamma + \cos 2\theta) + 2} \right) \quad (7.15)$$

It is interesting to examine equation (7.15) for the extreme values of θ that might accompany any given Mach number.

For $\theta = \theta_{\max} = \pi/2$, equation (7.15) yields $\tan \delta = 0$, or $\delta = 0$, which we know to be true for the normal shock.

For $\theta = \theta_{\min} = \sin^{-1}(1/M_1)$, equation (7.15) again yields $\tan \delta = 0$ or $\delta = 0$, which we know to be true for the limiting case of the Mach wave or no shock. Thus the relationship developed for the oblique shock includes as special cases the strongest shock possible (normal shock) and the weakest shock possible (no shock) as well as all other intermediate-strength shocks. Note that for the given deflection angle of $\delta = 0^\circ$, there are two possible shock angles for any given Mach number. In the next section we see that this holds true for any deflection angle.

7.6 OBLIQUE-SHOCK TABLE AND CHARTS

Equation (7.14) provides a relationship among the shock angle, deflection angle, and entering Mach number. Our motivation to obtain this relationship was to solve problems in which the shock angle (θ) is the unknown, but we found that an explicit solution $\theta = f(M, \delta, \gamma)$ was not possible. The next best thing is to plot equation (7.14) or (7.15). This can be done in several ways, but it is perhaps most instructive to look at a plot of shock angle (θ) versus entering Mach number (M_1) for various deflection angles (δ). This is shown in Figure 7.9.

One can quickly visualize from the figure all possible shocks for any entering Mach number. For example, the dashed vertical line at any arbitrary Mach number starts at the top of the plot with the normal shock ($\theta = 90^\circ$, $\delta = 0^\circ$), which is the strongest possible shock. As we move downward, the shock angle decreases continually to $\theta_{\min} = \mu$ (Mach angle), which means that the shock strength is decreasing continually. Why is this so? What is the *normal Mach number* doing as we move down this line?

It is interesting to note that as the shock angle decreases, the deflection angle at first increases from $\delta = 0$ to $\delta = \delta_{\max}$, and then the deflection angle decreases back to zero. Thus for any given Mach number and deflection angle, two shock situations are possible (assuming that $\delta < \delta_{\max}$). Two such points are labeled A and B. One of these (A) is associated with a higher shock angle and thus has a higher normal Mach number, which means that it is a stronger shock with a resulting higher pressure ratio. The other (B) has a lower shock angle and thus is a weaker shock with a lower pressure rise across the shock.

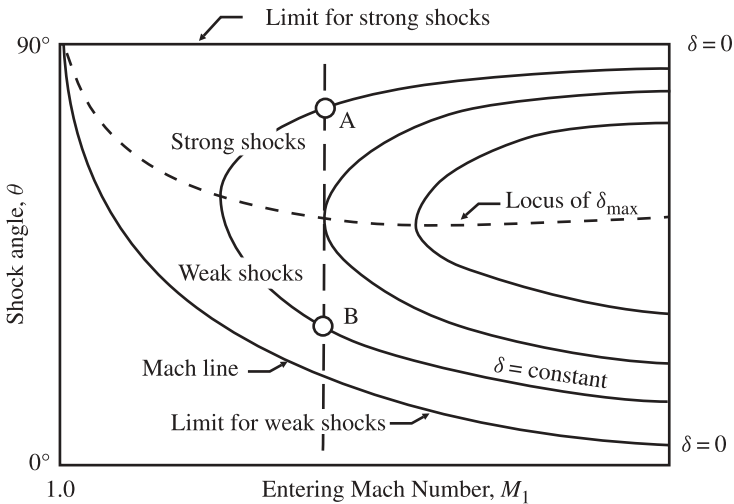


Figure 7.9 Skeletal oblique shock relations among θ , M_1 , and δ . (See Appendix D for detailed working charts.)

All of the *strong shocks* (above the δ_{\max} points) result in *subsonic flow* after passage through the shock wave. In general, nearly all the region of *weak shocks* (below δ_{\max}) result in *supersonic flow* after the shock, although there is a very small region just below δ_{\max} where M_2 is still subsonic. This is clearly shown on the *detailed working chart* in Appendix D. Normally, we find the weak shock solution occurring more frequently, although this is entirely dependent on the boundary conditions that are imposed. This point, along with several applications of oblique shocks, is the subject of the next two sections. In many problems, explicit knowledge of the shock angle θ is not necessary. In Appendix D you will find two additional charts which may be helpful. The first of these depicts the Mach number after the oblique shock M_2 as a function of M_1 and δ . The second shows the static pressure ratio across the shock p_2/p_1 as a function of M_1 and δ . One can also use detailed oblique-shock tables such as those by Keenan and Kaye (Ref. 31). Another possibility is to use equation (7.15) with a computer as discussed in Section 7.10. Use of the table or of equation (7.15) yields higher accuracies, which are essential for some problems.

Example 7.5 Observation of an oblique shock in air (Figure E7.5) reveals that a Mach 2.2 flow at 550 K and 2 bar abs. is deflected by 14° . What are the conditions after the shock? Assume that the weak solution prevails.

We enter the chart (in Appendix D) with $M_1 = 2.2$ and $\delta = 14^\circ$ and we find that $\theta = 40^\circ$ and 83° . Knowing that the weak solution exists, we select $\theta = 40^\circ$.

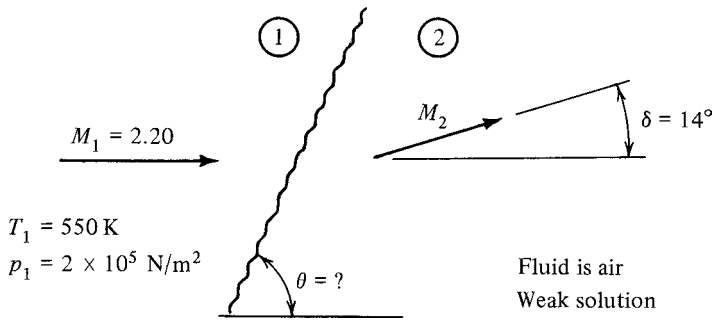


Figure E7.5

$$M_{1n} = M_1 \sin \theta = 2.2 \sin 40^\circ = 1.414$$

Enter the normal-shock table at $M_{1n} = 1.414$ and interpolate:

$$M_{2n} = 0.7339 \quad \frac{T_2}{T_1} = 1.2638 \quad \frac{p_2}{p_1} = 2.1660$$

$$T_2 = \frac{T_2}{T_1} T_1 = (1.2638)(550) = 695 \text{ K}$$

$$p_2 = \frac{p_2}{p_1} p_1 = (2.166)(2 \times 10^5) = 4.33 \times 10^5 \text{ N/m}^2$$

$$M_2 = \frac{M_{2n}}{\sin(\theta - \delta)} = \frac{0.7339}{\sin(40 - 14)} = 1.674$$

We could have found M_2 and p_2 using the other charts in Appendix D. From these the value of $M_2 \approx 1.5$ and p_2 is found as

$$p_2 = \frac{p_2}{p_1} p_1 \approx (2)(2 \times 10^5) = 4 \times 10^5 \text{ N/m}^2$$

7.7 BOUNDARY CONDITION OF FLOW DIRECTION

We have seen that one of the characteristics of an oblique shock is that the flow direction is changed. In fact, this is *one of only two methods* by which a supersonic flow can be turned. (The other method is discussed in Chapter 8.) Consider supersonic flow over a wedge-shaped object as shown in Figure 7.10. For example, this could represent the leading edge of a supersonic airfoil. In this case the flow is forced to change direction to *meet the boundary condition of flow tangency along the wall*, and this can be done only through the mechanism of an oblique shock. The example in Section 7.6 was just such a situation. (Recall that a flow of $M = 2.2$ was deflected by 14° .) Now, for any given Mach number and deflection angle there are two possible shock angles. Thus a question naturally arises as to which solution will occur, the *strong* one or the *weak* one. Here is where the surrounding pressure must be considered. Recall that the strong shock occurs at the higher shock angle and results in a large pressure change. For this solution to occur, a physical situation must exist that can sustain the necessary pressure differential. It is conceivable that such a case might exist in an *internal* flow situation. However, for an *external* flow situation such as around the

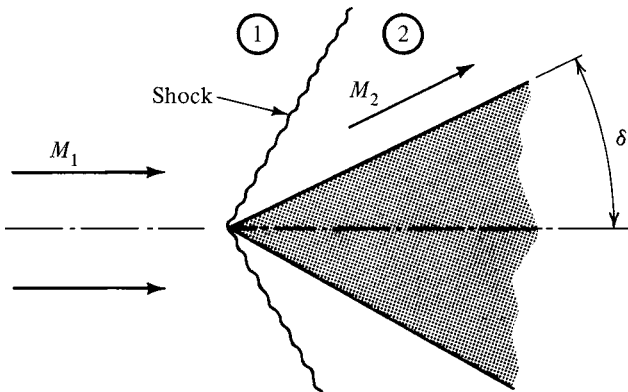


Figure 7.10 Supersonic flow over a wedge.

airfoil, there is no means available to support the greater pressure difference required by the strong shock. Thus, in external flow problems (flow around objects), we always find the weak solution.

Looking back at Figure 7.9 you may notice that there is a maximum deflection angle (δ_{\max}) associated with any given Mach number. Does this mean that the flow cannot turn through an angle greater than this? This is true if we limit ourselves to the simple oblique shock that is *attached* to the object as shown in Figure 7.10. But what happens if we build a wedge with a half angle greater than δ_{\max} ? Or suppose we ask the flow to pass over a blunt object? The resulting flow pattern is shown in Figure 7.11.

A *detached shock* forms which has a curved wave front. Behind this wave we find all possible shock solutions associated with the initial Mach number M_1 . At the center a normal shock exists, with subsonic flow resulting. Subsonic flow has no difficulty adjusting to the large deflection angle required. As the wave front curves around, the shock angle decreases continually, with a resultant decrease in shock strength. Eventually, we reach a point where supersonic flow exists after the shock front. Although Figures 7.10 and 7.11 illustrate flow over objects, the same patterns result from internal flow along a wall, or *corner flow*, shown in Figure 7.12. The significance of δ_{\max} is again seen to be the maximum deflection angle for which the shock can remain *attached* to the corner.

A very practical situation involving a detached shock is caused when a pitot tube is installed in a supersonic tunnel (see Figure 7.13). The tube will reflect the total pressure after the shock front, which at this location is a normal shock. An additional

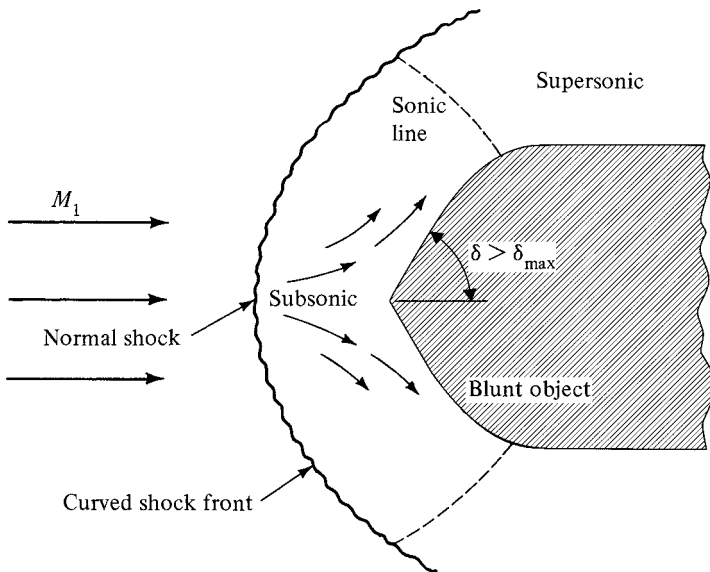


Figure 7.11 Detached shock caused by $\delta > \delta_{\max}$.

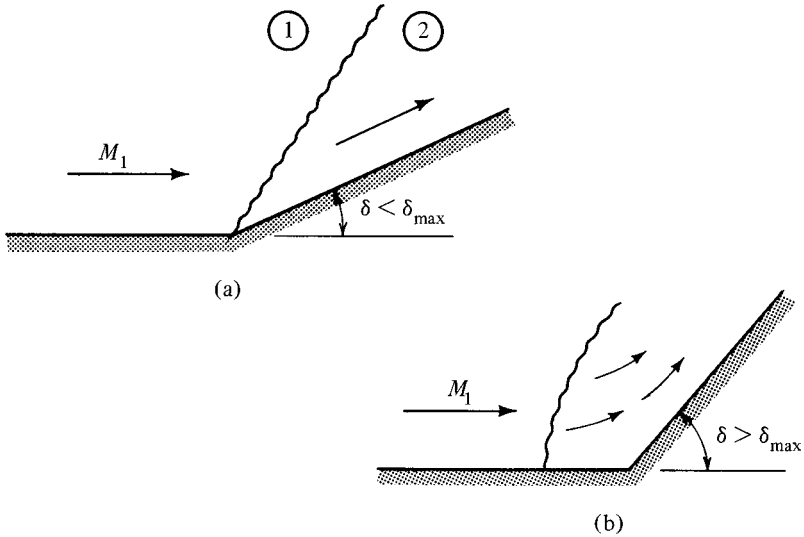


Figure 7.12 Supersonic flow in a corner.

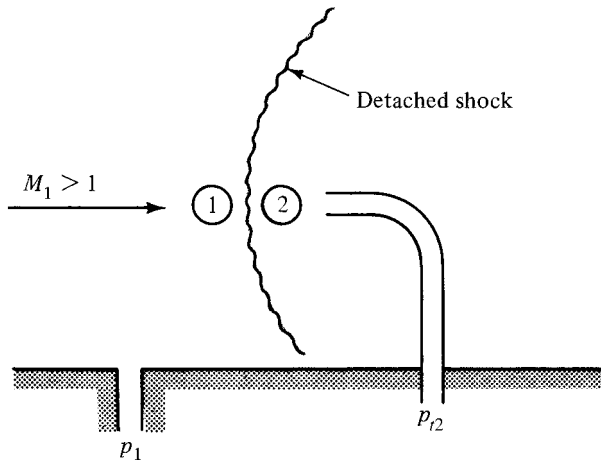


Figure 7.13 Supersonic pitot tube installation.

tap off the side of the tunnel can pick up the static pressure ahead of the shock. Consider the ratio

$$\frac{p_{t2}}{p_1} = \frac{p_{t2}}{p_{t1}} \frac{p_{t1}}{p_1}$$

p_{t2}/p_{t1} is the total pressure ratio across the shock and is a function of M_1 only [see equation (6.28)]. p_{t1}/p_1 is also a function of M_1 only [see equation (5.40)]. Thus the

ratio p_{t2}/p_1 is a function of the initial Mach number and can be found as a parameter in the shock table.

Example 7.6 A supersonic pitot tube indicates a total pressure of 30 psig and a static pressure of zero gage. Determine the free-stream velocity if the temperature of the air is 450°R.

$$\frac{p_{t2}}{p_1} = \frac{30 + 14.7}{0 + 14.7} = \frac{44.7}{14.7} = 3.041$$

From the shock table we find that $M_1 = 1.398$.

$$a_1 = [(1.4)(32.2)(53.3)(450)]^{1/2} = 1040 \text{ ft/sec}$$

$$V_1 = M_1 a_1 = (1.398)(1040) = 1454 \text{ ft/sec}$$

So far we have discussed oblique shocks that are caused by flow deflections. Another case of this is found in engine inlets of supersonic aircraft. Figure 7.14 shows a sketch of an aircraft that is an excellent example of this situation. As aircraft and missile speeds increase, we usually see two directional changes with their accompanying shock systems, as shown in Figure 7.15. The losses that occur across the

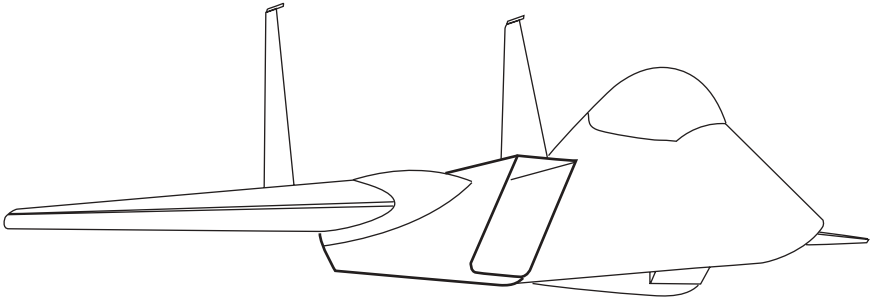


Figure 7.14 Sketch of a rectangular engine inlet.

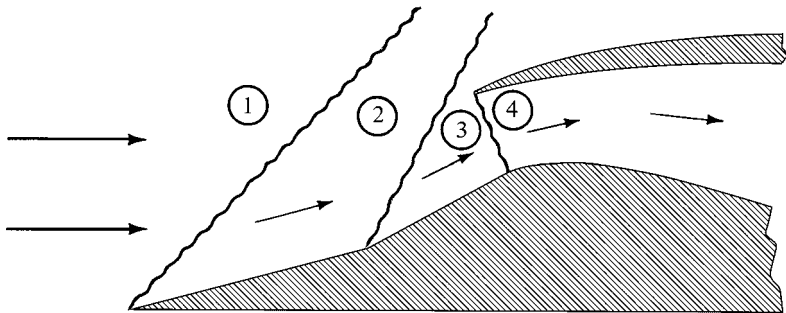


Figure 7.15 Multiple-shock inlet for supersonic aircraft.

series of shocks shown are less than those which would occur across a single normal shock at the same initial Mach number. A warning should be given here concerning the application of our results to inlets with circular cross sections. These will have conical *spikes* for flow deflection which cause *conical-shock* fronts to form. This type of shock has been analyzed and is covered in Section 7.9. The design of supersonic diffusers for propulsion systems is discussed further in Chapter 12.

In problems such as the multiple-shock inlet and the supersonic airfoil, we are generally not interested in the shock angle itself but are concerned with the resulting Mach numbers and pressures downstream of the oblique shock. Remember that the charts in Appendix D show these exact variables as a function of M_1 and the turning angle δ . The stagnation pressure ratio can be inferred from these using the proper relations.

7.8 BOUNDARY CONDITION OF PRESSURE EQUILIBRIUM

Now let us consider a case where the existing pressure conditions cause an oblique shock to form. Recall our friend the converging–diverging nozzle. When it is operating at its second critical point, a normal shock is located at the exit plane. The pressure rise that occurs across this shock is exactly that which is required to go from the low pressure that exists within the nozzle up to the higher receiver pressure that has been imposed on the system. We again emphasize that *the existing operating pressure ratio is what causes the shock to be located at this particular position*. (If you have forgotten these details, review Section 6.6.)

We now ask: What happens when the operating pressure ratio is between the second and third critical points? A normal shock is too strong to meet the required pressure rise. What is needed is a compression process that is weaker than a normal shock, and our oblique shock is precisely the mechanism for the job. *No matter what pressure rise is required*, the shock can form at an angle that will produce any desired pressure rise from that of a normal shock on down to the third critical condition, which requires no pressure change. Figure 7.16 shows a typical weak oblique shock at the

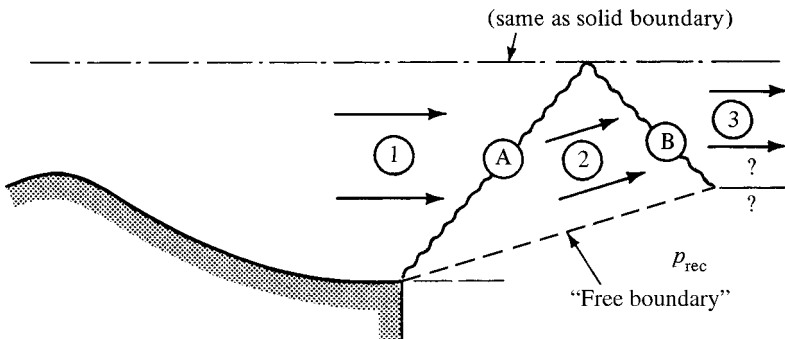


Figure 7.16 Supersonic nozzle operating between second and third critical points.

lip of a two-dimensional nozzle. We have shown only half the picture, as symmetry considerations force the upper half to be the same. This also permits an alternative viewpoint—thinking of the central streamline as though it were a solid boundary.

The flow in region 1 is parallel to the centerline and is at the design conditions for the nozzle (i.e., the flow is supersonic and $p_1 < p_{rec}$. The weak oblique shock A forms at the appropriate angle such that the pressure rise that occurs is just sufficient to meet the boundary condition of $p_2 = p_{rec}$. There is a *free boundary* between the jet and the surroundings as opposed to a *physical boundary*. Now remember that the flow is also turned away from the normal and thus will have the direction indicated in region 2.

This presents a problem since the flow in region 2 cannot cross the centerline. Something must occur where wave A meets the centerline, and this something must turn the flow parallel to the centerline. Here it is the boundary condition of flow direction that causes another oblique shock B to form, which not only changes the flow direction but also increases the pressure still further. Since $p_2 = p_{rec}$ and $p_3 > p_2$, $p_3 > p_{rec}$ and pressure equilibrium does not exist between region 3 and the receiver.

Obviously, some type of an expansion is needed which emanates from the point where wave B intersects the free boundary. An *expansion shock* would be just the thing, but we know that such an animal cannot exist. Do you recall why not? We shall have to study another phenomenon before we can complete the story of a supersonic nozzle operating between the second and third critical points, and we do that in Chapter 8.

Example 7.7 A converging–diverging nozzle (Figure E7.7) with an area ratio of 5.9 is fed by air from a chamber with a stagnation pressure of 100 psia. Exhaust is to the atmosphere at 14.7 psia. Show that this nozzle is operating between the second and third critical points and determine the conditions after the first shock.

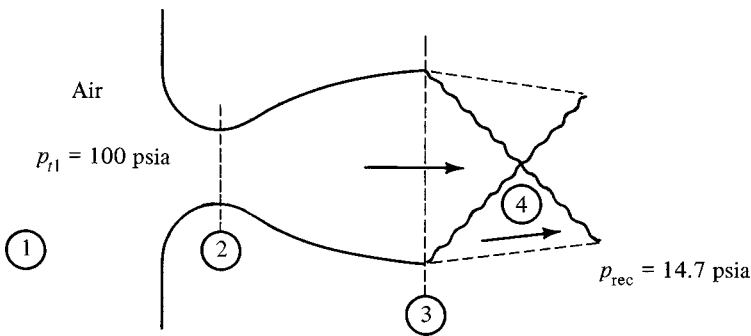


Figure E7.7

Third critical:

$$\frac{A_3}{A_3^*} = \frac{A_3}{A_2} \frac{A_2}{A_2^*} \frac{A_2^*}{A_3^*} = (5.9)(1)(1) = 5.9$$

$$M_3 = 3.35 \quad \text{and} \quad \frac{P_3}{P_{t3}} = 0.01625$$

$$\frac{P_3}{P_{t1}} = \frac{P_3}{P_{t3}} \frac{P_{t3}}{P_{t1}} = (0.01625)(1) = 0.01625$$

Second critical: normal shock at

$$M_3 = 3.35 \quad \text{and} \quad \frac{P_4}{P_3} = 12.9263$$

$$\frac{P_4}{P_{t1}} = \frac{P_4}{P_3} \frac{P_3}{P_{t1}} = (12.9263)(0.01625) = 0.2100$$

Since our operating pressure ratio ($14.7/100 = 0.147$) lies between that of the second and third critical points, an oblique shock must form as shown. Remember, under these conditions the nozzle operates internally as if it were at the third critical point. Thus the required pressure ratio across the oblique shock is

$$\frac{p_4}{p_3} = \frac{p_{\text{rec}}}{p_3} = \frac{14.7}{1.625} = 9.046$$

From the normal-shock table we see that this pressure ratio requires that $M_{3n} = 2.81$ and $M_{4n} = 0.4875$:

$$\sin \theta = \frac{M_{3n}}{M_3} = \frac{2.81}{3.35} = 0.8388 \quad \theta = 57^\circ$$

From the oblique-shock chart, $\delta = 34^\circ$ and

$$M_4 = \frac{M_{4n}}{\sin(\theta - \delta)} = \frac{0.4875}{\sin(57 - 34)} = 1.25$$

Thus to match the receiver pressure, an oblique shock forms at 57° . The flow is deflected 34° and is still supersonic at a Mach number of 1.25.

7.9 CONICAL SHOCKS

We include here the subject of conical shocks because of its practical importance in many design problems. For example, many supersonic aircraft have diffusers with conical *spikes* at their air inlets. Figure 7.17 shows the YF-12 aircraft, which is an excellent example of this case. In addition to inlets of this type, the forebodies of missiles and supersonic aircraft fuselages are largely conical in shape. Although detailed analysis of such flows is beyond the scope of this book, the results bear great similarity to flows associated with planar (wedge-generated) oblique shocks. We examine conical flows at zero angle of attack. For the continuity equation in axisymmetric (three-dimensional) flows to be satisfied, the streamlines are no longer parallel to the cone surface but must curve. After the conical shock, the static pressure increases as we approach the surface of the cone, and this increase is isentropic. *Conical shocks are weak shocks*, and there is no counterpart to the strong oblique shock of wedge



Figure 7.17 YF-12 plane showing conical air inlets. (Lockheed Martin photo.)

flow. If the angle of the cone is too high for an approaching Mach number to turn, the flow will detach in a fashion similar to the two-dimensional oblique shock (see Figure 7.11). A comparison of the detached flow limits between these two types of shocks is shown in Figure 7.18. The cone can sustain a higher flow turning angle because it represents less blockage to the flow. Thus it also produces a weaker compression or flow disturbance in comparison to the two-dimensional oblique shock at the same Mach number. Note that the flow variables (M , T , p , etc.) are constant along any given ray.

In Figure 7.19 we show the relevant geometry of a conical shock on a symmetrical cone at zero angle of attack. In this section the subscript c will refer to the conical analysis and the *subscript s to the values of the variables at the cone's surface*. (Those interested in the details of conical flow away from the cone's surface should consult Ref. 32 or Ref. 33.) The counterpart to Figure 7.19 is Figure 7.20, which shows the shock wave angle θ_c as a function of the approaching Mach number M_1 for various cone half-angles δ_c . Notice that only weak shock solutions are indicated. In Appendix E you will find additional charts which give the downstream conditions on the surface of the cone. Notice that we are only depicting the *surface* Mach number and *surface* static pressure downstream of the conical shock because these variables are not the same across the flow.

Example 7.8 Air approaches a 27° conical diffuser at $M_1 = 3.0$ and $p_1 = 0.404$ psia. Find the conical-shock angle and the surface pressure.

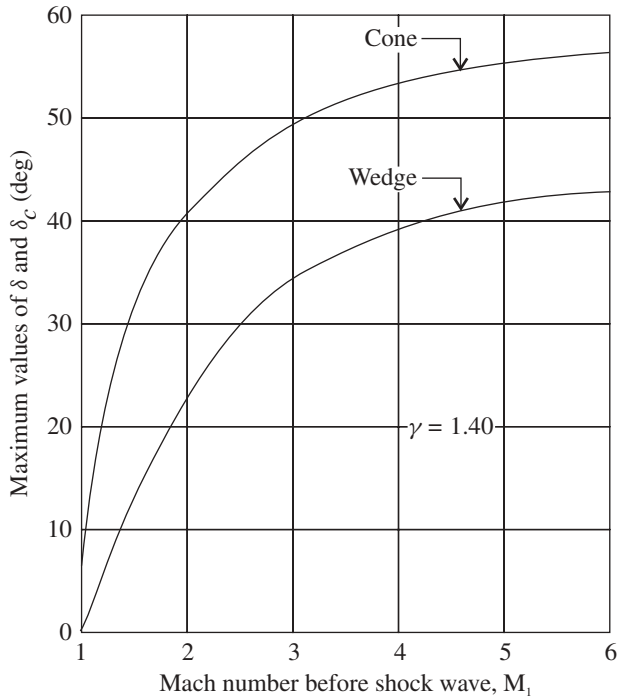


Figure 7.18 Comparison between oblique- and conical-shock flow limits for attached shocks. (Ref. 20.)

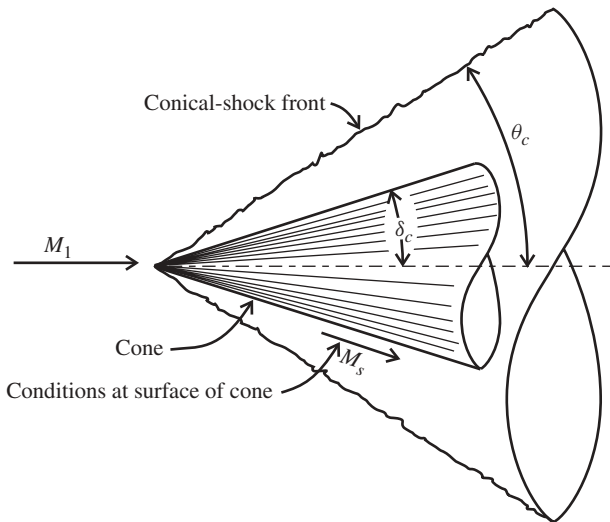


Figure 7.19 Conical shock with angle definitions.

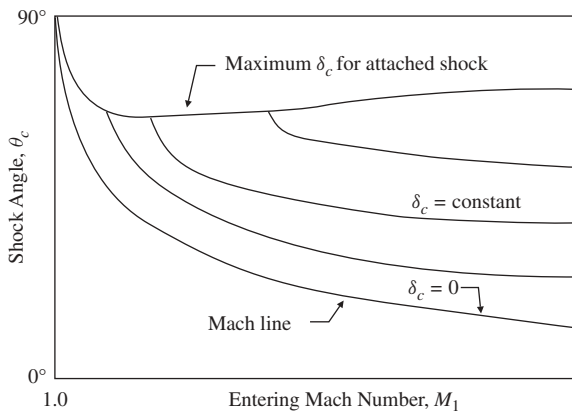


Figure 7.20 Skeletal conical-shock relations among θ_c , M_1 , and δ_c . (See Appendix E for detailed working charts.)

We enter the chart in Appendix E with $M_1 = 3.0$ and $\delta_c = 13.5^\circ$ and obtain $\theta_c \approx 25^\circ$. Also from the appendix we get $p_c/p_1 \approx 1.9$, so that

$$p_c = (p_1)/(p_c/p_1) = (1.9)(0.404) = 0.768 \text{ psia.}$$

7.10 (OPTIONAL) BEYOND THE TABLES

As illustrated in Chapter 5, one can eliminate a lot of interpolation and get accurate answers for any ratio of the specific heats γ and/or any Mach number by using a computer utility such as MAPLE. We return here to two-dimensional (wedge-type) oblique shocks. Since the variations with γ are unchanged from normal shocks, we are not presenting such curves in this chapter. But one unique difficulty with oblique-shock problems is that the value of θ needs to be quite accurate, and often the charts are not precise enough to permit this. Therefore, one is often motivated to solve equation (7.15) (or its equivalent) by direct means. The MAPLE program below actually works with equation (7.14), in which θ shows implicitly. The program requires the entering Mach number (M), the wedge half-angle (δ), and the ratio of specific heats (γ). Because there are usually two values of θ for every value of M , we need to introduce an index (m) to make the computer look for either the weak or the strong shock solution. Furthermore, we need to be careful because these regions are not divided by a unique value of m or θ . Moreover, there are certain δ and M combinations for which no solution exists (i.e., when the shock must detach, as shown in Figure 7.11). Beyond $M = 1.75$, the weak-shock solution is obtained with $m \leq$

1.13 (which is 65° in radians; see the chart in Appendix D) and the strong shock solution with $m > 1.13$. This value has to be refined for the lower Mach numbers because the weak shock region becomes more dominant. Note that MAPLE makes calculations with angles in radians.

Example 7.9 For a two-dimensional oblique shock in air where $M_1 = 2.0$ and the deflection angle is 10° , calculate the two possible shock angles in degrees.

Start with equation (7.14):

$$\frac{\tan \theta}{\tan(\theta - \delta)} = \frac{(\gamma + 1)M_1^2 \sin^2 \theta}{(\gamma - 1)M_1^2 \sin^2 \theta + 2} \quad (7.14)$$

Let

$g \equiv \gamma$, a parameter (the ratio of specific heats)

$d \equiv \delta$, a parameter (the turning angle)

$X \equiv$ the independent variable (which in this case is M_1)

$Y \equiv$ the dependent variable (which in this case is θ)

Listed below are the precise inputs and program that you use in the computer.

First, the weak shock solution:

```
[> g := 1.4: x := 2.0: m := 1.0:
[> del := 10*Pi/180:
[> fsolve((tan(Y))/(tan(Y - del)) = ((g + 1)*(X* sin(Y))^2) /
((g - 1)*((X*sin(Y))^2) + 2), Y, 0..m);
.6861575526
[> evalf(0.68615526*180/Pi);
39.31380048
```

Next, the strong shock solution:

```
[> m := 1.5:
[> fsolve((tan(Y))/(tan(Y - del)) = ((g + 1)*(X* sin(Y))^2) /
((g - 1)*((X*sin(Y))^2) + 2), Y, 0..m);
1.460841987
```

Since MAPLE always works with radians, we must convert the answer to degrees. For example, for strong-shock solutions the value of $\theta = 1.46084$ rad, so we proceed as follows:

```
[> evalf(1.46084*180/Pi);
83.69996652
```

This will yield Y (i.e., $\theta = 83.7^\circ$), which is the desired value.

7.11 SUMMARY

We have seen how a standing normal shock can be made into a moving normal shock by superposition of a velocity (normal to the shock front) on the entire flow field. Similarly, the superposition of a velocity tangent to the shock front turns a normal shock into an oblique shock. Since velocity superposition does not change the static conditions in a flow fluid, the normal-shock table may be used to solve oblique-shock problems if we deal with the *normal Mach number*. However, to avoid trial-and-error solutions, oblique-shock tables and charts are available. The following is a significant relation among the variables in an oblique shock:

$$\tan \delta = 2(\cot \theta) \left(\frac{M_1^2 \sin^2 \theta - 1}{M_1^2 (\gamma + \cos 2\theta) + 2} \right) \quad (7.15)$$

Another helpful relation is

$$M_2 = \frac{M_{2n}}{\sin(\theta - \delta)} \quad (7.5a)$$

We summarize the important characteristics of an oblique shock.

1. The flow is always turned *away* from the normal.
2. For given values of M_1 and δ , two values of θ may result.
 - (a) If a large pressure ratio is available (or required), a strong shock at the higher θ will occur and M_2 will be subsonic.
 - (b) If a small pressure ratio is available (or required), a weak shock at the lower θ will occur and M_2 will be supersonic (except for a small region near δ_{\max}).
3. A maximum value of δ exists for any given Mach number. If δ is physically greater than δ_{\max} , a *detached* shock will form.

It is important to realize that oblique shocks are caused for two reasons:

1. To meet a physical boundary condition that causes the flow to change direction, or
2. To meet a free boundary condition of pressure equilibrium.

An alternative way of stating this is to say that the flow must be tangent to any boundary, whether it is a physical wall or a *free boundary*. If it is a free boundary, pressure equilibrium must also exist across the flow boundary.

Conical shocks (three-dimensional) are introduced as similar in nature to oblique shocks (two-dimensional) but more complicated in their solution.

PROBLEMS

- 7.1. A normal shock is traveling into still air (14.7 psia and 520°R) at a velocity of 1800 ft/sec.
- Determine the temperature, pressure, and velocity that exist after passage of the shock wave.
 - What is the entropy change experienced by the air?
- 7.2. The velocity of a certain atomic blast wave has been determined to be approximately 46,000 m/s relative to the ground. Assume that it is moving into still air at 300 K and 1 bar. What static and stagnation temperatures and pressures exist after the blast wave passes? (*Hint:* You will have to resort to equations, as the table does not cover this Mach number range.)
- 7.3. Air flows in a duct, and a valve is quickly closed. A normal shock is observed to propagate back through the duct at a speed of 1010 ft/sec. After the air has been brought to rest, its temperature and pressure are 600°R and 30 psia, respectively. What were the original temperature, pressure and velocity of the air before the valve was closed?
- 7.4. Oxygen at 100°F and 20 psia is flowing at 450 ft/sec in a duct. A valve is quickly shut, causing a normal shock to travel back through the duct.
- Determine the speed of the traveling shock wave.
 - What are the temperature and pressure of the oxygen that is brought to rest?
- 7.5. A closed tube contains nitrogen at 20°C and a pressure of 1×10^4 N/m² (Figure P7.5). A shock wave progresses through the tube at a speed of 380 m/s.
- Calculate the conditions that exist immediately after the shock wave passes a given point. (The fact that this is inside a tube should not bother you, as it is merely a normal shock moving into a gas at rest.)
 - When the shock wave hits the end wall, it is reflected back. What are the temperature and pressure of the gas between the wall and the reflected shock? At what speed is the reflected shock traveling? (This is just like the sudden closing of a valve in a duct.)

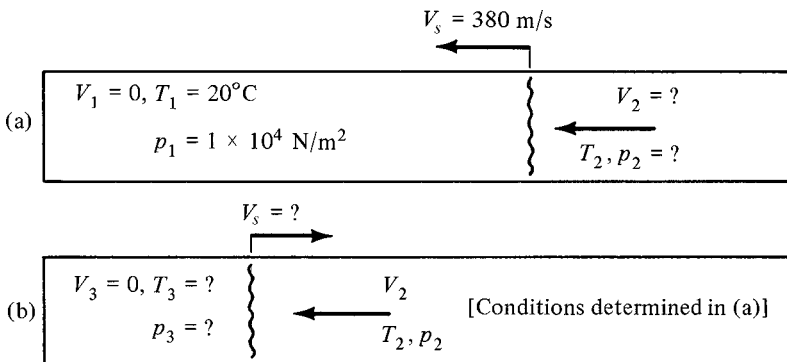


Figure P7.5

- 7.6.** An oblique shock forms in air at an angle of $\theta = 30^\circ$. Before passing through the shock, the air has a temperature of 60°F , a pressure of 10 psia, and is traveling at $M = 2.6$.
- Compute the normal and tangential velocity components before and after the shock.
 - Determine the temperature and pressure after the shock.
 - What is the deflection angle?
- 7.7.** Conditions before a shock are $T_1 = 40^\circ\text{C}$, $p_1 = 1.2$ bar, and $M_1 = 3.0$. An oblique shock is observed at 45° to the approaching air flow.
- Determine the Mach number and flow direction after the shock.
 - What are the temperature and pressure after the shock?
 - Is this a weak or a strong shock?
- 7.8.** Air at 800°R and 15 psia is flowing at a Mach number of $M = 1.8$ and is deflected through a 15° angle. The directional change is accompanied by an oblique shock.
- What are the possible shock angles?
 - For each shock angle, compute the temperature and pressure after the shock.
- 7.9.** The supersonic flow of a gas ($\gamma = 1.4$) approaches a wedge with a half-angle of 24° ($\delta = 24^\circ$).
- What Mach number will put the shock on the verge of detaching?
 - Is this value a minimum or a maximum?
- 7.10.** A simple wedge with a total included angle of 28° is used to measure the Mach number of supersonic flows. When inserted into a wind tunnel and aligned with the flow, oblique shocks are observed at 50° angles to the free stream (similar to Figure 7.10).
- What is the Mach number in the wind tunnel?
 - Through what range of Mach numbers could this wedge be useful? (*Hint:* Would it be of any value if a detached shock were to occur?)
- 7.11.** A pitot tube is installed in a wind tunnel in the manner shown in Figure 7.13. The tunnel air temperature is 500°R and the static tap (p_1) indicates a pressure of 14.5 psia.
- Determine the tunnel air velocity if the stagnation probe (p_{t2}) indicates 65 psia.
 - Suppose that $p_{t2} = 26$ psia. What is the tunnel velocity under this condition?
- 7.12.** A converging–diverging nozzle is designed to produce an exit Mach number of 3.0 when $\gamma = 1.4$. When operating at its second critical point, the shock angle is 90° and the deflection angle is zero. Call p_{exit} the pressure at the exit plane of the nozzle just before the shock. As the receiver pressure is lowered, both θ and δ change. For the range between the second and third critical points:
- Plot θ versus $p_{\text{rec}}/p_{\text{exit}}$.
 - Plot δ versus $p_{\text{rec}}/p_{\text{exit}}$.
- 7.13.** Pictured in Figure P7.13 is the air inlet to a jet aircraft. The plane is operating at 50,000 ft, where the the pressure is 243 psfa and the temperature is 392°R . Assume that the flight speed is $M_0 = 2.5$.
- What are the conditions of the air (temperature, pressure, and entropy change) just after it passes through the normal shock?
 - Draw a reasonably detailed T – s diagram for the air inlet. Start the diagram at the free stream and end it at the subsonic diffuser entrance to the compressor.

- (c) If the single 15° wedge is replaced by a double wedge of 7° and 8° (see Figure 7.15), determine the conditions of the air after it enters the diffuser.
- (d) Compare the losses for parts (a) and (c).

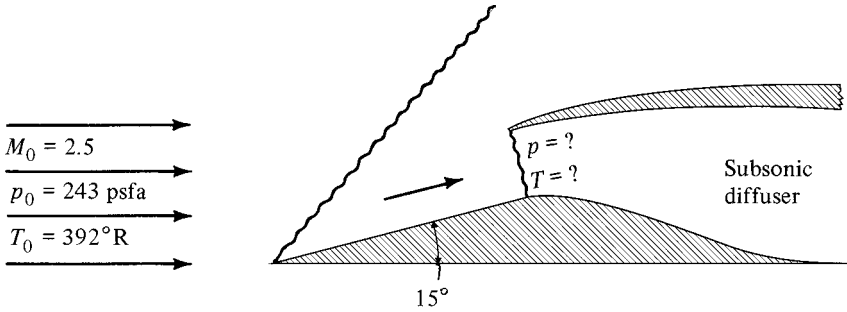


Figure P7.13

- 7.14. A converging–diverging nozzle is operating between the second and third critical points as shown in Figure 7.16. $M_1 = 2.5$, $T_1 = 150$ K, $p_1 = 0.7$ bar, the receiver pressure is 1 bar, and the fluid is nitrogen.
- (a) Compute the Mach number, temperature, and flow deflection in region 2.
 - (b) Through what angle is the flow deflected as it passes through shock wave B?
 - (c) Determine the conditions in region 3.
- 7.15. For the flow situation shown in Figure P7.15, $M_1 = 1.8$, $T_1 = 600^\circ\text{R}$, $p_1 = 15$ psia, and $\gamma = 1.4$.
- (a) Find conditions in region 2 assuming that they are supersonic.
 - (b) What must occur along the dashed line?
 - (c) Find the conditions in region 3.
 - (d) Find the value of T_2 , p_2 , and M_2 if $p_{t2} = 71$ psia.
 - (e) How would the problem change if the flow in region 2 were subsonic?

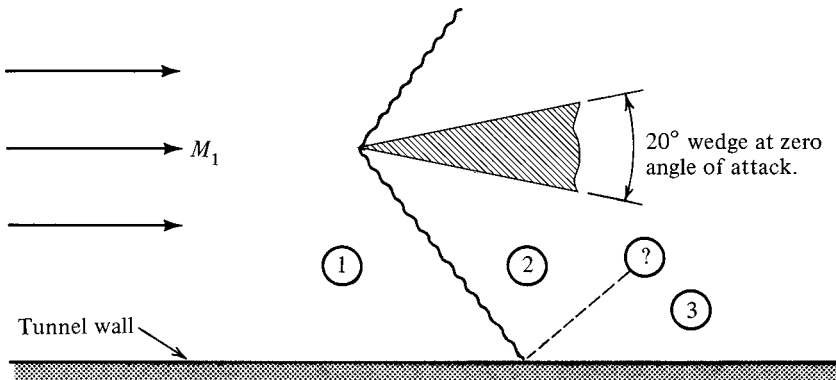


Figure P7.15

7.16. Carbon monoxide flows in the duct shown in Figure P7.16. The first shock, which turns the flow 15° , is observed to form at a 40° angle. The flow is known to be supersonic in regions 1 and 2 and subsonic in region 3.

- (a) Determine M_3 and β .
- (b) Determine the pressure ratios p_3/p_1 and p_{t3}/p_{t1} .

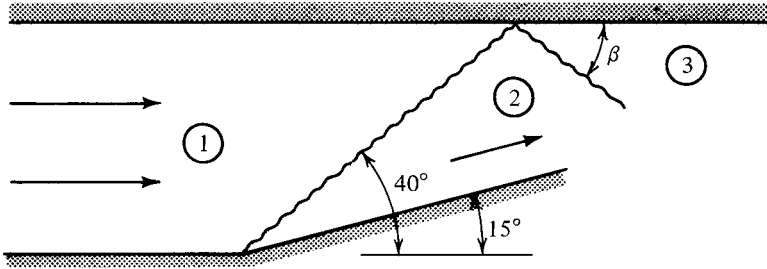


Figure P7.16

7.17. A uniform flow of air has a Mach number of 3.3. The bottom of the duct is bent upward at a 25° angle. At the point where the shock intersects the upper wall, the boundary is bent 5° upward as shown in Figure P7.17. Assume that the flow is supersonic throughout the system. Compute M_3 , p_3/p_1 , T_3/T_1 , and β .

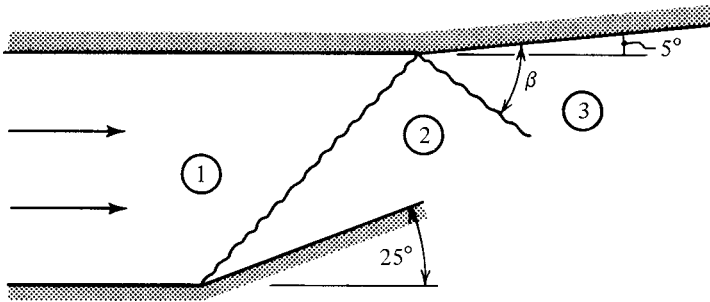


Figure P7.17

7.18. A round-nosed projectile travels through air at a temperature of -15°C and a pressure of $1.8 \times 10^4 \text{ N/m}^2$. The stagnation pressure on the nose of the projectile is measured at $2.1 \times 10^5 \text{ N/m}^2$.

- (a) At what speed (m/s) is the projectile traveling?
- (b) What is the temperature on the projectile's nose?
- (c) Now assume that the nose tip is shaped like a cone. What is the maximum cone angle for the shock to remain attached?

7.19. Work Problem 7.13(a) for a conical shock of the same half-angle and compare results.

CHECK TEST

You should be able to complete this test without reference to material in the chapter.

- 7.1. By velocity superposition the moving shock picture shown in Figure CT7.1 can be transformed into the stationary shock problem shown. Select the statements below which are true.

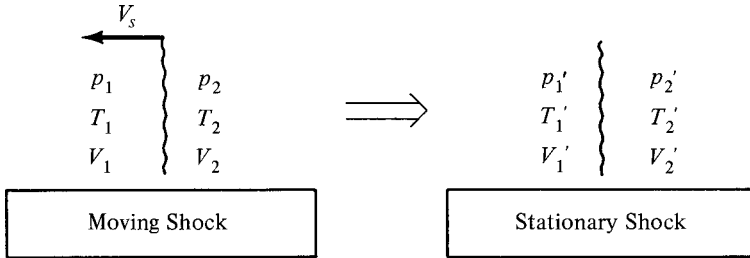


Figure CT7.1

- (a) $p_1 = p'_1$ $p_1 < p'_1$ $p_1 > p'_1$ $p'_1 = p'_2$
 (b) $T_{t1}' > T_{t2}'$ $T_{t1}' = T_{t2}'$ $T_{t1}' < T_{t2}'$ $T_{t1} = T_{t1}'$
 (c) $\rho_1 > \rho_2$ $\rho_1 = \rho_2$ $\rho_1' < \rho_1$ $\rho_1' > \rho_2'$
 (d) $u_2' > u_1'$ $u_2' = u_1'$ $u_2' < u_1'$ $u_2' = u_2$

($u \equiv$ internal energy)

- 7.2. Fill in the blanks from the choices indicated.

- (a) A blast wave will travel through standard air (14.7 psia and 60°F) at a speed (less than, equal to, greater than) _____ approximately 1118 ft/sec.
 (b) If an oblique shock is broken down into components that are normal and tangent to the wave front:
 (i) The normal Mach number (increases, decreases, remains constant) _____ as the flow passes through the wave.
 (ii) The tangential Mach number (increases, decreases, remains constant) _____ as the flow passes through the wave. (*Careful!* This deals with Mach number, not velocity.)

- 7.3. List the conditions that cause an oblique shock to form.

- 7.4. Describe the general results of oblique-shock analysis by drawing a plot of shock angle versus deflection angles.

- 7.5. Sketch the resulting flow pattern over the nose of the object shown in Figure CT7.5. The figure depicts a two-dimensional wedge.




Figure CT7.5

- 7.6. A normal-shock wave travels at 2500 ft/sec into still air at 520°R and 14.7 psia. What velocity exists just after the wave passes?
- 7.7. Oxygen at 5 psia and 450°R is traveling at $M = 2.0$ and leaves a duct as shown in Figure CT7.7. The receiver conditions are 14.1 psia and 600°R.
- (a) At what angle will the first shocks form? By how much is the flow deflected?
- (b) What are the temperature, pressure, and Mach number in region 2?

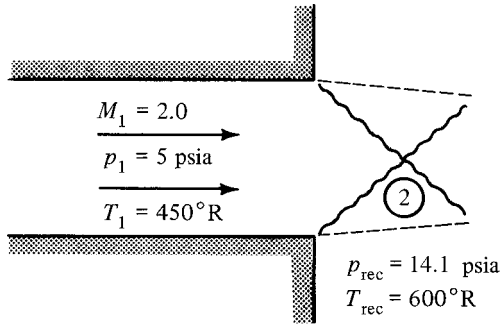


Figure CT7.7

Prandtl–Meyer Flow

8.1 INTRODUCTION

This chapter begins with an examination of weak shocks. We show that for very weak oblique shocks the pressure change is related to the *first* power of the deflection angle, whereas the entropy change is related to the *third* power of the deflection angle. This will enable us to explain how a smooth turn can be accomplished isentropically—a situation known as *Prandtl–Meyer Flow*. Being reversible, such flows may be expansions or compressions, depending on the circumstances.

A detailed analysis of Prandtl–Meyer flow is made for the case of a perfect gas and, as usual, a tabular entry is developed to aid in problem solution. Typical flow fields involving Prandtl–Meyer flow are discussed. In particular, the performance of a converging–diverging nozzle can now be fully explained, as well as supersonic flow around objects.

8.2 OBJECTIVES

After completing this chapter successfully, you should be able to:

1. State how entropy and pressure changes vary with deflection angles for weak oblique shocks.
2. Explain how finite turns (with finite pressure ratios) can be accomplished isentropically in supersonic flow.
3. Describe and sketch what occurs as fluid flows supersonically past a smooth concave corner and a smooth convex corner.

4. Show Prandtl–Meyer flow (both expansions and compressions) on a T – s diagram.
5. (*Optional*) Develop the differential relation between Mach number (M) and flow turning angle (ν) for Prandtl–Meyer flow.
6. Given the equation for the Prandtl–Meyer function (8.58), show how tabular entries can be developed for Prandtl–Meyer flow. Explain the significance of the angle ν .
7. Explain the governing boundary conditions and show the results when shock waves and Prandtl–Meyer waves reflect off both physical and free boundaries.
8. Draw the wave forms created by flow over rounded and/or wedge-shaped wings as the angle of attack changes. Be able to solve for the flow properties in each region.
9. Demonstrate the ability to solve typical Prandtl–Meyer flow problems by use of the appropriate equations and tables.

8.3 ARGUMENT FOR ISENTROPIC TURNING FLOW

Pressure Change for Normal Shocks

Let us first investigate some special characteristics of any *normal shock*. Throughout this section we assume that the medium is a perfect gas, and this will enable us to develop some precise relations. We begin by recalling equation (6.25):

$$\frac{p_2}{p_1} = \frac{2\gamma}{\gamma + 1} M_1^2 - \frac{\gamma - 1}{\gamma + 1} \quad (6.25)$$

Subtracting 1 from both sides, we get

$$\frac{p_2}{p_1} - 1 = \frac{2\gamma}{\gamma + 1} M_1^2 - \frac{2\gamma}{\gamma + 1} \quad (8.1)$$

The left-hand side is readily seen to be the pressure difference across the normal shock divided by the initial pressure. Now express the right side over a common denominator, and this becomes

$$\boxed{\frac{p_2 - p_1}{p_1} = \frac{2\gamma}{\gamma + 1} (M_1^2 - 1)} \quad (8.2)$$

This relation shows that the pressure rise *across a normal shock* is directly proportional to the quantity $(M_1^2 - 1)$. We return to this fact later when we apply it to weak shocks at very small Mach numbers.

Entropy Changes for Normal Shocks

The entropy change for any process with a perfect gas can be expressed in terms of the specific volumes and pressures by equation (1.52). It is a simple matter to change the ratio of specific volumes to a density ratio and to introduce γ from equation (1.49):

$$\frac{s_2 - s_1}{R} = \frac{\gamma}{\gamma - 1} \ln \left(\frac{\rho_1}{\rho_2} \right) + \frac{1}{\gamma - 1} \ln \left(\frac{p_2}{p_1} \right) \quad (8.3)$$

Since we are after the entropy change across a normal shock purely in terms of M_1 , γ , and R , we are going to use equations (5.25) and (5.28). These equations express the pressure ratio and density ratio across the shock as a function of the entropy rise Δs as well as the Mach number and γ . To get our desired result, we manipulate equations (5.25) and (5.28) as follows:

From (5.25) we obtain

$$\ln \left(\frac{p_2}{p_1} \right) = \frac{\gamma}{\gamma - 1} \ln \frac{1 + [(\gamma - 1)/2]M_2^2}{1 + [(\gamma - 1)/2]M_1^2} - \frac{\Delta s}{R} \quad (8.4)$$

From (5.28) we obtain:

$$\gamma \ln \left(\frac{\rho_2}{\rho_1} \right) = \frac{\gamma}{\gamma - 1} \ln \frac{1 + [(\gamma - 1)/2]M_2^2}{1 + [(\gamma - 1)/2]M_1^2} - \gamma \frac{\Delta s}{R} \quad (8.5)$$

We can now subtract equation (8.5) from (8.4) to cancel out the bracketed term. *Show* that after rearranging this can be written as

$$\frac{s_2 - s_1}{R} = \ln \left[\left(\frac{p_2}{p_1} \right)^{1/(\gamma-1)} \left(\frac{\rho_2}{\rho_1} \right)^{-\gamma/(\gamma-1)} \right] \quad (8.6)$$

Now equation (8.2) (in a slightly modified form) can be substituted for the pressure ratio and similarly, equation (6.26) for the density ratio, with the following result:

$$\frac{s_2 - s_1}{R} = \ln \left\{ \left[1 + \frac{2\gamma}{\gamma + 1} (M_1^2 - 1) \right]^{1/(\gamma-1)} \left[\frac{(\gamma + 1)M_1^2}{(\gamma - 1)M_1^2 + 2} \right]^{-\gamma/(\gamma-1)} \right\} \quad (8.7)$$

To aid in simplification, let

$$m \equiv M_1^2 - 1 \quad (8.8)$$

and thus, also,

$$M_1^2 = m + 1 \quad (8.9)$$

Introduce equations (8.8) and (8.9) into (8.7) and *show* that this becomes

$$\frac{s_2 - s_1}{R} = \ln \left\{ \left(1 + \frac{2\gamma m}{\gamma + 1} \right)^{1/(\gamma-1)} (1 + m)^{-\gamma/(\gamma-1)} \left[1 + \frac{(\gamma - 1)m}{\gamma + 1} \right]^{\gamma/(\gamma-1)} \right\} \quad (8.10)$$

Now each of the terms in equation (8.10) is of the form $(1 + x)$ and we can take advantage of the expansion

$$\ln(1 + x) = x - \frac{x^2}{2} + \frac{x^3}{3} - \frac{x^4}{4} + \dots \quad (8.11)$$

Put equation (8.10) into the proper form to expand each bracket according to (8.11). Be careful to retain all terms up to and including the *third* power. If you have not made any mistakes, you will find that all terms involving m and m^2 cancel out and you are left with

$$\frac{s_2 - s_1}{R} = \frac{2\gamma m^3}{3(\gamma + 1)^2} + \text{higher-order terms in } m \quad (8.12)$$

Or we can say that the entropy rise *across a normal shock* is proportional to the *third power* of the quantity $(M_1^2 - 1)$ plus higher-order terms.

$$\frac{s_2 - s_1}{R} = \frac{2\gamma (M_1^2 - 1)^3}{3(\gamma + 1)^2} + \text{HOT} \quad (8.13)$$

Note that if we want to consider *weak* shocks for which $M_1 \rightarrow 1$ or $m \rightarrow 0$, we can legitimately neglect the higher-order terms.

Pressure and Entropy Changes versus Deflection Angles for Weak Oblique Shocks

The developments made earlier in this section were for normal shocks and thus apply equally to the *normal component* of an oblique shock. Since

$$M_{1n} = M_1 \sin \theta \quad (7.5)$$

we can rewrite equation (8.2) as

$$\frac{p_2 - p_1}{p_1} = \frac{2\gamma}{\gamma + 1} (M_1^2 \sin^2 \theta - 1) \quad (8.14)$$

and equation (8.13) becomes

$$\frac{s_2 - s_1}{R} = \frac{2\gamma (M_1^2 \sin^2 \theta - 1)^3}{3(\gamma + 1)^2} + \text{HOT} \quad (8.15)$$

We shall proceed to relate the quantity $(M_1^2 \sin^2 \theta - 1)$ to the deflection angle for the case of very weak oblique shocks. For this case,

- (1) δ will be very small and $\tan \delta \approx \delta$; and
- (2) θ will be approaching the Mach angle μ .

Thus from (7.15) we get

$$\delta \approx 2(\cot \mu) \left(\frac{M_1^2 \sin^2 \theta - 1}{M_1^2(\gamma + \cos 2\mu) + 2} \right) \quad (8.16)$$

Now for a given M_1 , μ_1 is known, and equation (8.16) becomes

$$\delta \approx \text{const} (M_1^2 \sin^2 \theta - 1) \quad (8.17)$$

Remember, equation (8.17) is valid only for *very weak* oblique shocks which are associated with *very small* deflection angles. But this will be *exactly* the case under consideration in the next section. If we introduce (8.17) into (8.14) and (8.15) (omitting the higher-order terms), we get the following relations:

$$\frac{p_2 - p_1}{p_1} \approx \frac{2\gamma}{\gamma + 1} (\text{const})\delta \quad (8.18)$$

$$\frac{s_2 - s_1}{R} \approx \frac{2\gamma}{3(\gamma + 1)^2} [(\text{const})\delta]^3 \quad (8.19)$$

Let us now pause for a moment to interpret these results. They really say that for *very weak* oblique shocks at any arbitrary set of initial conditions,

$$\Delta p \propto \delta \quad (8.20)$$

$$\Delta s \propto \delta^3 \quad (8.21)$$

These are important results that should be memorized.

Isentropic Turns from Infinitesimal Shocks

We have laid the groundwork to show a remarkable phenomenon. Figure 8.1 shows a finite turn divided into n equal segments of δ each. The total turning angle will be indicated by δ_{total} or δ_T and thus

$$\delta_T = n\delta \quad (8.22)$$

Each segment of the turn causes a shock wave to form with an appropriate change in Mach number, pressure, temperature, entropy, and so on. As we increase the number

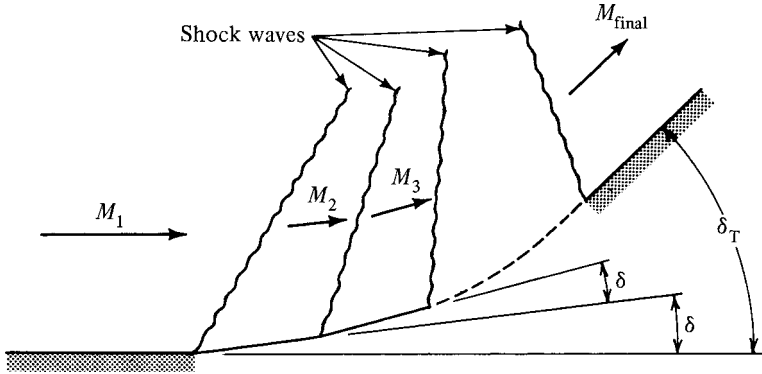


Figure 8.1 Finite turn composed of many small turns.

of segments n , δ becomes very small, which means that each shock will become a very weak oblique shock and the earlier results in this section are applicable. Thus, for each segment we may write

$$\Delta p' \propto \delta \tag{8.23}$$

$$\Delta s' \propto \delta^3 \tag{8.24}$$

where $\Delta p'$ and $\Delta s'$ are the pressure and entropy changes across each segment. Now for the total turn,

$$\text{total } \Delta p = \sum \Delta p' \propto n\delta \tag{8.25}$$

$$\text{total } \Delta s = \sum \Delta s' \propto n\delta^3 \tag{8.26}$$

But from (8.22) we can express $\delta = \delta_T/n$.

We now also take the limit as $n \rightarrow \infty$:

$$\text{total } \Delta p \propto \lim_{n \rightarrow \infty} n \left(\frac{\delta_T}{n} \right) \propto \delta_T \tag{8.27}$$

$$\text{total } \Delta s \propto \lim_{n \rightarrow \infty} n \left(\frac{\delta_T}{n} \right)^3 \rightarrow 0 \tag{8.28}$$

In the limit as $n \rightarrow \infty$, we conclude that:

1. The wall makes a smooth turn through angle δ_T .
2. The shock waves approach Mach waves.
3. The Mach number changes continuously.
4. There is a finite pressure change.
5. There is *no* entropy change.

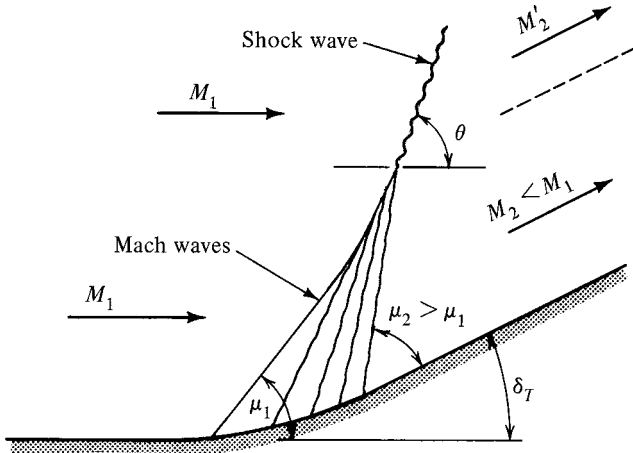


Figure 8.2 Smooth turn. Note the isentropic compression near the wall.

The final result is shown in Figure 8.2. Note that as the turn progresses, the Mach number is decreasing and thus the Mach waves are at ever-increasing angles. (Also, μ_2 is measured from an increasing baseline.) Hence we observe an envelope of Mach lines that forms a short distance from the wall. The Mach waves coalesce to form an oblique shock inclined at the proper angle (θ), corresponding to the initial Mach number and the overall deflection angle δ_T .

We return to the flow in the neighborhood of the wall, as this is a region of great interest. Here we have an infinite number of infinitesimal compression waves. We have achieved a decrease in Mach number and an increase in pressure *without any change in entropy*. Since we are dealing with adiabatic flow ($ds_e = 0$), an isentropic process ($ds = 0$) indicates that there are no losses ($ds_i = 0$) (i.e., *the process is reversible!*). The reverse process (an infinite number of infinitesimal expansion waves) is shown in Figure 8.3. Here we have a smooth turn in the other direction from that discussed previously. In this case, as the turn progresses, the Mach number increases. Thus the Mach angles are decreasing and the Mach waves will never intersect. If the corner were sharp, all of the *expansion waves* would emanate from the corner as illustrated in Figure 8.4. This is called a *centered expansion fan*. Figures 8.3 and 8.4 depict the same overall result provided that the wall is turned through the same angle.

All of the isentropic flows above are called *Prandtl–Meyer flow*. At a smooth concave wall (Figure 8.2) we have a Prandtl–Meyer compression. Flows of this type are not too important since boundary layer and other real gas effects interfere with the isentropic region near the wall. At a smooth convex wall (Figure 8.3) or at a sharp convex turn (Figure 8.4) we have Prandtl–Meyer expansions. These expansions are quite prevalent in supersonic flow, as the examples given later in this chapter will show. Incidentally, you have now discovered the second means by which the flow direction of a supersonic stream may be changed. What was the first?

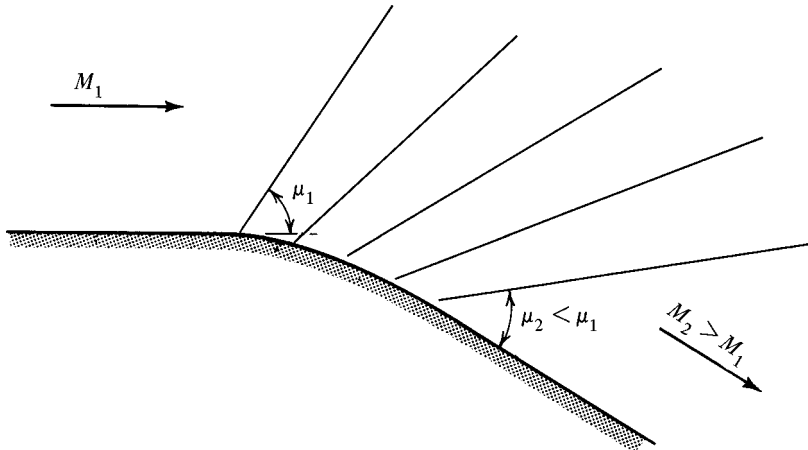


Figure 8.3 Smooth turn. Note the isentropic expansion.

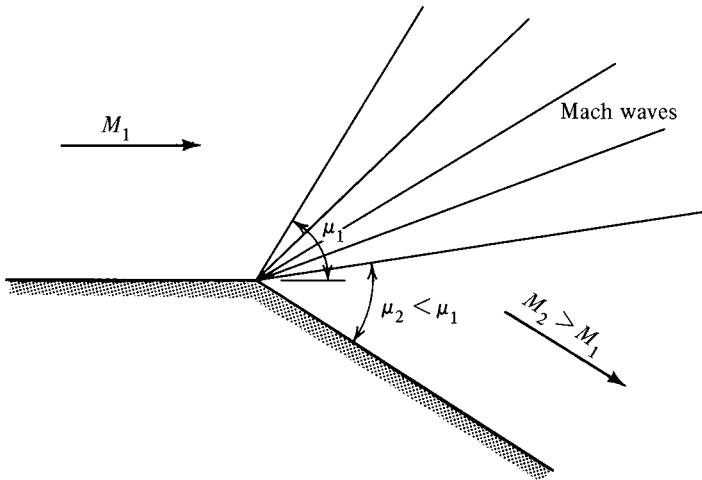


Figure 8.4 Isentropic expansion around sharp corner.

8.4 ANALYSIS OF PRANDTL-MEYER FLOW

We have already established that the flow is isentropic through a Prandtl-Meyer compression or expansion. If we know the final Mach number, we can use the isentropic equations and table to compute the final thermodynamic state for any given set of initial conditions. Thus our objective in this section is to relate the changes in Mach number to the turning angle in Prandtl-Meyer flow. Figure 8.5 shows a single Mach

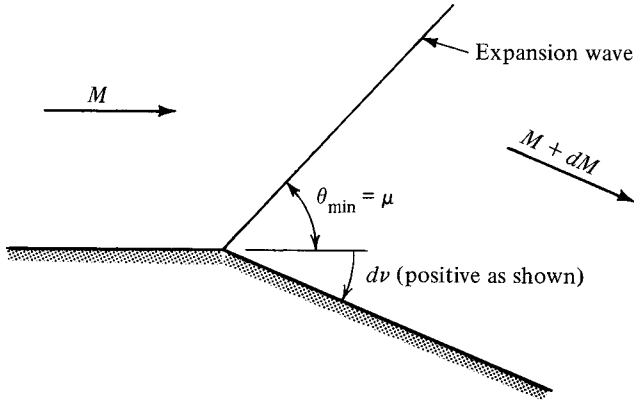


Figure 8.5 Infinitesimal Prandtl-Meyer expansion.

wave caused by turning the flow through an infinitesimal angle dv . It is more convenient to measure v positive in the direction shown, which corresponds to an expansion wave. The pressure difference across the wave front causes a momentum change and hence a velocity change *perpendicular* to the wave front. There is no mechanism by which the tangential velocity component can be changed. In this respect the situation is similar to that of an oblique shock. A detail of this velocity relationship is shown in Figure 8.6.

V represents the magnitude of the velocity before the expansion wave and $V + dV$ is the magnitude after the wave. In both cases the tangential component of the velocity is V_t . From the velocity triangles we see that

$$V_t = V \cos \mu \tag{8.29}$$

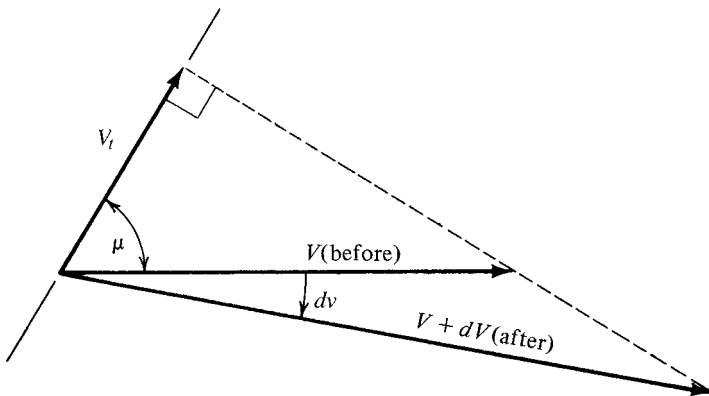


Figure 8.6 Velocities in an infinitesimal Prandtl-Meyer expansion.

and

$$V_t = (V + dV) \cos(\mu + dv) \tag{8.30}$$

Equating these, we obtain

$$V \cos \mu = (V + dV) \cos(\mu + dv) \tag{8.31}$$

If we expand the $\cos(\mu + dv)$, this becomes

$$V \cos \mu = (V + dV) (\cos \mu \cos dv - \sin \mu \sin dv) \tag{8.32}$$

But dv is a very small angle; thus

$$\cos dv \approx 1 \quad \text{and} \quad \sin dv \approx dv$$

and equation (8.32) becomes

$$V \cos \mu = (V + dV)(\cos \mu - dv \sin \mu) \tag{8.33}$$

By writing each term on the right side, we get

$$V \cancel{\cos} \mu = V \cancel{\cos} \mu - V dv \sin \mu + dV \overset{\text{HOT}}{\cos} \mu - \cancel{dV dv} \sin \mu \tag{8.34}$$

Canceling like terms and dropping the higher-order term yields

$$dv = \frac{\cos \mu}{\sin \mu} \frac{dV}{V}$$

or

$$dv = \cot \mu \frac{dV}{V} \tag{8.35}$$

Now the cotangent of μ can easily be obtained in terms of the Mach number. We know that $\sin \mu = 1/M$. From the triangle shown in Figure 8.7 we see that

$$\cot \mu = \sqrt{M^2 - 1} \tag{8.36}$$

Substitution of equation (8.36) into (8.35) yields

$$dv = \sqrt{M^2 - 1} \frac{dV}{V} \tag{8.37}$$

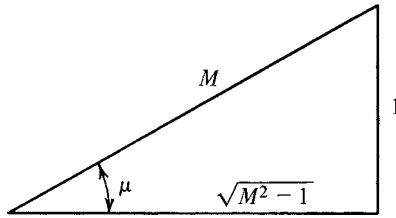


Figure 8.7

Recall that our objective is to obtain a relationship between the Mach number (M) and the turning angle ($d\nu$). Thus we seek a means of expressing dV/V as a function of Mach number. To obtain an explicit expression, we shall assume that the fluid is a perfect gas. From equations (4.10) and (4.11) we know that

$$V = Ma = M\sqrt{\gamma g_c RT} \quad (8.38)$$

Hence

$$dV = dM\sqrt{\gamma g_c RT} + \frac{M}{2}\sqrt{\frac{\gamma g_c R}{T}} dT \quad (8.39)$$

Show that

$$\frac{dV}{V} = \frac{dM}{M} + \frac{dT}{2T} \quad (8.40)$$

Knowing that

$$T_t = T\left(1 + \frac{\gamma - 1}{2}M^2\right) \quad (4.18)$$

then

$$dT_t = dT\left(1 + \frac{\gamma - 1}{2}M^2\right) + T(\gamma - 1)M dM \quad (8.41)$$

But since there is no heat or shaft work transferred to or from the fluid as it passes through the expansion wave, the stagnation enthalpy (h_t) remains constant. For our perfect gas this means that the total temperature remains fixed. Thus

$$T_t = \text{constant} \quad \text{or} \quad dT_t = 0 \quad (8.42)$$

From equations (8.41) and (8.42) we solve for

$$\frac{dT}{T} = -\frac{(\gamma - 1)M dM}{1 + [(\gamma - 1)/2]M^2} \tag{8.43}$$

If we insert this result for dT/T into equation (8.40), we have

$$\frac{dV}{V} = \frac{dM}{M} - \frac{(\gamma - 1)M dM}{2(1 + [(\gamma - 1)/2]M^2)} \tag{8.44}$$

Show that this can be written as

$$\frac{dV}{V} = \frac{1}{1 + [(\gamma - 1)/2]M^2} \frac{dM}{M} \tag{8.45}$$

We can now accomplish our objective by substitution of equation (8.45) into (8.37) with the following result:

$$dv = \frac{(M^2 - 1)^{1/2}}{1 + [(\gamma - 1)/2]M^2} \frac{dM}{M} \tag{8.46}$$

This is a significant relation, for it says that

$$dv = f(M, \gamma)$$

For a given fluid, γ is fixed and equation (8.46) can be integrated to yield

$$v + \text{const} = \left(\frac{\gamma + 1}{\gamma - 1}\right)^{1/2} \tan^{-1} \left[\frac{\gamma - 1}{\gamma + 1} (M^2 - 1) \right]^{1/2} - \tan^{-1} (M^2 - 1)^{1/2} \tag{8.47}$$

If we set $v = 0$ when $M = 1$, the constant will be zero and we have

$$v = \left(\frac{\gamma + 1}{\gamma - 1}\right)^{1/2} \tan^{-1} \left[\frac{\gamma - 1}{\gamma + 1} (M^2 - 1) \right]^{1/2} - \tan^{-1} (M^2 - 1)^{1/2} \tag{8.48}$$

Establishing the constant as zero in the manner described above attaches a special significance to the angle v . This is the angle, measured from the flow direction where $M = 1$, through which the flow has been turned (by an isentropic process) to reach the Mach number indicated. The expression (8.48) is called the *Prandtl–Meyer function*.

8.5 PRANDTL–MEYER FUNCTION

Equation (8.48) is the basis for solving all problems involving Prandtl–Meyer expansions or compressions. If the Mach number is known, it is relatively easy to solve

for the turning angle. However, in a typical problem the turning angle might be prescribed and no explicit solution is available for the Mach number. Fortunately, none is required, for the Prandtl–Meyer function can be calculated in advance and tabulated. Remember that this type of flow is isentropic; therefore, the function (ν) has been included as a column of the isentropic table. The following examples illustrate how rapidly problems of this type are solved.

Example 8.1 The wall in Figure E8.1 turns an angle of 28° with a sharp corner. The fluid, which is initially at $M = 1$, must follow the wall and in so doing executes a Prandtl–Meyer expansion at the corner. Recall that ν represents the angle (measured from the flow direction where $M = 1$) through which the flow has turned. Since M_1 is unity, then $\nu_2 = 28^\circ$.

From the isentropic table (Appendix G) we see that this Prandtl–Meyer function corresponds to $M_2 \approx 2.06$.

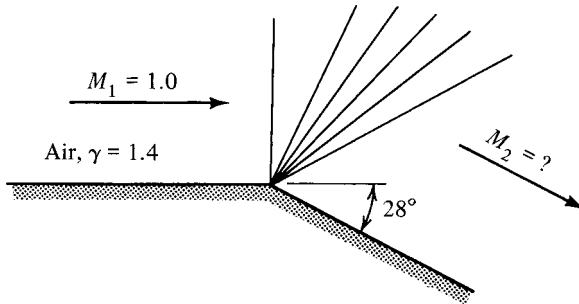


Figure E8.1 Prandtl–Meyer expansion from Mach = 1.

Example 8.2 Now consider flow at a Mach number of 2.06 which expands through a turning angle of 12° . Figure E8.2 shows such a situation and we want to determine the final Mach number M_2 .

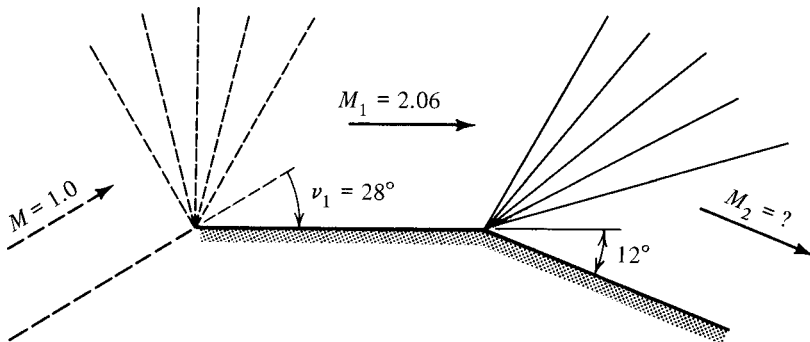


Figure E8.2 Prandtl–Meyer expansion from Mach $\neq 1$.

Now regardless of how the flow with $M_1 = 2.06$ came into existence, we know that *it could have been obtained* by expanding a flow at $M = 1.0$ around a corner of 28° . This is shown by

dashed lines in the figure. It is easy to see that the flow in region 2 *could have been obtained* by taking a flow at $M = 1.0$ and turning it through an angle of $28^\circ + 12^\circ$, or

$$\nu_2 = 28^\circ + 12^\circ = 40^\circ$$

From the isentropic table we find that this corresponds to a flow at $M_2 \approx 2.54$.

From the examples above, we see the general rule for Prandtl-Meyer flow:

$$\boxed{\nu_2 = \nu_1 + \Delta\nu} \tag{8.49}$$

where $\Delta\nu \equiv$ the turning angle.

Note that for an expansion (as shown in Figures E8.1 and E8.2) $\Delta\nu$ is positive and thus both the Prandtl-Meyer function and the Mach number increase. Once the final Mach number is obtained, all properties may be determined easily since it is isentropic flow.

For a turn in the opposite direction, $\Delta\nu$ will be negative, which leads to a Prandtl-Meyer compression. In this case both the Prandtl-Meyer function and the Mach number will decrease. An example of this case follows.

Example 8.3 Air at $M_1 = 2.40$, $T_1 = 325$ K, and $p_1 = 1.5$ bar approaches a smooth concave turn of 20° as shown in Figure E8.3. We have previously discussed how the region close to the wall will be an isentropic compression. We seek the properties in the flow after the turn.

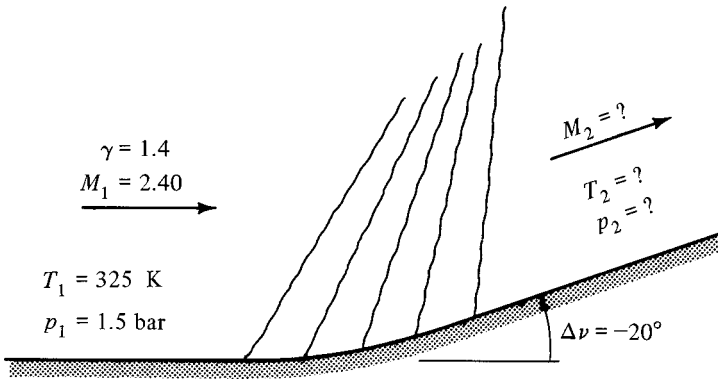


Figure E8.3 Prandtl-Meyer compression.

From the table, $\nu_1 = 36.7465^\circ$. Remember that $\Delta\nu$ is negative.

$$\nu_2 = \nu_1 + \Delta\nu = 36.7465^\circ + (-20^\circ) = 16.7465^\circ$$

Again, from the table we see that this corresponds to a Mach number of

$$M_2 = 1.664$$

Since the flow is adiabatic, with no shaft work, and a perfect gas, we know that the stagnation temperature is constant ($T_{t1} = T_{t2}$). In addition, there are no losses and thus the stagnation pressure remains constant ($p_{t1} = p_{t2}$). Can you verify these statements with the appropriate equations?

To continue with this example, we solve for the temperature and pressure in the usual fashion:

$$p_2 = \frac{p_2}{p_{t2}} \frac{p_{t2}}{p_{t1}} \frac{p_{t1}}{p_1} p_1 = (0.2139)(1) \left(\frac{1}{0.0684} \right) (1.5 \times 10^5) = 4.69 \times 10^5 \text{ N/m}^2$$

$$T_2 = \frac{T_2}{T_{t2}} \frac{T_{t2}}{T_{t1}} \frac{T_{t1}}{T_1} T_1 = (0.6436)(1) \left(\frac{1}{0.4647} \right) (325) = 450 \text{ K}$$

As we move away from the wall we know that the Mach waves will coalesce and form an oblique shock. At what angle will the shock be to deflect the flow by 20° ? What will the temperature and pressure be after the shock? If you work out this oblique-shock problem, you should obtain $\theta = 44^\circ$, $M_{1n} = 1.667$, $p_2' = 4.61 \times 10^5 \text{ N/m}^2$, and $T_2' = 466 \text{ K}$. Since pressure equilibrium does not exist across this free boundary, another wave formation must emanate from the region where the compression waves coalesce into the shock. Further discussion of this problem is beyond the scope of this book, but interested readers are referred to Chapter 16 of Shapiro (Ref. 19).

8.6 OVEREXPANDED AND UNDEREXPANDED NOZZLES

Now we have the knowledge to complete the analysis of a converging–diverging nozzle. Previously, we discussed its isentropic operation, both in the subsonic (venturi) regime and its design operation (Section 5.7). Nonisentropic operation with a normal shock standing in the diverging portion was also covered (Section 6.6). In Section 7.8 we saw that with operating pressure ratios below second critical, oblique shocks come into play, but we were unable to complete the picture.

Figure 8.8 shows an *overexpanded* nozzle; it is operating someplace between its second and third critical points. Recall from the summary of Chapter 7 that there are two types of boundary conditions that must be met. One of these concerns flow direction and the other concerns pressure equilibrium.

1. From symmetry aspects we know that a central streamline exists. Any fluid touching this boundary must have a velocity that is tangent to the streamline. In this respect it is identical to a physical boundary.
2. Once the jet leaves the nozzle, there is an outer surface that is in contact with the surrounding ambient fluid. Since this is a *free* or unrestrained boundary, pressure equilibrium must exist across this surface.

We can now follow from region to region, and by matching the appropriate boundary condition, determine the flow pattern that must exist.

Since the nozzle is operating with a pressure ratio between the second and third critical points, it is obvious that we need a compression process at the exit in order for

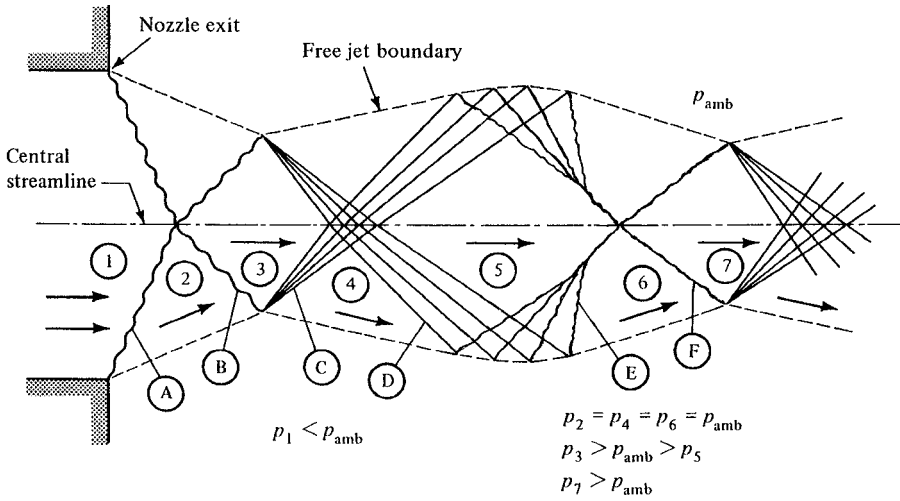


Figure 8.8 Overexpanded nozzle for weak oblique shocks.

the flow to end up at the ambient pressure. However, a normal shock at the exit will produce too strong a compression. What is needed is a shock process that is weaker than a normal shock, and the oblique shock has been shown to be just this. Thus, at the exit we observe oblique shock A at the appropriate angle so that $p_2 = p_{amb}$.

Before proceeding we must distinguish two subdivisions of the flow between the second and third critical. If the oblique shock is strong (see Figure 7.9), then the resulting flow will be subsonic and no more waves will be possible or necessary at region 2. The pressure at region 2 is matched to that of the receiver, and subsonic flow can turn without waves to avoid any centerline problems. On the other hand, if the oblique shock is weak, supersonic flow will prevail (although attenuated) and additional waves will be needed to turn the flow as described below. The exact boundary between strong and weak shocks is close but not the same as the line representing the minimum M_1 for attached oblique shocks shown in Appendix D. Rather, it is the line shown as $M_2 = 1$.

We recall that the flow across an oblique shock is always deflected away from a normal to the shock front, and thus the flow in region 2 is no longer parallel to the centerline. Wave front B must deflect the flow back to its original axial direction. This can easily be accomplished by another oblique shock. (A Prandtl-Meyer expansion would turn the flow in the wrong direction.) An alternative way of viewing this is that the oblique shocks from both the upper and lower lips of the nozzle *pass through each other* when they meet at the centerline. If one adopts this philosophy, one should realize that the waves are slightly altered or *bent* in the process of traveling through one another.

Now, since $p_2 = p_{amb}$, passage of the flow through oblique shock B will make $p_3 > p_{amb}$ and region 3 cannot have a free surface in contact with the surroundings. Consequently, a wave formation must emanate from the point where wave B meets

the free boundary, and the pressure must decrease across this wave. We now realize that wave form C must be a Prandtl–Meyer expansion so that $p_4 = p_{amb}$.

However, passage of the flow through the expansion fan, C, causes it to turn away from the centerline, and the flow in region 4 is no longer parallel to the centerline. Thus as each wave of the Prandtl–Meyer expansion fan meets the centerline, a wave form must emanate to turn the flow parallel to the axis again. If wave D were a compression, in which direction would the flow turn? We see that to meet the boundary condition of flow direction, wave D must be another Prandtl–Meyer expansion. Thus the pressure in region 5 is less than ambient.

Can you now reason that to get from 5 to 6 and meet the boundary condition imposed by the free boundary, E must consist of Prandtl–Meyer compression waves? Depending on the pressures involved, these usually coalesce into an oblique shock, as shown. Then F is another oblique shock to turn the flow from region 6 to match the direction of the *wall*. Now is p_7 equal to, greater than, or less than p_{amb} ? You should recognize that conditions in region 7 are similar to those in region 3, and so the cycle repeats.

Now let us examine an *underexpanded* nozzle. This means that we have an operating pressure ratio *below* the third critical or design condition. Figure 8.9 shows such a situation. The flow leaving this nozzle has a pressure greater than ambient and the flow is parallel to the axis. Think about it and you will realize that this condition is exactly the same as region 3 in the overexpanded nozzle (see Figure 8.8). Thus the flow patterns are identical from this point on. Figures 8.8 and 8.9 represent ideal behavior. The general wave forms described can be seen by special flow visualization techniques such as Schlieren photography. Eventually, the large velocity difference that exists over the free boundary causes a turbulent shear layer which rather quickly dissipates the wave patterns. This can be seen in Figure 8.10, which shows actual Schlieren photographs of a converging–diverging nozzle operating at various pressure ratios.

Example 8.4 Nitrogen issues from a nozzle at a Mach number of 2.5 and a pressure of 10 psia. The ambient pressure is 5 psia. What is the Mach number, and through what angle is the flow turned after passing through the first Prandtl–Meyer expansion fan?

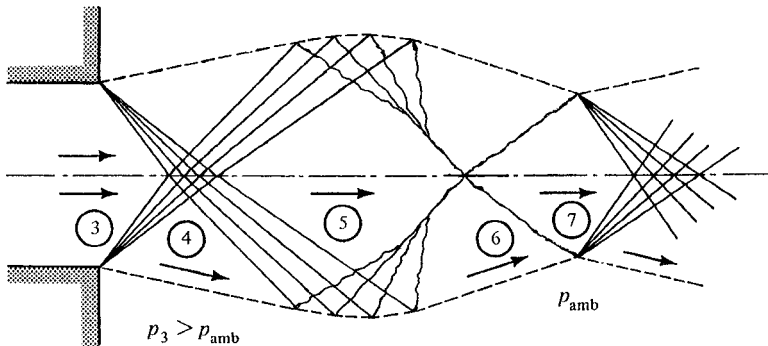


Figure 8.9 Underexpanded nozzle.

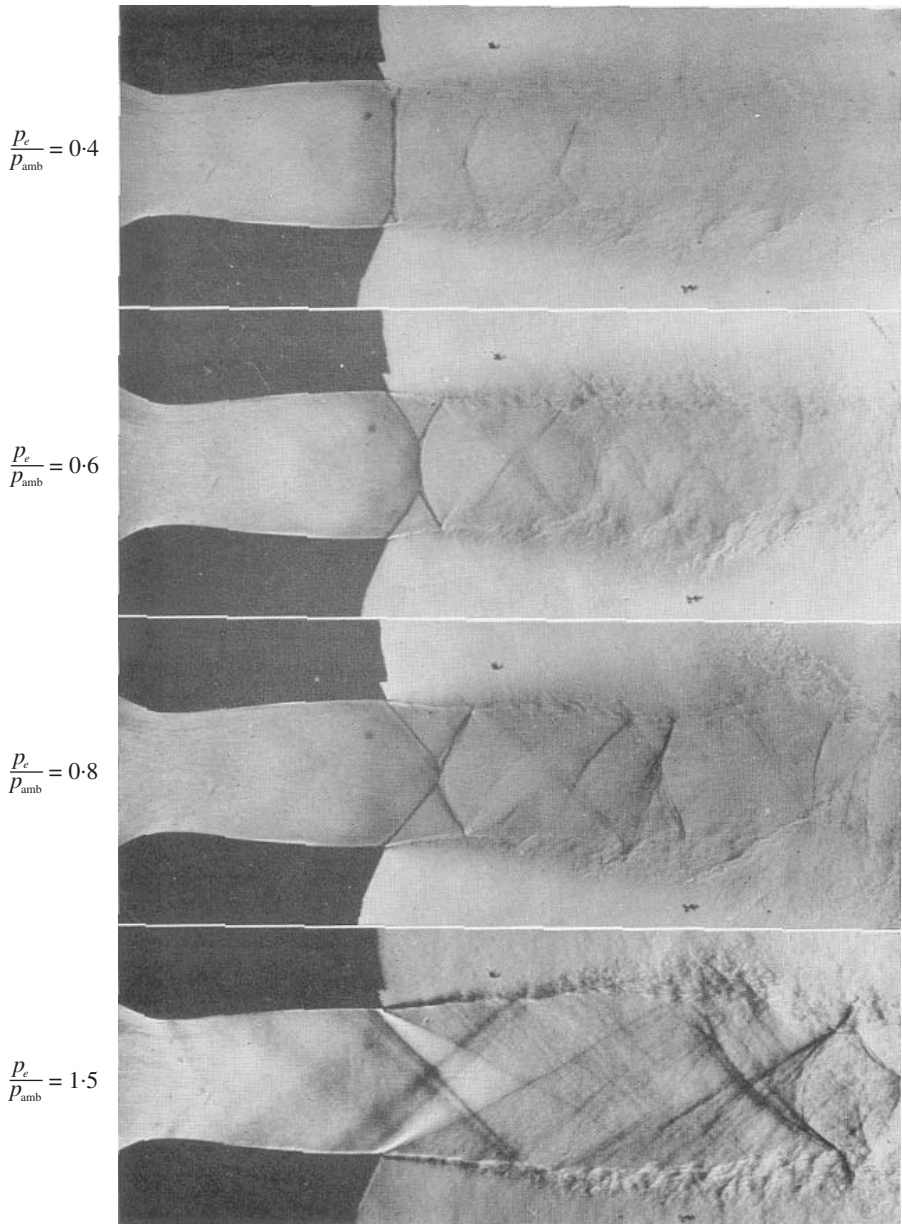


Figure 8.10 Nozzle performance: flow from a converging–diverging nozzle at different back-pressures. (p_e = pressure just ahead of exit). (© Crown Copyright 2001. Reproduced by permission of the Controller of HMSO.)

With reference to Figure 8.9, we know that $M_3 = 2.5$, $p_3 = 10$ psia, and $p_4 = p_{amb} = 5$ psia.

$$\frac{p_4}{p_{t4}} = \frac{p_4}{p_3} \frac{p_3}{p_{t3}} \frac{p_{t3}}{p_{t4}} = \left(\frac{5}{10}\right) (0.0585)(1) = 0.0293$$

Thus

$$M_4 = 2.952$$

$$\Delta v = v_4 - v_3 = 48.8226 - 39.1236 \approx 9.7^\circ$$

Wave Reflections

From the discussions above we have not only learned about the details of nozzle jets when operating at off-design conditions, but we have also been looking at *wave reflections*, although we have not called them such. We could think of the waves as *bouncing* or *reflecting* off the free boundary. Similarly, if the central streamline had been visualized as a solid boundary, we could have thought of the waves as reflecting off that boundary. In retrospect, we may draw some general conclusions about wave reflections.

1. Reflections from a physical or pseudo-physical boundary (where the boundary condition concerns the flow direction) are of the *same family*. That is, shocks reflect as shocks, compression waves reflect as compression waves, and expansion waves reflect as expansion waves.
2. Reflections from a free boundary (where pressure equalization exists) are of the *opposite family* (i.e., compression waves reflect as expansion waves, and expansion waves reflect as compression waves).

Warning: Care should be taken in viewing waves as reflections. Not only is their character sometimes changed (case 2 above) but the angle of reflection is not quite the same as the angle of incidence. Also, the *strength* of the wave changes somewhat. This can be shown clearly by considering the case of an oblique shock *reflecting* off a solid boundary.

Example 8.5 Air at Mach = 2.2 passes through an oblique shock at a 35° angle. The shock runs into a physical boundary as shown Figure E8.5. Find the angle of *reflection* and compare the strengths of the two shock waves.

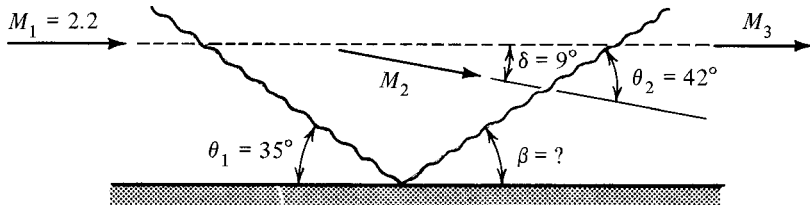


Figure E8.5

From the shock chart at $M_1 = 2.2$ and $\theta_1 = 35^\circ$, we find that $\delta_1 = 9^\circ$.

$$M_{1n} = 2.2 \sin 35^\circ = 1.262 \quad \text{thus} \quad M_{2n} = 0.806$$

$$M_2 = \frac{M_{2n}}{\sin(\theta - \delta)} = \frac{0.806}{\sin(35 - 9)} = 1.839$$

The reflected shock must turn the flow back parallel to the wall. Thus, from the chart at $M_2 = 1.839$ and $\delta_2 = 9^\circ$, we find that $\theta_2 = 42^\circ$.

$$\beta = 42^\circ - 9^\circ = 33^\circ$$

$$M_{2n} = 1.839 \sin 42^\circ = 1.230$$

Notice that the *angle of incidence* (35°) is not the same as the *angle of reflection* (33°). Also, the normal Mach number, which indicates the strength of the wave, has decreased from 1.262 to 1.230.

8.7 SUPERSONIC AIRFOILS

Airfoils designed for *subsonic* flight have rounded leading edges to prevent flow separation. The use of an airfoil of this type at *supersonic* speeds would cause a detached shock to form in front of the leading edge (see Section 7.7). Consequently, all supersonic airfoil shapes have sharp leading edges. Also, to provide good aerodynamic characteristics, supersonic foils are very thin. The obvious limiting case of a thin foil with a sharp leading edge is the flat-plate airfoil shown in Figure 8.11. Although impractical from structural considerations, it provides an interesting study and has characteristics that are typical of all supersonic airfoils.

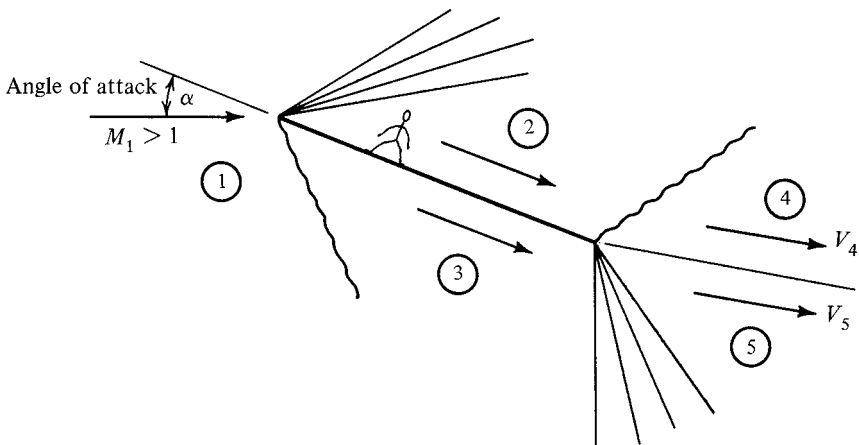


Figure 8.11 Flat-plate airfoil.

Using the foil as a frame of reference yields a steady flow picture. When operating at an angle of attack (α) the flow must change direction to pass over the foil surface. You should have no trouble recognizing that to pass along the upper surface requires a Prandtl–Meyer expansion through angle α at the leading edge. Thus the pressure in region 2 is less than atmospheric. To pass along the lower surface necessitates an oblique shock which will be of the weak variety for the required deflection angle α . (Why is it impossible for the strong solution to occur? See Section 7.7.) The pressure in region 3 is greater than atmospheric.

Now consider what happens at the trailing edge. Pressure equilibrium must exist between regions 4 and 5. Thus a compression must occur off the upper surface and an expansion is necessary on the lower surface. The corresponding wave patterns are indicated in the diagram; an oblique shock from 2 to 4 and a Prandtl–Meyer expansion from 3 to 5. Note that the flows in regions 4 and 5 are not necessarily parallel to that of region 1, nor are the pressures p_4 and p_5 necessarily atmospheric. *The boundary conditions that must be met are flow tangency and pressure equilibrium, or*

$$V_4 \text{ parallel to } V_5 \quad \text{and} \quad p_4 = p_5$$

The solution at the trailing edge is a trial-and-error type since neither the final flow direction nor the final pressure is known.

A sketch of the pressure distribution is given in Figure 8.12. One can easily see that the center of pressure is at the middle or midchord position. If the angle of attack were changed, the values of the pressures over the upper and lower surfaces would change, but the center of pressure would still be at the midchord. Students of aeronautics, who are familiar with the term *aerodynamic center*, will have no difficulty determining that this important point is also located at the midchord. This is approximately true of all *supersonic* airfoils since they are quite thin and generally operate at small angles of attack. (The aerodynamic center of an airfoil section is defined as the point about which the pitching moment is independent of angle of attack. For subsonic airfoils

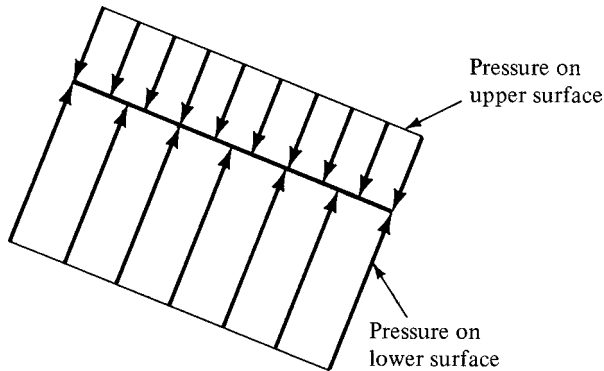


Figure 8.12 Pressure distribution over flat-plate airfoil.

this is approximately at the one-quarter chord point, or 25% of the chord measured from the leading edge back toward the trailing edge.)

Example 8.6 Compute the lift per unit span of a flat-plate airfoil with a chord of 2 m when flying at $M = 1.8$ and an angle of attack of 5° . Ambient air pressure is 0.4 bar. Use Figure 8.11 for identification of regions.

The flow over the top is turned 5° by a Prandtl–Meyer expansion.

$$v_2 = v_1 + \Delta v = 20.7251 + 5 = 25.7251^\circ$$

Thus

$$M_2 = 1.976 \quad \text{and} \quad \frac{p_2}{p_{t2}} = 0.1327$$

The flow under the bottom is turned 5° by an oblique shock. From the chart at $M = 1.8$ and $\delta = 5^\circ$, we find that $\theta = 38.5^\circ$. (Compare this value to what would be obtained using the relevant figure in Appendix D.)

$$M_{1n} = 1.8 \sin 38.5^\circ = 1.20 \quad \text{and} \quad \frac{p_3}{p_1} = 1.2968$$

From Appendix D we get $p_3/p_1 = \underline{\hspace{2cm}}$.

The lift force is defined as that component which is perpendicular to the free stream. Thus the lift force per unit span will be

$$L = (p_3 - p_2) (\text{chord}) (\cos \alpha) = (0.5187 - 0.3051)(10^5) \cdot 2(\cos 5^\circ)$$

$$L = 4.26 \times 10^4 \text{ N/unit span}$$

A more practical design of a supersonic airfoil is shown in Figure 8.13. Here the wave formation depends on whether or not the angle of attack is less than or greater than the half angle of the wedge at the leading edge. In either case, straightforward solutions exist on all surfaces up to the trailing edge. A trial-and-error solution is required only if one is interested in regions 6 and 7. Fortunately, these regions are only of academic interest, as they have no effect on the pressure distribution over the foil. Modifications of the double-wedge airfoil with sections of constant thickness in the center are frequently found in practice.

Another widely used supersonic airfoil shape is the *biconvex*, which is shown in Figure 8.14. This is generally constructed of circular or parabolic arcs. The wave formation is quite similar to that on the double wedge in that the type of waves found at the leading (and trailing) edge is dependent on the angle of attack. Also, in the case of the biconvex, the expansions are spread out over the entire upper and lower surface.

Example 8.7 It has been suggested that a supersonic airfoil be designed as an isosceles triangle with 10° equal angles and an 8-ft chord. When operating at a 5° angle of attack the air flow appears as shown in Figure E8.7. Find the pressures on the various surfaces and the lift and drag forces when flying at $M = 1.5$ through air with a pressure of 8 psia.

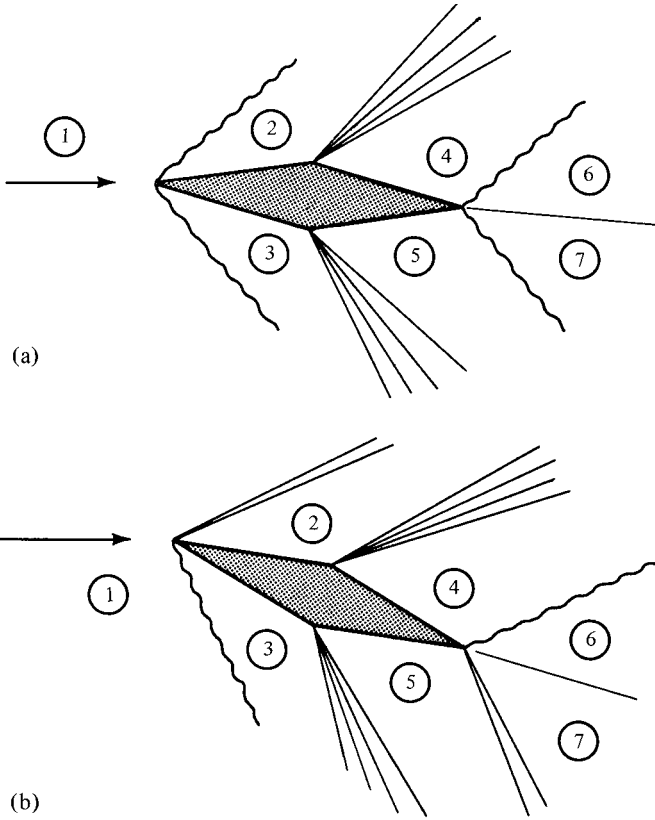


Figure 8.13 Double-wedge airfoil. (a) Low angle of attack. (b) High angle of attack.

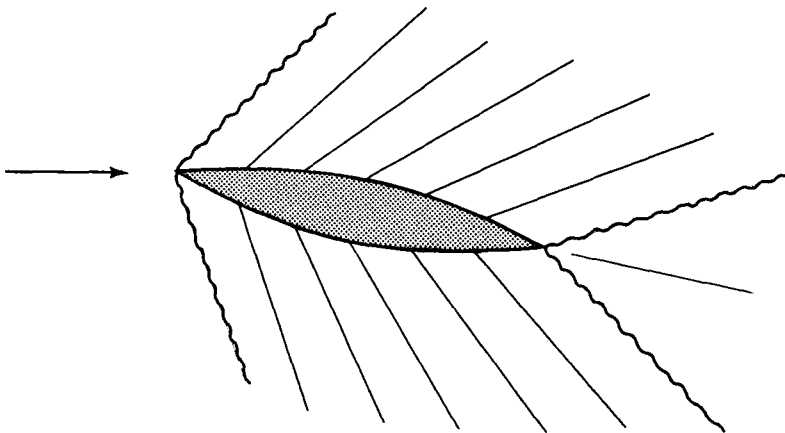


Figure 8.14 Biconvex airfoil at low angle of attack.

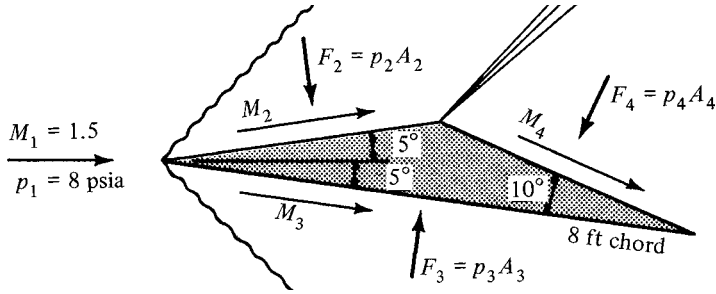


Figure E8.7

From the shock chart at $M_1 = 1.5$ and $\delta = 5^\circ$, $\theta = 48^\circ$:

$$M_{1n} = M_1 \sin \theta = 1.5 (\sin 48^\circ) = 1.115$$

From the shock table,

$$M_{2n} = 0.900 \quad \text{and} \quad \frac{p_2}{p_1} = 1.2838$$

The Prandtl-Meyer expansion turns the flow by 20° :

$$\nu_4 = \nu_2 + 20 = 6.7213 + 20 = 26.7213 \quad \text{and} \quad M_4 = 2.012$$

Note that conditions in region 3 are identical with region 2. We now find the pressures. The lift force (perpendicular to the free stream) will be

$$L = F_3 \cos 5^\circ - F_2 \cos 5^\circ - F_4 \cos 15^\circ$$

Show that the lift per unit span will be 3728 lbf.

The drag is that force which is parallel to the free-stream velocity. Show that the drag force per unit span is 999 lbf. (Compare the oblique shock results above with those obtained using the relevant charts in Appendix D).

8.8 WHEN γ IS NOT EQUAL TO 1.4

As indicated earlier, the Prandtl-Meyer function is tabulated within the isentropic table for $\gamma = 1.4$. The behavior of this function for $\gamma = 1.13, 1.4,$ and 1.67 is given in Figure 8.15 up to $M = 5$. Here we can see that the dependence on γ is rather noticeable except perhaps for $M \leq 1.2$. Thus, below this Mach number, the tabulations in Appendix G can be used with little error for any γ . The appendix tabulation indicates that the value of ν eventually saturates as $M \rightarrow \infty$, but we do not show this limit because, among other things, it is not realistic for any value of γ . However, the calculation is not difficult and is demonstrated in Problem 8.15.

Strictly speaking, these curves are only representative for cases where γ variations are negligible within the flow. However, they offer hints as to what magnitude of

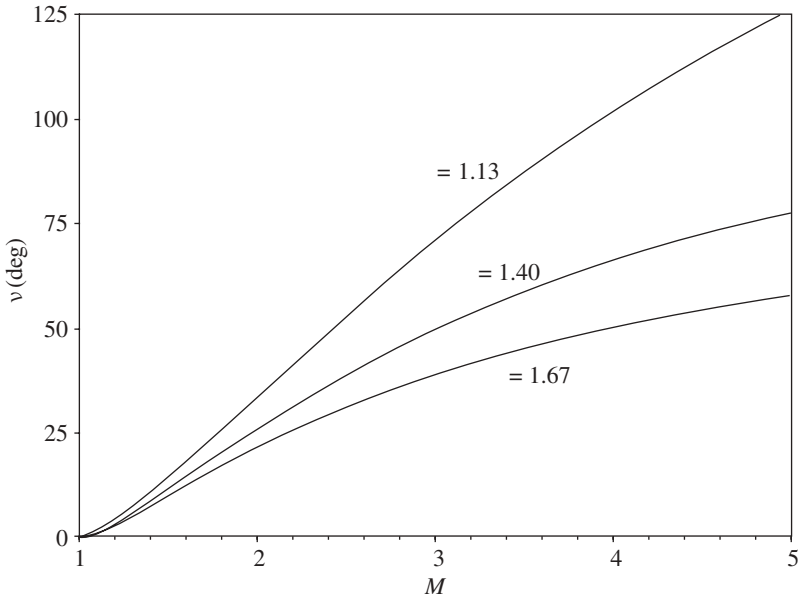


Figure 8.15 Prandtl–Meyer function versus Mach number for various values of γ .

changes is to be expected in other cases. Flows where γ variations are *not negligible within the flow* are treated in Chapter 11.

8.9 (OPTIONAL) BEYOND THE TABLES

As illustrated in Chapter 5, one can eliminate a lot of interpolation and get accurate answers for any ratio of the specific heats γ and/or any Mach number by using a computer utility such as MAPLE. The calculation of the Prandtl–Meyer function can readily be obtained from the example below. We are going to use equation (8.48) which for your convenience is repeated below. This procedure allows the solution for different values of γ as well as the calculation of M given γ and ν .

Example 8.8 Calculate the function ν for $\gamma = 1.4$ and $M = 3.0$.

We begin with equation (8.48):

$$\nu = \left(\frac{\gamma + 1}{\gamma - 1} \right)^{1/2} \tan^{-1} \left[\frac{\gamma - 1}{\gamma + 1} (M^2 - 1) \right]^{1/2} - \tan^{-1} (M^2 - 1)^{1/2} \quad (8.48)$$

Let

$g \equiv \gamma$, a parameter (the ratio of specific heats)

$X \equiv$ the independent variable (which in this case is M)

$Y \equiv$ the dependent variable (which in this case is ν)

Listed below are the precise inputs and program that you use in the computer.

```
[ > g := 1.4:    x := 3.0:
[ > Y := sqrt(((g + 1)/(g - 1))) * arctan(sqrt(((g - 1)/(g + 1))
* (X^2 - 1))) - arctan(sqrt(X^2 - 1));
                                Y := .868429529
```

We need to convert from radians to degrees as follows:

```
[ > evalf(Y*(180/Pi));
```

which gives the desired answer, $\nu = 49.76^\circ$.

8.10 SUMMARY

A detailed examination of very weak oblique shocks (with small deflection angles) shows that

$$\Delta p \propto \delta \quad \text{and} \quad \Delta s \propto \delta^3 \quad (8.30), (8.31)$$

This enables us to reason that a smooth concave turn can be negotiated isentropically by a supersonic stream, although a typical oblique shock will form at some distance from the wall. Of even greater significance is the fact that this is a reversible process and turns of a convex nature can be accomplished by isentropic expansions.

The phenomenon above is called Prandtl–Meyer flow. An analysis for a perfect gas reveals that the turning angle can be related to the change in Mach number by

$$d\nu = \frac{(M^2 - 1)^{1/2}}{1 + [(\gamma - 1)/2]M^2} \frac{dM}{M} \quad (8.46)$$

which when integrated yields the Prandtl–Meyer function:

$$\nu = \left(\frac{\gamma + 1}{\gamma - 1}\right)^{1/2} \tan^{-1} \left[\frac{\gamma - 1}{\gamma + 1} (M^2 - 1) \right]^{1/2} - \tan^{-1} (M^2 - 1)^{1/2} \quad (8.48)$$

In establishing equation (8.48), ν was set equal to zero at $M = 1.0$, which means that ν represents the angle, measured from the direction where $M = 1.0$, through which the flow has been turned (isentropically) to reach the indicated Mach number. The relation above has been tabulated in the isentropic table, which permits easy problem solutions according to the relation

$$\nu_2 = \nu_1 + \Delta\nu \quad (8.49)$$

in which $\Delta\nu$ is the turning angle. Remember that $\Delta\nu$ will be positive for expansions and negative for compressions.

It must be understood that Prandtl–Meyer expansions and compressions are caused by the same two situations that govern the formation of oblique shocks (i.e., the flow must be tangent to a boundary, and pressure equilibrium must exist along the edge of a free boundary). Consideration of these boundary conditions together with any given physical situation should enable you to determine the resulting flow patterns rather quickly.

Waves may sometimes be thought of as *reflecting* off boundaries, in which case it is helpful to remember that:

1. Reflections from *physical* boundaries are of the same *family*.
2. Reflections from *free* boundaries are of the opposite *family*.

Remember that all isentropic relations and the isentropic table may be used when dealing with Prandtl–Meyer flow.

PROBLEMS

- 8.1. Air approaches a sharp 15° convex corner (see Figure 8.4) with a Mach number of 2.0, temperature of 520°R, and pressure of 14.7 psia. Determine the Mach number, static and stagnation temperature, and static and stagnation pressure of the air after it has expanded around the corner.
- 8.2. A Schlieren photo of the flow around a corner reveals the edges of the expansion fan to be indicated by the angles shown in Figure P8.2. Assume that $\gamma = 1.4$.
 - (a) Determine the Mach number before and after the corner.
 - (b) Through what angle was the flow turned, and what is the angle of the expansion fan (θ_3)?

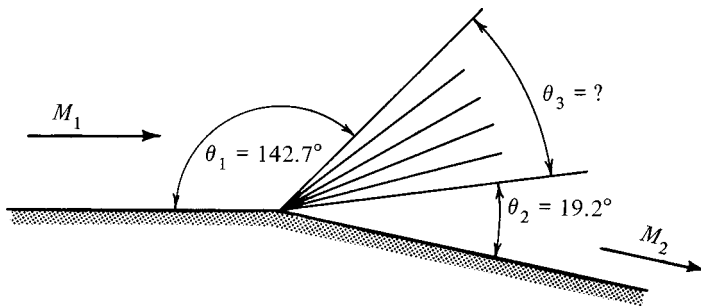


Figure P8.2

- 8.3. A supersonic flow of air has a pressure of $1 \times 10^5 \text{ N/m}^2$ and a temperature of 350 K. After expanding through a 35° turn, the Mach number is 3.5.
 - (a) What are the final temperature and pressure?
 - (b) Make a sketch similar to Figure P8.2 and determine angles θ_1 , θ_2 , and θ_3 .

- 8.4. In a problem similar to Problem 8.2, θ_1 is unknown, but $\theta_2 = 15.90^\circ$ and $\theta_3 = 82.25^\circ$. Can you determine the initial Mach number?
- 8.5. Nitrogen at 25 psia and 850°R is flowing at a Mach number of 2.54. After expanding around a smooth convex corner, the velocity of the nitrogen is found to be 4000 ft/sec. Through how many degrees did the flow turn?
- 8.6. A smooth concave turn similar to that shown in Figure 8.2 turns the flow through a 30° angle. The fluid is oxygen and it approaches the turn at $M_1 = 4.0$.
- Compute M_2 , T_2/T_1 , and p_2/p_1 via the Prandtl–Meyer compression which occurs close to the wall.
 - Compute M'_2 , T'_2/T_1 , and p'_2/p_1 via the oblique shock that forms away from the wall. Assume that this flow is also deflected by 30° .
 - Draw a T - s diagram showing each process.
 - Can these two regions coexist next to one another?
- 8.7. A simple flat-plate airfoil has a chord of 8 ft and is flying at $M = 1.5$ and a 10° angle of attack. Ambient air pressure is 10 psia and the temperature is 450°R .
- Determine the pressures above and below the airfoil.
 - Calculate the lift and drag forces per unit span.
 - Determine the pressure and flow direction as the air leaves the trailing edge (regions 4 and 5 in Figure 8.11).
- 8.8. The symmetrical diamond-shaped airfoil shown in Figure P8.8 is operating at a 3° angle of attack. The flight speed is $M = 1.8$ and the air pressure equals 8.5 psia.
- Compute the pressure on each surface.
 - Calculate the lift and drag forces.
 - Repeat the problem with a 10° angle of attack.

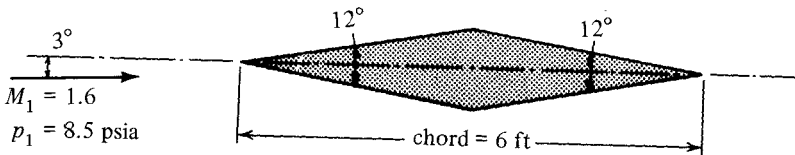


Figure P8.8

- 8.9. A biconvex airfoil (see Figure 8.14) is constructed of circular arcs. We shall approximate the curve on the upper surface by 10 straight-line segments, as shown in Figure P8.9.
- Determine the pressure immediately after the oblique shock at the leading edge.
 - Determine the Mach number and pressure on each segment.
 - Compute the contribution to the lift and drag from each segment.

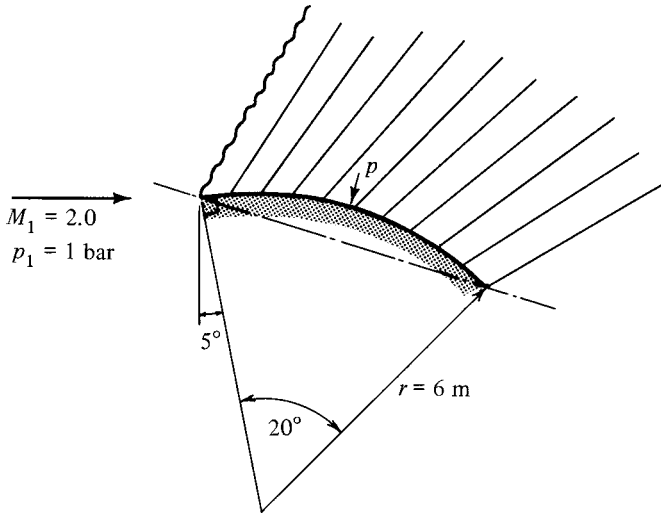


Figure P8.9

8.10. Properties of the flow are given at the exit plane of the two-dimensional duct shown in Figure P8.10. The receiver pressure is 12 psia.

- (a) Determine the Mach number and temperature just past the exit (after the flow has passed through the first wave formation). Assume that $\gamma = 1.4$.
- (b) Make a sketch showing the flow direction, wave angles, and so on.

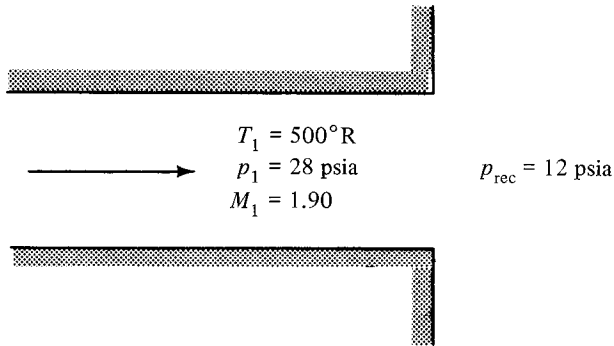


Figure P8.10

8.11. Stagnation conditions in a large reservoir are 7 bar and 420 K. A converging-only nozzle delivers nitrogen from this reservoir into a receiver where the pressure is 1 bar.

- (a) Sketch the first wave formation that will be seen as the nitrogen leaves the nozzle.
- (b) Find the conditions (T, p, V) that exist after the nitrogen has passed through this wave formation.

8.12. Air flows through a converging-diverging nozzle that has an area ratio of 3.5. The nozzle is operating at its third critical (design condition). The jet stream strikes a two-dimensional wedge with a total wedge angle of 40° as shown in Figure P8.12.

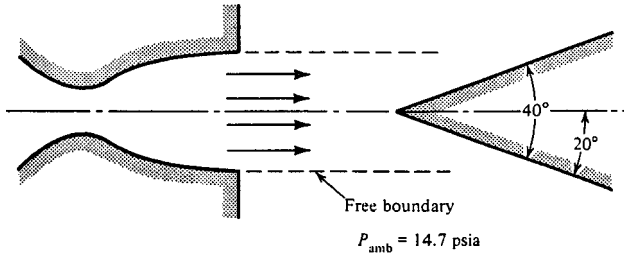


Figure P8.12

- (a) Make a sketch to show the initial wave pattern that results from the jet stream striking the wedge.
- (b) Show the additional wave pattern formed by the interaction of the initial wave system with the free boundary. Mark the flow direction in the region following each wave form and show what happens to the free boundary.
- (c) Compute the Mach number and direction of flow after the air jet passes through each system of waves.

8.13. Air flows in a two-dimensional channel and exhausts to the atmosphere as shown in Figure P8.13. Note that the oblique shock just touches the upper corner.

- (a) Find the deflection angle.
- (b) Determine M_2 and p_2 (in terms of p_{amb}).
- (c) What is the nature of the wave form emanating from the upper corner and dividing regions 2 and 3?
- (d) Compute M_3 , p_3 , and T_3 (in terms of T_1). Show the flow direction in region 3.

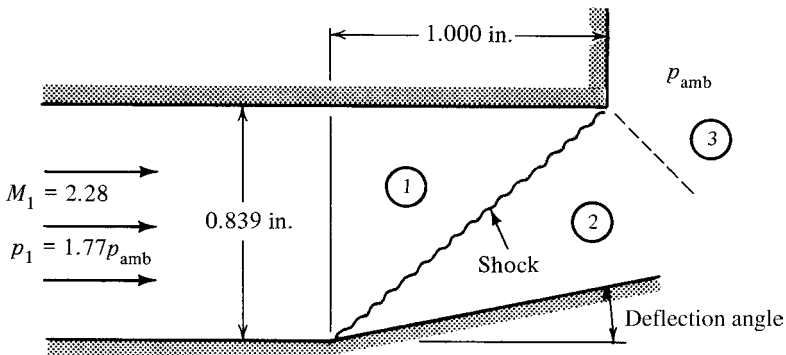


Figure P8.13

- 8.14.** A supersonic nozzle produces a flow of nitrogen at $M_1 = 2.0$ and $p_1 = 0.7$ bar. This discharges into an ambient pressure of 1.0 bar, producing the flow pattern shown in Figure 8.8.
- (a) Compute the pressures, Mach numbers, and flow directions in regions 2, 3, and 4.
 - (b) Make a sketch of the exit jet showing all angles to scale (streamlines, shock lines, and Mach lines).
- 8.15.** Consider the expression for the Prandtl–Meyer function that is given in equation (8.48).
- (a) Show that the maximum possible value for ν is

$$\nu_{\max} = \frac{\pi}{2} \left(\sqrt{\frac{\gamma + 1}{\gamma - 1}} - 1 \right)$$

- (b) At what Mach number does this occur?
 - (c) If $\gamma = 1.4$, what are the maximum turning angles for accelerating flows with initial Mach numbers of 1.0, 2.0, 5.0, and 10.0?
 - (d) If a flow of air at $M = 2.0$, $p = 100$ psia, and $T = 600^\circ\text{R}$ expands through its maximum turning angle, what is the velocity?
- 8.16.** Flow, initially at a Mach number of unity, expands around a corner through angle ν and reaches Mach number M_2 (see Figure P8.16). Lengths L_1 and L_2 are measured perpendicular to the wall and measure the distance out to the same streamline as shown.
- (a) Derive an equation for the ratio $L_2/L_1 = f(M_2, \gamma)$. (*Hints:* What fundamental concept must be obeyed? What kind of process is this?)
 - (b) If $M_1 = 1.0$, $M_2 = 1.79$, and $\gamma = 1.67$, compute the ratio L_2/L_1 .

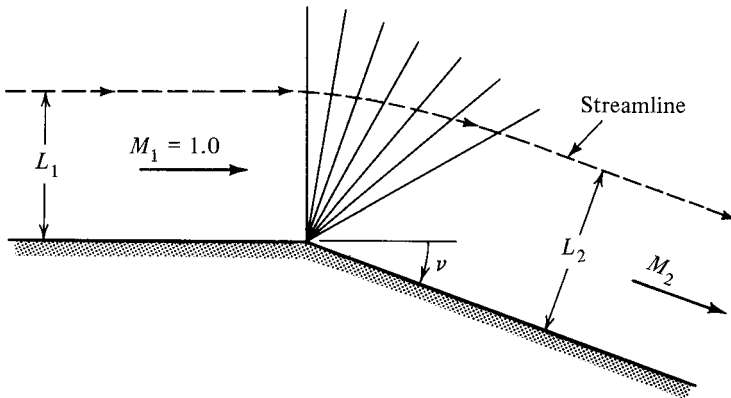


Figure P8.16

- 8.17.** Nitrogen flows along a horizontal surface at $M_1 = 2.5$. Calculate and sketch the constant-slope surface orientation angles (with respect to the horizontal) that would cause a change by Prandtl–Meyer flow to
- (a) $M_{2a} = 2.9$ and (b) $M_{2b} = 2.1$. (c) Should these changes be equal? State why or why not.

- 8.18. An experimental drone aircraft in the shape of a flat-plate wing flies at an angle of attack α . It operates at a Mach number of 3.0.
- (a) Find the maximum α consistent with *both* an attached oblique shock on the airfoil and a Mach number over the airfoil not exceeding 5.
 - (b) Find the ratio of lift to (wave) drag forces on this airfoil at the α of part (a). You may assume an arbitrary chord length c .

CHECK TEST

You should be able to complete this test without reference to material in the chapter.

- 8.1. For very weak oblique shocks, state how entropy changes and pressure changes are related to deflection angles.
- 8.2. Explain what the Prandtl-Meyer function represents. (That is, if someone were to say that $\nu = 36.8^\circ$, what would this mean to you?)
- 8.3. State the rules for wave reflection.
 - (a) Waves reflect off physical boundaries as _____.
 - (b) Waves reflect off free boundaries as _____.
- 8.4. A flow at $M_1 = 1.5$ and $p_1 = 2 \times 10^5 \text{ N/m}^2$ approaches a sharp turn. After negotiating the turn, the pressure is $1.5 \times 10^5 \text{ N/m}^2$. Determine the deflection angle if the fluid is oxygen.
- 8.5. Compute the net force (per square foot of area) acting on the flat-plate airfoil shown in Figure CT8.5.

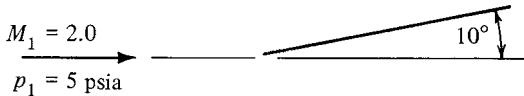


Figure CT8.5

- 8.6. (a) Sketch the waveforms that you might expect to find over the airfoil shown in Figure CT8.6.
- (b) Identify all wave forms by name.
- (c) State the boundary conditions that must be met as the flow comes off the trailing edge of the airfoil.

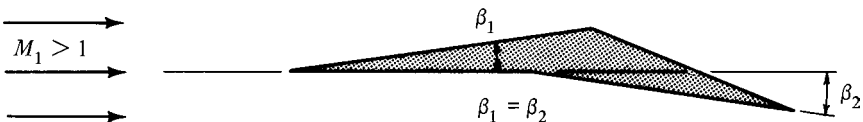


Figure CT8.6

- 8.7. Figure CT8.7 is a representation of a Schlieren photo showing a converging-diverging nozzle in operation. Indicate whether the pressures in regions a, b, c, d, and e are equal to, greater than, or less than the receiver pressure.

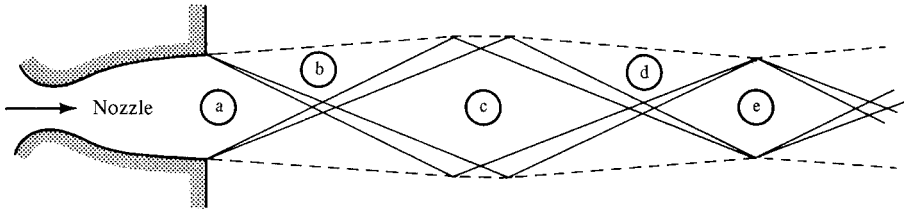


Figure CT8.7

Chapter 9

Fanno Flow

9.1 INTRODUCTION

At the start of Chapter 5 we mentioned that area changes, friction, and heat transfer are the most important factors affecting the properties in a flow system. Up to this point we have considered only one of these factors, that of variations in area. However, we have also discussed the various mechanisms by which a flow adjusts to meet imposed boundary conditions of either flow direction or pressure equalization. We now wish to take a look at the subject of friction losses.

To study only the effects of friction, we analyze flow in a constant-area duct without heat transfer. This corresponds to many practical flow situations that involve reasonably short ducts. We consider first the flow of an arbitrary fluid and discover that its behavior follows a definite pattern which is dependent on whether the flow is in the subsonic or supersonic regime. Working equations are developed for the case of a perfect gas, and the introduction of a reference point allows a table to be constructed. As before, the table permits rapid solutions to many problems of this type, which are called *Fanno flow*.

9.2 OBJECTIVES

After completing this chapter successfully, you should be able to:

1. List the assumptions made in the analysis of Fanno flow.
2. (*Optional*) Simplify the general equations of continuity, energy, and momentum to obtain basic relations valid for any fluid in Fanno flow.
3. Sketch a Fanno line in the $h-v$ and the $h-s$ planes. Identify the sonic point and regions of subsonic and supersonic flow.
4. Describe the variation of static and stagnation pressure, static and stagnation temperature, static density, and velocity as flow progresses along a Fanno line. Do for both subsonic and supersonic flow.

5. (Optional) Starting with basic principles of continuity, energy, and momentum, derive expressions for property ratios such as T_2/T_1 , p_2/p_1 , and so on, in terms of Mach number (M) and specific heat ratio (γ) for Fanno flow with a perfect gas.
6. Describe (include $T-s$ diagram) how the Fanno table is developed with the use of a * reference location.
7. Define *friction factor*, *equivalent diameter*, *absolute and relative roughness*, *absolute and kinematic viscosity*, and *Reynolds number*, and know how to determine each.
8. Compare similarities and differences between Fanno flow and normal shocks. Sketch an $h-s$ diagram showing a typical Fanno line together with a normal shock for the same mass velocity.
9. Explain what is meant by *friction choking*.
10. (Optional) Describe some possible consequences of adding duct in a choked Fanno flow situation (for both subsonic and supersonic flow).
11. Demonstrate the ability to solve typical Fanno flow problems by use of the appropriate tables and equations.

9.3 ANALYSIS FOR A GENERAL FLUID

We first consider the general behavior of an arbitrary fluid. To isolate the effects of friction, we make the following assumptions:

Steady one-dimensional flow	
Adiabatic	$\delta q = 0, ds_e = 0$
No shaft work	$\delta w_s = 0$
Neglect potential	$dz = 0$
Constant area	$dA = 0$

We proceed by applying the basic concepts of continuity, energy, and momentum.

Continuity

$$\dot{m} = \rho AV = \text{const} \tag{2.30}$$

but since the flow area is constant, this reduces to

$$\rho V = \text{const} \tag{9.1}$$

We assign a new symbol G to this constant (the quantity ρV), which is referred to as the *mass velocity*, and thus

$\rho V = G = \text{const}$	(9.2)
-----------------------------	-------

What are the typical units of G ?

Energy

We start with

$$h_{t1} + q' = h_{t2} + \psi'_s \quad (3.19)$$

For adiabatic and no work, this becomes

$$h_{t1} = h_{t2} = h_t = \text{const} \quad (9.3)$$

If we neglect the potential term, this means that

$$h_t = h + \frac{V^2}{2g_c} = \text{const} \quad (9.4)$$

Substitute for the velocity from equation (9.2) and *show* that

$$h_t = h + \frac{G^2}{\rho^2 2g_c} = \text{const} \quad (9.5)$$

Now for any given flow, the constant h_t and G are known. Thus equation (9.5) establishes a unique relationship between h and ρ . Figure 9.1 is a plot of this equation in the h - v plane for various values of G (but all for the same h_t). Each curve is called a *Fanno line* and represents flow at a particular *mass velocity*. Note carefully that this is constant G and not constant \dot{m} . Ducts of various sizes could pass the same mass flow rate but would have different mass velocities.

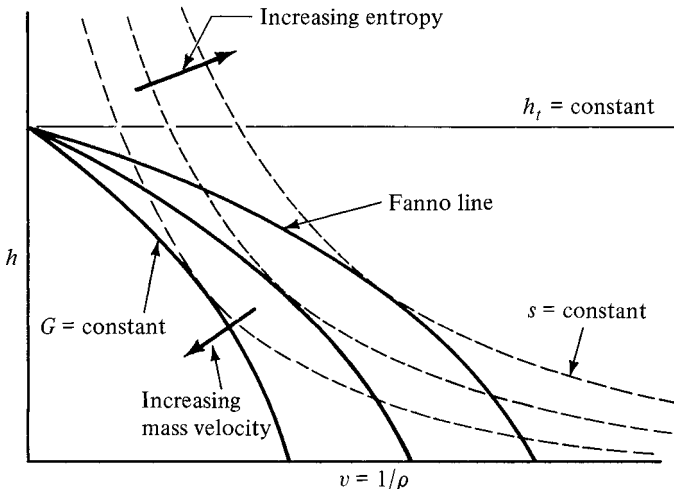


Figure 9.1 Fanno lines in h - v plane.

Once the fluid is known, one can also plot lines of constant entropy on the $h-v$ diagram. Typical curves of $s = \text{constant}$ are shown as dashed lines in the figure. It is much more instructive to plot these Fanno lines in the familiar $h-s$ plane. Such a diagram is shown in Figure 9.2. At this point, a significant fact becomes quite clear. Since we have assumed that there is no heat transfer ($ds_e = 0$), the *only* way that entropy can be generated is through irreversibilities (ds_i). Thus *the flow can only progress toward increasing values of entropy!* Why? Can you locate the points of maximum entropy for each Fanno line in Figure 9.1?

Let us examine one Fanno line in greater detail. Figure 9.3 shows a given Fanno line together with typical pressure lines. All points on this line represent states with the same mass flow rate per unit area (mass velocity) and the same stagnation enthalpy. Due to the irreversible nature of the frictional effects, the flow can only proceed to the right. Thus the Fanno line is divided into two distinct parts, an upper and a lower branch, which are separated by a limiting point of maximum entropy.

What does intuition tell us about adiabatic flow in a constant-area duct? We normally feel that frictional effects will show up as an internal generation of “heat” with a corresponding reduction in density of the fluid. To pass the same flow rate (with constant area), continuity then forces the velocity to increase. This increase in kinetic energy must cause a decrease in enthalpy, since the stagnation enthalpy remains constant. As can be seen in Figure 9.3, this agrees with flow along the *upper branch* of the Fanno line. It is also clear that in this case both the static and stagnation pressure are decreasing.

But what about flow along the *lower branch*? Mark two points on the lower branch and draw an arrow to indicate proper movement along the Fanno line. What is happening to the enthalpy? To the density [see equation (9.5)]? To the velocity [see equation (9.2)]? From the figure, what is happening to the static pressure? The stagnation pressure? Fill in Table 9.1 with *increase*, *decrease*, or *remains constant*.

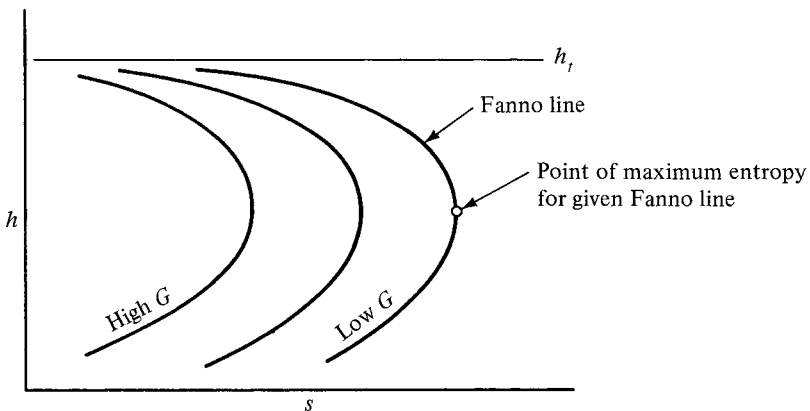


Figure 9.2 Fanno lines in $h-s$ plane.

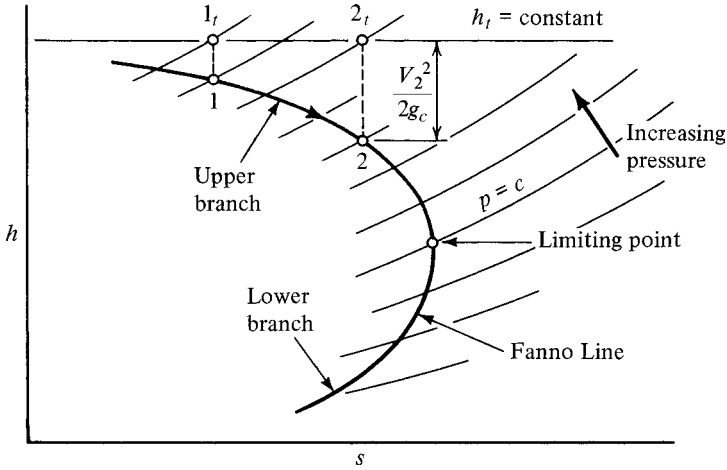


Figure 9.3 Two branches of a Fanno line.

Table 9.1 Analysis of Fanno Flow for Figure 9.3

Property	Upper Branch	Lower Branch
Enthalpy		
Density		
Velocity		
Pressure (static)		
Pressure (stagnation)		

Notice that on the lower branch, properties do not vary in the manner predicted by intuition. Thus this must be a flow regime with which we are not very familiar. Before we investigate the limiting point that separates these two flow regimes, let us note that these flows do have one thing in common. Recall the stagnation pressure equation from Chapter 3.

$$\frac{dp_t}{\rho_t} + ds_e(T_t - T) + T_t ds_i + \delta w_s = 0 \tag{3.25}$$

For Fanno flow, $ds_e = \delta w_s = 0$.

Thus any frictional effect must cause a decrease in the total or stagnation pressure! Figure 9.3 verifies this for flow along both the upper and lower branches of the Fanno line.

Limiting Point

From the energy equation we had developed,

$$h_t = h + \frac{V^2}{2g_c} = \text{constant} \tag{9.4}$$

Differentiating, we obtain

$$dh_t = dh + \frac{V dV}{g_c} = 0 \tag{9.6}$$

From continuity we had found that

$$\rho V = G = \text{constant} \tag{9.2}$$

Differentiating this, we obtain

$$\rho dV + V d\rho = 0 \tag{9.7}$$

which can be solved for

$$dV = -V \frac{d\rho}{\rho} \tag{9.8}$$

Introduce equation (9.8) into (9.6) and *show* that

$$dh = \frac{V^2 d\rho}{g_c \rho} \tag{9.9}$$

Now recall the property relation

$$T ds = dh - v dp \tag{1.41}$$

which can be written as

$$T ds = dh - \frac{dp}{\rho} \tag{9.10}$$

Substituting for *dh* from equation (9.9) yields

$$T ds = \frac{V^2 d\rho}{g_c \rho} - \frac{dp}{\rho} \tag{9.11}$$

We hasten to point out that this expression is valid for *any* fluid and between two differentially separated points *anyplace* along the Fanno line. Now let's apply equation (9.11) to two adjacent points that surround the limiting point of maximum entropy. At this location $s = \text{const}$; thus $ds = 0$, and (9.11) becomes

$$\frac{V^2 d\rho}{g_c} = dp \quad \text{at limit point} \tag{9.12}$$

or

$$V^2 = g_c \left(\frac{dp}{d\rho} \right)_{\text{at limit point}} = g_c \left(\frac{\partial p}{\partial \rho} \right)_{s = \text{const}} \quad (9.13)$$

This should be a familiar expression [see equation (4.5)] and we recognize that *the velocity is sonic at the limiting point*. The upper branch can now be more significantly called the *subsonic branch*, and the lower branch is seen to be the *supersonic branch*.

Now we begin to see a reason for the failure of our intuition to predict behavior on the lower branch of the Fanno line. From our studies in Chapter 5 we saw that fluid behavior in supersonic flow is frequently contrary to our expectations. This points out the fact that we live most of our lives “subsonically,” and, in fact, our knowledge of fluid phenomena comes mainly from experiences with incompressible fluids. It should be apparent that we cannot use our intuition to guess at what might be happening, particularly in the supersonic flow regime. We must learn to get religious and put faith in our carefully derived relations.

Momentum

The foregoing analysis was made using only the continuity and energy relations. We now proceed to apply momentum concepts to the control volume shown in Figure 9.4. The x -component of the momentum equation for steady, one-dimensional flow is

$$\sum F_x = \frac{\dot{m}}{g_c} (V_{\text{out}_x} - V_{\text{in}_x}) \quad (3.46)$$

From Figure 9.4 we see that the force summation is

$$\sum F_x = p_1 A - p_2 A - F_f \quad (9.14)$$

where F_f represents the total wall frictional force on the fluid between sections 1 and 2. Thus the momentum equation in the direction of flow becomes

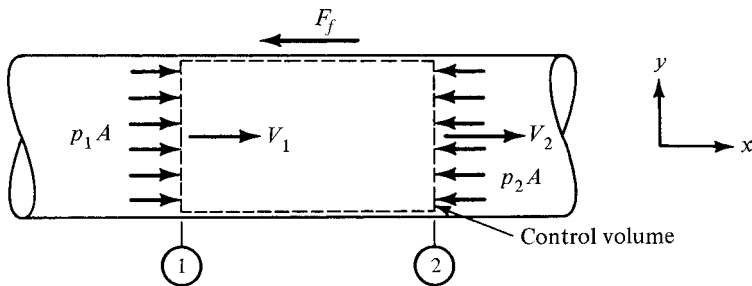


Figure 9.4 Momentum analysis for Fanno flow.

$$(p_1 - p_2)A - F_f = \frac{\dot{m}}{g_c}(V_2 - V_1) = \frac{\rho AV}{g_c}(V_2 - V_1) \quad (9.15)$$

Show that equation (9.15) can be written as

$$p_1 - p_2 - \frac{F_f}{A} = \frac{\rho_2 V_2^2}{g_c} - \frac{\rho_1 V_1^2}{g_c} \quad (9.16)$$

or

$$\boxed{\left(p_1 + \frac{\rho_1 V_1^2}{g_c} \right) - \frac{F_f}{A} = p_2 + \frac{\rho_2 V_2^2}{g_c}} \quad (9.17)$$

In this form the equation is not particularly useful except to bring out one significant fact. *For the steady, one-dimensional, constant-area flow of any fluid*, the value of $p + \rho V^2/g_c$ cannot be constant if frictional forces are present. This fact will be recalled later in the chapter when Fanno flow is compared with normal shocks.

Before leaving this section on fluids in general, we might say a few words about Fanno flow at low Mach numbers. A glance at Figure 9.3 shows that the upper branch is asymptotically approaching the horizontal line of constant total enthalpy. Thus the extreme left end of the Fanno line will be nearly horizontal. This indicates that flow at very low Mach numbers will have almost constant velocity. This checks our previous work, which indicated that we could treat gases as incompressible fluids if the Mach numbers were very small.

9.4 WORKING EQUATIONS FOR PERFECT GASES

We have discovered the general trend of property variations that occur in Fanno flow, both in the subsonic and supersonic flow regime. Now we wish to develop some specific working equations for the case of a perfect gas. Recall that these are relations between properties at arbitrary sections of a flow system written in terms of Mach numbers and the specific heat ratio.

Energy

We start with the energy equation developed in Section 9.3 since this leads immediately to a temperature ratio:

$$h_{t1} = h_{t2} \quad (9.3)$$

But for a perfect gas, enthalpy is a function of temperature only. Therefore,

$$T_{t1} = T_{t2} \quad (9.18)$$

Now for a perfect gas with constant specific heats,

$$T_t = T \left(1 + \frac{\gamma - 1}{2} M^2 \right) \quad (4.18)$$

Hence the energy equation for Fanno flow can be written as

$$T_1 \left(1 + \frac{\gamma - 1}{2} M_1^2 \right) = T_2 \left(1 + \frac{\gamma - 1}{2} M_2^2 \right) \quad (9.19)$$

or

$$\boxed{\frac{T_2}{T_1} = \frac{1 + [(\gamma - 1)/2]M_1^2}{1 + [(\gamma - 1)/2]M_2^2}} \quad (9.20)$$

Continuity

From Section 9.3 we have

$$\rho V = G = \text{const} \quad (9.2)$$

or

$$\rho_1 V_1 = \rho_2 V_2 \quad (9.21)$$

If we introduce the perfect gas equation of state

$$p = \rho RT \quad (1.13)$$

the definition of Mach number

$$V = Ma \quad (4.11)$$

and sonic velocity for a perfect gas

$$a = \sqrt{\gamma g_c RT} \quad (4.10)$$

equation (9.21) can be solved for

$$\frac{p_2}{p_1} = \frac{M_1}{M_2} \left(\frac{T_2}{T_1} \right)^{1/2} \quad (9.22)$$

Can you obtain this expression? Now introduce the temperature ratio from (9.20) and you will have the following working relation for static pressure:

$$\frac{p_2}{p_1} = \frac{M_1}{M_2} \left(\frac{1 + [(\gamma - 1)/2]M_1^2}{1 + [(\gamma - 1)/2]M_2^2} \right)^{1/2} \quad (9.23)$$

The density relation can easily be obtained from equation (9.20), (9.23), and the perfect gas law:

$$\frac{\rho_2}{\rho_1} = \frac{M_1}{M_2} \left(\frac{1 + [(\gamma - 1)/2]M_2^2}{1 + [(\gamma - 1)/2]M_1^2} \right)^{1/2} \quad (9.24)$$

Entropy Change

We start with an expression for entropy change that is valid between any two points:

$$\Delta s_{1-2} = c_p \ln \frac{T_2}{T_1} - R \ln \frac{p_2}{p_1} \quad (1.53)$$

Equation (4.15) can be used to substitute for c_p and we nondimensionalize the equation to

$$\frac{s_2 - s_1}{R} = \frac{\gamma}{\gamma - 1} \ln \frac{T_2}{T_1} - \ln \frac{p_2}{p_1} \quad (9.25)$$

If we now utilize the expressions just developed for the temperature ratio (9.20) and the pressure ratio (9.23), the entropy change becomes

$$\begin{aligned} \frac{s_2 - s_1}{R} &= \frac{\gamma}{\gamma - 1} \ln \left(\frac{1 + [(\gamma - 1)/2]M_1^2}{1 + [(\gamma - 1)/2]M_2^2} \right) \\ &\quad - \ln \frac{M_1}{M_2} \left(\frac{1 + [(\gamma - 1)/2]M_1^2}{1 + [(\gamma - 1)/2]M_2^2} \right)^{1/2} \end{aligned} \quad (9.26)$$

Show that this entropy change between two points in Fanno flow can be written as

$$\frac{s_2 - s_1}{R} = \ln \frac{M_2}{M_1} \left(\frac{1 + [(\gamma - 1)/2]M_1^2}{1 + [(\gamma - 1)/2]M_2^2} \right)^{(\gamma+1)/2(\gamma-1)} \quad (9.27)$$

Now recall that in Section 4.5 we integrated the stagnation pressure–energy equation for adiabatic no-work flow of a perfect gas, with the result

$$\frac{P_{t2}}{P_{t1}} = e^{-\Delta s/R} \quad (4.28)$$

Thus, from equations (4.28) and (9.27) we obtain a simple expression for the stagnation pressure ratio:

$$\boxed{\frac{p_{t2}}{p_{t1}} = \frac{M_1}{M_2} \left(\frac{1 + [(\gamma - 1)/2]M_2^2}{1 + [(\gamma - 1)/2]M_1^2} \right)^{(\gamma+1)/2(\gamma-1)}} \quad (9.28)$$

We now have the means to obtain all the properties at a downstream point 2 if we know all the properties at some upstream point 1 *and* the Mach number at point 2. However, in many situations one does not know both Mach numbers. A typical problem would be to predict the final Mach number, given the initial conditions and information on duct length, material, and so on. Thus our next job is to relate the change in Mach number to the friction losses.

Momentum

We turn to the differential form of the momentum equation that was developed in Chapter 3:

$$\frac{dp}{\rho} + f \frac{V^2 dx}{2g_c D_e} + \frac{g}{g_c} dz + \frac{dV^2}{2g_c} = 0 \quad (3.63)$$

Our objective is to get this equation all in terms of Mach number. If we introduce the perfect gas equation of state together with expressions for Mach number and sonic velocity, we obtain

$$\frac{dp}{p}(RT) + f \frac{dx}{D_e} \frac{M^2 \gamma g_c RT}{2g_c} + \frac{g}{g_c} dz + \frac{dM^2 \gamma g_c RT + M^2 \gamma g_c R dT}{2g_c} = 0 \quad (9.29)$$

or

$$\boxed{\frac{dp}{p} + f \frac{dx}{D_e} \frac{\gamma}{2} M^2 + \frac{g dz}{g_c RT} + \frac{\gamma}{2} dM^2 + \frac{\gamma}{2} M^2 \frac{dT}{T} = 0} \quad (9.30)$$

Equation (9.30) is boxed since it is a useful form of the momentum equation that is valid for *all* steady flow problems involving a perfect gas. We now proceed to apply this to Fanno flow. From (9.18) and (4.18) we know that

$$T_t = T \left(1 + \frac{\gamma - 1}{2} M^2 \right) = \text{const} \quad (9.31)$$

Taking the natural logarithm

$$\ln T + \ln \left(1 + \frac{\gamma - 1}{2} M^2 \right) = \ln \text{const} \quad (9.32)$$

and then differentiating, we obtain

$$\frac{dT}{T} + \frac{d(1 + [(\gamma - 1)/2]M^2)}{1 + [(\gamma - 1)/2]M^2} = 0 \quad (9.33)$$

which can be used to substitute for dT/T in (9.30).

The continuity relation [equation (9.2)] put in terms of a perfect gas becomes

$$\frac{pM}{\sqrt{T}} = \text{const} \quad (9.34)$$

By logarithmic differentiation (take the natural logarithm and then differentiate) *show* that

$$\frac{dp}{p} + \frac{dM}{M} - \frac{1}{2} \frac{dT}{T} = 0 \quad (9.35)$$

We can introduce equation (9.33) to eliminate dT/T , with the result that

$$\frac{dp}{p} = -\frac{dM}{M} - \frac{1}{2} \frac{d(1 + [(\gamma - 1)/2]M^2)}{1 + [(\gamma - 1)/2]M^2} \quad (9.36)$$

which can be used to substitute for dp/p in (9.30).

Make the indicated substitutions for dp/p and dT/T in the momentum equation, neglect the potential term, and *show* that equation (9.30) can be put into the following form:

$$\begin{aligned} f \frac{dx}{D_e} &= \frac{d(1 + [(\gamma - 1)/2]M^2)}{1 + [(\gamma - 1)/2]M^2} - \frac{dM^2}{M^2} + \frac{2}{\gamma} \frac{dM}{M^3} \\ &+ \frac{1}{\gamma M^2} \frac{d(1 + [(\gamma - 1)/2]M^2)}{1 + [(\gamma - 1)/2]M^2} \end{aligned} \quad (9.37)$$

The last term can be simplified for integration by noting that

$$\begin{aligned} \frac{1}{\gamma M^2} \frac{d(1 + [(\gamma - 1)/2]M^2)}{1 + [(\gamma - 1)/2]M^2} &= \frac{(\gamma - 1)}{2\gamma} \frac{dM^2}{M^2} \\ &- \frac{(\gamma - 1)}{2\gamma} \frac{d(1 + [(\gamma - 1)/2]M^2)}{1 + [(\gamma - 1)/2]M^2} \end{aligned} \quad (9.38)$$

The momentum equation can now be written as

$$f \frac{dx}{D_e} = \frac{\gamma + 1}{2\gamma} \frac{d(1 + [(\gamma - 1)/2]M^2)}{1 + [(\gamma - 1)/2]M^2} + \frac{2}{\gamma} \frac{dM}{M^3} - \frac{\gamma + 1}{2\gamma} \frac{dM^2}{M^2} \quad (9.39)$$

Equation (9.39) is restricted to steady, one-dimensional flow of a perfect gas, with no heat or work transfer, constant area, and negligible potential changes. We can now integrate this equation between two points in the flow and obtain

$$\boxed{\frac{f(x_2 - x_1)}{D_e} = \frac{\gamma + 1}{2\gamma} \ln \frac{1 + [(\gamma - 1)/2]M_2^2}{1 + [(\gamma - 1)/2]M_1^2} - \frac{1}{\gamma} \left(\frac{1}{M_2^2} - \frac{1}{M_1^2} \right) - \frac{\gamma + 1}{2\gamma} \ln \frac{M_2^2}{M_1^2}} \quad (9.40)$$

Note that in performing the integration we have held the friction factor constant. Some comments will be made on this in a later section. If you have forgotten the concept of equivalent diameter, you may want to review the last part of Section 3.8 and equation (3.61).

9.5 REFERENCE STATE AND FANNO TABLE

The equations developed in Section 9.4 provide the means of computing the properties at one location in terms of those given at some other location. The key to problem solution is predicting the Mach number at the new location through the use of equation (9.40). The solution of this equation for the unknown M_2 presents a messy task, as no explicit relation is possible. Thus we turn to a technique similar to that used with isentropic flow in Chapter 5.

We introduce *another* * reference state, which is defined in the same manner as before (i.e., “that thermodynamic state which would exist if the fluid reached a Mach number of unity *by a particular process*”). In this case we imagine that we continue *by Fanno flow* (i.e., more duct is added) until the velocity reaches Mach 1. Figure 9.5 shows a physical system together with its T - s diagram for a subsonic Fanno flow. We know that if we continue along the Fanno line (remember that we always move to the right), we will eventually reach the limiting point where sonic velocity exists. The dashed lines show a hypothetical duct of sufficient length to enable the flow to traverse the remaining portion of the upper branch and reach the limit point. This is the * reference point *for Fanno flow*.

The *isentropic* * reference points have also been included on the T - s diagram to emphasize the fact that the Fanno * reference is a totally different thermodynamic state. One other fact should be mentioned. If there is any entropy difference between two points (such as points 1 and 2), their isentropic * reference conditions are not the same and we have always taken great care to label them separately as 1* and 2*.

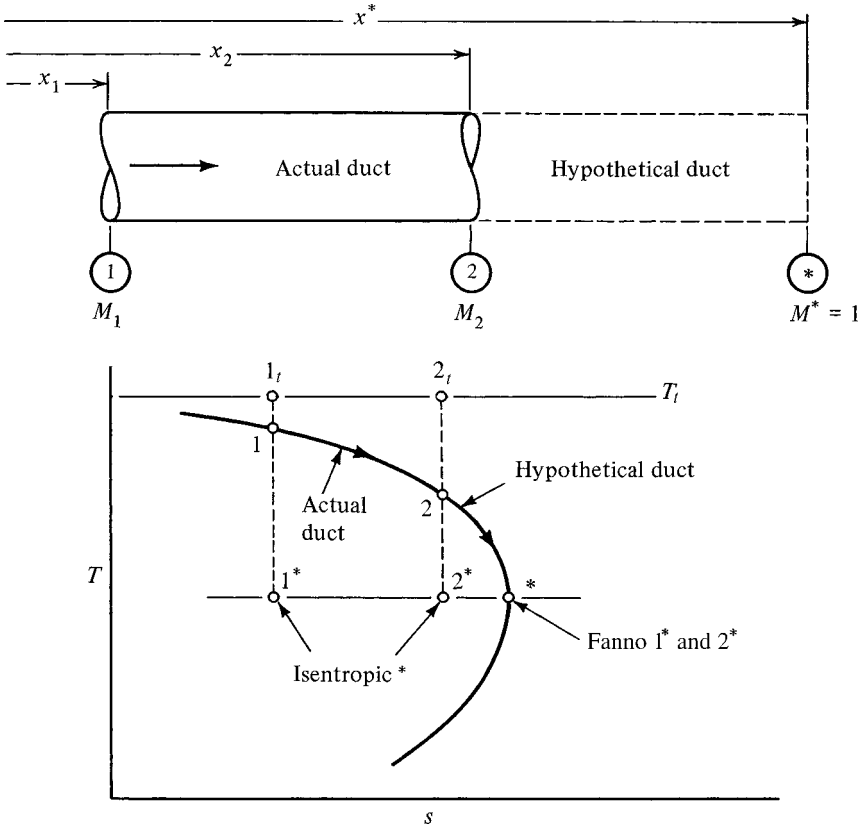


Figure 9.5 The * reference for Fanno flow.

However, proceeding from either point 1 or point 2 by *Fanno flow* will ultimately lead to the same place when Mach 1 is reached. Thus we do not have to talk of 1* or 2* but merely * in the case of Fanno flow. Incidentally, why are all three * reference points shown on the same horizontal line in Figure 9.5? (You may need to review Section 4.6.)

We now rewrite the working equations in terms of the Fanno flow * reference condition. Consider first

$$\frac{T_2}{T_1} = \frac{1 + [(\gamma - 1)/2]M_1^2}{1 + [(\gamma - 1)/2]M_2^2} \tag{9.20}$$

Let point 2 be an arbitrary point in the flow system and let its Fanno * condition be point 1. Then

$$\begin{aligned} T_2 &\Rightarrow T & M_2 &\Rightarrow M \quad (\text{any value}) \\ T_1 &\Rightarrow T^* & M_1 &\Rightarrow 1 \end{aligned}$$

and equation (9.20) becomes

$$\frac{T}{T^*} = \frac{(\gamma + 1)/2}{1 + [(\gamma - 1)/2]M^2} = f(M, \gamma) \tag{9.41}$$

We see that $T/T^* = f(M, \gamma)$ and we can easily construct a table giving values of T/T^* versus M for a particular γ . Equation (9.23) can be treated in a similar fashion. In this case

$$\begin{aligned} p_2 &\Rightarrow p & M_2 &\Rightarrow M \quad (\text{any value}) \\ p_1 &\Rightarrow p^* & M_1 &\Rightarrow 1 \end{aligned}$$

and equation (9.23) becomes

$$\frac{p}{p^*} = \frac{1}{M} \left(\frac{(\gamma + 1)/2}{1 + [(\gamma - 1)/2]M^2} \right)^{1/2} = f(M, \gamma) \tag{9.42}$$

The density ratio can be obtained as a function of Mach number and γ from equation (9.24). This is particularly useful since it also represents a velocity ratio. Why?

$$\frac{\rho}{\rho^*} = \frac{V^*}{V} = \frac{1}{M} \left(\frac{1 + [(\gamma - 1)/2]M^2}{(\gamma + 1)/2} \right)^{1/2} = f(M, \gamma) \tag{9.43}$$

Apply the same techniques to equation (9.28) and *show* that

$$\frac{p_t}{p_t^*} = \frac{1}{M} \left(\frac{1 + [(\gamma - 1)/2]M^2}{(\gamma + 1)/2} \right)^{(\gamma+1)/2(\gamma-1)} = f(M, \gamma) \tag{9.44}$$

We now perform the same type of transformation on equation (9.40); that is, let

$$\begin{aligned} x_2 &\Rightarrow x & M_2 &\Rightarrow M \quad (\text{any value}) \\ x_1 &\Rightarrow x^* & M_1 &\Rightarrow 1 \end{aligned}$$

with the following result:

$$\begin{aligned} \frac{f(x - x^*)}{D_e} &= \left(\frac{\gamma + 1}{2\gamma} \right) \ln \left(\frac{1 + [(\gamma - 1)/2]M^2}{(\gamma + 1)/2} \right) \\ &\quad - \frac{1}{\gamma} \left(\frac{1}{M^2} - 1 \right) - \frac{\gamma + 1}{2\gamma} \ln M^2 \end{aligned} \tag{9.45}$$

But a glance at the physical diagram in Figure 9.5 shows that $(x^* - x)$ will always be a negative quantity; thus it is more convenient to change all signs in equation (9.45) and simplify it to

$$\frac{f(x^* - x)}{D_e} = \left(\frac{\gamma + 1}{2\gamma}\right) \ln\left(\frac{[(\gamma + 1)/2]M^2}{1 + [(\gamma - 1)/2]M^2}\right) + \frac{1}{\gamma}\left(\frac{1}{M^2} - 1\right) = f(M, \gamma) \tag{9.46}$$

The quantity $(x^* - x)$ represents the amount of duct that would have to be added to cause the flow to reach the Fanno * reference condition. It can alternatively be viewed as the maximum duct length that may be added without changing some flow condition. Thus the expression

$$\frac{f(x^* - x)}{D_e} \text{ is called } \frac{fL_{\max}}{D_e}$$

and is listed in Appendix I along with the other Fanno flow parameters: T/T^* , p/p^* , V/V^* , and p_t/p_t^* . In the next section we shall see how this table greatly simplifies the solution of Fanno flow problems. But first, some words about the determination of friction factors.

Dimensional analysis of the fluid flow problem shows that the friction factor can be expressed as

$$f = f(\text{Re}, \varepsilon/D) \tag{9.47}$$

where Re is the *Reynolds number*,

$$\text{Re} \equiv \frac{\rho VD}{\mu g_c} \tag{9.48}$$

and

$$\varepsilon/D \equiv \text{relative roughness}$$

Typical values of ε , the *absolute roughness* or average height of wall irregularities, are shown in Table 9.2.

The relationship among f , Re , and ε/D is determined experimentally and plotted on a chart similar to Figure 9.6, which is called a *Moody diagram*. A larger working chart appears in Appendix C. If the flow rate is known together with the duct size and

Table 9.2 Absolute Roughness of Common Materials

Material	ε (ft)
Glass, brass, copper, lead	smooth < 0.00001
Steel, wrought iron	0.00015
Galvanized iron	0.0005
Cast iron	0.00085
Riveted steel	0.03

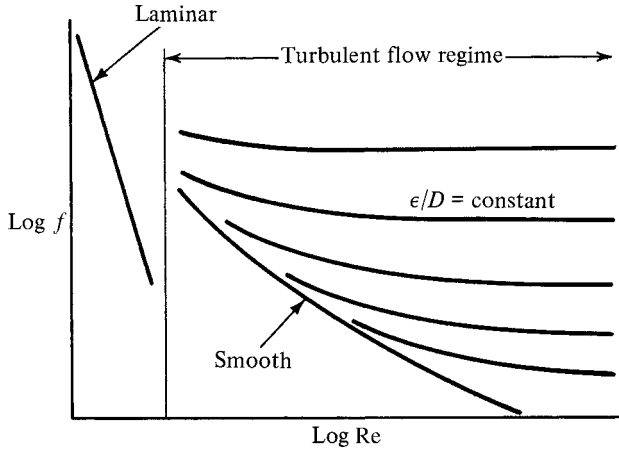


Figure 9.6 Moody diagram for friction factor in circular ducts. (See Appendix C for working chart.)

material, the Reynolds number and relative roughness can easily be calculated and the value of the friction factor is taken from the diagram. The curve in the laminar flow region can be represented by

$$f = \frac{64}{\text{Re}} \quad (9.49)$$

For noncircular cross sections the *equivalent diameter* as described in Section 3.8 can be used.

$$D_e \equiv \frac{4A}{P} \quad (3.61)$$

This equivalent diameter may be used in the determination of relative roughness and Reynolds number, and hence the friction factor. However, care must be taken to work with the *actual* average velocity in all computations. Experience has shown that the use of an equivalent diameter works quite well in the turbulent zone. In the laminar flow region this concept is not sufficient and consideration must also be given to the aspect ratio of the duct.

In some problems the flow rate is not known and thus a trial-and-error solution results. As long as the duct size is given, the problem is not too difficult; an excellent approximation to the friction factor can be made by taking the value corresponding to where the ϵ/D curve begins to *level off*. This converges rapidly to the final answer, as most engineering problems are well into the turbulent range.

9.6 APPLICATIONS

The following steps are recommended to develop good problem-solving technique:

1. Sketch the physical situation (including the hypothetical * reference point).
2. Label sections where conditions are known or desired.
3. List all given information with units.
4. Compute the equivalent diameter, relative roughness, and Reynolds number.
5. Find the friction factor from the Moody diagram.
6. Determine the unknown Mach number.
7. Calculate the additional properties desired.

The procedure above may have to be altered depending on what type of information is given, and occasionally, trial-and-error solutions are required. You should have no difficulty incorporating these features once the basic straightforward solution has been mastered. In complicated flow systems that involve more than just Fanno flow, a $T-s$ diagram is frequently helpful in solving problems.

For the following examples we are dealing with the steady one-dimensional flow of air ($\gamma = 1.4$), which can be treated as a perfect gas. Assume that $Q = W_s = 0$ and negligible potential changes. The cross-sectional area of the duct remains constant. Figure E9.1 is common to Examples 9.1 through 9.3.

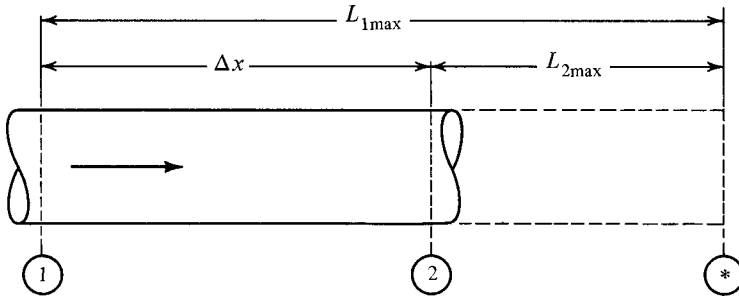


Figure E9.1

Example 9.1 Given $M_1 = 1.80$, $p_1 = 40$ psia, and $M_2 = 1.20$, find p_2 and $f\Delta x/D$.
 Since both Mach numbers are known, we can solve immediately for

$$p_2 = \frac{p_2}{p^*} \frac{p^*}{p_1} p_1 = (0.8044) \left(\frac{1}{0.4741} \right) (40) = 67.9 \text{ psia}$$

Check Figure E9.1 to see that

$$\frac{f\Delta x}{D} = \frac{fL_{1max}}{D} - \frac{fL_{2max}}{D} = 0.2419 - 0.0336 = 0.208$$

Example 9.2 Given $M_2 = 0.94$, $T_1 = 400$ K, and $T_2 = 350$ K, find M_1 and p_2/p_1 .
 To determine conditions at section 1 in Figure E9.1, we must establish the ratio

$$\frac{T_1}{T^*} = \frac{T_1}{T_2} \frac{T_2}{T^*} = \left(\frac{400}{350} \right) (1.0198) = 1.1655$$

\uparrow From Fanno table at $M = 0.94$
 \uparrow Given

Look up $T/T^* = 1.1655$ in the Fanno table (Appendix I) and determine that $M_1 = 0.385$. Thus

$$\frac{p_2}{p_1} = \frac{p_2}{p^*} \frac{p^*}{p_1} = (1.0743) \left(\frac{1}{2.8046} \right) = 0.383$$

Notice that these examples confirm previous statements concerning static pressure changes. In subsonic flow the static pressure decreases, whereas in supersonic flow the static pressure increases. *Compute* the stagnation pressure ratio and show that the friction losses cause p_{t2}/p_{t1} to decrease in each case.

For Example 9.1:

$$\frac{p_{t2}}{p_{t1}} = \quad (p_{t2}/p_{t1} = 0.716)$$

For Example 9.2:

$$\frac{p_{t2}}{p_{t1}} = \quad (p_{t2}/p_{t1} = 0.611)$$

Example 9.3 Air flows in a 6-in.-diameter, insulated, galvanized iron duct. Initial conditions are $p_1 = 20$ psia, $T_1 = 70^\circ\text{F}$, and $V_1 = 406$ ft/sec. After 70 ft, determine the final Mach number, temperature, and pressure.

Since the duct is circular we do not have to compute an equivalent diameter. From Table 9.2 the absolute roughness ε is 0.0005. Thus the relative roughness

$$\frac{\varepsilon}{D} = \frac{0.0005}{0.5} = 0.001$$

We compute the Reynolds number at section 1 (Figure E9.1) since this is the only location where information is known.

$$\rho_1 = \frac{p_1}{RT_1} = \frac{(20)(144)}{(53.3)(530)} = 0.102 \text{ lbm/ft}^3$$

$$\mu_1 = 3.8 \times 10^{-7} \text{ lbf-sec/ft}^2 \text{ (from table in Appendix A)}$$

Thus

$$\text{Re}_1 = \frac{\rho_1 V_1 D_1}{\mu_1 g_c} = \frac{(0.102)(406)(0.5)}{(3.8 \times 10^{-7})(32.2)} = 1.69 \times 10^6$$

From the Moody diagram (in Appendix C) at $\text{Re} = 1.69 \times 10^6$ and $\varepsilon/D = 0.001$, we determine that the friction factor is $f = 0.0198$. To use the Fanno table (or equations), we need information on Mach numbers.

$$a_1 = (\gamma g_c R T_1)^{1/2} = [(1.4)(32.2)(53.3)(530)]^{1/2} = 1128 \text{ ft/sec}$$

$$M_1 = \frac{V_1}{a_1} = \frac{406}{1128} = 0.36$$

From the Fanno table (Appendix I) at $M_1 = 0.36$, we find that

$$\frac{p_1}{p^*} = 3.0042 \quad \frac{T_1}{T^*} = 1.1697 \quad \frac{fL_{1 \max}}{D} = 3.1801$$

The key to completing the problem is in establishing the Mach number at the outlet, and this is done through the *friction length*:

$$\frac{f \Delta x}{D} = \frac{(0.0198)(70)}{0.5} = 2.772$$

Looking at the physical sketch it is apparent (since f and D are constants) that

$$\frac{fL_{2 \max}}{D} = \frac{fL_{1 \max}}{D} - \frac{f \Delta x}{D} = 3.1801 - 2.772 = 0.408$$

We enter the Fanno table with this friction length and find that

$$M_2 = 0.623 \quad \frac{p_2}{p^*} = 1.6939 \quad \frac{T_2}{T^*} = 1.1136$$

Thus

$$p_2 = \frac{p_2}{p^*} \frac{p^*}{p_1} p_1 = (1.6939) \left(\frac{1}{3.0042} \right) (20) = 11.28 \text{ psia}$$

and

$$T_2 = \frac{T_2}{T^*} \frac{T^*}{T_1} T_1 = (1.1136) \left(\frac{1}{1.1697} \right) (530) = 505^\circ\text{R}$$

In the example above, the friction factor was assumed constant. In fact, this assumption was made when equation (9.39) was integrated to obtain (9.40), and with the introduction of the * reference state, this became equation (9.46), which is listed in the Fanno table. Is this a reasonable assumption? Friction factors are functions of Reynolds numbers, which in turn depend on velocity and density—both of which can change quite rapidly in Fanno flow. Calculate the velocity at the outlet in Example 9.3 and compare it with that at the inlet. ($V_2 = 686 \text{ ft/sec}$ and $V_1 = 406 \text{ ft/sec}$.)

But don't despair. From continuity we know that the product of ρV is always a constant, and thus the only variable in Reynolds number is the viscosity. Extremely large temperature variations are required to change the viscosity of a gas significantly, and thus variations in the Reynolds number are small for any given problem. We are also fortunate in that most engineering problems are well into the turbulent range where the friction factor is relatively insensitive to Reynolds number. A greater potential error is involved in the estimation of the duct roughness, which has a more significant effect on the friction factor.

Example 9.4 A converging–diverging nozzle with an area ratio of 5.42 connects to an 8-ft-long constant-area rectangular duct (see Figure E9.4). The duct is 8×4 in. in cross section and has a friction factor of $f = 0.02$. What is the minimum stagnation pressure feeding the nozzle if the flow is supersonic throughout the entire duct and it exhausts to 14.7 psia?

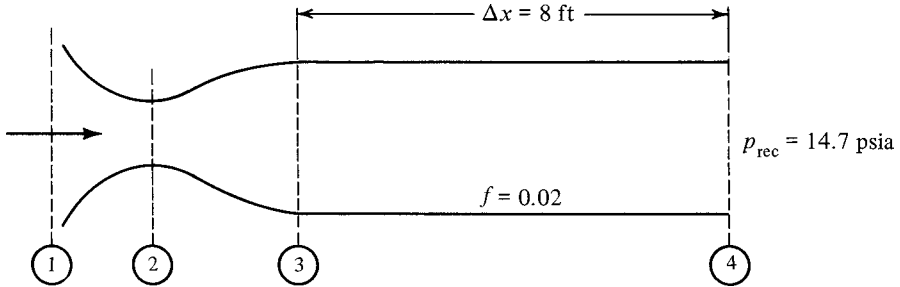


Figure E9.4

$$D_e = \frac{4A}{P} = \frac{(4)(32)}{24} = 5.334 \text{ in.}$$

$$\frac{f \Delta x}{D} = \frac{(0.02)(8)(12)}{5.334} = 0.36$$

To be supersonic with $A_3/A_2 = 5.42$, $M_3 = 3.26$, $p_3/p_{t3} = 0.0185$, $p_3/p^* = 0.1901$, and $fL_{3 \max}/D = 0.5582$,

$$\frac{fL_{4 \max}}{D} = \frac{fL_{3 \max}}{D} - \frac{f \Delta x}{D} = 0.5582 - 0.36 = 0.1982$$

Thus

$$M_4 = 1.673 \quad \text{and} \quad \frac{p_4}{p^*} = 0.5243$$

and

$$p_{t1} = \frac{p_{t1}}{p_{t3}} \frac{p_{t3}}{p_3} \frac{p_3}{p^*} \frac{p^*}{p_4} p_4 = (1) \left(\frac{1}{0.0185} \right) (0.1901) \left(\frac{1}{0.5243} \right) (14.7) = 228 \text{ psia}$$

Any pressure above 288 psia will maintain the flow system as specified but with expansion waves outside the duct. (Recall an underexpanded nozzle.) Can you envision what would happen if the inlet stagnation pressure fell below 288 psia? (Recall the operation of an over-expanded nozzle.)

9.7 CORRELATION WITH SHOCKS

As you have progressed through this chapter you may have noticed some similarities between Fanno flow and normal shocks. Let us summarize some pertinent information.

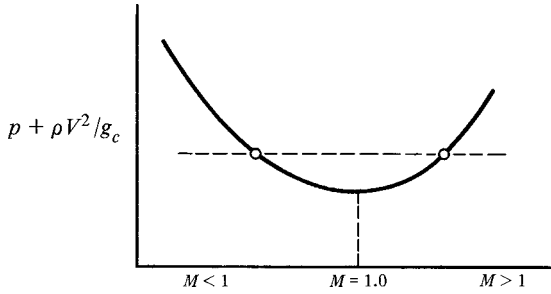


Figure 9.7 Variation of $p + \rho V^2/g_c$ in Fanno flow.

The points just before and after a normal shock represent states with the same mass flow per unit area, the same value of $p + \rho V^2/g_c$, and the same stagnation enthalpy. These facts are the result of applying the basic concepts of continuity, momentum, and energy to any arbitrary fluid. This analysis resulted in equations (6.2), (6.3), and (6.9).

A Fanno line represents states with the same mass flow per unit area and the same stagnation enthalpy. This is confirmed by equations (9.2) and (9.5). To move *along* a Fanno line requires friction. At the end of Section 9.3 [see equation (9.17)] it was pointed out that it is this very friction which causes the value of $p + \rho V^2/g_c$ to change.

The variation of the quantity $p + \rho V^2/g_c$ along a Fanno line is quite interesting. Such a plot is shown in Figure 9.7. You will notice that for every point on the supersonic branch of the Fanno line there is a corresponding point on the subsonic branch with the same value of $p + \rho V^2/g_c$. Thus these two points satisfy all three conditions for the end points of a normal shock and could be connected by such a shock.

Now we can imagine a supersonic Fanno flow leading into a normal shock. If this is followed by additional duct, subsonic Fanno flow would occur. Such a situation is shown in Figure 9.8a. Note that the shock merely causes the flow to jump from the supersonic branch to the subsonic branch of the *same* Fanno line. [See Figure 9.8b.]

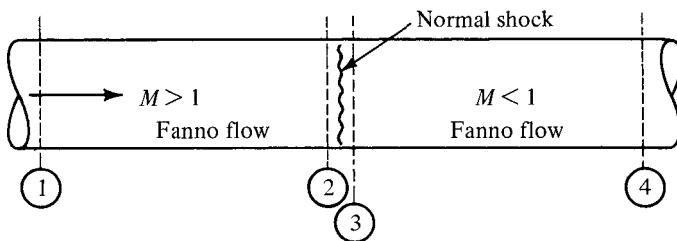


Figure 9.8a Combination of Fanno flow and normal shock (physical system).

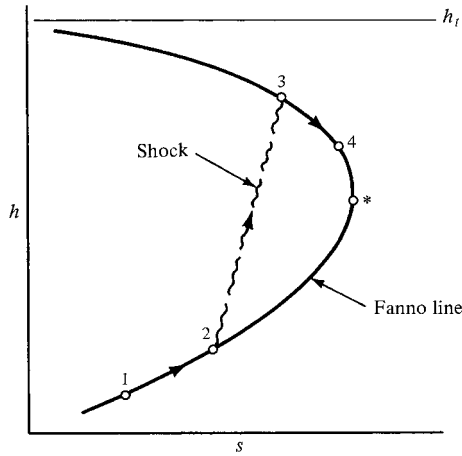


Figure 9.8b Combination of Fanno flow and normal shock.

Example 9.5 A large chamber contains air at a temperature of 300 K and a pressure of 8 bar abs (Figure E9.5). The air enters a converging–diverging nozzle with an area ratio of 2.4. A constant-area duct is attached to the nozzle and a normal shock stands at the exit plane. Receiver pressure is 3 bar abs. Assume the entire system to be adiabatic and neglect friction in the nozzle. Compute the $f \Delta x/D$ for the duct.

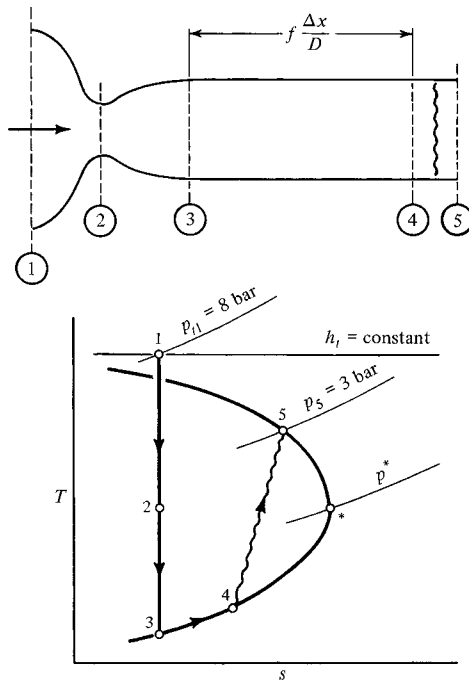


Figure E9.5

For a shock to occur as specified, the duct flow must be supersonic, which means that the nozzle is operating at its third critical point. The inlet conditions and nozzle area ratio fix conditions at location 3. We can then find p^* at the tip of the Fanno line. Then the ratio p_5/p^* can be computed and the Mach number after the shock is found from the Fanno table. This solution probably would not have occurred to us had we not drawn the $T-s$ diagram and recognized that point 5 is on the same Fanno line as 3, 4, and *.

For $A_3/A_2 = 2.4$, $M_3 = 2.4$ and $p_3/p_{t3} = 0.06840$. We proceed immediately to compute p_5/p^* :

$$\frac{p_5}{p^*} = \frac{p_5}{p_{t1}} \frac{p_{t1}}{p_{t3}} \frac{p_{t3}}{p_3} \frac{p_3}{p^*} = \left(\frac{3}{8}\right) (1) \left(\frac{1}{0.0684}\right) (0.3111) = 1.7056$$

From the Fanno table we find that $M_5 = 0.619$, and then from the shock table, $M_4 = 1.789$. Returning to the Fanno table, $fL_{3\max}/D = 0.4099$ and $fL_{4\max}/D = 0.2382$. Thus

$$\frac{f \Delta x}{D} = \frac{fL_{3\max}}{D} - \frac{fL_{4\max}}{D} = 0.4099 - 0.2382 = 0.172$$

9.8 FRICTION CHOKING

In Chapter 5 we discussed the operation of nozzles that were fed by constant stagnation inlet conditions (see Figures 5.6 and 5.8). We found that as the receiver pressure was lowered, the flow through the nozzle increased. When the *operating pressure ratio* reached a certain value, the section of minimum area developed a Mach number of unity. The nozzle was then said to be choked. Further reduction in the pressure ratio did not increase the flow rate. This was an example of *area choking*.

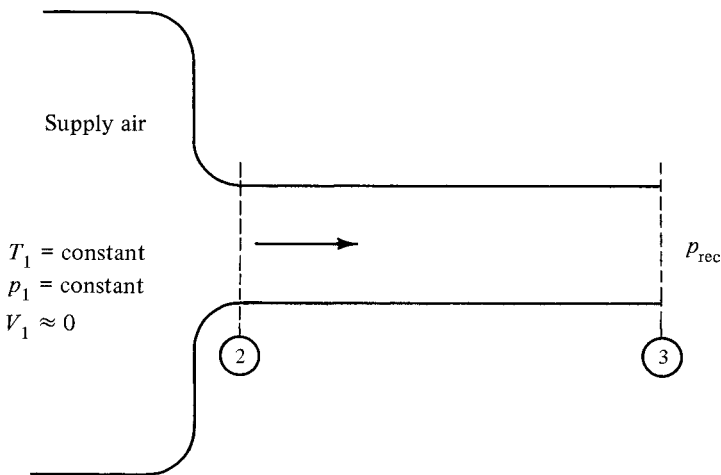


Figure 9.9 Converging nozzle and constant-area duct combination.

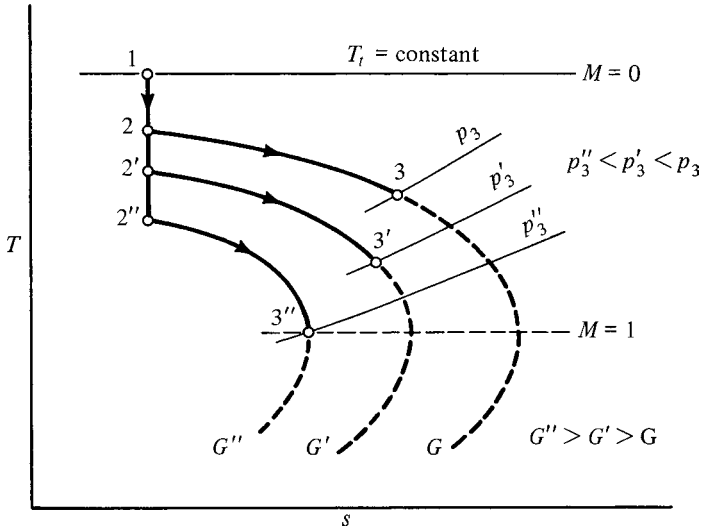


Figure 9.10 $T-s$ diagram for nozzle-duct combination.

The subsonic Fanno flow situation is quite similar. Figure 9.9 shows a given length of duct fed by a large tank and converging nozzle. If the receiver pressure is below the tank pressure, flow will occur, producing a $T-s$ diagram shown as path 1-2-3 in Figure 9.10. Note that we have isentropic flow at the entrance to the duct and then we move along a Fanno line. As the receiver pressure is lowered still more, the flow rate and exit Mach number continue to increase while the system moves to Fanno lines of higher mass velocities (shown as path 1-2'-3'). It is important to recognize that the receiver pressure (or more properly, the operating pressure ratio) is controlling the flow. This is because in subsonic flow the pressure at the duct exit must equal that of the receiver.

Eventually, when a certain pressure ratio is reached, the Mach number at the duct exit will be unity (shown as path 1-2''-3''). This is called *friction choking* and any further reduction in receiver pressure would not affect the flow conditions *inside* the system. What would occur as the flow leaves the duct and enters a region of reduced pressure?

Let us consider this last case of choked flow with the exit pressure equal to the receiver pressure. Now *suppose that the receiver pressure is maintained at this value* but more duct is added to the system. (Nothing can physically prevent us from doing this.) What happens? We know that we cannot move *around the Fanno line*, yet somehow we must reflect the added friction losses. This is done by moving to a new Fanno line at a *decreased* flow rate. The $T-s$ diagram for this is shown as path 1-2'''-3'''-4 in Figure 9.11. Note that pressure equilibrium is still maintained at the exit but

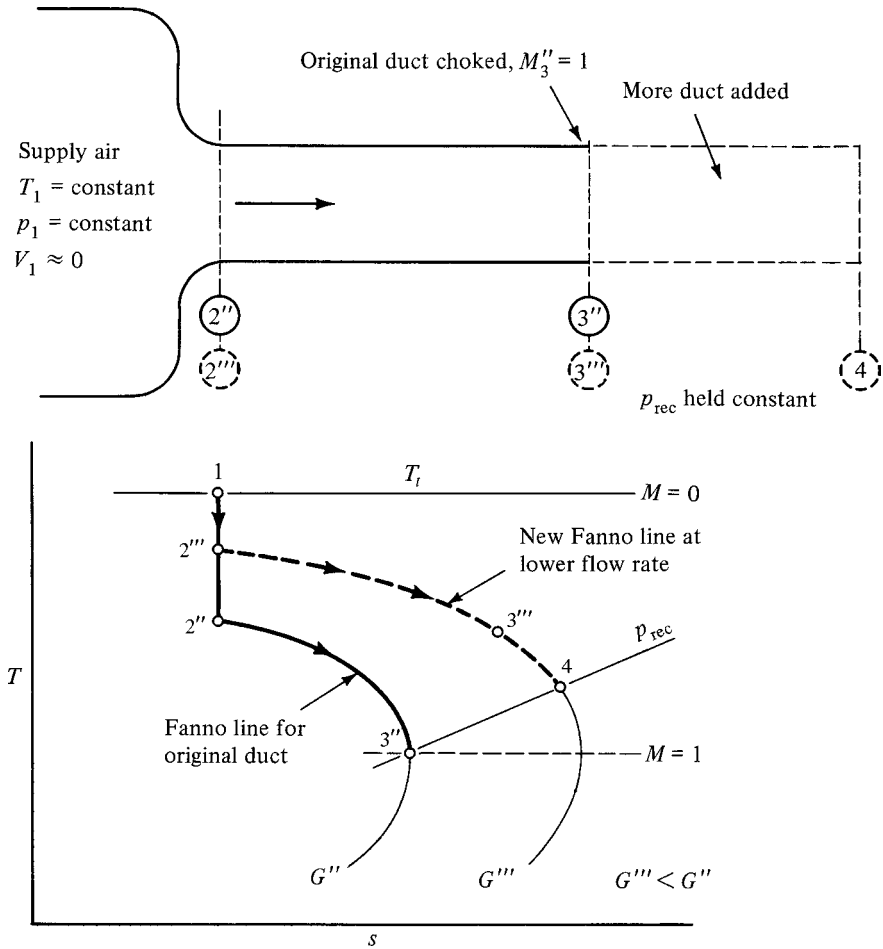


Figure 9.11 Addition of more duct when choked.

the system is no longer choked, although the flow rate has decreased. What would occur if the receiver pressure were now lowered?

In summary, when a *subsonic* Fanno flow has become *friction choked* and more duct is added to the system, the flow rate must decrease. Just how much it decreases and whether or not the exit velocity remains sonic depends on how much duct is added and the receiver pressure imposed on the system.

Now suppose that we are dealing with *supersonic* Fanno flow that is *friction choked*. In this case the addition of more duct causes a normal shock to form inside the duct. The resulting subsonic flow can accommodate the increased duct length at the same flow rate. For example, Figure 9.12 shows a Mach 2.18 flow that has an fL_{\max}/D value of 0.356. If a normal shock were to occur at this point, the Mach number after the shock would be about 0.550, which corresponds to an fL_{\max}/D

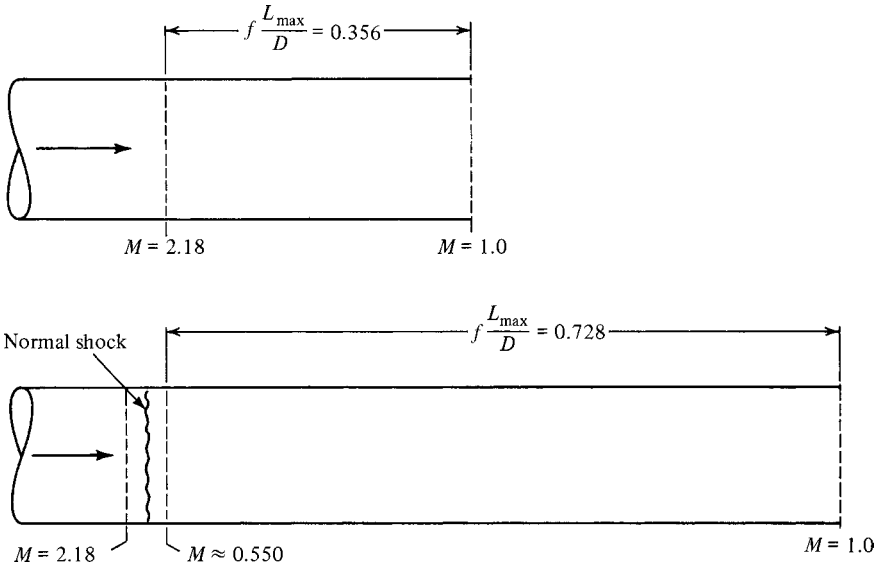


Figure 9.12 Influence of shock on maximum duct length.

value of 0.728. Thus, in this case, the appearance of the shock permits over twice the duct length to the choke point. This difference becomes even greater as higher Mach numbers are reached.

The shock location is determined by the amount of duct added. As more duct is added, the shock moves upstream and occurs at a higher Mach number. Eventually, the shock will move into that portion of the system that precedes the constant-area duct. (Most likely, a converging–diverging nozzle was used to produce the supersonic flow.) If sufficient friction length is added, the entire system will become subsonic and then the flow rate will decrease. Whether or not the exit velocity remains sonic will again depend on the receiver pressure.

9.9. WHEN γ IS NOT EQUAL TO 1.4

As indicated earlier, the Fanno flow table in Appendix I is for $\gamma = 1.4$. The behavior of fL_{\max}/D , the friction function, is given in Figure 9.13 for $\gamma = 1.13, 1.4, \text{ and } 1.67$ for Mach numbers up to $M = 5$. Here we can see that the dependence on γ is rather noticeable for $M \geq 1.4$. Thus, below this Mach number the tabulation in Appendix I may be used with little error for any γ . This means that for subsonic flows, where most Fanno flow problems occur, there is little difference between the various gases. The desired accuracy of results will govern how far you want to carry this approximation into the supersonic region.

Strictly speaking, these curves are only representative for cases where γ variations are *negligible within the flow*. However, they offer hints as to what magnitude of

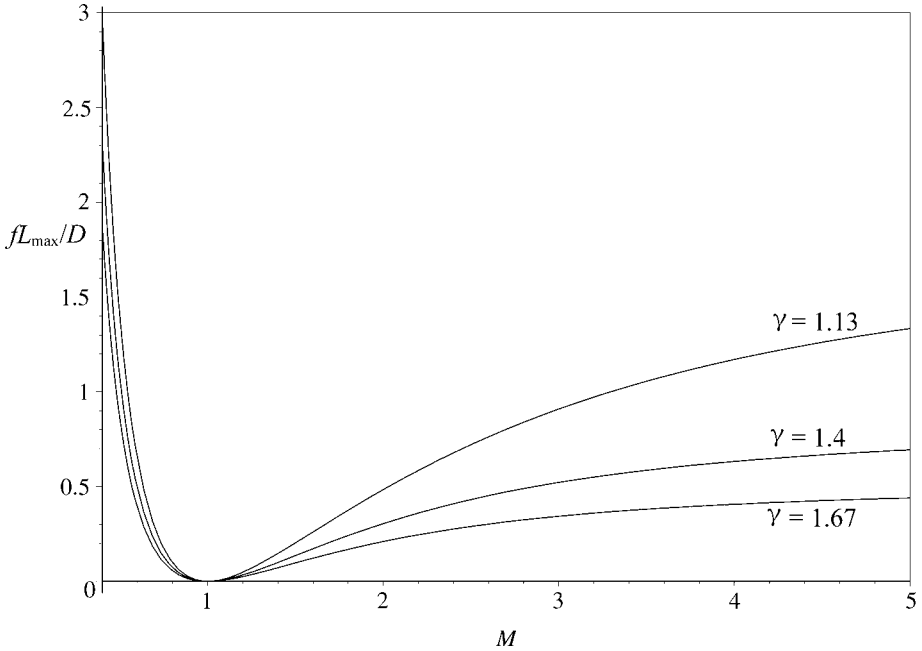


Figure 9.13 Fanno flow fL_{\max}/D versus Mach number for various values of γ .

changes are to be expected in other cases. Flows where γ variations are *not negligible within the flow* are treated in Chapter 11.

9.10 (OPTIONAL) BEYOND THE TABLES

As pointed out in Chapter 5, one can eliminate a lot of interpolation and get accurate answers for any ratio of the specific heats γ and/or any Mach number by using a computer utility such as MAPLE. This utility is useful in the evaluation of equation (9.46). Example 9.6 is one such application.

Example 9.6 Let us rework Example 9.3 without using the Fanno table. For $M_1 = 0.36$, calculate the value of fL_{\max}/D . The procedure follows equation (9.46):

$$\frac{f(x^* - x)}{D_e} = \left(\frac{\gamma + 1}{2\gamma} \right) \ln \frac{[(\gamma + 1)/2]M^2}{1 + [(\gamma - 1)/2]M^2} + \frac{1}{\gamma} \left(\frac{1}{M^2} - 1 \right) \quad (9.46)$$

Let

- $g \equiv \gamma$, a parameter (the ratio of specific heats)
- $X \equiv$ the independent variable (which in this case is M_1)
- $Y \equiv$ the dependent variable (which in this case is fL_{\max}/D)

Listed below are the precise inputs and program that you use in the computer.

```
[ > g := 1.4:    X := 0.36:
[ > Y := ((g + 1)/(2*g))*log(((g + 1)*(X^2)/2)/(1 +
    (g - 1)*(X^2) + (1/g)*((1/X^2) - 1));
    Y: = 3.180117523
```

We can proceed to find the Mach number at station 2. The new value of Y is $3.1801 - 2.772 = 0.408$. Now we use the same equation (9.46) but solve for M_2 as shown below. Note that since M is implicit in the equation, we are going to utilize “fsolve.” Let

$g \equiv \gamma$, a parameter (the ratio of specific heats)

$X \equiv$ the dependent variable (which in this case is M_2)

$Y \equiv$ the independent variable (which in this case is fL_{\max}/D)

Listed below are the precise inputs and program that you use in the computer.

```
[ > g2 := 1.4:    Y2 := 0.408:
[ > fsolve(Y2 = ((g2 + 1)/(2*g2))*log(((g2 + 1)*(X2^2)/2)/(1 +
    (g2 - 1)*(X2^2)/2)) + (1/g2)*((1/X2^2) - 1), X2, 0..1);
    .6227097475
```

The answer of $M_2 = 0.6227$ is consistent with that obtained in Example 9.3. We can now proceed to calculate the required static properties, but this will be left as an exercise for the reader.

9.11 SUMMARY

We have analyzed flow in a constant-area duct with friction but without heat transfer. The fluid properties change in a predictable manner dependent on the flow regime as shown in Table 9.3. The property variations in subsonic Fanno flow follow an intuitive pattern but we note that the supersonic flow behavior is completely different. The

Table 9.3 Fluid Property Variation for Fanno Flow

Property	Subsonic	Supersonic
Velocity	Increases	Decreases
Mach number	Increases	Decreases
Enthalpy ^a	Decreases	Increases
Stagnation enthalpy ^a	Constant	Constant
Pressure	Decreases	Increases
Density	Decreases	Increases
Stagnation pressure	Decreases	Decreases

^a Also temperature if the fluid is a perfect gas.

only common occurrence is the decrease in stagnation pressure, which is indicative of the loss.

Perhaps the most significant equations are those that apply to all fluids:

$$\rho V = G = \text{constant} \quad (9.2)$$

$$h_t = h + \frac{G^2}{\rho^2 2g_c} = \text{constant} \quad (9.5)$$

Along with these equations you should keep in mind the appearance of Fanno lines in the $h-v$ and $T-s$ diagrams (see Figures 9.1 and 9.2). Remember that each Fanno line represents points with the same mass velocity (G) and stagnation enthalpy (h_t), and a normal shock can connect two points on opposite branches of a Fanno line which have the same value of $p + \rho V^2/g_c$. *Families* of Fanno lines could represent:

1. Different values of G for the same h_t (such as those in Figure 9.10), or
2. The same G for different values of h_t (see Problem 10.17).

Detailed working equations were developed for perfect gases, and the introduction of a * reference point enabled the construction of a Fanno table which simplifies problem solution. The * condition for Fanno flow has no relation to the one used previously in isentropic flow (except in general definition). All Fanno flows proceed toward a limiting point of Mach 1. Friction choking of a flow passage is possible in Fanno flow just as area choking occurs in varying-area isentropic flow. An $h-s$ (or $T-s$) diagram is of great help in the analysis of a complicated flow system. *Get into the habit of drawing these diagrams.*

PROBLEMS

In the problems that follow you may assume that all systems are completely adiabatic. Also, all ducts are of constant area unless otherwise indicated. You may neglect friction in the varying-area sections. You may also assume that the friction factor shown in Appendix C applies to noncircular cross sections when the equivalent diameter concept is used and the flow is turbulent.

- 9.1. Conditions at the entrance to a duct are $M_1 = 3.0$ and $p_1 = 8 \times 10^4 \text{ N/m}^2$. After a certain length the flow has reached $M_2 = 1.5$. Determine p_2 and $f \Delta x/D$ if $\gamma = 1.4$.
- 9.2. A flow of nitrogen is discharged from a duct with $M_2 = 0.85$, $T_2 = 500^\circ\text{R}$, and $p_2 = 28 \text{ psia}$. The temperature at the inlet is 560°R . Compute the pressure at the inlet and the mass velocity (G).
- 9.3. Air enters a circular duct with a Mach number of 3.0. The friction factor is 0.01.
 - (a) How long a duct (measured in diameters) is required to reduce the Mach number to 2.0?

- (b) What is the percentage change in temperature, pressure, and density?
 - (c) Determine the entropy increase of the air.
 - (d) Assume the same length of duct as computed in part (a), but the initial Mach number is 0.5. Compute the percentage change in temperature, pressure, density, and the entropy increase for this case. Compare the changes in the same length duct for subsonic and supersonic flow.
- 9.4.** Oxygen enters a 6-in.-diameter duct with $T_1 = 600^\circ\text{R}$, $p_1 = 50$ psia, and $V_1 = 600$ ft/sec. The friction factor is $f = 0.02$.
- (a) What is the maximum length of duct permitted that will not change any of the conditions at the inlet?
 - (b) Determine T_2 , p_2 , and V_2 for the maximum duct length found in part (a).
- 9.5.** Air flows in an 8-cm-inside diameter pipe that is 4 m long. The air enters with a Mach number of 0.45 and a temperature of 300 K .
- (a) What friction factor would cause sonic velocity at the exit?
 - (b) If the pipe is made of cast iron, estimate the inlet pressure.
- 9.6.** At one section in a constant-area duct the stagnation pressure is 66.8 psia and the Mach number is 0.80. At another section the pressure is 60 psia and the temperature is 120°F.
- (a) Compute the temperature at the first section and the Mach number at the second section if the fluid is air.
 - (b) Which way is the air flowing?
 - (c) What is the friction length ($f \Delta x/D$) of the duct?
- 9.7.** A 50×50 cm duct is 10 m in length. Nitrogen enters at $M_1 = 3.0$ and leaves at $M_2 = 1.7$, with $T_2 = 280$ K and $p_2 = 7 \times 10^4$ N/m².
- (a) Find the static and stagnation conditions at the entrance.
 - (b) What is the friction factor of the duct?
- 9.8.** A duct of 2 ft \times 1 ft cross section is made of riveted steel and is 500 ft long. Air enters with a velocity of 174 ft/sec, $p_1 = 50$ psia, and $T_1 = 100^\circ\text{F}$.
- (a) Determine the temperature, pressure, and velocity at the exit.
 - (b) Compute the pressure drop assuming the flow to be incompressible. Use the entering conditions and equation (3.29). Note that equation (3.64) can easily be integrated to evaluate

$$\int T ds_i = f \frac{\Delta x}{D_e} \frac{V^2}{2g_c}$$

- (c) How do the results of parts (a) and (b) compare? Did you expect this?
- 9.9.** Air enters a duct with a mass flow rate of 35 lbm/sec at $T_1 = 520^\circ\text{R}$ and $p_1 = 20$ psia. The duct is square and has an area of 0.64 ft². The outlet Mach number is unity.
- (a) Compute the temperature and pressure at the outlet.
 - (b) Find the length of the duct if it is made of steel.
- 9.10.** Consider the flow of a perfect gas along a Fanno line. Show that the pressure at the * reference state is given by the relation

$$p^* = \frac{\dot{m}}{A} \left[\frac{2RT_t}{\gamma g_c (\gamma + 1)} \right]^{1/2}$$

- 9.11.** A 10-ft duct 12 in. in diameter contains oxygen flowing at the rate of 80 lbm/sec. Measurements at the inlet give $p_1 = 30$ psia and $T_1 = 800^\circ\text{R}$. The pressure at the outlet is $p_2 = 23$ psia.
- (a) Calculate M_1, M_2, V_2, T_{t2} , and p_{t2} .
 - (b) Determine the friction factor and estimate the absolute roughness of the duct material.
- 9.12.** At the outlet of a 25-cm-diameter duct, air is traveling at sonic velocity with a temperature of 16°C and a pressure of 1 bar. The duct is very smooth and is 15 m long. There are two possible conditions that could exist at the entrance to the duct.
- (a) Find the static and stagnation temperature and pressure for each entrance condition.
 - (b) Assuming the surrounding air to be at 1 bar pressure, how much horsepower is necessary to get ambient air into the duct for each case? (You may assume no losses in the work process.)
- 9.13.** Ambient air at 60°F and 14.7 psia accelerates isentropically into a 12-in.-diameter duct. After 100 ft the duct transitions into an 8×8 in. square section where the Mach number is 0.50. Neglect all frictional effects except in the constant-area duct, where $f = 0.04$.
- (a) Determine the Mach number at the duct entrance.
 - (b) What are the temperature and pressure in the square section?
 - (c) How much 8×8 in. square duct could be added before the flow chokes? (Assume that $f = 0.04$ in this duct also.)
- 9.14.** Nitrogen with $p_t = 7 \times 10^5 \text{ N/m}^2$ and $T_t = 340 \text{ K}$ enters a frictionless converging-diverging nozzle having an area ratio of 4.0. The nozzle discharges supersonically into a constant-area duct that has a friction length $f \Delta x/D = 0.355$. Determine the temperature and pressure at the exit of the duct.
- 9.15.** Conditions before a normal shock are $M_1 = 2.5$, $p_{t1} = 67$ psia, and $T_{t1} = 700^\circ\text{R}$. This is followed by a length of Fanno flow and a converging nozzle as shown in Figure P9.15. The area change is such that the system is choked. It is also known that $p_4 = p_{\text{amb}} = 14.7$ psia.

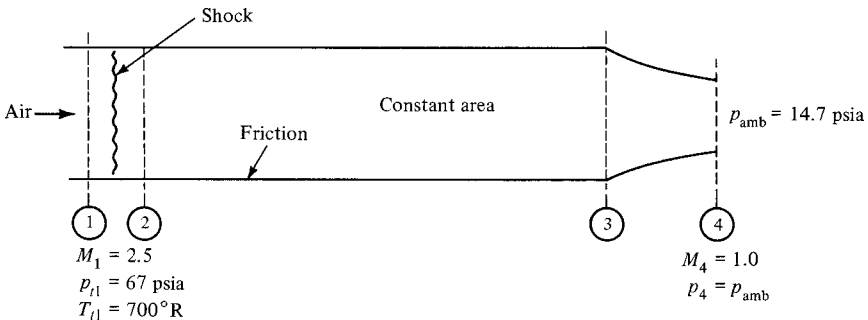


Figure P9.15

- (a) Draw a $T-s$ diagram for the system.
 - (b) Find M_2 and M_3 .
 - (c) What is $f \Delta x/D$ for the duct?
- 9.16.** A converging–diverging nozzle (Figure P9.16) has an area ratio of 3.0. The stagnation conditions of the inlet air are 150 psia and 550°R. A constant-area duct with a length of 12 diameters is attached to the nozzle outlet. The friction factor in the duct is 0.025.
- (a) compute the receiver pressure that would place a shock
 - (i) in the nozzle throat;
 - (ii) at the nozzle exit;
 - (iii) at the duct exit.
 - (b) What receiver pressure would cause supersonic flow throughout the duct with no shocks within the system (or after the duct exit)?
 - (c) Make a sketch similar to Figure 6.3 showing the pressure distribution for the various operating points of parts (a) and (b).

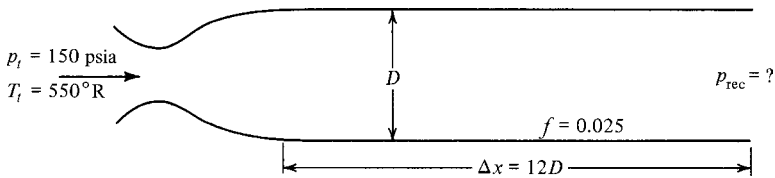


Figure P9.16

- (a) Sketch a $T-s$ diagram for the system.
 - (b) Determine the friction factor of the duct.
 - (c) What is the total change in entropy for the system?
- 9.17.** For a nozzle–duct system similar to that of Problem 9.16, the nozzle is designed to produce a Mach number of 2.8 with $\gamma = 1.4$. The inlet conditions are $p_{t1} = 10 \text{ bar}$ and $T_{t1} = 370 \text{ K}$. The duct is 8 diameters in length, but the duct friction factor is unknown. The receiver pressure is fixed at 3 bar and a normal shock has formed at the duct exit.
- (a) Draw a $T-s$ diagram for the system.
 - (b) Determine conditions at the duct entrance.
 - (c) What is the pressure in the receiver? (*Hint:* How is this related to the duct exit pressure?)
 - (d) If the length of the duct is doubled and the chamber and receiver conditions remain unchanged, what are the new Mach numbers at the entrance and exit of the duct?
- 9.18.** A large chamber contains air at 65 bar pressure and 400 K. The air passes through a converging-only nozzle and then into a constant-area duct. The friction length of the duct is $f \Delta x/D = 1.067$ and the Mach number at the duct exit is 0.96.
- (a) Draw a $T-s$ diagram for the system.
 - (b) Determine conditions at the duct entrance.
 - (c) What is the pressure in the receiver? (*Hint:* How is this related to the duct exit pressure?)
 - (d) If the length of the duct is doubled and the chamber and receiver conditions remain unchanged, what are the new Mach numbers at the entrance and exit of the duct?
- 9.19.** A constant-area duct is fed by a converging-only nozzle as shown in Figure P9.19. The nozzle receives oxygen from a large chamber at $p_1 = 100 \text{ psia}$ and $T_1 = 1000^\circ\text{R}$. The duct has a friction length of 5.3 and it is choked at the exit. The receiver pressure is exactly the same as the pressure at the duct exit.

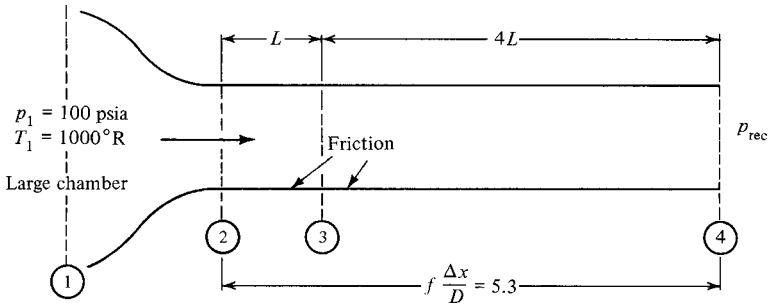


Figure P9.19

- (a) What is the pressure at the end of the duct?
 - (b) Four-fifths of the duct is removed. (The end of the duct is now at 3.) The chamber pressure, receiver pressure, and friction factor remain unchanged. Now what is the pressure at the exit of the duct?
 - (c) Sketch both of the cases above on the same $T-s$ diagram.
- 9.20. (a) Plot a Fanno line to scale in the $T-s$ plane for air entering a duct with a Mach number of 0.20, a static pressure of 100 psia, and a static temperature of 540°R. Indicate the Mach number at various points along the curve.
- (b) On the same diagram, plot another Fanno line for a flow with the same total enthalpy, the same entering entropy, but double the mass velocity.
- 9.21. Which, if any, of the ratios tabulated in the Fanno table (T/T^* , p/p^* , p_t/p_t^* , etc.) could also be listed in the Isentropic table with the same numerical values?
- 9.22. A contractor is to connect an air supply from a compressor to test apparatus 21 ft away. The exit diameter of the compressor is 2 in. and the entrance to the test equipment has a 1-in.-diameter pipe. The contractor has the choice of putting a reducer at the compressor followed by 1-in. tubing or using 2-in. tubing and putting the reducer at the entrance to the test equipment. Since smaller tubing is cheaper and less obtrusive, the contractor is leaning toward the first possibility, but just to be sure, he sends the problem to the engineering personnel. The air coming out of the compressor is at 520°R and the pressure is 40 psia. The flow rate is 0.7 lbm/sec. Consider that each size of tubing has an effective $f = 0.02$. What would be the conditions at the entrance to the test equipment for each tubing size? (You may assume isentropic flow everywhere but in the 21 ft of tubing.)
- 9.23. (Optional) (a) Introduce the * reference condition into equation (9.27) and develop an expression for $(s^* - s)/R$.
- (b) Write a computer program for the expression developed in part (a) and compute a table of $(s^* - s)/R$ versus Mach number. Also include other entries of the Fanno table. Check your values with those listed in Appendix I.

CHECK TEST

You should be able to complete this test without reference to material in the chapter.

- 9.1. Sketch a Fanno line in the $h-v$ plane. Include enough additional information as necessary to locate the sonic point and then identify the regions of subsonic and supersonic flow.
- 9.2. Fill in the blanks in Table CT9.2 to indicate whether the quantities *increase*, *decrease*, or *remain constant* in the case of Fanno flow.

Table CT9.2 Analysis of Fanno Flow

Property	Subsonic Regime	Supersonic Regime
Velocity		
Temperature		
Pressure		
Thrust function ($p + \rho V^2/g_c$)		

- 9.3. In the system shown in Figure CT9.3, the friction length of the duct is $f \Delta x/D = 12.40$ and the Mach number at the exit is 0.8. $A_3 = 1.5 \text{ in}^2$ and $A_4 = 1.0 \text{ in}^2$. What is the air pressure in the tank if the receiver is at 15 psia?

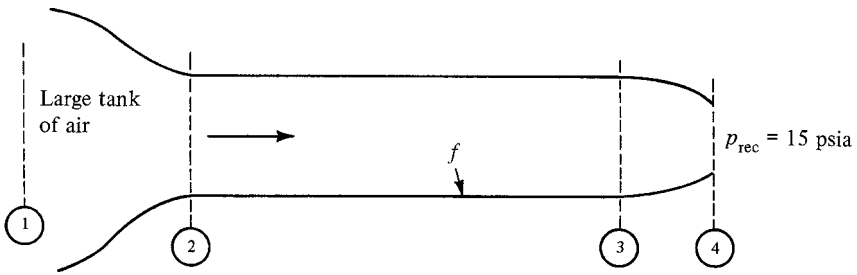


Figure CT9.3

- 9.4. Over what range of receiver pressures will normal shocks occur someplace within the system shown in Figure CT9.4? The area ratio of the nozzle is $A_3/A_2 = 2.403$ and the duct $f \Delta x/D = 0.30$.

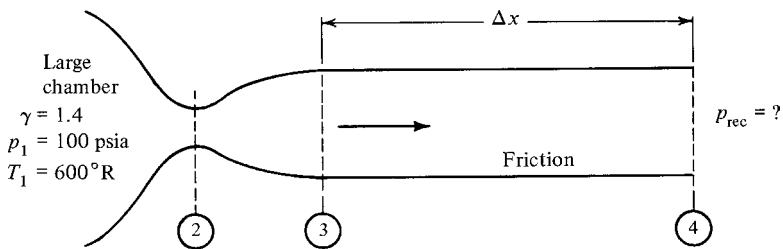


Figure CT9.4

9.5. There is no friction in the system shown in Figure CT9.5 except in the constant-area ducts from 3 to 4 and from 6 to 7. Sketch the $T-s$ diagram for the entire system.

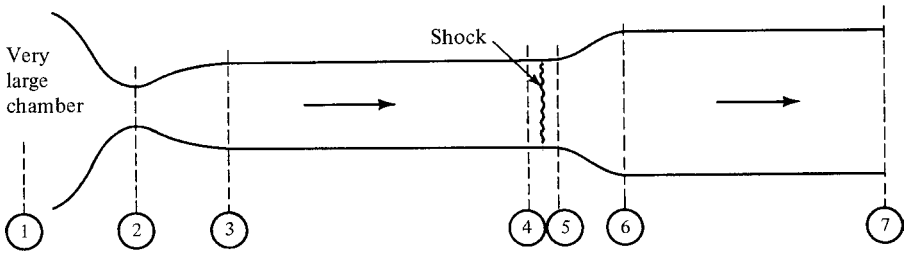


Figure CT9.5

9.6. Starting with the basic principles of continuity, energy, and so on, derive an expression for the property ratio p_2/p_1 in terms of Mach numbers and the specific heat ratio for Fanno flow with a perfect gas.

9.7. Work Problem 9.18.

Chapter 10

Rayleigh Flow

10.1 INTRODUCTION

In the chapter we consider the consequences of heat crossing the boundaries of a system. To isolate the effects of heat transfer from the other major factors we assume flow in a constant-area duct without friction. At first this may seem to be an unrealistic situation, but actually it is a good first approximation to many real problems, as most heat exchangers have constant-area flow passages. It is also a simple and reasonably equivalent process for a constant-area combustion chamber. Naturally, in these actual systems, frictional effects are present, and what we really are saying is the following:

In systems where *high rates of heat transfer* occur, the entropy change caused by the heat transfer is much greater than that caused by friction, or

$$ds_e \gg ds_f \quad (10.1)$$

Thus

$$ds \approx ds_e \quad (10.2)$$

and the frictional effects may be neglected. There are obviously some flows for which this assumption is not reasonable and other methods must be used to obtain more accurate predictions for these systems.

We first examine the general behavior of an arbitrary fluid and will again find that property variations follow different patterns in the subsonic and supersonic regimes. The flow of a perfect gas is considered with the now familiar end result of constructing a table. This category of problem is called *Rayleigh flow*.

10.2 OBJECTIVES

After completing this chapter successfully, you should be able to:

1. State the assumptions made in the analysis of Rayleigh flow.
2. (*Optional*) Simplify the general equations of continuity, energy, and momentum to obtain basic relations valid for any fluid in Rayleigh flow.
3. Sketch a Rayleigh line in the p - v plane together with lines of constant entropy and constant temperature (for a typical gas). Indicate directions of increasing entropy and temperature.
4. Sketch a Rayleigh line in the h - s plane. Also sketch the corresponding stagnation curves. Identify the sonic point and regions of subsonic and supersonic flow.
5. Describe the variations in fluid properties that occur as flow progresses along a Rayleigh line for the case of heating and also for cooling. Do for both subsonic and supersonic flow.
6. (*Optional*) Starting with basic principles of continuity, energy, and momentum, derive expressions for property ratios such as T_2/T_1 , p_2/p_1 , and so on, in terms of Mach number (M) and specific heat ratio (γ) for Rayleigh flow with a perfect gas.
7. Describe (include a T - s diagram) how a Rayleigh table is developed with the aid of a * reference location.
8. Compare similarities and differences between Rayleigh flow and normal shocks. Sketch an h - s diagram showing a typical Rayleigh line and a normal shock for the same mass velocity.
9. Explain what is meant by *thermal choking*.
10. (*Optional*) Describe some possible consequences of adding more heat in a choked Rayleigh flow situation (for both subsonic and supersonic flow).
11. Demonstrate the ability to solve typical Rayleigh flow problems by use of the appropriate tables and equations.

10.3 ANALYSIS FOR A GENERAL FLUID

We shall first consider the general behavior of an arbitrary fluid. To isolate the effects of heat transfer we make the following assumptions

Steady one-dimensional flow	
Negligible friction	$ds_i \approx 0$
No shaft work	$\delta w_s = 0$
Neglect potential	$dz = 0$
Constant area	$dA = 0$

We proceed by applying the basic concepts of continuity, energy, and momentum.

Continuity

$$\dot{m} = \rho AV = \text{const} \quad (2.30)$$

but since the flow area is constant, this reduces to

$$\rho V = \text{const} \quad (10.3)$$

From our work in Chapter 9 we know that this constant is G , the *mass velocity*, and thus

$$\boxed{\rho V = G = \text{const}} \quad (10.4)$$

Energy

We start with

$$h_{t1} + q = h_{t2} + w_s \quad (3.19)$$

which for no shaft work becomes

$$\boxed{h_{t1} + q = h_{t2}} \quad (10.5)$$

Warning! This is the first major flow category for which the total enthalpy has *not* been constant. By now you have accumulated a store of knowledge—all based on flows for which $h_t = \text{const}$. Examine carefully any information that you retrieve from your memory bank!

Momentum

We now proceed to apply the momentum equation to the control volume shown in Figure 10.1. The x -component of the momentum equation for steady, one-dimensional flow is

$$\sum F_x = \frac{\dot{m}}{g_c} (V_{\text{out},x} - V_{\text{in},x}) \quad (3.46)$$

From Figure 10.1 we see that this becomes

$$p_1 A - p_2 A = \frac{\rho AV}{g_c} (V_2 - V_1) \quad (10.6)$$

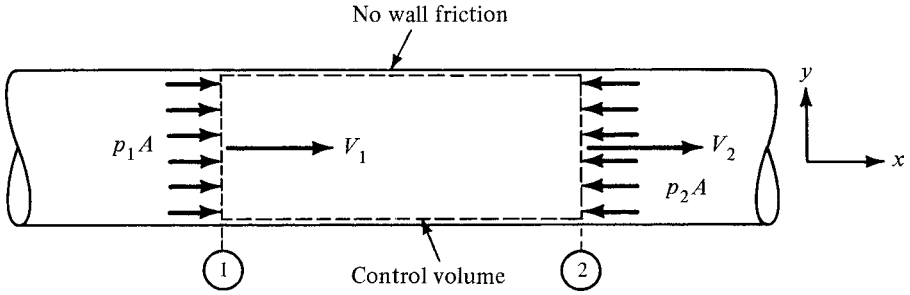


Figure 10.1 Momentum analysis for Rayleigh flow.

Canceling the area, we have

$$p_1 - p_2 = \frac{\rho V}{g_c}(V_2 - V_1) = \frac{G}{g_c}(V_2 - V_1) \tag{10.7}$$

Show that this can be written as

$$p + \frac{GV}{g_c} = \text{const} \tag{10.8}$$

Alternative forms of equation (10.8) are

$$p + \frac{G^2}{g_c \rho} = \text{const} \tag{10.9a}$$

$$p + \frac{G^2}{g_c} v = \text{const} \tag{10.9b}$$

As an aside we might note that this is the same relation that holds across a standing normal shock. Recall that for the normal shock:

$$p + \rho \frac{V^2}{g_c} = \text{const} \tag{6.9}$$

In both cases we are led to equivalent results since both analyses deal with constant area and assume negligible friction.

If we multiply equation (6.9) or (10.8) by the constant area, we obtain

$$pA + \frac{(\rho AV)V}{g_c} = \text{const} \tag{10.10}$$

or

$$pA + \frac{\dot{m}V}{g_c} = \text{const} \quad (10.11)$$

The constant in equation (10.11) is called the *impulse function* or *thrust function* by various authors. We shall see a reason for these names when we study propulsion devices in Chapter 12. For now let us merely note that *the thrust function remains constant for Rayleigh flow and across a normal shock*.

We return now to equation (10.9b), which will plot as a straight line in the p - v plane (see Figure 10.2). Such a line is called a *Rayleigh line* and represents flow at a particular mass velocity (G). If the fluid is known, one can also plot lines of constant temperature on the same diagram. Typical isothermals can be obtained easily by assuming the perfect gas equation of state. Some of these $pv = \text{const}$ lines are also shown in Figure 10.2.

Does the information depicted by this plot make sense? Normally, we would expect the effects of simple heating to increase the temperature and decrease the density. This appears to be in agreement with a process from point 1 to point 2 as marked in Figure 10.2. If we add more heat, we move farther along the Rayleigh line and the temperature increases more. Soon point 3 is reached where the temperature is a maximum. Is this a limiting point of some sort? Have we reached some kind of a *choked* condition?

To answer these questions, we must turn elsewhere. Recall that the addition of heat causes the entropy of the fluid to increase since

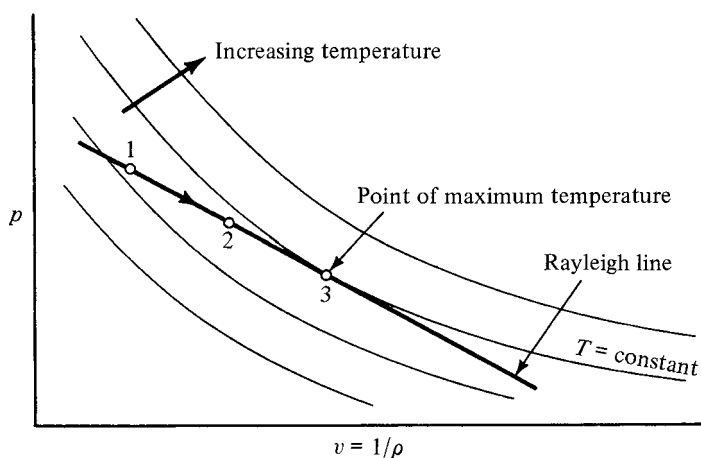


Figure 10.2 Rayleigh line in p - v plane.

$$ds_e = \frac{\delta q}{T} \quad (3.10)$$

From our basic assumption of negligible friction,

$$ds \approx ds_e \quad (10.2)$$

Thus it appears that the real limiting condition involves entropy (as usual). We can continue to add heat until the fluid reaches a state of maximum entropy. It might be that this point of maximum entropy is reached before the point of maximum temperature, in which case we would never be able to reach point 3 (of Figure 10.2). We must investigate the shape of constant entropy lines in the p - v diagram. This can easily be done for the case of a perfect gas that will serve to illustrate the general trend.

For a $T = \text{constant line}$,

$$pv = RT = \text{const} \quad (10.12)$$

Differentiating yields

$$p dv + v dp = 0 \quad (10.13)$$

and

$$\frac{dp}{dv} = -\frac{p}{v} \quad (10.14)$$

For an $S = \text{constant line}$,

$$pv^\gamma = \text{const} \quad (10.15)$$

Differentiating yields

$$v^\gamma dp + p\gamma v^{\gamma-1} dv = 0 \quad (10.16)$$

and

$$\frac{dp}{dv} = -\gamma \frac{p}{v} \quad (10.17)$$

Comparing equations (10.14) and (10.17) and noting that γ is always greater than 1.0, we see that the isentropic line has the greater negative slope and thus these lines will plot as shown in Figure 10.3. (Actually, this should come as no great surprise since they were shown this way in Figure 1.2; but did you really believe it then?)

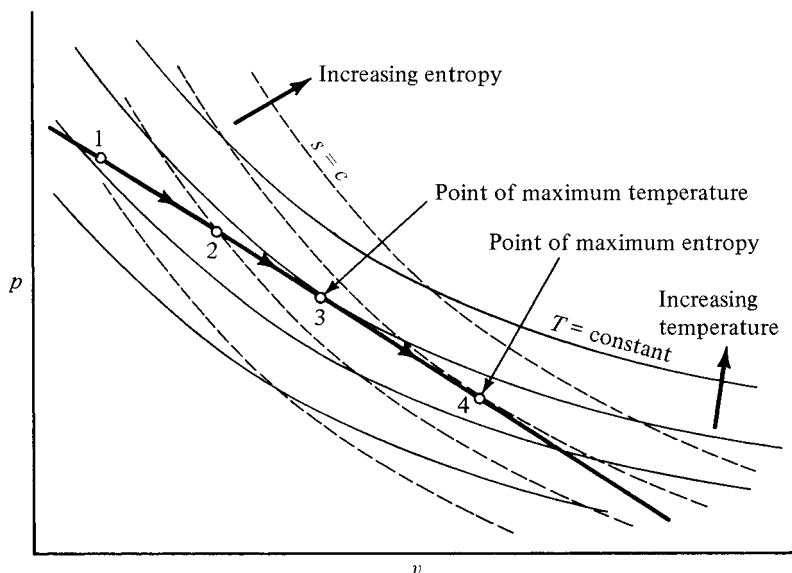


Figure 10.3 Rayleigh line in p - v plane.

We now see that not only can we reach the point of maximum temperature, but more heat can be added to take us beyond this point. If desired, we can move (by heating) all the way to the maximum entropy point. It may seem odd that in the region from point 3 to 4, we add heat to the system and its temperature decreases. Let us reflect further on the phenomenon occurring. In a previous discussion we noted that the effects of heat addition are normally thought of as causing the fluid density to decrease. This requires the velocity to increase since $\rho V = \text{constant}$ by continuity. This velocity increase automatically boosts the kinetic energy of the fluid by a certain amount. Thus the chain of events caused by heat addition forces a definite increase in kinetic energy. Some of the heat that is added to the system is converted into this increase in kinetic energy of the fluid, with the heat energy in excess of this amount being available to increase the enthalpy of the fluid.

Noting that kinetic energy is proportional to the square of velocity, we realize that as higher velocities are reached, the addition of more heat is accompanied by much greater increases in kinetic energy. Eventually, we reach a point where *all* of the heat energy added is required for the kinetic energy increase. At this point there is no heat energy left over and the system is at a point of maximum enthalpy (maximum temperature for a perfect gas). Further addition of heat causes the kinetic energy to increase by an amount *greater* than the heat energy being added. Thus, from this point on, the enthalpy must decrease to provide the proper energy balance.

Perhaps the foregoing discussion would be more clear if the Rayleigh lines were plotted in the h - s plane. For any given fluid this could easily be done, and the typical result is shown in Figure 10.4, along with lines of constant pressure. All points on

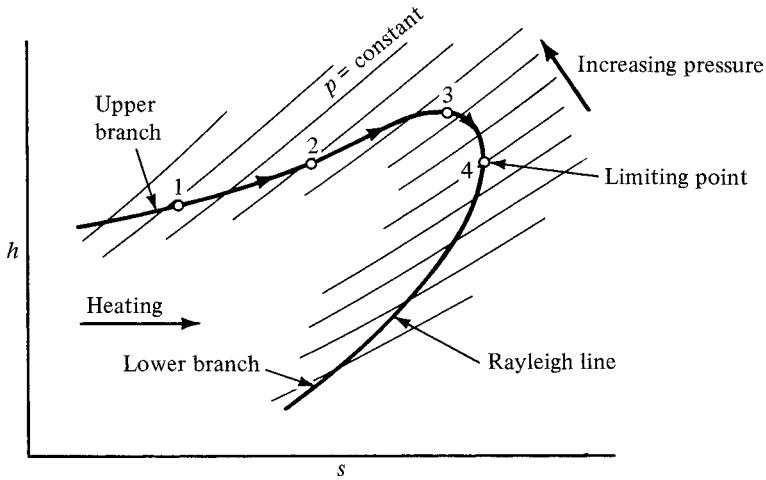


Figure 10.4 Rayleigh line in h - s plane.

this Rayleigh line represent states with the same mass flow rate per unit area (mass velocity) and the same impulse (or thrust) function. For heat addition, the entropy must increase and the flow moves to the right. Thus it appears that the Rayleigh line, like the Fanno line, is divided into two distinct branches that are separated by a limiting point of maximum entropy.

We have been discussing a familiar heating process along the upper branch. What about the lower branch? Mark two points along the lower branch and draw an arrow to indicate the proper movement for a heating process. What is happening to the enthalpy? The static pressure? The density? The velocity? The stagnation pressure? Use the information available in the figures together with any equations that have been developed and fill in Table 10.1 with *increases*, *decreases*, or *remains constant*.

As was the case for Fanno flow, notice that flow along the lower branch of a Rayleigh line appears to be a regime with which we are not very familiar. The point of maximum entropy is some sort of a limiting point that separates these two flow regimes.

Table 10.1 Analysis of Rayleigh Flow for Heating

Property	Upper Branch	Lower Branch
Enthalpy		
Density		
Velocity		
Pressure (static)		
Pressure (stagnation)		

Limiting Point

Let's start with the equation of a Rayleigh line in the form

$$p + \frac{G^2}{g_c \rho} = \text{const} \quad (10.9a)$$

Differentiating gives us

$$dp + \frac{G^2}{g_c} \left(-\frac{d\rho}{\rho^2} \right) = 0 \quad (10.18)$$

Upon introduction of equation (10.4), this becomes

$$\frac{dp}{d\rho} = \frac{G^2}{g_c \rho^2} = \frac{V^2}{g_c} \quad (10.19)$$

Thus we have for an *arbitrary* fluid that

$$V^2 = g_c \frac{dp}{d\rho} \quad (10.20)$$

which is valid *anyplace* along the Rayleigh line. Now for a differential movement at the limit point of maximum entropy, $ds = 0$ or $s = \text{const}$. Thus, at this point equation (10.20) becomes

$$V^2 = g_c \left(\frac{\partial p}{\partial \rho} \right)_{s=c} \quad (\text{at the limit point}) \quad (10.21)$$

This is immediately recognized as sonic velocity. The upper branch of the Rayleigh line, where property variations appear *reasonable*, is seen to be a region of subsonic flow and the lower branch is for supersonic flow. Once again we notice that occurrences in supersonic flow are frequently contrary to our expectations.

Another interesting fact can be shown to be true at the limit point. From equation (10.19) we have

$$dp = \frac{V^2}{g_c} d\rho \quad (10.22)$$

Differentiating equation (10.4), we can show that

$$d\rho = -\rho \frac{dV}{V} \quad (10.23)$$

Combining equations (10.22) and (10.23), we obtain

$$dp = -\rho \frac{V}{g_c} dV \quad (10.24)$$

This can be introduced into the property relation

$$T ds = dh - \frac{dp}{\rho} \quad (1.41)$$

to obtain

$$T ds = dh + \frac{V dV}{g_c} \quad (10.25)$$

At the limit point where $M = 1$, $ds = 0$, and (10.25) becomes

$$0 = dh + \frac{V dV}{g_c} \quad (\text{at the limit point}) \quad (10.26)$$

If we neglect potentials, our definition of stagnation enthalpy is

$$h_t = h + \frac{V^2}{2g_c} \quad (3.18)$$

which when differentiated becomes

$$dh_t = dh + \frac{V dV}{g_c} \quad (10.27)$$

Therefore, comparing equations (10.26) and (10.27), we see that equation (10.26) really tells us that

$$dh_t = 0 \quad (\text{at the limit point}) \quad (10.28)$$

and thus the limit point is seen to be a point of maximum *stagnation* enthalpy. This is easily confirmed by looking at equation (10.5). The stagnation enthalpy increases as long as heat can be added. At the point of maximum entropy, no more heat can be added and thus h_t must be a maximum at this location.

We have not talked very much of stagnation enthalpy except to note that it is changing. Figure 10.5 shows the Rayleigh line (which represents the locus of static states) together with the corresponding stagnation reference lines. Remember that for a perfect gas this h - s diagram is equivalent to a T - s diagram. Notice that there are *two* stagnation curves, one for subsonic flow and the other for supersonic flow. You might ask how we know that the supersonic stagnation curve is the top one. We can show this by starting with the differential form of the energy equation:

$$\delta q = \delta \cancel{w}_s + dh_t \quad (3.20)$$

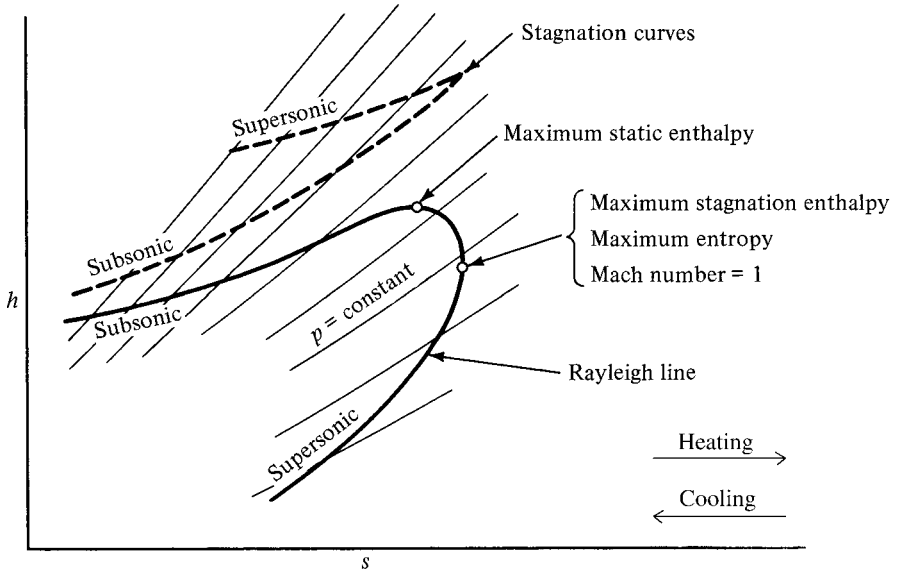


Figure 10.5 Rayleigh line in h - s plane (including stagnation curves).

or

$$\delta q = dh_t \tag{10.29}$$

Knowing that

$$\delta q = T ds_e \tag{3.10}$$

and

$$ds_e \approx ds \tag{10.2}$$

we have for Rayleigh flow that

$$dh_t = T ds_e = T ds \tag{10.30}$$

or

$$\boxed{\frac{dh_t}{ds} = T} \tag{10.31}$$

Note that equation (10.31) gives the slope of the stagnation curve in terms of the static temperature.

Now draw a constant-entropy line on Figure 10.5. This line will cross the subsonic branch of the (static) Rayleigh line at a higher temperature than where it crosses the supersonic branch. Consequently, the slope of the subsonic stagnation reference curve will be greater than that of the supersonic stagnation curve. Since both stagnation curves must come together at the point of maximum entropy, this means that the supersonic stagnation curve is a separate curve lying above the subsonic one. In Section 10.7 we see another reason why this must be so.

In which direction does a *cooling* process move along the subsonic branch of the Rayleigh line? Along the supersonic branch? From Figure 10.5 it would appear that the stagnation pressure will *increase* during a cooling process. This can be substantiated from the stagnation pressure–energy equation:

$$\frac{dp_t}{\rho_t} + ds_e(T_t - T) + T_t ds_t + \delta w_s = 0 \quad (3.25)$$

With the assumptions made for Rayleigh flow, this reduces to

$$\frac{dp_t}{\rho_t} + ds_e(T_t - T) = 0 \quad (10.32)$$

Now $(T_t - T)$ is always positive. Thus, the sign of dp_t can be seen to depend only on ds_e .

For heating,

$$ds_e +; \quad \text{thus } dp_t -, \quad \text{or } p_t \text{ decreases}$$

For cooling,

$$ds_e -; \quad \text{thus } dp_t +, \quad \text{or } p_t \text{ increases}$$

In practice, the latter condition is difficult to achieve because the friction that is inevitably present introduces a greater drop in stagnation pressure than the rise created by the cooling process, *unless* the cooling is done by vaporization of an injected liquid. (See “The Aerothrompressor: A Device for Improving the Performance of a Gas Turbine Power Plant” by A. H. Shapiro et al., *Transactions of the ASME*, April 1956.)

10.4 WORKING EQUATIONS FOR PERFECT GASES

By this time you should have a good idea of the property changes that are occurring in both subsonic and supersonic Rayleigh flow. Remember that we can progress along a Rayleigh line in *either* direction, depending on whether the heat is being added to or removed from the system. We now proceed to develop relations between properties at arbitrary sections. Recall that we want these working equations to be expressed in

terms of Mach numbers and the specific heat ratio. To obtain explicit relations, we assume the fluid to be a perfect gas.

Momentum

We start with the momentum equation developed in Section 10.3 since this will lead directly to a pressure ratio:

$$p + \frac{GV}{g_c} = \text{const} \quad (10.8)$$

or from (10.4) this can be written as

$$p + \frac{\rho V^2}{g_c} = \text{const} \quad (10.33)$$

Substitute for density from the equation of state:

$$\rho = \frac{p}{RT} \quad (10.34)$$

and for the velocity from equations (4.9) and (4.11):

$$V^2 = M^2 a^2 = M^2 \gamma g_c RT \quad (10.35)$$

Show that equation (10.33) becomes

$$p(1 + \gamma M^2) = \text{const} \quad (10.36)$$

If we apply this between two arbitrary points, we have

$$p_1(1 + \gamma M_1^2) = p_2(1 + \gamma M_2^2) \quad (10.37)$$

which can be solved for

$$\boxed{\frac{p_2}{p_1} = \frac{1 + \gamma M_1^2}{1 + \gamma M_2^2}} \quad (10.38)$$

Continuity

From Section 10.3 we have

$$\rho V = G = \text{constant} \quad (10.4)$$

Again, if we introduce the perfect gas equation of state together with the definition of Mach number and sonic velocity, equation (10.4) can be expressed as

$$\frac{pM}{\sqrt{T}} = \text{constant} \quad (10.39)$$

Written between two points, this gives us

$$\frac{p_1 M_1}{\sqrt{T_1}} = \frac{p_2 M_2}{\sqrt{T_2}} \quad (10.40)$$

which can be solved for the temperature ratio:

$$\frac{T_2}{T_1} = \frac{p_2^2 M_2^2}{p_1^2 M_1^2} \quad (10.41)$$

The introduction of the pressure ratio from (10.38) results in the following working equation for static temperatures:

$$\frac{T_2}{T_1} = \left(\frac{1 + \gamma M_1^2}{1 + \gamma M_2^2} \right)^2 \frac{M_2^2}{M_1^2} \quad (10.42)$$

The density relation can easily be obtained from equations (10.38) and (10.42) and the perfect gas equation of state:

$$\frac{\rho_2}{\rho_1} = \frac{M_1^2}{M_2^2} \left(\frac{1 + \gamma M_2^2}{1 + \gamma M_1^2} \right) \quad (10.43)$$

Does this also represent something else besides the density ratio? [See equation (10.4).]

Stagnation Conditions

This is the first flow that we have examined in which the stagnation enthalpy does not remain constant. Thus we must seek a stagnation temperature ratio for use with perfect gases. We know that

$$T_t = T \left(1 + \frac{\gamma - 1}{2} M^2 \right) \quad (4.18)$$

If we write this for each location and then divide one equation by the other, we will have

$$\frac{T_{t2}}{T_{t1}} = \frac{T_2}{T_1} \left(\frac{1 + [(\gamma - 1)/2]M_2^2}{1 + [(\gamma - 1)/2]M_1^2} \right) \quad (10.44)$$

Since we already have solved for the static temperature ratio (10.42), this can immediately be written as

$$\frac{T_{t2}}{T_{t1}} = \left(\frac{1 + \gamma M_1^2}{1 + \gamma M_2^2} \right)^2 \frac{M_2^2}{M_1^2} \left(\frac{1 + [(\gamma - 1)/2]M_2^2}{1 + [(\gamma - 1)/2]M_1^2} \right) \quad (10.45)$$

Similarly, we can obtain an expression for the stagnation pressure ratio, since we know that

$$p_t = p \left(1 + \frac{\gamma - 1}{2} M^2 \right)^{\gamma/(\gamma-1)} \quad (4.21)$$

which means that

$$\frac{p_{t2}}{p_{t1}} = \frac{p_2}{p_1} \left(\frac{1 + [(\gamma - 1)/2]M_2^2}{1 + [(\gamma - 1)/2]M_1^2} \right)^{\gamma/(\gamma-1)} \quad (10.46)$$

Substitution for the pressure ratio from equation (10.38) yields

$$\frac{p_{t2}}{p_{t1}} = \frac{1 + \gamma M_1^2}{1 + \gamma M_2^2} \left(\frac{1 + [(\gamma - 1)/2]M_2^2}{1 + [(\gamma - 1)/2]M_1^2} \right)^{\gamma/(\gamma-1)} \quad (10.47)$$

Incidentally, is this stagnation pressure ratio related to the entropy change in the usual manner?

$$\frac{p_{t2}}{p_{t1}} \stackrel{?}{=} e^{-\Delta s/R} \quad (4.28)$$

What assumptions were used to develop equation (4.28)? Are these the same assumptions that were made for Rayleigh flow? If not, how would you go about determining the entropy change between two points? Would the method used in Chapter 9 for Fanno flow be applicable here? [See equations (9.25) to (9.27).]

In summary, we have developed the means to solve for all properties at one location (2) if we know all the properties at some other location (1) and the Mach number at point (2). Actually, any piece of information about point (2) would suffice. For example, we might be given the pressure at (2). The Mach number at (2) could then

be found from equation (10.38) and the solution for the other properties could be carried out in the usual manner.

There are also some types of problems in which nothing is known at the downstream section and our job is to predict the final Mach number given the initial conditions and information on the heat transferred to or from the system. For this we turn to the fundamental relation that involves heat transfer.

Energy

From Section 10.3 we have

$$h_{t1} + q = h_{t2} \quad (10.5)$$

For perfect gases we express enthalpy as

$$h = c_p T \quad (1.48)$$

which can also be applied to the stagnation conditions

$$h_t = c_p T_t \quad (10.48)$$

Thus the energy equation can be written as

$$c_p T_{t1} + q = c_p T_{t2} \quad (10.49)$$

or

$$q = c_p (T_{t2} - T_{t1}) \quad (10.50)$$

Note carefully that

$$q = c_p \Delta T_t \neq c_p \Delta T \quad (10.51)$$

In all of the developments above we have not only introduced the perfect gas equation of state but have made the usual assumption of constant specific heats. In some cases where heat transfer rates are extremely high and large temperature changes result, c_p may vary enough to warrant using an average value of c_p . If, in addition, significant variations in γ occur, it will be necessary to return to the basic equations and derive new working relations by treating γ as a variable. See Chapter 11 on methods to apply to the analysis of such real gases.

10.5 REFERENCE STATE AND THE RAYLEIGH TABLE

The equations developed in Section 10.4 provide the means of predicting properties at one location if sufficient information is known concerning a Rayleigh flow system. Although the relations are straightforward, their use is frequently cumbersome and thus we turn to techniques used previously that greatly simplify problem solution.

We introduce still *another* * reference state defined as before, in that *the Mach number of unity must be reached by some particular process*. In this case we imagine that the Rayleigh flow is continued (i.e., more heat is added) until the velocity reaches sonic. Figure 10.6 shows a $T-s$ diagram for subsonic Rayleigh flow with heat addition. A sketch of the physical system is also shown. If we imagine that more heat is added, the entropy continues to increase and we will eventually reach the limiting point where sonic velocity exists. The dashed lines show a hypothetical duct in which the additional heat transfer takes place. At the end we reach the * reference point for Rayleigh flow.

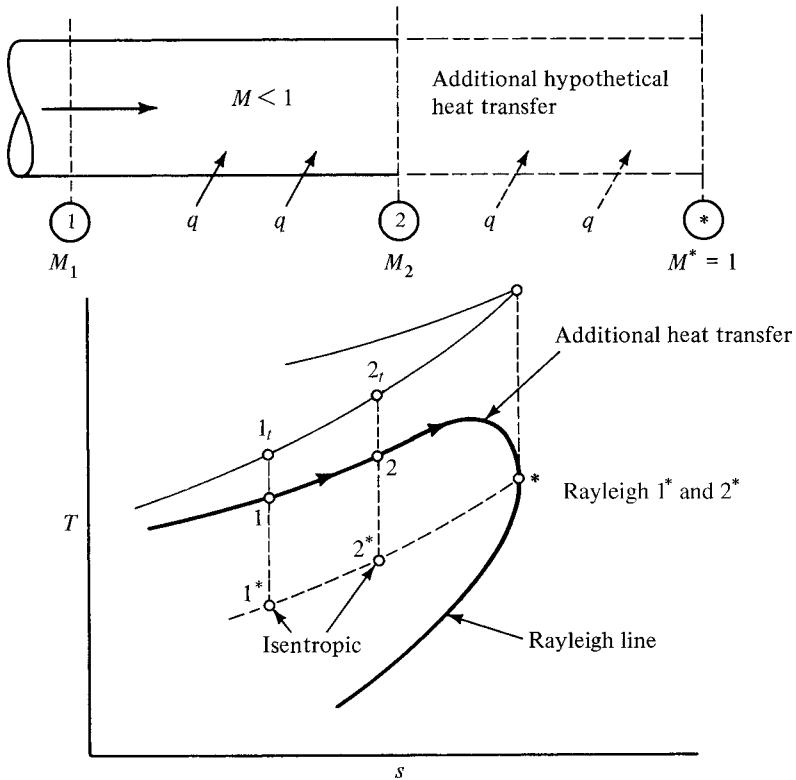


Figure 10.6 The * reference for Rayleigh flow.

The *isentropic* * reference points have also been included on the $T-s$ diagram to emphasize the fact that the Rayleigh * reference is a completely different thermodynamic state from those encountered before. Also, we note that proceeding from either point 1 or point 2 by *Rayleigh flow* will ultimately lead to the same state when Mach 1 is reached. Thus we do not have to write 1^* or 2^* but simply * in the case of Rayleigh flow. (Recall that this was also true for Fanno flow. You should also realize that the * reference for Rayleigh flow has nothing to do with the * reference used in Fanno flow.) Notice in Figure 10.6 that the various * locations are *not* on a horizontal line as they were for Fanno flow (see Figure 9.5). Why is this so?

In Figure 10.6 an example of subsonic heating was given. Consider a case of *cooling* in the *supersonic* regime. Figure 10.7 shows such a physical duct. Locate points 1 and 2 on the accompanying $T-s$ diagram. Also show the hypothetical duct and the * reference point on the physical system. We now rewrite the working equations in terms of the Rayleigh flow * reference condition. Consider first

$$\frac{p_2}{p_1} = \frac{1 + \gamma M_1^2}{1 + \gamma M_2^2} \tag{10.38}$$

Let point 2 be any arbitrary point in the flow system and let its Rayleigh * condition be point 1. Then

$$\begin{aligned} p_2 &\Rightarrow p & M_2 &\Rightarrow M \text{ (any value)} \\ p_1 &\Rightarrow p^* & M_1 &\Rightarrow 1 \end{aligned}$$

and equation (10.38) becomes

$$\frac{p}{p^*} = \frac{1 + \gamma}{1 + \gamma M^2} = f(M, \gamma) \tag{10.52}$$

We see that $p/p^* = f(M, \gamma)$, and thus a table can be computed for p/p^* versus M for a particular γ . By now this scheme is quite familiar and you should have no difficulty in showing that

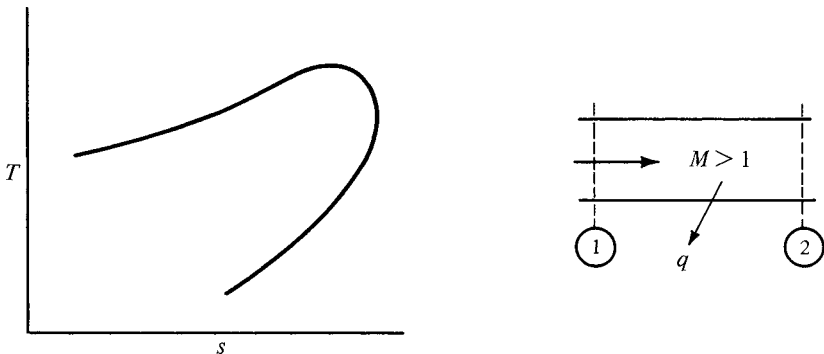


Figure 10.7 Supersonic cooling in Rayleigh flow.

$$\frac{T}{T^*} = \frac{M^2(1 + \gamma)^2}{(1 + \gamma M^2)^2} = f(M, \gamma) \quad (10.53)$$

$$\frac{\rho}{\rho^*} = \frac{1 + \gamma M^2}{(1 + \gamma M^2)^2} = f(M, \gamma) \quad (10.54)$$

$$\frac{T_t}{T_t^*} = \frac{2(1 + \gamma)M^2}{(1 + \gamma M^2)^2} \left(1 + \frac{\gamma - 1}{2} M^2 \right) = f(M, \gamma) \quad (10.55)$$

$$\frac{p_t}{p_t^*} = \frac{1 + \gamma}{1 + \gamma M^2} \left(\frac{1 + [(\gamma - 1)/2]M^2}{(\gamma + 1)/2} \right)^{\gamma/(\gamma-1)} = f(M, \gamma) \quad (10.56)$$

Values for the functions represented in equations (10.52) through (10.56) are listed in the Rayleigh table in Appendix J. Examples of the use of this table are given in the next section.

10.6 APPLICATIONS

The procedure for solving Rayleigh flow problems is quite similar to the approach used for Fanno flow except that the tie between the two locations in Rayleigh flow is determined by heat transfer considerations rather than by duct friction. The recommended steps are, therefore, as follows:

1. Sketch the physical situation (including the hypothetical * reference point).
2. Label sections where conditions are known or desired.
3. List all given information with units.
4. Determine the unknown Mach number.
5. Calculate the additional properties desired.

Variations on the procedure above are frequently involved at step 4, depending on what information is known. For example, the amount of heat transferred may be given and a prediction of the downstream Mach number might be desired. On the other hand, one of the downstream properties may be known and we could be asked to compute the heat transfer. In flow systems that involve a combination of Rayleigh flow and other phenomena (such as shocks, nozzles, etc.), a T - s diagram is sometimes a great aid to problem solution.

For the following examples we are dealing with the steady one-dimensional flow of air ($\gamma = 1.4$), which can be treated as a perfect gas. Assume that $w_s = 0$, negligible friction, constant area, and negligible potential changes. Figure E10.1 is common to Examples 10.1 and 10.2.

Example 10.1 For Figure E10.1, given $M_1 = 1.5$, $p_1 = 10$ psia, and $M_2 = 3.0$, find p_2 and the direction of heat transfer.

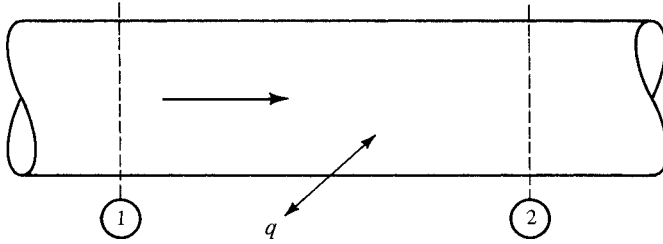


Figure E10.1

Since both Mach numbers are known, we can solve immediately for

$$p_2 = \frac{p_2}{p^*} \frac{p^*}{p_1} p_1 = (0.1765) \left(\frac{1}{0.5783} \right) (10) = 3.05 \text{ psia}$$

The flow is getting more supersonic, or moving away from the * reference point. A look at Figure 10.5 should confirm that the entropy is decreasing and thus heat is being removed from the system. Alternatively, we could compute the ratio T_2/T_1 .

$$\frac{T_{t2}}{T_{t1}} = \frac{T_{t2}}{T_t^*} \frac{T_t^*}{T_{t1}} = (0.6540) \left(\frac{1}{0.9093} \right) = 0.719$$

Since this ratio is less than 1, it indicates a cooling process.

Example 10.2 Given $M_2 = 0.93$, $T_{t2} = 300^\circ\text{C}$, and $T_{t1} = 100^\circ\text{C}$, find M_1 and p_2/p_1 .

To determine conditions at section 1 in Figure E10.1 we must establish the ratio

$$\frac{T_{t1}}{T_t^*} = \frac{T_{t1}}{T_{t2}} \frac{T_{t2}}{T_t^*} = \left(\frac{273 + 100}{273 + 300} \right) (0.9963) = 0.6486$$

Look up $T_t/T_t^* = 0.6486$ in the Rayleigh table and determine that $M_1 = 0.472$. Thus

$$\frac{p_2}{p_1} = \frac{p_2}{p^*} \frac{p^*}{p_1} = (1.0856) \left(\frac{1}{1.8294} \right) = 0.593$$

Example 10.3 A constant-area combustion chamber is supplied air at 400°R and 10.0 psia (Figure E10.3). The air stream has a velocity of 402 ft/sec. Determine the exit conditions if 50 Btu/lbm is added in the combustion process and the chamber handles the maximum amount of air possible.

For the chamber to handle the maximum amount of air there will be no *spillover* at the entrance and conditions at 2 will be the same as those of the free stream.

$$T_2 = T_1 = 400^\circ\text{R} \quad p_2 = p_1 = 10.0 \text{ psia} \quad V_2 = V_1 = 402 \text{ ft/sec}$$

$$a_2 = \sqrt{\gamma g_c R T_2} = [(1.4)(32.2)(53.3)(400)]^{1/2} = 980 \text{ ft/sec}$$

$$M_2 = \frac{V_2}{a_2} = \frac{402}{980} = 0.410$$

$$T_{t2} = \frac{T_{t2}}{T_2} T_2 = \left(\frac{1}{0.9675} \right) (400) = 413^\circ\text{R}$$

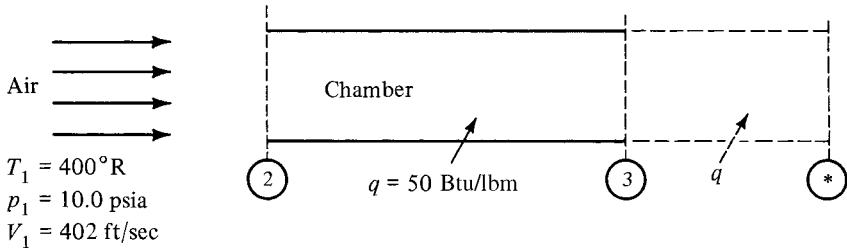


Figure E10.3

From the Rayleigh table at $M_2 = 0.41$, we find that

$$\frac{T_{t2}}{T_t^*} = 0.5465 \quad \frac{T_2}{T^*} = 0.6345 \quad \frac{p_2}{p^*} = 1.9428$$

To determine conditions at the end of the chamber, we must work through the heat transfer that fixes the outlet stagnation temperature:

$$\Delta T_t = \frac{q}{c_p} = \frac{50}{0.24} = 208^\circ\text{R}$$

Thus

$$T_{t3} = T_{t2} + \Delta T_t = 413 + 208 = 621^\circ\text{R}$$

and

$$\frac{T_{t3}}{T_t^*} = \frac{T_{t3}}{T_{t2}} \frac{T_{t2}}{T_t^*} = \left(\frac{621}{413} \right) (0.5465) = 0.8217$$

We enter the Rayleigh table with this value of T_t/T_t^* and find that

$$M_3 = 0.603 \quad \frac{T_3}{T^*} = 0.9196 \quad \frac{p_3}{p^*} = 1.5904$$

Thus

$$p_3 = \frac{p_3}{p^*} \frac{p^*}{p_2} p_2 = (1.5904) \left(\frac{1}{1.9428} \right) (10.0) = 8.19 \text{ psia}$$

and

$$T_3 = \frac{T_3}{T^*} \frac{T^*}{T_2} T_2 = (0.9196) \left(\frac{1}{0.6345} \right) (400) = 580^\circ\text{R}$$

Example 10.4 In Example 10.3, let us ask the question: How much more heat (fuel) could be added without changing conditions at the entrance to the duct? We know that as more heat is added, we move along the Rayleigh line until the point of maximum entropy is reached. Thus M_3 will now be 1.0 (Figure E10.4).

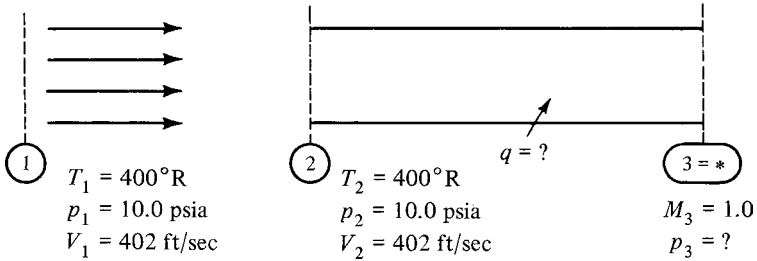


Figure E10.4

From Example 10.3 we have $M_2 = 0.41$ and $T_{t2} = 413^\circ\text{R}$. Then

$$T_{t3} = T_t^* = \frac{T_t^*}{T_{t2}} T_{t2} = \left(\frac{1}{0.5465} \right) (413) = 756^\circ\text{R}$$

$$p_3 = p^* = \frac{p^*}{p_2} p_2 = \left(\frac{1}{1.9428} \right) (10.0) = 5.15 \text{ psia}$$

and

$$q = c_p \Delta T_t = (0.24)(756 - 413) = 82.3 \text{ Btu/lbm}$$

or 32.3 Btu/lbm more than the original 50 Btu/lbm .

In these last two examples it has been assumed that the outlet pressure is maintained at the values calculated. Actually, in Example 10.4 the receiver pressure could be anywhere below 5.15 psia, since sonic velocity exists at the exit.

10.7 CORRELATION WITH SHOCKS

At various places in this chapter we have pointed out some similarities between Rayleigh flow and normal shocks. Let us review these points carefully.

1. The end points before and after a normal shock represent states with the same mass flow per unit area, the same impulse function, and the same stagnation enthalpy.
2. A Rayleigh line represents states with the same mass flow per unit area and the same impulse function. All points on a Rayleigh line do *not* have the same stagnation enthalpy because of the heat transfer involved. To move *along* a Rayleigh line requires this heat transfer.

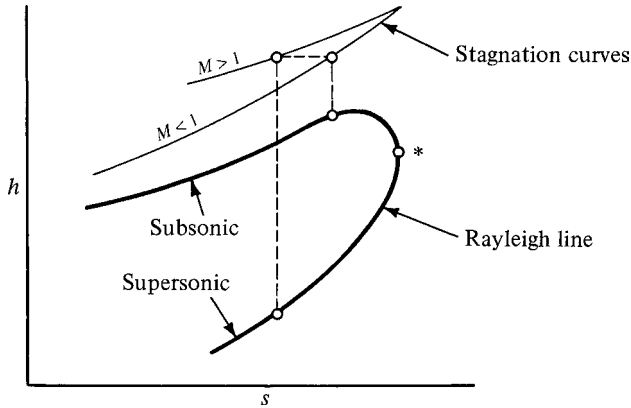


Figure 10.8 Static and stagnation curves for Rayleigh flow.

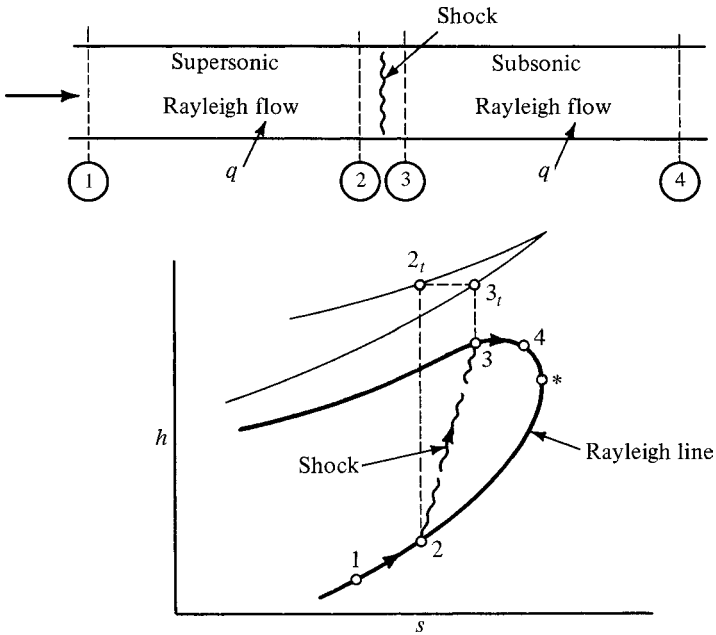


Figure 10.9 Combination of Rayleigh flow and normal shock.

For confirmation of the above, compare equations (6.2), (6.3), and (6.9) for a normal shock with equations (10.4), (10.5), and (10.9) for Rayleigh flow. Now check Figure 10.8 and you will notice that for every point on the supersonic branch of the Rayleigh line there is a corresponding point on the subsonic branch with the same stagnation enthalpy. Thus these two points satisfy all three conditions for the end points of a normal shock and could be connected by such a shock.

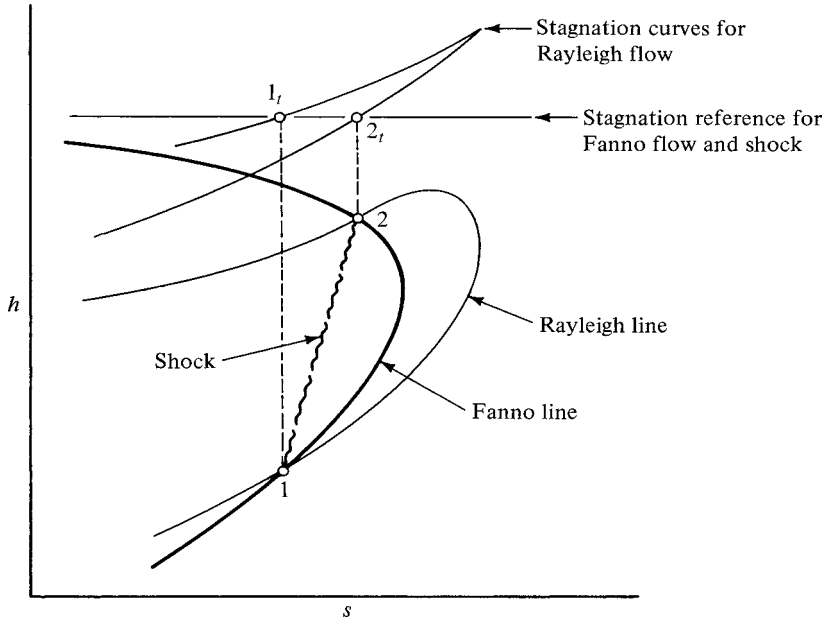


Figure 10.10 Correlation of Fanno flow, Rayleigh flow, and a normal shock for the same mass velocity.

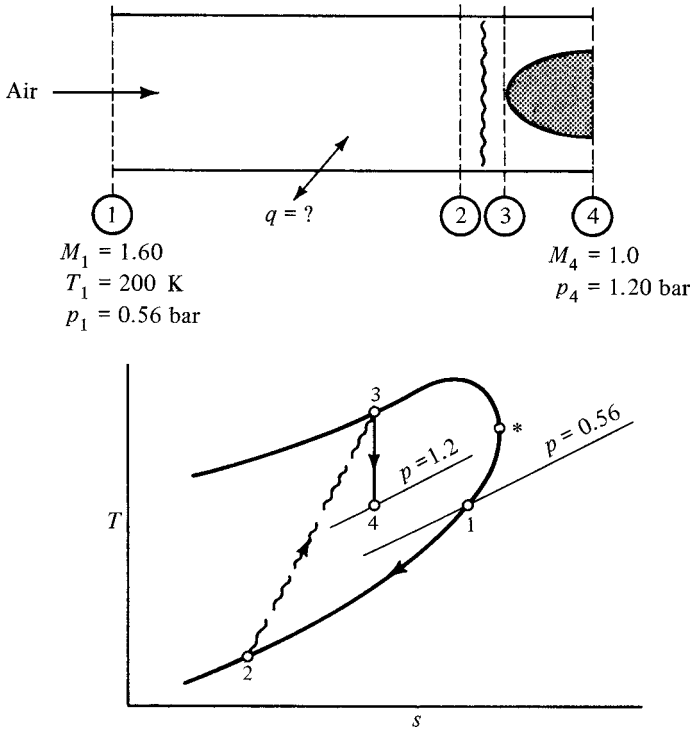
We can now picture a supersonic Rayleigh flow followed by a normal shock, with additional heat transfer taking place subsonically. Such a situation is shown in Figure 10.9. Note that the shock merely jumps the flow from the supersonic branch to the subsonic branch of the *same* Rayleigh line. This also brings to light another reason why the supersonic stagnation curve must lie above the subsonic stagnation curve. If this were not so, a shock would exhibit a decrease in entropy, which is not correct.

If you recall the information from Section 9.7 dealing with the correlation of Fanno flow and shocks, it should now be apparent that the end points of a normal shock can represent the intersection of a Fanno line and a Rayleigh line as shown in Figure 10.10. Remember that these Fanno and Rayleigh lines are for the same mass velocity (mass flow per unit area).

Example 10.5 Air enters a constant-area duct with a Mach number of 1.6, a temperature of 200 K, and a pressure of 0.56 bar (Figure E10.5). After some heat transfer a normal shock occurs, whereupon the area is reduced as shown. At the exit the Mach number is found to be 1.0 and the pressure is 1.20 bar. Compute the amount and direction of heat transfer.

It is not known whether a heating or cooling process is involved. We construct the T - s diagram under the assumption that cooling takes place and will find out if this is correct. The flow from 3 to 4 is isentropic; thus

$$p_{t3} = p_{t4} = \frac{p_{t4}}{p_4} p_4 = \left(\frac{1}{0.5283} \right) (1.20) = 2.2714 \text{ bar}$$


Figure E10.5

Note that point 3 is on the same Rayleigh line as point 1 and this permits us to compute M_2 through the use of the Rayleigh table. This approach might not have occurred to us had we not drawn the T - s diagram.

$$\frac{p_{t3}}{p_{t1}^*} = \frac{p_{t3}}{p_1} \frac{p_1}{p_{t1}} \frac{p_{t1}}{p_{t1}^*} = \left(\frac{2.2714}{0.56} \right) (0.2353)(1.1756) = 1.1220$$

From the Rayleigh table we find $M_3 = 0.481$ and from the shock table, $M_2 = 2.906$.

Now we can compute the stagnation temperatures:

$$T_{t1} = \frac{T_{t1}}{T_1} T_1 = \left(\frac{1}{0.6614} \right) (200) = 302 \text{ K}$$

$$T_{t2} = \frac{T_{t2}}{T_t^*} \frac{T_t^*}{T_{t1}} T_{t1} = (0.6629) \left(\frac{1}{0.8842} \right) (302) = 226 \text{ K}$$

and the heat transfer:

$$q = c_p(T_{t2} - T_{t1}) = (1000)(226 - 302) = -7.6 \times 10^4 \text{ J/kg}$$

The minus sign indicates a cooling process that is consistent with the Mach number's increase from 1.60 to 2.906.

10.8 THERMAL CHOKING DUE TO HEATING

In Section 5.7 we discussed *area choking*, and in Section 9.8, *friction choking*. In Fanno flow, recall that once sufficient duct was added, or the receiver pressure was lowered far enough, we reached a Mach number of unity at the end of the duct. Further reduction of the receiver pressure could not affect conditions in the flow system. The addition of any more duct caused the flow to move along a new Fanno line at a reduced flow rate. You might wish to review Figure 9.11, which shows this physical situation along with the corresponding $T-s$ diagram.

Subsonic Rayleigh flow is quite similar. Figure 10.11 shows a given duct fed by a large tank and converging nozzle. Once sufficient heat has been added, we reach Mach 1 at the end of the duct. The $T-s$ diagram for this is shown as path 1–2–3. This is called *thermal choking*. It is assumed that the receiver pressure is at p_3 or below.

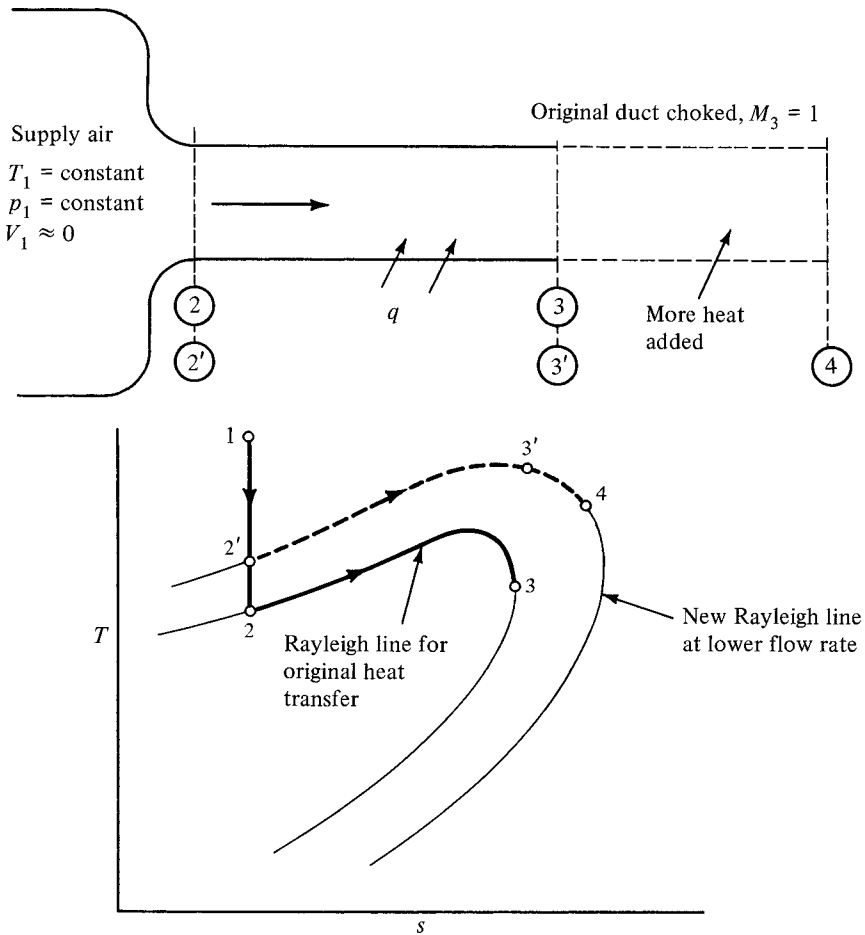


Figure 10.11 Addition of more heat when choked.

Reduction of the receiver pressure below p_3 would not affect the flow conditions inside the system. However, the addition of more heat will change these conditions.

Now suppose that we add more heat to the system. This would probably be done by increasing the heat transfer rate through the walls of the original duct. However, it is more convenient to indicate the additional heat transfer at the original rate in an extra piece of duct, as shown in Figure 10.11. The only way that the system can reflect the required additional entropy change is to move to a new Rayleigh line at a *decreased* flow rate. This is shown as path 1-2'-3'-4 on the $T-s$ diagram. Whether or not the exit velocity remains sonic depends on how much extra heat is added and on the receiver pressure imposed on the system.

As a specific example of choked flow we return to the combustion chamber of Example 10.4, which had the maximum amount of heat addition possible, assuming that the free-stream air flow entered the chamber with no change in velocity. We now consider what happens as more fuel (heat) is added.

Example 10.6 Continuing with Example 10.4, let us add sufficient fuel to raise the outlet stagnation temperature to 3000°R . Assume that the receiver pressure is very low so that sonic velocity still exists at the exit. The additional entropy generated by the extra fuel can only be accommodated by moving to a new Rayleigh line at a decreased flow rate which lowers the inlet Mach number. If the chamber is fed by the same air stream some *spillage* must occur at the entrance. This produces a region of external diffusion, as shown in Figure E10.6, which is isentropic. We would like to know the Mach number at the inlet and the pressure at the exit.

Since it is isentropic from the free stream to the inlet, we know that

$$T_{i2} = T_{i1} = 413^\circ\text{R}$$

and since $M_3 = 1$, we know that $T_{i3} = T_i^*$.

Thus we can determine conditions at 2 by computing

$$\frac{T_{i2}}{T_i^*} = \frac{T_{i2}}{T_{i3}} \frac{T_{i3}}{T_i^*} = \left(\frac{413}{3000} \right) (1) = 0.1377$$

and from the Rayleigh table, $M_2 = 0.176$ and $p_2/p^* = 2.3002$.

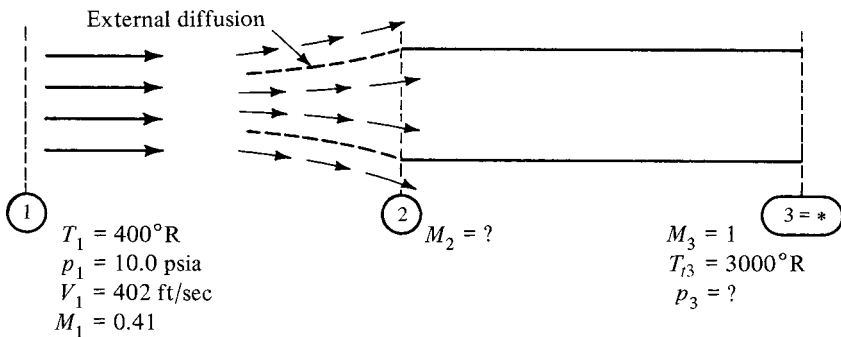


Figure E10.6

To find the pressure at the outlet we need to use both the isentropic table and the Rayleigh table.

First

$$p_2 = \frac{p_2}{p_2} \frac{p_{r2}}{p_{r1}} \frac{p_{r1}}{p_1} p_1 = (0.9786)(1) \left(\frac{1}{0.8907} \right) (10.0) = 10.99 \text{ psia}$$

then

$$p_3 = \frac{p_3}{p^*} \frac{p^*}{p_2} p_2 = (1) \left(\frac{1}{2.3002} \right) (10.99) = 4.78 \text{ psia}$$

Note that to maintain sonic velocity at the chamber exit, the pressure in the receiver must be reduced to at least 4.78 psia.

Suppose that in Example 10.6 we were unable to lower the receiver pressure to 4.78 psia. Assume that as fuel was added to raise the stagnation temperature to 3000°R, the pressure in the receiver was maintained at its previous value of 5.15 psia. This would lower the flow rate even further as we move to another Rayleigh line with a lower mass velocity, *and* this time the exit velocity would not be quite sonic. Although both M_2 and M_3 are unknown, two pieces of information are given at the exit. Two simultaneous equations could be written, but it is easier to use tables and a trial-and-error solution. The important thing to remember is that once a *subsonic* flow is *thermally choked*, the addition of more heat causes the flow rate to decrease. Just how much it decreases and whether or not the exit remains sonic depends on the pressure that exists after the exit.

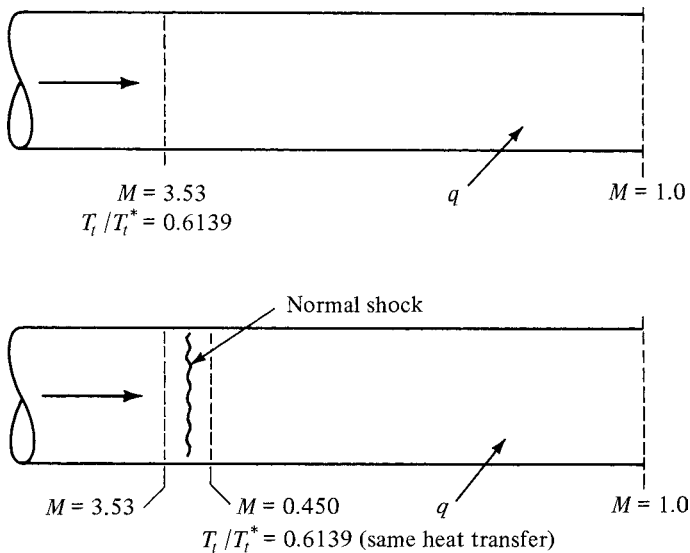


Figure 10.12 Influence of shock on maximum heat transfer.

The parallel between choked Rayleigh and Fanno flow does not quite extend into the *supersonic* regime. Recall that for choked Fanno flow the addition of more duct introduced a shock in the duct which permitted considerably more friction length to the sonic point (see Figure 9.12). Figure 10.12 shows a Mach 3.53 flow that has $T_t/T_t^* = 0.6139$. For a given total temperature at this section, the value of T_t/T_t^* is a direct indication of the amount of heat that can be added to the choke point. If a normal shock were to occur at this point, the Mach number after the shock would be 0.450, which also has $T_t/T_t^* = 0.6139$. Thus the heat added after the shock is exactly the same as it would be without the shock.

The situation above is not surprising since heat transfer is a function of stagnation temperature, and this does not change across a shock (see Problem 10.11). To do any good, the shock must occur at some location *preceding* the Rayleigh flow. Perhaps this would be in a converging–diverging nozzle which produces the supersonic flow. Or if this were a situation similar to Example 10.4 (only supersonic), a detached shock would occur in the free stream ahead of the duct. In either case, the resulting subsonic flow could accommodate additional heat transfer.

10.9 WHEN γ IS NOT EQUAL TO 1.4

As indicated earlier, the Rayleigh flow table in Appendix J is for $\gamma = 1.4$. The behavior of T_t/T_t^* , the dominant heating function, for $\gamma = 1.13, 1.4$, and 1.67 is given in Figure 10.13 up to $M = 5$. Here we can see that the dependence on γ becomes rather noticeable for $M \geq 1.4$. Thus below this Mach number, the tabulations in Appendix J can be used with little error for any γ . This means that for subsonic flows, where most Rayleigh flow problems occur, there is little difference

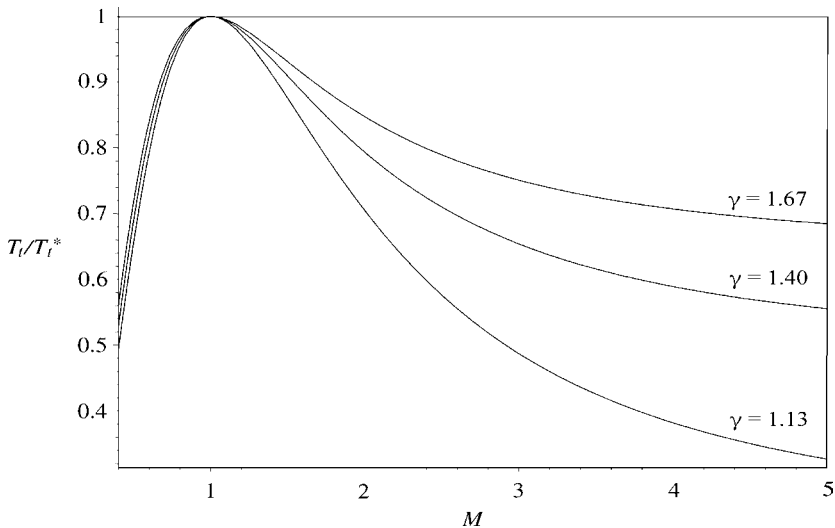


Figure 10.13 Rayleigh flow T_t/T_t^* versus Mach number for various values of γ .

between the various gases. The desired accuracy of results will govern how far you want to carry this approximation into the supersonic region.

Strictly speaking, these curves are only representative for cases where γ variations are *negligible within the flow*. However, they offer hints as to what magnitude of changes are to be expected in other cases. Flows where γ variations are *not negligible within the flow* are treated in Chapter 11.

10.10 (OPTIONAL) BEYOND THE TABLES

As illustrated in Chapter 5, one can eliminate a lot of interpolation and get accurate answers for any ratio of the specific heats γ and/or any Mach number by using a computer utility such as MAPLE. The calculation of equation (10.55) is well suited to this section.

Example 10.7 Let us rework some aspects of Example 10.3 without using the Rayleigh table. For $M_2 = 0.41$, calculate the value of T_t/T_t^* . The procedure follows equation (10.55):

$$\frac{T_t}{T_t^*} = \frac{2(1 + \gamma)M^2}{(1 + \gamma M^2)^2} \left(1 + \frac{\gamma - 1}{2} M^2 \right) \tag{10.55}$$

Let

- $g \equiv \gamma$, a parameter (the ratio of specific heats)
- $X \equiv$ the independent variable (which in this case is M_2)
- $Y \equiv$ the dependent variable (which in this case is T_t/T_t^*)

Listed below are the precise inputs and program that you use in the computer.

```
[ > g2 := 1.4:    X2 := 0.41:
[ > Y2 := ((2*(1 + g2)*X2^2)/(1 + g2*X2^2)^2))*((1 + (g2 -
    1)*(X2^2)/2));
                                Y2 := .5465084066
```

Now we can proceed to find the new Mach number at station 3. The new value of Y is $(621)(0.5465)/(413) = 0.827$. Now we use equation (10.55) but solve for M_3 as shown below. Note that since M is implicit in the equation, we are going to utilize “fsolve.” Let

- $g \equiv \gamma$, a parameter (the ratio of specific heats)
- $X \equiv$ the dependent variable (which in this case is M_3)
- $Y \equiv$ the independent variable (which in this case is T_t/T_t^*)

Listed below are the precise inputs and program that you use in the computer.

```
[ > g3 := 1.4:      Y3 := 0.8217:
[ > fsolve(Y3 = (((2*(1 + g3)*X3^2)/(1 + g3*X3^2)^2))*((1 + (g3 -
  1)*(X3^2)/2)),X3, 0..1);
                                     .6025749883
```

The answer of $M_3 = 0.6026$ is consistent with that obtained in Example 10.3. We can now proceed to calculate the required static properties, but this will be left as an exercise for the reader.

10.11 SUMMARY

We have analyzed steady one-dimensional flow in a constant-area duct with heat transfer but with negligible friction. Fluid properties can vary in a number of ways, depending on whether the flow is subsonic or supersonic, plus consideration of the direction of heat transfer. However, these variations are easily predicted and are summarized in Table 10.2.

As we might expect, the property variations that occur in subsonic Rayleigh flow follow an intuitive pattern, but we find that the behavior of a supersonic system is quite different. Notice that even in the absence of friction, heating causes the stagnation pressure to drop. On the other hand, a cooling process predicts an increase in p_t . This is difficult to achieve in practice (except by latent cooling), due to frictional effects that are inevitably present.

Perhaps the most significant equations in this unit are the general ones:

$$\rho V = G \tag{10.4}$$

$$h_{t1} + q = h_{t2} \tag{10.5}$$

$$p + \frac{GV}{g_c} = \text{const} \tag{10.8}$$

Table 10.2 Fluid Property Variation for Rayleigh Flow

Property	Heating		Cooling	
	$M < 1$	$M > 1$	$M < 1$	$M > 1$
Velocity	Increase	Decrease	Decrease	Increase
Mach number	Increase	Decrease	Decrease	Increase
Enthalpy ^a	Increase/decrease	Increase	Increase/decrease	Decrease
Stagnation enthalpy ^a	Increase	Increase	Decrease	Decrease
Pressure	Decrease	Increase	Increase	Decrease
Density	Decrease	Increase	Increase	Decrease
Stagnation pressure	Decrease	Decrease	Increase	Increase
Entropy	Increase	Increase	Decrease	Decrease

^aAlso temperature if the fluid is a perfect gas.

An alternative way of expressing the latter equation is to say that the *impulse function* remains constant:

$$pA + \frac{\dot{m}V}{g_c} = \text{constant} \quad (10.11)$$

Along with these equations you should keep in mind the appearance of Rayleigh lines in the p - v and h - s diagrams (see Figures 10.2 and 10.4) as well as the stagnation reference curves (see Figure 10.5). Remember that each Rayleigh line represents points with the same mass velocity and impulse function, and a normal shock can connect two points on opposite branches of a Rayleigh line which have the same stagnation enthalpy.

Working equations for perfect gases were developed and then simplified with the introduction of a * reference point. This permitted the production of tables that help immeasurably in problem solution. Do not forget that the * condition for Rayleigh flow is *not* the same as those used for either isentropic or Fanno flow. *Thermal choking* occurs in heat addition problems, and the reaction of a choked system to the addition of more heat is quite similar to the way that a choked Fanno system reacts to the addition of more duct. Remember: Drawing a good T - s diagram helps clarify your thinking on any given problem.

PROBLEMS

In the problems that follow, you may assume that all ducts are of constant area unless specifically indicated otherwise. In these constant-area ducts you may neglect friction when heat transfer is involved, and you may neglect heat transfer when friction is indicated. You may neglect both heat transfer and friction in sections of varying area.

- 10.1. Air enters a constant-area duct with $M_1 = 2.95$ and $T_1 = 500^\circ\text{R}$. Heat transfer decreases the outlet Mach number to $M_2 = 1.60$.
 - (a) Compute the exit static and stagnation temperatures.
 - (b) Find the amount and direction of heat transfer.
- 10.2. At the beginning of a duct the nitrogen pressure is 1.5 bar, the stagnation temperature is 280 K, and the Mach number is 0.80. After some heat transfer the static pressure is 2.5 bar. Determine the direction and amount of heat transfer.
- 10.3. Air flows at the rate of 39.0 lbm/sec with a Mach number of 0.30, a pressure of 50 psia, and a temperature of 650°R. The duct has a 0.5-ft² cross-sectional area. Find the final Mach number, the stagnation temperature ratio T_{t2}/T_{t1} , and the density ratio ρ_2/ρ_1 , if heat is added at the rate of 290 Btu/lbm of air.
- 10.4. In a flow of air $p_1 = 1.35 \times 10^5 \text{ N/m}^2$, $T_1 = 500 \text{ K}$, and $V_1 = 540 \text{ m/s}$. Heat transfer occurs in a constant-area duct until the ratio $T_{t2}/T_{t1} = 0.639$.
 - (a) Compute the final conditions M_2 , p_2 , and T_2 .
 - (b) What is the entropy change for the air?

- 10.5.** At some point in a flow system of oxygen $M_1 = 3.0$, $T_{t1} = 800^\circ\text{R}$, and $p_1 = 35$ psia. At a section farther along in the duct, the Mach number has been reduced to $M_2 = 1.5$ by heat transfer.
- Find the static and stagnation temperatures and pressures at the downstream section.
 - Determine the direction and amount of heat transfer that took place between these two sections.
- 10.6.** Show that for a constant-area, frictionless, steady, one-dimensional flow of a perfect gas, the maximum amount of heat that can be added to the system is given by the expression

$$\frac{q_{\max}}{c_p T_1} = \frac{(M_1^2 - 1)^2}{2M_1^2(\gamma + 1)}$$

- 10.7.** Starting with equation (10.53), show that the maximum (static) temperature in Rayleigh flow occurs when the Mach number is $\sqrt{1/\gamma}$.
- 10.8.** Air enters a 15-cm-diameter duct with a velocity of 120 m/s. The pressure is 1 atm and the temperature is 100°C .
- How much heat must be added to the flow to create the maximum (static) temperature?
 - Determine the final temperature and pressure for the conditions of part (a).
- 10.9.** The 12-in.-diameter duct shown in Figure P10.9 has a friction factor of 0.02 and no heat transfer from section 1 to 2. There is negligible friction from 2 to 3. Sufficient heat is added in the latter portion to just choke the flow at the exit. The fluid is nitrogen.

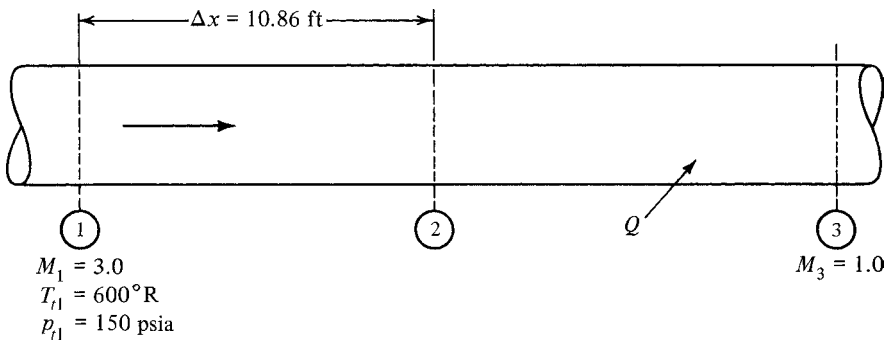


Figure P10.9

- Draw a $T-s$ diagram for the system, showing the complete Fanno and Rayleigh lines involved.
- Determine the Mach number and stagnation conditions at section 2.
- Determine the static and stagnation conditions at section 3.
- How much heat was added to the flow?

- 10.10.** Conditions just prior to a standing normal shock in air are $M_1 = 3.53$, with a temperature of 650°R and a pressure of 12 psia.
- Compute the conditions that exist just after the shock.
 - Show that these two points lie on the same Fanno line.
 - Show that these two points lie on the same Rayleigh line.
- 10.11.** Air enters a duct with a Mach number of 2.0, and the temperature and pressure are 170 K and 0.7 bar, respectively. Heat transfer takes place while the flow proceeds down the duct. A converging section ($A_2/A_3 = 1.45$) is attached to the outlet as shown in Figure P10.11, and the exit Mach number is 1.0. Assume that the inlet conditions and exit Mach number remain fixed. Find the amount and direction of heat transfer:
- If there are no shocks in the system.
 - If there is a normal shock somewhere in the duct.
 - For part (b), does it make any difference where the shock occurs?

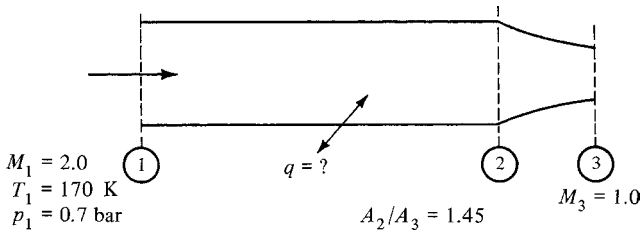


Figure P10.11

- 10.12.** In the system shown in Figure P10.12, friction exists only from 2 to 3 and from 5 to 6. Heat is removed between 7 and 8. The Mach number at section 9 is unity. Draw the $T-s$ diagram for the system, showing both the static and stagnation curves. Are points 4 and 9 on the same horizontal level?

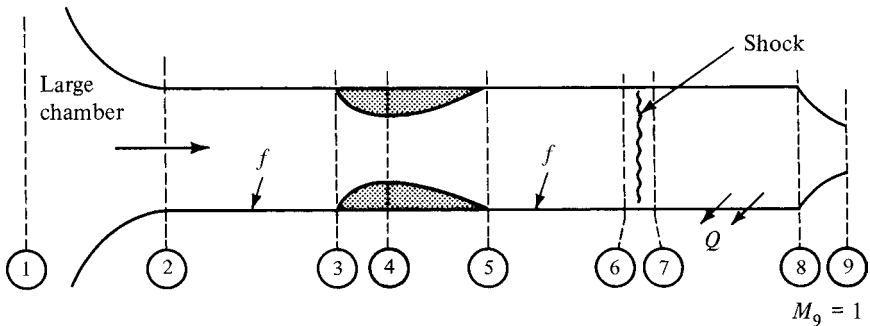


Figure P10.12

- 10.13.** Oxygen is stored in a large tank where the pressure is 40 psia and the temperature is 500°R . A DeLaval nozzle with an area ratio of 3.5 is attached to the tank and

discharges into a constant-area duct where heat is transferred. The pressure at the duct exit is equal to 15 psia. Determine the amount and direction of heat transfer if a normal shock stands where the nozzle is attached to the duct.

- 10.14.** Air enters a converging–diverging nozzle with stagnation conditions of $35 \times 10^5 \text{ N/m}^2$ and 450 K. The area ratio of the nozzle is 4.0. After passing through the nozzle, the flow enters a duct where heat is added. At the end of the duct there is a normal shock, after which the static temperature is found to be 560 K.
- (a) Draw a T – s diagram for the system.
 - (b) Find the Mach number after the shock.
 - (c) Determine the amount of heat added in the duct.
- 10.15.** A converging-only nozzle feeds a constant-area duct in a system similar to that shown in Figure 10.11. Conditions in the nitrogen supply chamber are $p_1 = 100 \text{ psia}$ and $T_1 = 600^\circ\text{R}$. Sufficient heat is added to choke the flow ($M_3 = 1.0$) and the Mach number at the duct entrance is $M_2 = 0.50$. The pressure at the exit is equal to that of the receiver.
- (a) Compute the receiver pressure.
 - (b) How much heat is transferred?
 - (c) Assume that the receiver pressure remains fixed at the value calculated in part (a) as more heat is added in the duct. The flow rate must decrease and the flow moves to a new Rayleigh line, as indicated in Figure 10.11. Is the Mach number at the exit still unity, or is it less than 1? (*Hint:* Assume any lower Mach number at section 2. From this you can compute a new p^* which should help answer the question. You can then compute the heat transferred and show this to be greater than the initial value. A T – s diagram might also help.)

10.16. Draw the stagnation curves for both Rayleigh lines shown in Figure 10.11.

10.17. Recall the expression $p_t A^* = \text{const}$ [see equation (5.35)].

- (a) State whether the following equations are true or false for the system shown in Figure P10.17.
 - (i) $p_{t1} A_1^* = p_{t3} A_3^*$
 - (ii) $p_{t3} A_3^* = p_{t5} A_5^*$
- (b) Draw a T – s diagram for the system shown in Figure P10.17. Include both static and stagnation curves. Are the flows from 1 to 2 and from 4 to 5 on the same Fanno line?

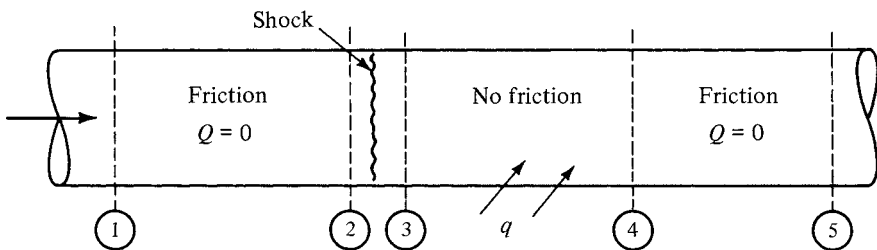


Figure P10.17

10.18. In Figure P10.18, points 1 and 2 represent flows on the same Rayleigh line (same mass flow rate, same area, same impulse function) and are located such that $s_1 = s_2$ as shown. Now imagine that we take the fluid under conditions at 1 and isentropically expand to 3. Further, let's imagine that the fluid at 2 undergoes an isentropic compression to 4.

- (a) If 3 and 4 are coincident state points (same T and s), prove that A_3 is greater than, equal to, or less than A_4 .
- (b) Now suppose that points 3 and 4 are not necessarily coincident but it is known that the Mach number is unity at each point (i.e., $3 \equiv 1_s^*$ and $4 \equiv 2_s^*$).
 - (i) Is V_3 equal to, greater than, or less than V_4 ?
 - (ii) Is A_3 equal to, greater than, or less than A_4 ?

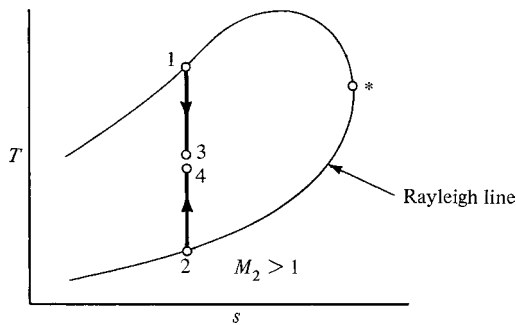


Figure P10.18

10.19. (a) Plot a Rayleigh line to scale in the $T-s$ plane for air entering a duct with a Mach number of 0.25, a static pressure of 100 psia, and a static temperature of 400°R . Indicate the Mach number at various points along the curve.

(b) Add the stagnation curve to the $T-s$ diagram.

10.20. Shown in Figure P10.20 is a portion of a $T-s$ diagram for a system that has steady, one-dimensional flow of a perfect gas with no friction. Heat is added to subsonic flow in the constant-area duct from 1 to 2. Isentropic, variable-area flow occurs from 2 to 3

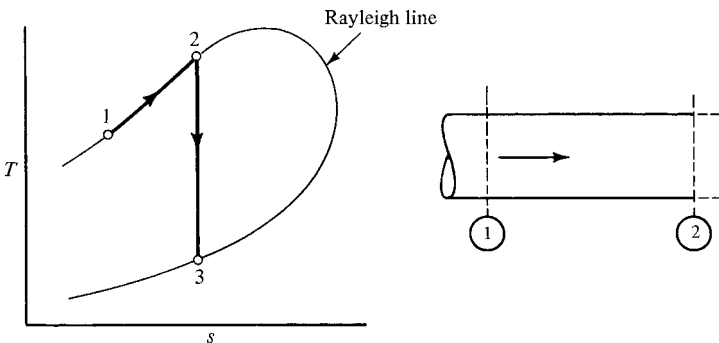


Figure P10.20

3. More heat is added in a constant-area duct from 3 to 4. There are no shocks in the system.

- (a) Complete the diagram of the physical system. (*Hint:* To do this, you must prove that A_3 is greater than, equal to, or less than A_2 .)
- (b) Sketch the entire flow system in the $p-v$ plane.
- (c) Complete the $T-s$ diagram for the system.

10.21. Consider steady one-dimensional flow of a perfect gas through a horizontal duct of infinitesimal length (dx) with a constant area (A) and perimeter (P). The flow is known to be isothermal and *has heat transfer as well as friction*. Starting with the fundamental momentum equation in the form

$$\sum F_x = \frac{\dot{m}}{g_c} (V_{out_x} - V_{in_x})$$

examine the infinitesimal length of the duct and (introducing basic definitions as required) show that

$$\frac{dp}{p} + \frac{\gamma M^2 f}{2} \frac{dx}{D_e} + \frac{\gamma M^2}{2} \frac{dV^2}{V^2} = 0$$

10.22. (a) By the method of approach used in Section 9.4 [see equations (9.25) through (9.27)], show that the entropy change between two points in Rayleigh flow can be represented by the following expression if the fluid is a perfect gas:

$$\frac{s_2 - s_1}{R} = \ln \left(\frac{M_2}{M_1} \right)^{2\gamma/(\gamma-1)} \left(\frac{1 + \gamma M_1^2}{1 + \gamma M_2^2} \right)^{(\gamma+1)/(\gamma-1)}$$

- (b) Introduce the * reference condition and obtain an expression for $(s^* - s)/R$.
- (c) (*Optional*) Program the expression developed in part (b) and compute a table (for $\gamma = 1.4$) of $(s^* - s)/R$ versus Mach number. Check your values with those listed in Appendix J.

CHECK TEST

You should be able to complete this test without reference to material in the chapter.

- 10.1.** A Rayleigh line represents the locus of points that have the same _____ and _____.
- 10.2.** Fill in the blanks in Table CT10.2 to indicate whether the properties *increase, decrease, or remain constant* in the case of Rayleigh flow.

Table CT10.2 Fluid Property Variation for Rayleigh Flow

Property	Heating		Cooling	
	$M < 1$	$M > 1$	$M < 1$	$M > 1$
Mach number				
Density				
Entropy				
Stagnation pressure				

10.3. Sketch a Rayleigh line in the $p-v$ plane, together with lines of constant entropy and constant temperature (for a typical perfect gas). Indicate directions of increasing entropy and temperature. Show regions of subsonic and supersonic flow.

10.4. Air flows in the system shown in Figure CT10.4.

- (a) Find the temperature in the large chamber at location 3.
- (b) Compute the amount and direction of heat transfer.

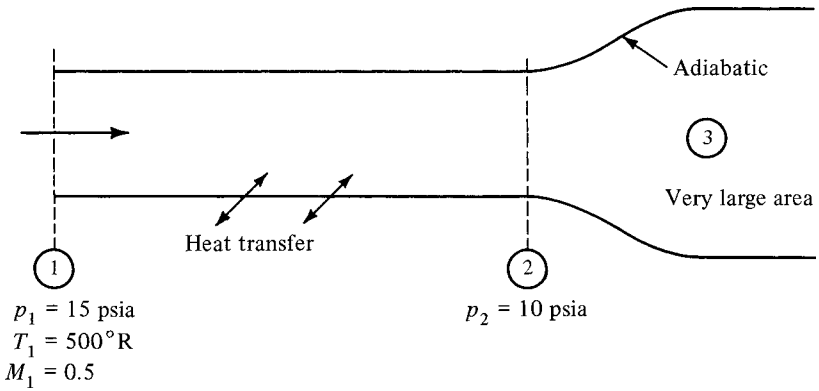


Figure CT10.4

10.5. Sketch the $T-s$ diagram for the system shown in Figure CT10.5. Include in the diagram both the static and stagnation curves.

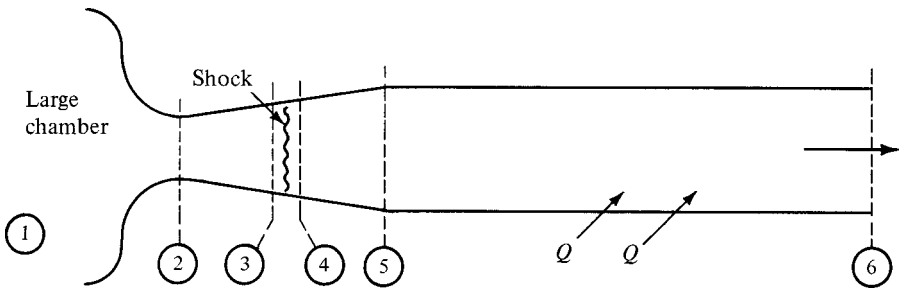


Figure CT10.5

10.6. Work Problem 10.14.

Chapter 11

Real Gas Effects

11.1 INTRODUCTION

The control-volume equations for steady, one-dimensional flow introduced in previous chapters are summarized below for two arbitrary locations. These equations are given here in their more general form, before being specialized to perfect gases with constant specific heats.

We first include relations from the O^2 law.

State:

$$p = Z\rho RT \quad (1.13 \text{ modified})$$

$$du = c_v dT \quad \text{and} \quad dh = c_p dT \quad (1.43, 1.44)$$

We then write down the equations for mass and energy conservation as well as the momentum equation.

Continuity:

$$\rho_1 A_1 V_1 = \rho_2 A_2 V_2 \quad (2.30)$$

Energy:

$$h_{t1} + q_{1-2} = h_{t2} \quad (\text{from 3.19})$$

Momentum:

$$\sum \mathbf{F} = \frac{\dot{m}}{g_c} (\mathbf{V}_{\text{out}} - \mathbf{V}_{\text{in}}) \quad (3.45)$$

Note that equation (1.13) has been modified by the introduction of Z , the compressibility factor, which up to now has been implicitly assumed to be 1. The second law

is not listed because it often does not appear explicitly: rather, having an effect on the direction of irreversible processes.

The set of equations above is the starting point for a study of gas dynamics with real gas effects. What needs to be done first is to account for any deviations from perfect gas behavior that may occur. This is often accomplished through a dependence of the factor Z on temperature and pressure, as discussed in Section 11.5. Moreover, one needs to find the enthalpies from the integration of equation (1.44) because even for gases that obey equation (1.13), the specific heats may vary with temperature when the temperature changes are large enough. This has been done in the development of gas tables by Keenan and Kay (Ref. 31).

We begin the chapter with a brief description of the microscopic structure of gases, to explain why monatomic gases have a different γ than diatomic gases (such as air), and why polyatomic gases have yet a different ratio of specific heats. Next, we introduce the concept of the nonperfect or real gas and elaborate on why temperature may govern the behavior of the heat capacities. In this book we restrict ourselves to situations where there is no dissociation (the breakup of molecules) and where the flow remains below the hypersonic regime. As a result, the major contribution to the heat capacity variations will result from the temperature activation of vibrational internal energies in diatomic and polyatomic molecules. We then discuss how to deal with the equations presented at the start of this section for nonperfect gases.

11.2 OBJECTIVES

After completing this chapter successfully, you should be able to:

1. Identify which microscopic properties are responsible for the macroscopic characteristics of temperature and pressure.
2. Describe three categories of molecular motion that contribute to the heat capacities.
3. List which of these categories of motion are present in monoatomic, diatomic, and polyatomic molecules.
4. Define
 - (a) relative pressure and relative volume.
 - (b) reduced pressure and reduced temperature.
5. Make simple process calculations (such as $s = \text{const}$, $p = \text{const}$, etc.) with the aid of a gas table for a semi-perfect gas.
6. Compute entropy, enthalpy, and internal energy changes for various processes with the aid of the gas table.
7. Given the pressure and temperature, determine the volume of a given quantity of gas by using the generalized compressibility chart.
8. Analyze the supersonic nozzle problem with real gas effects utilizing "Method I" when all conditions at the plenum are given together with either exit temperature, exit pressure, or exit Mach number.

9. (*Optional*) Be able to work the normal shock problem with real gas effects utilizing “Method I” when all properties upstream of the shock are known.

11.3 WHAT'S REALLY GOING ON

Up to now, we have assumed that the specific heats do not ever change and thus that γ remains constant during any flow process. This has yielded useful, closed-form equations for perfect gases with $Z \approx 1.0$. We are now ready to explore what results from γ -variations within the flow, as these represent more accurately many practical situations (especially those in a jet engine or a rocket motor). There are several reasons why γ may change and they may be related to changes in the chemical composition of the gas (atoms or molecules) as well as to the level of temperature and to some extent pressure of operation. In addition, the kinetics of how a flow approaches equilibrium can affect γ changes, and thus the problem can be relatively complicated. *Theoretically*, γ can never equal or be less than 1 and can never exceed $\frac{5}{3}$ (see Reference 26). *In practice*, changes in γ are limited to between about 1.1 and 1.7 for nearly all gases of interest. However, this narrow range of values can be very significant because, as we have seen, γ is often encountered as an exponent.

Microscopic Model of Gases

Up to now we have taken the macroscopic approach (as mentioned in Chapter 1) dealing with observable and measurable properties. This leads to the axiomatic approach of thermodynamics, which is found in the important thermodynamic laws and corollaries. But ordinary gases really consist of a myriad of atoms and/or molecules that are in *continuous random motion* with respect to one another, in addition to any mean-mass motion that they may have with respect to a given frame of reference.

The kinetic energy of this *random motion* forms the basis for the property that we call the temperature. Thus the random motion makes up the *static* temperature of the gas, whereas the kinetic energy of the mean-mass motion is the sole contributor to the difference between the static and stagnation temperatures. These molecules are also continuously changing direction as they collide and exchange momentum with one another. As they collide with a physical surface, the momentum exchange gives rise to a property that we call the pressure.

Because these energies are distributed among an incredibly large number of constituent particles, we only observe averages, which under equilibrium conditions tend to be quite predictable. However, the concept of temperature becomes considerably more complicated under nonequilibrium conditions since the so-called internal degrees of freedom have different relaxation times. We shall speak more about this later.

Molecular Structure

Monatomic gases consist of only one individual atom per molecule. These gases are well represented by the inert gases (such as helium, neon, and argon) at standard

pressures. They exhibit constant γ over a very wide range of temperatures and normal pressures. (Other gases yield monatomic constituents at sufficiently high temperatures and low enough pressures for dissociation to take place.)

Diatomic gases have a molecule that consists of two atoms. They are the most common type of gases, with oxygen and nitrogen (the main constituents of air) as the best examples. Diatomic gases are more complicated than monatomic because they have an active internal structure and may be internally rotating and even vibrating in addition to translating. (Reference 27 includes a rigorous discussion of diatomic gas thermodynamics.)

Polyatomic gases consist of three or more atoms per molecule (e.g., carbon dioxide). These share the same attributes as diatomic gases except for extra vibrational modes that depend on the number of atoms in each molecule.

Thus, as a minimum, there are three categories of molecular *degrees of freedom*: *translation*, *rotation*, and *vibration*. Each contributes to the heat capacities because each acts as a storage mode of energy for the gas. This is another way of saying that each degree of freedom contributes to the molecule's ability to absorb energy, thus affecting the eventual gas temperature. Figure 11.1 illustrates these internal degrees of freedom for a diatomic molecule. Single atoms are not subject to vibrational activation, and molecules consisting of three or more atoms have more than one vibrational degree of freedom. (Additional information is presented in Refs. 28, 29, and 30.)

Nonequilibrium Effects in Gas Dynamics

As the Mach number goes supersonic inside a nozzle, overall temperature and pressure drop significantly and nonequilibrium effects may start to become apparent. We are referring here to a lag in certain property changes, such as the *time delay* or *inertia* of the specific heat capacities to follow the local temperature changes instantaneously. This will affect the behavior of property changes in expansions through sufficiently short nozzles because γ may remain essentially unchanged. In such cases (when γ remains constant) the analysis is referred to as the *frozen-flow limit*, which is considerably easier to calculate than *equilibrium flow* where the properties react instantly according to the local static temperature and pressure profiles. Criteria governing when to expect frozen flow relate to the activation, relaxation, or reaction times compared

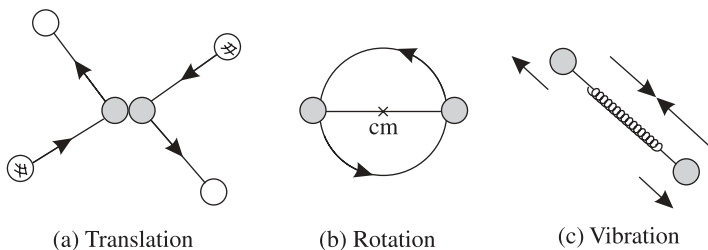


Figure 11.1 Translation, rotation, and vibration for a diatomic molecule.

to travel times through nozzles and other flow devices and are given in the literature (e.g., Ref. 26).

For example, in rocket propulsion, all preliminary calculations are made using the frozen-flow limit because of its simplicity. According to Sutton and Biblarz (Ref. 24), this method tends to *underestimate* the performance of typical rockets by up to 4%. On the other hand, the *instantaneous chemical equilibrium limit* (also known as *shifting equilibrium*), which is a great deal more complex, tends to *overestimate* the performance of typical rockets by up to 4%. Since the assumptions of isentropic flow in ideal systems (i.e., no flow separation, friction, shocks, or major instabilities) may carry an inherent error of up to $\pm 10\%$, frozen-flow analysis is the preferred approach. Noncombustion systems such as electrically heated rockets and hypersonic wind tunnels behave in ways similar to chemical rockets; because of their high temperatures, air dissociates and begins to react chemically. Nonequilibrium flows are sometimes desirable, as in the case of the gas dynamic laser (GDL), and are present in nearly all hypersonic situations.

Normal shock results from the formulations of Chapter 6 are shown in Figures 6.9 and 6.10. The variability of the pressure ratio with γ for a given Mach number is considerably less than that of the temperature ratio across the shock. It should be mentioned, however, that property changes across a shock front are anticipated to reflect the γ upstream of the shock. Adjustments to temperature changes are not likely to take place within the shock but in a relaxation region downstream of it. That is, the flow through the shock front itself is *frozen*. However, the gas properties will finally approach their equilibrium values in a small region behind the shock. The same arguments hold for oblique shocks.

On the other hand, Prandtl–Meyer expansions are much less prone to nonequilibrium because the flow always starts and ends supersonic. This means that the temperature swings are restricted and, more important, the gas is typically cold enough so that its molecules are not vibrationally activated to begin with.

11.4 SEMIPERFECT GAS BEHAVIOR, DEVELOPMENT OF THE GAS TABLE

A semiperfect gas is a gas that can be described with the perfect gas equation of state but with an allowance made for variation of the specific heats with temperature. These are also called *thermally perfect gases* or *imperfect gases* in the literature, and unfortunately, there is no consistency among the various authors. Figure 11.2 shows the variation of c_p and γ for diatomic and polyatomic semiperfect gases as a function of temperature. The different plateaus depend on the activation of the rotational and vibrational modes of energy storage. Vibrational modes are the most critical since they manifest themselves at the higher temperatures. For example, even below room temperature, air molecules (which are mostly nitrogen) have fully active translational and rotational degrees of freedom, but only at temperatures above about 1000 K does vibration begin to change the value of γ significantly (because of its relatively higher activation energy).

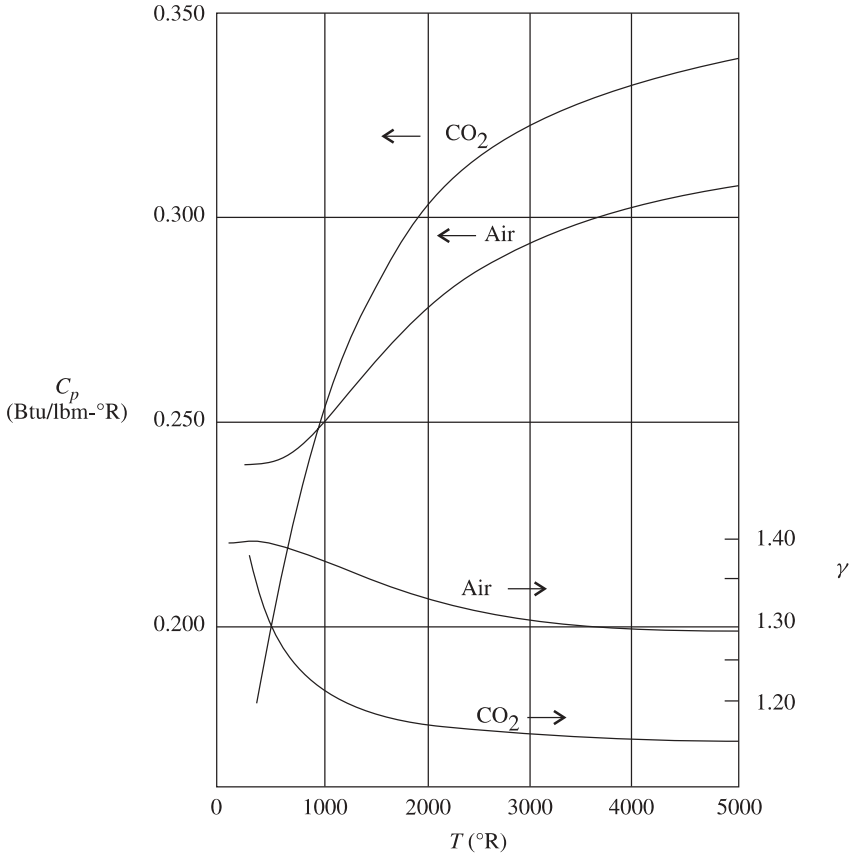


Figure 11.2 Specific heat at constant pressure and specific heat ratio for 2 common gases.

Diatomic and polyatomic gases may change their molecular structure substantially as both the temperature and pressure decrease, such as in the flow through a supersonic nozzle. This also happens as a result of chemical reactions in combustion chambers. Moreover, effects on γ of vibrational excitation and of dissociation (i.e., the breakup of molecules) often counteract each other in complicated ways, as shown in Refs. 29 and 30. Moreover, when flow kinetic effects manifest themselves, as in high-speed flows, the problem can only be solved with the aid of computers. It has been found, however, that the introduction of a *constant* or *effective average- γ* approach can be very useful, and preliminary analysis of propulsion systems is often based on such an approach. We shall see more about this in Section 11.6.

Gas Table

The perfect gas equation of state is reasonably accurate and can be used over a wide range of temperatures. However, the semiperfect gas approach is unavoidable

in combustion-driven propulsion systems. A table in Appendix L (Table 2 in Ref. 31) shows values of c_p and c_v for air at low pressures as a function of temperature.

Recall that as long as we can say that $p = \rho RT$, the internal energy and enthalpy are functions of temperature *only*. From Chapter 1 we then have

$$du = c_v dT \quad \text{and} \quad dh = c_p dT \quad (1.43, 1.44)$$

Arbitrarily assigning $u = 0$ and $h = 0$ when $T = 0$, we can obtain integrals for u and h :

$$u = \int_0^T c_v dT \quad \text{and} \quad h = \int_0^T c_p dT \quad (11.1, 11.2)$$

Now, when the temperature changes are sufficiently large, we must obtain the functional relationships between the specific heats and temperature and perform the integration. This has been done for commonly used gases, with the results tabulated in the *Gas Tables* (Ref. 31).

Once the table entries have been constructed for a particular gas, we can obtain values of u and h directly at any desired temperature within the tabulated range. But how do we compute entropy changes? Consider that for any substance

$$T ds = dh - v dp \quad (1.41)$$

and if the substance obeys the perfect gas law we know that

$$dh = c_p dT \quad (1.44)$$

Show that the entropy change can be written as

$$ds = c_p \frac{dT}{T} - R \frac{dp}{p}$$

We integrate each term:

$$\int_1^2 ds = \int_1^2 c_p \frac{dT}{T} - \int_1^2 R \frac{dp}{p}$$

If we define

$$\phi \equiv \int_0^T c_p \frac{dT}{T} \quad (11.3)$$

then

$$\Delta s_{1-2} = \phi_2 - \phi_1 - R \ln \frac{p_2}{p_1} \quad (11.4)$$

Note that since c_p is a known function of temperature, the integration indicated above can be performed *once*, and the result (being a function of temperature only) added as a column in our gas table. Tabulations of u , h , and ϕ versus temperature can be found in Appendix K.

Example 11.1 Air at 40 psia and 500°F undergoes an irreversible process with heat transfer to 20 psia and 1000°F. Calculate the entropy change.

From the air table (Appendix K) we obtain

$$\phi_1 = 0.7403 \text{ Btu/lbm}\cdot^\circ\text{R at } 500^\circ\text{F} \quad \text{and} \quad \phi_2 = 0.8470 \text{ Btu/lbm}\cdot^\circ\text{R at } 1000^\circ\text{F}$$

Thus

$$\begin{aligned} \Delta s_{1-2} &= 0.8470 - 0.7403 - \frac{53.3}{778} \ln \frac{20}{40} \\ \Delta s_{1-2} &= 0.1067 + 0.0685 \ln 2 = 0.1542 \text{ Btu/lbm}\cdot^\circ\text{R} \end{aligned}$$

Let us now consider an *isentropic process*. Equation (11.4) becomes

$$\Delta s_{1-2} = 0 = \phi_2 - \phi_1 - R \ln \frac{p_2}{p_1}$$

or

$$\boxed{\phi_2 - \phi_1 = R \ln \frac{p_2}{p_1}} \quad (11.5)$$

Depending on the information given, many isentropic processes can be solved directly using equation (11.5). For instance:

1. Given p_1 , p_2 , and T_1 , solve for ϕ_2 and look up T_2 .
2. Given T_1 , T_2 , and p_1 , solve directly for p_2 .

However, some problems are not this simple. If we knew v_1 , v_2 , and T_1 , solving for T_2 would be a trial-and-error problem. Let's devise a better method. We establish a reference point as shown in Figure 11.3. Now, for the isentropic process from 0 to 1, we have from equation (11.5),

$$\phi_1 - \phi_0 = R \ln \frac{p_1}{p_0} \quad (11.6)$$

But, from (11.3),

$$\phi_0 = \int_0^{T_0} c_p \frac{dT}{T} = f(T_0) \quad (11.7)$$

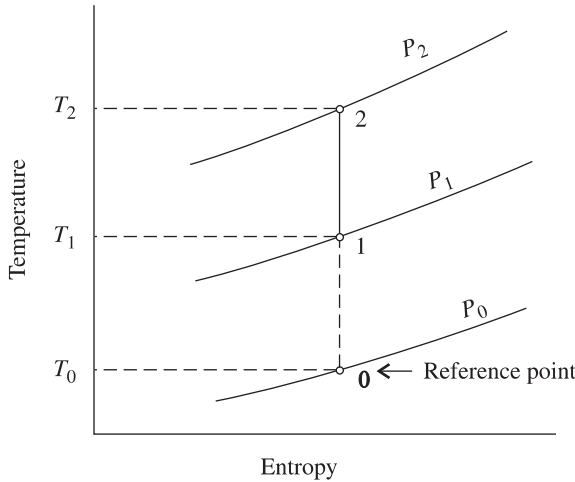


Figure 11.3 T - s diagram showing reference point.

Once the reference point has been chosen, ϕ_0 is a known constant and equation (11.6) can be thought of as

$$\phi_1 - \text{const} = R \ln \frac{p_1}{p_0} \quad (11.8)$$

Since ϕ_1 is a known function of T_1 , equation (11.8) is really telling us that the ratio p_1/p_0 is also a function only of temperature T_1 for this process. We call this ratio the *relative pressure*. In general,

$$\text{relative pressure} \equiv p_r \equiv \frac{p}{p_0} \quad (11.9)$$

These relative pressures can be computed and introduced as another column in the gas table.

What have we gained with the introduction of the relative pressures? Notice that

$$\frac{p_2}{p_1} = \frac{p_2/p_0}{p_1/p_0} = \frac{p_{r2}}{p_{r1}}$$

or

$$\frac{p_2}{p_1} = \frac{p_{r2}}{p_{r1}} \quad (11.10)$$

Equation (11.10) together with the gas table may now be used for *isentropic* processes.

Example 11.2 Air undergoes an isentropic compression from 50 psia and 500°R to 150 psia. Determine the final temperature.

From the air table in Appendix K we have

$$p_{r1} = 1.0590 \text{ at } 500^\circ\text{R}$$

From (11.10),

$$p_{r2} = p_{r1} \left(\frac{p_2}{p_1} \right) = (1.0590) \left(\frac{150}{50} \right) = 3.177$$

From the table opposite $p_r = 3.177$, we find that $T_2 = 684^\circ\text{R}$.

We can follow a similar chain of reasoning to develop a *relative volume*, which is a unique function of temperature only and this can also be tabulated:

$$\text{relative volume} \equiv v_r \equiv \frac{v}{v_0} \quad (11.11)$$

Also note that

$$\frac{v_2}{v_1} = \frac{v_{r2}}{v_{r1}} \quad (11.12)$$

Relative volumes may be used to solve isentropic processes quickly in exactly the same manner as with relative pressures.

In summary, we now have a tabulation for the following variables as unique functions of temperature only: h , u , ϕ , p_r , and v_r .

1. h , u , and ϕ may be used for *any* process.
2. p_r and v_r may *only* be used for *isentropic* processes.

Complete tables for air and other gases may be found in *Gas Tables* by Keenan and Kaye (Ref. 31). An abridged table for air is given in Appendix K. This table shows the variation of h , p_r , u , v_r , and ϕ for air between 200 and 6500°R. The use of such tables is adequate for air-breathing engines since the composition of the products of combustion differs little from that of the original air. But certain gas dynamic relations are lacking in such tables, such as Mach numbers and isentropic area ratios. This topic is addressed in Section 11.6.

Properties from Equations

Operating from tables and charts is very convenient when working simple problems. However, when more complicated problems are involved, one frequently employs a digital computer for solutions. In this case it is nice to have simple equations for the fluid properties. For instance, a group of polynomials for the most common properties of air follow:

c_p from 180 to 2430°R:

$$c_p = 0.242333 - (2.15256E-5)T + (3.65E-8)T^2 - (8.43996E-12)T^3$$

c_v from 300 to 3600°R:

$$c_v = 0.164435 + (7.69284E-6)T + (1.21419E-8)T^2 - (2.61289E-12)T^3$$

γ from 198 to 3420°R:

$$\gamma = 1.42616 - (4.21505E-5)T - (7.93962E-9)T^2 + (2.40318E-12)T^3$$

h from 200 to 2400°R:

$$h = (0.239788)T - (6.71311E-6)T^2 + (9.69339E-9)T^3 - (1.60794E-12)T^4$$

u from 200 to 2400°R:

$$u = (0.171225)T - (6.68651E-6)T^2 + (9.67706E-9)T^3 - (1.60477E-12)T^4$$

ϕ from 200 to 2400°R:

$$\phi = 0.232404 + (8.56494E-4)T - (4.08016E-7)T^2 + (7.64068E-11)T^3$$

Exponential notation has been used in the equations above; for example, E-7 means $\times 10^{-7}$.

All of the equations above are in English Engineering units, and absolute temperature is used throughout. The equations were obtained from a report by J. R. Andrews and O. Biblarz, "Gas Properties Computational Procedure Suitable for Electronic Calculators", *NPS-57Zi740701A*, July 1, 1974.

11.5 REAL GAS BEHAVIOR, EQUATIONS OF STATE AND COMPRESSIBILITY FACTORS

Gases can be said to exist in three distinct forms: vapors, perfect gases, and supercritical fluids. This distinction can be made more rigorous as necessary (refer to Figure 11.4, which depicts a pressure–volume diagram with the various phases of a typical pure substance). Vapors exist close to the condensation or two-phase dome region, and supercritical fluids inhabit the high-pressure region above the two-phase dome. *Perfect gases are represented by any gas at sufficiently high temperature and sufficiently low pressure to exist away from the previous two regions.* Thus, while certainly substantial, the occurrence of perfect gas operation is not the whole story.

Equations of State

Once we enter regions where the perfect gas equation is no longer valid, we must resort to other, more complicated relations among properties. One of the earliest expressions to be used was the van der Waals equation, which was introduced in 1873:

$$\left(p + \frac{a}{v^2}\right)(v - b) = RT \quad (11.13)$$

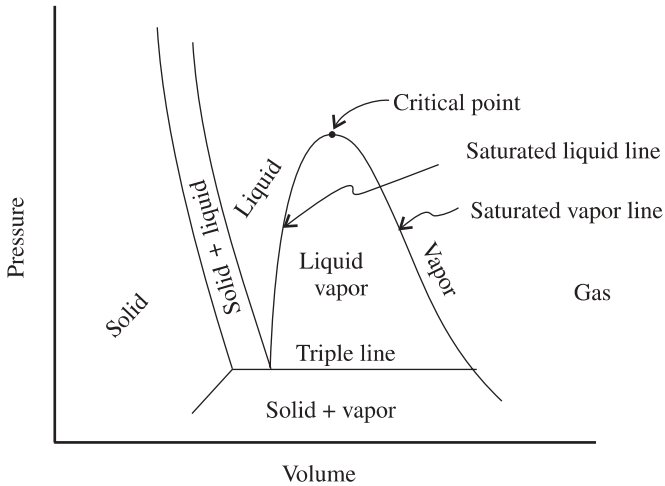


Figure 11.4 Two-phase dome for a typical pure substance.

The constants a and b are unique for each gas, and tables giving these values can be found in many texts (see, e.g., Ref. 6). The term a/v^2 is an attempt to correct for the attractive forces among molecules. At high pressure the term a/v^2 is small relative to p and can be neglected. The constant b is an attempt to account for the volume occupied by the molecules. At low pressures one may omit b from the term containing the specific volume. The fact that only two new constants are involved makes the van der Waals equation relatively easy to use. However, as discussed by Obert, it begins to lose accuracy as the density increases.

Attempts to gain accuracy are found in other forms of the equation of state. Perhaps the most general of these is the *virial equation of state*, which is of the form

$$\frac{pv}{RT} = 1 + \frac{B}{v} + \frac{C}{v^2} + \frac{D}{v^3} + \dots \quad (11.14)$$

Constants B , C , D , and so on, are called *virial coefficients*, which are postulated to be functions of temperature alone. What are these virials for a perfect gas? The virial equation was introduced around 1901 and is quite accurate at densities below the critical point.

There are *many* other equations of state, and no attempt is made to cover these. Our main purpose is to indicate that over restricted regions of the p - v - T surface we can find expressions accurate enough to satisfy the 0^2 law. If you are interested in this subject, Reference 6 has an excellent chapter entitled “The pvT Relationships”.

Compressibility Charts

Is there another way to approach the equation-of-state problem? Can these property relations be represented in a simple manner? Look at the right side of equation

(11.14). For any given state point (for a given gas) the entire right side represents some value that has been given the symbol Z and labeled the *compressibility factor*:

$$p = Z\rho RT \quad (1.13 \text{ modified})$$

Individual plots for various gases are available showing the compressibility factor as a function of temperature and pressure. However, it is possible to represent all gases on one plot through the concept of *reduced properties* with little sacrifice of accuracy. Let us define

$$\text{reduced pressure} \equiv p_r \equiv \frac{p}{p_c} \quad (11.15)$$

$$\text{reduced temperature} \equiv T_r \equiv \frac{T}{T_c} \quad (11.16)$$

where

$$p_c \equiv \text{critical pressure}$$

$$T_c \equiv \text{critical temperature}$$

Note that the reduced pressure above and the relative pressure from Section 11.4 share the same symbol. This is the way it is usually done and hopefully will cause no confusion. The compressibility factor can now be plotted against reduced temperature and reduced pressure, with a result similar to that shown in Figure 11.5. It turns out that this diagram is so nearly identical for most gases that an average diagram can be used for all gases.

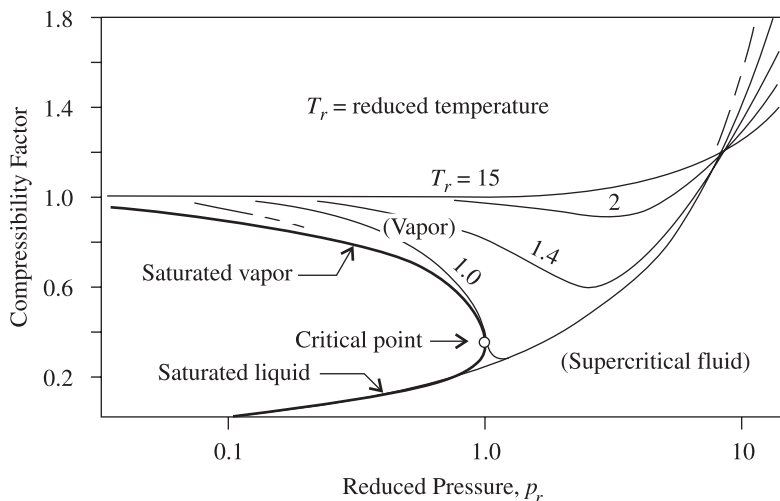


Figure 11.5 Skeletal generalized compressibility chart. (See Appendix F for working chart.)

Generalized compressibility charts can be found in most engineering thermodynamics texts (see Appendix F). These are least accurate near the critical point, where the averaging procedure introduces some error, as Z for different gases varies from 0.23 to 0.33 at this point. (It should be pointed out here that for steam and a few other gases, empirically derived tables are available which are more accurate than the compressibility chart.) We define the perfect gas region when $0.95 \leq Z \leq 1.05$. Does this correspond to what you would expect?

Atmospheric air is a mixture of 79% N_2 , 20% O_2 , and other trace gases. Perfect gas behavior in air (i.e., when Z remains within $\pm 5\%$ of unity) without dissociation or recombination may be expected up to 4100 psia (279 atm) for temperatures above 20°F (480°R). At temperatures as low as -160°F (300°R), we can expect perfect gas behavior in air up to about 1000 psia (74 atm). These values of pressure and temperature vary considerably for other gases, but as can be seen, perfect gas behavior in air is a very common occurrence.

Example 11.3 Determine the volume of air at 227°R and 9.3 atm. Use the generalized compressibility chart in Appendix F and compare to the perfect gas calculations. The pseudo-critical constants for air are $T_c = 239^\circ\text{R}$ and $p_c = 37.2$ atm.

$$T_r = \frac{227}{239} = 0.95$$

$$p_r = \frac{9.3}{37.2} = 0.25$$

From the compressibility chart, $Z = 0.889$.

$$v = \frac{ZRT}{p} = \frac{(0.889)(53.3)(227)}{(9.3)(14.7)(144)} = 0.546 \text{ ft}^3/\text{lbm}$$

If the perfect gas equation of state is used:

$$v = \frac{RT}{p} = \frac{(53.3)(227)}{(9.3)(14.7)(144)} = 0.615 \text{ ft}^3/\text{lbm}$$

The perfect gas equation of state turns out to be accurate for many situations of interest in gas dynamics. It is fortuitous that in many applications high pressures are usually associated with relatively high temperatures and low temperatures are usually associated with relatively low pressures, so that gaseous condensation, for example, is rare. Also, the gas molecules remain on the average far from each other. Supersonic nozzles feeding from combustion chambers are in this category. Wind tunnels, jet engines, and rocket engines can also be analyzed with the semiperfect gas approach, which uses the perfect gas equation of state augmented by variation of the heat capacities with temperature and gas composition. Thus, for many practical examples, deviations from perfect gas behavior can largely be neglected, and we let $Z \approx 1.0$. When Z is not sufficiently close to 1, iterative calculations are performed starting with

$Z = 1$ which often converge rather quickly. Here information in tabular or graphical form is most commonly used. (See Refs. 30 and 32 for additional information.)

11.6 VARIABLE γ —VARIABLE-AREA FLOWS

Isentropic Calculations

Isentropic results from the formulations in Chapter 5 are shown in Figures 5.14 a, b, c. There we show constant γ results, but the possible effects of γ variations can be inferred from the spread of the different constant γ curves. For example, the p/p_t curves are relatively insensitive to the values of γ for Mach numbers up to about 2.5 (less than 10% variation for air). This means that for variable γ , calculations involving pressure (in this range of Mach numbers) are essentially the same as those assuming constant γ . The temperature ratios, on the other hand, show considerable variability beyond $M = 1.0$, so that calculations involving temperature are more restricted in their independence of γ variations. The density ratio sensitivity falls between temperature and pressure. The A/A^* ratios are not strongly dependent on γ below $M = 1.5$. Recall that under our assumptions, monoatomic gases do not display a variable γ because they do not have internal vibrational modes. So only diatomic and polyatomic gases require the techniques outlined below.

Several methods have been developed to handle variable- γ variable-area problems. The method of choice depends on the information that you are managing and on the required accuracy of the results. Here we discuss two methods. The first one is based on rather simple extensions of the material in earlier chapters. The other method is more rigorous. As presented, neither method allows for deviations from $Z \approx 1.0$.

Method I: Average γ approach. This assumes perfect gas relations throughout but works with an *average* γ appropriately inserted in the stagnation enthalpy and stagnation pressure equations.

Method II: Real gas approach. This assumes a semiperfect gas in that the perfect gas equation of state is used but property values are taken from the gas table. (This accounts for variable specific heats.)

Both methods are iterative in nature, but Method I is considerably easier and faster. It may work sufficiently well for preliminary design purposes, having been verified with numerous examples in air flowing through supersonic nozzles. It is based on the following equations:

$$c_p = \frac{\gamma R}{\gamma - 1} \quad (4.15)$$

$$h = \int_0^T c_p dT \approx c_p T = \left(\frac{\gamma R}{\gamma - 1} \right) T \quad (11.17)$$

$$T_t = T \left(1 + \frac{\gamma - 1}{2} M^2 \right) \tag{4.18}$$

$$p_t = p \left(1 + \frac{\gamma - 1}{2} M^2 \right)^{\gamma/(\gamma-1)} \tag{4.21}$$

$$\dot{m} = pAM \sqrt{\frac{\gamma g_c}{RT}} \tag{4.13}$$

Although these equations are strictly valid only for perfect gases (because of the constant heat capacities), we introduce a modified/average γ to obtain more accurate solutions. We pose the following isentropic nozzle problem with section locations defined in Figure 11.6.

For this problem we assume the following information:

Given: The gas composition, $T_{t1} \approx T_1$, $p_{t1} \approx p_1$, and p_3 .

Find: (a) The temperature and Mach number at the exit (T_3 and M_3).

(b) The required area ratio to produce these conditions (A_3/A_2).

Solution:

1. Assume T_3 from the perfect gas, constant- γ solution.
2. Find γ_3 from Appendix L (γ is only a function of the static temperature). As an alternative, we can bypass this step by assuming a low enough temperature so that no vibrational modes are activated. For air this means that $\gamma_3 \approx 1.4$ (otherwise, at the higher temperatures, $\gamma \rightarrow 1.3$).
3. Compute an average γ at station 3 from

$$\bar{\gamma}_3 = \frac{\gamma_3 + \gamma_1}{2} \tag{11.18}$$

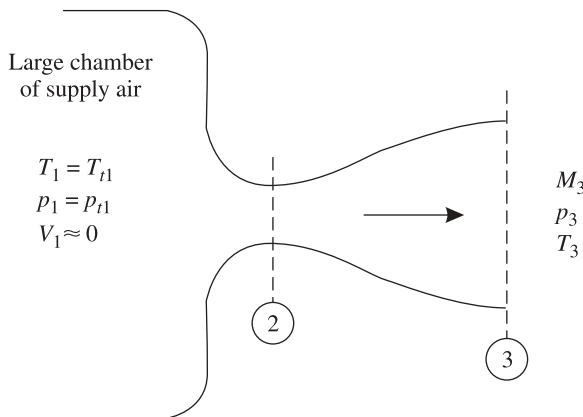


Figure 11.6 Supersonic nozzle.

4. Now since $h_{t3} = h_{t1}$ from the energy equation,

$$\begin{aligned} \bar{c}_{p3} T_{t3} &\approx c_{p1} T_{t1} \\ \left(\frac{\bar{\gamma}_3 \bar{R}}{\bar{\gamma}_3 - 1} \right) T_{t3} &\approx \left(\frac{\gamma_1 \bar{R}}{\gamma_1 - 1} \right) T_{t1} \\ T_{t3} &\approx T_{t1} \left(\frac{\gamma_1 (\bar{\gamma}_3 - 1)}{\bar{\gamma}_3 (\gamma_1 - 1)} \right) \end{aligned} \quad (11.19)$$

This allows us to find the first estimate of T_{t3} .

5. We continue to use the average γ for properties at station 3 as long as they are not locally based (depending on upstream values). We use equation (4.21) to get an estimate for M_3 . (Remember that the stagnation pressure remains constant because the expansion is isentropic.)

$$M_3 \approx \sqrt{\frac{2}{\bar{\gamma}_3 - 1} \left[\left(\frac{p_{t1}}{p_3} \right)^{(\bar{\gamma}_3 - 1)/\bar{\gamma}_3} - 1 \right]} \quad (11.20)$$

6. Knowing M_3 and T_{t3} , we can compute T_3 from (4.18).
7. Examine the value of T_3 computed in step 6 and see how it compares to the value assumed in step 1.
8. We can now reevaluate γ_3 at the new T_3 value and see if it differs appreciably from the value assumed originally. Notice that γ remains nearly the same as long as we are in the low-temperature plateau shown in Figure 11.2.
9. If there is a need to improve the value of γ_3 , do so and go back to step 3; otherwise, the calculated value of T_3 is acceptable and we may proceed.

Now, for the area ratio, write equation (4.13) at stations 2 and 3. For supersonic flow at station 3, $M_2 = 1.0$ and in isentropic flow, $A_1^* = A_2^* \approx A_3^*$. Also, the subsonic regions are relatively insensitive to γ changes (as shown in Figures 5.14c). This means that between stations 1 and 2 we may use values from the isentropic table for $\gamma = 1.4$ without introducing significant errors.

$$\begin{aligned} p_2 &= \left(\frac{p_2}{p_{t2}} \right) \left(\frac{p_{t2}}{p_{t1}} \right) \left(\frac{p_{t1}}{p_1} \right) p_1 \approx (0.52828) p_1 \\ T_2 &= \left(\frac{T_2}{T_{t2}} \right) \left(\frac{T_{t2}}{T_{t1}} \right) \left(\frac{T_{t1}}{T_1} \right) T_1 \approx (0.83333) T_1 \end{aligned}$$

10. Substituting these values into equation (4.13) and rearranging, we get a useful relation for the nozzle area ratio in these flows:

$$\frac{A_3}{A_2} = \frac{A_3}{A_3^*} \approx \frac{0.579}{M_3} \left(\frac{p_1}{p_3} \right) \sqrt{\frac{\gamma_1 T_3}{\gamma_3 T_1}} \quad (11.21)$$

Example 11.4 Air expands isentropically through a supersonic nozzle from stagnation conditions $p_1 = 455$ psia and $T_1 = 2400^\circ\text{R}$ to an exit pressure of $p_3 = 3$ psia. Calculate the exit Mach number, the area ratio of the nozzle, and the exit temperature using the perfect gas results and Method I, then compare to Method II.

By now the perfect gas solution should be easy for you. We begin with those results.

$$M_3 = 4, \quad A_3/A_3^* = 10.72, \quad \text{and} \quad T_3 = 571^\circ\text{R}.$$

First, we apply Method I.

1. Assume that $T_3 = 571^\circ\text{R}$.
2. From Table 5 in Appendix L (or Figure 11.2), we get $\gamma_3 = 1.3995$ and $\gamma_1 = 1.317$.
3. Now

$$\bar{\gamma}_3 = \frac{\gamma_3 + \gamma_1}{2} = \frac{1.3995 + 1.317}{2} = 1.35825$$

$$\begin{aligned} 4. \quad T_{r3} &\approx T_{r1} \left(\frac{\gamma_1}{\bar{\gamma}_3} \right) \left(\frac{\bar{\gamma}_3 - 1}{\gamma_1 - 1} \right) = (2400) \left[\left(\frac{1.317}{1.35825} \right) \left(\frac{1.35825 - 1}{1.317 - 1} \right) \right] \\ &= (2400)(1.0958) = 2629.93^\circ\text{R} \end{aligned}$$

5. The Mach number

$$M_3 \approx \sqrt{\frac{2}{\gamma_3 - 1} \left[\left(\frac{p_{r3}}{p_3} \right)^{(\gamma_3 - 1)/\gamma_3} - 1 \right]} = \left(\frac{2}{1.3995 - 1} \right) \left[\left(\frac{455}{3} \right)^{0.285459} - 1 \right] = 3.9983$$

Here we use equation (4.21) locally at 3.

$$6. \text{ So that } T_3 = \frac{T_{r3}}{\left[1 + \frac{\gamma_3 - 1}{2} M_3^2 \right]} = \frac{2629.93}{\left[1 + \frac{1.3995 - 1}{2} (3.9983)^2 \right]} = 627.16^\circ\text{R}$$

Note that the value of γ_3 remains the same (to three significant figures) at this new value of T_3 . A second iteration yields $T_{r2} = 2627^\circ\text{R}$, $M_3 = 3.9965$, and $T_3 = 628.1^\circ\text{R}$.

Next, we work Method II, for which we utilize the air table from Appendix K as in Example 11.2. We calculate (from 11.10),

$$p_{r3} = p_{r1} \frac{p_3}{p_1} = (367.6) \left(\frac{3}{455} \right) = 2.424$$

which yields $T_3 = 635.5^\circ\text{R}$. We still have to calculate A_3/A_3^* , but the air table is not helpful here. So we proceed with step 10 of Method I and obtain

$$\begin{aligned} \frac{A_3}{A_2} &= \frac{A_3}{A_3^*} \approx \frac{0.579}{M_3} \frac{p_1}{p_3} \sqrt{\frac{\gamma_1 T_3}{\gamma_3 T_1}} = \left(\frac{0.579}{3.9965} \right) \left(\frac{455}{3} \right) \sqrt{\frac{(1.317)(628.1)}{(1.3995)(2400)}} \\ &\approx 10.904 \end{aligned}$$

We now compare the results. The static temperature calculation at station 3 compares well between Methods I and II (within 2%) but not so well between the perfect gas result and Method II (within 10%). Since Method II is based on the air table, its results are the most exact and we see why the perfect gas results would need improvement.

When the pressure ratio across the nozzle is not known, but rather the exit temperature (T_3) or exit Mach number (M_3), or when the nozzle area ratio (A_3/A_2) is given, the technique above is still applicable. For instance, we might have:

Given: The gas composition, $T_{t1} = T_1$, $p_{t1} = p_1$, and T_3 .

Find: (a) The pressure and Mach number at the exit (p_3 and M_3).

(b) The required area ratio to produce these conditions (A_3/A_2).

Since T_3 is given, there is no requirement to iterate because γ_3 is obtainable directly. We may proceed from step 2 of method I. After finding T_{t3} from step 4, we may calculate M_3 from equation (4.18):

$$M_3 \approx \sqrt{\frac{2}{\gamma_3 - 1} \left(\frac{T_{t3}}{T_3} - 1 \right)} \quad (4.18)$$

Now the static pressure can be calculated from the same equation as step 5, equation (11.20), but using the average γ because we relate the stagnation pressures at station 1:

$$p_{t1} \approx p_3 \left(1 + \frac{\bar{\gamma}_3 - 1}{2} M_3^2 \right)^{\bar{\gamma}_3 / (\bar{\gamma}_3 - 1)}$$

Finally, the area ratio may be estimated from the equation of step 10 in Method I. The technique is basically the same but without the initial uncertainty of the value of the ratio of specific heats at station 3.

The other type of problem is:

Given: The gas composition, $T_{t1} = T_1$, $p_{t1} = p_1$, and M_3 .

Find: (a) The pressure and temperature at the exit (p_3 and T_3).

(b) The required area ratio to produce these conditions (A_3/A_2).

This type of problem calls for an iterative technique because of the unknown temperature at the nozzle exit. We shall use Method I and compared it with Method II, which is worked in detail in an example from Zucrow and Hoffman (pp. 183–187 of Ref. 20). The problem is to deliver air at Mach 6 in an isentropic, blow-down wind tunnel with plenum conditions of 2000 K and 3.5 MPa.

Example 11.5 We work here with the example from Zucrow and Hoffman. In Figure E11.5, assume that the air properties are related by the perfect gas equation of state but have variable specific heats. Determine conditions at the throat and at the exit, including the area ratio.

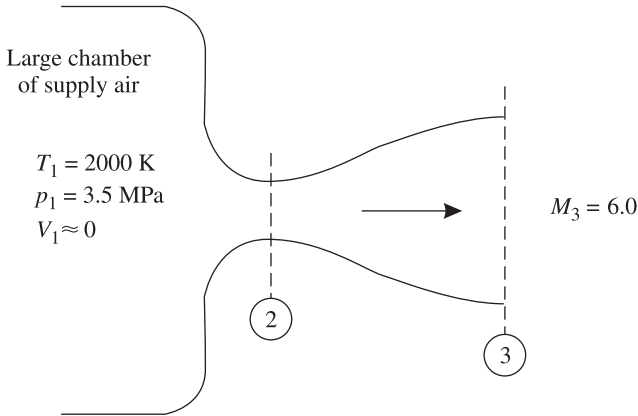


Figure E11.5

The procedure begins with the usual calculation for the perfect gas. For Method I we start at step 1 and proceed to obtain T_{t3} from step 4. Now step 5 differs because we use equation (4.18) to solve for T_3 since M_3 is known. The exit pressure p_3 may be calculated from either equation (4.19) or (4.21). There is a great deal of detail in this example that is not reproduced here. In particular, calculations for the values at the throat (station 2) will not be shown because we assume that they are well represented by the perfect gas calculations at $\gamma_2 \approx \gamma_1 = 1.30$.

1. Assume that $T_3 = 243.9$ K, the perfect gas value.
2. For air we can surmise the ratio of specific heats to be $\gamma_3 = 1.401$, $\gamma_1 = 1.298$.
3. The average

$$\bar{\gamma}_3 = \frac{1.401 + 1.298}{2} = 1.3495$$

4. Now the value of T_{t3} can be estimated:

$$T_{t3} \approx T_{t1} \left(\frac{\gamma_1 \bar{\gamma}_3 - 1}{\bar{\gamma}_3 \gamma_1 - 1} \right) = (2000) \left(\frac{1.298}{1.3495} \right) \left(\frac{1.3495 - 1}{1.298 - 1} \right) = 2256.123 \text{ K}$$

5. With M_3 and p_{t3} we calculate p_3 :

$$p_3 \approx \frac{p_{t1}}{\left(1 + \frac{\bar{\gamma}_3 - 1}{2} M_3^2 \right)^{\bar{\gamma}_3 / (\bar{\gamma}_3 - 1)}} = \frac{3.5 \times 10^6}{\left[1 + \left(\frac{1.3495 - 1}{2} \right) (6)^2 \right]^{3.8612}} = 1.63173 \times 10^3 \text{ N/m}^2$$

6. With M_3 and T_{t3} we may proceed to find T_3 :

$$T_3 = \frac{T_{t3}}{1 + \frac{\gamma_3 - 1}{2} M_3^2} = \frac{2256.123}{1 + \left(\frac{1.401 - 1}{2} \right) (6)^2} = 274.53 \text{ K}$$

The guess for γ_3 is sufficiently accurate, so we may proceed with the area ratio calculation.

10. Here we use the area ratio equation that has been developed:

$$\frac{A_3}{A_2} = \frac{A_3}{A_3^*} = \frac{0.579}{M_3} \frac{p_1}{p_3} \sqrt{\frac{\gamma_1 T_3}{\gamma_3 T_1}} = \left(\frac{0.579}{6}\right) \left(\frac{3.5 \times 10^6}{1.63173 \times 10^3}\right) \left[\frac{(1.298)(274.53)}{(1.401)(2400)}\right] = 73.815$$

Table 11.1 gives results from Zucrow and Hoffman for these calculations along with the perfect gas or constant specific heats solution and Method I as described above. Interested readers can view many of the details of the Method II calculations by consulting Ref. 20.

A close look at the results in Table 11.1 leads to the following conclusions for this type of problem:

1. In the convergent section of the nozzle (where the flow is subsonic), the perfect gas solution is quite adequate.
2. In the diverging section of the nozzle (where the flow is supersonic), semiperfect gas effects must be considered.
3. Method I produces quick and excellent results for the pressure and temperature at the exit but is slightly off for the area ratio.

The last case, when A_3/A_2 is given, follows the various cases presented above. It is not detailed here, but you can do this on your own by working Problem 11.13.

In reviewing Examples 11.4 and 11.5 you will notice that when we apply the equation that relates static to stagnation pressure we sometimes use the average γ (i.e., equation 11.20) and sometimes the local γ (i.e., equation 4.21). The reasoning is simply that whenever we have available *local values* at station 3 we use γ_3 as in the case in Example 11.4. In example 11.5 we need to calculate the exit pressure given the exit Mach number and the upstream pressure (nonlocal). This may seem rather artificial, but remember that this is an empirical method which has been developed

Table 11.1 Summary of Calculations for Example Problem 11.5

Property	Units	Perfect Gas	Method I	Method II (Ref. 20)
p_2	MPa	1.9101	1.92	1.9073
T_2	K	1739.1	1720	1738.3
ρ_2	kg/m ³	3.8263	3.83	3.8225
V_2	m/s	805.57	806	806.52
G_2	kg/s-m ²	3082.4	3090	3082.9
p_3	N/m ²	2216.8	1631.73	1696.4
T_3	K	243.9	274.53	273.23
ρ_3	kg/m ³	0.031664	0.02068	0.02163
V_3	m/s	1878.4	1992.64	1989.0
G_3	kg/s-m ²	59.478	41.29	43.022
A_3/A_2		53.18	75.21	71.659

to better account for γ variations on the temperature and the pressure. Note the consistent use of γ_3 in calculating T_3 with local values.

It should be recalled that at sufficiently high Mach numbers, kinetic lag effects may become more and more apparent, so that eventually the flow may be treated as if it were *frozen* in composition. Knowing the plenum properties accurately in a combustion chamber and using frozen-flow analysis, one can obtain good engineering estimates for adiabatic nozzle flows. The only difference here is that the value of γ will be that of the hot gases, which for air is lower than the usual value of 1.4.

11.7 VARIABLE γ —CONSTANT-AREA FLOWS

Shocks

For shocks, both normal and oblique, we specialize the set of equations given in Section 11.1 for adiabatic flow, with constant area and no friction. These are really the equations first assembled in Chapter 6 [i.e., equations (6.2), (6.4), and (6.9)] together with the modified equation of state (1.13m). The shock problem becomes considerably more complicated when Z depends on T and p according to the compressibility charts and when c_p may vary with temperature (see, e.g., Ref. 32). In air without dissociation and below Mach 5, the perfect gas calculations fall within about 10% of the real gas values and may be used as an estimate.

As shown in Figure 6.10, the pressure ratio across the shock is the least sensitive to variations of γ , and perfect gas calculations turn out to be reasonable for determining the pressure. Now to improve calculations for the temperature, we can resort to the average γ concept introduced earlier. A useful technique involves introduction of the mass velocity $G = \rho V = \text{const}$, and equation (11.17) into equations (6.2), (6.4), and (6.9), to arrive at

$$h_2 = h_1 + \frac{G^2}{2g_c} \left(\frac{1}{\rho_1^2} - \frac{1}{\rho_2^2} \right) \quad (11.22)$$

and

$$T_2 = \frac{\bar{\gamma}_2 - 1}{\bar{\gamma}_2} \left[\frac{\gamma_1}{\gamma_1 - 1} T_1 + \frac{G^2}{2Rg_c} \left(\frac{1}{\rho_1^2} - \frac{1}{\rho_2^2} \right) \right] \quad (11.23)$$

A simple scheme when *all conditions* at location 1 are known is, then:

1. Obtain ρ_2 and T_2 from the perfect gas solution.
2. Find γ_1 and γ_2 (from Appendix L) and calculate $\bar{\gamma}_2$ similar to equation (1.18).
3. Compute G from the information given at 1.
4. From equation (11.23), obtain T_2 using $\bar{\gamma}_2$. This new value of T_2 should be more accurate than the perfect gas result.
5. If desired, now calculate an improved estimate of ρ_2 using the new T_2 in the perfect gas law. Assume that p_2 remains as found from the perfect gas shock results.

Example 11.6 Let us apply the technique outlined above to Example 7.7 in Zucrow and Hoffman (pp. 353–356 of Ref. 20). Air flows at $M_1 = 6.2691$ and undergoes a normal shock. The other upstream static properties are $T_1 = 216.65$ K and $p_1 = 12,112$ N/m². Find the properties downstream of the shock assuming no dissociation. Because of the low temperatures, $\gamma_1 = 1.402$.

The perfect gas results are $T_2 = 1859.6$ K, $p_2 = 0.5534$ MPa, $\rho_2 = 1.0366$ kg/m³, and $V_2 = 347.57$ m/s. Next, we estimate γ_2 as 1.301, based on the perfect gas temperature.

$$\bar{\gamma}_2 = \frac{1.301 + 1.402}{2} = 1.3515$$

Now the mass flow rate

$$\begin{aligned} G &= \rho_1 V_1 = p_1 M_1 \sqrt{\frac{\gamma_1}{RT_1}} = (12,112)(6.2691) \sqrt{\frac{1.402}{(287)(216)}} \\ &= 361 \text{ kg/s} \cdot \text{m}^3 \end{aligned}$$

The new value of the temperature can now be calculated from equation (11.23) as

$$\begin{aligned} T_2 &= \frac{\bar{\gamma}_2 - 1}{\bar{\gamma}_2} \left[\frac{\gamma_1}{\gamma_1 - 1} T_1 + \frac{G^2}{2Rg_c} \left(\frac{1}{\rho_1^2} - \frac{1}{\rho_2^2} \right) \right] \\ &= \left(\frac{1.36 - 1}{1.36} \right) \left[\frac{1.4}{1.4 - 1} T_1 + \frac{(360)^2}{(2)(287)} (26.2 - 0.925) \right] = 1710 \text{ K} \end{aligned}$$

This result is within 1% of the answer from Ref. 20 ($T_2 = 1701$ K), so that further refinements are not needed. To calculate the improved estimate of the density, we have

$$\rho_2 = \frac{p_2}{RT_2} = \frac{5.51 \times 10^5}{(287)(1710)} = 1.12 \text{ kg/m}^3$$

which compares within 4% of the value from Ref. 20 ($\rho_2 = 1.1614$ kg/m³).

When real gas effects are significant, the calculations become considerably more complicated, as information from compressibility charts or from tables will be necessary. In such cases the reader should consult Ref. 20 or 32 for details.

Fanno Flows

For Fanno flow we specialize the set of equations given in Section 11.1 for adiabatic flow in constant-area ducts with friction as shown in Figure 9.4. Fanno flow curves for various γ values show little variability in the subsonic range, which is typically the most common range for constant-area flows with friction.

Rayleigh Flows

For Rayleigh flow we specialize the set of equations given in Section 11.1 for constant-area flow without friction but with heat transfer. Rayleigh flow in current combustors is typically constant-area at subsonic Mach numbers. Note that property variations are

very much a function of the chemical reactions taking place. As the flow equilibrates in the burner, gas composition reaches a given unique equilibrium value which then yields the gas properties. Rayleigh flow curves for various γ values, such as those shown in Figure 10.13, indicate a negligible dependence of the stagnation temperature on γ variations in the subsonic regime.

We can conclude that for Fanno and Rayleigh flows, the constant- γ approach is satisfactory as long as these flows remain subsonic. Fortunately, most present applications of these flows operate in that region. What remains to be done is to establish the appropriate value of γ that should be used.

11.8 SUMMARY

We must appreciate the fact that microscopic behavior and molecular structure have a significant effect on gas dynamics. As the temperature of operation of gases such as air rises much above room temperature, we see that their microscopic behavior becomes more complicated because of the activation of the vibrational mode. In monatomic gases, the equations arrived at in previous chapters remain applicable, but they must be modified for diatomic and polyatomic gases. In addition, subtle nonequilibrium effects may come into play as the Mach number increases in the supersonic regime.

Semiperfect gases follow the perfect gas law but have variable specific heats. Remember that as long as $p = \rho RT$ is valid, the enthalpy and internal energy are functions of temperature only. We arbitrarily assign $u = 0$ and $h = 0$ at $T = 0$, so that

$$u = \int_0^T c_v dT \quad \text{and} \quad h = \int_0^T c_p dT \quad (11.1, 11.2)$$

Entropy changes can be computed by

$$\Delta s_{1-2} = \phi_2 - \phi_1 - R \ln \frac{p_2}{p_1} \quad (11.4)$$

where

$$\phi \equiv \int_0^T c_p \frac{dT}{T} \quad (11.3)$$

Isentropic problems are more easily solved with the aid of

$$\text{relative pressure} \equiv p_r \equiv \frac{p}{p_0} \quad (11.9)$$

$$\text{relative volume} \equiv v_r \equiv \frac{v}{v_0} \quad (11.11)$$

All these functions, being unique functions of temperature, can be computed in advance and tabulated (see Appendix K). Remember:

1. h , u , and ϕ may be used for *any* process.
2. p_r and v_r may *only* be used for *isentropic* processes.

Many other equations of state have been developed for use when the perfect gas law is not accurate enough. In general, the more complicated expressions have a larger region of validity. But most lose accuracy near the critical point.

A useful means of handling the problem of deviations from perfect gas behavior involves use of the compressibility factor:

$$p = Z\rho RT \quad (1.13 \text{ modified})$$

Unless extreme accuracy is desired near the critical point, a single *generalized* compressibility chart may be used for all gases. In that case, Z is a function of

$$\text{reduced pressure} \equiv p_r \equiv \frac{P}{p_c} \quad (11.15)$$

$$\text{reduced temperature} \equiv T_r \equiv \frac{T}{T_c} \quad (11.16)$$

(What are p_c and T_c ?)

Complicated equations of state can be handled readily with computer solutions. At the same time, simple polynomials are available for nearly all properties of common gases for restricted temperature ranges. When available, use of the property tables (such as the steam table) is recommended because being largely experimental, they are more accurate in the vapor and supercritical fluid regimes.

The traditional isentropic nozzle problem gets modified as γ variations become significant. The most important modification is that of the stagnation and static pressures and temperatures, and here one can either use the *Gas Tables* (Ref. 31) or the equations of Method I. At the nozzle exit, station 3,

$$T_{r3} \approx T_{r1} \left(\frac{\gamma_1 \bar{\gamma}_3 - 1}{\bar{\gamma}_3 \gamma_1 - 1} \right) \quad (11.19)$$

where

$$\bar{\gamma}_3 = \frac{\gamma_3 + \gamma_1}{2} \quad (11.18)$$

together with other equations from Method I, such as

$$M_3 \approx \sqrt{\frac{2}{\bar{\gamma}_3 - 1} \left[\left(\frac{p_{t1}}{p_3} \right)^{(\bar{\gamma}_3 - 1)/\bar{\gamma}_3} - 1 \right]} \quad (11.20)$$

and

$$\frac{A_3}{A_2} \approx \frac{0.579}{M_3} \frac{p_1}{p_3} \sqrt{\frac{\gamma_1 T_3}{\gamma_3 T_1}} \quad (11.21)$$

Normal shocks are also treatable using Method I, but here the accuracy of perfect gas calculations is satisfactory. Fanno and Rayleigh flows are mostly subsonic and quite amenable to the perfect gas treatment of Chapters 9 and 10 with an appropriate value of γ .

PROBLEMS

- 11.1.** Beginning at a temperature of 60°F and a volume of 10 ft³, 2 lbm of air undergoes a constant-pressure process. The air is then heated to a temperature of 1000°F and there is no shaft work. Using the air table, find the work, the change of internal energy and of enthalpy, and the entropy change for this process.
- 11.2.** In a two-step set of processes, a quantity of air is heated reversibly at constant pressure until the volume is doubled, and then it is heated reversibly at constant volume until the pressure is doubled. If the air is initially at 70°F, find the total work, total heat transfer, and total entropy change to the end state. Use the air table.
- 11.3.** Compute the values of c_p , c_v , h , and u for air at 2000°R using the equations in Section 11.4. Check your values of specific heats and the enthalpy and internal energy values with the air table in Appendix K.
- 11.4.** Air at 2500°R and 150 psia is expanded through an isentropic turbine to a pressure of 20 psia. Determine the final temperature and the change of enthalpy. (Use the air table.)
- 11.5.** Air at 1000°R and 100 psia undergoes a heat addition process to 1500°R and 80 psia. Compute the entropy change. If no work is done, also compute the heat added. (Use the air table.)
- 11.6.** Compute γ for air at 300°R by use of the equation on page 325.
- 11.7.** For a gas that follows the perfect gas equation of state but has variable specific heats, the equation

$$s_2 - s_1 = \int_1^2 c_p \frac{dT}{T}$$

applies to which of the following?

- (a) Any reversible process.
 (b) Any constant-pressure process.
 (c) An irreversible process only.
 (d) Any constant-volume process.
 (e) The equation is never correct.
- 11.8.** Find the density of air at 360°R and 1000 psia using the compressibility chart. (The pseudo-critical point for air is taken to be 238.7°R and 37.2 atm.)

- 11.9.** Oxygen exists at 100 atm and 150°R. Compute its specific volume by use of the compressibility chart and by the perfect gas law.
- 11.10.** The chemical formula for propane gas is C_3H_8 , which corresponds to a molecular mass of 44.094. Determine the specific volume of propane at 1200 psia and 280°F using the generalized compressibility chart and compare to the result for a perfect gas. Propane has a critical temperature of 665.9°R and a critical pressure of 42 atm.
- 11.11.** Calculate p_3 in Example 11.4 when $p_{t1} = 455$ psia, $T_{t1} = 2400^\circ\text{R}$, and T_3 is given as 640°R.
- 11.12.** Calculate p_3 in Example 11.4 when $p_{t1} = 455$ psia, $T_{t1} = 2400^\circ\text{R}$, and M_3 is given as 3.91.
- 11.13.** Calculate p_3 in Example 11.4 when $p_{t1} = 455$ psia, $T_{t1} = 2400^\circ\text{R}$, and A_3/A_2 is given as 11.17.
- 11.14.** Work out Example 11.4 in its entirety for argon instead of air with $p_{t1} = 3.0$ MPa, $T_{t1} = 1500$ K, and $p_3 = 0.02$ MPa.
- 11.15.** Consider the nozzle in Example 11.5 operating at the second critical point (i.e., there is a normal shock at the exit). Calculate the properties after the shock when $M_1 = 6.0$, $T_1 = 272$ K, and $p_1 = 1696$ N/m².

CHECK TEST

- 11.1.** What internal degree of freedom in diatomic and polyatomic gases is responsible for the variation in heat capacities with temperature and thus for semiperfect gas behavior (under the assumptions made in this chapter)?
- 11.2.** State the three distinct gaseous forms of matter and describe the possible microscopic reasons for real gas behavior (i.e., when Z is not equal to 1).
- 11.3.** Calculate the enthalpy change for air when it is heated from 460°R to 3000°R at constant pressure. Use both the gas table and the perfect gas relations. What is the nature of the discrepancy, if any?
- 11.4.** True or False: The concepts of the relative pressure (p_r) and the relative specific volume (v_r) are valid for any semiperfect gas undergoing any process whatsoever.
- 11.5.** Find the density of water vapor at 500°F and 500 psia using the compressibility chart and perfect gas relations. The steam tables answer is 1.008 lbm/ft³; how does it compare to your answer?
- 11.6.** Work out the subsonic portion of Example 11.4 for both argon and carbon dioxide and compare all answers.
- 11.7.** (Optional) Work Problem 11.12.

Propulsion Systems

12.1 INTRODUCTION

All craft that move through a fluid medium must operate by some form of propulsion system. We will not attempt to discuss all types of such systems but will concentrate on those used for aircraft or missile propulsion and popularly thought of as *jet propulsion devices*. Working with these systems permits a natural application of your knowledge in the field of gas dynamics. These engines can be classified as either *air-breathers* (such as the turbojet, turbofan, turboprop, ramjet, and pulsejet) or *non-air-breathers*, which are called *rockets*. Many schemes for rocket propulsion have been proposed, but we discuss only the chemical rocket.

Many air-breathing engines operate on the same basic thermodynamic cycle. Thus we first examine the Brayton cycle to discover its pertinent features. Each of the propulsion systems is described briefly and some of their operating characteristics discussed. We then apply momentum principles to an arbitrary propulsive device to develop a general relationship for net propulsive thrust. Other significant performance parameters, such as power and efficiency criteria, are also defined and discussed. The chapter closes with an interesting analysis of fixed-geometry supersonic air inlets.

12.2 OBJECTIVES

After completing this chapter successfully, you should be able to:

1. Make a schematic of the Brayton cycle and draw $h-s$ diagrams for both ideal and real power plants.
2. Analyze both the ideal and real Brayton cycles. Compute all work and heat quantities as well as cycle efficiency.
3. State the distinguishing feature of the Brayton cycle that makes it ideally suited for turbomachinery. Explain why machine efficiencies are so critical in this cycle.

4. Discuss the difference between an open and a closed cycle.
5. Draw a schematic and an $h-s$ diagram (where appropriate) and describe the operation of the following propulsion systems: turbojet, turbofan, turboprop, ramjet, pulsejet, and rocket.
6. Compute all state points in a turbojet or ramjet cycle when given appropriate operating parameters, component efficiencies, and so on.
7. State the normal operating regimes for various types of propulsion systems.
8. (*Optional*) Develop the expression for the net propulsive thrust of an arbitrary propulsion system.
9. (*Optional*) Define or give expressions for input power, propulsive power, thrust power, thermal efficiency, propulsive efficiency, overall efficiency, and specific fuel consumption.
10. Compute the significant performance parameters for an air-breathing propulsion system when given appropriate velocities, areas, pressures, and so on.
11. (*Optional*) Derive an expression for the ideal propulsive efficiency of an air-breathing engine in terms of the speed ratio v .
12. Define or give expressions for the effective exhaust velocity and the specific impulse.
13. Compute the significant performance parameters for a rocket when given appropriate velocities, areas, pressures, and so on.
14. (*Optional*) Derive an expression for the ideal propulsive efficiency of a rocket engine in terms of its speed ratio v .
15. Explain why *fixed*-geometry converging–diverging diffusers are not used for air inlets on supersonic aircraft.

12.3 BRAYTON CYCLE

Basic Closed Cycle

Many small power plants and most air-breathing jet propulsion systems operate on a cycle that was developed about 100 years ago by George B. Brayton. Although his first model was a reciprocating engine, this cycle had certain features that destined it to become the basic cycle for all gas turbine plants. We first consider the basic ideal closed cycle in order to develop some of the characteristic operating parameters. A schematic of this cycle is shown in Figure 12.1 and includes a compression process from 1 to 2 with work input designated as w_c , a constant pressure heat addition from 2 to 3 with the heat added denoted by q_a , an expansion process from 3 to 4 with the work output designated as w_t , and a constant pressure heat rejection from 4 to 1 with the heat rejected denoted by q_r .

For our initial analysis we shall assume no pressure drops in the heat exchangers, no heat loss in the compressor or turbine, and all reversible processes. Our cycle then consists of

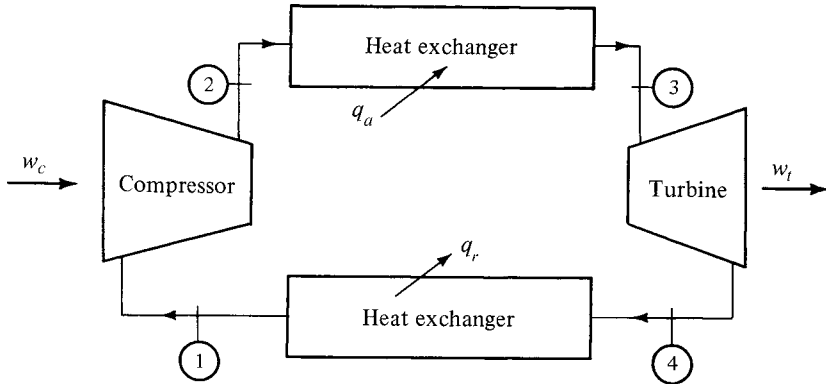


Figure 12.1 Schematic of a basic Brayton cycle.

1. two reversible adiabatic processes and
2. two reversible constant-pressure processes.

An $h-s$ diagram for this cycle is shown in Figure 12.2. Keep in mind that the working medium for this cycle is in a gaseous form and thus this $h-s$ diagram is similar to a $T-s$ diagram. In fact, for perfect gases the diagrams are identical except for the vertical scale.

[Image not available in this electronic edition.]

Figure 12.2 $h-s$ diagram for ideal Brayton cycle.

We shall proceed to make a steady flow analysis of each portion of the cycle.

Turbine:

$$h_{t3} + \cancel{q} = h_{t4} + w_s \quad (12.1)$$

Thus

$$w_t \equiv w_s = h_{t3} - h_{t4} \quad (12.2)$$

Compressor:

$$h_{t1} + \cancel{q} = h_{t2} + w_s \quad (12.3)$$

Designating w_c as the (*positive*) quantity of work that the compressor puts into the system, we have

$$w_c \equiv -w_s = h_{t2} - h_{t1} \quad (12.4)$$

The *net* work output is

$$w_n \equiv w_t - w_c = (h_{t3} - h_{t4}) - (h_{t2} - h_{t1}) \quad (12.5)$$

Heat Added:

$$h_{t2} + q = h_{t3} + \cancel{w}_s \quad (12.6)$$

Thus

$$q_a \equiv q = h_{t3} - h_{t2} \quad (12.7)$$

Heat Rejected:

$$h_{t4} + q = h_{t1} + \cancel{w}_s \quad (12.8)$$

Denoting q_r as the (*positive*) quantity of heat that is rejected from the system, we have

$$q_r \equiv -q = h_{t4} - h_{t1} \quad (12.9)$$

The *net* heat added is

$$q_n \equiv q_a - q_r = (h_{t3} - h_{t2}) - (h_{t4} - h_{t1}) \quad (12.10)$$

The thermodynamic efficiency of the cycle is defined as

$$\eta_{\text{th}} \equiv \frac{\text{net work output}}{\text{heat input}} = \frac{w_n}{q_a} \quad (12.11)$$

For the Brayton cycle this becomes

$$\begin{aligned} \eta_{\text{th}} &= \frac{(h_{t3} - h_{t4}) - (h_{t2} - h_{t1})}{h_{t3} - h_{t2}} = \frac{(h_{t3} - h_{t2}) - (h_{t4} - h_{t1})}{h_{t3} - h_{t2}} \\ \eta_{\text{th}} &= 1 - \frac{h_{t4} - h_{t1}}{h_{t3} - h_{t2}} = 1 - \frac{q_r}{q_a} \end{aligned} \quad (12.12)$$

Notice that the efficiency can be expressed solely in terms of the heat quantities. The latter result can be arrived at much quicker by noting that for any cycle,

$$w_n = q_n \quad (1.27)$$

and the cycle efficiency can be written as

$$\eta_{\text{th}} = \frac{w_n}{q_a} = \frac{q_n}{q_a} = \frac{q_a - q_r}{q_a} = 1 - \frac{q_r}{q_a} \quad (12.13)$$

If the working medium is assumed to be a perfect gas, additional relationships can be brought into play. For instance, all of the heat and work quantities above can be expressed in terms of temperature differences since

$$\Delta h = c_p \Delta T \quad (1.46)$$

and similarly,

$$\Delta h_t = c_p \Delta T_t \quad (12.14)$$

Equation (12.12) can thus be written as

$$\eta_{\text{th}} = 1 - \frac{c_p(T_{t4} - T_{t1})}{c_p(T_{t3} - T_{t2})} = 1 - \frac{T_{t4} - T_{t1}}{T_{t3} - T_{t2}} \quad (12.15)$$

With a little manipulation this can be put into an extremely simple and significant form. Let us digress for a moment to show how this can be done.

Looking at Figure 12.2, we notice that the entropy change calculated between points 2 and 3 will be the same as that calculated between points 1 and 4. Now the entropy change between any two points, say A and B , can be computed by

$$\Delta s_{A-B} = c_p \ln \frac{T_B}{T_A} - R \ln \frac{p_B}{p_A} \tag{1.53}$$

If we are dealing with a constant-pressure process, the last term is zero and the resulting simple expression is applicable between 2 and 3 as well as between 1 and 4. Thus

$$\Delta s_{2-3} = \Delta s_{1-4} \tag{12.16}$$

$$c_p \ln \frac{T_{t3}}{T_{t2}} = c_p \ln \frac{T_{t4}}{T_{t1}} \tag{12.17}$$

and if c_p is considered constant [which it was to derive equation (1.53)],

$$\frac{T_{t3}}{T_{t2}} = \frac{T_{t4}}{T_{t1}} \tag{12.18}$$

Show that under the condition expressed by (12.18), we can write

$$\frac{T_{t4} - T_{t1}}{T_{t3} - T_{t2}} = \frac{T_{t1}}{T_{t2}} \tag{12.19}$$

and the cycle efficiency (12.15) can be expressed as

$$\eta_{th} = 1 - \frac{T_{t1}}{T_{t2}} \tag{12.20}$$

Now since the compression process between 1 and 2 is isentropic, the temperature ratio can be related to a pressure ratio. If we designate the *pressure* ratio of the compression process as r_p ,

$$r_p \equiv \frac{p_{t2}}{p_{t1}} \tag{12.21}$$

the *ideal* Brayton cycle efficiency for a perfect gas becomes [by (1.57)]

$$\eta_{th} = 1 - \left(\frac{1}{r_p} \right)^{(\gamma-1)/\gamma} \tag{12.22}$$

Remember that this relation is valid only for an ideal cycle and when the working medium may be considered a perfect gas. Equation (12.22) is plotted in Figure 12.3

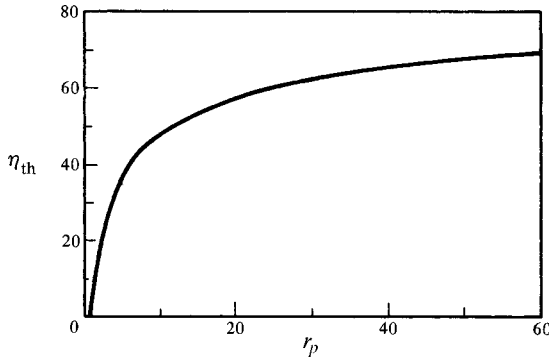


Figure 12.3 Thermodynamic efficiency of ideal Brayton cycle ($\gamma = 1.4$).

and shows the influence of the compressor pressure ratio on cycle efficiency. *Even for real power plants, the pressure ratio remains as the most significant basic parameter.*

Normally in closed cycles, all velocities in the flow ducts (stations 1, 2, 3, and 4) are relatively small and may be neglected. Thus all enthalpies, temperatures, and pressures in the equations above represent static as well as stagnation quantities. However, this is *not* true for open cycles, which are used for propulsion systems. The modifications required for the analysis of various propulsion engines are discussed in Section 12.4.

Example 12.1 Air enters the compressor at 15 psia and 550°R. The pressure ratio is 10. The maximum allowable cycle temperature is 2000°R (Figure E12.1). Consider an ideal cycle with negligible velocities and treat the air as a perfect gas with constant specific heats. Determine the turbine and compressor work and cycle efficiency. Since velocities are negligible, we use static conditions in all equations.

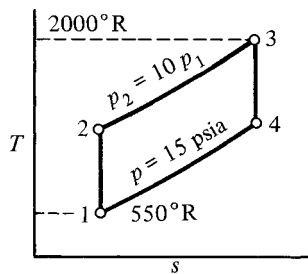


Figure E12.1

Thus

$$T_2 = (1.931)(550) = 1062^\circ\text{R}$$

and similarly,

$$T_4 = \frac{2000}{1.931} = 1036^\circ\text{R}$$

$$w_t = c_p(T_3 - T_4) = (0.24)(2000 - 1036) = 231 \text{ Btu/lbm}$$

$$w_c = c_p(T_2 - T_1) = (0.24)(1062 - 550) = 123 \text{ Btu/lbm}$$

$$w_n = w_t - w_c = 231 - 123 = 108 \text{ Btu/lbm}$$

$$q_a = c_p(T_3 - T_2) = (0.24)(2000 - 1062) = 225 \text{ Btu/lbm}$$

$$\eta_{\text{th}} = \frac{w_n}{q_a} = \frac{108}{225} = 48\%$$

Notice that even in an ideal cycle, the *net* work is a rather small proportion of the turbine work. By comparison, in the Rankine cycle (which is used for steam power plants), over 95% of the turbine work remains as useful work. This radical difference is accounted for by the fact that in the Rankine cycle the working medium is compressed as a liquid and in the Brayton cycle the fluid is *always* a gas.

This large proportion of *back work* accounts for the basic characteristics of the Brayton cycle.

1. Large volumes of gas must be handled to obtain reasonable work capacities. For this reason, the cycle is particularly suitable for use with turbomachinery.
2. Machine efficiencies are extremely critical to economical operation. In fact, efficiencies that could be tolerated in other cycles would reduce the net output of a Brayton cycle to zero. (See Example 2.2.)

The latter point highlights the stumbling block which for years prevented exploitation of this cycle, particularly for purposes of aircraft and missile propulsion. Efficient, lightweight, high-pressure ratio compressors were not available until about 1950. Another problem concerns the temperature limitation where the gas enters the turbine. The turbine blading must be able to *continuously* withstand this temperature while operating under high-stress conditions.

Cycle Improvements

The basic cycle performance can be improved by several techniques. If the turbine outlet temperature T_4 is significantly higher than the compressor outlet temperature T_2 , some of the heat that would normally be rejected can be used to furnish part of the heat added. This is called *regeneration* and reduces the heat that must be supplied externally. The net result is a considerable improvement in efficiency. Could a regenerator be used in Example 12.1?

The compression process can be done in stages with *intercooling* (heat removal between each stage). This reduces the amount of compressor work. Similarly, the expansion can take place in stages with *reheat*, (heat addition between stages). This increases the amount of turbine work. Unfortunately, this type of staging slightly decreases the cycle efficiency, but this can be tolerated to increase the net work produced per unit mass of fluid flowing. This parameter is called *specific output* and

is an indication of the size of unit required to produce a given amount of power. The techniques of regeneration and staging with intercooling or reheating are only of use in stationary power plants and thus are not discussed further. Those interested in more details on these topics may wish to consult a text on gas turbine power plants or Volume II of Zucrow (Ref. 25).

Real Cycles

The thermodynamic efficiency of 48% calculated in Example 12.1 is quite high because the cycle was assumed to be ideal. To obtain more meaningful results, we must consider the flow losses. We have already touched on the importance of having high machine efficiencies. Relatively speaking, this is not too difficult to accomplish in the turbine, where an expansion process takes place, but it is quite a task to build an efficient compressor. In addition, pressure drops will be involved in all ducts and heat exchangers (burners, intercoolers, reheaters, regenerators, etc.). An $h-s$ diagram for a real Brayton cycle is given in Figure 12.4, which shows the effects of machine efficiencies and pressure drops. Note that the irreversible effects cause entropy increases in both the compressor and turbine.

Turbine efficiency, assuming negligible heat loss, becomes

$$\eta_t \equiv \frac{\text{actual work output}}{\text{ideal work output}} = \frac{h_{t3} - h_{t4}}{h_{t3} - h_{t4s}} \quad (12.23)$$

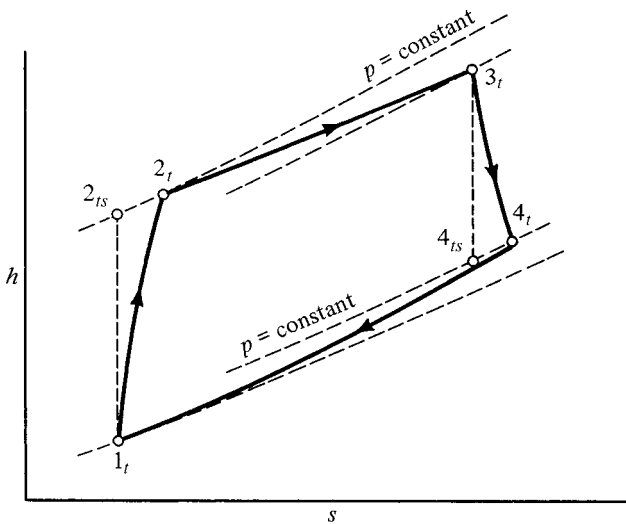


Figure 12.4 $h-s$ diagram for real Brayton cycle.

For a perfect gas with constant specific heats, this can also be represented in terms of temperatures:

$$\eta_t \equiv \frac{c_p(T_{t3} - T_{t4})}{c_p(T_{t3} - T_{t4s})} = \frac{T_{t3} - T_{t4}}{T_{t3} - T_{t4s}} \quad (12.24)$$

Note that the actual and ideal turbines operate between the same pressures.

The *compressor efficiency* similarly becomes

$$\eta_c \equiv \frac{\text{ideal work input}}{\text{actual work input}} = \frac{h_{t2s} - h_{t1}}{h_{t2} - h_{t1}} \quad (12.25)$$

$$\eta_c = \frac{T_{t2s} - T_{t1}}{T_{t2} - T_{t1}} \quad (12.26)$$

Again, note that the actual and ideal machines operate between the same pressures (see Figure 12.4).

Example 12.2 Assume the same information as given in Example 12.1 except that the compressor and turbine efficiencies are both 80%. Neglect any pressure drops in the heat exchangers. Thus the results will show the effect of low machine efficiencies on the Brayton cycle. We take the ideal values that were calculated in Example 12.1.

$$T_1 = 550^\circ\text{R} \quad T_3 = 2000^\circ\text{R} \quad \eta_t = \eta_c = 0.8$$

$$T_{2s} = 1062^\circ\text{R} \quad T_{4s} = 1036^\circ\text{R}$$

$$w_t = (0.8)(0.24)(2000 - 1036) = 185.1 \text{ Btu/lbm}$$

$$w_c = \frac{(0.24)(1062 - 550)}{0.8} = 153.6 \text{ Btu/lbm}$$

$$w_n = 185.1 - 153.6 = 31.5 \text{ Btu/lbm}$$

$$T_2 = 550 + \frac{153.6}{0.24} = 1190^\circ\text{R}$$

$$q_a = (0.24)(2000 - 1190) = 194.4 \text{ Btu/lbm}$$

$$\eta_{th} = \frac{w_n}{q_a} = \frac{31.5}{194.4} = 16.2\%$$

Note that the introduction of 80% machine efficiencies drastically reduces the net work and cycle efficiency, to about 29% and 34% of their respective ideal values. What would the net work and cycle efficiency be if the machine efficiencies were 75%?

Open Brayton Cycle for Propulsion Systems

Most stationary gas turbine power plants operate on the *closed cycle* illustrated in Figure 12.1. Gas turbine engines used for aircraft and missile propulsion operate

on an *open cycle*; that is, the process of heat rejection (from the turbine exit to the compressor inlet) does not physically take place within the engine, but occurs in the atmosphere. Thermodynamically speaking, the open and closed cycles are identical, but there are a number of significant differences in actual hardware.

1. The air enters the system at high velocity and thus must be diffused before being allowed to pass into the compressor. A significant portion of the compression occurs in this diffuser. If flight speeds are supersonic, pressure increases also occur across the shock system at the front of the inlet.
2. The heat addition is carried out by an internal combustion process within a burner or combustion chamber. Thus the products of combustion pass through the remainder of the system.
3. After passing through the turbine, the air leaves the system by further expanding through a nozzle. This increases the kinetic energy of the exhaust gases, which aids in producing thrust.
4. Although the compression and expansion processes generally occur in stages (most particularly with axial compressors), no intercooling is involved. Thrust augmentation with an *afterburner* could be considered as a form of reheat between the last turbine stage and the nozzle expansion. The use of regenerators is considered impractical for flight propulsion systems.

The division of the compression process between the diffuser and compressor and amount of expansion that takes place within the turbine and the exit nozzle vary greatly depending on the type of propulsion system involved. This is discussed in greater detail in the next section, where we describe a number of common propulsion engines.

12.4 PROPULSION ENGINES

Turbojet

Although the first patent for a jet engine was issued in 1922, the building of practical turbojets did not take place until the next decade. Development work was started in both England and Germany in 1930, with the British obtaining the first operable engine in 1937. However, it was not used to power an airplane until 1941. The thrust of this engine was about 850 lbf. The Germans managed to achieve the first actual flight of a turbojet plane in 1939, with an engine of 1100 lbf thrust. (Historical notes on various engines were obtained from Reference 25.)

Figure 12.5 shows a cutaway picture of a typical turbojet. Although this looks rather formidable, the schematic shown in Figure 12.6 will help identify the basic parts. Figure 12.6 also shows the important section locations necessary for engine analysis. Air enters the diffuser and is somewhat compressed as its velocity is decreased. The amount of compression that takes place in the diffuser depends on the

[Image not available in this electronic edition.]

Figure 12.5 Cutaway view of a turbojet engine. (Courtesy of Pratt & Whitney Aircraft.)

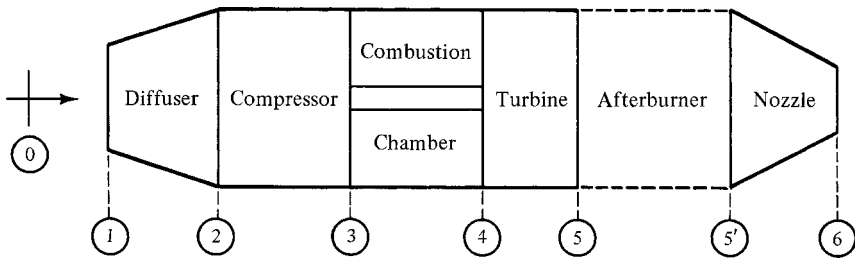


Figure 12.6 Basic parts of a turbojet engine.

flight speed of the vehicle. The greater the flight speed, the greater the pressure rise within the diffuser.

After passing through the diffuser, the air enters an adiabatic compressor, where the remainder of the pressure rise occurs. The early turbojets used centrifugal compressors, as these were the most efficient type available. Since that time a great deal more has been learned about aerodynamics and this has enabled the rapid development of efficient axial-flow compressors which are now widely used in jet engines.

A portion of the air then enters the combustion chamber for the heat addition by internal combustion, which is ideally carried out at constant pressure. Combustion chambers come in several configurations; some are annular chambers, but most consist of a number of small chambers surrounding the central shaft. The remainder of the air is used to cool the chamber, and eventually, all excess air is mixed with the products of combustion to cool them before entering the turbine. This is the most critical temperature in the entire engine since the turbine blading has reduced strength at elevated temperatures and operates at high stress levels. As better materials are developed, the

maximum allowable turbine inlet temperature can be raised, which will result in more efficient engines. Also, methods of blade cooling have helped alleviate this problem.

The gas is *not* expanded back to atmospheric pressure within the turbine. It is only expanded enough to produce sufficient shaft work to run the compressor plus the engine auxiliaries. This expansion is essentially adiabatic. In most jet engines the gases are then exhausted to the atmosphere through a nozzle. Here, the expansion permits conversion of enthalpy into kinetic energy and the resulting high velocities produce thrust. Normally, converging-only nozzles are used and they operate in a choked condition.

Many jet engines used for military aircraft have a section between the turbine and the exhaust nozzle which includes an *afterburner*. Since the gases contain a large amount of excess air, additional fuel can be added in this section. The temperature can be raised quite high since the surrounding material operates at a low stress level. The use of an afterburner enables much greater exhaust velocities to be obtained from the nozzle with higher resultant thrusts. However, this increase in thrust is obtained at the expense of an extremely high rate of fuel consumption.

An h - s diagram for a turbojet is shown in Figure 12.7, which for the sake of simplicity indicates all processes as ideal. The station numbers refer to those marked in the schematic of Figure 12.6. The diagram represents *static* values. The free stream exists at state 0 and has a high velocity (relative to the engine). These same conditions may or may not exist at the actual inlet to the engine. An external diffusion with spillage or an external shock system would cause the thermodynamic state at 1 to differ from that of the free stream. Notice that point 1 does not even appear on the h - s diagram. This is because the performance of an air inlet is usually given with respect to the free-stream conditions, enabling one immediately to compute properties at section 2.

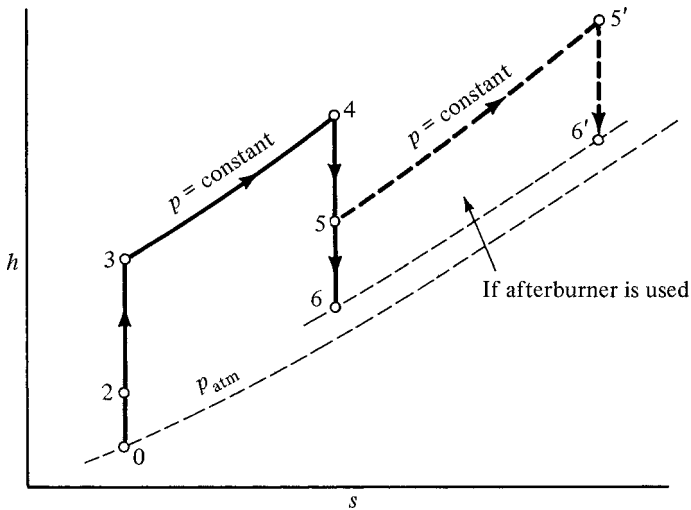


Figure 12.7 h - s diagram for ideal turbojet. (For schematic see Figure 12.6.)

Operation both with and without an afterburner is shown on Figure 12.7, the process from 5 to 5' indicating the use of an afterburner, with 5' to 6' representing subsequent flow through the exhaust nozzle. In this case a nozzle with a variable exit area is required to accommodate the flow when in the afterburning mode. Since the converging nozzle is usually choked, we have indicated point 6 (and 6') at a pressure greater than atmospheric. High velocities exist at the inlet and outlet (0, 1, and 6 or 6'), and relatively low velocities exist at all other sections. Thus points 2 through 5 (and 5') also represent approximate stagnation values. (These internal velocities may not always be negligible, especially in the afterburner region.) A detailed analysis of a turbojet is identical with that of the primary air passing through a turbofan engine. A problem related to this case is worked out in Example 12.3.

A turbojet engine has a high fuel consumption because it creates thrust by accelerating a relatively small amount of air through a large velocity differential. In a later section we shall see that this creates a low propulsion efficiency unless the flight velocity is very high. Thus the profitable application of the turbojet is in the speed range from $M_0 = 1.0$ up to about $M_0 = 2.5$ or 3.0. At flight speeds above approximately $M_0 = 3.0$, the ramjet appears to be more desirable. In the subsonic speed range, other variations of the turbojet are more economical, and these will be discussed next.

Turbofan

The concept here is to move a great deal more air through a smaller velocity differential, thus increasing the propulsion efficiency at low flight speeds. This is accomplished by adding a large shrouded fan to the engine. Figure 12.8 shows a cutaway picture of a typical turbofan engine. The schematic in Figure 12.9 will help to identify the basic parts and indicate the important section locations necessary for the engine analysis.

[Image not available in this electronic edition.]

Figure 12.8 Cutaway view of a turbofan engine. (Courtesy of General Electric Aircraft Engines.)

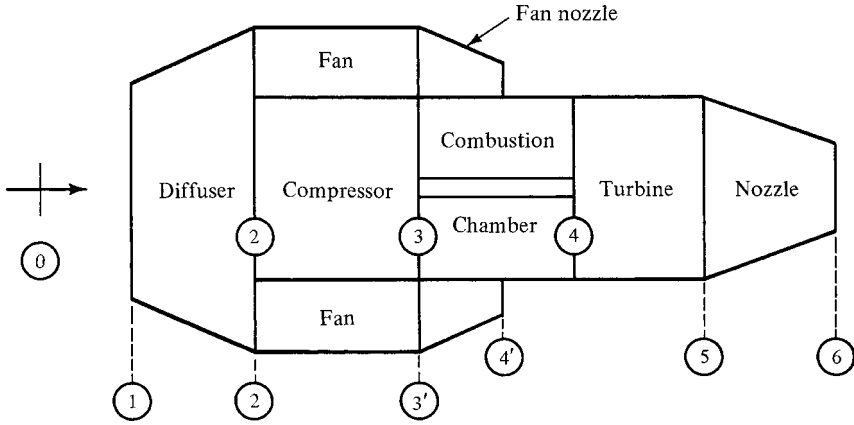


Figure 12.9 Basic parts of a turbofan engine.

The flow through the central portion, or basic gas generator (0–1–2–3–4–5–6), is identical to that discussed previously for the pure jet (without an afterburner). Additional air, often called *secondary* or *bypass air*, is drawn in through a diffuser and passed to the fan section, where it is compressed through a relatively low pressure ratio. It is then exhausted through a nozzle to the atmosphere. Many variations of this configuration are found. Some fans are located near the rear with their own inlet and diffuser. In some models the bypass air from the fan is mixed with the main air from the turbine, and the total air flow exits through a common nozzle.

The *bypass ratio* is defined as

$$\beta \equiv \frac{\dot{m}'_a}{\dot{m}_a} \tag{12.27}$$

where

$\dot{m}_a \equiv$ mass flow rate of primary air (through compressor)

$\dot{m}'_a \equiv$ mass flow rate of secondary air (through fan)

An h – s diagram for the primary air is shown in Figure 12.10 and for the secondary air in Figure 12.11. In these diagrams both the actual and ideal processes are shown so that a more accurate picture of the losses can be obtained. These diagrams are for the configuration shown in Figure 12.9, in which a common diffuser is used for all entering air and separate nozzles are used for the fan and turbine exhaust.

The analysis of a fanjet is identical to that of a pure jet, with the exception of sizing the turbine. In the fanjet the turbine must produce enough work to run both the compressor and the fan:

turbine work = compressor work + fan work

$$\dot{m}_a(h_{t4} - h_{t5}) = \dot{m}_a(h_{t3} - h_{t2}) + \dot{m}'_a(h_{t3'} - h_{t2}) \tag{12.28}$$

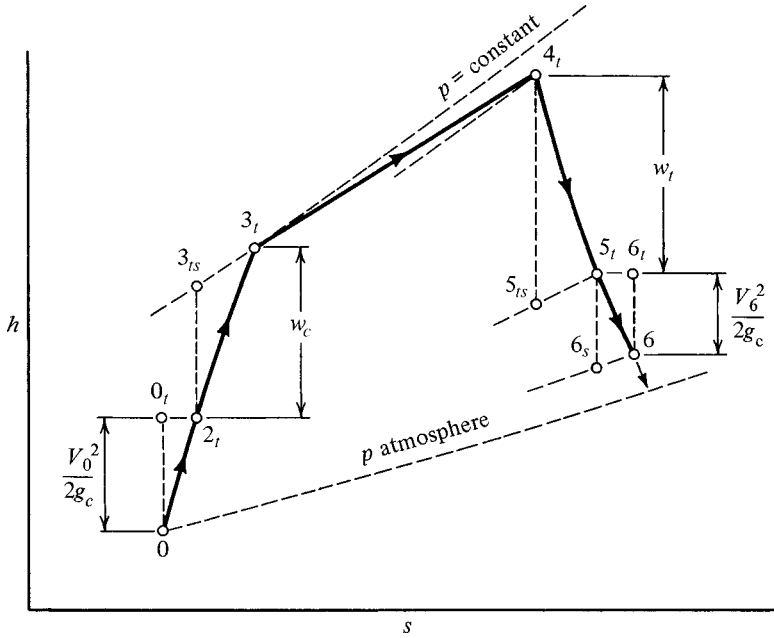


Figure 12.10 h - s diagram for primary air of turbofan. (For schematic see Figure 12.9.)

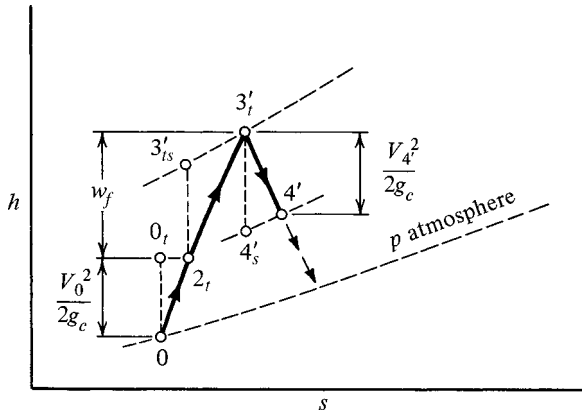


Figure 12.11 h - s diagram for secondary air of turbofan. (For schematic see Figure 12.9.)

If we divide by \dot{m}_a and introduce the bypass ratio β [see equation (12.27)], this becomes

$$(h_{t4} - h_{t5}) = (h_{t3} - h_{t2}) + \beta(h_{t3'} - h_{t2}) \tag{12.29}$$

Note that the mass of the fuel has been neglected in computing the turbine work. This is quite realistic since air bled from the compressor for cabin pressurization and

air-conditioning plus operation of auxiliary power amounts to approximately the mass of fuel that is added in the burner.

The following example will serve to illustrate the method of analysis for turbojet and turbofan engines. Some simplification is made in that the working medium is treated as a perfect gas with constant specific heats. These assumptions would actually yield fairly satisfactory results if *two* values of c_p (and γ) were used: one for the cold section (diffuser, compressor, fan, and fan nozzle) and another one for the hot section (turbine and turbine nozzle). For the sake of simplicity we shall use only one value of c_p (and γ) in the example that follows. If more accurate results were desired, we could resort to gas tables, which give precise enthalpy versus temperature relations not only for the entering air but also for the particular products of combustion that pass through the turbine and other parts. (see Ref. 31.)

Example 12.3 A turbofan engine is operating at Mach 0.9 at an altitude of 33,000 ft, where the temperature and pressure are 400°R and 546 psfa. The engine has a bypass ratio of 3.0 and the primary air flow is 50 lbm/sec. Exit nozzles for both the main and bypass flow are converging-only. Propulsion workers generally use the stagnation-pressure recovery factor versus efficiency for calculating component performance, but in this example we will use the following efficiencies:

$$\eta_c = 0.88 \quad \eta_f = 0.90 \quad \eta_b = 0.96 \quad \eta_t = 0.94 \quad \eta_n = 0.95$$

The total-pressure recovery factor of the diffuser (related to the free stream) is $\eta_r = 0.98$, the compressor total-pressure ratio is 15, the fan total-pressure ratio is 2.5, the maximum allowable turbine inlet temperature is 2500°R, the total-pressure loss in the combustor is 3%, and the heating value of the fuel is 18,900 Btu/lbm. Assume the working medium to be air and treat it as a perfect gas with constant specific heats. Compute the properties at each section (see Figure 12.9 for section numbers). Later, the air will be treated as a real gas and the results will be compared.

Diffuser:

$$M_0 = 0.9 \quad T_0 = 400^\circ\text{R} \quad p_0 = 546 \text{ psfa}$$

$$a_0 = \sqrt{(1.4)(32.2)(53.3)(400)} = 980 \text{ ft/sec}$$

$$V_0 = M_0 a_0 = (0.9)(980) = 882 \text{ ft/sec}$$

$$p_{t0} = \frac{p_{t0}}{p_0} p_0 = \left(\frac{1}{0.5913} \right) (546) = 923 \text{ psfa}$$

$$T_{t0} = \frac{T_{t0}}{T_0} T_0 = \left(\frac{1}{0.8606} \right) (400) = 465^\circ\text{R} = T_{t2}$$

It is common practice to base the performance of an air inlet on the free-stream conditions.

$$p_{t2} = \eta_r p_{t0} = (0.98)(923) = 905 \text{ psfa}$$

Compressor:

$$p_{t3} = 15p_{t2} = (15)(905) = 13,575 \text{ psfa}$$

$$\frac{T_{t3s}}{T_{t2}} = \left(\frac{p_{t3}}{p_{t2}} \right)^{(\gamma-1)/\gamma} = (15)^{0.286} = 2.170$$

$$T_{t3s} = (2.17)(465) = 1009^\circ\text{R}$$

$$\eta_c = \frac{h_{t3s} - h_{t2}}{h_{t3} - h_{t2}} = \frac{T_{t3s} - T_{t2}}{T_{t3} - T_{t2}}$$

Thus

$$T_{t3} - T_{t2} = \frac{1009 - 465}{0.88} = 618^\circ\text{R}$$

and

$$T_{t3} = T_{t2} + 618 = 465 + 618 = 1083^\circ\text{R}$$

Fan:

$$p_{t3'} = 2.5p_{t2} = (2.5)(905) = 2263 \text{ psfa}$$

$$\frac{T_{t3s'}}{T_{t2}} = \left(\frac{p_{t3'}}{p_{t2}} \right)^{(\gamma-1)/\gamma} = (2.5)^{0.286} = 1.300$$

$$T_{t3s'} = (1.3)(465) = 604^\circ\text{R}$$

$$T_{t3'} - T_{t2} = \frac{T_{t3s'} - T_{t2}}{\eta_f} = \frac{604 - 465}{0.90} = 154.4^\circ\text{R}$$

and

$$T_{t3'} = T_{t2} + 154.4 = 465 + 154.4 = 619^\circ\text{R}$$

Burner:

$$p_{t4} = 0.97p_{t3} = (0.97)(13,575) = 13,168 \text{ psfa}$$

$$T_{t4} = 2500^\circ\text{R (max. allowable)}$$

An energy analysis of the burner reveals

$$(\dot{m}_f + \dot{m}_a)h_{t3} + \eta_b(\text{HV})\dot{m}_f = (\dot{m}_f + \dot{m}_a)h_{t4} \quad (12.30)$$

where

HV \equiv heating value of the fuel

η_b \equiv combustion efficiency

Let $f \equiv \dot{m}_f/\dot{m}_a$ denote the fuel–air ratio. Then

$$\eta_b(\text{HV})f = (1 + f)c_p(T_{t4} - T_{t3}) \quad (12.31)$$

or

$$f = \frac{1}{\frac{\eta_b(\text{HV})}{c_p(T_{i4} - T_{i3})} - 1} = \frac{1}{\frac{(0.96)(18,900)}{(0.24)(2500 - 1083)} - 1} = 0.0191$$

Turbine: If we neglect the mass of fuel added, we have from equation (12.29) (for constant specific heats):

$$(T_{i4} - T_{i5}) = (T_{i3} - T_{i2}) + \beta(T_{i3'} - T_{i2})$$

$$T_{i4} - T_{i5} = (1083 - 465) + (3)(619 - 465) = 1080^\circ\text{R}$$

and

$$T_{i5} = T_{i4} - 1080 = 2500 - 1080 = 1420^\circ\text{R}$$

and

$$\eta_t = \frac{h_{i4} - h_{i5}}{h_{i4} - h_{i5s}} = \frac{T_{i4} - T_{i5}}{T_{i4} - T_{i5s}}$$

$$T_{i4} - T_{i5s} = \frac{1080}{0.94} = 1149^\circ\text{R}$$

and

$$T_{i5s} = T_{i4} - 1149 = 2500 - 1149 = 1351^\circ\text{R}$$

$$\frac{p_{i4}}{p_{i5}} = \left(\frac{T_{i4}}{T_{i5s}}\right)^{\gamma/(\gamma-1)} = \left(\frac{2500}{1351}\right)^{3.5} = 8.62$$

$$p_{i5} = \frac{p_{i4}}{8.62} = \frac{13,168}{8.62} = 1528 \text{ psfa}$$

Turbine nozzle: The operating pressure ratio for the nozzle will be

$$\frac{p_0}{p_{i5}} = \frac{546}{1528} = 0.357 < 0.528$$

which means that the nozzle is choked and has sonic velocity at the exit.

$$T_{i6} = T_{i5} = 1420^\circ\text{R} \quad M_6 = 1 \quad \text{and thus} \quad \frac{T_6}{T_{i6}} = 0.8333$$

$$T_6 = (0.8333)(1420) = 1183^\circ\text{R}$$

$$V_6 = a_6 = \sqrt{(1.4)(32.2)(53.3)(1183)} = 1686 \text{ ft/sec}$$

$$\eta_n = \frac{h_{i5} - h_6}{h_{i5} - h_{6s}} = \frac{T_{i5} - T_6}{T_{i5} - T_{6s}}$$

Thus

$$T_{i5} - T_{6s} = \frac{1420 - 1183}{0.95} = \frac{237}{0.95} = 249^\circ\text{R}$$

and

$$T_{6s} = T_{15} - 249 = 1420 - 249 = 1171^\circ\text{R}$$

$$\frac{p_{15}}{p_{6s}} = \left(\frac{T_{15}}{T_{6s}}\right)^{\gamma/(\gamma-1)} = \left(\frac{1420}{1171}\right)^{3.5} = 1.964$$

$$p_6 = p_{6s} = \frac{p_{15}}{1.964} = \frac{1528}{1.964} = 778 \text{ psfa}$$

Fan nozzle:

$$\frac{p_0}{p_{13'}} = \frac{546}{2263} = 0.241 < 0.528 \quad (\text{nozzle is choked})$$

$$T_{14'} = T_{13'} = 619^\circ\text{R}$$

$$M_{4'} = 1 \quad T_{4'} = (0.8333)(619) = 516^\circ\text{R}$$

$$V_{4'} = a_{4'} = \sqrt{(1.4)(32.2)(53.3)(516)} = 1113 \text{ ft/sec}$$

$$T_{13'} - T_{4s'} = \frac{T_{13'} - T_{4'}}{\eta_n} = \frac{619 - 516}{0.95} = 108^\circ\text{R}$$

$$T_{4s'} = 619 - 108 = 511^\circ\text{R}$$

$$\frac{p_{13'}}{p_{4s'}} = \left(\frac{T_{13'}}{T_{4s'}}\right)^{\gamma/(\gamma-1)} = \left(\frac{619}{511}\right)^{3.5} = 1.956$$

$$p_{4'} = p_{4s'} = \frac{2263}{1.956} = 1157 \text{ psfa}$$

In a later section we shall continue this example to determine the thrust and other performance parameters of the engine.

Turboprop

Figure 12.12 shows a cutaway picture of a typical turboprop engine. The schematic in Figure 12.13 will help identify the basic parts and indicates the important section locations. It is quite similar to the turbofan engine except for the following:

1. As much power as possible is developed in the turbine, and thus more power is available to operate the propeller. In essence, the engine is operating as a stationary power plant—but on an open cycle.
2. The propeller operates through reduction gears at a relatively low rpm value (compared with a fan).

As a result of extracting so much power from the turbine, very little expansion can take place in the nozzle, and consequently, the exit velocity is relatively low. Thus little thrust (about 10 to 20% of the total) is obtained from the jet.

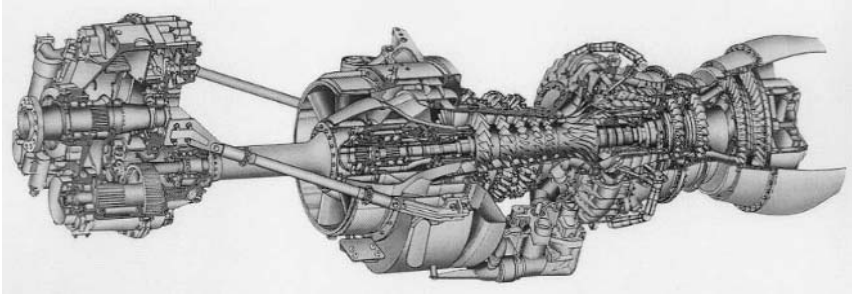


Figure 12.12 Cutaway view of a turboprop engine. (Courtesy of General Electric Aircraft Engines.)

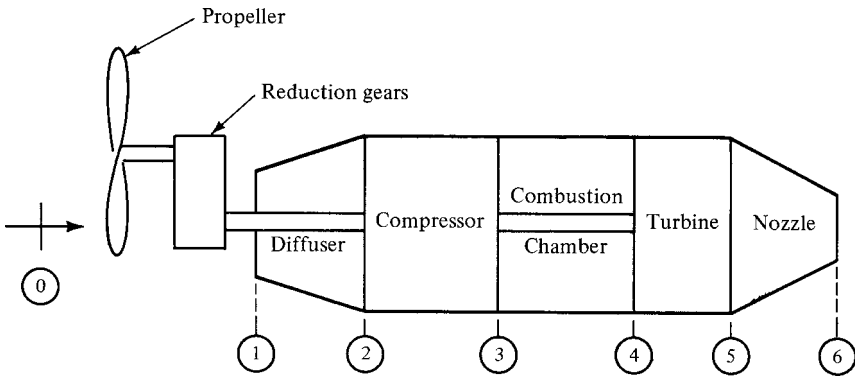


Figure 12.13 Basic parts of a turboprop engine.

On the other hand, the propeller accelerates very large quantities of air (compared to the turbofan and turbojet) through a very small velocity differential. This makes an extremely efficient propulsion device for the lower subsonic flight regime. Another operating characteristic of a propeller-driven aircraft is that of high thrust and power available for takeoff. The turboprop engine is both considerably smaller in diameter and lighter in weight than a reciprocating engine of comparable power output.

Ramjet

The ramjet cycle is basically the same as that of the turbojet. Air enters the diffuser and most of its kinetic energy is converted into a pressure rise. If the flight speed is supersonic, part of this compression actually occurs across a shock system that precedes the inlet (see Figure 7.15). When flight speeds are high, sufficient compression can be attained at the inlet and in the diffusing section, and thus a compressor is not needed. Once the compressor is eliminated, the turbine is no longer required and it

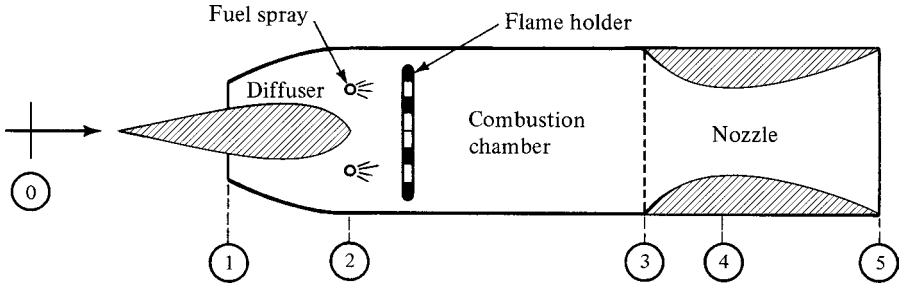


Figure 12.14 Basic parts of a ramjet engine.

can also be omitted. The result is a ramjet engine, which is shown schematically in Figure 12.14.

The combustion region in a ramjet is generally a large single chamber, similar to an afterburner. Since the cross-sectional area is relatively small, velocities are much higher in the combustion zone than are experienced in a turbojet. Thus *flame holders* (similar to those used in afterburners) must be introduced to stabilize the flame and prevent blowouts. Experimental work is presently being carried out with solid-fuel ramjets. Supersonic combustion would simplify the diffuser (and eliminate much loss), but results to date have not been fruitful.

Although a ramjet engine can operate at speeds as low as $M_0 = 0.2$, the fuel consumption is horrendous at these low velocities. The operation of a ramjet does not become competitive with that of a turbojet until speeds of about $M_0 = 2.5$ or above are reached. Another disadvantage of a ramjet is that it cannot operate at zero flight speed and thus requires some auxiliary means of starting; it may be dropped from a plane or launched by rocket assist. Development work is currently under way on combination turbojet and ramjet engines for high-speed piloted craft. This would solve the launch problem as well as the inefficient operation at low speeds.

The ramjet was invented in 1913 by a Frenchman named Lorin. Various other patents were obtained in England and Germany in the 1920s. The first plane to be powered by a ramjet was designed in France by Leduc in 1938, but its construction was delayed by World War II and it did not fly until 1949. Ramjets are very simple and lightweight and thus are ideally suited as expendable engines for high-speed target drones or guided missiles.

Example 12.4 A ramjet has a flight speed of $M_0 = 1.8$ at an altitude of 13,000 m, where the temperature is 218 K and the pressure is $1.7 \times 10^4 \text{ N/m}^2$. Assume a two-dimensional inlet with a deflection angle of 10° (Figure E12.4). Neglect frictional losses in the diffuser and combustion chamber. The inlet area is $A_1 = 0.2 \text{ m}^2$; sufficient fuel is added to increase the total temperature to 2225 K. The heating value of the fuel is $4.42 \times 10^7 \text{ J/kg}$ with $\eta_b = 0.98$. The nozzle expands to atmospheric pressure for maximum thrust with $\eta_n = 0.96$. The velocity entering the combustion chamber is to be kept as large as possible but not greater than $M_2 = 0.25$.

Assume the fluid to be air and treat it as a perfect gas with $\gamma = 1.4$. Compute significant properties at each section, mass flow rate, fuel-air ratio, and diffuser total-pressure recovery factor.

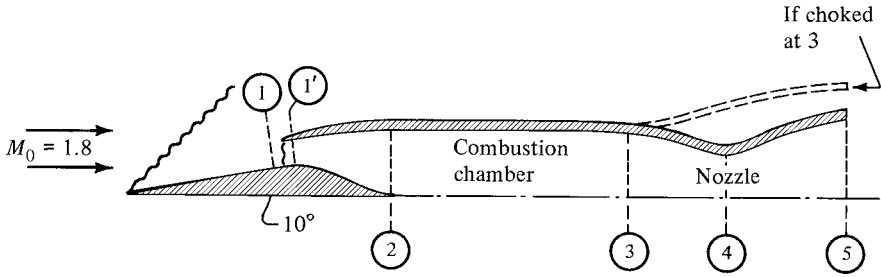


Figure E12.4

Oblique shock: For $M_0 = 1.8$, $\delta = 10^\circ$, and $\theta = 44^\circ$:

$$M_{0n} = M_0 \sin \theta = 1.8 \sin 44^\circ = 1.250$$

$$M_{1n} = 0.8126 \quad \frac{p_1}{p_0} = 1.6562 \quad \frac{T_1}{T_0} = 1.1594$$

$$M_1 = \frac{M_{1n}}{\sin(\theta - \delta)} = \frac{0.8126}{\sin(44 - 10)} = 1.453$$

Normal shock: For $M_1 = 1.453$:

$$M_{1'} = 0.7184 \quad \frac{p_{1'}}{p_1} = 2.2964 \quad \frac{T_{1'}}{T_1} = 1.2892$$

$$p_{1'} = \frac{p_{1'}}{p_1} \frac{p_1}{p_0} p_0 = (2.2964)(1.6562)p_0 = 3.803 p_0$$

$$T_{1'} = T_{10} = T_0 \frac{T_{10}}{t_0} = (218) \left(\frac{1}{0.6068} \right) = 359.3 \text{ K}$$

Rayleigh flow: If $M_2 = 0.25$:

$$T_t^* = T_{1'} \frac{T_t^*}{T_{1'}} = (359.3) \left(\frac{1}{0.2568} \right) = 1399 \text{ K}$$

Thus, adding fuel to make $T_{13} = 2225 \text{ K}$ means that the flow will be choked ($M_3 = 1.0$) and $M_2 < 0.25$. We proceed to find M_2 .

$$\frac{T_{12}}{T_t^*} = \frac{T_{12}}{T_{13}} \frac{T_{13}}{T_t^*} = \left(\frac{359.3}{2225} \right) (1) = 0.1615$$

$$M_2 = 0.192$$

Diffuser:

$$p_2 = \frac{p_2}{p_{12}} \frac{p_{12}}{p_{1'}} \frac{p_{1'}}{p_{1'}} p_{1'} = (0.9746)(1) \left(\frac{1}{0.7091} \right) (3.803 p_0) = 5.227 p_0$$

$$T_2 = \frac{T_2}{T_{12}} T_{12} = (0.9927)(359.3) = 356.7 \text{ K}$$

Combustion chamber:

$$p_3 = p^* = \frac{p^*}{p_2} p_2 = \left(\frac{1}{2.2822} \right) (5.227 p_0) = 2.29 p_0$$

$$T_3 = T_{t3} \frac{T_3}{T_{t3}} = (2225)(0.8333) = 1854 \text{ K}$$

Nozzle: Since $M_3 = 1.0$, the nozzle diverges immediately.

$$T_{5s} = T_3 \left(\frac{p_3}{p_{5s}} \right)^{(1-\gamma)/\gamma} = (1854) \left(\frac{2.29 p_0}{p_0} \right)^{(1-1.4)/1.4} = 1463 \text{ K}$$

$$T_5 = T_3 - \eta_n (T_3 - T_{5s}) = 1854 - (0.96)(1854 - 1463) = 1479 \text{ K}$$

$$\frac{T_5}{T_{t5}} = \frac{1479}{2225} = 0.6647 \quad \text{and} \quad M_5 = 1.588$$

Flow rate:

$$p_1 = \frac{p_1}{p_0} p_0 = (1.6562)(1.7 \times 10^4) = 2.816 \times 10^4 \text{ N/m}^2$$

$$T_1 = \frac{T_1}{T_0} T_0 = (1.1594)(218) = 253 \text{ K}$$

$$\rho_1 = \frac{p_1}{RT_1} = \frac{2.816 \times 10^4}{(287)(253)} = 0.388 \text{ kg/m}^3$$

$$V_1 = M_1 a_1 = (1.453)[(1.4)(1)(287)(253)]^{1/2} = 463 \text{ m/s}$$

$$\dot{m} = \rho_1 A_1 V_1 = (0.388)(0.2)(463) = 35.9 \text{ kg/s}$$

Fuel-air ratio:

$$f = \frac{1}{\frac{\eta_b(\text{HV})}{c_p(T_{t3} - T_{t2})} - 1} = \frac{1}{\frac{(0.98)(4.42 \times 10^7)}{(1000)(2225 - 359.3)} - 1} = 0.0450$$

Total-pressure recovery factor:

$$\eta_r = \frac{p_{t2}}{p_{t0}} = \frac{p_{t2}}{p_2} \frac{p_2}{p_0} \frac{p_0}{p_{t0}} = \left(\frac{1}{0.9746} \right) \left(\frac{5.227 p_0}{p_0} \right) (0.17404) = 0.933$$

In a later section we continue with this example to determine the thrust and other performance parameters.

Pulsejet

The turbojet, turbofan, turboprop, and ramjet all operate on variations of the Brayton cycle. The pulsejet is a totally different device and is shown in Figure 12.15.

A key feature in the design of the pulsejet is a bank of spring-loaded check valves that forms the wall between the diffuser and the combustion chamber. These valves

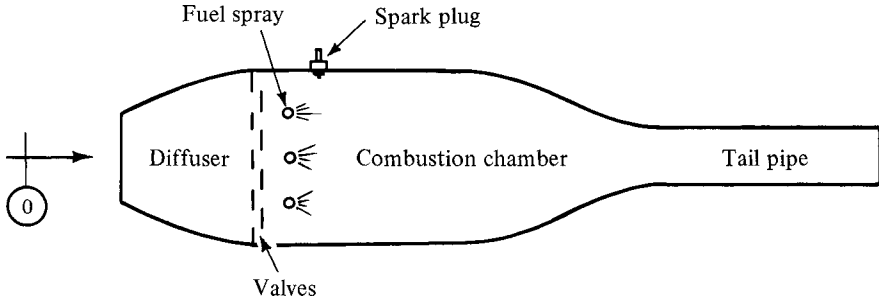


Figure 12.15 Basic parts of a pulsejet engine.

are normally closed, but if a predetermined pressure differential exists, they will open to permit high-pressure air from the diffusing section to pass into the combustion chamber. They never permit flow from the chamber back into the diffuser. A spark plug initiates combustion, which occurs at something approaching a constant-volume process. The resultant high temperature and pressure cause the gases to flow out the tail pipe at high velocity. The inertia of the exhaust gases creates a slight vacuum in the combustion chamber. This vacuum combined with the ram pressure developed in the diffuser causes sufficient pressure differential to open the check valves. A new charge of air enters the chamber and the cycle repeats. The frequency of the cycle above depends on the size of the engine, and the dynamic characteristics of the valves must be matched carefully to this frequency. Small engines operate as high as 300 to 400 cycles per second, and large engines have been built that operate as low as 40 cycles per second.

The idea of a pulsejet originated in France in 1906, but the modern configuration was not developed until the early 1930s in Germany. Perhaps the most famous pulsejet was the V-1 engine that powered the German “buzz bombs” of World War II. The speed range of pulsejets is limited to the subsonic regime since the large frontal area required (because the air is admitted intermittently) causes high drag. Its extreme noise and vibration levels render it useless for piloted craft. However, its ability to develop thrust at zero speed gives it a distinct advantage over the ramjet.

Rocket

All the propulsion systems discussed so far belong to the category of air-breathing engines. As such, their application is limited to altitudes of about 100,000 ft or less. On the other hand, rockets carry oxidizer on board as well as fuel and thus can function within and outside the atmosphere. Schematics of rocket engines are shown in Figure 12.16. Chemical rocket propellants are either solid or liquid. In a liquid system the fuel and oxidizer are separately stored and are sprayed under high pressure (300 to 800 psia) into the combustion chamber, where burning takes place. When solid propellants are used, both fuel and oxidizer are contained in the propellant grain and the burning takes place on the surface of the propellant. Thus

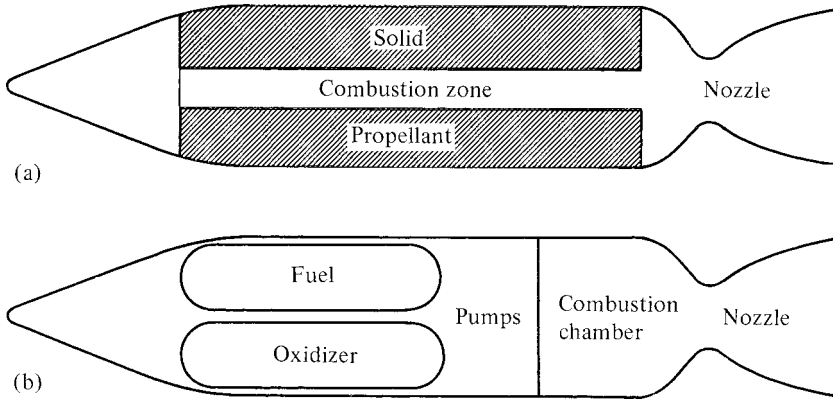


Figure 12.16 Basic parts of a rocket engine: (a) Solid-propellant rocket. (b) Liquid-propellant rocket.

the *combustion chamber* continually increases in volume. Some solid propellants are *internal burning*, as shown in Figure 12.16a, whereas others are *end burning* (like a cigarette). Solid propellants develop chamber pressures of from 500 to 3000 psia.

Figure 12.17 shows the most common thrust profiles that can be provided with internal burning. *Neutral burning* is based on a constant-burning area which is accomplished with specific propellant geometries. Similarly, *progressive* and *regressive burning* depend on the propellant cross section. All these burning profiles affect the acceleration of the rocket, and thus the ultimate mission must be designed into

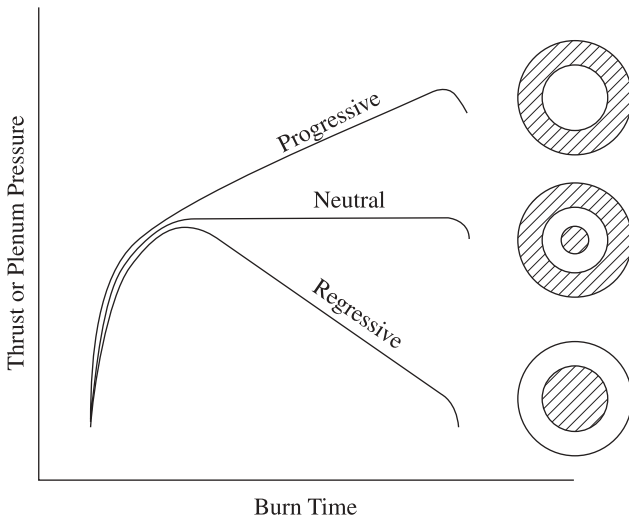


Figure 12.17 Typical thrust profiles and corresponding cross sections for solid propellants.

the propellant grain configuration. The combustion products are exhausted through a converging–diverging nozzle with exit velocities ranging from 5000 to 10,000 ft/sec. The extremely high temperatures reached during the combustion process plus the high rate of fuel consumption limit the use of a rocket engine to short times (on the order of seconds or minutes).

Liquid propellants can be throttled, and this is of great importance to certain missions, particularly manned missions. Liquids significantly outperform solids and can range in thrust from micropounds to megapounds. They tend to be very complex but can be fully checked out prior to operation and their exhaust gases can be non-toxic. Solids, on the other hand, are considerably less expensive than liquids and are preferred in throwaway missions such as sounding rockets and military rockets. Although some thrust variation is possible with solids, this must always be preprogrammed, and in general, once the solid is started, accidentally or otherwise, it cannot be shut off. Solids have been designed successfully to last several years in storage, and this gives them a great advantage over cryogenic liquid propellants. All solid propulsion systems can be packaged very compactly for less drag and can be activated quickly if necessary.

The invention of the rocket is generally attributed to the Chinese around the year 1200, although there is some evidence that rockets may have been used by the Greeks as much as 500 years previous to that time. The father of modern rockets is generally considered to be an American named Robert Goddard. His experiments started in 1915 and extended well into the 1930s. Some of the first successful American rockets were the JATO (jet-assisted take-off) units used during the war (solid in 1941 and liquid in 1942). Also famous was the V-2 rocket developed by Wernher von Braun in Germany. This first flew in 1942 and had a liquid propulsion system that developed 56,000 pounds of thrust. The first rocket-propelled aircraft was the German ME-163.

12.5 GENERAL PERFORMANCE PARAMETERS, THRUST, POWER, AND EFFICIENCY

In this section we examine propulsion systems and obtain a general expression for their net propulsive thrust. We then continue to develop some significant performance parameters, such as power and efficiency.

Thrust Considerations

Consider an airplane or missile that is traveling to the left at a constant velocity V_0 as shown in Figure 12.18. The thrust force is the result of interaction between the fluid



Figure 12.18 Direction of flight and net propulsive force.

and the propulsive device. The fluid pushes on the propulsive device and provides thrust to the left, or in the direction of motion, whereas the propulsive device pushes on the fluid opposite to the direction of flight.

Analysis of Fluid

We start by analyzing the fluid as it passes through the propulsive device. We define a control volume that surrounds all the fluid inside the propulsion system (see Figure 12.19). Velocities are shown relative to the device, which is used as a frame of reference in order to make a steady-flow picture. The x -component of the momentum equation for steady flow is [from equation (3.42)]

$$\sum F_x = \int_{cs} \frac{\rho V_x}{g_c} (\mathbf{V} \cdot \hat{n}) dA \tag{12.32}$$

and for one-dimensional flow this becomes

$$\sum F_x = \frac{\dot{m}_2 V_{2x}}{g_c} - \frac{\dot{m}_1 V_{1x}}{g_c} \tag{12.33}$$

We define an *enclosure force* as the vector sum of the friction forces and the pressure forces of the wall on the fluid within the control volume. We shall designate F_{enc} as the x -component of this enclosure force on the fluid inside the control volume. Then

$$\sum F_x = F_{enc} + p_1 A_1 - p_2 A_2 \tag{12.34}$$

and

$$p_1 A_1 - p_2 A_2 + F_{enc} = \frac{\dot{m}_2 V_2}{g_c} - \frac{\dot{m}_1 V_1}{g_c} \tag{12.35}$$

or

$$F_{enc} = \left(p_2 A_2 + \frac{\dot{m}_2 V_2}{g_c} \right) - \left(p_1 A_1 + \frac{\dot{m}_1 V_1}{g_c} \right) \tag{12.36}$$

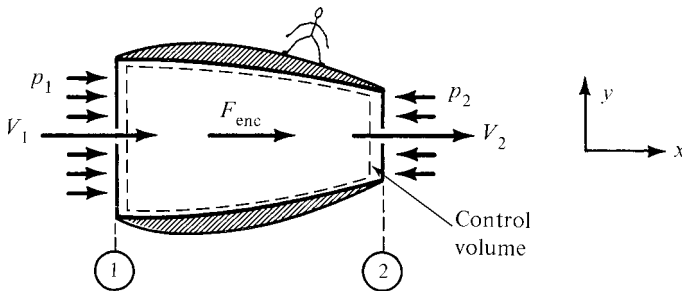


Figure 12.19 Forces on the fluid inside the propulsion system.

Notice that the enclosure force, which is an extremely complicated summation of internal pressure and friction forces, can be expressed easily in terms of known quantities at the inlet and exit. This shows the great power of the momentum equation. You may recall from Chapter 10 [see equation (10.11)] that the combination of variables found in equation (12.36) is called the *thrust function*. Perhaps now you can see a reason for this name.

Analysis of Enclosure

We now analyze the forces on the enclosure or the propulsive device. If the enclosure is pushing on the fluid with a force of magnitude F_{enc} to the right, the fluid must be pushing on the enclosure with a force of equal magnitude to the left. This is the internal reaction of the fluid and is shown in Figure 12.20 as F_{int} :

$$F_{int} \equiv \text{positive thrust on enclosure from internal forces}$$

$$|F_{int}| = |F_{enc}| \tag{12.37}$$

In Figure 12.20 we have indicated the external forces as being ambient pressure over the entire enclosure. At first you might say that this is incorrect since the pressure is not constant over the external surface. Furthermore, we have not shown any friction forces over the external surface. The answer is that these differences are accounted for when the drag forces are computed, since the drag force includes an integration of the shear stresses along the surface and also a pressure drag term, which is normally put in the following form:

$$\text{pressure drag} = \int_1^2 (p - p_0) dA_x \tag{12.38}$$

In equation (12.38) the integration is carried out over the entire external surface of the device and dA_x represents the projection of the increment of area on a plane perpendicular to the x -axis.

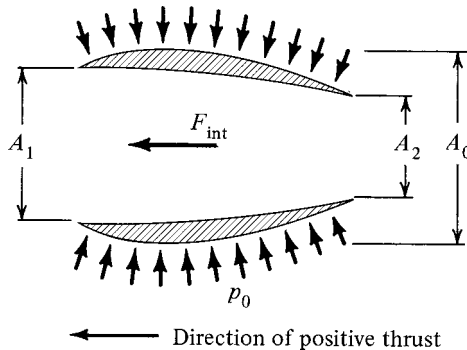


Figure 12.20 Forces on the propulsion device.

We define F_{ext} as the positive thrust that arises from the external forces pushing on the enclosure:

$$F_{\text{ext}} \equiv \text{positive thrust on enclosure from external forces}$$

Since this has been represented as a constant pressure, the integration of these forces is quite simple:

$$F_{\text{ext}} = p_0(A_0 - A_2) - p_0(A_0 - A_1) = p_0(A_1 - A_2) \quad (12.39)$$

The first term in this expression represents *positive* thrust from the pressure forces over the rear portion of the propulsive device. The second term represents *negative* thrust from the pressure forces acting over the forward portion.

The *net positive thrust* on the propulsive device will be the sum of the internal and external forces:

$$F'_{\text{net}} = F_{\text{int}} + F_{\text{ext}} \quad (12.40)$$

Show that the net positive thrust can be expressed as

$$F'_{\text{net}} = \left(p_2 A_2 + \frac{\dot{m}_2 V_2}{g_c} \right) - \left(p_1 A_1 + \frac{\dot{m}_1 V_1}{g_c} \right) + p_0(A_1 - A_2) \quad (12.41)$$

or

$$F'_{\text{net}} = \frac{\dot{m}_2 V_2}{g_c} - \frac{\dot{m}_1 V_1}{g_c} + A_2(p_2 - p_0) - A_1(p_1 - p_0) \quad (12.42)$$

Notice that equation (12.42) has been left in a general form and as such can apply to all cases (i.e., \dot{m}_2 can be different from \dot{m}_1 if it is desired to account for the fuel added, p_2 may be different than p_0 for the case of sonic or supersonic exhausts, and p_1 may not be the same as p_0). If $p_1 \neq p_0$, then $V_1 \neq V_0$. An example of this is shown for subsonic flight in Figure 12.21. Here the flow system is choked and an external diffusion with flow *spill-over* occurs. The fluid that actually enters the engine is said to be contained within the *pre-entry streamtube*.

It is customary in the field of propulsion to work with the free-stream conditions (p_0 and V_0) that exist far ahead of the actual inlet. Thus, by applying equation (12.42) between sections 0 and 2 (versus between 1 and 2), we obtain a simpler expression which is much more convenient to use. We call this the *net propulsive thrust*:

$$F_{\text{net}} = \frac{\dot{m}_2 V_2}{g_c} - \frac{\dot{m}_0 V_0}{g_c} + A_2(p_2 - p_0) \quad (12.43)$$

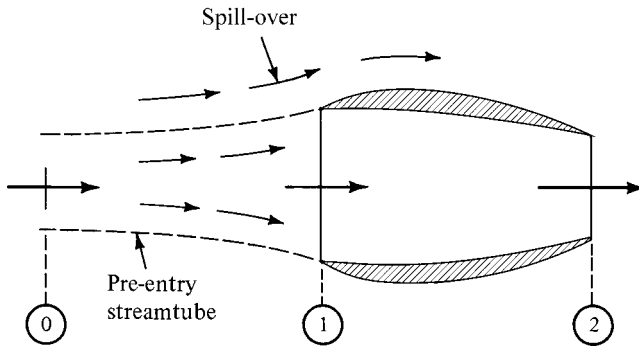


Figure 12.21 External diffusion prior to inlet.

It should be clearly noted that equations (12.42) and (12.43) are *not* equal since the last one, in effect, considers the region from zero to 1 as a part of the propulsive device. Thus this equation includes the *pre-entry thrust*, or the propulsive force that the internal fluid exerts on the boundary of the pre-entry streamtube. This error will be compensated for when the drag is computed since the pressure drag must now be integrated from 0 to 2 as follows:

$$\text{pressure drag} = \int_0^1 (p - p_0) dA_x + \int_1^2 (p - p_0) dA_x \quad (12.44)$$

The integral from 0 to 1, called the *pre-entry drag* or *additive drag*, exactly balances the pre-entry thrust if the flow is as pictured in Figure 12.21.

Power Considerations

There are three different measures of power connected with propulsion systems:

1. Input power
2. Propulsive power
3. Thrust power

Consideration of these power quantities enables us to separate the performance of the thermodynamic cycle from that of the propulsion element. The general relationship among these various power quantities is shown in Figure 12.22. The thermodynamic cycle is concerned with input power and propulsive power, whereas the propulsive device is the link between the propulsive power and the thrust power.

The *power input* to the working fluid, designated as P_I is the rate at which heat or chemical energy is supplied to the system. This energy is the input to the thermodynamic cycle:

$$P_I = \dot{m}_f(HV) \quad (12.45)$$

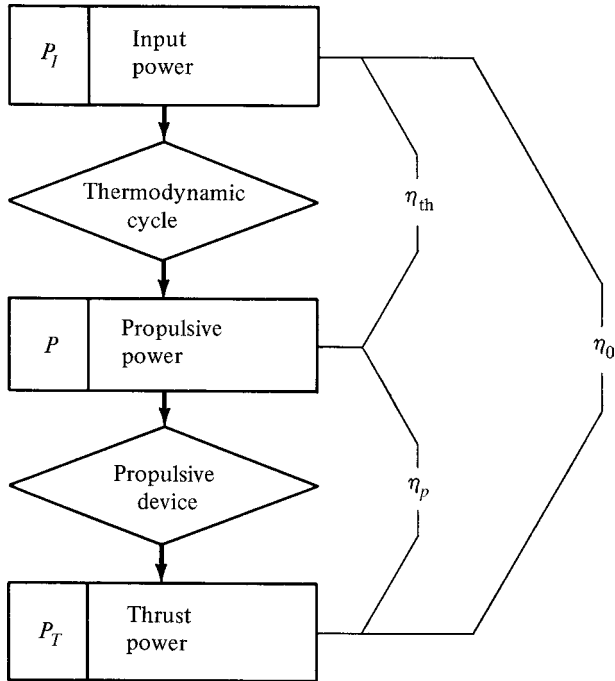


Figure 12.22 Power quantities of a propulsion system.

The output of the cycle is the input to the propulsion element and is designated as P and called *propulsive power*. In the case of propeller-driven systems, the propulsive power is easily visualized, as it is the shaft power supplied to the propeller. For other systems the propulsive power can be viewed as the change in kinetic energy rate of the working medium as it passes through the system:

$$P = \Delta \dot{KE} = \frac{\dot{m}_2 V_2^2}{2g_c} - \frac{\dot{m}_0 V_0^2}{2g_c} \tag{12.46}$$

The *thrust power* output of the propulsive device is the actual rate of doing useful propulsion work and is designated as P_T :

$$P_T = F_n V_0 \tag{12.47}$$

It is generally easier to compute the propulsive power by noting that the difference between the propulsive power and the thrust power is the *lost power*, P_L , or

$$P = P_T + P_L \tag{12.48}$$

The major loss is the *absolute* kinetic energy of the exit jet, and this is an unavoidable loss, even for a perfect propulsion system. In addition to this, other energy may be

unavailable for thrust purposes. For instance, the exhaust jet may not all be directed axially, or it may have a swirl component. In any event, the *minimum* power loss can be computed as follows:

$$V_2 - V_0 = \text{absolute velocity of exit jet}$$

$$P_{L \min} = \frac{\dot{m}_2}{2g_c}(V_2 - V_0)^2 \quad (12.49)$$

Efficiency Considerations

The identification of the power quantities P_I , P , and P_T permits various efficiency factors to be defined. These are also indicated in Figure 12.22.

Thermal efficiency:

$$\eta_{\text{th}} = \frac{P}{P_I} \quad (12.50)$$

Propulsive efficiency:

$$\eta_p = \frac{P_T}{P} = \frac{P_T}{P_T + P_L} \quad (12.51)$$

Overall efficiency:

$$\eta_0 = \frac{P_T}{P_I} = \eta_{\text{th}}\eta_p \quad (12.52)$$

The *thermal efficiency* indicates how well the thermodynamic cycle converts the chemical energy of the fuel into work that is available for propulsion. The *propulsive efficiency* indicates how well this work is actually utilized by the thrust device to propel the vehicle. An alternative form of propulsive efficiency is shown in terms of the lost power. The *overall efficiency* is a performance index for the entire propulsion system. Be careful to use consistent units when computing any of these efficiency factors.

12.6 AIR-BREATHING PROPULSION SYSTEMS PERFORMANCE PARAMETERS

We start with the basic thrust equation

$$F_{\text{net}} = \frac{\dot{m}_2 V_2}{g_c} - \frac{\dot{m}_0 V_0}{g_c} + A_2(p_2 - p_0) \quad (12.43)$$

For purposes of examining the characteristics of air-breathing jet engines, we can make two simplifying assumptions:

1. Most operate at low fuel–air ratios, and some of the high-pressure air is bled off to run the auxiliaries. Thus we can assume that the flow rates \dot{m}_2 and \dot{m}_0 are approximately equal.
2. For most systems, the pressure thrust term $A_2(p_2 - p_0)$ is a small portion of the overall net thrust and may be dropped.

Under these assumptions the net thrust becomes

$$F_{\text{net}} = \frac{\dot{m}}{g_c} (V_2 - V_0) \quad (12.53)$$

This form of the thrust equation reveals an interesting characteristic of all air-breathing propulsion systems. As their flight speed approaches the exhaust velocity, the thrust goes to zero. Even long before reaching this point, the thrust drops below the drag force (which is increasing rapidly with flight speed). Because of this, *no air-breathing propulsion system can ever fly faster than its exit jet.*

This equation also helps explain the natural operating speed range of various engines. Recall that the turboprop provides a small velocity change to a very large mass of air. Thus its exit jet has quite a low velocity, which limits the system to low-speed operation. At the other end of the spectrum we have the turbojet (or pure jet), which provides a large velocity increment to a relatively small mass of air. Therefore, this device operates at much higher flight speeds.

We return to the basic thrust equation [see equation (12.43)]. The thrust power is [by (12.47)]

$$P_T = F_n V_0 = \left[\frac{\dot{m}_2 V_2}{g_c} - \frac{\dot{m}_0 V_0}{g_c} + A_2(p_2 - p_0) \right] V_0 \quad (12.54)$$

Let us examine an *ideal* jet-propulsion system, one in which there are *no unavoidable losses*. As before, we neglect the difference between \dot{m}_0 and \dot{m}_2 and drop the pressure contribution to the thrust. Equation (12.54) then becomes

$$P_T = \frac{\dot{m}_0 V_0}{g_c} (V_2 - V_0) \quad (12.55)$$

Looking at equation (12.55), we can see that the thrust power of an air-breather is zero when the flight speed is either zero or equal to V_2 . In the former case we have a high thrust but no motion, thus no thrust power. In the latter case the thrust is reduced to zero.

Somewhere between these extremes there must be a point of maximum thrust power. To find this condition, we differentiate equation (12.55) with respect to V_0 , keeping V_2 constant. Setting this equal to zero, reveals that *maximum thrust power* results when

$$V_2 = 2V_0$$

From equations (12.51), (12.49), and (12.47), the propulsive efficiency becomes

$$\eta_p = \frac{P_T}{P_T + P_L} = \frac{\left[\frac{\dot{m}_2 V_2}{g_c} - \frac{\dot{m}_0 V_0}{g_c} + A_2(p_2 - p_0) \right] V_0}{\left[\frac{\dot{m}_2 V_2}{g_c} - \frac{\dot{m}_0 V_0}{g_c} + A_2(p_2 - p_0) \right] V_0 + \frac{\dot{m}_2}{2g_c} (V_2 - V_0)^2} \quad (12.56)$$

We again neglect the difference between \dot{m}_0 and \dot{m}_2 and drop the pressure term. With these assumptions the propulsive efficiency becomes

$$\eta_p = \frac{V_0}{V_0 + \frac{1}{2}(V_2 - V_0)} \quad (12.57)$$

This relation can be further simplified with the introduction of the speed ratio:

$$\nu \equiv \frac{V_0}{V_2} \quad (12.58)$$

Show that under these conditions equation (12.57) can be written as

$$\boxed{\eta_p = \frac{2\nu}{1 + \nu}} \quad (12.59)$$

This shows that the propulsive efficiency for air-breathers continually increases with flight speed, reaching a maximum when $\nu = 1$ (or when $V_0 = V_2$). This is quite reasonable since under this condition the absolute velocity of the exit jet is zero and there is no exit loss [see equation (12.49)].

At this point you can begin to see some of the problems involved in optimizing air-breathing jet propulsion systems. We showed previously that maximum thrust power is attained when $V_2 = 2V_0$. Now we see that maximum propulsive efficiency is attained when $V_2 = V_0$, but unfortunately, for the latter case the thrust is zero. Remember that the relations in this section apply only to air-breathing propulsion systems. Equation (12.59) further confirms the natural operating speed range of the various turbojet engines. Recall that a pure jet provides a large velocity change to a

relatively small mass of air. Thus, as stated earlier, to have a high propulsive efficiency ($v \rightarrow 1$) it must fly at high speeds. The fanjet provides a moderate velocity increment to a larger mass of air. Thus it will be more efficient at medium flight speeds. By providing a small velocity increment to a very large mass of air, the turboprop is well suited to low-speed operation.

Specific Fuel Consumption

Specific fuel consumption is a good overall performance indicator for air-breathing engines. For a propeller-driven engine it is based on shaft power and is called *brake specific fuel consumption* (bsfc):

$$\text{bsfc} \equiv \frac{\text{lbf fuel per hour}}{\text{shaft horsepower}} = \frac{\text{lbf}}{\text{hp-hr}} \tag{12.60}$$

For other air-breathers it is based on thrust and is called *thrust specific fuel consumption* (tsfc).

$$\text{tsfc} \equiv \frac{\text{lbf fuel per hour}}{\text{lbf thrust}} = \frac{\text{lbf}}{\text{lbf-hr}} \tag{12.61}$$

or

$$\text{tsfc} = \frac{\dot{m}_f(3600)}{F_n} \tag{12.62}$$

By comparing equation (12.62) with (12.52) and (12.45) we see that the thrust specific fuel consumption also can be written as

$$\text{tsfc} = \frac{V_0(3600)}{\eta_0(\text{HV})} \tag{12.63}$$

and is a direct indication of the overall efficiency. Thus it is not surprising to find that tsfc is *the primary economic parameter for any air-breathing propulsion system*. Equation (12.63) also shows that as we increase flight speeds, we must develop more efficient propulsion schemes or the fuel consumption will become unbearable.

Example 12.5 We continue with Example 12.3 and compute the thrust and other performance parameters of the turbofan engine. The following pertinent information is repeated here for convenience:

$$\begin{aligned} \dot{m}_a &= 50 \text{ lbf/sec} & \dot{m}'_a &= 150 \text{ lbf/sec} \\ f &= 0.0191 & \text{HV} &= 18,900 \text{ Btu/lbf} \\ V_0 &= 882 \text{ ft/sec} & p_0 &= 546 \text{ psfa} & T_0 &= 400^\circ\text{R} \\ V_4 &= 1113 \text{ ft/sec} & p_4 &= 1157 \text{ psfa} & T_4 &= 516^\circ\text{R} \\ V_6 &= 1686 \text{ ft/sec} & p_6 &= 778 \text{ psfa} & T_6 &= 1183^\circ\text{R} \end{aligned}$$

We now compute the exit densities and areas.

$$\rho_{4'} = \frac{p_{4'}}{RT_{4'}} = \frac{1157}{(53.3)(516)} = 0.0421 \text{ lbm/ft}^3$$

$$A_{4'} = \frac{\dot{m}'_a}{\rho_{4'} - V_{4'}} = \frac{150}{(0.0421)(1113)} = 3.20 \text{ ft}^2$$

$$\rho_6 = \frac{p_6}{RT_6} = \frac{778}{(53.3)(1183)} = 0.01234 \text{ lbm/ft}^3$$

$$A_6 = \frac{\dot{m}_a}{\rho_6 V_6} = \frac{50}{(0.01234)(1686)} = 2.40 \text{ ft}^2$$

Note that to calculate the net propulsive thrust, we must include contributions from both the primary jet and the fan.

$$\begin{aligned} F_{\text{net}} &= \frac{\dot{m}_a V_6}{g_c} + A_6(p_6 - p_0) + \frac{\dot{m}'_a V_{4'}}{g_c} + A_{4'}(p_{4'} - p_0) - (\dot{m}_a + \dot{m}'_a) \frac{V_0}{g_c} \\ &= \frac{(50)(1686)}{32.2} + (2.40)(778 - 546) + \frac{(150)(1113)}{32.2} + (3.20)(1157 - 546) - (50 + 150) \frac{882}{32.2} \end{aligned}$$

$$F_{\text{net}} = 4840 \text{ lbf}$$

The thrust horsepower is [by (12.47)]

$$P_T = F_n V_0 = \frac{(4840)(882)}{550} = 7760 \text{ hp}$$

The input horsepower is [by (12.45)]

$$P_I = \dot{m}_f (\text{HV}) = \dot{m}_a (f) (\text{HV}) = \frac{(50)(0.0191)(18,900)(778)}{550} = 25,530 \text{ hp}$$

The overall efficiency is [by (12.52)]

$$\eta_0 = \frac{P_T}{P_I} = \frac{7760}{25,530} = 30.4\%$$

Thrust specific fuel consumption is [by (12.62)]

$$\text{tsfc} = \frac{\dot{m}_f (3600)}{F_n} = \frac{(50)(0.0191)(3600)}{4840} = 0.71 \frac{\text{lbm}}{\text{lbf-hr}}$$

This specific fuel consumption is slightly low, even for a fanjet engine. Had we changed to a higher value of specific heat in the hot sections (turbine and turbine nozzle), two effects would be noted:

1. The fuel–air ratio would increase because the enthalpy entering the turbine would increase.
2. The thrust would rise due to an increased exhaust velocity and exit pressure.

The increase in thrust would be small compared to the increase in fuel–air ratio, and the net effect would be to raise the tsfc to about 0.8.

Example 12.6 We continue and compute the performance parameters for the ramjet of Example 12.4. The following pertinent information is repeated here for convenience:

$$\begin{aligned}\dot{m}_a &= 35.9 \text{ kg/s} & f &= 0.0450 & \text{HV} &= 4.42 \times 10^7 \text{ J/kg} \\ M_0 &= 1.8 & T_0 &= 218 \text{ K} & M_5 &= 1.588 & T_5 &= 1479 \text{ K} \\ V_0 &= M_0 a_0 = (1.8) [(1.4)(1)(287)(218)]^{1/2} = 533 \text{ m/s} \\ V_5 &= M_5 a_5 = (1.588) [(1.4)(1)(287)(1479)]^{1/2} = 1224 \text{ m/s}\end{aligned}$$

If we neglect the mass of fuel added together with the pressure term, the net propulsive thrust is

$$F_{\text{net}} = \frac{\dot{m}}{g_c} (V_5 - V_0) = \left(\frac{35.9}{1} \right) (1224 - 533) = 24,800 \text{ N}$$

The thrust specific fuel consumption is

$$\text{tsfc} = \frac{\dot{m}_f(3600)}{F_n} = \frac{(0.0450)(35.9)(3600)}{24,800} = 0.235 \frac{\text{kg}}{\text{N} \cdot \text{h}}$$

This is equivalent to $\text{tsfc} = 2.3 \text{ lbm/lbf-hr}$, which is quite high in comparison to the fanjet of Example 12.5. This illustrates the uneconomical operation of ramjets at low flight speeds.

12.7 AIR-BREATHING PROPULSION SYSTEMS INCORPORATING REAL GAS EFFECTS

A computer program called *Gas Turb* is available from Gas Turbine Performance Calculation Programs, PC Software, based in Europe and © copyright 1996 by J. Kurzke. This program (presently up to version 8) uses to advantage the capabilities of modern desktop computers to calculate the performance of turbojets, turboprops, turbofans, and ramjets. The calculations assume that the specific heats are a function of temperature but not of pressure. This is the same assumption that we presented in Section 11.4 with respect to the high-temperature γ behavior of a semiperfect gas. Extensive use is made of polynomial fits for the temperature dependencies.

The program is quite elaborate and will not be described here but we will report on the calculations for the turbofan engine used in Examples 12.3 and 12.5. One difficulty is that in the example we specify the flow rates (50 lbm/sec for the primary air and 150 lbm/sec for the by-pass air) but in *Gas Turb*, this is not a direct input. In our example the result is a net thrust of 4840 lbf and the program outputs 5460 lbf, but bear in mind that the latter are real-gas machine calculations. This and other comparisons are indicated in Table 12.1, where it can be seen that the perfect gas results compare quite reasonably, within about 11%. From these results we may conclude that in the cold regions, calculations with $\gamma = 1.4$ are satisfactory. However, in the hot regions

Table 12.1 Perfect Gas versus Real Gas for Turbofan

Location	Variable (units)	Perfect Gas Examples 12.3 and 12.5	Real Gas Gas Turb Program
Diffuser exit	T_{t2} (°R)	465	466
	p_{t2} (psia)	6.29	6.30
Compressor exit	T_{t3} (°R)	1083	1082
	p_{t3} (psia)	94.3	94.5
	Flow (lbm/sec)	50	50.2
Fan exit	$T_{t3'}$ (°R)	619	621
	$p_{t3'}$ (psia)	15.71	15.75
	Flow (lbm/sec)	150	150.6
Combustion chamber exit	T_{t4} (°R)	2500	2500
	p_{t4} (psia)	91.4	91.6
Turbine exit	T_{t5} (°R)	1420	1614
	p_{t5} (psia)	10.6	12.76
Nozzle exit	T_6 (°R)	1183	1400
	p_6 (psia)	5.4	5.0
	V_6 (ft/sec)	1686	
Net thrust	F_{net} (lbf)	4840	5460
SFC	lbm/lbf-hr	0.71	0.75

(and at high Mach numbers), results deviate noticeably from Gas Turb, particularly at the nozzle exit.

12.8 ROCKET PROPULSION SYSTEMS PERFORMANCE PARAMETERS

Start with the basic thrust equation

$$F_{\text{net}} = \frac{\dot{m}_2 V_2}{g_c} - \frac{\dot{m}_0 V_0}{g_c} + A_2(p_2 - p_0) \quad (12.43)$$

This may be applied to rockets simply by noting that for this case there is no inlet. Thus, any term involving inflow may be dropped from the equation. Therefore,

$$F_{\text{net}} = \frac{\dot{m}_2 V_2}{g_c} + A_2(p_2 - p_0) \quad (12.64)$$

Note that the propulsive thrust is independent of the flight speed and thus a rocket can easily fly faster than its exit jet.

Effective Exhaust Velocity

In rocket propulsion systems the exit pressure (p_2) may be much greater than ambient (p_0) and the pressure term in equation (12.64) cannot be ignored, as it can represent

considerable positive thrust. If we omit this pressure thrust term, we would need a somewhat higher exhaust velocity to produce the same net thrust. This *fictitious* velocity is called the *effective exhaust velocity* (also called the *equivalent exhaust velocity*) and is given the symbol V_e :

$$\frac{\dot{m}_2 V_e}{g_c} \equiv \frac{\dot{m}_2 V_2}{g_c} + A_2(p_2 - p_0) \quad (12.65)$$

Introducing this concept permits writing the thrust equation in a simpler form:

$$F_{\text{net}} = \frac{\dot{m} V_e}{g_c} \quad (12.66)$$

and the thrust power [by equation (12.47)] becomes

$$P_T = F_n V_0 = \frac{\dot{m}}{g_c} V_e V_0 \quad (12.67)$$

Here, no maximum is reached, as the power increases continually with flight speed.

The propulsive efficiency of a rocket can be found by substituting equations (12.49) and (12.67) into (12.51):

$$\eta_p = \frac{\frac{\dot{m}}{g_c} V_e V_0}{\frac{\dot{m}}{g_c} V_e V_0 + \frac{\dot{m}}{2g_c} (V_2 - V_0)^2} \quad (12.68)$$

To gain greater insight into the propulsion efficiency of a rocket, we make the same assumption that was made in the case of the air breather (i.e., that no significant thrust is obtained from the pressure term; hence $V_e = V_2$). Making this substitution and introducing the speed ratio v [from equation (12.58)], equation (12.68) becomes

$$\eta_p = \frac{2v}{1 + v^2} \quad (12.69)$$

Like the equation for the air-breather, this expression is also maximum when $v = 1$, except that in the case of a rocket the condition is actually attainable.

Specific Impulse

Since the thrust of an engine is dependent on its size, the use of thrust alone as a performance criterion is meaningless. What is significant is the net thrust per unit

mass flow rate, which is called *specific thrust* or *specific impulse* and is given the symbol I_{sp} :

$$I_{sp} \equiv \frac{\text{thrust}}{\text{mass flow rate}} = \frac{F_n g_c}{\dot{m} g_0} \quad (12.70)$$

where g_0 is the value of gravity at the Earth's surface.

The use of the multiplier g_c/g_0 is purely arbitrary to change the units of I_{sp} to "seconds". This definition is independent of the rocket's location in the gravity field. Introducing F_{net} from equation (12.66) yields

$$I_{sp} = \frac{\dot{m} V_e}{g_c} \frac{1}{\dot{m}} \frac{g_c}{g_0}$$

or

$$I_{sp} = \frac{V_e}{g_0} \quad (12.71)$$

Some European countries prefer to use the effective exhaust velocity itself as the significant performance criterion for rockets since it is related to the specific impulse by an arbitrary constant [as shown by (12.71)]. For typical rocket propulsion systems, representative values of specific impulse are shown in Table 12.2.

Calculations of rocket performance are usually based on the ideal, frozen-flow analysis that we developed in the first 10 chapters. However, an effective ratio of the specific heats is introduced as in Chapter 11 to reflect the high temperatures of operation (see, e.g., Ref. 24). All rocket nozzles are supersonic, and except for very brief startup and shutdown transients, their operation is well represented by steady-state conditions without internal shocks. Tactical missiles operate within the atmosphere with generally constant back pressure, but launch rocket propulsion systems operate with decreasing back pressure and are typically designed for midaltitude operation. The design condition reflects the matching of the exhaust pressure to the back pressure at design altitude and also represents optimum thrust because then there is no pressure thrust. Maximum thrust is obtained when the back pressure is negligible, as in the outer layers of the atmosphere.

Table 12.2 Performance of Rockets

Type of Rocket	Monopropellant	Liquid Bipropellant	Solid	Electromagnetic
Specific Impulse	180–220 sec	240–410 sec	150–250 sec	700–5000 sec

Example 12.7 A liquid rocket has a pressure and temperature of 400 psia and 5000°R, respectively, in the combustion chamber and is operating at an altitude where the ambient pressure is 200 psfa. The gases exit through an isentropic converging–diverging nozzle which produces a Mach number of 4.0. Approximate the exhaust gases by taking $\gamma = 1.4$ and a molecular weight of 20, but assume perfect gas behavior. Determine the specific impulse and the effective exhaust velocity. We denote the nozzle exit as section 2.

For

$$M_2 = 4.0 \quad \frac{P}{P_t} = 0.00659 \quad \frac{T}{T_t} = 0.2381$$

$$p_2 = \frac{P}{P_t} p_t = (0.00659)(400)(144) = 380 \text{ psfa}$$

$$T_2 = \frac{T}{T_t} T_t = (0.2381)(5000) = 1190^\circ\text{R}$$

$$\rho_2 = \frac{p_2}{RT_2} = \frac{(380)(20)}{(1545)(1190)} = 0.00413 \text{ lbm/ft}^3$$

$$V_2 = M_2 a_2 = 4.0 \left[(1.4)(32.2) \left(\frac{1545}{20} \right) (1190) \right]^{1/2} = 8143 \text{ ft/sec}$$

$$F_{\text{net}} = \frac{\dot{m} V_2}{g_c} + A_2(p_2 - p_0) = \frac{\rho_2 A_2 V_2^2}{g_c} + A_2(p_2 - p_0)$$

$$I_{\text{sp}} = \frac{F_n g_c}{\dot{m} g_0} = \left(\frac{F_n}{\rho_2 A_2 V_2} \right) \frac{g_c}{g_0} = \left(\frac{V_2}{g_c} + \frac{p_2 - p_0}{\rho_2 V_2} \right) \frac{g_c}{g_0}$$

$$I_{\text{sp}} = \frac{8143}{32.2} + \frac{380 - 200}{(0.00413)(8143)} = 258.2 \text{ seconds}$$

$$V_e = I_{\text{sp}} g_0 = (258.2)(32.2) = 8314 \text{ ft/sec}$$

12.9 SUPERSONIC DIFFUSERS

The deceleration of an air stream in the inlet of a propulsion system causes special problems at *supersonic* flight speeds. If a *subsonic diffuser* is used (diverging section), a normal shock will occur at the inlet with an associated loss in stagnation pressure. This loss is small if flight speeds are low, say $M_0 < 1.4$. At speeds between $1.4 < M_0 < 2.0$, an oblique-shock inlet is required (similar to the one used on the ramjet in Example 12.4). Above $M_0 = 2.0$, two oblique shocks, as shown in Figure 7.15, are necessary.

The requirement to be met in each case is to keep the total-pressure recovery factor as high as possible. A value of $\eta_r = 0.95$ is considered satisfactory at low supersonic speeds, but this becomes increasingly critical as flight speeds increase. Two oblique shocks plus one normal shock are inadequate at speeds above approximately $M_0 = 2.5$. See Zucrow (pp. 421–427 of Vol. I of Ref. 25) for the effects of multiple conical

shocks. From our studies of varying-area flow, we might assume that a converging–diverging section would make a good supersonic diffuser—and indeed it would. Recall that this configuration was used for the exhaust section of a supersonic wind tunnel in Chapter 6. However, there are some practical operating difficulties involved in using a *fixed-geometry* converging–diverging section for a *supersonic* air inlet.

Suppose that we design the inlet diffuser for an airplane that will fly at about $M = 1.86$. From the isentropic table we see that the area ratio corresponding to this Mach number is 1.507. For simplicity, we construct the diffuser with an area ratio (inlet area to throat area) of 1.50. The design operation of this diffuser is shown in Figure 12.23. In the discussion below, we follow the operation of this diffuser as the aircraft takes off and accelerates to its design speed.

Note that as the flight speed reaches approximately $M_0 = 0.43$, the diffuser becomes choked with $M = 1.0$ in the throat. (Check the subsonic portion of the isentropic table for the above area ratio.) This condition is shown in Figure 12.24a. Now increase the flight speed to, say, $M_0 = 0.6$. *Spillage* or external diffusion occurs, as indicated in Figure 12.24b. As M_0 is increased to 1.0, there is a further decrease in the *capture area* (area of the flow at the free-stream Mach number that actually enters the diffuser; see Figure 12.24c).

As we increase M_0 to supersonic speeds, a *detached* shock wave forms in front of the inlet. Spillage still occurs as shown in Figure 12.24d. Note that at higher flight speeds, less external diffusion is necessary to produce the required $M = 0.43$ at the inlet. Thus the shock moves closer to the inlet as speeds increase (see Figure 12.24e). Also note that it is necessary to fly at approximately $M_0 = 4.19$ in order for the shock to become attached to the inlet. (Check the shock table to substantiate this.) This condition, indicated in Figure 12.24f, is far above the design flight speed.

If we now increase M_0 to 4.2, the shock moves very rapidly into the diffuser and locates itself in the divergent section downstream of the throat. This is referred to as *swallowing the shock* and the diffuser is said to be *started* (see Figure 12.24g). Under these conditions we no longer have Mach 1.0 in the throat. (What Mach number does exist in the throat?) We can now slowly decrease the flight speed to the design condition of $M = 1.86$ and the shock will move to a position just downstream of the throat and occur at the Mach number of just slightly greater than 1.0. Thus we have a very weak shock and negligible losses, as shown in Figure 12.24h.

Two comments can now be made on the performance described above.

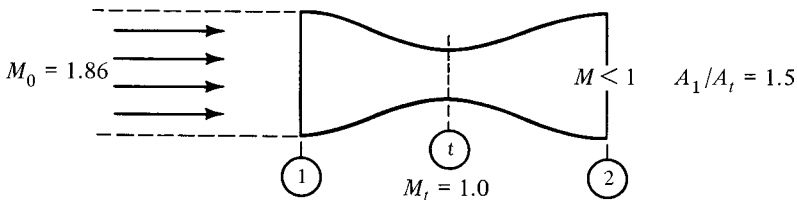


Figure 12.23 Desired operation of converging–diverging diffuser.

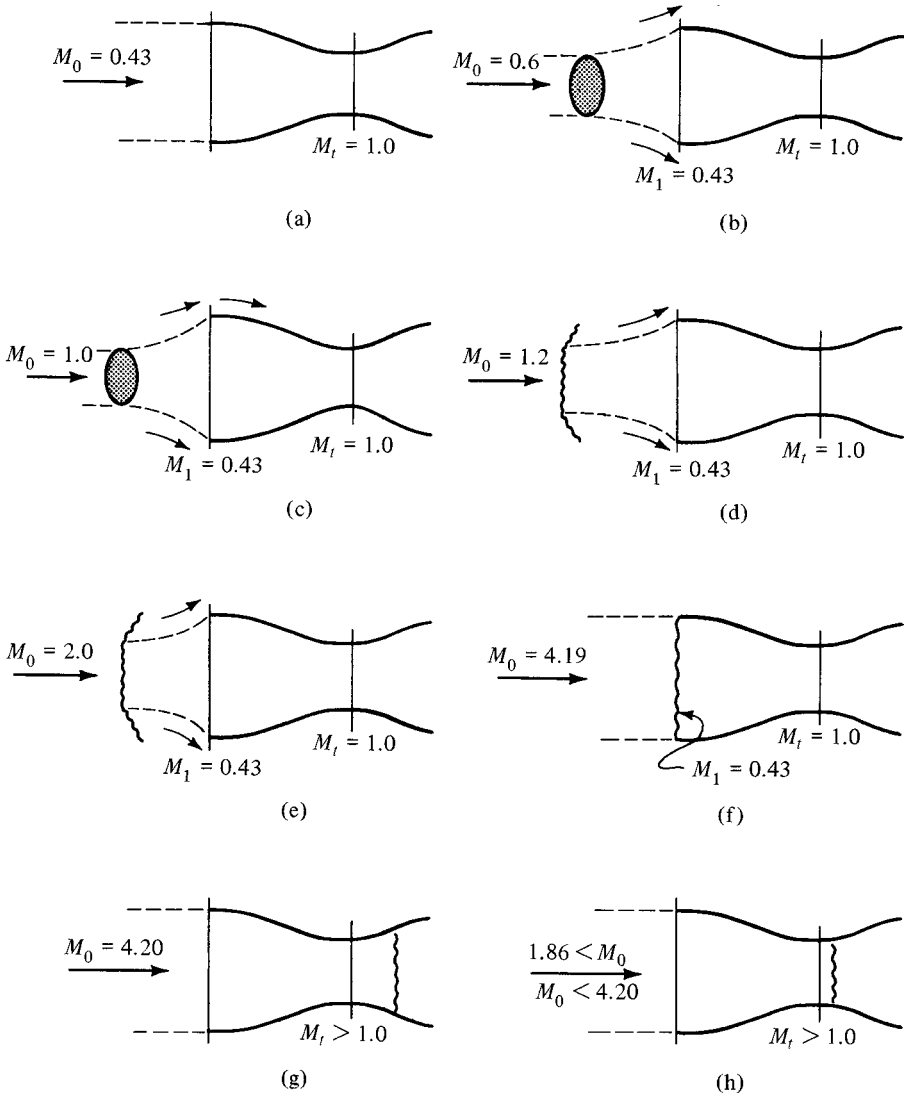


Figure 12.24 Starting a fixed-geometry supersonic diffuser (area ratio = 1.5).

1. To *start* the diffuser, which was designed for $M_0 = 1.86$, it is necessary to *overspeed* the vehicle to a Mach number of 4.2.
2. If the vehicle slows down just slightly below its design speed (or perhaps minor air disturbances might cause M_0 to drop below 1.86), the shock will pop out in front of the inlet and the diffuser must be *started* all over again.

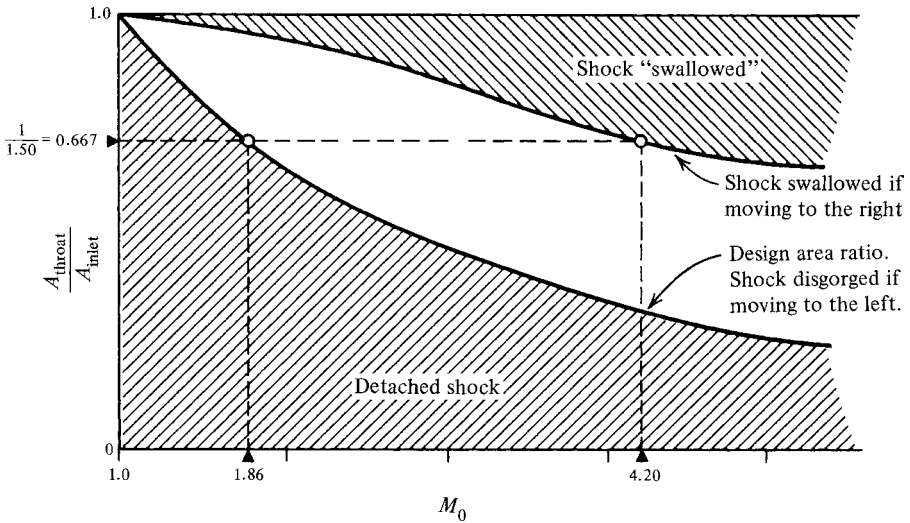


Figure 12.25 Performance of fixed-geometry supersonic diffusers.

The behavior of fixed-geometry supersonic diffusers can be summarized conveniently in a chart similar to Figure 12.25.

It should be obvious that the operation described above could not be tolerated, and for this reason one does not see *fixed-geometry* converging–diverging diffusers used for air inlets. At flight speeds above $M_0 \approx 2.0$, a combination of oblique shocks and a *variable-geometry* converging–diverging diffuser is required for efficient pressure recovery.

12.10 SUMMARY

An analysis of the ideal Brayton cycle revealed that its thermodynamic efficiency is a function of the pressure ratio as

$$\eta_{th} = 1 - \left(\frac{1}{r_p}\right)^{(\gamma-1)/\gamma} \quad (12.22)$$

Perhaps the most significant feature of this cycle is that the work input is a large percentage of the work output. Because of this, machine efficiencies are most critical in any power plant operating on the Brayton cycle. Also, to produce a reasonable quantity of net work, large amounts of air must be handled, which makes this cycle particularly suitable for turbomachinery.

In discussing the various types of jet propulsion systems, it was noted that pure jets move a relatively small amount of air through a large velocity change. On the

other hand, propeller systems move a relatively large amount of air through a small velocity increment. Fanjets occupy a middle ground on both criteria.

The net thrust of any propulsive device was found to be

$$F_{\text{net}} = \frac{\dot{m}_2 V_2}{g_c} - \frac{\dot{m}_0 V_0}{g_c} + A_2(p_2 - p_0) \quad (12.43)$$

You should learn this equation, as it is probably the most important relation in this chapter. Also, you should not overlook the various power and efficiency parameters discussed in Section 12.5. Perhaps the most interesting of these is the propulsive efficiency, since this is a measure of what the propulsive device is accomplishing, exclusive of the energy producer.

For air-breathers, in terms of the speed ratio $v = V_0/V_2$,

$$\eta_p = \frac{2v}{1+v} \quad (12.59)$$

Equation (12.59) explains why pure jets operate more efficiently at high speeds, whereas fanjets and propjets fare better at progressively lower speeds. We also see that for air-breathers, maximum efficiency occurs at minimum thrust.

Rockets are not subject to this dilemma and their propulsive efficiency is

$$\eta_p = \frac{2v}{1+v^2} \quad (12.69)$$

Other important performance indicators are,

for air-breathers:

$$\text{tsfc} = \frac{\text{lbm fuel per hr}}{\text{lbf thrust}} = \frac{\dot{m}_f(3600)}{F_{\text{net}}} \quad (12.61, 12.62)$$

for rockets,

$$I_{\text{sp}} = \frac{\text{thrust}}{\text{mass flow rate}} = \frac{V_e}{g_0} \quad (12.70, 12.71)$$

Air inlets for supersonic vehicles should have total-pressure recovery factors of 0.95 or above. At lower speeds one uses a subsonic diffuser preceded by ramps or a spike to induce one or more oblique shocks before the normal shock. At high supersonic flight speeds, variable-geometry features are also required.

PROBLEMS

In the problems that follow you may assume perfect gas behavior and constant specific heats unless otherwise specified, even though the temperature range may be rather large in some cases. Also, neglect any effects of dissociation and assume that all propellants have the properties of air.

- 12.1.** Conditions entering the compressor of an ideal Brayton cycle are 520°R and 5 psia. The compressor pressure ratio is 12 and the maximum allowable cycle temperature is 2400°R. Assume that air has negligible velocities in the ducting.
- (a) Determine w_t , w_c , w_n , q_a , and η_{th} .
- (b) What flow rate is required for a net output of 5000 hp?
- 12.2.** Rework Problem 12.1 with a compressor efficiency of 89% and a turbine efficiency of 92%.
- 12.3.** A stationary power plant produces 1×10^7 W output when operating under the following conditions: Compressor inlet is 0°C and 1 bar abs, turbine inlet is 1250 K, cycle pressure ratio is 10, and fluid is air with negligible velocities. The turbine and compressor efficiencies are both 90%. Determine the cycle efficiency and the mass flow rate.
- 12.4.** Assume that all data given in Problem 12.3 remain the same except that the turbine and compressor are 80% efficient.
- (a) Determine the cycle efficiency.
- (b) Compare the net work output and cycle efficiency with that of Problem 12.3.
- (c) What value of machine efficiency (assuming that $\eta_t = \eta_c$) will cause zero net work output from this cycle?
- 12.5.** Consider an ideal Brayton cycle as shown in Figure 12.2. Let

$$\alpha = \frac{T_{t3}}{T_{t1}} \quad \text{the cycle temperature ratio}$$

$$\theta = \left(\frac{p_{t2}}{p_{t1}} \right)^{(\gamma-1)/\gamma} \quad \text{the cycle pressure ratio parameter}$$

- (a) Show that the net work output can be expressed as

$$w_n = c_p T_{t1} \frac{\theta - 1}{\theta} (\alpha - \theta)$$

- (b) Show that for a given α the maximum net work occurs when $\theta = \sqrt{\alpha}$.
- (c) On the same T - s diagram, sketch cycles for a given temperature ratio but for different pressure ratios. Which one is most efficient? Which produces the most net work?
- 12.6.** An airplane is traveling at 550 mph at an altitude where the ambient pressure is 6.5 psia. The exit area of the jet engine is 1.65 ft² and the exit jet has a relative velocity of 1500 ft/sec. The pressure at the exit plane is found to be 10 psia. Air flow is measured at 175 lbm/sec. You may neglect the weight of fuel added. What is the net propulsive thrust of this engine?
- 12.7.** The air flow through a jet engine is 30 kg/s and the fuel flow is 1 kg/s. The exhaust gases leave with a relative velocity of 610 m/s. Pressure equilibrium exists over the exit plane. Compute the velocity of the airplane if the thrust power is 1.12×10^6 W.
- 12.8.** A twin-engine jet aircraft requires a total net propulsive thrust of 6000 lbf. Each engine consumes air at the rate of 120 lbm/sec when traveling at 650 ft/sec. Fuel is added in

each engine at the rate of 3.0 lbm/sec. Assume that pressure equilibrium exists across the exit plane and compute the velocity of the exhaust gases relative to the plane.

- 12.9.** A boat is propelled by an hydraulic jet. The inlet scoop has an area of 0.5 ft^2 and the area of the exit duct is 0.20 ft^2 . Since the exit velocity will always be subsonic, pressure equilibrium exists over the exit plane. No spillage occurs at the inlet when the boat is moving through fresh water at 50 mph.
- Compute the net propulsive force being developed.
 - What is the propulsive efficiency?
 - How much energy is added to the water as it passes through the device? (Assume no losses.)
- 12.10.** It is proposed to power a monorail car by a pulsejet. A net propulsive thrust of 5350 N is required when traveling at a speed of 210 km/h. The gases leave the engine with an average velocity of 350 m/s. Assume that pressure equilibrium exists at the outlet plane and neglect the weight of fuel added.
- Compute the mass flow rate required.
 - What inlet area is necessary, assuming that no spillage occurs? (Assume 16°C and 1 atm.)
 - What is the thrust power?
 - What is the propulsive efficiency?
 - How much energy is added to the air as it passes through the engine if the outlet temperature is 980°C ?
- 12.11.** A ramjet flies at $M_0 = 4.0$ at 30,000 ft altitude where $T_0 = 411^\circ\text{R}$ and $p_0 = 628 \text{ psfa}$. The exhaust nozzle exit diameter is 18 in. The exhaust jet has a velocity of 5000 ft/sec relative to the missile and is at 1800°R and 850 psfa. Neglect the fuel added.
- Determine the net propulsive thrust.
 - How much thrust power is developed?
- 12.12.** An example of a fanjet engine analysis was given in Sections 12.4 and 12.6. Remove the fan from this engine. Readjust the turbine expansion to produce the appropriate compressor work. Assume that all component efficiencies remain unchanged. Compute the net propulsive thrust and thrust specific fuel consumption for the pure jet engine and compare to that of the fanjet.
- 12.13.** It has been suggested that an afterburner be added to the fanjet engine used in the examples in Sections 12.4 and 12.6. Assume that the gas leaves the turbine with a velocity of 400 ft/sec. Enough fuel is added in the afterburner to raise the stagnation temperature to 3500°R with a combustion efficiency of $\eta_{\text{ab}} = 0.85$. Determine the cross-sectional area of the afterburner, the conditions at the exit of the afterburner (assume Rayleigh flow), the new conditions at the nozzle exit, the required exit area, and the resultant effect on the performance parameters of the engine. (Neglect the mass of the fuel.)
- 12.14.** A ramjet is designed to operate at $M_0 = 3.0$ at an altitude of 40,000 ft where the temperature and pressure are 390°R and 400 psfa. The total-pressure recovery factor for the inlet is $\eta_r = p_{t2}/p_{t0} = 0.85$. The velocity is reduced to 300 ft/sec before entering the combustion chamber, where the total temperature is raised to 4000°R . Combustion efficiency is $\eta_b = 0.96$ and the heating value of the fuel is 18,500

Btu/lbm. The exit nozzle has an efficiency of $\eta_n = 0.95$ and expands the flow through a converging–diverging section to the same area as the combustion chamber (similar to that shown in Figure 12.14). Compute the net propulsive thrust per unit area and the thrust specific fuel consumption. (You may neglect the mass of fuel added.)

- 12.15.** A rocket sled used for test purposes requires a thrust of 20,000 lbf. The specific impulse is 240 sec.
- What is the flow rate?
 - Compute the exhaust velocity if the nozzle expands the gases to ambient pressure.
- 12.16.** The German V-2 had a sea-level thrust of 249,000 N, a propellant flow rate of 125 kg/s, and exhaust velocity of 1995 m/s, and the nozzle outlet size was 74 cm in diameter.
- Compute the specific impulse.
 - Calculate the pressure at the nozzle outlet.
- 12.17.** An ideal rocket nozzle was originally *designed* to expand the exhaust gases to ambient pressure when at sea level and operating with a combustion chamber pressure of 400 psia and a temperature of 5000°R. The rocket is now used to propel a missile fired from an airplane at 38,000 ft, where the pressure is 3.27 psia.
- Determine the exit area required to produce a thrust of 1000 lbf at 38,000 ft.
 - Compute the exit velocity, effective exhaust velocity, and specific impulse.
- 12.18.** The combustion chamber of a rocket has stagnation conditions of 22 bar and 2500 K. Assume that the nozzle is ideal and expands the flow to the ambient pressure of 0.25 bar.
- Determine the nozzle area ratio and exit velocity.
 - What is the specific impulse?
- 12.19.** A rocket nozzle is *designed* to operate supersonically with a constant chamber pressure of 500 psia exhausting to 14.7 psia. Find the ratio of the thrust at sea level to the thrust in space (0 psia). Assume that the chamber temperature is 2500°R, that $\gamma = 1.4$, and that $R = 20$ ft-lbf/lbm-°R.
- 12.20.** It turns out that for a given pressure ratio across the nozzle, the ideal thrust from a rocket does *not* depend on temperature. Show this by taking the thrust equation (12.64) for a rocket at the design condition (pressure equilibrium at the exit) and manipulating the parameters. On what actual physical entities does the ideal thrust depend (e.g., areas, pressures, specific heat ratio)?
- 12.21.** Compare the total-pressure recovery factors for the air inlets described in Problem 7.13.
- 12.22.** Sketch a supersonic inlet that has one oblique shock followed by a normal shock attached to the entrance of a subsonic diffuser. Draw streamlines and identify the capture area (that portion of the free stream that actually enters the diffuser). Now vary the wedge angle and cause the oblique shock to form at a different angle. Again, determine the capture area. Show that maximum flow enters the inlet when the oblique shock just touches the outer lip of the diffuser.
- 12.23.** Figure 12.25 illustrates the peculiar operating conditions associated with fixed-geometry supersonic diffusers. Unfortunately, this figure was not drawn to scale and therefore cannot be used as a working plot.

- (a) Construct an accurate version of Figure 12.25.
- (b) If the design flight speed is $M_0 = 1.5$, to what velocity must the vehicle be oversped in order to start the diffuser?
- (c) Suppose the design speed is $M_0 = 2.0$. How fast must the vehicle go to start the diffuser?

12.24. A converging–diverging supersonic inlet is to be designed with a variable area. The idea is to swallow the shock when the vehicle has just reached its design flight speed. Then the diffuser area ratio will be changed to operate properly without any shock. Thus the inlet does not have to be oversped to start. Calculate the maximum and minimum area ratios that would be required to operate in the manner described above if the flight speed is $M_0 = 2.80$.

CHECK TEST

You should be able to complete this test without reference to material in the chapter.

- 12.1.** We wish to build an electric generator for use at a ski lodge. To keep this small and lightweight, we have decided to use an open Brayton cycle as shown in Figure CT12.1. Write an expression (in terms of properties at 1, 2, 3, and 4) that will represent for each pound mass flowing:
- (a) The compressor work input.
 - (b) The turbine work output.
 - (c) The cycle thermodynamic efficiency.

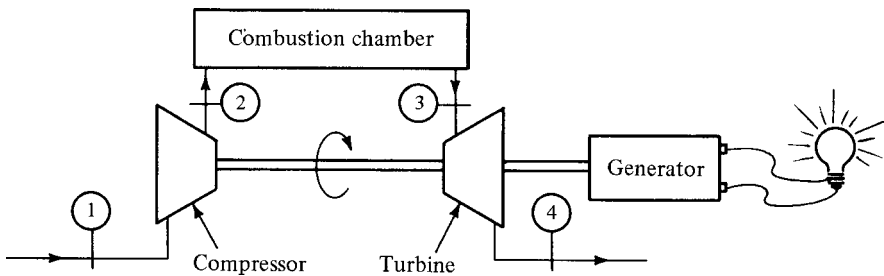


Figure CT12.1

- 12.2.** If the machine efficiencies are not fairly high, the thermodynamic efficiency of a Brayton cycle will be extremely poor. What basic characteristic of the Brayton cycle accounts for this fact?
- 12.3.** The conditions entering a turbine are $T_t = 1060^\circ\text{C}$ and $p_t = 6.5$ bar. The turbine efficiency is $\eta_t = 90\%$ and the mass flow rate is 45 kg/s. Compute the turbine outlet stagnation conditions if the turbine produces 2.08×10^7 W of work. Neglect any heat transfer.

- 12.4.** Draw an h - s diagram for the secondary (fan) air of a turbofan engine (a real engine—not an ideal one).
- (a) Indicate static and stagnation points if they are significantly different.
 - (b) Indicate pertinent velocities, work quantities, and so on.
- 12.5.** State whether each of the following statements is true or false.
- (a) Thrust power output can be viewed as the change in kinetic energy of the working medium.
 - (b) If the exhaust gases leave a rocket at a speed of 7000 ft/sec relative to the rocket, it would be impossible for the rocket to be traveling at 8000 ft/sec relative to the ground.
 - (c) It is possible to operate a ramjet at 100% propulsive efficiency and develop thrust.
 - (d) One would expect that a turbofan engine will have a higher tsfc than a ramjet engine.
- 12.6.** A rocket is traveling at 4500 ft/sec at an altitude of 20,000 ft, where the temperature and pressure are 447°R and 972 psfa, respectively. The exit diameter of the nozzle is 24 in. and the exhaust jet has the following characteristics: $T = 1500^\circ\text{R}$, $p = 1200$ psfa, and $V = 6600$ ft/sec (relative to the rocket).
- (a) Compute the flow rate and net propulsive thrust.
 - (b) What is the effective exhaust velocity?
 - (c) Compute the specific impulse and thrust power.
- 12.7.** A fixed-geometry converging–diverging supersonic diffuser is contemplated for a vehicle having a design Mach number of $M_0 = 1.65$. How fast must the plane fly to *start* this diffuser?

Appendixes

- A. Summary of the English Engineering (EE) System of Units
- B. Summary of the International System (SI) of Units
- C. Friction-Factor Chart
- D. Oblique-Shock Charts ($\gamma = 1.4$) (Two-Dimensional)
- E. Conical-Shock Charts ($\gamma = 1.4$) (Three-Dimensional)
- F. Generalized Compressibility Factor Chart
- G. Isentropic Flow Parameters ($\gamma = 1.4$) (including Prandtl–Meyer Function)
- H. Normal-Shock Parameters ($\gamma = 1.4$)
- I. Fanno Flow Parameters ($\gamma = 1.4$)
- J. Rayleigh Flow Parameters ($\gamma = 1.4$)
- K. Properties of Air at Low Pressures
- L. Specific Heats of Air at Low Pressures

*Summary of the
English Engineering (EE)
System of Units*

Force	pound force	lbf
Mass	pound mass	lbm
Length	foot	ft
Time	second	sec
Temperature	Rankine	°R

NEVER say pound, as this is ambiguous! It is either a pound force (lbf) or a pound mass (lbm).

A 1-pound force will give a 1-pound mass an acceleration of 32.174 feet/second².

$$F = \frac{ma}{g_c}$$

$$1(\text{lbf}) = \frac{1(\text{lbm}) \cdot 32.174(\text{ft}/\text{sec}^2)}{g_c}$$

Thus

$$g_c = 32.174 \text{ lbm-ft}/\text{lbf-sec}^2$$

Temperature	$T(^{\circ}\text{R}) = T(^{\circ}\text{F}) + 459.67$
Gas constant	$R = 1545/\text{M.M.}^* \text{ ft-lbf}/\text{lbm-}^{\circ}\text{R}$
Pressure	$1 \text{ atm} = 2116.2 \text{ lbf}/\text{ft}^2$
Heat to work	$1 \text{ Btu} = 778.2 \text{ ft-lbf}$
Power	$1 \text{ hp} = 550 \text{ ft-lbf}/\text{sec}$
Standard gravity	$g_0 = 32.174 \text{ ft}/\text{sec}^2$

* M.M., molecular mass.

Useful Conversion Factors

To convert from:		To:	Multiply by:
meter		foot	3.281
meter		inch	3.937×10
newton		lbf	2.248×10^{-1}
kilogram		lbm	2.205
K		°R	1.800
joule	(<i>q</i>)	Btu	9.479×10^{-4}
kWh	(<i>q</i>)	Btu	3.413×10^3
joule	(<i>w</i>)	ft-lbf	7.375×10^{-1}
watt		horsepower	1.341×10^{-3}
m/s	(<i>V</i>)	ft/sec	3.281
m/s	(<i>V</i>)	mph	2.237
km/h	(<i>V</i>)	mph	6.215×10^{-1}
N/m ²	(<i>p</i>)	atmosphere	9.872×10^{-6}
N/m ²	(<i>p</i>)	lbf/in ²	1.450×10^{-4}
N/m ²	(<i>p</i>)	lbf/ft ²	2.089×10^{-2}
kg/m ³	(<i>ρ</i>)	lbm/ft ³	6.242×10^{-2}
N · s/m ²	(<i>μ</i>)	lbf-sec/ft ²	2.089×10^{-2}
m ² /s	(<i>ν</i>)	ft ² /sec	1.076×10
J/kg · K	(<i>c_p</i>)	Btu/lbm-°R	2.388×10^{-4}
N · m/kg · K	(<i>R</i>)	ft-lbf/lbm-°R	1.858×10^{-1}

Source: "The International System of Units," NASA SP-7012, 1973.

Properties of Gases—English Engineering (EE) System^a

Gas	Symbol	Molecular Mass	$\gamma = \frac{c_p}{c_v}$	Gas Constant R ft-lbf/lbm-°R	Specific Heats Btu/lbm-°R		Viscosity μ lbf-sec/ft ²	Critical Point	
					c_p	c_v		T_c °R	p_c psia
Air		28.97	1.40	53.3	0.240	0.171	3.8×10^{-7}	239	546
Argon	Ar	39.94	1.67	38.7	0.124	0.074	4.7×10^{-7}	272	705
Carbon dioxide	CO ₂	44.01	1.29	35.1	0.203	0.157	3.1×10^{-7}	547.5	1071
Carbon monoxide	CO	28.01	1.40	55.2	0.248	0.177	3.7×10^{-7}	240	507
Helium	He	4.00	1.67	386	1.25	0.750	4.2×10^{-7}	9.5	33.2
Hydrogen	H ₂	2.02	1.41	766	3.42	2.43	1.9×10^{-7}	59.9	188.1
Methane	CH ₄	16.04	1.32	96.4	0.532	0.403	2.3×10^{-7}	343.9	673
Nitrogen	N ₂	28.02	1.40	55.1	0.248	0.177	3.6×10^{-7}	227.1	492
Oxygen	O ₂	32.00	1.40	48.3	0.218	0.156	4.2×10^{-7}	278.6	736
Water vapor	H ₂ O	18.02	1.33	85.7	0.445	0.335	2.2×10^{-7}	1165.3	3204

^a Values for γ , R , c_p , c_v , and μ are for normal room temperature and pressure.

*Summary of the
International System (SI)
of Units*

Force	newton	N
Mass	kilogram	kg
Length	meter	m
Time	second	s
Temperature	kelvin	K

A 1-Newton force will give a 1-kilogram mass
an acceleration of 1 meter/second².

$$F = \frac{ma}{g_c}$$

$$1(\text{N}) = \frac{1(\text{kg}) \cdot 1(\text{m/s}^2)}{g_c}$$

Thus

$$g_c = 1 \text{ kg} \cdot \text{m/N} \cdot \text{s}^2$$

Temperature	$T(\text{K}) = T(^{\circ}\text{C}) + 273.15$
Gas constant	$R = 8314/\text{M.M.}^* \text{ N} \cdot \text{m/kg} \cdot \text{K}$
Pressure	$1 \text{ atm} = 1.013 \times 10^5 \text{ N/m}^2$
	$1 \text{ pascal (Pa)} = 1 \text{ N/m}^2$
	$1 \text{ bar (bar)} = 1 \times 10^5 \text{ N/m}^2$
	$1 \text{ MPa} = 1 \times 10^6 \text{ N/m}^2$
Heat to work	$1 \text{ joule (J)} = 1 \text{ N} \cdot \text{m}$
Power	$1 \text{ watt (W)} = 1 \text{ J/s}$
Standard gravity	$g_0 = 9.81 \text{ m/s}^2$

* M.M., molecular mass.

Useful Conversion Factors

To convert from:		To:	Multiply by:
foot		meter	3.048×10^{-1}
inch		meter	2.54×10^{-2}
lbf		newton	4.448
lbm		kilogram	4.536×10^{-1}
°R		K	5.555×10^{-1}
Btu	(<i>q</i>)	joule	1.055×10^3
Btu	(<i>q</i>)	kWh	2.930×10^{-4}
ft-lbf	(<i>w</i>)	joule	1.356
horsepower		watt	7.457×10^2
ft/sec	(<i>V</i>)	m/s	3.048×10^{-1}
mph	(<i>V</i>)	m/s	4.470×10^{-1}
mph	(<i>V</i>)	km/h	1.609
atmosphere	(<i>p</i>)	N/m ²	1.013×10^5
lbf/in ²	(<i>p</i>)	N/m ²	6.895×10^3
lbf/ft ²	(<i>p</i>)	N/m ²	4.788×10
lbm/ft ³	(<i>ρ</i>)	kg/m ³	1.602×10
lbf-sec/ft ²	(<i>μ</i>)	N · s/m ²	4.788×10
ft ² /sec	(<i>v</i>)	m ² /s	9.290×10^{-2}
Btu/lbm-°R	(<i>c_p</i>)	J/kg · K	4.187×10^3
ft-lbf/lbm-°R	(<i>R</i>)	N · m/kg · K	5.381

Source: "The International System of Units," NASA SP-7012, 1973.

Properties of Gases—International System (SI)^a

Gas	Symbol	Molecular Mass	$\gamma = \frac{c_p}{c_v}$	Gas Constant R N · m/kg · K	Specific Heats J/kg · K		Viscosity μ N · s/m ²	Critical Point	
					c_p	c_v		T_c K	p_c MPa
Air		28.97	1.40	287	1,000	716	1.8×10^{-5}	132.8	3.76
Argon	Ar	39.94	1.67	208	519	310	2.3×10^{-5}	151.1	4.86
Carbon dioxide	CO ₂	44.01	1.29	189	850	657	1.5×10^{-5}	304.1	7.38
Carbon monoxide	CO	28.01	1.40	297	1,040	741	1.8×10^{-5}	133.3	3.49
Helium	He	4.00	1.67	2,080	5,230	3,140	2.0×10^{-5}	5.28	0.229
Hydrogen	H ₂	2.02	1.41	4,120	14,300	10,200	9.1×10^{-5}	33.3	1.30
Methane	CH ₄	16.04	1.32	519	2,230	1,690	1.1×10^{-5}	191.0	4.64
Nitrogen	N ₂	28.02	1.40	296	1,040	741	1.7×10^{-5}	126.2	3.39
Oxygen	O ₂	32.00	1.40	260	913	653	2.0×10^{-5}	154.8	5.07
Water vapor	H ₂ O	18.02	1.33	461	1,860	1,400	1.1×10^{-5}	647.3	22.09

^aValues for γ , R , c_p , c_v , and μ are for normal room temperature and pressure.

*Friction-Factor
Chart*

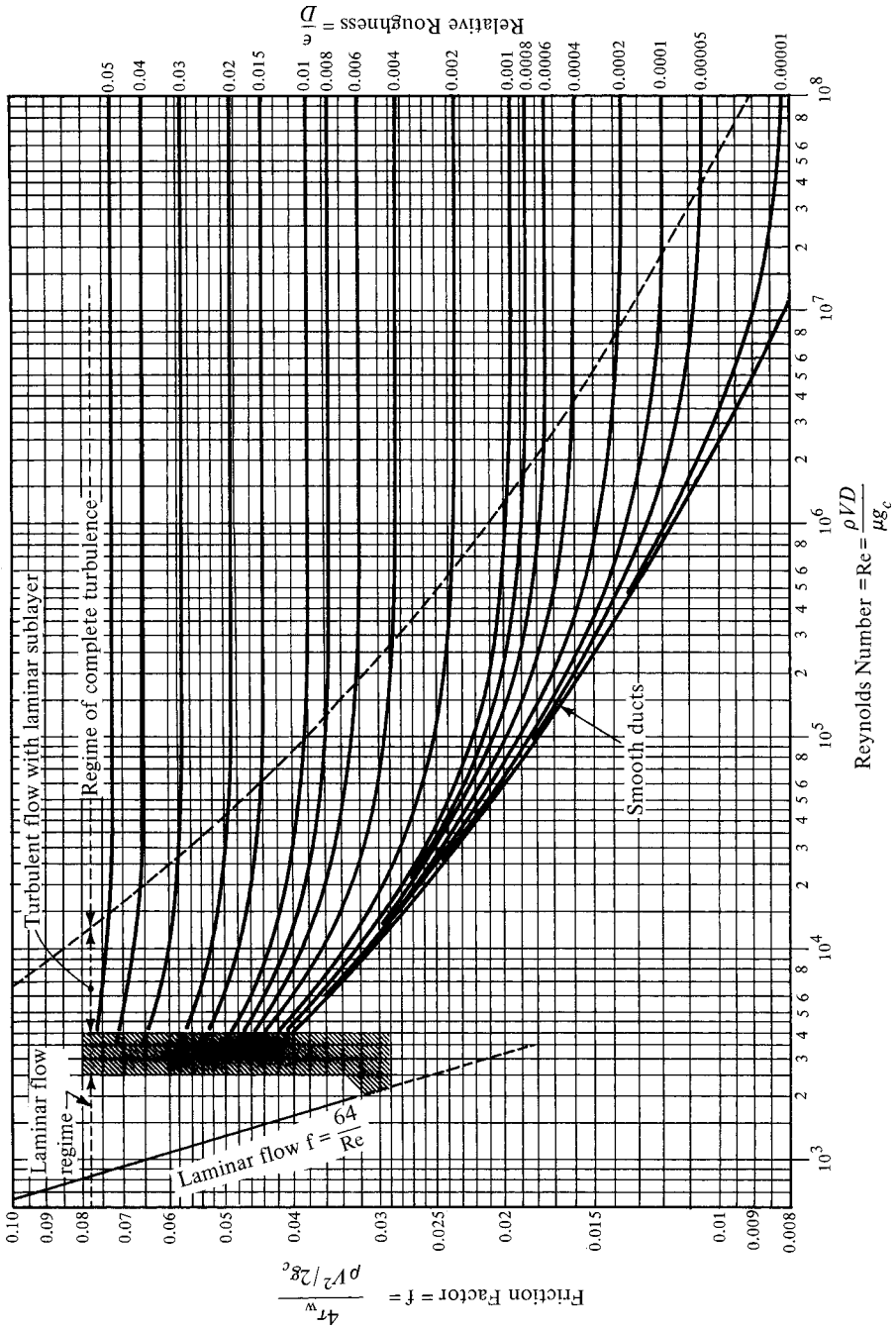
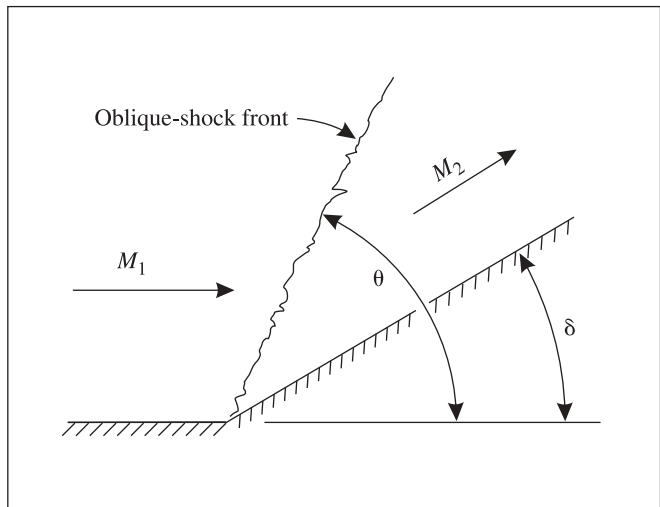


Figure AC.1 Moody diagram for determination of friction factor. (Adapted with permission from L. F. Moody, Friction factors for pipe flow, *Transactions of ASME*, Vol. 66, 1944.)

*Oblique-Shock
Charts ($\gamma = 1.4$)*
(Two-Dimensional)



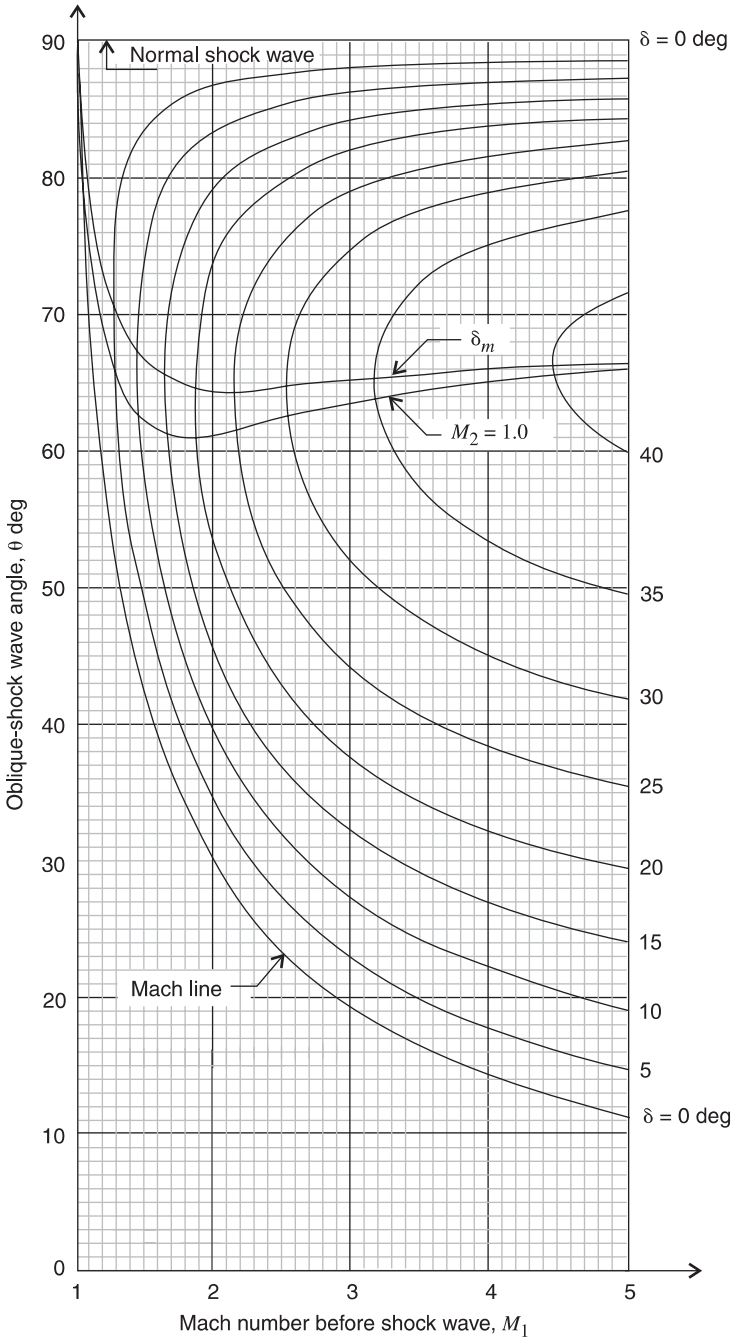


Figure AD.1 Shock-wave angle θ as a function of the initial Mach number M_1 for different values of the flow deflection angle δ for $\gamma = 1.4$. (Adapted with permission from M. J. Zucrow and J. D. Hoffman, *Gas Dynamics*, Vol. I, copyright 1976, John Wiley & Sons, New York.)

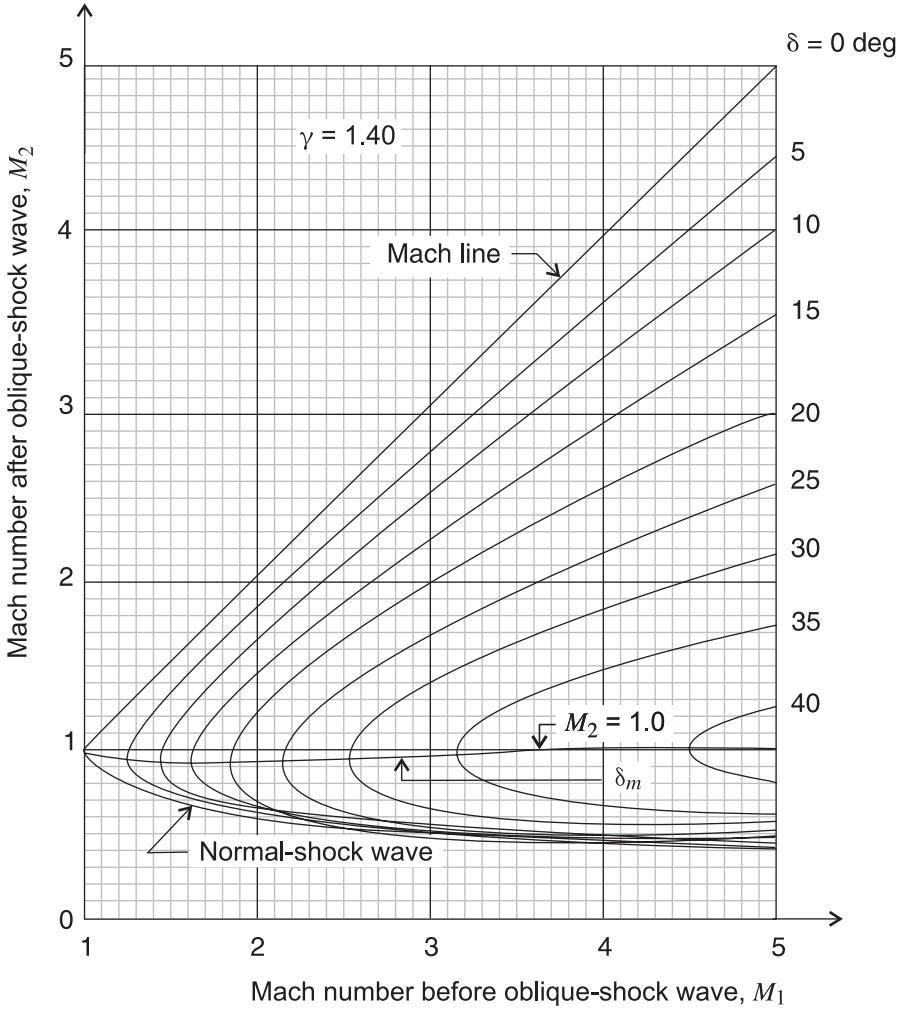


Figure AD.2 Mach number downstream M_2 for an oblique-shock wave as a function of the initial Mach number M_1 for different values of the flow deflection angle δ for $\gamma = 1.4$. (Adapted with permission from M. J. Zucrow and J. D. Hoffman, *Gas Dynamics*, Vol. I, copyright 1976, John Wiley & Sons, New York.)

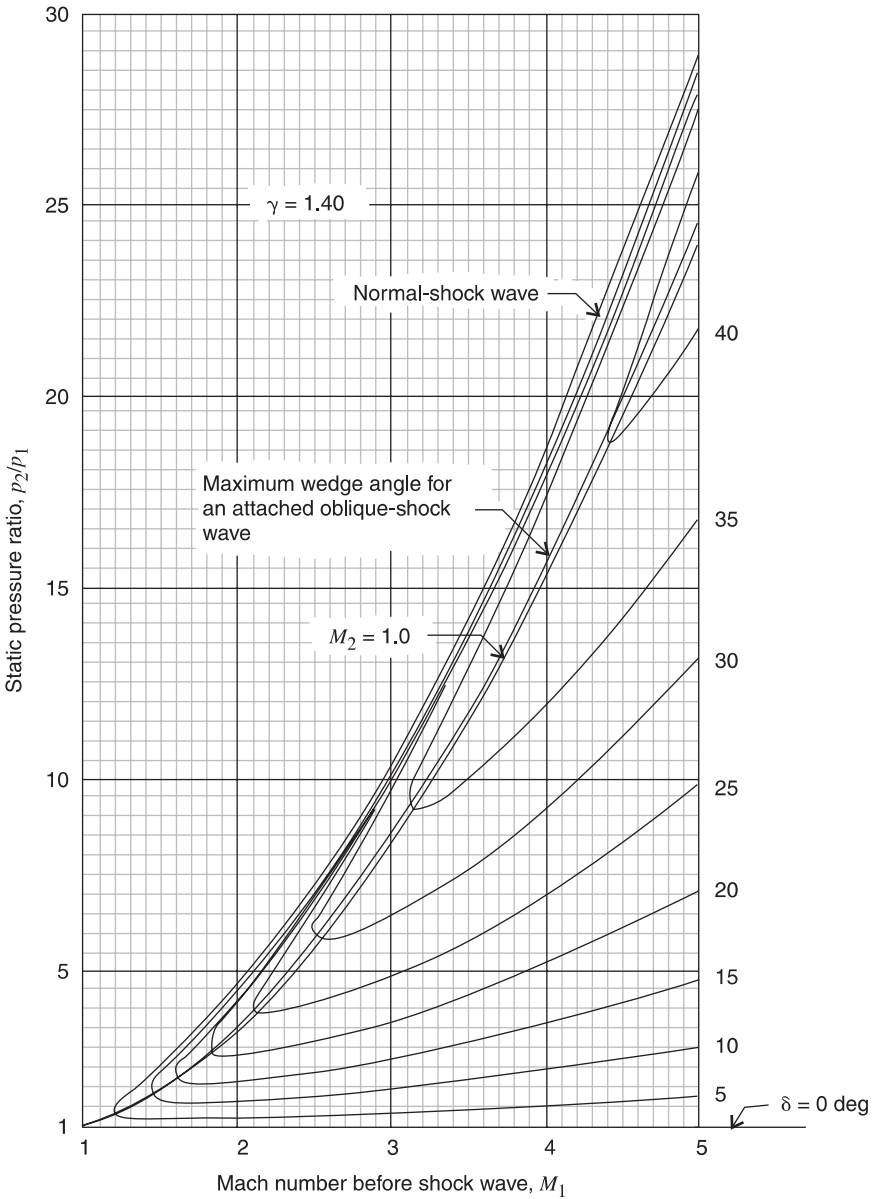
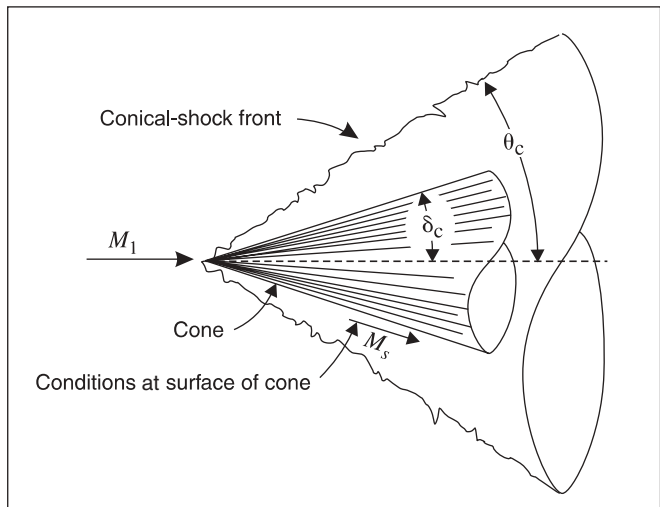


Figure AD.3 Static pressure ratio p_2/p_1 across an oblique-shock wave as a function of the initial Mach number M_1 for different values of the flow deflection angle δ for $\gamma = 1.40$. (Adapted with permission from M. J. Zucrow and J. D. Hoffman, *Gas Dynamics*, Vol. I, copyright 1976, John Wiley & Sons, New York.)

Conical-Shock Charts ($\gamma = 1.4$)

(Three-Dimensional)



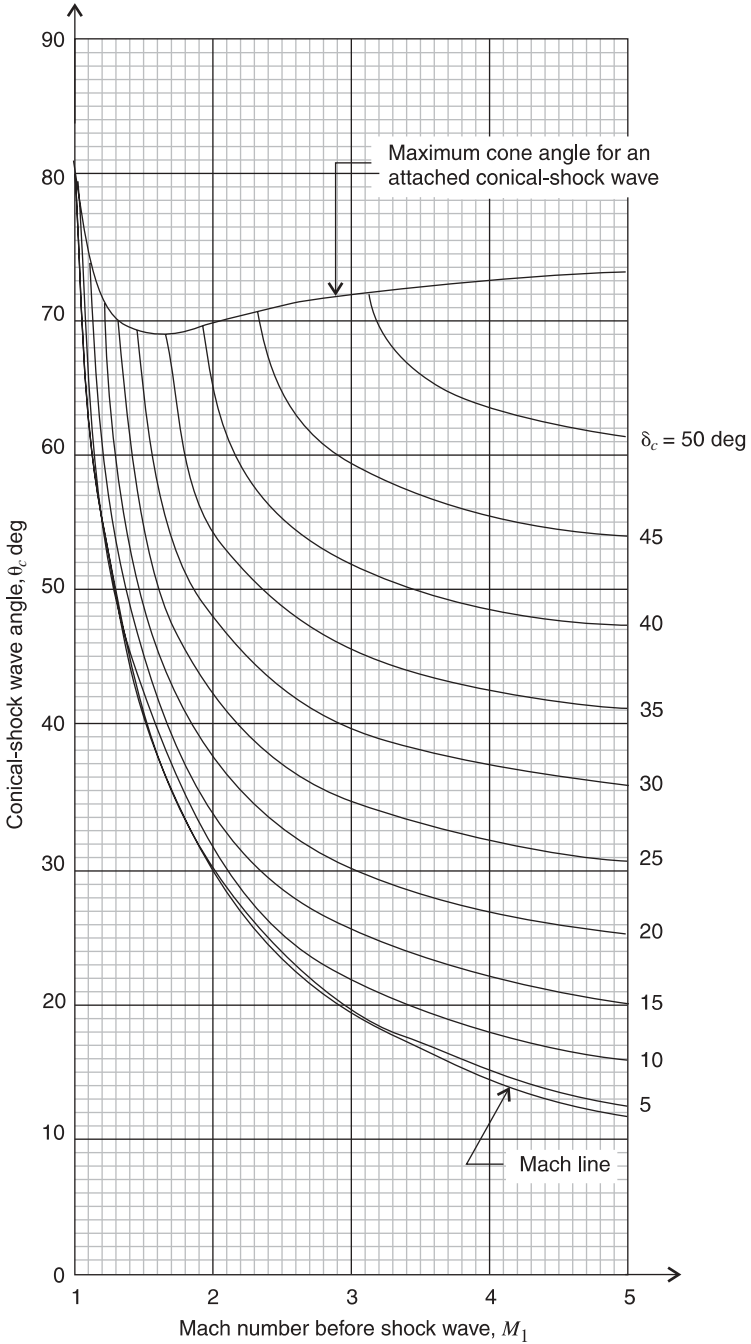


Figure AE.1 Shock wave angle θ_c for a conical-shock wave as a function of the initial Mach number M_1 for different values of the cone angle δ_c for $\gamma = 1.40$. (Adapted with permission from M. J. Zucrow and J. D. Hoffman, *Gas Dynamics*, Vol. I, copyright 1976, John Wiley & Sons, New York.)

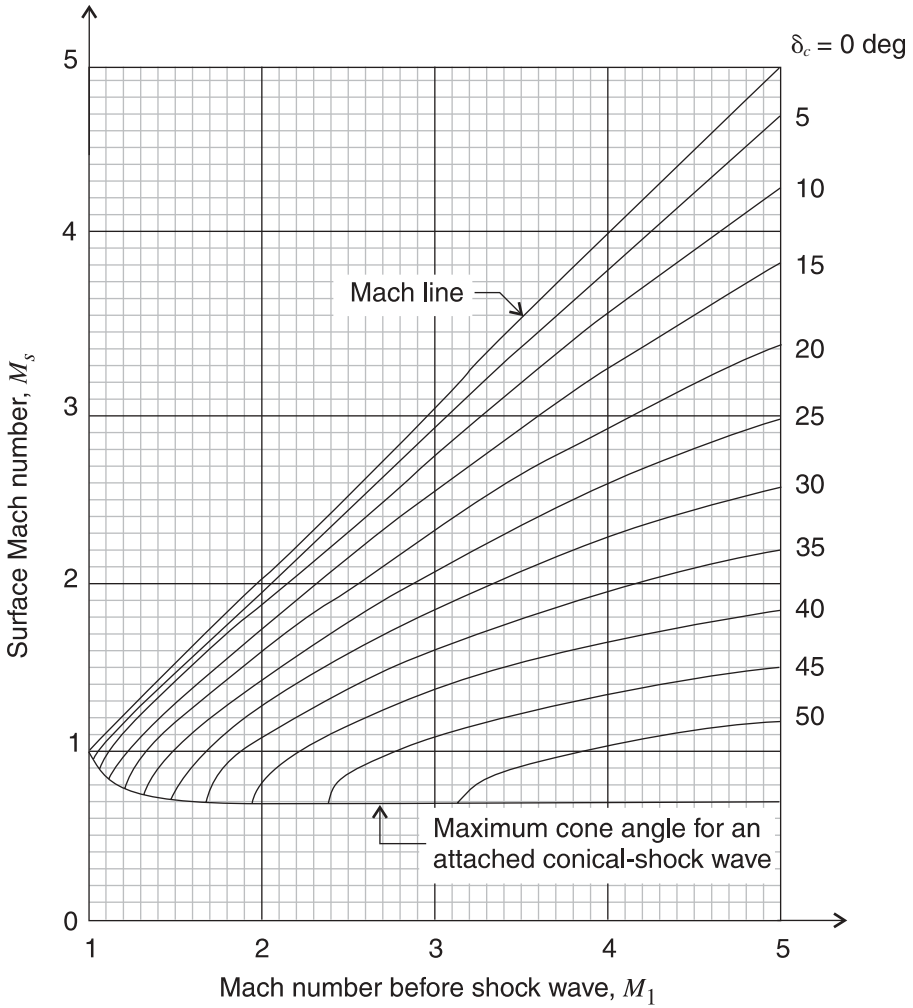


Figure AE.2 Surface Mach number M_s for a conical-shock wave as a function of the initial Mach number M_1 for different values of the cone angle δ_c for $\gamma = 1.40$. (Adapted with permission from M. J. Zucrow and J. D. Hoffman, *Gas Dynamics*, Vol. I, copyright 1976, John Wiley & Sons, New York.)

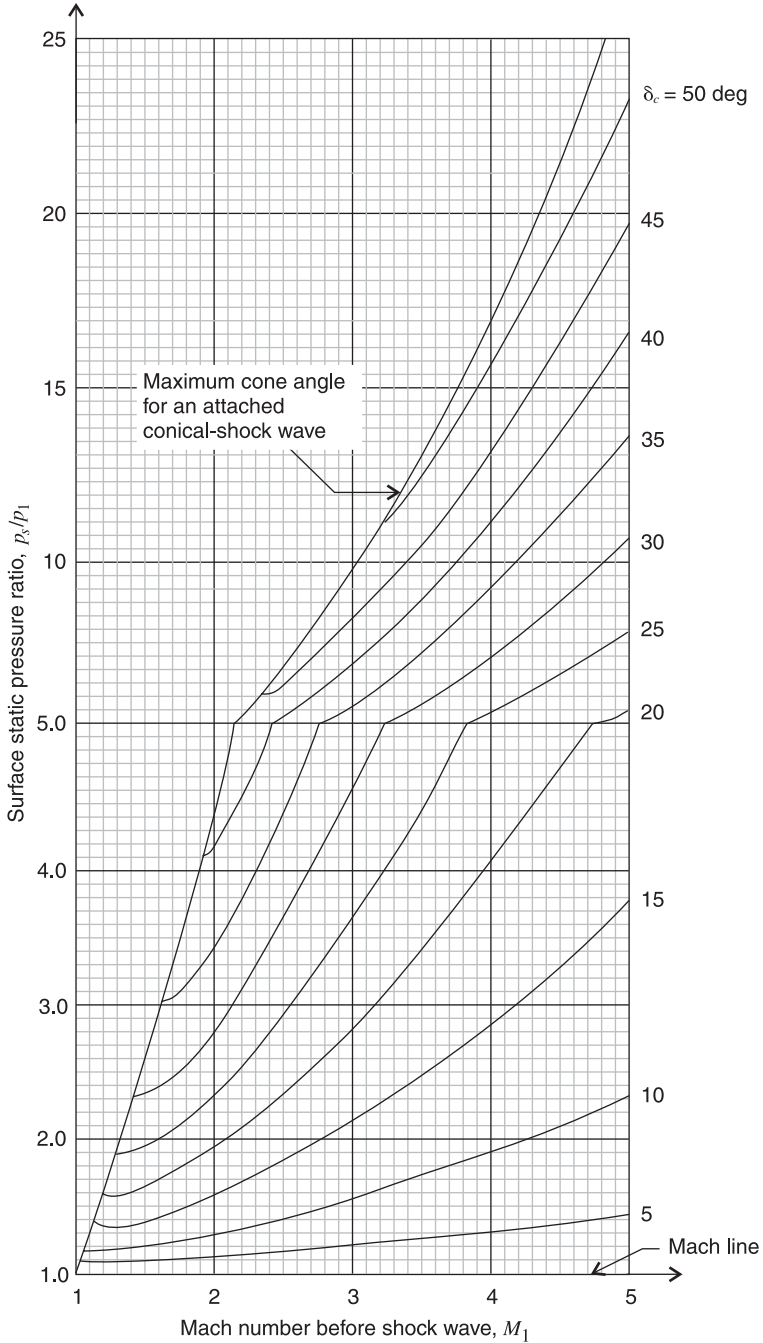


Figure AE.3 Surface static pressure ratio p_s/p_1 for a conical-shock wave as a function of the initial Mach number M_1 for different values of the cone angle δ_c for $\gamma = 1.40$. (Adapted with permission from M. J. Zucrow and J. D. Hoffman, *Gas Dynamics*, Vol. I, copyright 1976, John Wiley & Sons, New York.)

*Generalized Compressibility
Factor Chart*

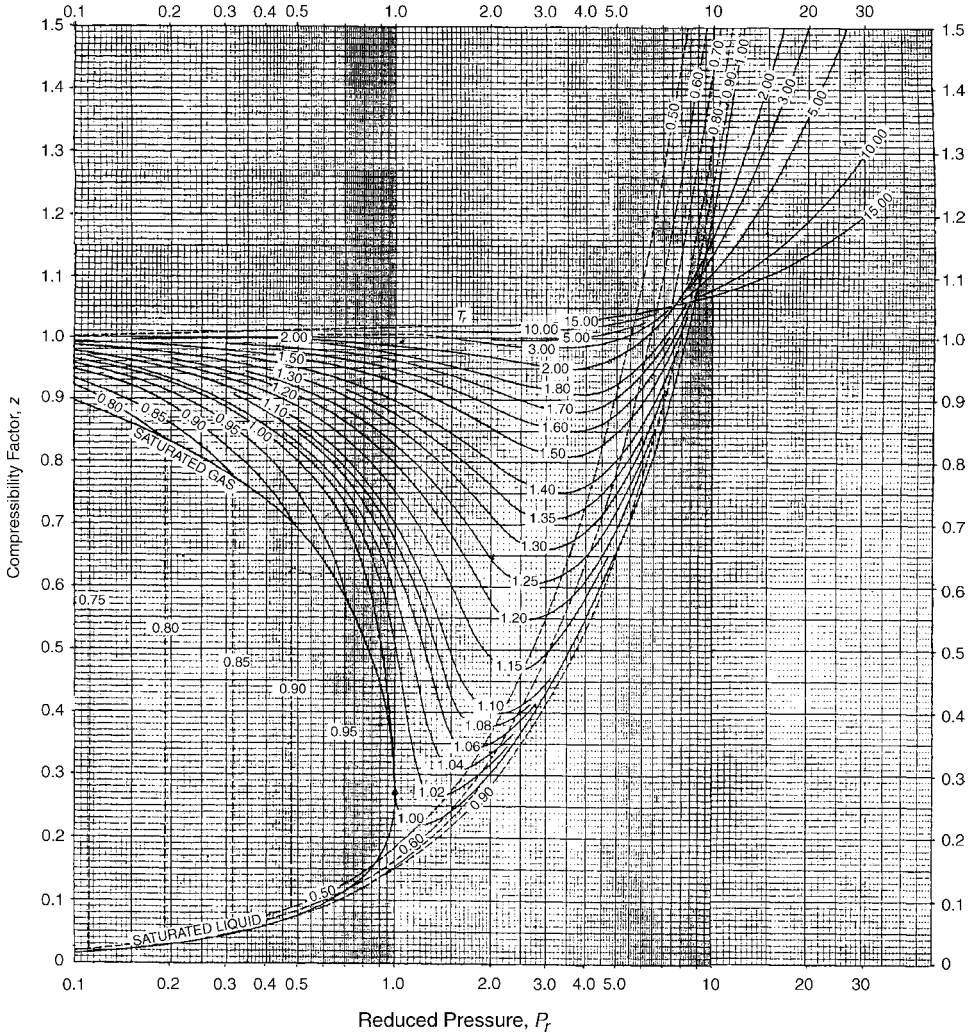


Figure AF.1 Generalized compressibility factors ($Z_c = 0.27$). (With permission from R. E. Sontag, C. Borgnakke, and C. J. Van Wylen, *Fundamentals of Thermodynamics*, 5th ed., copyright 1997, John Wiley & Sons, New York.)

*Isentropic Flow
Parameters ($\gamma = 1.4$)
(including Prandtl–Meyer
Function)*

M	p/p_t	T/T_t	A/A^*	$pA/p_t A^*$	ν	μ
0.0	1.00000	1.00000	∞	∞		
0.01	0.99993	0.99998	57.87384	57.86979		
0.02	0.99972	0.99992	28.94213	28.93403		
0.03	0.99937	0.99982	19.30054	19.28839		
0.04	0.99888	0.99968	14.48149	14.46528		
0.05	0.99825	0.99950	11.59144	11.57118		
0.06	0.99748	0.99928	9.66591	9.64159		
0.07	0.99658	0.99902	8.29153	8.26315		
0.08	0.99553	0.99872	7.26161	7.22917		
0.09	0.99435	0.99838	6.46134	6.42484		
0.10	0.99303	0.99800	5.82183	5.78126		
0.11	0.99158	0.99759	5.29923	5.25459		
0.12	0.98998	0.99713	4.86432	4.81560		
0.13	0.98826	0.99663	4.49686	4.44406		
0.14	0.98640	0.99610	4.18240	4.12552		
0.15	0.98441	0.99552	3.91034	3.84937		
0.16	0.98228	0.99491	3.67274	3.60767		
0.17	0.98003	0.99425	3.46351	3.39434		
0.18	0.97765	0.99356	3.27793	3.20465		
0.19	0.97514	0.99283	3.11226	3.03487		
0.20	0.97250	0.99206	2.96352	2.88201		
0.21	0.96973	0.99126	2.82929	2.74366		
0.22	0.96685	0.99041	2.70760	2.61783		
0.23	0.96383	0.98953	2.59681	2.50290		
0.24	0.96070	0.98861	2.49556	2.39750		
0.25	0.95745	0.98765	2.40271	2.30048		
0.26	0.95408	0.98666	2.31729	2.21089		
0.27	0.95060	0.98563	2.23847	2.12789		
0.28	0.94700	0.98456	2.16555	2.05078		
0.29	0.94329	0.98346	2.09793	1.97896		
0.30	0.93947	0.98232	2.03507	1.91188		
0.31	0.93554	0.98114	1.97651	1.84910		
0.32	0.93150	0.97993	1.92185	1.79021		
0.33	0.92736	0.97868	1.87074	1.73486		
0.34	0.92312	0.97740	1.82288	1.68273		
0.35	0.91877	0.97609	1.77797	1.63355		
0.36	0.91433	0.97473	1.73578	1.58707		
0.37	0.90979	0.97335	1.69609	1.54308		
0.38	0.90516	0.97193	1.65870	1.50138		
0.39	0.90043	0.97048	1.62343	1.46179		

<i>M</i>	p/p_t	T/T_t	A/A^*	pA/p_tA^*	ν	μ
0.40	0.89561	0.96899	1.59014	1.42415		
0.41	0.89071	0.96747	1.55867	1.38833		
0.42	0.88572	0.96592	1.52890	1.35419		
0.43	0.88065	0.96434	1.50072	1.32161		
0.44	0.87550	0.96272	1.47401	1.29049		
0.45	0.87027	0.96108	1.44867	1.26073		
0.46	0.86496	0.95940	1.42463	1.23225		
0.47	0.85958	0.95769	1.40180	1.20495		
0.48	0.85413	0.95595	1.38010	1.17878		
0.49	0.84861	0.95418	1.35947	1.15365		
0.50	0.84302	0.95238	1.33984	1.12951		
0.51	0.83737	0.95055	1.32117	1.10630		
0.52	0.83165	0.94869	1.30339	1.08397		
0.53	0.82588	0.94681	1.28645	1.06246		
0.54	0.82005	0.94489	1.27032	1.04173		
0.55	0.81417	0.94295	1.25495	1.02173		
0.56	0.80823	0.94098	1.24029	1.00244		
0.57	0.80224	0.93898	1.22633	0.98381		
0.58	0.79621	0.93696	1.21301	0.96580		
0.59	0.79013	0.93491	1.20031	0.94840		
0.60	0.78400	0.93284	1.18820	0.93155		
0.61	0.77784	0.93073	1.17665	0.91525		
0.62	0.77164	0.92861	1.16565	0.89946		
0.63	0.76540	0.92646	1.15515	0.88416		
0.64	0.75913	0.92428	1.14515	0.86932		
0.65	0.75283	0.92208	1.13562	0.85493		
0.66	0.74650	0.91986	1.12654	0.84096		
0.67	0.74014	0.91762	1.11789	0.82739		
0.68	0.73376	0.91535	1.10965	0.81422		
0.69	0.72735	0.91306	1.10182	0.80141		
0.70	0.72093	0.91075	1.09437	0.78896		
0.71	0.71448	0.90841	1.08729	0.77685		
0.72	0.70803	0.90606	1.08057	0.76507		
0.73	0.70155	0.90369	1.07419	0.75360		
0.74	0.69507	0.90129	1.06814	0.74243		
0.75	0.68857	0.89888	1.06242	0.73155		
0.76	0.68207	0.89644	1.05700	0.72095		
0.77	0.67556	0.89399	1.05188	0.71061		
0.78	0.66905	0.89152	1.04705	0.70053		
0.79	0.66254	0.88903	1.04251	0.69070		

M	p/p_t	T/T_t	A/A^*	$\rho A/p_t A^*$	ν	μ
0.80	0.65602	0.88652	1.03823	0.68110		
0.81	0.64951	0.88400	1.03422	0.67173		
0.82	0.64300	0.88146	1.03046	0.66259		
0.83	0.63650	0.87890	1.02696	0.65366		
0.84	0.63000	0.87633	1.02370	0.64493		
0.85	0.62351	0.87374	1.02067	0.63640		
0.86	0.61703	0.87114	1.01787	0.62806		
0.87	0.61057	0.86852	1.01530	0.61991		
0.88	0.60412	0.86589	1.01294	0.61193		
0.89	0.59768	0.86324	1.01080	0.60413		
0.90	0.59126	0.86059	1.00886	0.59650		
0.91	0.58486	0.85791	1.00713	0.58903		
0.92	0.57848	0.85523	1.00560	0.58171		
0.93	0.57211	0.85253	1.00426	0.57455		
0.94	0.56578	0.84982	1.00311	0.56753		
0.95	0.55946	0.84710	1.00215	0.56066		
0.96	0.55317	0.84437	1.00136	0.55392		
0.97	0.54691	0.84162	1.00076	0.54732		
0.98	0.54067	0.83887	1.00034	0.54085		
0.99	0.53446	0.83611	1.00008	0.53451		
1.00	0.52828	0.83333	1.00000	0.52828	0.0	90.0000
1.01	0.52213	0.83055	1.00008	0.52218	0.04472	81.9307
1.02	0.51602	0.82776	1.00033	0.51619	0.12569	78.6351
1.03	0.50994	0.82496	1.00074	0.51031	0.22943	76.1376
1.04	0.50389	0.82215	1.00131	0.50454	0.35098	74.0576
1.05	0.49787	0.81934	1.00203	0.49888	0.48741	72.2472
1.06	0.49189	0.81651	1.00291	0.49332	0.63669	70.6300
1.07	0.48595	0.81368	1.00394	0.48787	0.79729	69.1603
1.08	0.48005	0.81085	1.00512	0.48250	0.96804	67.8084
1.09	0.47418	0.80800	1.00645	0.47724	1.14795	66.5534
1.10	0.46835	0.80515	1.00793	0.47207	1.33620	65.3800
1.11	0.46257	0.80230	1.00955	0.46698	1.53210	64.2767
1.12	0.45682	0.79944	1.01131	0.46199	1.73504	63.2345
1.13	0.45111	0.79657	1.01322	0.45708	1.94448	62.2461
1.14	0.44545	0.79370	1.01527	0.45225	2.15996	61.3056
1.15	0.43983	0.79083	1.01745	0.44751	2.38104	60.4082
1.16	0.43425	0.78795	1.01978	0.44284	2.60735	59.5497
1.17	0.42872	0.78506	1.02224	0.43825	2.83852	58.7267
1.18	0.42322	0.78218	1.02484	0.43374	3.07426	57.9362
1.19	0.41778	0.77929	1.02757	0.42930	3.31425	57.1756

<i>M</i>	p/p_t	T/T_t	A/A^*	pA/p_tA^*	ν	μ
1.20	0.41238	0.77640	1.03044	0.42493	3.55823	56.4427
1.21	0.40702	0.77350	1.03344	0.42063	3.80596	55.7354
1.22	0.40171	0.77061	1.03657	0.41640	4.05720	55.0520
1.23	0.39645	0.76771	1.03983	0.41224	4.31173	54.3909
1.24	0.39123	0.76481	1.04323	0.40814	4.56936	53.7507
1.25	0.38606	0.76190	1.04675	0.40411	4.82989	53.1301
1.26	0.38093	0.75900	1.05041	0.40014	5.09315	52.5280
1.27	0.37586	0.75610	1.05419	0.39622	5.35897	51.9433
1.28	0.37083	0.75319	1.05810	0.39237	5.62720	51.3752
1.29	0.36585	0.75029	1.06214	0.38858	5.89768	50.8226
1.30	0.36091	0.74738	1.06630	0.38484	6.17029	50.2849
1.31	0.35603	0.74448	1.07060	0.38116	6.44488	49.7612
1.32	0.35119	0.74158	1.07502	0.37754	6.72133	49.2509
1.33	0.34640	0.73867	1.07957	0.37396	6.99953	48.7535
1.34	0.34166	0.73577	1.08424	0.37044	7.27937	48.2682
1.35	0.33697	0.73287	1.08904	0.36697	7.56072	47.7946
1.36	0.33233	0.72997	1.09396	0.36355	7.84351	47.3321
1.37	0.32773	0.72707	1.09902	0.36018	8.12762	46.8803
1.38	0.32319	0.72418	1.10419	0.35686	8.41297	46.4387
1.39	0.31869	0.72128	1.10950	0.35359	8.69946	46.0070
1.40	0.31424	0.71839	1.11493	0.35036	8.98702	45.5847
1.41	0.30984	0.71550	1.12048	0.34717	9.27556	45.1715
1.42	0.30549	0.71262	1.12616	0.34403	9.56502	44.7670
1.43	0.30118	0.70973	1.13197	0.34093	9.85531	44.3709
1.44	0.29693	0.70685	1.13790	0.33788	10.14636	43.9830
1.45	0.29272	0.70398	1.14396	0.33486	10.43811	43.6028
1.46	0.28856	0.70110	1.15015	0.33189	10.73050	43.2302
1.47	0.28445	0.69824	1.15646	0.32896	11.02346	42.8649
1.48	0.28039	0.69537	1.16290	0.32606	11.31694	42.5066
1.49	0.27637	0.69251	1.16947	0.32321	11.61087	42.1552
1.50	0.27240	0.68966	1.17617	0.32039	11.90521	41.8103
1.51	0.26848	0.68680	1.18299	0.31761	12.19990	41.4718
1.52	0.26461	0.68396	1.18994	0.31487	12.49489	41.1395
1.53	0.26078	0.68112	1.19702	0.31216	12.79014	40.8132
1.54	0.25700	0.67828	1.20423	0.30949	13.08559	40.4927
1.55	0.25326	0.67545	1.21157	0.30685	13.38121	40.1778
1.56	0.24957	0.67262	1.21904	0.30424	13.67696	39.8683
1.57	0.24593	0.66980	1.22664	0.30167	13.97278	39.5642
1.58	0.24233	0.66699	1.23438	0.29913	14.26865	39.2652
1.59	0.23878	0.66418	1.24224	0.29662	14.56452	38.9713

M	p/p_t	T/T_t	A/A^*	pA/p_tA^*	ν	μ
1.60	0.23527	0.66138	1.25023	0.29414	14.86035	38.6822
1.61	0.23181	0.65858	1.25836	0.29170	15.15612	38.3978
1.62	0.22839	0.65579	1.26663	0.28928	15.45180	38.1181
1.63	0.22501	0.65301	1.27502	0.28690	15.74733	37.8428
1.64	0.22168	0.65023	1.28355	0.28454	16.04271	37.5719
1.65	0.21839	0.64746	1.29222	0.28221	16.33789	37.3052
1.66	0.21515	0.64470	1.30102	0.27991	16.63284	37.0427
1.67	0.21195	0.64194	1.30996	0.27764	16.92755	36.7842
1.68	0.20879	0.63919	1.31904	0.27540	17.22198	36.5296
1.69	0.20567	0.63645	1.32825	0.27318	17.51611	36.2789
1.70	0.20259	0.63371	1.33761	0.27099	17.80991	36.0319
1.71	0.19956	0.63099	1.34710	0.26883	18.10336	35.7885
1.72	0.19656	0.62827	1.35674	0.26669	18.39643	35.5487
1.73	0.19361	0.62556	1.36651	0.26457	18.68911	35.3124
1.74	0.19070	0.62285	1.37643	0.26248	18.98137	35.0795
1.75	0.18782	0.62016	1.38649	0.26042	19.27319	34.8499
1.76	0.18499	0.61747	1.39670	0.25837	19.56456	34.6235
1.77	0.18219	0.61479	1.40705	0.25636	19.85544	34.4003
1.78	0.17944	0.61211	1.41755	0.25436	20.14584	34.1802
1.79	0.17672	0.60945	1.42819	0.25239	20.43571	33.9631
1.80	0.17404	0.60680	1.43898	0.25044	20.72506	33.7490
1.81	0.17140	0.60415	1.44992	0.24851	21.01387	33.5377
1.82	0.16879	0.60151	1.46101	0.24661	21.30211	33.3293
1.83	0.16622	0.59888	1.47225	0.24472	21.58977	33.1237
1.84	0.16369	0.59626	1.48365	0.24286	21.87685	32.9207
1.85	0.16119	0.59365	1.49519	0.24102	22.16332	32.7204
1.86	0.15873	0.59104	1.50689	0.23920	22.44917	32.5227
1.87	0.15631	0.58845	1.51875	0.23739	22.73439	32.3276
1.88	0.15392	0.58586	1.53076	0.23561	23.01896	32.1349
1.89	0.15156	0.58329	1.54293	0.23385	23.30288	31.9447
1.90	0.14924	0.58072	1.55526	0.23211	23.58613	31.7569
1.91	0.14695	0.57816	1.56774	0.23038	23.86871	31.5714
1.92	0.14470	0.57561	1.58039	0.22868	24.15059	31.3882
1.93	0.14247	0.57307	1.59320	0.22699	24.43178	31.2072
1.94	0.14028	0.57054	1.60617	0.22532	24.71226	31.0285
1.95	0.13813	0.56802	1.61931	0.22367	24.99202	30.8519
1.96	0.13600	0.56551	1.63261	0.22203	25.27105	30.6774
1.97	0.13390	0.56301	1.64608	0.22042	25.54935	30.5050
1.98	0.13184	0.56051	1.65972	0.21882	25.82691	30.3347
1.99	0.12981	0.55803	1.67352	0.21724	26.10371	30.1664

<i>M</i>	p/p_t	T/T_t	A/A^*	pA/p_tA^*	ν	μ
2.00	0.12780	0.55556	1.68750	0.21567	26.37976	30.0000
2.01	0.12583	0.55309	1.70165	0.21412	26.65504	29.8356
2.02	0.12389	0.55064	1.71597	0.21259	26.92955	29.6730
2.03	0.12197	0.54819	1.73047	0.21107	27.20328	29.5123
2.04	0.12009	0.54576	1.74514	0.20957	27.47622	29.3535
2.05	0.11823	0.54333	1.75999	0.20808	27.74837	29.1964
2.06	0.11640	0.54091	1.77502	0.20661	28.01973	29.0411
2.07	0.11460	0.53851	1.79022	0.20516	28.29028	28.8875
2.08	0.11282	0.53611	1.80561	0.20371	28.56003	28.7357
2.09	0.11107	0.53373	1.82119	0.20229	28.82896	28.5855
2.10	0.10935	0.53135	1.83694	0.20088	29.09708	28.4369
2.11	0.10766	0.52898	1.85289	0.19948	29.36438	28.2899
2.12	0.10599	0.52663	1.86902	0.19809	29.63085	28.1446
2.13	0.10434	0.52428	1.88533	0.19672	29.89649	28.0008
2.14	0.10273	0.52194	1.90184	0.19537	30.16130	27.8585
2.15	0.10113	0.51962	1.91854	0.19403	30.42527	27.7177
2.16	0.09956	0.51730	1.93544	0.19270	30.68841	27.5785
2.17	0.09802	0.51499	1.95252	0.19138	30.95070	27.4406
2.18	0.09649	0.51269	1.96981	0.19008	31.21215	27.3043
2.19	0.09500	0.51041	1.98729	0.18879	31.47275	27.1693
2.20	0.09352	0.50813	2.00497	0.18751	31.73250	27.0357
2.21	0.09207	0.50586	2.02286	0.18624	31.99139	26.9035
2.22	0.09064	0.50361	2.04094	0.18499	32.24943	26.7726
2.23	0.08923	0.50136	2.05923	0.18375	32.50662	26.6430
2.24	0.08785	0.49912	2.07773	0.18252	32.76294	26.5148
2.25	0.08648	0.49689	2.09644	0.18130	33.01841	26.3878
2.26	0.08514	0.49468	2.11535	0.18010	33.27301	26.2621
2.27	0.08382	0.49247	2.13447	0.17890	33.52676	26.1376
2.28	0.08251	0.49027	2.15381	0.17772	33.77963	26.0144
2.29	0.08123	0.48809	2.17336	0.17655	34.03165	25.8923
2.30	0.07997	0.48591	2.19313	0.17539	34.28279	25.7715
2.31	0.07873	0.48374	2.21312	0.17424	34.53307	25.6518
2.32	0.07751	0.48158	2.23332	0.17310	34.78249	25.5332
2.33	0.07631	0.47944	2.25375	0.17198	35.03103	25.4158
2.34	0.07512	0.47730	2.27440	0.17086	35.27871	25.2995
2.35	0.07396	0.47517	2.29528	0.16975	35.52552	25.1843
2.36	0.07281	0.47305	2.31638	0.16866	35.77146	25.0702
2.37	0.07168	0.47095	2.33771	0.16757	36.01653	24.9572
2.38	0.07057	0.46885	2.35928	0.16649	36.26073	24.8452
2.39	0.06948	0.46676	2.38107	0.16543	36.50406	24.7342

M	p/p_t	T/T_t	A/A^*	pA/p_tA^*	v	μ
2.40	0.06840	0.46468	2.40310	0.16437	36.74653	24.6243
2.41	0.06734	0.46262	2.42537	0.16332	36.98813	24.5154
2.42	0.06630	0.46056	2.44787	0.16229	37.22886	24.4075
2.43	0.06527	0.45851	2.47061	0.16126	37.46872	24.3005
2.44	0.06426	0.45647	2.49360	0.16024	37.70772	24.1945
2.45	0.06327	0.45444	2.51683	0.15923	37.94585	24.0895
2.46	0.06229	0.45242	2.54031	0.15823	38.18312	23.9854
2.47	0.06133	0.45041	2.56403	0.15724	38.41952	23.8822
2.48	0.06038	0.44841	2.58801	0.15626	38.65507	23.7800
2.49	0.05945	0.44642	2.61224	0.15529	38.88974	23.6786
2.50	0.05853	0.44444	2.63672	0.15432	39.12356	23.5782
2.51	0.05762	0.44247	2.66146	0.15337	39.35652	23.4786
2.52	0.05674	0.44051	2.68645	0.15242	39.58862	23.3799
2.53	0.05586	0.43856	2.71171	0.15148	39.81987	23.2820
2.54	0.05500	0.43662	2.73723	0.15055	40.05026	23.1850
2.55	0.05415	0.43469	2.76301	0.14963	40.27979	23.0888
2.56	0.05332	0.43277	2.78906	0.14871	40.50847	22.9934
2.57	0.05250	0.43085	2.81538	0.14780	40.73630	22.8988
2.58	0.05169	0.42895	2.84197	0.14691	40.96329	22.8051
2.59	0.05090	0.42705	2.86884	0.14602	41.18942	22.7121
2.60	0.05012	0.42517	2.89598	0.14513	41.41471	22.6199
2.61	0.04935	0.42329	2.92339	0.14426	41.63915	22.5284
2.62	0.04859	0.42143	2.95109	0.14339	41.86275	22.4377
2.63	0.04784	0.41957	2.97907	0.14253	42.08551	22.3478
2.64	0.04711	0.41772	3.00733	0.14168	42.30744	22.2586
2.65	0.04639	0.41589	3.03588	0.14083	42.52852	22.1702
2.66	0.04568	0.41406	3.06472	0.13999	42.74877	22.0824
2.67	0.04498	0.41224	3.09385	0.13916	42.96819	21.9954
2.68	0.04429	0.41043	3.12327	0.13834	43.18678	21.9090
2.69	0.04362	0.40863	3.15299	0.13752	43.40454	21.8234
2.70	0.04295	0.40683	3.18301	0.13671	43.62148	21.7385
2.71	0.04229	0.40505	3.21333	0.13591	43.83759	21.6542
2.72	0.04165	0.40328	3.24395	0.13511	44.05288	21.5706
2.73	0.04102	0.40151	3.27488	0.13432	44.26735	21.4876
2.74	0.04039	0.39976	3.30611	0.13354	44.48100	21.4053
2.75	0.03978	0.39801	3.33766	0.13276	44.69384	21.3237
2.76	0.03917	0.39627	3.36952	0.13199	44.90586	21.2427
2.77	0.03858	0.39454	3.40169	0.13123	45.11708	21.1623
2.78	0.03799	0.39282	3.43418	0.13047	45.32749	21.0825
2.79	0.03742	0.39111	3.46699	0.12972	45.53709	21.0034

<i>M</i>	p/p_t	T/T_t	A/A^*	pA/p_tA^*	ν	μ
2.80	0.03685	0.38941	3.50012	0.12897	45.74589	20.9248
2.81	0.03629	0.38771	3.53358	0.12823	45.95389	20.8469
2.82	0.03574	0.38603	3.56737	0.12750	46.16109	20.7695
2.83	0.03520	0.38435	3.60148	0.12678	46.36750	20.6928
2.84	0.03467	0.38268	3.63593	0.12605	46.57312	20.6166
2.85	0.03415	0.38102	3.67072	0.12534	46.77794	20.5410
2.86	0.03363	0.37937	3.70584	0.12463	46.98198	20.4659
2.87	0.03312	0.37773	3.74131	0.12393	47.18523	20.3914
2.88	0.03263	0.37610	3.77711	0.12323	47.38770	20.3175
2.89	0.03213	0.37447	3.81327	0.12254	47.58940	20.2441
2.90	0.03165	0.37286	3.84977	0.12185	47.79031	20.1713
2.91	0.03118	0.37125	3.88662	0.12117	47.99045	20.0990
2.92	0.03071	0.36965	3.92383	0.12049	48.18982	20.0272
2.93	0.03025	0.36806	3.96139	0.11982	48.38842	19.9559
2.94	0.02980	0.36647	3.99932	0.11916	48.58626	19.8852
2.95	0.02935	0.36490	4.03760	0.11850	48.78333	19.8149
2.96	0.02891	0.36333	4.07625	0.11785	48.97965	19.7452
2.97	0.02848	0.36177	4.11527	0.11720	49.17520	19.6760
2.98	0.02805	0.36022	4.15466	0.11655	49.37000	19.6072
2.99	0.02764	0.35868	4.19443	0.11591	49.56405	19.5390
3.00	0.02722	0.35714	4.23457	0.11528	49.75735	19.4712
3.01	0.02682	0.35562	4.27509	0.11465	49.94990	19.4039
3.02	0.02642	0.35410	4.31599	0.11403	50.14171	19.3371
3.03	0.02603	0.35259	4.35728	0.11341	50.33277	19.2708
3.04	0.02564	0.35108	4.39895	0.11279	50.52310	19.2049
3.05	0.02526	0.34959	4.44102	0.11219	50.71270	19.1395
3.06	0.02489	0.34810	4.48347	0.11158	50.90156	19.0745
3.07	0.02452	0.34662	4.52633	0.11098	51.08969	19.0100
3.08	0.02416	0.34515	4.56959	0.11039	51.27710	18.9459
3.09	0.02380	0.34369	4.61325	0.10979	51.46378	18.8823
3.10	0.02345	0.34223	4.65731	0.10921	51.64974	18.8191
3.11	0.02310	0.34078	4.70178	0.10863	51.83499	18.7563
3.12	0.02276	0.33934	4.74667	0.10805	52.01952	18.6939
3.13	0.02243	0.33791	4.79197	0.10748	52.20333	18.6320
3.14	0.02210	0.33648	4.83769	0.10691	52.38644	18.5705
3.15	0.02177	0.33506	4.88383	0.10634	52.56884	18.5094
3.16	0.02146	0.33365	4.93039	0.10578	52.75053	18.4487
3.17	0.02114	0.33225	4.97739	0.10523	52.93153	18.3884
3.18	0.02083	0.33085	5.02481	0.10468	53.11182	18.3285
3.19	0.02053	0.32947	5.07266	0.10413	53.29143	18.2691

M	p/p_t	T/T_t	A/A^*	$pA/p_t A^*$	v	μ
3.20	0.02023	0.32808	5.12096	0.10359	53.47033	18.2100
3.21	0.01993	0.32671	5.16969	0.10305	53.64855	18.1512
3.22	0.01964	0.32534	5.21887	0.10251	53.82609	18.0929
3.23	0.01936	0.32398	5.26849	0.10198	54.00294	18.0350
3.24	0.01908	0.32263	5.31857	0.10145	54.17910	17.9774
3.25	0.01880	0.32129	5.36909	0.10093	54.35459	17.9202
3.26	0.01853	0.31995	5.42008	0.10041	54.52941	17.8634
3.27	0.01826	0.31862	5.47152	0.09989	54.70355	17.8069
3.28	0.01799	0.31729	5.52343	0.09938	54.87703	17.7508
3.29	0.01773	0.31597	5.57580	0.09887	55.04983	17.6951
3.30	0.01748	0.31466	5.62865	0.09837	55.22198	17.6397
3.31	0.01722	0.31336	5.68196	0.09787	55.39346	17.5847
3.32	0.01698	0.31206	5.73576	0.09737	55.56428	17.5300
3.33	0.01673	0.31077	5.79003	0.09688	55.73445	17.4756
3.34	0.01649	0.30949	5.84479	0.09639	55.90396	17.4216
3.35	0.01625	0.30821	5.90004	0.09590	56.07283	17.3680
3.36	0.01602	0.30694	5.95577	0.09542	56.24105	17.3147
3.37	0.01579	0.30568	6.01201	0.09494	56.40862	17.2617
3.38	0.01557	0.30443	6.06873	0.09447	56.57556	17.2090
3.39	0.01534	0.30318	6.12596	0.09399	56.74185	17.1567
3.40	0.01512	0.30193	6.18370	0.09353	56.90751	17.1046
3.41	0.01491	0.30070	6.24194	0.09306	57.07254	17.0529
3.42	0.01470	0.29947	6.30070	0.09260	57.23694	17.0016
3.43	0.01449	0.29824	6.35997	0.09214	57.40071	16.9505
3.44	0.01428	0.29702	6.41976	0.09168	57.56385	16.8997
3.45	0.01408	0.29581	6.48007	0.09123	57.72637	16.8493
3.46	0.01388	0.29461	6.54092	0.09078	57.88828	16.7991
3.47	0.01368	0.29341	6.60229	0.09034	58.04957	16.7493
3.48	0.01349	0.29222	6.66419	0.08989	58.21024	16.6997
3.49	0.01330	0.29103	6.72664	0.08945	58.37030	16.6505
3.50	0.01311	0.28986	6.78962	0.08902	58.52976	16.6015
3.51	0.01293	0.28868	6.85315	0.08858	58.68861	16.5529
3.52	0.01274	0.28751	6.91723	0.08815	58.84685	16.5045
3.53	0.01256	0.28635	6.98186	0.08773	59.00450	16.4564
3.54	0.01239	0.28520	7.04705	0.08730	59.16155	16.4086
3.55	0.01221	0.28405	7.11281	0.08688	59.31801	16.3611
3.56	0.01204	0.28291	7.17912	0.08646	59.47387	16.3139
3.57	0.01188	0.28177	7.24601	0.08605	59.62914	16.2669
3.58	0.01171	0.28064	7.31346	0.08563	59.78383	16.2202
3.59	0.01155	0.27952	7.38150	0.08522	59.93793	16.1738

M	p/p_t	T/T_t	A/A^*	pA/p_tA^*	ν	μ
3.60	0.01138	0.27840	7.45011	0.08482	60.09146	16.1276
3.61	0.01123	0.27728	7.51931	0.08441	60.24440	16.0817
3.62	0.01107	0.27618	7.58910	0.08401	60.39677	16.0361
3.63	0.01092	0.27507	7.65948	0.08361	60.54856	15.9907
3.64	0.01076	0.27398	7.73045	0.08322	60.69978	15.9456
3.65	0.01062	0.27289	7.80203	0.08282	60.85044	15.9008
3.66	0.01047	0.27180	7.87421	0.08243	61.00052	15.8562
3.67	0.01032	0.27073	7.94700	0.08205	61.15005	15.8119
3.68	0.01018	0.26965	8.02040	0.08166	61.29902	15.7678
3.69	0.01004	0.26858	8.09442	0.08128	61.44742	15.7239
3.70	0.00990	0.26752	8.16907	0.08090	61.59527	15.6803
3.71	0.00977	0.26647	8.24433	0.08052	61.74257	15.6370
3.72	0.00963	0.26542	8.32023	0.08014	61.88932	15.5939
3.73	0.00950	0.26437	8.39676	0.07977	62.03552	15.5510
3.74	0.00937	0.26333	8.47393	0.07940	62.18118	15.5084
3.75	0.00924	0.26230	8.55174	0.07904	62.32629	15.4660
3.76	0.00912	0.26127	8.63020	0.07867	62.47086	15.4239
3.77	0.00899	0.26024	8.70931	0.07831	62.61490	15.3819
3.78	0.00887	0.25922	8.78907	0.07795	62.75840	15.3402
3.79	0.00875	0.25821	8.86950	0.07759	62.90136	15.2988
3.80	0.00863	0.25720	8.95059	0.07723	63.04380	15.2575
3.81	0.00851	0.25620	9.03234	0.07688	63.18571	15.2165
3.82	0.00840	0.25520	9.11477	0.07653	63.32709	15.1757
3.83	0.00828	0.25421	9.19788	0.07618	63.46795	15.1351
3.84	0.00817	0.25322	9.28167	0.07584	63.60829	15.0948
3.85	0.00806	0.25224	9.36614	0.07549	63.74811	15.0547
3.86	0.00795	0.25126	9.45131	0.07515	63.88741	15.0147
3.87	0.00784	0.25029	9.53717	0.07481	64.02620	14.9750
3.88	0.00774	0.24932	9.62373	0.07447	64.16448	14.9355
3.89	0.00763	0.24836	9.71100	0.07414	64.30225	14.8962
3.90	0.00753	0.24740	9.79897	0.07381	64.43952	14.8572
3.91	0.00743	0.24645	9.88766	0.07348	64.57628	14.8183
3.92	0.00733	0.24550	9.97707	0.07315	64.71254	14.7796
3.93	0.00723	0.24456	10.06720	0.07282	64.84829	14.7412
3.94	0.00714	0.24362	10.15806	0.07250	64.98356	14.7029
3.95	0.00704	0.24269	10.24965	0.07217	65.11832	14.6649
3.96	0.00695	0.24176	10.34197	0.07185	65.25260	14.6270
3.97	0.00686	0.24084	10.43504	0.07154	65.38638	14.5893
3.98	0.00676	0.23992	10.52886	0.07122	65.51968	14.5519
3.99	0.00667	0.23900	10.62343	0.07091	65.65249	14.5146

M	p/p_t	T/T_t	A/A^*	pA/p_tA^*	ν	μ
4.00	0.00059	0.23810	10.71875	0.07059	65.78482	14.4775
4.10	0.00577	0.22925	11.71465	0.06758	67.08200	14.1170
4.20	0.00506	0.22085	12.79164	0.06475	68.33324	13.7741
4.30	0.00445	0.21286	13.95490	0.06209	69.54063	13.4477
4.40	0.00392	0.20525	15.20987	0.05959	70.70616	13.1366
4.50	0.00346	0.19802	16.56219	0.05723	71.83174	12.8396
4.60	0.00305	0.19113	18.01779	0.05500	72.91915	12.5559
4.70	0.00270	0.18457	19.58283	0.05290	73.97012	12.2845
4.80	0.00239	0.17832	21.26371	0.05091	74.98627	12.0247
4.90	0.00213	0.17235	23.06712	0.04903	75.96915	11.7757
5.00	0.00189	0.16667	25.00000	0.04725	76.92021	11.5370
5.10	0.00168	0.16124	27.06957	0.04556	77.84087	11.3077
5.20	0.00150	0.15605	29.28333	0.04396	78.73243	11.0875
5.30	0.00134	0.15110	31.64905	0.04244	79.59616	10.8757
5.40	0.00120	0.14637	34.17481	0.04100	80.43323	10.6719
5.50	0.00107	0.14184	36.86896	0.03963	81.24479	10.4757
5.60	0.000964	0.13751	39.74018	0.03832	82.03190	10.2866
5.70	0.000866	0.13337	42.79743	0.03708	82.79558	10.1042
5.80	0.000779	0.12940	46.05000	0.03589	83.53681	9.9282
5.90	0.000702	0.12560	49.50747	0.03476	84.25649	9.7583
6.00	0.000633	0.12195	53.17978	0.03368	84.95550	9.5941
6.10	0.000572	0.11846	57.07718	0.03265	85.63467	9.4353
6.20	0.000517	0.11510	61.21023	0.03167	86.29479	9.2818
6.30	0.000468	0.11188	65.58987	0.03073	86.93661	9.1332
6.40	0.000425	0.10879	70.22736	0.02982	87.56084	8.9893
6.50	0.000385	0.10582	75.13431	0.02896	88.16816	8.8499
6.60	0.000350	0.10297	80.32271	0.02814	88.75922	8.7147
6.70	0.000319	0.10022	85.80487	0.02734	89.33463	8.5837
6.80	0.000290	0.09758	91.59351	0.02658	89.89499	8.4565
6.90	0.000265	0.09504	97.70169	0.02586	90.44084	8.3331
7.00	0.000242	0.09259	104.14286	0.02516	90.97273	8.2132
7.50	0.000155	0.08163	141.84148	0.02205	93.43967	7.6623
8.00	0.000102	0.07246	190.10937	0.01947	95.62467	7.1808
8.50	0.0000690	0.06472	251.086167	0.01732	97.57220	6.7563
9.00	0.0000474	0.05814	327.189300	0.01550	99.31810	6.3794
9.50	0.0000331	0.05249	421.131373	0.01396	100.89148	6.0423
10.00	0.0000236	0.04762	535.937500	0.01263	102.31625	5.7392
∞	0.0	0.0	∞	0.0	130.4541	0.0

*Normal-Shock
Parameters ($\gamma = 1.4$)*

M_1	M_2	p_2/p_1	T_2/T_1	$\Delta V/a_1$	p_{t2}/p_{t1}	p_{t2}/p_1
1.00	1.00000	1.00000	1.00000	0.0	1.00000	1.89293
1.01	0.99013	1.02345	1.00664	0.01658	1.00000	1.91521
1.02	0.98052	1.04713	1.01325	0.03301	0.99999	1.93790
1.03	0.97115	1.07105	1.01981	0.04927	0.99997	1.96097
1.04	0.96203	1.09520	1.02634	0.06538	0.99992	1.98442
1.05	0.95313	1.11958	1.03284	0.08135	0.99985	2.00825
1.06	0.94445	1.14420	1.03931	0.09717	0.99975	2.03245
1.07	0.93598	1.16905	1.04575	0.11285	0.99961	2.05702
1.08	0.92771	1.19413	1.05217	0.12840	0.99943	2.08194
1.09	0.91965	1.21945	1.05856	0.14381	0.99920	2.10722
1.10	0.91177	1.24500	1.06494	0.15909	0.99893	2.13285
1.11	0.90408	1.27078	1.07129	0.17425	0.99860	2.15882
1.12	0.89656	1.29680	1.07763	0.18929	0.99821	2.18513
1.13	0.88922	1.32305	1.08396	0.20420	0.99777	2.21178
1.14	0.88204	1.34953	1.09027	0.21901	0.99726	2.23877
1.15	0.87502	1.37625	1.09658	0.23370	0.99669	2.26608
1.16	0.86816	1.40320	1.10287	0.24828	0.99605	2.29372
1.17	0.86145	1.43038	1.10916	0.26275	0.99535	2.32169
1.18	0.85488	1.45780	1.11544	0.27712	0.99457	2.34998
1.19	0.84846	1.48545	1.12172	0.29139	0.99372	2.37858
1.20	0.84217	1.51333	1.12799	0.30556	0.99280	2.40750
1.21	0.83601	1.54145	1.13427	0.31963	0.99180	2.43674
1.22	0.82999	1.56980	1.14054	0.33361	0.99073	2.46628
1.23	0.82408	1.59838	1.14682	0.34749	0.98958	2.49613
1.24	0.81830	1.62720	1.15309	0.36129	0.98836	2.52629
1.25	0.81264	1.65625	1.15937	0.37500	0.98706	2.55676
1.26	0.80709	1.68553	1.16566	0.38862	0.98568	2.58753
1.27	0.80164	1.71505	1.17195	0.40217	0.98422	2.61860
1.28	0.79631	1.74480	1.17825	0.41562	0.98268	2.64996
1.29	0.79108	1.77478	1.18456	0.42901	0.98107	2.68163
1.30	0.78596	1.80500	1.19087	0.44231	0.97937	2.71359
1.31	0.78093	1.83545	1.19720	0.45553	0.97760	2.74585
1.32	0.77600	1.86613	1.20353	0.46869	0.97575	2.77840
1.33	0.77116	1.89705	1.20988	0.48177	0.97382	2.81125
1.34	0.76641	1.92820	1.21624	0.49478	0.97182	2.84438
1.35	0.76175	1.95958	1.22261	0.50772	0.96974	2.87781
1.36	0.75718	1.99120	1.22900	0.52059	0.96758	2.91152
1.37	0.75269	2.02305	1.23540	0.53339	0.96534	2.94552
1.38	0.74829	2.05513	1.24181	0.54614	0.96304	2.97981
1.39	0.74396	2.08745	1.24825	0.55881	0.96065	3.01438

M_1	M_2	p_2/p_1	T_2/T_1	$\Delta V/a_1$	p_{t2}/p_{t1}	p_{t2}/p_1
1.40	0.73971	2.12000	1.25469	0.57143	0.95819	3.04924
1.41	0.73554	2.15278	1.26116	0.58398	0.95566	3.08438
1.42	0.73144	2.18580	1.26764	0.59648	0.95306	3.11980
1.43	0.72741	2.21905	1.27414	0.60892	0.95039	3.15551
1.44	0.72345	2.25253	1.28066	0.62130	0.94765	3.19149
1.45	0.71956	2.28625	1.28720	0.63362	0.94484	3.22776
1.46	0.71574	2.32020	1.29377	0.64589	0.94196	3.26431
1.47	0.71198	2.35438	1.30035	0.65811	0.93901	3.30113
1.48	0.70829	2.38880	1.30695	0.67027	0.93600	3.33823
1.49	0.70466	2.42345	1.31357	0.68238	0.93293	3.37562
1.50	0.70109	2.45833	1.32022	0.69444	0.92979	3.41327
1.51	0.69758	2.49345	1.32688	0.70646	0.92659	3.45121
1.52	0.69413	2.52880	1.33357	0.71842	0.92332	3.48942
1.53	0.69073	2.56438	1.34029	0.73034	0.92000	3.52791
1.54	0.68739	2.60020	1.34703	0.74221	0.91662	3.56667
1.55	0.68410	2.63625	1.35379	0.75403	0.91319	3.60570
1.56	0.68087	2.67253	1.36057	0.76581	0.90970	3.64501
1.57	0.67768	2.70905	1.36738	0.77755	0.90615	3.68459
1.58	0.67455	2.74580	1.37422	0.78924	0.90255	3.72445
1.59	0.67147	2.78278	1.38108	0.80089	0.89890	3.76457
1.60	0.66844	2.82000	1.38797	0.81250	0.89520	3.80497
1.61	0.66545	2.85745	1.39488	0.82407	0.89145	3.84564
1.62	0.66251	2.89513	1.40182	0.83560	0.88765	3.88658
1.63	0.65962	2.93305	1.40879	0.84709	0.88381	3.92780
1.64	0.65677	2.97120	1.41578	0.85854	0.87992	3.96928
1.65	0.65396	3.00958	1.42280	0.86995	0.87599	4.01103
1.66	0.65119	3.04820	1.42985	0.88133	0.87201	4.05305
1.67	0.64847	3.08705	1.43693	0.89266	0.86800	4.09535
1.68	0.64579	3.12613	1.44403	0.90397	0.86394	4.13791
1.69	0.64315	3.16545	1.45117	0.91524	0.85985	4.18074
1.70	0.64054	3.20500	1.45833	0.92647	0.85572	4.22383
1.71	0.63798	3.24478	1.46552	0.93767	0.85156	4.26720
1.72	0.63545	3.28480	1.47274	0.94884	0.84736	4.31083
1.73	0.63296	3.32505	1.47999	0.95997	0.84312	4.35473
1.74	0.63051	3.36553	1.48727	0.97107	0.83886	4.39890
1.75	0.62809	3.40625	1.49458	0.98214	0.83457	4.44334
1.76	0.62570	3.44720	1.50192	0.99318	0.83024	4.48804
1.77	0.62335	3.48838	1.50929	1.00419	0.82589	4.53301
1.78	0.62104	3.52980	1.51669	1.01517	0.82151	4.57825
1.79	0.61875	3.57145	1.52412	1.02612	0.81711	4.62375

M_1	M_2	p_2/p_1	T_2/T_1	$\Delta V/a_1$	p_{t2}/p_{t1}	p_{t2}/p_1
1.80	0.61650	3.61333	1.53158	1.03704	0.81268	4.66952
1.81	0.61428	3.65545	1.53907	1.04793	0.80823	4.71555
1.82	0.61209	3.69780	1.54659	1.05879	0.80376	4.76185
1.83	0.60993	3.74038	1.55415	1.06963	0.79927	4.80841
1.84	0.60780	3.78320	1.56173	1.08043	0.79476	4.85524
1.85	0.60570	3.82625	1.56935	1.09122	0.79023	4.90234
1.86	0.60363	3.86953	1.57700	1.10197	0.78569	4.94970
1.87	0.60158	3.91305	1.58468	1.11270	0.78112	4.99732
1.88	0.59957	3.95680	1.59239	1.12340	0.77655	5.04521
1.89	0.59758	4.00078	1.60014	1.13408	0.77196	5.09336
1.90	0.59562	4.04500	1.60792	1.14474	0.76736	5.14178
1.91	0.59368	4.08945	1.61573	1.15537	0.76274	5.19046
1.92	0.59177	4.13413	1.62357	1.16597	0.75812	5.23940
1.93	0.58988	4.17905	1.63144	1.17655	0.75349	5.28861
1.94	0.58802	4.22420	1.63935	1.18711	0.74884	5.33808
1.95	0.58618	4.26958	1.64729	1.19765	0.74420	5.38782
1.96	0.58437	4.31520	1.65527	1.20816	0.73954	5.43782
1.97	0.58258	4.36105	1.66328	1.21865	0.73488	5.48808
1.98	0.58082	4.40713	1.67132	1.22912	0.73021	5.53860
1.99	0.57907	4.45345	1.67939	1.23957	0.72555	5.58939
2.00	0.57735	4.50000	1.68750	1.25000	0.72087	5.64044
2.01	0.57565	4.54678	1.69564	1.26041	0.71620	5.69175
2.02	0.57397	4.59380	1.70382	1.27079	0.71153	5.74333
2.03	0.57231	4.64105	1.71203	1.28116	0.70685	5.79517
2.04	0.57068	4.68853	1.72027	1.29150	0.70218	5.84727
2.05	0.56906	4.73625	1.72855	1.30183	0.69751	5.89963
2.06	0.56747	4.78420	1.73686	1.31214	0.69284	5.95226
2.07	0.56589	4.83238	1.74521	1.32242	0.68817	6.00514
2.08	0.56433	4.88080	1.75359	1.33269	0.68351	6.05829
2.09	0.56280	4.92945	1.76200	1.34294	0.67885	6.11170
2.10	0.56128	4.97833	1.77045	1.35317	0.67420	6.16537
2.11	0.55978	5.02745	1.77893	1.36339	0.66956	6.21931
2.12	0.55829	5.07680	1.78745	1.37358	0.66492	6.27351
2.13	0.55683	5.12638	1.79601	1.38376	0.66029	6.32796
2.14	0.55538	5.17620	1.80459	1.39393	0.65567	6.38268
2.15	0.55395	5.22625	1.81322	1.40407	0.65105	6.43766
2.16	0.55254	5.27653	1.82188	1.41420	0.64645	6.49290
2.17	0.55115	5.32705	1.83057	1.42431	0.64185	6.54841
2.18	0.54977	5.37780	1.83930	1.43440	0.63727	6.60417
2.19	0.54840	5.42878	1.84806	1.44448	0.63270	6.66019

M_1	M_2	p_2/p_1	T_2/T_1	$\Delta V/a_1$	p_{t2}/p_{t1}	p_{t2}/p_1
2.20	0.54706	5.48000	1.85686	1.45455	0.62814	6.71648
2.21	0.54572	5.53145	1.86569	1.46459	0.62359	6.77303
2.22	0.54441	5.58313	1.87456	1.47462	0.61905	6.82983
2.23	0.54311	5.63505	1.88347	1.48464	0.61453	6.88690
2.24	0.54182	5.68720	1.89241	1.49464	0.61002	6.94423
2.25	0.54055	5.73958	1.90138	1.50463	0.60553	7.00182
2.26	0.53930	5.79220	1.91040	1.51460	0.60105	7.05967
2.27	0.53805	5.84505	1.91944	1.52456	0.59659	7.11778
2.28	0.53683	5.89813	1.92853	1.53450	0.59214	7.17616
2.29	0.53561	5.95145	1.93765	1.54443	0.58771	7.23479
2.30	0.53441	6.00500	1.94680	1.55435	0.58329	7.29368
2.31	0.53322	6.05878	1.95599	1.56425	0.57890	7.35283
2.32	0.53205	6.11280	1.96522	1.57414	0.57452	7.41225
2.33	0.53089	6.16705	1.97448	1.58401	0.57015	7.47192
2.34	0.52974	6.22153	1.98378	1.59387	0.56581	7.53185
2.35	0.52861	6.27625	1.99311	1.60372	0.56148	7.59205
2.36	0.52749	6.33120	2.00249	1.61356	0.55718	7.65250
2.37	0.52638	6.38638	2.01189	1.62338	0.55289	7.71321
2.38	0.52528	6.44180	2.02134	1.63319	0.54862	7.77419
2.39	0.52419	6.49745	2.03082	1.64299	0.54437	7.83542
2.40	0.52312	6.55333	2.04033	1.65278	0.54014	7.89691
2.41	0.52206	6.60945	2.04988	1.66255	0.53594	7.95867
2.42	0.52100	6.66580	2.05947	1.67231	0.53175	8.02068
2.43	0.51996	6.72238	2.06910	1.68206	0.52758	8.08295
2.44	0.51894	6.77920	2.07876	1.69180	0.52344	8.14549
2.45	0.51792	6.83625	2.08846	1.70153	0.51931	8.20828
2.46	0.51691	6.89353	2.09819	1.71125	0.51521	8.27133
2.47	0.51592	6.95105	2.10797	1.72095	0.51113	8.33464
2.48	0.51493	7.00880	2.11777	1.73065	0.50707	8.39821
2.49	0.51395	7.06678	2.12762	1.74033	0.50303	8.46205
2.50	0.51299	7.12500	2.13750	1.75000	0.49901	8.52614
2.51	0.51203	7.18345	2.14742	1.75966	0.49502	8.59049
2.52	0.51109	7.24213	2.15737	1.76931	0.49105	8.65510
2.53	0.51015	7.30105	2.16737	1.77895	0.48711	8.71996
2.54	0.50923	7.36020	2.17739	1.78858	0.48318	8.78509
2.55	0.50831	7.41958	2.18746	1.79820	0.47928	8.85048
2.56	0.50741	7.47920	2.19756	1.80781	0.47540	8.91613
2.57	0.50651	7.53905	2.20770	1.81741	0.47155	8.98203
2.58	0.50562	7.59913	2.21788	1.82700	0.46772	9.04820
2.59	0.50474	7.65945	2.22809	1.83658	0.46391	9.11462

M_1	M_2	p_2/p_1	T_2/T_1	$\Delta V/a_1$	p_{t2}/p_{t1}	p_{t2}/p_1
2.60	0.50387	7.72000	2.23834	1.84615	0.46012	9.18131
2.61	0.50301	7.78078	2.24863	1.85572	0.45636	9.24825
2.62	0.50216	7.84180	2.25896	1.86527	0.45263	9.31545
2.63	0.50131	7.90305	2.26932	1.87481	0.44891	9.38291
2.64	0.50048	7.96453	2.27972	1.88434	0.44522	9.45064
2.65	0.49965	8.02625	2.29015	1.89387	0.44156	9.51862
2.66	0.49883	8.08820	2.30063	1.90338	0.43792	9.58685
2.67	0.49802	8.15038	2.31114	1.91289	0.43430	9.65535
2.68	0.49722	8.21280	2.32168	1.92239	0.43070	9.72411
2.69	0.49642	8.27545	2.33227	1.93188	0.42714	9.79312
2.70	0.49563	8.33833	2.34289	1.94136	0.42359	9.86240
2.71	0.49485	8.40145	2.35355	1.95083	0.42007	9.93193
2.72	0.49408	8.46480	2.36425	1.96029	0.41657	10.00173
2.73	0.49332	8.52838	2.37498	1.96975	0.41310	10.07178
2.74	0.49256	8.59220	2.38576	1.97920	0.40965	10.14209
2.75	0.49181	8.65625	2.39657	1.98864	0.40623	10.21266
2.76	0.49107	8.72053	2.40741	1.99807	0.40283	10.28349
2.77	0.49033	8.78505	2.41830	2.00749	0.39945	10.35457
2.78	0.48960	8.84980	2.42922	2.01691	0.39610	10.42592
2.79	0.48888	8.91478	2.44018	2.02631	0.39277	10.49752
2.80	0.48817	8.98000	2.45117	2.03571	0.38946	10.56939
2.81	0.48746	9.04545	2.46221	2.04511	0.38618	10.64151
2.82	0.48676	9.11113	2.47328	2.05449	0.38293	10.71389
2.83	0.48606	9.17705	2.48439	2.06387	0.37969	10.78653
2.84	0.48538	9.24320	2.49554	2.07324	0.37649	10.85943
2.85	0.48469	9.30958	2.50672	2.08260	0.37330	10.93258
2.86	0.48402	9.37620	2.51794	2.09196	0.37014	11.00600
2.87	0.48335	9.44305	2.52920	2.10131	0.36700	11.07967
2.88	0.48269	9.51013	2.54050	2.11065	0.36389	11.15361
2.89	0.48203	9.57745	2.55183	2.11998	0.36080	11.22780
2.90	0.48138	9.64500	2.56321	2.12931	0.35773	11.30225
2.91	0.48073	9.71278	2.57462	2.13863	0.35469	11.37695
2.92	0.48010	9.78080	2.58607	2.14795	0.35167	11.45192
2.93	0.47946	9.84905	2.59755	2.15725	0.34867	11.52715
2.94	0.47884	9.91753	2.60908	2.16655	0.34570	11.60263
2.95	0.47821	9.98625	2.62064	2.17585	0.34275	11.67837
2.96	0.47760	10.05520	2.63224	2.18514	0.33982	11.75438
2.97	0.47699	10.12438	2.64387	2.19442	0.33692	11.83064
2.98	0.47638	10.19380	2.65555	2.20369	0.33404	11.90715
2.99	0.47578	10.26345	2.66726	2.21296	0.33118	11.98393

M_1	M_2	p_2/p_1	T_2/T_1	$\Delta V/a_1$	p_{t2}/p_{t1}	p_{t2}/p_1
3.00	0.47519	10.33333	2.67901	2.22222	0.32834	12.06096
3.01	0.47460	10.40345	2.69080	2.23148	0.32553	12.13826
3.02	0.47402	10.47380	2.70263	2.24073	0.32274	12.21581
3.03	0.47344	10.54438	2.71449	2.24997	0.31997	12.29362
3.04	0.47287	10.61520	2.72639	2.25921	0.31723	12.37169
3.05	0.47230	10.68625	2.73833	2.26844	0.31450	12.45002
3.06	0.47174	10.75753	2.75031	2.27767	0.31180	12.52860
3.07	0.47118	10.82905	2.76233	2.28689	0.30912	12.60745
3.08	0.47063	10.90080	2.77438	2.29610	0.30646	12.68655
3.09	0.47008	10.97278	2.78647	2.30531	0.30383	12.76591
3.10	0.46953	11.04500	2.79860	2.31452	0.30121	12.84553
3.11	0.46899	11.11745	2.81077	2.32371	0.29862	12.92540
3.12	0.46846	11.19013	2.82298	2.33291	0.29605	13.00554
3.13	0.46793	11.26305	2.83522	2.34209	0.29350	13.08593
3.14	0.46741	11.33620	2.84750	2.35127	0.29097	13.16659
3.15	0.46689	11.40958	2.85982	2.36045	0.28846	13.24750
3.16	0.46637	11.48320	2.87218	2.36962	0.28597	13.32866
3.17	0.46586	11.55705	2.88458	2.37879	0.28350	13.41009
3.18	0.46535	11.63113	2.89701	2.38795	0.28106	13.49178
3.19	0.46485	11.70545	2.90948	2.39710	0.27863	13.57372
3.20	0.46435	11.78000	2.92199	2.40625	0.27623	13.65592
3.21	0.46385	11.85478	2.93454	2.41539	0.27384	13.73838
3.22	0.46336	11.92980	2.94713	2.42453	0.27148	13.82110
3.23	0.46288	12.00505	2.95975	2.43367	0.26914	13.90407
3.24	0.46240	12.08053	2.97241	2.44280	0.26681	13.98731
3.25	0.46192	12.15625	2.98511	2.45192	0.26451	14.07080
3.26	0.46144	12.23220	2.99785	2.46104	0.26222	14.15455
3.27	0.46097	12.30838	3.01063	2.47016	0.25996	14.23856
3.28	0.46051	12.38480	3.02345	2.47927	0.25771	14.32283
3.29	0.46004	12.46145	3.03630	2.48837	0.25548	14.40735
3.30	0.45959	12.53833	3.04919	2.49747	0.25328	14.49214
3.31	0.45913	12.61545	3.06212	2.50657	0.25109	14.57718
3.32	0.45868	12.69280	3.07509	2.51566	0.24892	14.66248
3.33	0.45823	12.77038	3.08809	2.52475	0.24677	14.74804
3.34	0.45779	12.84820	3.10114	2.53383	0.24463	14.83385
3.35	0.45735	12.92625	3.11422	2.54291	0.24252	14.91992
3.36	0.45691	13.00453	3.12734	2.55198	0.24043	15.00626
3.37	0.45648	13.08305	3.14050	2.56105	0.23835	15.09285
3.38	0.45605	13.16180	3.15370	2.57012	0.23629	15.17969
3.39	0.45562	13.24078	3.16693	2.57918	0.23425	15.26680

M_1	M_2	p_2/p_1	T_2/T_1	$\Delta V/a_1$	p_{t2}/p_{t1}	p_{t2}/p_1
3.40	0.45520	13.32000	3.18021	2.58824	0.23223	15.35417
3.41	0.45478	13.39945	3.19352	2.59729	0.23022	15.44179
3.42	0.45436	13.47913	3.20687	2.60634	0.22823	15.52967
3.43	0.45395	13.55905	3.22026	2.61538	0.22626	15.61781
3.44	0.45354	13.63920	3.23369	2.62442	0.22431	15.70620
3.45	0.45314	13.71958	3.24715	2.63345	0.22237	15.79486
3.46	0.45273	13.80020	3.26065	2.64249	0.22045	15.88377
3.47	0.45233	13.88105	3.27420	2.65151	0.21855	15.97294
3.48	0.45194	13.96213	3.28778	2.66054	0.21667	16.06237
3.49	0.45154	14.04345	3.30139	2.66956	0.21480	16.15206
3.50	0.45115	14.12500	3.31505	2.67857	0.21295	16.24200
3.51	0.45077	14.20678	3.32875	2.68758	0.21111	16.33220
3.52	0.45038	14.28880	3.34248	2.69659	0.20929	16.42266
3.53	0.45000	14.37105	3.35625	2.70559	0.20749	16.51338
3.54	0.44962	14.45353	3.37006	2.71460	0.20570	16.60436
3.55	0.44925	14.53625	3.38391	2.72359	0.20393	16.69559
3.56	0.44887	14.61920	3.39780	2.73258	0.20218	16.78709
3.57	0.44850	14.70238	3.41172	2.74157	0.20044	16.87884
3.58	0.44814	14.78580	3.42569	2.75056	0.19871	16.97085
3.59	0.44777	14.86945	3.43969	2.75954	0.19701	17.06311
3.60	0.44741	14.95333	3.45373	2.76852	0.19531	17.15564
3.61	0.44705	15.03745	3.46781	2.77749	0.19363	17.24842
3.62	0.44670	15.12180	3.48192	2.78646	0.19197	17.34146
3.63	0.44635	15.20638	3.49608	2.79543	0.19032	17.43476
3.64	0.44600	15.29120	3.51027	2.80440	0.18869	17.52831
3.65	0.44565	15.37625	3.52451	2.81336	0.18707	17.62213
3.66	0.44530	15.46153	3.53878	2.82231	0.18547	17.71620
3.67	0.44496	15.54705	3.55309	2.83127	0.18388	17.81053
3.68	0.44462	15.63280	3.56743	2.84022	0.18230	17.90512
3.69	0.44428	15.71878	3.58182	2.84916	0.18074	17.99996
3.70	0.44395	15.80500	3.59624	2.85811	0.17919	18.09507
3.71	0.44362	15.89145	3.61071	2.86705	0.17766	18.19043
3.72	0.44329	15.97813	3.62521	2.87599	0.17614	18.28605
3.73	0.44296	16.06505	3.63975	2.88492	0.17464	18.38192
3.74	0.44263	16.15220	3.65433	2.89385	0.17314	18.47806
3.75	0.44231	16.23958	3.66894	2.90278	0.17166	18.57445
3.76	0.44199	16.32720	3.68360	2.91170	0.17020	18.67110
3.77	0.44167	16.41505	3.69829	2.92062	0.16875	18.76801
3.78	0.44136	16.50313	3.71302	2.92954	0.16731	18.86518
3.79	0.44104	16.59145	3.72779	2.93846	0.16588	18.96260

M_1	M_2	p_2/p_1	T_2/T_1	$\Delta V/a_1$	p_{t2}/p_{t1}	p_{t2}/p_1
3.80	0.44073	16.68000	3.74260	2.94737	0.16447	19.06029
3.81	0.44042	16.76878	3.75745	2.95628	0.16307	19.15823
3.82	0.44012	16.85780	3.77234	2.96518	0.16168	19.25642
3.83	0.43981	16.94705	3.78726	2.97409	0.16031	19.35488
3.84	0.43951	17.03653	3.80223	2.98299	0.15895	19.45359
3.85	0.43921	17.12625	3.81723	2.99188	0.15760	19.55257
3.86	0.43891	17.21620	3.83227	3.00078	0.15626	19.65180
3.87	0.43862	17.30638	3.84735	3.00967	0.15493	19.75128
3.88	0.43832	17.39680	3.86246	3.01856	0.15362	19.85103
3.89	0.43803	17.48745	3.87762	3.02744	0.15232	19.95103
3.90	0.43774	17.57833	3.89281	3.03632	0.15103	20.05129
3.91	0.43746	17.66945	3.90805	3.04520	0.14975	20.15181
3.92	0.43717	17.76080	3.92332	3.05408	0.14848	20.25259
3.93	0.43689	17.85238	3.93863	3.06296	0.14723	20.35362
3.94	0.43661	17.94420	3.95398	3.07183	0.14598	20.45491
3.95	0.43633	18.03625	3.96936	3.08070	0.14475	20.55646
3.96	0.43605	18.12853	3.98479	3.08956	0.14353	20.65827
3.97	0.43577	18.22105	4.00025	3.09843	0.14232	20.76034
3.98	0.43550	18.31380	4.01575	3.10729	0.14112	20.86266
3.99	0.43523	18.40678	4.03130	3.11614	0.13993	20.96524
4.00	0.43496	18.50000	4.04687	3.12500	0.13876	21.06808
4.10	0.43236	19.44500	4.20479	3.21341	0.12756	22.11065
4.20	0.42994	20.41333	4.36657	3.30159	0.11733	23.17899
4.30	0.42767	21.40500	4.53221	3.38953	0.10800	24.27311
4.40	0.42554	22.42000	4.70171	3.47727	0.09948	25.39300
4.50	0.42355	23.45833	4.87509	3.56481	0.09170	26.53867
4.60	0.42168	24.52000	5.05233	3.65217	0.08459	27.71010
4.70	0.41992	25.60500	5.23343	3.73936	0.07809	28.90729
4.80	0.41826	26.71333	5.41842	3.82639	0.07214	30.13026
4.90	0.41670	27.84500	5.60727	3.91327	0.06670	31.37898
5.00	0.41523	29.00000	5.80000	4.00000	0.06172	32.65347
5.10	0.41384	30.17833	5.99660	4.08660	0.05715	33.95373
5.20	0.41252	31.38000	6.19709	4.17308	0.05297	35.27974
5.30	0.41127	32.60500	6.40144	4.25943	0.04913	36.63152
5.40	0.41009	33.85333	6.60968	4.34568	0.04560	38.00906
5.50	0.40897	35.12500	6.82180	4.43182	0.04236	39.41235
5.60	0.40791	36.42000	7.03779	4.51786	0.03938	40.84141
5.70	0.40690	37.73833	7.25767	4.60380	0.03664	42.29622
5.80	0.40594	39.08000	7.48143	4.68966	0.03412	43.77679
5.90	0.40503	40.44500	7.70907	4.77542	0.03179	45.28312

M_1	M_2	p_2/p_1	T_2/T_1	$\Delta V/a_1$	p_{t2}/p_{t1}	p_2/p_1
6.00	0.40416	41.83333	7.94059	4.86111	0.02965	46.81521
6.10	0.40333	43.24500	8.17599	4.94672	0.02767	48.37305
6.20	0.40254	44.68000	8.41528	5.03226	0.02584	49.95665
6.30	0.40179	46.13833	8.65845	5.11772	0.02416	51.56600
6.40	0.40107	47.62000	8.90550	5.20312	0.02259	53.20111
6.50	0.40038	49.12500	9.15643	5.28846	0.02115	54.86198
6.60	0.39972	50.65333	9.41126	5.37374	0.01981	56.54860
6.70	0.39909	52.20500	9.66996	5.45896	0.01857	58.26097
6.80	0.39849	53.78000	9.93255	5.54412	0.01741	59.99910
6.90	0.39791	55.37833	10.19903	5.62923	0.01634	61.76299
7.00	0.39736	57.00000	10.46939	5.71429	0.01535	63.55263
7.50	0.39491	65.45833	11.87948	6.13889	0.01133	72.88713
8.00	0.39289	74.50000	13.38672	6.56250	0.00849	82.86547
8.50	0.39121	84.12500	14.99113	6.98529	0.00645	93.48763
9.00	0.38980	94.33333	16.69273	7.40741	0.00496	104.75360
9.50	0.38860	105.12500	18.49152	7.82895	0.00387	116.66339
10.00	0.38758	116.50000	20.38750	8.25000	0.00304	129.21697
∞	0.37796	∞	∞	∞	0.0	∞

*Fanno Flow
Parameters ($\gamma = 1.4$)*

M	T/T^*	p/p^*	p_t/p_t^*	V/V^*	fL_{\max}/D	S_{\max}/R
0.0	1.20000	∞	∞	0.0	∞	∞
0.01	1.19998	109.54342	57.87384	0.01095	7134.40454	4.05827
0.02	1.19990	54.77006	28.94213	0.02191	1778.44988	3.36530
0.03	1.19978	36.51155	19.30054	0.03286	787.08139	2.96013
0.04	1.19962	27.38175	14.48149	0.04381	440.35221	2.67287
0.05	1.19940	21.90343	11.59144	0.05476	280.02031	2.45027
0.06	1.19914	18.25085	9.66591	0.06570	193.03108	2.26861
0.07	1.19883	15.64155	8.29153	0.07664	140.65501	2.11523
0.08	1.19847	13.68431	7.26161	0.08758	106.71822	1.98260
0.09	1.19806	12.16177	6.46134	0.09851	83.49612	1.86584
0.10	1.19760	10.94351	5.82183	0.10944	66.92156	1.76161
0.11	1.19710	9.94656	5.29923	0.12035	54.68790	1.66756
0.12	1.19655	9.11559	4.86432	0.13126	45.40796	1.58193
0.13	1.19596	8.41230	4.49686	0.14217	38.20700	1.50338
0.14	1.19531	7.80932	4.18240	0.15306	32.51131	1.43089
0.15	1.19462	7.28659	3.91034	0.16395	27.93197	1.36363
0.16	1.19389	6.82907	3.67274	0.17482	24.19783	1.30094
0.17	1.19310	6.42525	3.46351	0.18569	21.11518	1.24228
0.18	1.19227	6.06618	3.27793	0.19654	18.54265	1.18721
0.19	1.19140	5.74480	3.11226	0.20739	16.37516	1.13535
0.20	1.19048	5.45545	2.96352	0.21822	14.53327	1.08638
0.21	1.18951	5.19355	2.82929	0.22904	12.95602	1.04003
0.22	1.18850	4.95537	2.70760	0.23984	11.59605	0.99606
0.23	1.18744	4.73781	2.59681	0.25063	10.41609	0.95428
0.24	1.18633	4.53829	2.49556	0.26141	9.38648	0.91451
0.25	1.18519	4.35465	2.40271	0.27217	8.48341	0.87660
0.26	1.18399	4.18505	2.31729	0.28291	7.68757	0.84040
0.27	1.18276	4.02795	2.23847	0.29364	6.98317	0.80579
0.28	1.18147	3.88199	2.16555	0.30435	6.35721	0.77268
0.29	1.18015	3.74602	2.09793	0.31504	5.79891	0.74095
0.30	1.17878	3.61906	2.03507	0.32572	5.29925	0.71053
0.31	1.17737	3.50022	1.97651	0.33637	4.85066	0.68133
0.32	1.17592	3.38874	1.92185	0.34701	4.44674	0.65329
0.33	1.17442	3.28396	1.87074	0.35762	4.08205	0.62634
0.34	1.17288	3.18529	1.82288	0.36822	3.75195	0.60042
0.35	1.17130	3.09219	1.77797	0.37879	3.45245	0.57547
0.36	1.16968	3.00422	1.73578	0.38935	3.18012	0.55146
0.37	1.16802	2.92094	1.69609	0.39988	2.93198	0.52832
0.38	1.16632	2.84200	1.65870	0.41039	2.70545	0.50603
0.39	1.16457	2.76706	1.62343	0.42087	2.49828	0.48454

M	T/T^*	p/p^*	p_t/p_t^*	V/V^*	fL_{\max}/D	S_{\max}/R
0.40	1.16279	2.69582	1.59014	0.43133	2.30849	0.46382
0.41	1.16097	2.62801	1.55867	0.44177	2.13436	0.44384
0.42	1.15911	2.56338	1.52890	0.45218	1.97437	0.42455
0.43	1.15721	2.50171	1.50072	0.46257	1.82715	0.40594
0.44	1.15527	2.44280	1.47401	0.47293	1.69152	0.38798
0.45	1.15329	2.38648	1.44867	0.48326	1.56643	0.37065
0.46	1.15128	2.33256	1.42463	0.49357	1.45091	0.35391
0.47	1.14923	2.28089	1.40180	0.50385	1.34413	0.33775
0.48	1.14714	2.23135	1.38010	0.51410	1.24534	0.32215
0.49	1.14502	2.18378	1.35947	0.52433	1.15385	0.30709
0.50	1.14286	2.13809	1.33984	0.53452	1.06906	0.29255
0.51	1.14066	2.09415	1.32117	0.54469	0.99041	0.27852
0.52	1.13843	2.05187	1.30339	0.55483	0.91742	0.26497
0.53	1.13617	2.01116	1.28645	0.56493	0.84962	0.25189
0.54	1.13387	1.97192	1.27032	0.57501	0.78663	0.23927
0.55	1.13154	1.93407	1.25495	0.58506	0.72805	0.22709
0.56	1.12918	1.89755	1.24029	0.59507	0.67357	0.21535
0.57	1.12678	1.86228	1.22633	0.60505	0.62287	0.20402
0.58	1.12435	1.82820	1.21301	0.61501	0.57568	0.19310
0.59	1.12189	1.79525	1.20031	0.62492	0.53174	0.18258
0.60	1.11940	1.76336	1.18820	0.63481	0.49082	0.17244
0.61	1.11688	1.73250	1.17665	0.64466	0.45271	0.16267
0.62	1.11433	1.70261	1.16565	0.65448	0.41720	0.15328
0.63	1.11175	1.67364	1.15515	0.66427	0.38412	0.14423
0.64	1.10914	1.64556	1.14515	0.67402	0.35330	0.13553
0.65	1.10650	1.61831	1.13562	0.68374	0.32459	0.12718
0.66	1.10383	1.59187	1.12654	0.69342	0.29785	0.11915
0.67	1.10114	1.56620	1.11789	0.70307	0.27295	0.11144
0.68	1.09842	1.54126	1.10965	0.71268	0.24978	0.10405
0.69	1.09567	1.51702	1.10182	0.72225	0.22820	0.09696
0.70	1.09290	1.49345	1.09437	0.73179	0.20814	0.09018
0.71	1.09010	1.47053	1.08729	0.74129	0.18948	0.08369
0.72	1.08727	1.44823	1.08057	0.75076	0.17215	0.07749
0.73	1.08442	1.42652	1.07419	0.76019	0.15605	0.07157
0.74	1.08155	1.40537	1.06814	0.76958	0.14112	0.06592
0.75	1.07865	1.38478	1.06242	0.77894	0.12728	0.06055
0.76	1.07573	1.36470	1.05700	0.78825	0.11447	0.05543
0.77	1.07279	1.34514	1.05188	0.79753	0.10262	0.05058
0.78	1.06982	1.32605	1.04705	0.80677	0.09167	0.04598
0.79	1.06684	1.30744	1.04251	0.81597	0.08158	0.04163

M	T/T^*	p/p^*	p_t/p_t^*	V/V^*	fL_{\max}/D	S_{\max}/R
0.80	1.06383	1.28928	1.03823	0.82514	0.07229	0.03752
0.81	1.06080	1.27155	1.03422	0.83426	0.06376	0.03365
0.82	1.05775	1.25423	1.03046	0.84335	0.05593	0.03001
0.83	1.05469	1.23732	1.02696	0.85239	0.04878	0.02660
0.84	1.05160	1.22080	1.02370	0.86140	0.04226	0.02342
0.85	1.04849	1.20466	1.02067	0.87037	0.03633	0.02046
0.86	1.04537	1.18888	1.01787	0.87929	0.03097	0.01771
0.87	1.04223	1.17344	1.01530	0.88818	0.02613	0.01518
0.88	1.03907	1.15835	1.01294	0.89703	0.02179	0.01286
0.89	1.03589	1.14358	1.01080	0.90583	0.01793	0.01074
0.90	1.03270	1.12913	1.00886	0.91460	0.01451	0.00882
0.91	1.02950	1.11499	1.00713	0.92332	0.01151	0.00711
0.92	1.02627	1.10114	1.00560	0.93201	0.00891	0.00558
0.93	1.02304	1.08758	1.00426	0.94065	0.00669	0.00425
0.94	1.01978	1.07430	1.00311	0.94925	0.00482	0.00310
0.95	1.01652	1.06129	1.00215	0.95781	0.00328	0.00214
0.96	1.01324	1.04854	1.00136	0.96633	0.00206	0.00136
0.97	1.00995	1.03604	1.00076	0.97481	0.00113	0.00076
0.98	1.00664	1.02379	1.00034	0.98325	0.00049	0.00034
0.99	1.00333	1.01178	1.00008	0.99165	0.00012	0.00008
1.00	1.00000	1.00000	1.00000	1.00000	0.00000	0.00000
1.01	0.99666	0.98844	1.00008	1.00831	0.00012	0.00008
1.02	0.99331	0.97711	1.00033	1.01658	0.00046	0.00033
1.03	0.98995	0.96598	1.00074	1.02481	0.00101	0.00074
1.04	0.98658	0.95507	1.00131	1.03300	0.00177	0.00130
1.05	0.98320	0.94435	1.00203	1.04114	0.00271	0.00203
1.06	0.97982	0.93383	1.00291	1.04925	0.00384	0.00290
1.07	0.97642	0.92349	1.00394	1.05731	0.00513	0.00393
1.08	0.97302	0.91335	1.00512	1.06533	0.00658	0.00511
1.09	0.96960	0.90338	1.00645	1.07331	0.00819	0.00643
1.10	0.96618	0.89359	1.00793	1.08124	0.00994	0.00789
1.11	0.96276	0.88397	1.00955	1.08913	0.01182	0.00950
1.12	0.95932	0.87451	1.01131	1.09699	0.01382	0.01125
1.13	0.95589	0.86522	1.01322	1.10479	0.01595	0.01313
1.14	0.95244	0.85608	1.01527	1.11256	0.01819	0.01515
1.15	0.94899	0.84710	1.01745	1.12029	0.02053	0.01730
1.16	0.94554	0.83826	1.01978	1.12797	0.02298	0.01959
1.17	0.94208	0.82958	1.02224	1.13561	0.02552	0.02200
1.18	0.93861	0.82103	1.02484	1.14321	0.02814	0.02454
1.19	0.93515	0.81263	1.02757	1.15077	0.03085	0.02720

M	T/T^*	p/p^*	p_t/p_t^*	V/V^*	fL_{\max}/D	S_{\max}/R
1.20	0.93168	0.80436	1.03044	1.15828	0.03364	0.02999
1.21	0.92820	0.79623	1.03344	1.16575	0.03650	0.03289
1.22	0.92473	0.78822	1.03657	1.17319	0.03943	0.03592
1.23	0.92125	0.78034	1.03983	1.18057	0.04242	0.03906
1.24	0.91777	0.77258	1.04323	1.18792	0.04547	0.04232
1.25	0.91429	0.76495	1.04675	1.19523	0.04858	0.04569
1.26	0.91080	0.75743	1.05041	1.20249	0.05174	0.04918
1.27	0.90732	0.75003	1.05419	1.20972	0.05495	0.05277
1.28	0.90383	0.74274	1.05810	1.21690	0.05820	0.05647
1.29	0.90035	0.73556	1.06214	1.22404	0.06150	0.06028
1.30	0.89686	0.72848	1.06630	1.23114	0.06483	0.06420
1.31	0.89338	0.72152	1.07060	1.23819	0.06820	0.06822
1.32	0.88989	0.71465	1.07502	1.24521	0.07161	0.07234
1.33	0.88641	0.70789	1.07957	1.25218	0.07504	0.07656
1.34	0.88292	0.70122	1.08424	1.25912	0.07850	0.08088
1.35	0.87944	0.69466	1.08904	1.26601	0.08199	0.08529
1.36	0.87596	0.68818	1.09396	1.27286	0.08550	0.08981
1.37	0.87249	0.68180	1.09902	1.27968	0.08904	0.09441
1.38	0.86901	0.67551	1.10419	1.28645	0.09259	0.09911
1.39	0.86554	0.66931	1.10950	1.29318	0.09615	0.10391
1.40	0.86207	0.66320	1.11493	1.29987	0.09974	0.10879
1.41	0.85860	0.65717	1.12048	1.30652	0.10334	0.11376
1.42	0.85514	0.65122	1.12616	1.31313	0.10694	0.11882
1.43	0.85168	0.64536	1.13197	1.31970	0.11056	0.12396
1.44	0.84822	0.63958	1.13790	1.32623	0.11419	0.12919
1.45	0.84477	0.63387	1.14396	1.33272	0.11782	0.13450
1.46	0.84133	0.62825	1.15015	1.33917	0.12146	0.13989
1.47	0.83788	0.62269	1.15646	1.34558	0.12511	0.14537
1.48	0.83445	0.61722	1.16290	1.35195	0.12875	0.15092
1.49	0.83101	0.61181	1.16947	1.35828	0.13240	0.15655
1.50	0.82759	0.60648	1.17617	1.36458	0.13605	0.16226
1.51	0.82416	0.60122	1.18299	1.37083	0.13970	0.16805
1.52	0.82075	0.59602	1.18994	1.37705	0.14335	0.17391
1.53	0.81734	0.59089	1.19702	1.38322	0.14699	0.17984
1.54	0.81393	0.58583	1.20423	1.38936	0.15063	0.18584
1.55	0.81054	0.58084	1.21157	1.39546	0.15427	0.19192
1.56	0.80715	0.57591	1.21904	1.40152	0.15790	0.19807
1.57	0.80376	0.57104	1.22664	1.40755	0.16152	0.20428
1.58	0.80038	0.56623	1.23438	1.41353	0.16514	0.21057
1.59	0.79701	0.56148	1.24224	1.41948	0.16875	0.21692

M	T/T^*	p/p^*	p_t/P_t^*	V/V^*	fL_{\max}/D	S_{\max}/R
1.60	0.79365	0.55679	1.25023	1.42539	0.17236	0.22333
1.61	0.79030	0.55216	1.25836	1.43127	0.17595	0.22981
1.62	0.78695	0.54759	1.26663	1.43710	0.17954	0.23636
1.63	0.78361	0.54308	1.27502	1.44290	0.18311	0.24296
1.64	0.78027	0.53862	1.28355	1.44866	0.18667	0.24963
1.65	0.77695	0.53421	1.29222	1.45439	0.19023	0.25636
1.66	0.77363	0.52986	1.30102	1.46008	0.19377	0.26315
1.67	0.77033	0.52556	1.30996	1.46573	0.19729	0.27000
1.68	0.76703	0.52131	1.31904	1.47135	0.20081	0.27690
1.69	0.76374	0.51711	1.32825	1.47693	0.20431	0.28386
1.70	0.76046	0.51297	1.33761	1.48247	0.20780	0.29088
1.71	0.75718	0.50887	1.34710	1.48798	0.21128	0.29795
1.72	0.75392	0.50482	1.35674	1.49345	0.21474	0.30508
1.73	0.75067	0.50082	1.36651	1.49889	0.21819	0.31226
1.74	0.74742	0.49686	1.37643	1.50429	0.22162	0.31949
1.75	0.74419	0.49295	1.38649	1.50966	0.22504	0.32678
1.76	0.74096	0.48909	1.39670	1.51499	0.22844	0.33411
1.77	0.73774	0.48527	1.40705	1.52029	0.23182	0.34149
1.78	0.73454	0.48149	1.41755	1.52555	0.23519	0.34893
1.79	0.73134	0.47776	1.42819	1.53078	0.23855	0.35641
1.80	0.72816	0.47407	1.43898	1.53598	0.24189	0.36394
1.81	0.72498	0.47042	1.44992	1.54114	0.24521	0.37151
1.82	0.72181	0.46681	1.46101	1.54626	0.24851	0.37913
1.83	0.71866	0.46324	1.47225	1.55136	0.25180	0.38680
1.84	0.71551	0.45972	1.48365	1.55642	0.25507	0.39450
1.85	0.71238	0.45623	1.49519	1.56145	0.25832	0.40226
1.86	0.70925	0.45278	1.50689	1.56644	0.26156	0.41005
1.87	0.70614	0.44937	1.51875	1.57140	0.26478	0.41789
1.88	0.70304	0.44600	1.53076	1.57633	0.26798	0.42576
1.89	0.69995	0.44266	1.54293	1.58123	0.27116	0.43368
1.90	0.69686	0.43936	1.55526	1.58609	0.27433	0.44164
1.91	0.69379	0.43610	1.56774	1.59092	0.27748	0.44964
1.92	0.69073	0.43287	1.58039	1.59572	0.28061	0.45767
1.93	0.68769	0.42967	1.59320	1.60049	0.28372	0.46574
1.94	0.68465	0.42651	1.60617	1.60523	0.28681	0.47385
1.95	0.68162	0.42339	1.61931	1.60993	0.28989	0.48200
1.96	0.67861	0.42029	1.63261	1.61460	0.29295	0.49018
1.97	0.67561	0.41724	1.64608	1.61925	0.29599	0.49840
1.98	0.67262	0.41421	1.65972	1.62386	0.29901	0.50665
1.99	0.66964	0.41121	1.67352	1.62844	0.30201	0.51493

M	T/T^*	p/p^*	p_t/p_t^*	V/V^*	fL_{\max}/D	S_{\max}/R
2.00	0.66667	0.40825	1.68750	1.63299	0.30500	0.52325
2.01	0.66371	0.40532	1.70165	1.63751	0.30796	0.53160
2.02	0.66076	0.40241	1.71597	1.64201	0.31091	0.53998
2.03	0.65783	0.39954	1.73047	1.64647	0.31384	0.54839
2.04	0.65491	0.39670	1.74514	1.65090	0.31676	0.55683
2.05	0.65200	0.39388	1.75999	1.65530	0.31965	0.56531
2.06	0.64910	0.39110	1.77502	1.65967	0.32253	0.57381
2.07	0.64621	0.38834	1.79022	1.66402	0.32538	0.58234
2.08	0.64334	0.38562	1.80561	1.66833	0.32822	0.59090
2.09	0.64047	0.38292	1.82119	1.67262	0.33105	0.59949
2.10	0.63762	0.38024	1.83694	1.67687	0.33385	0.60810
2.11	0.63478	0.37760	1.85289	1.68110	0.33664	0.61674
2.12	0.63195	0.37498	1.86902	1.68530	0.33940	0.62541
2.13	0.62914	0.37239	1.88533	1.68947	0.34215	0.63411
2.14	0.62633	0.36982	1.90184	1.69362	0.34489	0.64282
2.15	0.62354	0.36728	1.91854	1.69774	0.34760	0.65157
2.16	0.62076	0.36476	1.93544	1.70183	0.35030	0.66033
2.17	0.61799	0.36227	1.95252	1.70589	0.35298	0.66912
2.18	0.61523	0.35980	1.96981	1.70992	0.35564	0.67794
2.19	0.61249	0.35736	1.98729	1.71393	0.35828	0.68677
2.20	0.60976	0.35494	2.00497	1.71791	0.36091	0.69563
2.21	0.60704	0.35255	2.02286	1.72187	0.36352	0.70451
2.22	0.60433	0.35017	2.04094	1.72579	0.36611	0.71341
2.23	0.60163	0.34782	2.05923	1.72970	0.36869	0.72233
2.24	0.59895	0.34550	2.07773	1.73357	0.37124	0.73128
2.25	0.59627	0.34319	2.09644	1.73742	0.37378	0.74024
2.26	0.59361	0.34091	2.11535	1.74125	0.37631	0.74922
2.27	0.59096	0.33865	2.13447	1.74504	0.37881	0.75822
2.28	0.58833	0.33641	2.15381	1.74882	0.38130	0.76724
2.29	0.58570	0.33420	2.17336	1.75257	0.38377	0.77628
2.30	0.58309	0.33200	2.19313	1.75629	0.38623	0.78533
2.31	0.58049	0.32983	2.21312	1.75999	0.38867	0.79440
2.32	0.57790	0.32767	2.23332	1.76366	0.39109	0.80349
2.33	0.57532	0.32554	2.25375	1.76731	0.39350	0.81260
2.34	0.57276	0.32342	2.27440	1.77093	0.39589	0.82172
2.35	0.57021	0.32133	2.29528	1.77453	0.39826	0.83085
2.36	0.56767	0.31925	2.31638	1.77811	0.40062	0.84001
2.37	0.56514	0.31720	2.33771	1.78166	0.40296	0.84917
2.38	0.56262	0.31516	2.35928	1.78519	0.40529	0.85835
2.39	0.56011	0.31314	2.38107	1.78869	0.40760	0.86755

M	T/T^*	p/p^*	p_t/p_t^*	V/V^*	fL_{\max}/D	S_{\max}/R
2.40	0.55762	0.31114	2.40310	1.79218	0.40989	0.87676
2.41	0.55514	0.30916	2.42537	1.79563	0.41217	0.88598
2.42	0.55267	0.30720	2.44787	1.79907	0.41443	0.89522
2.43	0.55021	0.30525	2.47061	1.80248	0.41668	0.90447
2.44	0.54777	0.30332	2.49360	1.80587	0.41891	0.91373
2.45	0.54533	0.30141	2.51683	1.80924	0.42112	0.92300
2.46	0.54291	0.29952	2.54031	1.81258	0.42332	0.93229
2.47	0.54050	0.29765	2.56403	1.81591	0.42551	0.94158
2.48	0.53810	0.29579	2.58801	1.81921	0.42768	0.95089
2.49	0.53571	0.29394	2.61224	1.82249	0.42984	0.96021
2.50	0.53333	0.29212	2.63672	1.82574	0.43198	0.96954
2.51	0.53097	0.29031	2.66146	1.82898	0.43410	0.97887
2.52	0.52862	0.28852	2.68645	1.83219	0.43621	0.98822
2.53	0.52627	0.28674	2.71171	1.83538	0.43831	0.99758
2.54	0.52394	0.28498	2.73723	1.83855	0.44039	1.00695
2.55	0.52163	0.28323	2.76301	1.84170	0.44246	1.01632
2.56	0.51932	0.28150	2.78906	1.84483	0.44451	1.02571
2.57	0.51702	0.27978	2.81538	1.84794	0.44655	1.03510
2.58	0.51474	0.27808	2.84197	1.85103	0.44858	1.04450
2.59	0.51247	0.27640	2.86884	1.85410	0.45059	1.05391
2.60	0.51020	0.27473	2.89598	1.85714	0.45259	1.06332
2.61	0.50795	0.27307	2.92339	1.86017	0.45457	1.07274
2.62	0.50571	0.27143	2.95109	1.86318	0.45654	1.08217
2.63	0.50349	0.26980	2.97907	1.86616	0.45850	1.09161
2.64	0.50127	0.26818	3.00733	1.86913	0.46044	1.10105
2.65	0.49906	0.26658	3.03588	1.87208	0.46237	1.11050
2.66	0.49687	0.26500	3.06472	1.87501	0.46429	1.11996
2.67	0.49469	0.26342	3.09385	1.87792	0.46619	1.12942
2.68	0.49251	0.26186	3.12327	1.88081	0.46808	1.13888
2.69	0.49035	0.26032	3.15299	1.88368	0.46996	1.14835
2.70	0.48820	0.25878	3.18301	1.88653	0.47182	1.15783
2.71	0.48606	0.25726	3.21333	1.88936	0.47367	1.16731
2.72	0.48393	0.25575	3.24395	1.89218	0.47551	1.17679
2.73	0.48182	0.25426	3.27488	1.89497	0.47733	1.18628
2.74	0.47971	0.25278	3.30611	1.89775	0.47915	1.19577
2.75	0.47761	0.25131	3.33766	1.90051	0.48095	1.20527
2.76	0.47553	0.24985	3.36952	1.90325	0.48273	1.21477
2.77	0.47345	0.24840	3.40169	1.90598	0.48451	1.22427
2.78	0.47139	0.24697	3.43418	1.90868	0.48627	1.23378
2.79	0.46933	0.24555	3.46699	1.91137	0.48803	1.24329

M	T/T^*	p/p^*	p_t/p_t^*	V/V^*	fL_{\max}/D	S_{\max}/R
2.80	0.46729	0.24414	3.50012	1.91404	0.48976	1.25280
2.81	0.46526	0.24274	3.53358	1.91669	0.49149	1.26231
2.82	0.46323	0.24135	3.56737	1.91933	0.49321	1.27183
2.83	0.46122	0.23998	3.60148	1.92195	0.49491	1.28135
2.84	0.45922	0.23861	3.63593	1.92455	0.49660	1.29087
2.85	0.45723	0.23726	3.67072	1.92714	0.49828	1.30039
2.86	0.45525	0.23592	3.70584	1.92970	0.49995	1.30991
2.87	0.45328	0.23459	3.74131	1.93225	0.50161	1.31943
2.88	0.45132	0.23326	3.77711	1.93479	0.50326	1.32896
2.89	0.44937	0.23195	3.81327	1.93731	0.50489	1.33849
2.90	0.44743	0.23066	3.84977	1.93981	0.50652	1.34801
2.91	0.44550	0.22937	3.88662	1.94230	0.50813	1.35754
2.92	0.44358	0.22809	3.92383	1.94477	0.50973	1.36707
2.93	0.44167	0.22682	3.96139	1.94722	0.51132	1.37660
2.94	0.43977	0.22556	3.99932	1.94966	0.51290	1.38612
2.95	0.43788	0.22431	4.03760	1.95208	0.51447	1.39565
2.96	0.43600	0.22307	4.07625	1.95449	0.51603	1.40518
2.97	0.43413	0.22185	4.11527	1.95688	0.51758	1.41471
2.98	0.43226	0.22063	4.15466	1.95925	0.51912	1.42423
2.99	0.43041	0.21942	4.19443	1.96162	0.52064	1.43376
3.00	0.42857	0.21822	4.23457	1.96396	0.52216	1.44328
3.01	0.42674	0.21703	4.27509	1.96629	0.52367	1.45280
3.02	0.42492	0.21585	4.31599	1.96861	0.52516	1.46233
3.03	0.42310	0.21467	4.35728	1.97091	0.52665	1.47185
3.04	0.42130	0.21351	4.39895	1.97319	0.52813	1.48137
3.05	0.41951	0.21236	4.44102	1.97547	0.52959	1.49088
3.06	0.41772	0.21121	4.48347	1.97772	0.53105	1.50040
3.07	0.41595	0.21008	4.52633	1.97997	0.53249	1.50991
3.08	0.41418	0.20895	4.56959	1.98219	0.53393	1.51942
3.09	0.41242	0.20783	4.61325	1.98441	0.53536	1.52893
3.10	0.41068	0.20672	4.65731	1.98661	0.53678	1.53844
3.11	0.40894	0.20562	4.70178	1.98879	0.53818	1.54794
3.12	0.40721	0.20453	4.74667	1.99097	0.53958	1.55744
3.13	0.40549	0.20344	4.79197	1.99313	0.54097	1.56694
3.14	0.40378	0.20237	4.83769	1.99527	0.54235	1.57644
3.15	0.40208	0.20130	4.88383	1.99740	0.54372	1.58593
3.16	0.40038	0.20024	4.93039	1.99952	0.54509	1.59542
3.17	0.39870	0.19919	4.97739	2.00162	0.54644	1.60490
3.18	0.39702	0.19814	5.02481	2.00372	0.54778	1.61439
3.19	0.39536	0.19711	5.07266	2.00579	0.54912	1.62387

M	T/T^*	p/p^*	p_t/p_t^*	V/V^*	fL_{\max}/D	S_{\max}/R
3.20	0.39370	0.19608	5.12096	2.00786	0.55044	1.63334
3.21	0.39205	0.19506	5.16969	2.00991	0.55176	1.64281
3.22	0.39041	0.19405	5.21887	2.01195	0.55307	1.65228
3.23	0.38878	0.19304	5.26849	2.01398	0.55437	1.66174
3.24	0.38716	0.19204	5.31857	2.01599	0.55566	1.67120
3.25	0.38554	0.19105	5.36909	2.01799	0.55694	1.68066
3.26	0.38394	0.19007	5.42008	2.01998	0.55822	1.69011
3.27	0.38234	0.18909	5.47152	2.02196	0.55948	1.69956
3.28	0.38075	0.18812	5.52343	2.02392	0.56074	1.70900
3.29	0.37917	0.18716	5.57580	2.02587	0.56199	1.71844
3.30	0.37760	0.18621	5.62865	2.02781	0.56323	1.72787
3.31	0.37603	0.18526	5.68196	2.02974	0.56446	1.73730
3.32	0.37448	0.18432	5.73576	2.03165	0.56569	1.74672
3.33	0.37293	0.18339	5.79003	2.03356	0.56691	1.75614
3.34	0.37139	0.18246	5.84479	2.03545	0.56812	1.76555
3.35	0.36986	0.18154	5.90004	2.03733	0.56932	1.77496
3.36	0.36833	0.18063	5.95577	2.03920	0.57051	1.78436
3.37	0.36682	0.17972	6.01201	2.04106	0.57170	1.79376
3.38	0.36531	0.17882	6.06873	2.04290	0.57287	1.80315
3.39	0.36381	0.17793	6.12596	2.04474	0.57404	1.81254
3.40	0.36232	0.17704	6.18370	2.04656	0.57521	1.82192
3.41	0.36083	0.17616	6.24194	2.04837	0.57636	1.83129
3.42	0.35936	0.17528	6.30070	2.05017	0.57751	1.84066
3.43	0.35789	0.17441	6.35997	2.05196	0.57865	1.85002
3.44	0.35643	0.17355	6.41976	2.05374	0.57978	1.85938
3.45	0.35498	0.17270	6.48007	2.05551	0.58091	1.86873
3.46	0.35353	0.17185	6.54092	2.05727	0.58203	1.87808
3.47	0.35209	0.17100	6.60229	2.05901	0.58314	1.88742
3.48	0.35066	0.17016	6.66419	2.06075	0.58424	1.89675
3.49	0.34924	0.16933	6.72664	2.06247	0.58534	1.90608
3.50	0.34783	0.16851	6.78962	2.06419	0.58643	1.91540
3.51	0.34642	0.16768	6.85315	2.06589	0.58751	1.92471
3.52	0.34502	0.16687	6.91723	2.06759	0.58859	1.93402
3.53	0.34362	0.16606	6.98186	2.06927	0.58966	1.94332
3.54	0.34224	0.16526	7.04705	2.07094	0.59072	1.95261
3.55	0.34086	0.16446	7.11281	2.07261	0.59178	1.96190
3.56	0.33949	0.16367	7.17912	2.07426	0.59282	1.97118
3.57	0.33813	0.16288	7.24601	2.07590	0.59387	1.98045
3.58	0.33677	0.16210	7.31346	2.07754	0.59490	1.98972
3.59	0.33542	0.16132	7.38150	2.07916	0.59593	1.99898

M	T/T^*	p/p^*	p_t/p_t^*	V/V^*	fL_{\max}/D	S_{\max}/R
3.60	0.33408	0.16055	7.45011	2.08077	0.59695	2.00823
3.61	0.33274	0.15979	7.51931	2.08238	0.59797	2.01747
3.62	0.33141	0.15903	7.58910	2.08397	0.59898	2.02671
3.63	0.33009	0.15827	7.65948	2.08556	0.59998	2.03594
3.64	0.32877	0.15752	7.73045	2.08713	0.60098	2.04517
3.65	0.32747	0.15678	7.80203	2.08870	0.60197	2.05438
3.66	0.32616	0.15604	7.87421	2.09026	0.60296	2.06359
3.67	0.32487	0.15531	7.94700	2.09180	0.60394	2.07279
3.68	0.32358	0.15458	8.02040	2.09334	0.60491	2.08199
3.69	0.32230	0.15385	8.09442	2.09487	0.60588	2.09118
3.70	0.32103	0.15313	8.16907	2.09639	0.60684	2.10035
3.71	0.31976	0.15242	8.24433	2.09790	0.60779	2.10953
3.72	0.31850	0.15171	8.32023	2.09941	0.60874	2.11869
3.73	0.31724	0.15100	8.39676	2.10090	0.60968	2.12785
3.74	0.31600	0.15030	8.47393	2.10238	0.61062	2.13699
3.75	0.31475	0.14961	8.55174	2.10386	0.61155	2.14613
3.76	0.31352	0.14892	8.63020	2.10533	0.61247	2.15527
3.77	0.31229	0.14823	8.70931	2.10679	0.61339	2.16439
3.78	0.31107	0.14755	8.78907	2.10824	0.61431	2.17351
3.79	0.30985	0.14687	8.86950	2.10968	0.61522	2.18262
3.80	0.30864	0.14620	8.95059	2.11111	0.61612	2.19172
3.81	0.30744	0.14553	9.03234	2.11254	0.61702	2.20081
3.82	0.30624	0.14487	9.11477	2.11395	0.61791	2.20990
3.83	0.30505	0.14421	9.19788	2.11536	0.61879	2.21897
3.84	0.30387	0.14355	9.28167	2.11676	0.61968	2.22804
3.85	0.30269	0.14290	9.36614	2.11815	0.62055	2.23710
3.86	0.30151	0.14225	9.45131	2.11954	0.62142	2.24615
3.87	0.30035	0.14161	9.53717	2.12091	0.62229	2.25520
3.88	0.29919	0.14097	9.62373	2.12228	0.62315	2.26423
3.89	0.29803	0.14034	9.71100	2.12364	0.62400	2.27326
3.90	0.29688	0.13971	9.79897	2.12499	0.62485	2.28228
3.91	0.29574	0.13908	9.88766	2.12634	0.62569	2.29129
3.92	0.29460	0.13846	9.97707	2.12767	0.62653	2.30029
3.93	0.29347	0.13784	10.06720	2.12900	0.62737	2.30928
3.94	0.29235	0.13723	10.15806	2.13032	0.62819	2.31827
3.95	0.29123	0.13662	10.24965	2.13163	0.62902	2.32724
3.96	0.29011	0.13602	10.34197	2.13294	0.62984	2.33621
3.97	0.28900	0.13541	10.43504	2.13424	0.63065	2.34517
3.98	0.28790	0.13482	10.52886	2.13553	0.63146	2.35412
3.99	0.28681	0.13422	10.62343	2.13681	0.63227	2.36306

M	T/T^*	p/p^*	p_t/P_t^*	V/V^*	fL_{\max}/D	S_{\max}/R
4.00	0.28571	0.13363	10.71875	2.13809	0.63306	2.37199
4.10	0.27510	0.12793	11.71465	2.15046	0.64080	2.46084
4.20	0.26502	0.12257	12.79164	2.16215	0.64810	2.54879
4.30	0.25543	0.11753	13.95490	2.17321	0.65499	2.63583
4.40	0.24631	0.11279	15.20987	2.18368	0.66149	2.72194
4.50	0.23762	0.10833	16.56219	2.19360	0.66763	2.80712
4.60	0.22936	0.10411	18.01779	2.20300	0.67345	2.89136
4.70	0.22148	0.10013	19.58283	2.21192	0.67895	2.97465
4.80	0.21398	0.09637	21.26371	2.22038	0.68417	3.05700
4.90	0.20683	0.09281	23.06712	2.22842	0.68911	3.13841
5.00	0.20000	0.08944	25.00000	2.23607	0.69330	3.21888
5.10	0.19349	0.08625	27.06957	2.24334	0.69826	3.29841
5.20	0.18727	0.08322	29.28333	2.25026	0.70249	3.37702
5.30	0.18132	0.08034	31.64905	2.25685	0.70652	3.45471
5.40	0.17564	0.07761	34.17481	2.26313	0.71035	3.53149
5.50	0.17021	0.07501	36.86896	2.26913	0.71400	3.60737
5.60	0.16502	0.07254	39.74018	2.27484	0.71748	3.68236
5.70	0.16004	0.07018	42.79743	2.28030	0.72080	3.75648
5.80	0.15528	0.06794	46.05000	2.28552	0.72397	3.82973
5.90	0.15072	0.06580	49.50747	2.29051	0.72699	3.90212
6.00	0.14634	0.06376	53.17978	2.29528	0.72988	3.97368
6.10	0.14215	0.06181	57.07718	2.29984	0.73264	4.04440
6.20	0.13812	0.05994	61.21023	2.30421	0.73528	4.11431
6.30	0.13426	0.05816	65.58987	2.30840	0.73780	4.18342
6.40	0.13055	0.05646	70.22736	2.31241	0.74022	4.25174
6.50	0.12698	0.05482	75.13431	2.31626	0.74254	4.31928
6.60	0.12356	0.05326	80.32271	2.31996	0.74477	4.38605
6.70	0.12026	0.05176	85.80487	2.32351	0.74690	4.45208
6.80	0.11710	0.05032	91.59351	2.32691	0.74895	4.51736
6.90	0.11405	0.04894	97.70169	2.33019	0.75091	4.58192
7.00	0.11111	0.04762	104.14286	2.33333	0.75280	4.64576
7.50	0.09796	0.04173	141.84148	2.34738	0.76121	4.95471
8.00	0.08696	0.03686	190.10937	2.35907	0.76819	5.24760
8.50	0.07767	0.03279	251.08617	2.36889	0.77404	5.52580
9.00	0.06977	0.02935	327.18930	2.37722	0.77899	5.79054
9.50	0.06299	0.02642	421.13137	2.38433	0.78320	6.04294
10.00	0.05714	0.02390	535.93750	2.39046	0.78683	6.28402
∞	0.0	0.0	∞	2.4495	0.82153	∞

*Rayleigh Flow
Parameters ($\gamma = 1.4$)*

M	T_t/T_t^*	T/T^*	p/p^*	p_t/p_t^*	V/V^*	S_{\max}/R
0.0	0.0	0.0	2.40000	1.26790	0.0	∞
0.01	0.00048	0.00058	2.39966	1.26779	0.00024	26.98422
0.02	0.00192	0.00230	2.39866	1.26752	0.00096	22.13471
0.03	0.00431	0.00517	2.39698	1.26708	0.00216	19.30065
0.04	0.00765	0.00917	2.39464	1.26646	0.00383	17.29274
0.05	0.01192	0.01430	2.39163	1.26567	0.00598	15.73828
0.06	0.01712	0.02053	2.38796	1.26470	0.00860	14.47123
0.07	0.02322	0.02784	2.38365	1.26356	0.01168	13.40303
0.08	0.03022	0.03621	2.37869	1.26226	0.01522	12.48081
0.09	0.03807	0.04562	2.37309	1.26078	0.01922	11.67046
0.10	0.04678	0.05602	2.36686	1.25915	0.02367	10.94870
0.11	0.05630	0.06739	2.36002	1.25735	0.02856	10.29890
0.12	0.06661	0.07970	2.35257	1.25539	0.03388	9.70879
0.13	0.07768	0.09290	2.34453	1.25329	0.03962	9.16904
0.14	0.08947	0.10695	2.33590	1.25103	0.04578	8.67240
0.15	0.10196	0.12181	2.32671	1.24863	0.05235	8.21311
0.16	0.11511	0.13743	2.31696	1.24608	0.05931	7.78653
0.17	0.12888	0.15377	2.30667	1.24340	0.06666	7.38886
0.18	0.14324	0.17078	2.29586	1.24059	0.07439	7.01694
0.19	0.15814	0.18841	2.28454	1.23765	0.08247	6.66813
0.20	0.17355	0.20661	2.27273	1.23460	0.09091	6.34018
0.21	0.18943	0.22533	2.26044	1.23142	0.09969	6.03118
0.22	0.20574	0.24452	2.24770	1.22814	0.10879	5.73946
0.23	0.22244	0.26413	2.23451	1.22475	0.11821	5.46359
0.24	0.23948	0.28411	2.22091	1.22126	0.12792	5.20232
0.25	0.25684	0.30440	2.20690	1.21767	0.13793	4.95454
0.26	0.27446	0.32496	2.19250	1.21400	0.14821	4.71926
0.27	0.29231	0.34573	2.17774	1.21025	0.15876	4.49561
0.28	0.31035	0.36667	2.16263	1.20642	0.16955	4.28281
0.29	0.32855	0.38774	2.14719	1.20251	0.18058	4.08016
0.30	0.34686	0.40887	2.13144	1.19855	0.19183	3.88703
0.31	0.36525	0.43004	2.11539	1.19452	0.20329	3.70283
0.32	0.38369	0.45119	2.09908	1.19045	0.21495	3.52706
0.33	0.40214	0.47228	2.08250	1.18632	0.22678	3.35922
0.34	0.42056	0.49327	2.06569	1.18215	0.23879	3.19888
0.35	0.43894	0.51413	2.04866	1.17795	0.25096	3.04565
0.36	0.45723	0.53482	2.03142	1.17371	0.26327	2.89915
0.37	0.47541	0.55529	2.01400	1.16945	0.27572	2.75904
0.38	0.49346	0.57553	1.99641	1.16517	0.28828	2.62500
0.39	0.51134	0.59549	1.97866	1.16088	0.30095	2.49673

M	T_t/T_t^*	T/T^*	p/p^*	p_t/p_t^*	V/V^*	S_{\max}/R
0.40	0.52903	0.61515	1.96078	1.15658	0.31373	2.37397
0.41	0.54651	0.63448	1.94278	1.15227	0.32658	2.25645
0.42	0.56376	0.65346	1.92468	1.14796	0.33951	2.14394
0.43	0.58076	0.67205	1.90649	1.14366	0.35251	2.03622
0.44	0.59748	0.69025	1.88822	1.13936	0.36556	1.93306
0.45	0.61393	0.70804	1.86989	1.13508	0.37865	1.83429
0.46	0.63007	0.72538	1.85151	1.13082	0.39178	1.73970
0.47	0.64589	0.74228	1.83310	1.12659	0.40493	1.64912
0.48	0.66139	0.75871	1.81466	1.12238	0.41810	1.56239
0.49	0.67655	0.77466	1.79622	1.11820	0.43127	1.47935
0.50	0.69136	0.79012	1.77778	1.11405	0.44444	1.39985
0.51	0.70581	0.80509	1.75935	1.10995	0.45761	1.32374
0.52	0.71990	0.81955	1.74095	1.10588	0.47075	1.25091
0.53	0.73361	0.83351	1.72258	1.10186	0.48387	1.18121
0.54	0.74695	0.84695	1.70425	1.09789	0.49696	1.11453
0.55	0.75991	0.85987	1.68599	1.09397	0.51001	1.05076
0.56	0.77249	0.87227	1.66778	1.09011	0.52302	0.98977
0.57	0.78468	0.88416	1.64964	1.08630	0.53597	0.93148
0.58	0.79648	0.89552	1.63159	1.08256	0.54887	0.87577
0.59	0.80789	0.90637	1.61362	1.07887	0.56170	0.82255
0.60	0.81892	0.91670	1.59574	1.07525	0.57447	0.77174
0.61	0.82957	0.92653	1.57797	1.07170	0.58716	0.72323
0.62	0.83983	0.93584	1.56031	1.06822	0.59978	0.67696
0.63	0.84970	0.94466	1.54275	1.06481	0.61232	0.63284
0.64	0.85920	0.95298	1.52532	1.06147	0.62477	0.59078
0.65	0.86833	0.96081	1.50801	1.05821	0.63713	0.55073
0.66	0.87708	0.96816	1.49083	1.05503	0.64941	0.51260
0.67	0.88547	0.97503	1.47379	1.05193	0.66158	0.47634
0.68	0.89350	0.98144	1.45688	1.04890	0.67366	0.44187
0.69	0.90118	0.98739	1.44011	1.04596	0.68564	0.40913
0.70	0.90850	0.99290	1.42349	1.04310	0.69751	0.37807
0.71	0.91548	0.99796	1.40701	1.04033	0.70928	0.34861
0.72	0.92212	1.00260	1.39069	1.03764	0.72093	0.32072
0.73	0.92843	1.00682	1.37452	1.03504	0.73248	0.29433
0.74	0.93442	1.01062	1.35851	1.03253	0.74392	0.26940
0.75	0.94009	1.01403	1.34266	1.03010	0.75524	0.24587
0.76	0.94546	1.01706	1.32696	1.02777	0.76645	0.22370
0.77	0.95052	1.01970	1.31143	1.02552	0.77755	0.20283
0.78	0.95528	1.02198	1.29606	1.02337	0.78853	0.18324
0.79	0.95975	1.02390	1.28086	1.02131	0.79939	0.16486

M	T_t/T_t^*	T/T^*	p/p^*	p_t/p_t^*	V/V^*	S_{\max}/R
0.80	0.96395	1.02548	1.26582	1.01934	0.81013	0.14767
0.81	0.96787	1.02672	1.25095	1.01747	0.82075	0.13162
0.82	0.97152	1.02763	1.23625	1.01569	0.83125	0.11668
0.83	0.97492	1.02823	1.22171	1.01400	0.84164	0.10280
0.84	0.97807	1.02853	1.20734	1.01241	0.85190	0.08995
0.85	0.98097	1.02854	1.19314	1.01091	0.86204	0.07810
0.86	0.98363	1.02826	1.17911	1.00951	0.87207	0.06722
0.87	0.98607	1.02771	1.16524	1.00820	0.88197	0.05727
0.88	0.98828	1.02689	1.15154	1.00699	0.89175	0.04822
0.89	0.99028	1.02583	1.13801	1.00587	0.90142	0.04004
0.90	0.99207	1.02452	1.12465	1.00486	0.91097	0.03270
0.91	0.99366	1.02297	1.11145	1.00393	0.92039	0.02618
0.92	0.99506	1.02120	1.09842	1.00311	0.92970	0.02044
0.93	0.99627	1.01922	1.08555	1.00238	0.93889	0.01547
0.94	0.99729	1.01702	1.07285	1.00175	0.94797	0.01124
0.95	0.99814	1.01463	1.06030	1.00122	0.95693	0.00771
0.96	0.99883	1.01205	1.04793	1.00078	0.96577	0.00488
0.97	0.99935	1.00929	1.03571	1.00044	0.97450	0.00271
0.98	0.99971	1.00636	1.02365	1.00019	0.98311	0.00119
0.99	0.99993	1.00326	1.01174	1.00005	0.99161	0.00029
1.00	1.00000	1.00000	1.00000	1.00000	1.00000	0.00000
1.01	0.99993	0.99659	0.98841	1.00005	1.00828	0.00029
1.02	0.99973	0.99304	0.97698	1.00019	1.01645	0.00114
1.03	0.99940	0.98936	0.96569	1.00044	1.02450	0.00254
1.04	0.99895	0.98554	0.95456	1.00078	1.03246	0.00447
1.05	0.99838	0.98161	0.94358	1.00122	1.04030	0.00690
1.06	0.99769	0.97755	0.93275	1.00175	1.04804	0.00983
1.07	0.99690	0.97339	0.92206	1.00238	1.05567	0.01324
1.08	0.99601	0.96913	0.91152	1.00311	1.06320	0.01711
1.09	0.99501	0.96477	0.90112	1.00394	1.07063	0.02143
1.10	0.99392	0.96031	0.89087	1.00486	1.07795	0.02618
1.11	0.99275	0.95577	0.88075	1.00588	1.08518	0.03135
1.12	0.99148	0.95115	0.87078	1.00699	1.09230	0.03692
1.13	0.99013	0.94645	0.86094	1.00821	1.09933	0.04288
1.14	0.98871	0.94169	0.85123	1.00952	1.10626	0.04922
1.15	0.98721	0.93685	0.84166	1.01093	1.11310	0.05593
1.16	0.98564	0.93196	0.83222	1.01243	1.11984	0.06298
1.17	0.98400	0.92701	0.82292	1.01403	1.12649	0.07038
1.18	0.98230	0.92200	0.81374	1.01573	1.13305	0.07812
1.19	0.98054	0.91695	0.80468	1.01752	1.13951	0.08617

<i>M</i>	T_t/T_t^*	T/T^*	p/p^*	p_t/p_t^*	V/V^*	S_{\max}/R
1.20	0.97872	0.91185	0.79576	1.01942	1.14589	0.09453
1.21	0.97684	0.90671	0.78695	1.02140	1.15218	0.10318
1.22	0.97492	0.90153	0.77827	1.02349	1.15838	0.11213
1.23	0.97294	0.89632	0.76971	1.02567	1.16449	0.12135
1.24	0.97092	0.89108	0.76127	1.02795	1.17052	0.13085
1.25	0.96886	0.88581	0.75294	1.03033	1.17647	0.14060
1.26	0.96675	0.88052	0.74473	1.03280	1.18233	0.15061
1.27	0.96461	0.87521	0.73663	1.03537	1.18812	0.16086
1.28	0.96243	0.86988	0.72865	1.03803	1.19382	0.17135
1.29	0.96022	0.86453	0.72078	1.04080	1.19945	0.18206
1.30	0.95798	0.85917	0.71301	1.04366	1.20499	0.19299
1.31	0.95571	0.85380	0.70536	1.04662	1.21046	0.20413
1.32	0.95341	0.84843	0.69780	1.04968	1.21595	0.21548
1.33	0.95108	0.84305	0.69036	1.05283	1.22117	0.22702
1.34	0.94873	0.83766	0.68301	1.05608	1.22642	0.23876
1.35	0.94637	0.83227	0.67577	1.05943	1.23159	0.25068
1.36	0.94398	0.82689	0.66863	1.06288	1.23669	0.26277
1.37	0.94157	0.82151	0.66158	1.06642	1.24173	0.27504
1.38	0.93914	0.81613	0.65464	1.07007	1.24669	0.28747
1.39	0.93671	0.81076	0.64778	1.07381	1.25158	0.30006
1.40	0.93425	0.80539	0.64103	1.07765	1.25641	0.31281
1.41	0.93179	0.80004	0.63436	1.08159	1.26117	0.32570
1.42	0.92931	0.79469	0.62779	1.08563	1.26587	0.33874
1.43	0.92683	0.78936	0.62130	1.08977	1.27050	0.35191
1.44	0.92434	0.78405	0.61491	1.09401	1.27507	0.36522
1.45	0.92184	0.77874	0.60860	1.09835	1.27957	0.37865
1.46	0.91933	0.77346	0.60237	1.10278	1.28402	0.39221
1.47	0.91682	0.76819	0.59623	1.10732	1.28840	0.40589
1.48	0.91431	0.76294	0.59018	1.11196	1.29273	0.41968
1.49	0.91179	0.75771	0.58421	1.11670	1.29700	0.43358
1.50	0.90928	0.75250	0.57831	1.12155	1.30120	0.44758
1.51	0.90676	0.74732	0.57250	1.12649	1.30536	0.46169
1.52	0.90424	0.74215	0.56676	1.13153	1.30945	0.47589
1.53	0.90172	0.73701	0.56111	1.13668	1.31350	0.49019
1.54	0.89920	0.73189	0.55552	1.14193	1.31748	0.50458
1.55	0.89669	0.72680	0.55002	1.14729	1.32142	0.51905
1.56	0.89418	0.72173	0.54458	1.15274	1.32530	0.53361
1.57	0.89168	0.71669	0.53922	1.15830	1.32913	0.54824
1.58	0.88917	0.71168	0.53393	1.16397	1.33291	0.56295
1.59	0.88668	0.70669	0.52871	1.16974	1.33663	0.57774

M	T_t/T_t^*	T/T^*	p/p^*	p_t/p_t^*	V/V^*	S_{\max}/R
1.60	0.88419	0.70174	0.52356	1.17561	1.34031	0.59259
1.61	0.88170	0.69680	0.51848	1.18159	1.34394	0.60752
1.62	0.87922	0.69190	0.51346	1.18768	1.34753	0.62250
1.63	0.87675	0.68703	0.50851	1.19387	1.35106	0.63755
1.64	0.87429	0.68219	0.50363	1.20017	1.35455	0.65265
1.65	0.87184	0.67738	0.49880	1.20657	1.35800	0.66781
1.66	0.86939	0.67259	0.49405	1.21309	1.36140	0.68303
1.67	0.86696	0.66784	0.48935	1.21971	1.36475	0.69829
1.68	0.86453	0.66312	0.48472	1.22644	1.36806	0.71360
1.69	0.86212	0.65843	0.48014	1.23328	1.37133	0.72896
1.70	0.85971	0.65377	0.47562	1.24024	1.37455	0.74436
1.71	0.85731	0.64914	0.47117	1.24730	1.37774	0.75981
1.72	0.85493	0.64455	0.46677	1.25447	1.38088	0.77529
1.73	0.85256	0.63999	0.46242	1.26175	1.38398	0.79081
1.74	0.85019	0.63545	0.45813	1.26915	1.38705	0.80636
1.75	0.84784	0.63095	0.45390	1.27666	1.39007	0.82195
1.76	0.84551	0.62649	0.44972	1.28428	1.39306	0.83757
1.77	0.84318	0.62205	0.44559	1.29202	1.39600	0.85322
1.78	0.84087	0.61765	0.44152	1.29987	1.39891	0.86889
1.79	0.83857	0.61328	0.43750	1.30784	1.40179	0.88459
1.80	0.83628	0.60894	0.43353	1.31592	1.40462	0.90031
1.81	0.83400	0.60464	0.42960	1.32413	1.40743	0.91606
1.82	0.83174	0.60036	0.42573	1.33244	1.41019	0.93183
1.83	0.82949	0.59612	0.42191	1.34088	1.41292	0.94761
1.84	0.82726	0.59191	0.41813	1.34943	1.41562	0.96342
1.85	0.82504	0.58774	0.41440	1.35811	1.41829	0.97924
1.86	0.82283	0.58359	0.41072	1.36690	1.42092	0.99507
1.87	0.82064	0.57948	0.40708	1.37582	1.42351	1.01092
1.88	0.81845	0.57540	0.40349	1.38486	1.42608	1.02678
1.89	0.81629	0.57136	0.39994	1.39402	1.42862	1.04265
1.90	0.81414	0.56734	0.39643	1.40330	1.43112	1.05853
1.91	0.81200	0.56336	0.39297	1.41271	1.43359	1.07441
1.92	0.80987	0.55941	0.38955	1.42224	1.43604	1.09031
1.93	0.80776	0.55549	0.38617	1.43190	1.43845	1.10621
1.94	0.80567	0.55160	0.38283	1.44168	1.44083	1.12211
1.95	0.80358	0.54774	0.37954	1.45159	1.44319	1.13802
1.96	0.80152	0.54392	0.37628	1.46164	1.44551	1.15393
1.97	0.79946	0.54012	0.37306	1.47180	1.44781	1.16984
1.98	0.79742	0.53636	0.36988	1.48210	1.45008	1.18575
1.99	0.79540	0.53263	0.36674	1.49253	1.45233	1.20167

M	T_t/T_t^*	T/T^*	p/p^*	p_t/p_t^*	V/V^*	S_{\max}/R
2.00	0.79339	0.52893	0.36364	1.50310	1.45455	1.21758
2.01	0.79139	0.52525	0.36057	1.51379	1.45674	1.23348
2.02	0.78941	0.52161	0.35754	1.52462	1.45890	1.24939
2.03	0.78744	0.51800	0.35454	1.53558	1.46104	1.26529
2.04	0.78549	0.51442	0.35158	1.54668	1.46315	1.28118
2.05	0.78355	0.51087	0.34866	1.55791	1.46524	1.29707
2.06	0.78162	0.50735	0.34577	1.56928	1.46731	1.31296
2.07	0.77971	0.50386	0.34291	1.58079	1.46935	1.32883
2.08	0.77782	0.50040	0.34009	1.59244	1.47136	1.34470
2.09	0.77593	0.49696	0.33730	1.60423	1.47336	1.36056
2.10	0.77406	0.49356	0.33454	1.61616	1.47533	1.37641
2.11	0.77221	0.49018	0.33182	1.62823	1.47727	1.39225
2.12	0.77037	0.48684	0.32912	1.64045	1.47920	1.40807
2.13	0.76854	0.48352	0.32646	1.65281	1.48110	1.42389
2.14	0.76673	0.48023	0.32382	1.66531	1.48298	1.43970
2.15	0.76493	0.47696	0.32122	1.67796	1.48484	1.45549
2.16	0.76314	0.47373	0.31865	1.69076	1.48668	1.47127
2.17	0.76137	0.47052	0.31610	1.70371	1.48850	1.48703
2.18	0.75961	0.46734	0.31359	1.71680	1.49029	1.50278
2.19	0.75787	0.46418	0.31110	1.73005	1.49207	1.51852
2.20	0.75613	0.46106	0.30864	1.74345	1.49383	1.53424
2.21	0.75442	0.45796	0.30621	1.75700	1.49556	1.54994
2.22	0.75271	0.45488	0.30381	1.77070	1.49728	1.56563
2.23	0.75102	0.45184	0.30143	1.78456	1.49898	1.58130
2.24	0.74934	0.44882	0.29908	1.79858	1.50066	1.59696
2.25	0.74768	0.44582	0.29675	1.81275	1.50232	1.61259
2.26	0.74602	0.44285	0.29446	1.82708	1.50396	1.62821
2.27	0.74438	0.43990	0.29218	1.84157	1.50558	1.64381
2.28	0.74276	0.43698	0.28993	1.85623	1.50719	1.65939
2.29	0.74114	0.43409	0.28771	1.87104	1.50878	1.67496
2.30	0.73954	0.43122	0.28551	1.88602	1.51035	1.69050
2.31	0.73795	0.42838	0.28333	1.90116	1.51190	1.70602
2.32	0.73638	0.42555	0.28118	1.91647	1.51344	1.72152
2.33	0.73482	0.42276	0.27905	1.93195	1.51496	1.73700
2.34	0.73326	0.41998	0.27695	1.94759	1.51646	1.75246
2.35	0.73173	0.41723	0.27487	1.96340	1.51795	1.76790
2.36	0.73020	0.41451	0.27281	1.97939	1.51942	1.78332
2.37	0.72868	0.41181	0.27077	1.99554	1.52088	1.79872
2.38	0.72718	0.40913	0.26875	2.01187	1.52232	1.81409
2.39	0.72569	0.40647	0.26676	2.02837	1.52374	1.82944

M	T_t/T_t^*	T/T^*	p/p^*	p_t/p_t^*	V/V^*	S_{\max}/R
2.40	0.72421	0.40384	0.26478	2.04505	1.52515	1.84477
2.41	0.72275	0.40122	0.26283	2.06191	1.52655	1.86008
2.42	0.72129	0.39864	0.26090	2.07895	1.52793	1.87536
2.43	0.71985	0.39607	0.25899	2.09616	1.52929	1.89062
2.44	0.71842	0.39352	0.25710	2.11356	1.53065	1.90585
2.45	0.71699	0.39100	0.25522	2.13114	1.53198	1.92106
2.46	0.71558	0.38850	0.25337	2.14891	1.53331	1.93625
2.47	0.71419	0.38602	0.25154	2.16685	1.53461	1.95141
2.48	0.71280	0.38356	0.24973	2.18499	1.53591	1.96655
2.49	0.71142	0.38112	0.24793	2.20332	1.53719	1.98167
2.50	0.71006	0.37870	0.24615	2.22183	1.53846	1.99676
2.51	0.70871	0.37630	0.24440	2.24054	1.53972	2.01182
2.52	0.70736	0.37392	0.24266	2.25944	1.54096	2.02686
2.53	0.70603	0.37157	0.24093	2.27853	1.54219	2.04187
2.54	0.70471	0.36923	0.23923	2.29782	1.54341	2.05686
2.55	0.70340	0.36691	0.23754	2.31730	1.54461	2.07183
2.56	0.70210	0.36461	0.23587	2.33699	1.54581	2.08676
2.57	0.70081	0.36233	0.23422	2.35687	1.54699	2.10167
2.58	0.69952	0.36007	0.23258	2.37696	1.54816	2.11656
2.59	0.69826	0.35783	0.23096	2.39725	1.54931	2.13142
2.60	0.69700	0.35561	0.22936	2.41774	1.55046	2.14625
2.61	0.69575	0.35341	0.22777	2.43844	1.55159	2.16106
2.62	0.69451	0.35122	0.22620	2.45935	1.55272	2.17584
2.63	0.69328	0.34906	0.22464	2.48047	1.55383	2.19059
2.64	0.69206	0.34691	0.22310	2.50179	1.55493	2.20532
2.65	0.69084	0.34478	0.22158	2.52334	1.55602	2.22002
2.66	0.68964	0.34266	0.22007	2.54509	1.55710	2.23470
2.67	0.68845	0.34057	0.21857	2.56706	1.55816	2.24934
2.68	0.68727	0.33849	0.21709	2.58925	1.55922	2.26396
2.69	0.68610	0.33643	0.21562	2.61166	1.56027	2.27856
2.70	0.68494	0.33439	0.21417	2.63429	1.56131	2.29312
2.71	0.68378	0.33236	0.21273	2.65714	1.56233	2.30766
2.72	0.68264	0.33035	0.21131	2.68021	1.56335	2.32217
2.73	0.68150	0.32836	0.20990	2.70351	1.56436	2.33666
2.74	0.68037	0.32638	0.20850	2.72704	1.56536	2.35111
2.75	0.67926	0.32442	0.20712	2.75080	1.56634	2.36554
2.76	0.67815	0.32248	0.20575	2.77478	1.56732	2.37995
2.77	0.67705	0.32055	0.20439	2.79900	1.56829	2.39432
2.78	0.67595	0.31864	0.20305	2.82346	1.56925	2.40867
2.79	0.67487	0.31674	0.20172	2.84815	1.57020	2.42299

<i>M</i>	T_t/T_t^*	T/T^*	p/p^*	p_t/p_t^*	V/V^*	S_{max}/R
2.80	0.67380	0.31486	0.20040	2.87308	1.57114	2.43728
2.81	0.67273	0.31299	0.19910	2.89825	1.57207	2.45154
2.82	0.67167	0.31114	0.19780	2.92366	1.57300	2.46578
2.83	0.67062	0.30931	0.19652	2.94931	1.57391	2.47999
2.84	0.66958	0.30749	0.19525	2.97521	1.57482	2.49417
2.85	0.66855	0.30568	0.19399	3.00136	1.57572	2.50833
2.86	0.66752	0.30389	0.19275	3.02775	1.57661	2.52245
2.87	0.66651	0.30211	0.19151	3.05440	1.57749	2.53655
2.88	0.66550	0.30035	0.19029	3.08129	1.57836	2.55062
2.89	0.66450	0.29860	0.18908	3.10844	1.57923	2.56467
2.90	0.66350	0.29687	0.18788	3.13585	1.58008	2.57868
2.91	0.66252	0.29515	0.18669	3.16352	1.58093	2.59267
2.92	0.66154	0.29344	0.18551	3.19145	1.58178	2.60663
2.93	0.66057	0.29175	0.18435	3.21963	1.58261	2.62057
2.94	0.65960	0.29007	0.18319	3.24809	1.58343	2.63447
2.95	0.65865	0.28841	0.18205	3.27680	1.58425	2.64835
2.96	0.65770	0.28675	0.18091	3.30579	1.58506	2.66220
2.97	0.65676	0.28512	0.17979	3.33505	1.58587	2.67602
2.98	0.65583	0.28349	0.17867	3.36457	1.58666	2.68981
2.99	0.65490	0.28188	0.17757	3.39437	1.58745	2.70358
3.00	0.65398	0.28028	0.17647	3.42445	1.58824	2.71732
3.01	0.65307	0.27869	0.17539	3.45481	1.58901	2.73103
3.02	0.65216	0.27711	0.17431	3.48544	1.58978	2.74472
3.03	0.65126	0.27555	0.17324	3.51636	1.59054	2.75837
3.04	0.65037	0.27400	0.17219	3.54756	1.59129	2.77200
3.05	0.64949	0.27246	0.17114	3.57905	1.59204	2.78560
3.06	0.64861	0.27094	0.17010	3.61082	1.59278	2.79918
3.07	0.64774	0.26942	0.16908	3.64289	1.59352	2.81272
3.08	0.64687	0.26792	0.16806	3.67524	1.59425	2.82624
3.09	0.64601	0.26643	0.16705	3.70790	1.59497	2.83974
3.10	0.64516	0.26495	0.16604	3.74084	1.59568	2.85320
3.11	0.64432	0.26349	0.16505	3.77409	1.59639	2.86664
3.12	0.64348	0.26203	0.16407	3.80764	1.59709	2.88005
3.13	0.64265	0.26059	0.16309	3.84149	1.59779	2.89343
3.14	0.64182	0.25915	0.16212	3.87565	1.59848	2.90679
3.15	0.64100	0.25773	0.16117	3.91011	1.59917	2.92011
3.16	0.64018	0.25632	0.16022	3.94488	1.59985	2.93342
3.17	0.63938	0.25492	0.15927	3.97997	1.60052	2.94669
3.18	0.63857	0.25353	0.15834	4.01537	1.60119	2.95994
3.19	0.63778	0.25215	0.15741	4.05108	1.60185	2.97316

M	T_t/T_t^*	T/T^*	p/p^*	p_t/p_t^*	V/V^*	S_{\max}/R
3.20	0.63699	0.25078	0.15649	4.08712	1.60250	2.98635
3.21	0.63621	0.24943	0.15558	4.12347	1.60315	2.99952
3.22	0.63543	0.24808	0.15468	4.16015	1.60380	3.01266
3.23	0.63465	0.24674	0.15379	4.19715	1.60444	3.02577
3.24	0.63389	0.24541	0.15290	4.23449	1.60507	3.03885
3.25	0.63313	0.24410	0.15202	4.27215	1.60570	3.05191
3.26	0.63237	0.24279	0.15115	4.31014	1.60632	3.06495
3.27	0.63162	0.24149	0.15028	4.34847	1.60694	3.07795
3.28	0.63088	0.24021	0.14942	4.38714	1.60755	3.09093
3.29	0.63014	0.23893	0.14857	4.42614	1.60816	3.10388
3.30	0.62940	0.23766	0.14773	4.46549	1.60877	3.11681
3.31	0.62868	0.23640	0.14689	4.50518	1.60936	3.12971
3.32	0.62795	0.23515	0.14606	4.54522	1.60996	3.14258
3.33	0.62724	0.23391	0.14524	4.58561	1.61054	3.15543
3.34	0.62652	0.23268	0.14442	4.62635	1.61113	3.16825
3.35	0.62582	0.23146	0.14361	4.66744	1.61170	3.18105
3.36	0.62512	0.23025	0.14281	4.70889	1.61228	3.19382
3.37	0.62442	0.22905	0.14201	4.75070	1.61285	3.20656
3.38	0.62373	0.22785	0.14122	4.79287	1.61341	3.21928
3.39	0.62304	0.22667	0.14044	4.83540	1.61397	3.23197
3.40	0.62236	0.22549	0.13966	4.87830	1.61453	3.24463
3.41	0.62168	0.22432	0.13889	4.92157	1.61508	3.25727
3.42	0.62101	0.22317	0.13813	4.96521	1.61562	3.26988
3.43	0.62034	0.22201	0.13737	5.00923	1.61616	3.28247
3.44	0.61968	0.22087	0.13662	5.05362	1.61670	3.29503
3.45	0.61902	0.21974	0.13587	5.09839	1.61723	3.30757
3.46	0.61837	0.21861	0.13513	5.14355	1.61776	3.32008
3.47	0.61772	0.21750	0.13440	5.18909	1.61829	3.33257
3.48	0.61708	0.21639	0.13367	5.23501	1.61881	3.34503
3.49	0.61644	0.21529	0.13295	5.28133	1.61932	3.35746
3.50	0.61580	0.21419	0.13223	5.32804	1.61983	3.36987
3.51	0.61517	0.21311	0.13152	5.37514	1.62034	3.38225
3.52	0.61455	0.21203	0.13081	5.42264	1.62085	3.39461
3.53	0.61393	0.21096	0.13011	5.47054	1.62135	3.40695
3.54	0.61331	0.20990	0.12942	5.51885	1.62184	3.41926
3.55	0.61270	0.20885	0.12873	5.56756	1.62233	3.43154
3.56	0.61209	0.20780	0.12805	5.61668	1.62282	3.44380
3.57	0.61149	0.20676	0.12737	5.66621	1.62331	3.45603
3.58	0.61089	0.20573	0.12670	5.71615	1.62379	3.46824
3.59	0.61029	0.20470	0.12603	5.76652	1.62427	3.48043

<i>M</i>	T_t/T_t^*	T/T^*	p/p^*	p_t/p_t^*	V/V^*	S_{\max}/R
3.60	0.60970	0.20369	0.12537	5.81730	1.62474	3.49259
3.61	0.60911	0.20268	0.12471	5.86850	1.62521	3.50472
3.62	0.60853	0.20167	0.12406	5.92013	1.62567	3.51683
3.63	0.60795	0.20068	0.12341	5.97219	1.62614	3.52892
3.64	0.60738	0.19969	0.12277	6.02468	1.62660	3.54098
3.65	0.60681	0.19871	0.12213	6.07761	1.62705	3.55302
3.66	0.60624	0.19773	0.12150	6.13097	1.62750	3.56503
3.67	0.60568	0.19677	0.12087	6.18477	1.62795	3.57702
3.68	0.60512	0.19581	0.12024	6.23902	1.62840	3.58899
3.69	0.60456	0.19485	0.11963	6.29371	1.62884	3.60093
3.70	0.60401	0.19390	0.11901	6.34884	1.62928	3.61285
3.71	0.60346	0.19296	0.11840	6.40443	1.62971	3.62474
3.72	0.60292	0.19203	0.11780	6.46048	1.63014	3.63661
3.73	0.60238	0.19110	0.11720	6.51698	1.63057	3.64845
3.74	0.60184	0.19018	0.11660	6.57394	1.63100	3.66028
3.75	0.60131	0.18926	0.11601	6.63137	1.63142	3.67207
3.76	0.60078	0.18836	0.11543	6.68926	1.63184	3.68385
3.77	0.60025	0.18745	0.11484	6.74763	1.63225	3.69560
3.78	0.59973	0.18656	0.11427	6.80646	1.63267	3.70733
3.79	0.59921	0.18567	0.11369	6.86578	1.63308	3.71903
3.80	0.59870	0.18478	0.11312	6.92557	1.63348	3.73071
3.81	0.59819	0.18391	0.11256	6.98584	1.63389	3.74237
3.82	0.59768	0.18303	0.11200	7.04660	1.63429	3.75401
3.83	0.59717	0.18217	0.11144	7.10784	1.63469	3.76562
3.84	0.59667	0.18131	0.11089	7.16958	1.63508	3.77721
3.85	0.59617	0.18045	0.11034	7.23181	1.63547	3.78877
3.86	0.59568	0.17961	0.10979	7.29454	1.63586	3.80031
3.87	0.59519	0.17876	0.10925	7.35777	1.63625	3.81183
3.88	0.59470	0.17793	0.10871	7.42151	1.63663	3.82333
3.89	0.59421	0.17709	0.10818	7.48575	1.63701	3.83481
3.90	0.59373	0.17627	0.10765	7.55050	1.63739	3.84626
3.91	0.59325	0.17545	0.10713	7.61577	1.63777	3.85769
3.92	0.59278	0.17463	0.10661	7.68156	1.63814	3.86909
3.93	0.59231	0.17383	0.10609	7.74786	1.63851	3.88048
3.94	0.59184	0.17302	0.10557	7.81469	1.63888	3.89184
3.95	0.59137	0.17222	0.10506	7.88205	1.63924	3.90318
3.96	0.59091	0.17143	0.10456	7.94993	1.63960	3.91450
3.97	0.59045	0.17064	0.10405	8.01835	1.63996	3.92579
3.98	0.58999	0.16986	0.10355	8.08731	1.64032	3.93706
3.99	0.58954	0.16908	0.10306	8.15681	1.64067	3.94831

M	T_t/T_t^*	T/T^*	p/p^*	p_t/p_t^*	V/V^*	S_{\max}/R
4.00	0.58909	0.16831	0.10256	8.22685	1.64103	3.95954
4.10	0.58473	0.16086	0.09782	8.95794	1.64441	4.07064
4.20	0.58065	0.15388	0.09340	9.74729	1.64757	4.17961
4.30	0.57682	0.14734	0.08927	10.59854	1.65052	4.28652
4.40	0.57322	0.14119	0.08540	11.51554	1.65329	4.39143
4.50	0.56982	0.13540	0.08177	12.50226	1.65588	4.49440
4.60	0.56663	0.12996	0.07837	13.56288	1.65831	4.59550
4.70	0.56362	0.12483	0.07517	14.70174	1.66059	4.69477
4.80	0.56078	0.12000	0.07217	15.92337	1.66274	4.79229
4.90	0.55809	0.11543	0.06934	17.23245	1.66476	4.88809
5.00	0.55556	0.11111	0.06667	18.63390	1.66667	4.98224
5.10	0.55315	0.10703	0.06415	20.13279	1.66847	5.07477
5.20	0.55088	0.10316	0.06177	21.73439	1.67017	5.16575
5.30	0.54872	0.09950	0.05951	23.44420	1.67178	5.25522
5.40	0.54667	0.09602	0.05738	25.26788	1.67330	5.34322
5.50	0.54473	0.09272	0.05536	27.21132	1.67474	5.42979
5.60	0.54288	0.08958	0.05345	29.28063	1.67611	5.51498
5.70	0.54112	0.08660	0.05163	31.48210	1.67741	5.59883
5.80	0.53944	0.08376	0.04990	33.82228	1.67864	5.68138
5.90	0.53785	0.08106	0.04826	36.30790	1.67982	5.76265
6.00	0.53633	0.07849	0.04669	38.94594	1.68093	5.84270
6.10	0.53488	0.07603	0.04520	41.74362	1.68200	5.92155
6.20	0.53349	0.07369	0.04378	44.70837	1.68301	5.99924
6.30	0.53217	0.07145	0.04243	47.84787	1.68398	6.07579
6.40	0.53091	0.06931	0.04114	51.17004	1.68490	6.15124
6.50	0.52970	0.06726	0.03990	54.68303	1.68579	6.22562
6.60	0.52854	0.06531	0.03872	58.39527	1.68663	6.29896
6.70	0.52743	0.06343	0.03759	62.31541	1.68744	6.37128
6.80	0.52637	0.06164	0.03651	66.45238	1.68821	6.44261
6.90	0.52535	0.05991	0.03547	70.81536	1.68895	6.51298
7.00	0.52438	0.05826	0.03448	75.41379	1.68966	6.58240
7.50	0.52004	0.05094	0.03009	102.28748	1.69279	6.91625
8.00	0.51647	0.04491	0.02649	136.62352	1.69536	7.22982
8.50	0.51349	0.03988	0.02349	179.92363	1.69750	7.52538
9.00	0.51098	0.03565	0.02098	233.88395	1.69930	7.80482
9.50	0.50885	0.03205	0.01885	300.40722	1.70082	
10.00	0.50702	0.02897	0.01702	381.61488	1.70213	
∞	0.48980	0.0	0.0	∞	1.7143	

*Properties of Air
at Low Pressures*

Thermodynamic Properties of Air at Low Pressures

This information is presented in English Engineering (EE) units

T is in °R, ϕ is in Btu/lbm-°R.

t is in °F, h and u are in Btu/lbm.

p_r and v_r are relative pressure and relative volume.

T	t	h	p_r	u	v_r	ϕ	T	t	h	p_r	u	v_r	ϕ
200	-259.7	47.67	0.04320	33.96	1714.9	0.36303	600	140.3	143.47	2.005	102.34	110.88	0.62607
210	-249.7	50.07	0.05122	35.67	1518.6	0.37470	610	150.3	145.88	2.124	104.06	106.38	0.63005
220	-239.7	52.46	0.06026	37.38	1352.5	0.38584	620	160.3	148.28	2.249	105.78	102.12	0.63395
230	-229.7	54.85	0.07037	39.08	1210.7	0.39648	630	170.3	150.68	2.379	107.50	98.11	0.63781
240	-219.7	57.25	0.08165	40.80	1088.8	0.40666	640	180.3	153.09	2.514	109.21	94.30	0.64159
250	-209.7	59.64	0.094150	42.50	983.6	0.41643	650	190.3	155.50	2.655	110.94	90.69	0.64533
260	-199.7	62.03	0.10797	44.21	892.0	0.42582	660	200.3	157.92	2.801	112.67	87.27	0.64902
270	-189.7	64.43	0.12318	45.92	812.0	0.43485	670	210.3	160.33	2.953	114.40	84.03	0.65263
280	-179.7	66.82	0.13986	47.63	741.6	0.44356	680	220.3	162.73	3.111	116.12	80.96	0.65621
290	-169.7	69.21	0.15808	49.33	679.5	0.45196	690	230.3	165.15	3.276	117.85	78.03	0.65973
300	-159.7	71.61	0.17795	51.04	624.5	0.46007	700	240.3	167.56	3.446	119.58	75.25	0.66321
310	-149.7	74.00	0.19952	52.75	575.6	0.46791	710	250.3	169.98	3.623	121.32	72.60	0.66664
320	-139.7	76.40	0.22290	54.46	531.8	0.47550	720	260.3	172.39	3.806	123.04	70.07	0.67002
330	-129.7	78.78	0.24819	56.16	492.6	0.48287	730	270.3	174.82	3.996	124.78	67.67	0.67335
340	-119.7	81.18	0.27545	57.87	457.2	0.49002	740	280.3	177.23	4.193	126.51	65.38	0.67665
350	-109.7	83.57	0.3048	59.58	425.4	0.49695	750	290.3	179.66	4.396	128.25	63.20	0.67991
360	-99.7	85.97	0.3363	61.29	396.6	0.50369	760	300.3	182.08	4.607	129.99	61.10	0.68312
370	-89.7	88.35	0.3700	62.99	370.4	0.51024	770	310.3	184.51	4.826	131.73	59.11	0.68629
380	-79.7	90.75	0.4061	64.70	346.6	0.51663	780	320.3	186.94	5.051	133.47	57.20	0.68942
390	-69.7	93.13	0.4447	66.40	324.9	0.52284	790	330.3	189.38	5.285	135.22	55.38	0.69251
400	-59.7	95.53	0.4858	68.11	305.0	0.52890	800	340.3	191.81	5.526	136.97	53.63	0.69558
410	-49.7	97.93	0.5295	69.82	286.8	0.53481	810	350.3	194.25	5.775	138.72	51.96	0.69860
420	-39.7	100.32	0.5760	71.52	207.1	0.54058	820	360.3	196.69	6.033	140.47	50.35	0.70160
430	-29.7	102.71	0.6253	73.23	254.7	0.54621	830	370.3	199.12	6.299	142.22	48.81	0.70455
440	-19.7	105.11	0.6776	74.93	240.6	0.55172	840	380.3	201.56	6.573	143.98	47.34	0.70747
450	-9.7	107.50	0.7329	76.65	227.45	0.55710	850	390.3	204.01	6.856	145.74	45.92	0.71037
460	0.3	109.90	0.7913	78.36	215.33	0.56235	860	400.3	206.46	7.149	147.50	44.57	0.71323
470	10.3	112.30	0.8531	80.07	204.08	0.56751	870	410.3	208.90	7.450	149.27	43.26	0.71606
480	20.3	114.69	0.9182	81.77	193.65	0.56751	880	420.3	211.35	7.761	151.02	42.01	0.71886
490	30.3	117.08	0.9868	83.49	183.94	0.57749	890	430.3	213.80	8.081	152.80	40.80	0.72163
500	40.3	119.48	1.0590	85.20	174.90	0.58233	900	440.3	216.26	8.411	154.57	39.64	0.72438
510	50.3	121.87	1.1349	86.92	166.46	0.58707	910	450.3	218.72	8.752	156.34	38.52	0.72710
520	60.3	124.27	1.2147	88.62	158.58	0.59173	920	460.3	221.18	9.102	158.12	37.44	0.72979
530	70.3	126.66	1.2983	90.34	151.22	0.59630	930	470.3	223.64	9.463	159.89	36.41	0.73245
540	80.3	129.06	1.3860	92.04	144.32	0.60078	940	480.3	226.11	9.834	161.68	35.41	0.73509
550	90.3	131.46	1.4779	93.76	137.85	0.60518	950	490.3	228.58	6.216	163.46	34.45	0.73771
560	100.3	133.86	1.5742	95.47	131.78	0.60950	960	500.3	231.06	7.610	165.26	33.52	0.74030
570	110.3	136.26	1.6748	97.19	126.08	0.61376	970	510.3	233.53	7.014	167.05	32.63	0.74287
580	120.3	138.66	1.7800	98.90	120.70	0.61793	980	520.3	236.02	7.430	168.83	31.76	0.74540
590	130.3	141.06	1.8899	100.62	115.65	0.62204	990	530.3	238.50	8.858	170.63	30.92	0.74792

Thermodynamic Properties of Air at Low Pressures (cont.)

<i>T</i>	<i>t</i>	<i>h</i>	<i>p_r</i>	<i>u</i>	<i>v_r</i>	<i>φ</i>	<i>T</i>	<i>t</i>	<i>h</i>	<i>p_r</i>	<i>u</i>	<i>v_r</i>	<i>φ</i>
1000	540.3	240.98	12.298	172.43	30.12	0.75042	1500	1040.3	369.17	55.86	266.34	9.948	0.85416
1010	550.3	243.48	12.751	174.24	29.34	0.75290	1510	1050.3	371.82	57.30	268.30	9.761	0.85592
1020	560.3	245.97	13.215	176.04	28.59	0.75536	1520	1060.3	374.47	58.78	270.26	9.578	0.85767
1030	570.3	248.45	13.692	177.84	27.87	0.75778	1530	1070.3	377.11	60.29	272.23	9.400	0.85940
1040	580.3	250.95	14.182	179.66	27.17	0.76019	1540	1080.3	379.77	61.83	274.20	9.226	0.86113
1050	590.3	253.45	14.686	181.47	26.48	0.76259	1550	1090.3	382.42	63.40	276.17	9.056	0.86285
1060	600.3	255.96	15.203	183.29	25.82	0.76496	1560	1100.3	385.08	65.00	278.13	8.890	0.86456
1070	610.3	258.47	15.734	185.10	25.19	0.76732	1570	1110.3	387.74	66.63	280.11	8.728	0.86626
1080	620.3	260.97	16.278	186.93	24.58	0.76964	1580	1120.3	390.40	68.30	282.09	8.569	0.86794
1090	630.3	263.48	16.838	188.75	23.98	0.77196	1590	1130.3	393.07	70.00	284.08	8.414	0.86962
1100	640.3	265.99	17.413	190.58	23.40	0.77426	1600	1140.3	395.74	71.73	286.06	8.263	0.87130
1110	650.3	268.52	18.000	192.41	22.84	0.77654	1610	1150.3	398.42	73.49	288.05	8.115	0.87297
1120	660.3	271.03	18.604	194.25	22.30	0.77880	1620	1160.3	401.09	75.29	290.04	7.971	0.87462
1130	670.3	273.56	19.223	196.09	21.78	0.78104	1630	1170.3	403.77	77.12	292.03	7.829	0.87627
1140	680.3	276.08	19.858	197.94	21.27	0.78326	1640	1180.3	406.45	78.99	294.03	7.691	0.87791
1150	690.3	278.61	20.51	199.78	20.771	0.78548	1650	1190.3	409.13	80.89	296.03	7.556	0.87954
1160	700.3	281.14	21.18	201.63	20.293	0.78767	1660	1200.3	411.82	82.83	298.02	7.424	0.88116
1170	710.3	283.68	21.86	203.49	19.828	0.78985	1670	1210.3	414.51	84.80	300.03	7.295	0.88278
1180	720.3	286.21	22.56	205.33	19.377	0.79201	1680	1220.3	417.20	86.82	302.04	7.168	0.88439
1190	730.3	288.76	23.28	207.19	18.940	0.79415	1690	1230.3	419.89	88.87	304.04	7.045	0.88599
1200	740.3	291.30	24.01	209.05	18.514	0.79628	1700	1240.3	422.59	90.95	306.06	6.924	0.88758
1210	750.3	293.86	24.76	210.92	18.102	0.79840	1710	1250.3	425.29	93.08	308.07	6.805	0.88916
1220	760.3	296.41	25.53	212.78	17.700	0.80050	1720	1260.3	428.00	95.24	310.09	6.690	0.89074
1230	770.3	298.96	26.32	214.65	17.311	0.80258	1730	1270.3	430.69	97.45	312.10	6.576	0.89230
1240	780.3	301.52	27.13	216.53	16.932	0.80466	1740	1280.3	433.41	99.69	314.13	6.465	0.89387
1250	790.3	304.08	27.96	218.40	16.563	0.80672	1750	1290.3	436.12	101.98	316.16	6.357	0.89542
1260	800.3	306.65	28.80	220.28	16.205	0.80876	1760	1300.3	438.83	104.30	318.18	6.251	0.89697
1270	810.3	309.22	29.67	222.16	15.857	0.81079	1770	1310.3	441.55	106.67	320.22	6.147	0.89850
1280	820.3	311.79	30.55	224.05	15.518	0.81280	1780	1320.3	444.26	109.08	322.24	6.045	0.90003
1290	830.3	314.36	31.46	225.93	15.189	0.81481	1790	1330.3	446.99	111.54	324.29	5.945	0.90155
1300	840.3	316.94	32.39	227.83	14.868	0.81680	1800	1340.3	449.71	114.03	326.32	5.847	0.90308
1310	850.3	319.53	33.34	229.73	14.557	0.81878	1810	1350.3	452.44	116.57	328.37	5.752	0.90458
1320	860.3	322.11	34.31	231.63	14.253	0.82075	1820	1360.3	455.17	119.16	330.40	5.658	0.90609
1330	870.3	324.69	35.30	233.52	13.958	0.82270	1830	1370.3	457.90	121.79	332.45	5.566	0.90759
1340	880.3	327.29	36.31	235.43	13.670	0.82464	1840	1380.3	460.63	124.47	334.50	5.476	0.90908
1350	890.3	329.88	37.35	237.34	13.391	0.82658	1850	1390.3	463.37	127.18	336.55	5.388	0.91056
1360	900.3	332.48	38.41	239.25	13.118	0.82848	1860	1400.3	466.12	129.95	338.61	5.302	0.91203
1370	910.3	335.09	39.49	241.17	12.851	0.83039	1870	1410.3	468.86	132.77	340.66	5.217	0.91350
1380	920.3	337.68	40.59	243.08	12.593	0.83229	1880	1420.3	471.60	135.64	342.73	5.134	0.91497
1390	930.3	340.29	41.73	245.00	12.340	0.83417	1890	1430.3	474.35	138.55	344.78	5.053	0.91643
1400	940.3	342.90	42.88	246.93	12.095	0.83604	1900	1440.3	477.09	141.51	346.85	4.974	0.91788
1410	950.3	345.52	44.06	248.86	11.855	0.83790	1910	1450.3	479.85	144.53	348.91	4.896	0.91932
1420	960.3	348.14	45.26	250.79	11.622	0.83975	1920	1460.3	482.60	147.59	350.98	4.819	0.92076
1430	970.3	350.75	46.49	252.72	11.394	0.84158	1930	1470.3	485.36	150.70	353.05	4.744	0.92220
1440	980.3	353.37	47.75	254.66	11.172	0.84341	1940	1480.3	488.12	153.87	355.12	4.670	0.92362
1450	990.3	356.00	49.03	256.60	10.954	0.84523	1950	1490.3	490.88	157.10	357.20	4.598	0.92504
1460	1000.3	358.63	50.34	258.54	10.743	0.84704	1960	1500.3	493.64	160.37	359.28	4.527	0.92645
1470	1010.3	361.27	51.68	260.49	10.537	0.84884	1970	1510.3	496.40	163.69	361.36	4.458	0.92786
1480	1020.3	363.89	53.04	262.44	10.336	0.85062	1980	1520.3	499.17	167.07	363.43	4.390	0.92926
1490	1030.3	366.53	54.43	264.38	10.140	0.85239	1990	1530.3	501.94	170.50	365.53	4.323	0.93066

Thermodynamic Properties of Air at Low Pressures (cont.)

<i>T</i>	<i>t</i>	<i>h</i>	<i>p_r</i>	<i>u</i>	<i>v_r</i>	<i>φ</i>	<i>T</i>	<i>t</i>	<i>h</i>	<i>p_r</i>	<i>u</i>	<i>v_r</i>	<i>φ</i>
2000	1540.3	504.71	174.00	367.61	4.258	0.93205	2500	2040.3	645.78	435.7	474.40	2.125	0.99497
2010	1550.3	507.49	177.55	369.71	4.194	0.93343	2510	2050.3	648.65	443.0	476.58	2.099	0.99611
2020	1560.3	510.26	181.16	371.79	4.130	0.93481	2520	2060.3	651.51	450.5	478.77	2.072	0.99725
2030	1570.3	513.04	184.81	373.88	4.069	0.93618	2530	2070.3	654.38	458.0	480.94	2.046	0.99838
2040	1580.3	515.82	188.54	375.98	4.008	0.93756	2540	2080.3	657.25	465.6	483.13	2.021	0.99952
2050	1590.3	518.61	192.31	378.08	3.949	0.93891	2550	2090.3	660.12	473.3	485.31	1.9956	1.00064
2060	1600.3	521.39	196.16	380.18	3.890	0.94026	2560	2100.3	662.99	481.1	487.51	1.9709	1.00176
2070	1610.3	524.18	200.06	382.28	3.833	0.94161	2570	2110.3	665.86	489.1	489.69	1.9465	1.00288
2080	1620.3	526.97	204.02	384.39	3.777	0.94296	2580	2120.3	668.74	497.1	491.88	1.9225	1.00400
2090	1630.3	529.75	208.06	386.48	3.721	0.74430	2590	2130.3	671.61	505.3	494.07	1.8989	1.00511
2100	1640.3	532.55	212.1	388.60	3.667	0.94564	2600	2140.3	674.49	513.5	496.26	1.8756	1.00623
2110	1650.3	535.35	216.3	390.71	3.614	0.94696	2610	2150.3	677.37	521.8	498.46	1.8527	1.00733
2120	1660.3	538.15	220.5	392.83	3.561	0.94829	2620	2160.3	680.25	530.3	500.65	1.8302	1.00843
2130	1670.3	540.94	224.8	394.93	3.510	0.94960	2630	2170.3	683.13	538.9	502.85	1.8079	1.00953
2140	1680.3	543.74	229.1	397.05	3.460	0.95092	2640	2180.3	686.01	547.5	505.05	1.7861	1.01063
2150	1690.3	546.54	233.5	399.17	3.410	0.95222	2650	2190.3	688.90	556.3	507.25	1.7646	1.01172
2160	1700.3	549.35	238.0	401.29	3.362	0.95352	2660	2200.3	691.79	565.2	509.44	1.7434	1.01281
2170	1710.3	552.16	242.6	403.41	3.314	0.95482	2670	2210.3	694.68	574.2	511.65	1.7225	1.01389
2180	1720.3	554.97	247.2	405.53	3.267	0.95611	2680	2220.3	697.56	583.3	513.86	1.7019	1.01497
2190	1730.3	557.78	251.9	407.66	3.221	0.95740	2690	2230.3	700.45	592.5	516.05	1.6817	1.01605
2200	1740.3	560.59	256.6	409.78	3.176	0.95868	2700	2240.3	703.35	601.9	518.26	1.6617	1.01712
2210	1750.3	563.41	261.4	411.92	3.131	0.95996	2710	2250.3	706.24	611.3	520.47	1.6420	1.01819
2220	1760.3	566.23	266.3	414.05	3.088	0.96123	2720	2260.3	709.13	620.9	522.68	1.6226	1.01926
2230	1770.3	569.04	271.3	416.18	3.045	0.96250	2730	2270.3	712.03	630.7	524.88	1.6035	1.02032
2240	1780.3	571.86	276.3	418.31	3.003	0.96376	2740	2280.3	714.93	640.5	527.10	1.5847	1.02138
2250	1790.3	574.69	281.4	420.46	2.961	0.96501	2750	2290.3	717.83	650.4	529.31	1.5662	1.02244
2260	1800.3	577.51	286.6	422.59	2.921	0.96626	2760	2300.3	720.72	660.5	531.53	1.5480	1.02348
2270	1810.3	580.34	291.9	424.74	2.881	0.96751	2770	2310.3	723.62	670.7	533.74	1.5299	1.02453
2280	1820.3	583.16	297.2	426.87	2.841	0.96876	2780	2320.3	726.53	681.0	535.96	1.5122	1.02558
2290	1830.3	585.99	302.7	429.01	2.803	0.96999	2790	2330.3	729.42	691.4	538.17	1.4948	1.02662
2300	1840.3	588.82	308.1	431.16	2.765	0.97123	2800	2340.3	732.33	702.0	540.40	1.4775	1.02767
2310	1850.3	591.66	313.7	433.31	2.728	0.97246	2810	2350.3	735.24	712.7	542.62	1.4606	1.02870
2320	1860.3	594.49	319.4	435.46	2.691	0.97369	2820	2360.3	738.15	723.5	544.85	1.4439	1.02974
2330	1870.3	597.32	325.1	437.60	2.655	0.97489	2830	2370.3	741.05	734.4	547.06	1.4274	1.03076
2340	1880.3	600.16	330.9	439.76	2.619	0.97611	2840	2380.3	743.96	745.5	549.29	1.4112	1.03179
2350	1890.3	603.00	336.8	441.91	2.585	0.97732	2850	2390.3	746.88	756.7	551.52	1.3951	1.03282
2360	1900.3	605.84	342.8	444.07	2.550	0.97853	2860	2400.3	749.79	768.1	553.74	1.3764	1.03383
2370	1910.3	608.68	348.9	446.22	2.517	0.97973	2870	2410.3	752.71	779.6	555.98	1.3638	1.03484
2380	1920.3	611.53	355.0	448.38	2.483	0.98092	2880	2420.3	755.61	791.2	558.19	1.3485	1.03586
2390	1930.3	614.37	361.3	450.54	2.451	0.98212	2890	2430.3	758.53	802.9	560.43	1.3333	1.03687
2400	1940.3	617.22	367.6	452.70	2.419	0.98331	2900	2440.3	761.45	814.8	562.66	1.3184	1.03788
2410	1950.3	620.07	374.0	454.87	2.387	0.98449	2910	2450.3	764.37	826.8	564.90	1.3037	1.03889
2420	1960.3	622.92	380.5	457.02	2.356	0.98567	2920	2460.3	767.29	839.0	567.13	1.2892	1.03989
2430	1970.3	625.77	387.0	459.20	2.326	0.98685	2930	2470.3	770.21	851.3	569.37	1.2749	1.04089
2440	1980.3	628.62	393.7	461.36	2.296	0.98802	2940	2480.3	773.13	863.8	571.60	1.2608	1.04188
2450	1990.3	631.48	400.5	463.54	2.266	0.98919	2950	2490.3	776.05	876.4	573.84	1.2469	1.04288
2460	2000.3	634.34	407.3	465.70	2.237	0.99035	2960	2500.3	778.97	889.1	576.07	1.2332	1.04386
2470	2010.3	637.20	414.3	467.88	2.209	0.99151	2970	2510.3	781.90	902.0	578.32	1.2197	1.04484
2480	2020.3	640.05	421.3	470.05	2.180	0.99266	2980	2520.3	784.83	915.0	580.56	1.2064	1.04583
2490	2030.3	642.91	428.5	472.22	2.153	0.99381	2990	2530.3	787.75	928.2	582.79	1.1932	1.04681

Thermodynamic Properties of Air at Low Pressures (cont.)

<i>T</i>	<i>t</i>	<i>h</i>	<i>p_r</i>	<i>u</i>	<i>v_r</i>	ϕ	<i>T</i>	<i>t</i>	<i>h</i>	<i>p_r</i>	<i>u</i>	<i>v_r</i>	ϕ
3000	2540.3	790.68	941.4	585.04	1.1803	1.04779	3500	3040.3	938.40	1829.3	698.48	0.7087	1.09332
3010		793.61	955.0	587.29	1.1675	1.04877	3510		941.38	1852.1	700.78	0.7020	1.09417
3020		796.54	968.7	589.53	1.1549	1.04974	3520		944.36	1875.2	703.07	0.6954	1.09502
3030		799.47	982.4	591.78	1.1425	1.05071	3530		947.34	1898.6	705.36	0.6888	1.09587
3040		802.41	994.5	594.03	1.1302	1.05168	3540		950.32	1922.1	707.65	0.6823	1.09671
3050	2590.3	805.34	1010.5	596.28	1.1181	1.05264	3550	3090.3	953.30	1945.8	709.95	0.6759	1.09755
3060		808.28	1024.8	598.52	1.1061	1.05359	3560		956.28	1969.8	712.24	0.6695	1.09838
3070		811.22	1039.2	600.77	1.0943	1.05455	3570		959.26	1993.9	714.54	0.6632	1.09922
3080		814.15	1053.8	603.02	1.0827	1.05551	3580		962.25	2018.3	716.84	0.6571	1.10005
3090		817.09	1068.5	605.27	1.0713	1.05646	3590		965.23	2043.0	719.14	0.6510	1.10089
3100	2640.3	820.03	1083.4	607.53	1.0600	1.05741	3600	3140.3	968.21	2067.9	721.44	0.6449	1.10172
3110		822.97	1098.5	609.79	1.0488	1.05836	3610		971.20	2093.0	723.74	0.6389	1.10255
3120		825.91	1113.7	612.05	1.0378	1.05930	3620		974.18	2118.4	726.04	0.6330	1.10337
3130		828.86	1129.1	614.30	1.0269	1.06025	3630		977.17	2144.0	728.34	0.6272	1.10420
3140		831.80	1144.7	616.56	1.0162	1.06119	3640		980.16	2169.9	730.64	0.6214	1.10502
3150	2690.3	834.75	1160.5	618.82	1.0056	1.06212	3650	3190.3	983.15	2196.0	732.95	0.6157	1.10584
3160		837.69	1176.4	621.08	0.9951	1.06305	3660		986.14	2222.4	735.26	0.6101	1.10665
3170		840.64	1192.5	623.35	0.9848	1.06398	3670		989.13	2249.0	737.57	0.6045	1.10747
3180		843.59	1208.7	625.60	0.9746	1.06491	3680		992.12	2275.8	739.87	0.5990	1.10828
3190		846.53	1225.1	627.86	0.9646	1.06584	3690		995.11	2302.9	742.17	0.5936	1.10910
3200	2740.3	849.48	1241.7	630.12	0.9546	1.06676	3700	3240.3	998.11	2330.3	744.48	0.5882	1.10991
3210		852.43	1258.5	632.39	0.9448	1.06768	3710		1001.11	2358.0	746.79	0.5829	1.11071
3220		855.38	1275.5	634.65	0.9352	1.06860	3720		1004.10	2385.9	749.10	0.5776	1.11152
3230		858.33	1292.7	636.92	0.9256	1.06952	3730		1007.10	2414.0	751.41	0.5724	1.11223
3240		861.28	1310.0	639.19	0.9162	1.07043	3740		1010.09	2442.4	753.73	0.5672	1.11313
3250	2790.3	864.24	1327.5	641.46	0.9069	1.07134	3750	3290.3	1013.09	2471.1	756.04	0.5621	1.11393
3260		867.19	1345.2	643.73	0.8977	1.07224	3760		1016.09	2500.0	758.35	0.5571	1.11473
3270		870.15	1363.1	646.00	0.8886	1.07315	3770		1019.09	2529.2	760.66	0.5522	1.11553
3280		873.11	1381.2	648.27	0.8797	1.07405	3780		1022.09	2558.7	762.98	0.5473	1.11633
3290		876.06	1399.5	650.54	0.8708	1.07495	3790		1025.09	2588.4	765.29	0.5424	1.11712
3300	2840.3	879.02	1418.0	652.81	0.8621	1.07585	3800	3340.3	1028.09	2618.4	767.60	0.5376	1.11791
3310		881.98	1436.6	655.09	0.8535	1.07675	3810		1031.09	2648.9	769.92	0.5328	1.11870
3320		884.94	1455.4	657.37	0.8450	1.07764	3820		1034.09	2679.5	772.23	0.5281	1.11948
3330		887.90	1474.5	659.64	0.8366	1.07853	3830		1037.10	2710.3	774.55	0.5235	1.12027
3340		890.86	1493.7	661.92	0.8283	1.07942	3840		1040.10	2741.5	776.87	0.5189	1.12105
3350	2890.3	893.83	1513.0	664.20	0.8202	1.08031	3850	3390.3	1043.11	2772.9	779.19	0.5143	1.12183
3360		896.80	1532.6	666.48	0.8121	1.08119	3860		1046.11	2804.6	781.51	0.5098	1.12261
3370		899.77	1552.5	668.76	0.8041	1.08207	3870		1049.12	2836.6	783.83	0.5054	1.12339
3380		902.73	1572.6	671.04	0.7962	1.08295	3880		1052.13	2869.0	786.16	0.5010	1.12416
3390		905.69	1592.8	673.32	0.7884	1.08383	3890		1055.13	2901.6	788.48	0.4966	1.12494
3400	2940.3	908.66	1613.2	675.60	0.7807	1.08470	3900	3440.3	1058.14	2934.4	790.80	0.4923	1.12571
3410		911.64	1633.9	677.89	0.7732	1.08558	3910		1061.15	2967.6	793.12	0.4881	1.12648
3420		914.61	1654.8	680.17	0.7657	1.08645	3920		1064.16	3001.1	795.44	0.4839	1.12725
3430		917.58	1675.9	682.46	0.7582	1.08732	3930		1067.17	3034.9	797.77	0.4797	1.12802
3440		920.55	1697.2	684.75	0.7508	1.08818	3940		1070.18	3069.0	800.10	0.4756	1.12879
3450	2990.3	923.52	1718.7	687.04	0.7436	1.08904	3950	3490.3	1073.19	3103.4	802.43	0.4715	1.12955
3460		926.50	1740.4	689.32	0.7365	1.08990	3960		1076.20	3138.1	804.75	0.4675	1.13031
3470		929.48	1762.3	691.61	0.7294	1.09076	3970		1079.22	3173.0	807.08	0.4635	1.13107
3480		932.45	1784.5	693.90	0.7224	1.09162	3980		1082.23	3208.3	809.41	0.4595	1.13183
3490		935.42	1806.8	696.19	0.7155	1.09247	3990		1085.24	3243.8	811.73	0.4556	1.13259

Thermodynamic Properties of Air at Low Pressures (cont.)

<i>T</i>	<i>t</i>	<i>h</i>	<i>p_r</i>	<i>u</i>	<i>v_r</i>	<i>φ</i>	<i>T</i>	<i>t</i>	<i>h</i>	<i>p_r</i>	<i>u</i>	<i>v_r</i>	<i>φ</i>
4000	3540.3	1088.26	3280	814.06	0.4518	1.13334	4500	4040.3	1239.86	5521	931.39	0.3019	1.16905
4010		1091.28	3316	816.39	0.4480	1.13410	4510		1242.91	5576	933.76	0.2996	1.16972
4020		1094.30	3352	818.72	0.4442	1.13485	4520		1245.96	5632	936.12	0.2973	1.17040
4030		1097.32	3389	821.06	0.4404	1.13560	4530		1249.00	5687	938.48	0.2951	1.17107
4040		1000.34	3427	823.39	0.4367	1.13635	4540		1252.05	5743	940.84	0.2928	1.17174
4050	3590.3	1103.36	3464	825.72	0.4331	1.13709	4550	4090.3	1255.10	5800	943.21	0.2906	1.17241
4060		1106.37	3502	828.05	0.4295	1.13783	4560		1258.16	5857	945.58	0.2884	1.17308
4070		1109.39	3540	830.39	0.4259	1.13857	4570		1261.21	5914	947.94	0.2862	1.17375
4080		1112.42	3579	832.73	0.4223	1.13932	4580		1264.26	5972	950.30	0.2841	1.17442
4090		1115.44	3617	835.06	0.4188	1.14006	4590		1267.31	6030	952.67	0.2820	1.17509
4100	3640.3	1118.46	3656	837.40	0.4154	1.14079	4600	4140.3	1270.36	6089	955.04	0.2799	1.17575
4110		1121.49	3696	839.74	0.4119	1.14153	4610		1273.42	6148	957.41	0.2778	1.17642
4120		1124.51	3736	842.08	0.4085	1.14227	4620		1276.47	6208	959.77	0.2757	1.17708
4130		1127.54	3776	844.41	0.4052	1.14300	4630		1279.52	6268	962.14	0.2736	1.17774
4140		1130.56	3817	846.75	0.4018	1.14373	4640		1282.58	6328	964.51	0.2716	1.17840
4150	3690.3	1133.59	3858	849.09	0.3985	1.14446	4650	4190.3	1285.63	6389	966.88	0.2696	1.17905
4160		1136.61	3899	851.44	0.3953	1.14519	4660		1288.69	6451	969.25	0.2676	1.17970
4170		1139.64	3940	853.78	0.3920	1.14592	4670		1291.75	6513	971.62	0.2656	1.18036
4180		1142.67	3982	856.12	0.3888	1.14665	4680		1294.80	6575	973.99	0.2637	1.18101
4190		1145.69	4024	858.46	0.3857	1.14737	4690		1297.86	6638	976.36	0.2617	1.18167
4200	3740.3	1148.72	4067	860.81	0.3826	1.14809	4700	4240.3	1300.92	6701	978.73	0.2598	1.18232
4210		1151.75	4110	863.15	0.3795	1.14881	4710		1303.98	6765	981.10	0.2579	1.18297
4220		1154.78	4153	865.50	0.3764	1.14953	4720		1307.03	6830	983.47	0.2560	1.18362
4230		1157.81	4197	867.84	0.3734	1.15025	4730		1310.09	6895	985.85	0.2541	1.18427
4240		1160.84	4241	870.18	0.3704	1.15097	4740		1313.15	6960	988.23	0.2523	1.18491
4250	3790.3	1163.87	4285	872.53	0.3674	1.15168	4750	4290.3	1316.21	7026	990.60	0.2505	1.18556
4260		1166.90	4330	874.88	0.3644	1.15239	4760		1319.27	7092	992.97	0.2486	1.18620
4270		1169.94	4375	877.23	0.3615	1.15310	4770		1322.33	7159	995.35	0.2468	1.18684
4280		1172.97	4421	879.58	0.3586	1.15381	4780		1325.39	7226	997.73	0.2451	1.18749
4290		1176.00	4467	881.93	0.3558	1.15452	4790		1328.45	7294	1000.10	0.2433	1.18813
4300	3840.3	1179.04	4513	884.28	0.3529	1.15522	4800	4340.3	1331.51	7362	1002.48	0.2415	1.18876
4310		1182.08	4560	886.63	0.3501	1.15593	4810		1334.57	7431	1004.86	0.2398	1.18940
4320		1185.08	4607	888.98	0.3474	1.15663	4820		1337.64	7500	1007.24	0.2381	1.19004
4330		1188.15	4654	891.33	0.3446	1.15734	4830		1340.70	7570	1009.61	0.2364	1.19068
4340		1191.19	4702	893.69	0.3419	1.15804	4840		1343.76	7640	1011.99	0.2347	1.19131
4350	3890.3	1194.23	4750	896.04	0.3392	1.15874	4850	4390.3	1346.83	7711	1014.37	0.2330	1.19194
4360		1197.26	4799	898.39	0.3366	1.15943	4860		1349.90	7782	1016.76	0.2313	1.19257
4370		1200.30	4848	900.75	0.3339	1.16012	4870		1352.97	7854	1019.14	0.2297	1.19320
4380		1203.34	4897	903.10	0.3313	1.16082	4880		1356.03	7926	1021.52	0.2281	1.19383
4390		1206.38	4947	905.45	0.3287	1.16151	4890		1359.10	7999	1023.90	0.2264	1.19445
4400	3940.3	1209.42	4997	907.81	0.3262	1.16221	4900	4440.3	1362.17	8073	1026.28	0.2248	1.19508
4410		1212.46	5048	910.17	0.3236	1.16290	4910		1365.24	8147	1028.66	0.2233	1.19571
4420		1215.50	5099	912.52	0.3211	1.16359	4920		1368.30	8221	1031.04	0.2217	1.19633
4430		1218.55	5150	914.88	0.3186	1.16427	4930		1371.37	8296	1033.43	0.2201	1.19696
4440		1221.59	5202	917.24	0.3162	1.16496	4940		1374.44	8372	1035.81	0.2186	1.19758
4450	3990.3	1224.64	5254	919.60	0.3137	1.16565	4950	4490.3	1377.51	8448	1038.20	0.2170	1.19820
4460		1227.68	5307	921.95	0.3113	1.16633	4960		1380.58	8525	1040.58	0.2155	1.19882
4470		1230.72	5360	924.31	0.3089	1.16701	4970		1383.65	8602	1042.97	0.2140	1.19944
4480		1233.77	5413	926.67	0.3066	1.16769	4980		1386.72	8680	1045.36	0.2125	1.20006
4490		1236.81	5467	929.03	0.3042	1.16837	4990		1389.79	8758	1047.74	0.2111	1.20067

Thermodynamic Properties of Air at Low Pressures (cont.)

<i>T</i>	<i>t</i>	<i>h</i>	<i>p_r</i>	<i>u</i>	<i>v_r</i>	<i>φ</i>	<i>T</i>	<i>t</i>	<i>h</i>	<i>p_r</i>	<i>u</i>	<i>v_r</i>	<i>φ</i>
5000	4540.3	1392.87	8837	1050.12	0.20959	1.20129	5500	5040.3	1547.07	13568	1170.04	0.15016	1.23068
5010		1395.94	8917	1052.51	0.20814	1.20190	5510		1550.17	13680	1172.45	0.14921	1.23124
5020		1399.01	8997	1054.90	0.20670	1.20252	5520		1553.26	13793	1174.87	0.14826	1.23180
5030		1402.08	9078	1057.29	0.20527	1.20313	5530		1556.36	13906	1177.28	0.14732	1.23236
5040		1405.16	9159	1059.68	0.20385	1.20374	5540		1559.45	14020	1179.69	0.14638	1.23292
5050	4590.3	1408.24	9241	1062.07	0.20245	1.20435	5550	5090.3	1562.55	14135	1182.10	0.14545	1.23348
5060		1411.32	9323	1064.45	0.20106	1.20496	5560		1565.65	14250	1184.52	0.14453	1.23404
5070		1414.39	9406	1066.84	0.19968	1.20557	5570		1568.74	14366	1186.93	0.14362	1.23459
5080		1417.46	9489	1069.23	0.19831	1.20617	5580		1571.84	14483	1189.34	0.14272	1.23515
5090		1420.54	9573	1071.62	0.19696	1.20678	5590		1574.93	14601	1191.75	0.14182	1.23570
5100	4640.3	1423.62	9653	1074.02	0.09561	1.2	5600	5140.3	1578.03	14719	1194.16	0.14093	1.23626
5110		1426.70	9743	1076.41	0.19428	1.20799	5610		1581.13	14838	1196.58	0.14005	1.23681
5120		1429.77	9829	1078.80	0.19296	1.20859	5620		1584.23	14958	1198.99	0.13918	1.23736
5130		1432.85	9916	1081.19	0.19165	1.20919	5630		1587.33	15079	1201.40	0.13831	1.23791
5140		1435.94	10003	1083.59	0.19035	1.20979	5640		1590.43	15201	1203.82	0.13745	1.23847
5150	4690.3	1439.02	10091	1085.98	0.18906	1.21038	5650	5190.3	1593.53	15323	1206.24	0.13659	1.23902
5160		1442.09	10179	1088.37	0.18778	1.21097	5660		1596.63	15446	1208.65	0.13574	1.23956
5170		1445.17	10268	1090.77	0.18651	1.21157	5670		1599.74	15569	1211.07	0.13491	1.24010
5180		1448.26	10358	1093.17	0.18525	1.21217	5680		1602.84	15694	1213.48	0.13407	1.24065
5190		1451.33	10448	1095.56	0.18401	1.21276	5690		1605.94	15820	1215.89	0.13324	1.24120
5200	4740.3	1454.41	10539	1097.96	0.18279	1.21336	5700	5240.3	1609.04	15946	1218.31	0.13242	1.24174
5210		1457.50	10630	1100.36	0.18156	1.21395	5710		1612.15	16072	1220.73	0.13161	1.24229
5220		1460.58	10722	1102.76	0.18	1.21454	5720		1615.25	16200	1223.15	0.13080	1.24283
5230		1463.66	10815	1105.15	0.17914	1.21513	5730		1618.35	16329	1225.57	0.12999	1.24337
5240		1466.75	10908	1107.55	0.17795	1.21572	5740		1621.46	16458	1227.99	0.12919	1.24391
5250	4790.3	1469.83	11002	1109.95	0.17677	1.21631	5750	5290.3	1624.57	16588	1230.41	0.12840	1.24445
5260		1472.92	11097	1112.35	0.17560	1.21689	5760		1627.67	16720	1232.82	0.12762	1.24498
5270		1476.01	11192	1114.75	0.17443	1.21747	5770		1630.77	16852	1235.24	0.12684	1.24552
5280		1479.09	11288	1117.15	0.17328	1.21806	5780		1633.88	16984	1237.67	0.12607	1.24606
5290		1482.17	11384	1119.55	0.17214	1.21864	5790		1636.98	17117	1240.08	0.12530	1.24660
5300	4840.3	1485.26	11481	1121.95	0.17101	1.21923	5800	5340.3	1640.09	17250	1242.50	0.12454	1.24714
5310		1488.35	11579	1124.35	0.16988	1.21981	5810		1643.20	17388	1244.93	0.12378	1.24767
5320		1491.43	11678	1126.75	0.16876	1.22039	5820		1646.30	17524	1247.35	0.12303	1.24821
5330		1494.52	11777	1129.15	0.16765	1.22097	5830		1649.41	17661	1249.77	0.12229	1.24874
5340		1497.61	11877	1131.56	0.16655	1.22155	5840		1652.52	17799	1252.19	0.12155	1.24927
5350	4890.3	1500.70	11978	1133.96	0.16547	1.22213	5850	5390.3	1655.63	17937	1254.62	0.12082	1.24981
5360		1503.79	12079	1136.36	0.16439	1.22270	5860		1658.73	18076	1257.04	0.12009	1.25034
5370		1506.88	12181	1138.77	0.16332	1.22327	5870		1661.84	18216	1259.46	0.11937	1.25087
5380		1509.97	12283	1141.17	0.16226	1.22385	5880		1664.95	18357	1261.88	0.11865	1.25140
5390		1513.05	12386	1143.57	0.16120	1.22442	5890		1668.06	18500	1264.30	0.11794	1.25193
5400	4940.3	1516.14	12490	1145.98	0.16015	1.22500	5900	5440.3	1671.17	18643	1266.73	0.11723	1.25246
5410		1519.24	12595	1148.38	0.15911	1.22557	5910		1674.28	18787	1269.15	0.11653	1.25298
5420		1522.33	12700	1150.78	0.15809	1.22614	5920		1677.39	18931	1271.58	0.11584	1.25351
5430		1525.42	12806	1153.19	0.15707	1.22671	5930		1680.50	19078	1274.00	0.11515	1.25403
5440		1528.51	12913	1155.60	0.15606	1.22728	5940		1683.61	19224	1276.43	0.11447	1.25456
5450	4990.3	1531.60	13021	1158.01	0.15506	1.22785	5950	5490.3	1686.73	19371	1278.86	0.11379	1.25508
5460		1534.70	13129	1160.41	0.15407	1.22841	5960		1689.84	19519	1281.29	0.11312	1.25560
5470		1537.79	13238	1162.82	0.15308	1.22898	5970		1692.96	19668	1283.72	0.11244	1.25613
5480		1540.88	13348	1165.23	0.15209	1.22954	5980		1696.07	19818	1286.14	0.11178	1.25665
5490		1543.98	13458	1167.63	0.15112	1.23011	5990		1699.18	19968	1288.57	0.11112	1.25717

Thermodynamic Properties of Air at Low Pressures (cont.)

<i>T</i>	<i>t</i>	<i>h</i>	<i>p_r</i>	<i>u</i>	<i>v_r</i>	<i>φ</i>	<i>T</i>	<i>t</i>	<i>h</i>	<i>p_r</i>	<i>u</i>	<i>v_r</i>	<i>φ</i>
6000	5540.3	1702.29	20120	1291.00	0.11047	1.25769	6300	5840.3	1795.88	25123	1364.02	0.09289	1.27291
6010		1705.41	20274	1293.43	0.10981	1.25821	6310		1799.01	25306	1366.46	0.09237	1.27341
6020		1708.52	20427	1295.86	0.10917	1.25872	6320		1802.13	25489	1368.90	0.09185	1.27390
6030		1711.64	20582	1298.29	0.10853	1.25924	6330		1805.26	25674	1371.35	0.09133	1.27440
6040		1714.76	20738	1300.72	0.10789	1.25976	6340		1808.39	25860	1373.79	0.09082	1.27489
6050	5590.3	1717.88	20894	1303.15	0.10726	1.26028	6350	5890.3	1811.51	26046	1376.23	0.09031	1.27538
6060		1720.99	21051	1305.58	0.10664	1.26079	6360		1814.63	26233	1378.66	0.08981	1.27587
6070		1724.10	21210	1308.01	0.10602	1.26130	6370		1817.76	26422	1381.10	0.08931	1.27636
6080		1727.22	21369	1310.44	0.10540	1.26182	6380		1820.89	26611	1383.54	0.08881	1.27685
6090		1730.33	21529	1312.87	0.10479	1.26233	6390		1824.01	26802	1385.98	0.08832	1.27734
6100	5640.3	1733.45	21691	1315.30	0.10418	1.26284	6400	5940.3	1827.14	26994	1388.43	0.08783	1.27783
6110		1736.57	21853	1317.73	0.10357	1.26335	6410		1830.27	27187	1390.88	0.08734	1.27832
6120		1739.69	22016	1320.16	0.10297	1.26386	6420		1833.40	27381	1393.32	0.08685	1.27881
6130		1742.81	22180	1322.60	0.10238	1.26437	6430		1836.53	27577	1395.76	0.08637	1.27929
6140		1745.93	22345	1325.04	0.10179	1.26488	6440		1839.66	27773	1398.21	0.08590	1.27978
6150	5690.3	1749.05	22512	1327.47	0.10120	1.26539	6450	5990.3	1842.79	27970	1400.65	0.08542	1.28026
6160		1752.17	22678	1329.90	0.10062	1.26589	6460		1845.92	28169	1403.09	0.08495	1.28074
6170		1755.29	22846	1332.34	0.10004	1.26639	6470		1849.05	28369	1405.53	0.08448	1.28123
6180		1758.41	23016	1334.77	0.09946	1.26690	6480		1852.18	28569	1407.98	0.08402	1.28171
6190		1761.53	23186	1337.20	0.09889	1.26741	6490		1855.31	28772	1410.42	0.08356	1.28219
6200	5740.3	1764.65	23357	1339.64	0.09833	1.26791	6500	6040.3	1858.44	28974	1412.87	0.8310	1.28268
6210		1767.77	23529	1342.08	0.09777	1.26841							
6220		1770.89	23703	1344.52	0.09721	1.26892							
6230		1774.02	23877	1346.95	0.09666	1.26942							
6240		1777.14	24052	1349.39	0.09611	1.26992							
6250	5790.3	1780.27	24228	1351.83	0.09556	1.27042							
6260		1783.39	24405	1354.27	0.09502	1.27092							
6270		1786.51	24583	1356.71	0.09448	1.27142							
6280		1789.63	24762	1359.14	0.09395	1.27192							
6290		1792.75	24942	1361.58	0.09342	1.27241							

Source: Condensed with permission from Table 1 of J. H. Keenan and J. Kaye, *Gas Tables*, copyright 1948, John Wiley & Sons, New York.

*Specific Heats of Air
at Low Pressures*

Specific Heats of Air at Low Pressures

This information is presented in English Engineering (EE) units.

T is in °R, c_p is in Btu/lbm-°R.
 t is in °F, c_v is in Btu/lbm-°R.
 a is in ft/sec, $\gamma = c_p/c_v$.

T	t	c_p	c_v	γ	a	T	t	c_p	c_v	γ	a
100	-359.7	0.2392	0.1707	1.402	490.5	1900	1440.3	0.2750	0.2064	1.332	2084
150	-309.7	0.2392	0.1707	1.402	600.7	2000	1540.3	0.2773	0.2088	1.328	2135
200	-259.7	0.2392	0.1707	1.402	693.6	2100	1640.3	0.2794	0.2109	1.325	2185
250	-209.7	0.2392	0.1707	1.402	775.4	2200	1740.3	0.2813	0.2128	1.322	2234
300	-159.7	0.2392	0.1707	1.402	849.4	2300	1840.3	0.2831	0.2146	1.319	2282
350	-109.7	0.2393	0.1707	1.402	917.5	2400	1940.3	0.2848	0.2162	1.317	2329
400	-59.7	0.2393	0.1707	1.402	980.9	2600	2140.3	0.2878	0.2192	1.313	2420
450	-9.7	0.2394	0.1708	1.401	1040.3	2800	2340.3	0.2905	0.2219	1.309	2508
500	40.3	0.2396	0.1710	1.401	1096.4	3000	2540.3	0.2929	0.2243	1.306	2593
550	90.3	0.2399	0.1713	1.400	1149.6	3200	2740.3	0.2950	0.2264	1.303	2675
600	140.3	0.2403	0.1718	1.399	1200.3	3400	2940.3	0.2969	0.2283	1.300	2755
650	190.3	0.2409	0.1723	1.398	1248.7	3600	3140.3	0.2986	0.2300	1.298	2832
700	240.3	0.2416	0.1730	1.396	1295.1	3800	3340.3	0.3001	0.2316	1.296	2907
750	290.3	0.2424	0.1739	1.394	1339.6	4000	3540.3	0.3015	0.2329	1.294	2981
800	340.3	0.2434	0.1748	1.392	1382.5	4200	3740.3	0.3029	0.2343	1.292	3052
900	440.3	0.2458	0.1772	1.387	1463.6	4400	3940.3	0.3041	0.2355	1.291	3122
1000	540.3	0.2486	0.1800	1.381	1539.4	4600	4140.3	0.3052	0.2367	1.290	3191
1100	640.3	0.2516	0.1830	1.374	1610.8	4800	4340.3	0.3063	0.2377	1.288	3258
1200	740.3	0.2547	0.1862	1.368	1678.6	5000	4540.3	0.3072	0.2387	1.287	3323
1300	840.3	0.2579	0.1894	1.362	1743.2	5200	4740.3	0.3081	0.2396	1.286	3388
1400	940.3	0.2611	0.1926	1.356	1805.0	5400	4940.3	0.3090	0.2405	1.285	3451
1500	1040.3	0.2642	0.1956	1.350	1864.5	5600	5140.3	0.3098	0.2413	1.284	3513
1600	1140.3	0.2671	0.1985	1.345	1922.0	5800	5340.3	0.3106	0.2420	1.283	3574
1700	1240.3	0.2698	0.2013	1.340	1977.6	6000	5540.3	0.3114	0.2428	1.282	3634
1800	1340.3	0.2725	0.2039	1.336	2032	6200	5740.3	0.3121	0.2435	1.282	3693
						6400	5940.3	0.3128	0.2442	1.281	3751

Source: Adapted with permission from Table 2 of J. H. Keenan and J. Kaye, *Gas Tables*, copyright 1948, John Wiley & Sons, New York.

Selected References

Reference numbers referred to in the text correspond to those listed below:

Calculus

1. Stewart, J., *Calculus*, 4th ed., Brooks/Cole, Pacific Grove, CA, 1999.
2. Finney, R. L., and Thomas, G. B., *Calculus*, 2nd ed., Addison-Wesley, Reading, MA, 1999.

Thermodynamics

3. Moran, M. J., and Shapiro, H. N., *Fundamentals of Engineering Thermodynamics*, John Wiley & Sons, New York, 1999.
4. Mooney, D. A., *Mechanical Engineering Thermodynamics*, Prentice Hall, Englewood Cliffs, NJ, 1953.
5. Reynolds, W. C., and Perkins, H. C., *Engineering Thermodynamics*, 2nd ed., McGraw-Hill, New York, 1977.
6. Obert, E. F., *Concepts of Thermodynamics*, McGraw-Hill, New York, 1960.
7. Sonntag, R. E., Borgnakke, C., and Van Wylen, C. J., *Fundamentals of Thermodynamics*, 5th ed., John Wiley & Sons, New York, 1997.
8. Dittman, R. H., and Zemansky, M. W., *Heat and Thermodynamics*, 7th ed., McGraw-Hill, New York, 1996.

Fluid Mechanics

9. Pao, R. H. F., *Fluid Mechanics*, John Wiley & Sons, New York, 1961.
10. Shames, I. H., *Mechanics of Fluids*, 3rd ed., McGraw-Hill, New York, 1992.
11. Streeter, V. L., and Wylie, E. B., *Fluid Mechanics*, 8th ed., McGraw-Hill, New York, 1985.
12. Street, R. L., Walters, G. Z., and Vennard, J. K., *Elementary Fluid Mechanics*, 7th ed., John Wiley & Sons, New York, 1995.

Gas Dynamics

13. Cambel, A. B., and Jennings, B. H., *Gas Dynamics*, McGraw-Hill, New York, 1958.
14. Anderson, J. D., *Modern Compressible Flow*, 2nd ed., McGraw-Hill, New York, 1990.
15. Hall, N. A., *Thermodynamics of Fluid Flow*, Prentice Hall, Englewood Cliffs, NJ, 1951.
16. John, J. E. A., *Gas Dynamics*, 2nd ed., Prentice Hall, Upper Saddle River, NJ, 1997.
17. Liepmann, H. W., and Roshko, A., *Elements of Gasdynamics*, John Wiley & Sons, New York, 1957.
18. Saad, M. A., *Compressible Fluid Flow*, Prentice Hall, Englewood Cliffs, NJ, 1985.
19. Shapiro, A. H., *The Dynamics and Thermodynamics of Compressible Fluid Flow*, Vol. I, John Wiley & Sons, New York, 1953.
20. Zucrow, M. J., and Hoffman J. D., *Gas Dynamics*, Vol. I, John Wiley & Sons, New York, 1976.

Propulsion

21. Archer, R. D., and Saarlans, M., *An Introduction to Aerospace Propulsion*, Prentice Hall, Upper Saddle River, NJ, 1996.
22. Oates, G. C., *Aerothermodynamics of Gas Turbine and Rocket Propulsion*, 3rd ed., AIAA Education Series, Reston, VA, 1997.
23. Hill, P. G., and Peterson C. R., *Mechanics and Thermodynamics of Propulsion*, 2nd ed., Addison-Wesley, Reading, MA, 1992.
24. Sutton, G. P., and Biblarz, O., *Rocket Propulsion Elements*, 7th ed., John Wiley & Sons, New York, 2001.
25. Zucrow, M. J., *Aircraft and Missile Propulsion*, Vols. I and II, John Wiley & Sons, New York 1958.

Real Gases

26. Pierce, F. J., *Microscopic Thermodynamics*, International Textbook Co., Scranton, PA, 1968.
27. Incropera, F. P., *Molecular Structure and Thermodynamics*, John Wiley & Sons, New York, 1974.
28. Thompson, P. A., *Compressible Fluid Dynamics*, McGraw-Hill, New York, 1972.
29. Anderson, J. D., *Hypersonic and High Temperature Gas Dynamics*, McGraw-Hill, New York, 1989 (presently available as an AIAA textbook).
30. Owczarek, J. A., *Fundamentals of Gas Dynamics*, International Textbook Co., Scranton, PA, 1964.

Tables and Charts

31. Keenan, J. H., and Kaye, J., *Gas Tables*, John Wiley & Sons, New York, 1948.
32. Ames Research Staff, *Equations, Tables, and Charts for Compressible Flow*, NACA Report 1135, 1953.
33. Sims, J. L., *Tables for Supersonic Flow around Right Circular Cones at Zero-Angle-of-Attack*, NASA Report SP-3004, 1964.

Answers to Problems

Answers have been computed by interpolation from tabular entries and have been rounded off to three significant figures at the end (except for answers beginning with 1, where four significant figures have been retained). This procedure yields values consistent with standard engineering practice.

Chapter 1

- 1.1. Pretty close.
 1.2. (a) Yes; (b) vertical lines.
 1.3. (a) 2; (b) -52.0 Btu/lbm, -52.0 Btu/lbm.
 1.4. $0, 0.24 \times 10^6$ N · m, $0, 0.24 \times 10^6$ N · m, 0 .
 1.5. (a) $393 \Delta T$ J/kg; (b) no.

Chapter 2

- 2.2. (a) $U_m/2$; (b) $U_m/3$; (c) $2U_m/3$.
 2.3. $13/2$.
 2.4. $\rho A E_m U_m/3$.
 2.5. (a) 38.9 ft/sec.; (b) $1400/D^2$ ft/sec.
 2.6. 44.4 ft/sec.
 2.7. $19,010$ hp.
 2.8. 111.2 hp.
 2.9. (a) 1906 m/s; (b) 5.07 kg/s.
 2.10. -0.0147 Btu/lbm.
 2.11. (a) 78.1 m/s; (b) 4.18 .
 2.12. (a) 2880 ft/sec, (b) 1.15 .
 2.13. (a) 661 m/s; (b) 0.0625 bar abs.
 2.14. (a) 382 Btu/sec; (b) 0.03% .
 2.15. 4.34×10^5 J/kg.

Check Test:

- 2.3. $7\rho A B_m U_m/30$.
 2.5. $\dot{m}_2\beta_2 + \dot{m}_3\beta_3 - \dot{m}_1\beta_1$.

Chapter 3

- 3.4. 246 ft/sec.

- 3.5. (a) -450 J/kg; (b) 0.11 K.
3.6. (a) 2260 ft/sec; (b) 732°F ; (c) 103.1 psia.
3.7. Shaft work input.
3.9. (a) 7.51 ft-lbf/lbm; (b) 2.87 psig.
3.10. 54.4 m.
3.11. (a) 46.6 ft-lbf/lbm; (b) flow from 2 to 1.
3.12. 14.82 cm.
3.13. (b) 35 ft.
3.14. Case B.
3.16. (a) 7200A lbf; (b) 1.50 lbf/ft².
3.17. (a) 1.50 bar abs; (b) 7810 N; (c) $-56,800$ J/kg.
3.18. (a) 80 ft/sec, 6.37 psig; (b) 3600 lbf.
3.19. (a) 32.1 ft/sec; (b) 174.9 lbm/sec; (c) 151 lbf.
3.20. 5000 N.
3.21. 4.36 ft².
3.22. 180° .

Check Test:

- 3.4. 2 .
3.5. (a) $q = w_s = 0$, yes; (b) no losses.
3.6. (a) s .

Chapter 4

- 4.1. 1128 ft/sec, 4290 ft/sec, 4880 ft/sec, 4680 ft/sec.
4.2. 278 K, 189 K, 33.3 K.
4.4. (a) 295 ft/sec; (b) 298 ft/sec; (c) 1291 ft/sec, 1492 ft/sec; (d) at low Mach numbers.
4.5. 0.564 .
4.6. (a) 286 m/s, 0.700 ; (b) 2.8 kg/m³.
4.7. 2.1 , 402 psia.
4.8. 1266 m/s.
4.9. 524°R , 1779 psfa.

4.10. $1.28 \times 10^5 \text{ N/m}^2$, 330 K, 491 m/s.

4.11. $M = \infty$.

4.12. Flows toward 50 psia, 0.0204 Btu/lbm-°R.

4.13. (a) 457 K, 448 m/s; (b) 9.65 bar abs.; (c) 0.370.

4.14. (a) 451°R, 20.95 psia; (b) 0.0254 Btu/lbm-°R; (c) 1571 lbf.

4.15. (a) 156.8 m/s; (b) 32.5 J/kg·K; (c) 0.763.

4.16. (a) 85.8 lbm/sec; (b) 1.91, 578°R, 2140 ft/sec, 0.0758 lbm/ft³, 0.528 ft²;
(c) -6960 lbf.

Check Test:

4.2. (a) Into; (b) $M_2 < M_1$.

4.3. (a) True; (b) false; (c) false; (d) true; (e) true.

Chapter 5

5.1. (a) 0.18, 94.9 psia; (b) 2.94, 320°R.

5.2. 2.20, 1.64.

5.3. (a) 0.50, 35.6 psia, 788°R; (b) nozzle; (c) 0.67, 26.3 psia, 723°R.

5.4. 239 K.

5.5. (a) 0.607, 685 ft/sec, 23.1 psia; (b) 0.342, 395 ft/sec, 30.4 psia; (c) 0.855.

5.7. (a) 0.00797 Btu/lbm-°R; (b) 0.1502.

5.8. (a) 52.3 J/kg·K; (b) 16.43 cm.

5.10. (a) 26.5 lbm/sec; (b) no change; (c) 53.0 lbm/sec.

5.11. (a) 320 m/s; (b) 0.808 kg/s; (c) 0.844 kg/s.

5.12. 671°R, 0.768, 975 ft/sec.

5.13. (a) 77.9 psia; (b) 3.77 psia; (c) 0.0406 lbm/ft³, 2050 ft/sec.

5.14. (a) 38.6 cm²; (b) 9.14 kg/s.

5.15. 430 ft/sec.

5.16. (a) 140.4 lbm/sec; (b) 0.491 ft²; (c) 0.787 ft².

5.17. (b) 3.53 cm²; (c) 4.09 cm².

5.18. (a) 1.71; (b) 91.9%; (c) 0.01152 Btu/lbm-°R.

5.19. (a) 163.9 K, 1.10 bar abs, 8.61 bar abs.; (b) 2.10; (c) 0.1276 m²; (d) 300 kg/s.

5.20. (a) 23.7 psia; (b) 97.4%; (c) 4.14.

5.23. (a) 3.5, 436 lbm/sec-ft²; (b) $p_{\text{rec}} \leq 6.63$ psia; (c) same.

Check Test:

5.3. $T_2^* > T_1^*$.

5.6. (a) 132.1 psia; (b) 0.514 lbm/ft³, 1001 ft/sec; (c) 0.43.

Chapter 6

6.1. (b) 0.01421 Btu/lbm-°R; (c) 0.0646 Btu/lbm-°R, 0.1237 Btu/lbm-°R.

6.2. 84.0 psia.

6.3. (a) $[(\gamma - 1)/2\gamma]^{1/2}$; (b) $\rho_2/\rho_1 = (\gamma + 1)/(\gamma - 1)$.

6.4. 2.47, 3.35.

6.5. (a) 2.88; (b) 1.529.

6.6. 0.69, 2.45.

6.7. (a) 0.965, 0.417, 0.0585; (b) 144.8 psia, 62.6 psia, 8.78 psia; (c) 15.54 psia, 36.0 psia, 256 psia.

6.8. (a) 19.30 cm²; (b) 10.52×10^5 N/m²; (c) 18.65×10^5 N/m².

6.9. 1.30 ft².

6.10. (a) 0.119, 0.623; (b) 0.0287 Btu/lbm-°R.

6.11. 0.498.

6.12. (a) 4.6 in²; (b) 5.35 in²; (c) 79 psia; (d) 6.58 in²; (e) 1.79.

6.13. (a) 3.56; (b) 0.475.

6.14. 0.67 or 1.405.

6.15. (a) 0.973, 0.375, 0.0471; (b) 0.43; (c) 2.64, 2.50.

6.16. (a) 0.271; (b) 0.0455 Btu/lbm-°R; (c) 2.48; (d) 0.281.

6.17. (a) $0.985p_1$, $0.296p_1$, $0.0298p_1$; (b) (i) no flow, (ii) subsonic throughout, (iii) shock in diverging portion, (iv) almost design.

6.19. (a) 54.6 in²; (b) 18.39 lbm/sec; (c) 109.4 in²; (d) 7.34 psia; (e) 9.24 psia; (f) 742 hp.

Check Test:

6.2. (a) Increases; (b) decreases; (c) decreases; (d) increases.

6.3. 0.973, 0.376, 0.0473.

6.5. (a) 1.625; (b) from 2 to 1.

6.6. (a) 0.380, 450 ft/sec; (b) 0.0282 Btu/lbm-°R.

Chapter 7

7.1. (a) 725°R, 42.0 psia, 922 ft/sec; (b) 0.00787 Btu/lbm-°R.

7.2. 1.024×10^6 K, 1.756×10^6 K, 20,500 bar, 135,000 bar.

7.3. 531°R, 19.75 psia, 348 ft/sec.

7.4. (a) 957 ft/sec; (b) 658°R, 34.5 psia.

7.5. (a) 310 K, 1.219×10^4 N/m², 50.3 m/s; (b) 328 K, 1.48×10^4 N/m², 340 m/s.

7.6. (a) 1453 ft/sec, 2520 ft/sec, 959 ft/sec, 2520 ft/sec; (b) 619°R, 18.05 psia; (c) 9.1°.

7.7. (a) 1.68, 25.6°; (b) 560 K, 6.10 bar; (c) weak.

7.8. (a) 52°, 77°; (b) 1013°R, 32.7 psia, 1198°R, 51.3 psia.

7.9. (a) 2.06; (b) all $M > 2.06$ cause attached shock.

7.10. (a) 1.8; (b) for $M > 1.57$.

7.11. (a) 1928 ft/sec; (b) 1045 ft/sec.

7.13. (a) 821°R, 2340 psfa, 0.0220 Btu/lbm-°R; (c) 826°R, 2470 psfa, 0.0200 Btu/lbm-°R.

7.14. (a) 2.27, 166.3 K, 5.6°; (b) 5.6°; (c) 2.01, 184.5 K, 1.43 bar.

7.15. (a) 1.453, 696°R, 24.8 psia; (b) oblique shock with $\delta = 10^\circ$; (c) 1.031, 816°R, 42.7 psia; (d) 0.704, 906°R, 52.3 psia.

7.16. (a) 0.783, 58°; (b) 6.72, 0.837.

7.17. 1.032, 15.92, 2.61, 40°.

7.18. (a) 949 m/s; (b) 706 K; (c) 48°.

7.19. 2990 psfa, 0.0225 Btu/lbm-°R.

Check Test:

7.1. (a) $p_1 = p'_1$; (b) $T'_{t1} < T'_{t2}$; (c) none; (d) $u'_2 > u'_1$, $u'_2 = u_2$.

7.2. (a) Greater than; (b) (i) decreases, (ii) decreases.

7.6. 1667 ft/sec.

7.7. (a) 53.1°, 20°; (b) 625°R, 14.1 psia, 1.23.

Chapter 8

8.1. 2.60, 398°R, 936°R, 5.78 psia, 115 psia.

- 8.2. (a) 1.65, 3.04; (b) 34.2°, 52.3°.
- 8.3. (a) 174.5 K, $8.76 \times 10^3 \text{ N/m}^2$.
- 8.4. 1.39.
- 8.5. 12.1°.
- 8.6. (a) 2.36, 1.986, 11.03; (b) 1.813, 2.51, 9.33; (d) no.
- 8.7. (a) 6.00 psia, 16.59 psia; (b) 12,020 lbf, 2120 lbf.
- 8.8. (c) 6.851 psia, 19.09 psia, 3.35 psia, 10.483 psia, $L = 8.15 \times 10^3 \text{ lbf/ft}$ of span, $D = 1.996 \times 10^3 \text{ lbf/ft}$ of span.
- 8.10. (a) 2.44, 392°R; (b) $\Delta v = 14.2^\circ$.
- 8.11. (b) 241 K, 1.0 bar, 609 m/s.
- 8.12. (c) 1.86, 20°, 2.67, 40.5° from centerline.
- 8.13. (a) 15.05°; (b) 1.691, 4.14 p_{amb} ; (c) expansion; (d) 2.61, p_{amb} , $0.865T_1$, 39.1° from original flow.
- 8.14. (a) 1.0 bar, 1.766, 6.55°, 1.4 bar, 1.536, 0°, 1.0 bar, 1.761, 6.6°.
- 8.15. (b) ∞ ; (c) 130.5°, 104.1°, 53.5°, 28.1°; (d) 3600 ft/sec.
- 8.16. (a) $\frac{L_2}{L_1} = \frac{1}{M_2} \left(\frac{\gamma + 1}{2} \right)^{(\gamma+1)/2(1-\gamma)} \left(1 + \frac{\gamma - 1}{2} M_2^2 \right)^{(\gamma+1)/2(\gamma-1)}$; (b) 1.343.

8.17. (a) 8.67°; (b) -10.03°; (c) no.

8.18. (a) 27.2°; (b) 1.95.

Check Test:

8.4. 5.74°.

8.5. 845 lbf/ft².

Chapter 9

9.1. $2.22 \times 10^5 \text{ N/m}^2$, 0.386.

9.2. 76.1 psia, 138.6 lbf/ft²-sec.

9.3. (a) 21.7D; (b) 55.6%, 87.1%, 20.3%; (c) 0.0630 Btu/lbm-°R; (d) -0.59%, -5.9%, -5.4%, 0.00279 Btu/lbm-°R.

9.4. (a) 22.1 ft; (b) 528°R, 24.6 psia, 1072 ft/sec.

9.5. (a) 0.0313; (b) 2730 N/m².

9.6. (a) 551°R, 0.60; (b) from 2 to 1; (c) 0.423.

- 9.7. (a) 157.8 K, $2.98 \times 10^4 \text{ N/m}^2$, 442 K, $10.95 \times 10^5 \text{ N/m}^2$; (b) 0.0157.
- 9.8. (a) 556°R, 30.4 psia, 284 ft/sec; (b) 15.06 psia.
- 9.9. (a) 453°R, 8.79 psia; (b) 77.3 ft.
- 9.11. (a) 0.690, 0.877, 1128 ft/sec, 876°R, 38.0 psia; (b) 0.0205, 0.0012 ft.
- 9.12. (a) 324 K, 1.792 bar, 347 K, 2.27 bar; 121.8 K, 0.214 bar, 347 K, 8.33 bar; (b) 1959 hp, 4260 hp.
- 9.13. (a) 0.216; (b) 495°R, 10.65 psia; (c) 17.82 ft.
- 9.14. 229 K, $5.33 \times 10^4 \text{ N/m}^2$.
- 9.15. (b) 0.513, 0.699; (c) 0.758.
- 9.16. (a) (i) 144.4 psia, (ii) 51.7 psia, (iii) 40.8 psia; (b) 15.2 psia.
- 9.17. (b) 0.0133; (c) 289.4 J/kg·K.
- 9.18. (b) $M = 0.50$; (c) 26.87 bar; (d) 0.407, 0.825.
- 9.19. (a) 26.0 psia; (b) 39.5 psia.
- 9.22. 24 psia with 2-in. tubing; choked with 1-in. tubing.

Check Test:

- 9.3. 43.5 psia.
- 9.4. 94.3 to 31.4 psia.

Chapter 10

- 10.1. (a) 1217°R, 1839°R; (b) 112.6 Btu/lbm added.
- 10.2. $1.792 \times 10^5 \text{ J/kg}$ removed.
- 10.3. 0.848, 2.83, 0.223.
- 10.4. (a) 3.37, $2.43 \times 10^4 \text{ N/m}^2$, 126.3 K; (b) $-890 \text{ J/kg}\cdot\text{K}$.
- 10.5. (a) 767°R, 114.7 psia, 1112°R, 421 psia; (b) 68.1 Btu/lbm added.
- 10.8. (a) $6.39 \times 10^5 \text{ J/kg}$; (b) 892 K, 0.567 atm.
- 10.9. (b) 2.00, 600°R, 59.8 psia; (c) 630°R, 21.0 psia, 756°R, 39.8 psia; (d) 38.7 Btu/lbm.
- 10.10. (a) 2180°R, 172.5 psia.
- 10.11. (a) $1.57 \times 10^4 \text{ J/kg}$ added; (b) $6.97 \times 10^4 \text{ J/kg}$ removed; (c) no.
- 10.13. 36.5 Btu/lbm removed.

- 10.14. (b) 0.686; (c) 1.628×10^5 J/kg.
- 10.15. (a) 47.4 psia; (b) 66.4 Btu/lbm added; (c) less than 1, 279 Btu/lbm for $M'_2 = 0.3$.
- 10.17. (a) (i) True, (ii) false.
- 10.18. (a) $A_3 > A_4$; (b) $V_3 < V_4$, $A_3 > A_4$.
- 10.20. (a) $A_3 > A_2$.

Check Test:

- 10.4. (a) 746°R ; (b) 53.1 Btu/lbm added.

Chapter 11

- 11.1. 128.8 Btu, 340 Btu, 469 Btu, 0.511 Btu/ $^\circ\text{R}$.
- 11.2. 36.3 Btu/lbm, 339 Btu/lbm, 0.352 Btu/lbm- $^\circ\text{R}$.
- 11.3. 0.278 Btu/lbm- $^\circ\text{R}$, 0.207 Btu/lbm- $^\circ\text{R}$, 505 Btu/lbm, 367 Btu/lbm.
- 11.4. 1515°R , -273 Btu/lbm.
- 11.5. 0.1190 Btu/lbm- $^\circ\text{R}$, 93.9 Btu/lbm.
- 11.6. 1.413.
- 11.7. (a) False; (b) true; (c) false; (d) false; (e) false.
- 11.8. 8.63 lbm/ft³.
- 11.9. 0.0118 ft³/lbm, 0.0342 ft³/lbm by perfect gas law.
- 11.10. 0.0638 ft³/lbm, 0.150 ft³/lbm by perfect gas law.
- 11.11. 3.01 psia, 640°R .
- 11.12. 3.06 psia, 650°R .
- 11.13. 3.48 psia, 656°R .
- 11.14. 0.02 MPa, 201 K, $M_3 = 4.39$.
- 11.15. 7.09×10^4 N/m², 1970 K.

Check Test:

- 11.3. 681 Btu/lbm, 610 Btu/lbm perfect gas.
- 11.4. False.
- 11.5. 1.018 lbm/ft³, 0.875 lbm/ft³ perfect gas.
- 11.6. at $M = 1.0$ (air) 240 psia and 2000°R , (argon) 221 psia and 1800°R (carbon dioxide) 249 psia and 2100°R .

Chapter 12

- 12.1.** (a) 293 Btu/lbm, 129 Btu/lbm, 163.8 Btu/lbm, 322 Btu/lbm, 50.8%;
(b) 21.6 lbm/sec.
- 12.2.** (a) 269 Btu/lbm, 145 Btu/lbm, 124.4 Btu/lbm, 306 Btu/lbm, 40.6%;
(b) 28.4 lbm/sec.
- 12.3.** 37.4%, 38.5 kg/s.
- 12.4.** (a) 24.9%; (c) 64.9%.
- 12.6.** 4600 lbf.
- 12.7.** 564 m/s.
- 12.8.** 1419 ft/sec.
- 12.9.** (a) 7820 lbf; (b) 57.1%; (c) 438 ft-lbf/lbm.
- 12.10.** (a) 18.34 kg/s; (b) 0.257 m²; (c) 3.12×10^5 W; (d) 28.6%;
(e) 10.24×10^5 J/kg.
- 12.11.** (a) 2880 lbf; (b) 20,800 hp.
- 12.12.** 3290 lbf, 1.046 lbm of fuel/lbf-hr.
- 12.13.** 6.34 ft², $M = 0.382$, 1309 psfa, 3400°R; 742 psfa, 2920°R, 3.96 ft²;
6550 lbf, 1.41 lbm of fuel/lbf-hr.
- 12.14.** 4240 lbf/ft², 2.20 lbm of fuel/lbf-hr.
- 12.15.** (a) 83.3 lbm/sec; (b) 7730 ft/sec.
- 12.16.** (a) 203 sec; (b) $(p_o - 872)$ N/m².
- 12.17.** (a) 0.0402 ft²; (b) 6060 ft/sec, 6490 ft/sec, 201 sec.
- 12.18.** (a) 7.46, 1904 m/s; (b) 194.1 sec.
- 12.19.** 0.924.
- 12.20.** Need to know p_1 , p_3 , A_2 , and γ .
- 12.21.** (a) 0.725; (b) 0.747.
- 12.23.** (b) $M_0 = 1.83$; (c) cannot be started.
- 12.24.** 3.5 to 1.36.
- Check Test:**
- 12.3.** 871 K, 1.184 bar.
- 12.5.** (a) False; (b) false; (c) false; (d) false.
- 12.6.** (a) 311 lbm/sec, 64,500 lbf; (b) 6670 ft/sec; (c) 207 sec, 5.28×10^5 hp.
- 12.7.** $M_0 = 2.36$.

Index

A

- Absolute temperature scale, 5
- Acoustic wave, 84–89
- Action, zone of, 91
- Additive drag, *see* Pre-entry drag
- Adiabatic flow, *see also* Isentropic flow
 - constant area, *see* Fanno flow
 - varying area, 105–139
 - general, 106–111
 - of perfect gas
 - with losses, 111–115
 - without losses, 118–124
- Adiabatic process, definition, 11
- Afterburner, 354–356
- Air tables
 - specific heat variation, 470–471
 - thermodynamic properties, 462–469
- Airfoils
 - aerodynamic center, 227
 - drag, 230
 - lift, 228
 - subsonic, 226
 - supersonic, 226–230
- Area change, flow with, *see* Adiabatic flow
- Area ratio, for isentropic flow, 127–129
- Average gamma method; *see* Real gases
- Average velocity, 26

B

- Bernoulli's equation, 63–64
- Beyond the tables, *see particular flows* (e.g., Fanno flow)

- Body forces, 71
- Boundary of system, 10
- Brayton cycle, 344–353
 - basic ideal cycle, 344–350
 - efficiency, 347–349
 - open cycle, 352–353
 - real cycles, 351–352
- British thermal unit, 398, 402
- Bulk modulus of elasticity, 87
- By-pass ratio, 357

C

- Capture area, 385–386
- Celsius temperature, 5
- Center of pressure, of airfoils, 227
- Centered expansion fan, 213–214, 219–220,
see also Prandtl–Meyer flow
- Choking
 - due to area change, 127–129
 - due to friction, 264–267
 - due to heat addition, 302–305
- Clausius' inequality, 53–54
- Closed system, 10
- Coefficient
 - of discharge, 133
 - of friction, 74, 256–257
 - of velocity, 133
- Combustion chamber
 - efficiency, 360
 - heat balance, 360
- Compressibility, 88
- Compression shock, *see* Shock

Compressor
 efficiency, 352
 work done by, 346

Conical shocks, 195–198
 charts, 410–413

Conservation
 of energy, 12, 35–44
 of mass, 32–35

Constant area adiabatic flow, *see* Fanno flow

Continuity equation, 32–35

Control mass, 10

Control surface, 10

Control volume, 10

Converging nozzle, *see also* Nozzle
 with varying pressure ratio, 124–127

Converging–diverging nozzle, *see also* Nozzle
 isentropic operation, 127–131
 with expansion waves outside, 223–225
 with normal shocks inside, 159–164
 with oblique shocks outside, 193–195, 221–224

Corner flow, *see* Prandtl–Meyer flow

Critical points
 first critical point, 130
 second critical point, 159
 third critical point, 129

Critical pressure, 126

Curved wall, supersonic flow past, 213–214, 220–221

Cycle, definition, 11, *see also* First Law

D

Density, 4

Detached shock, 190–192

Diabatic flow, *see* Rayleigh flow

DeLaval nozzle, *see* Converging–diverging nozzle

Diffuser, 111, 354, 357, 363, 364, 367
 efficiency, 134
 performance, 133–134
 supersonic
 oblique shock, 192
 starting of fixed geometry, 385–387
 in wind tunnels, 164–166

Dimensions, 2

Discharge coefficient, 133

Displacement work, 37–38

Disturbances, propagation of, 89–91

Drag
 of airfoils, 230
 pressure, 371–373

Duct flow
 with friction, *see* Fanno flow
 with heat transfer, *see* Rayleigh flow

E

Effective exhaust velocity, 381–382, 384

Efficiency
 combustion chamber, 360
 compressor, 352
 diffuser, 133–134
 nozzle, 131–132
 overall, 375
 propulsive, 375
 thermodynamic, 375
 turbine, 351

Energy
 internal, 13
 for a perfect gas, 16
 kinetic, 13
 potential, 13
 total, 13

Energy equation, 35–44
 pressure–energy equation, 54–55, 61
 stagnation pressure–energy equation, 59–61, 94–96

Engine, *see* Jet propulsion systems

English Engineering system, *see* Units

Enthalpy, definition, 13
 for a perfect gas, 16
 stagnation, 55–57, 92–93

Entropy change
 definition of, 14
 evaluation of, 17
 external (from heat transfer), 52–54
 internal (from irreversibilities), 52–54

Equation of
 continuity, 32–35
 energy, 35–44
 motion, 66–75
 state, 6

Equivalent diameter, 74, 257

Expansion fan, 213–214

Expansion wave, 213–214

Explosion, 176
 External entropy change, 52–54
 Euler's equation, 54–55

F

Fanjet, *see* Turbofan
 Fanno flow, 241–270
 beyond the tables, 268–269
 choking effects, 264–267
 limiting duct length, 245, 256
 relation to shocks, 261–264
 *reference, 253–256
 when $\gamma \neq 1.4$, 267–268
 working equations, 248–253
 tables, 253–256, 438–449
 Fahrenheit temperature, 5
 First critical, 130
 First Law of thermodynamics
 for a cycle, 12
 for process
 control mass, 12–13, 35
 control volume, 35–39
 Flame holders, 364
 Flow dimensionality, 24–27
 Flow
 with area change, *see* Adiabatic flow
 with friction, *see* Fanno flow
 with heat transfer, *see* Rayleigh flow
 Flow work, 37–38
 Fluid, definition, 5
 Flux
 of energy, 36
 of mass, 33
 of momentum, 67
 Force, units of, 2
 Forces
 body, 71
 surface, 71
 Friction flow, *see* Fanno flow
 Friction coefficient, *see* Friction factor
 Friction factor
 Darcy–Weisbach, 74
 Fanning, 74, *see also* Moody
 diagram
 Fuel–air ratio, 361, 366

G

Gas, perfect, *see* Perfect gas

Gas constant
 individual, 6, 339, 403
 universal, 6
 Gas properties, tables of, 339, 403
 Gas tables
 Fanno flow, 438–449
 isentropic flow, 416–427
 normal shock, 428–437
 Rayleigh flow, 450–461

H

Heat, definition, 12
 specific, 14
 Heat transfer, *see also* Rayleigh flow
 general, 12
 Heat exchanger, 345
 Hydraulic diameter, *see equivalent diameter*

I

Impulse function, *see* Thrust Function
 Incompressible flow, 61–66
 Inlet, *see* Diffuser
 Intercooling, 350–351
 Internal energy, 13
 for a perfect gas, 16
 Internal entropy change, 52–54
 International System, *see* Units
 Irreversibility, 14
 relation to entropy, 52–54
 Isentropic flow, 105–139, *see also* Adiabatic
 flow; Diffuser; Nozzle
 area choking, 126–130
 beyond the tables, 135–138
 *reference, 115–118
 tables, 118–124, 416–427
 when $\gamma \neq 1.4$, 135–136
 working equations, 111–115
 Isentropic process
 definition, 11
 equations for perfect gas, 17–18
 Isentropic stagnation state, 55–59
 Isothermal process, 11

J

Jet, *see also* Coefficient
 overexpanded, 221–224
 underexpanded, 223–225

Jet propulsion systems, *see also* Pulsejet;
 Ramjet; Rocket; Turbofan; Turbojet;
 Turboprop
 description of, 353–369
 efficiency parameters, 374–375
 power parameters, 373–375
 real gas computer code, 380–381
 thrust analysis, 369–373
 Joule, 398, 401, 402

K

Kelvin temperature, 5, 401
 Kilogram mass, 3, 401
 Kinetic energy, 13
 Kinematic viscosity, 6

L

Laminar flow, 25–26, 257
 Length, units of, 2
 Lift, 228, *see also* Airfoils
 Limiting expansion angle, 237
 Liquid, *see* Incompressible flow
 Losses, *see* Internal entropy change

M

Mach angle, 90–91
 Mach cone, 90–91
 Mach line, *see* Mach wave
 Mach number, 89
 Mach wave, 90–91, *see also* Prandtl–Meyer
 flow
 MAPLE code, *see* beyond the tables in
 particular flows (e.g., Fanno flow).
 Mass, units of, 2, *see also* Conservation of
 mass; Continuity equation
 Mass flow rate, 26, 34, 92
 Mass velocity, 242, 279
 Momentum flux, 67
 Momentum equation, 66–75
 Moody diagram, 257, 404–405
 Motion, *see* Equation of motion
 Moving shock waves, 176–179

N

Net propulsive thrust, 369–373
 Newton force, 3, 401
 Newton's Second Law, 2, 66–67

Normal shock, 147–170
 beyond the tables, 168–169
 entropy change, 156–157, 208–210
 impossibility of expansion shock, 157
 in ducts, 261–264, 266–267, 298–301,
 304–305
 in nozzles, 159–164
 in wind tunnel, 164–166
 moving shocks, 176–179
 tables, 154–158, 428–437
 velocity change across, 158
 weak shocks, 210–211
 when $\gamma \neq 1.4$, 166–168
 working equations, 151–154
 Normal stress, *see* Work
 Nozzle, 111, 354, 357, 363–364, 368,
see also Converging nozzle;
 Converging–diverging nozzle;
 Isentropic flow
 discharge coefficient, 133
 efficiency, 131–133
 in wind tunnel, 164–166
 operating characteristics, 124–131
 overexpanded, 221–224
 underexpanded, 223–225
 velocity coefficient, 133

O

Oblique shock, 179–200
 at nozzle outlet, 193–195, 221–223
 beyond the tables, 198–199
 charts, 187–189, 406–409
 deflection angle, 180–184
 detached, 190–192
 equations for, 185–186
 reflection from boundaries, 225–226
 shock angle, 180–184
 transformation from normal shock,
 179–184
 weak, 187–188, 210–212
 One-dimensional flow
 definition, 24
 with area change, *see* Isentropic flow
 with friction, *see* Fanno flow
 with heat transfer, *see* Rayleigh flow
 Open system, 10
 Overexpanded nozzle, 221–224

P

- Perfect gas
 definition of, 6, 16
 enthalpy of, 16
 entropy of, 17
 equation of state, 6
 internal energy of, 16
 isentropic process, 18
 polytropic process, 17–18
 sonic velocity in, 88
- Pipe flow, *see* Duct flow
- Pitot tube, supersonic, 190–192
- Polytropic process, 17–18
- Potential energy, 13
- Pound force, 2, 397
- Pound mass, 2, 397
- Power, 373–375
 input, 373–375
 propulsive, 373–375
 thrust, 373–375
- Prandtl–Meyer flow, 214–218, *see also*
 Isentropic flow
- Prandtl–Meyer function, 218–221,
 416–427
- Pre-entry drag, 373
- Pre-entry thrust, 373
- Pressure, units, 4
 absolute, 4
 gage, 4
 stagnation, 58–59, 65–66, 94
 static, 55–56
- Pressure drag, 371–373
- Pressure–energy equation, 54–55, 61
- Process, 11
- Properties, 10
 extensive, 10
 intensive, 10
 of gases, 399, 403
- Propulsion systems, *see* Jet propulsion
 systems
- Propjet, *see* Turboprop
- Pulsejet, 366–367
- R**
- Ramjet, 363–366
- Ram pressure ratio, *see* Total-pressure
 recovery factor
- Rankine temperature, 5
- Rayleigh flow, 277–308
 beyond the tables, 306–307
 choking effects, 302–305
 limiting heat transfer, 285, 298
 relation to shocks, 298–301
 *reference, 293–295
 tables, 294–295, 450–461
 when $\gamma \neq 1.4$, 305–306
 working equations, 288–292
- Real gases, 315–339
 compressibility factor, 326–328
 equilibrium flow, 318–319
 equations of state, 325–326
 frozen flow, 318–319
 gas tables, 320–324, *see also* Air
 tables
 microscopic structure, 317
 types of molecules, 317–318
 types of motion, 317–318
 properties from equations, 325
 variable gamma method, 329–338
 constant area, 336–338
 variable area, 329–336
- Reflection of waves
 from free boundary, 225–226
 from physical boundary, 225–226
- Regenerator, 350, 353
- Reheat, 350, 353
- Reversible, 14
- Reynolds number, 256
- Reynolds transport theorem, 32
 derivation of, 27–32
- Rocket, 367–369
- Roughness, pipe or wall
 absolute, 256–257
 relative, 256–257
- S**
- Second critical, 159
- Second Law of thermodynamics, 14
- Shaft work, 37
- Shear stress, *see* Work, done by
- Shock, *see* Normal shock; Oblique shock;
 conical shock
- SI, *see* Units
- Silence, zone of, 90–91
- Slug mass, 3

Sonic velocity
 in any substance, 87
 in perfect gas, 88

Specific fuel consumption, 378, 380

Specific heats, 14

Specific impulse, 382–384

Speed of sound, *see* Sonic velocity

Spillage, 303, 373, 385

Stagnation reference state, 55–59

Stagnation enthalpy, 55–57, 92–93

Stagnation pressure, 66, 94

Stagnation pressure–energy equation,
 59–61, 94–97

Stagnation temperature, 65, 93

Static conditions, 55–56

State, 11
 perfect gas equation of, 6

Steady flow, 25

Streamline, 27

Streamtube, 27

Stress, work done by, *see* Work

Subsonic flow, 89–90

Supersonic flow, 89, 91
 compared with subsonic, 97–99

Supersonic inlet, *see* Diffuser

Supersonic nozzle, *see* Nozzle

Supersonic wind tunnel, 164–166

Surface forces, 71

Swallowed shock, 385–387

System
 control mass, 10
 control volume, 10

T

Tables, *see* Gas tables, Air tables

Temperature
 scales, 5
 stagnation, 65, 93
 static, 55–56

Thermal efficiency of cycles, 347

Thermodynamic properties, *see* Properties

Thermodynamics
 First Law for cycle, 12
 for process, 12, 35
 for control volume, 36, 39
 Second Law, 14
 Zeroth Law, 11

Third critical, 129

Three-dimensional flow, 24

Thrust function, 281, 371

Thrust of propulsive device, 369–373

Time, units of, 2

Total enthalpy, 55–57, 92–93

Total pressure, 58–59, 65–66, 94

Total-pressure recovery factor, 133, 359,
 364–366

Total temperature, 58–59, 65, 93

Two-dimensional flow, 24

Turbine
 efficiency, 351
 work done by, 346

Tunnel, *see* Supersonic wind tunnel

Turbofan, 356–362

Turbojet, 353–356

Turboprop, 362–363

Turbulent flow, 25, 257

U

Underexpanded nozzle, 223–225

Units
 conversion factors, 398, 402
 English Engineering, 2, 396–399
 International System (SI), 3, 400–403

Universal gas constant, 6–7

V

Variable gamma method, *see* Real gases

Varying-area adiabatic flow, *see* Adiabatic
 flow

Velocity coefficient, 133

Velocity, sonic, 84–88
 effective exhaust, 381–382, 384

Venturi, 130

Viscosity, 6
 of gases, 399, 403

W

Wall
 flow past curved, 211–214, 220
 friction force, 247
 reflection of waves from, 225–226

Wave, *see* Acoustic waves; Mach wave;
 Prandtl–Meyer flow; Reflection of
 waves; Shock

Weak shocks, 210–214

Wedge, supersonic flow past, 189–195,
228–230, *see also* Airfoils; Oblique
shock

When $\gamma \neq 1.4$, *see particular flow* (e.g.,
Fanno flow)

Wind tunnel, supersonic, 164–166

Wings, *see* Airfoils

Work
definition of, 12

done by normal stresses, 37–38
done by shear stresses, 37–38
shaft, 37–38

Z

Zeroth Law of thermodynamics, 12
Zone of action, 90–91
Zone of silence, 90–91